

# EDUCATION GIANTS

The background of the cover features several thick, flowing, brush-like strokes in shades of blue and purple. These strokes originate from the bottom left and curve upwards and to the right, creating a sense of movement and energy. The colors transition from a deep blue on the left to a vibrant purple on the right.

2023

PRIMARY LEVEL VII

SOCIAL STUDIES AND RE  
REVISION BOOK

*Ochieng Wilson Prince*  
0762550123/58924184

## **SECTION A (40 Marks)**

1. Name any one food crop that grows well in a swamp.  
\_\_\_\_\_
2. Mention the instrument that is used to measure the amount of rainfall at a weather station.  
\_\_\_\_\_
3. Name the ethnic group of people that occupy the north – eastern part of Uganda.  
\_\_\_\_\_
4. What is the compass direction of Uganda from Rwanda?  
\_\_\_\_\_
5. Apart from missionaries, which other group of foreigners helped to develop social services in Uganda?  
\_\_\_\_\_
6. Give any one reason why farmers are advised to plant crops at the beginning of a rainy season.  
\_\_\_\_\_
7. Mention any one disadvantage of building in wetlands.  
\_\_\_\_\_  
\_\_\_\_\_
8. Give one reason why there are many different types of natural vegetation in Africa.  
\_\_\_\_\_  
\_\_\_\_\_
9. State any one way in which labour force can be improved in Africa.  
\_\_\_\_\_  
\_\_\_\_\_
10. In which way is the formation of Mt. Rwenzori different from that of Mt. Elgon?  
\_\_\_\_\_  
\_\_\_\_\_
11. Give one reason why controlling population increase is difficult.  
\_\_\_\_\_  
\_\_\_\_\_
12. Mention any one way in which the government can help the people in rural areas to increase agricultural produce.  
\_\_\_\_\_  
\_\_\_\_\_
13. Name the lake that is the source of the Blue Nile.  
\_\_\_\_\_
14. Name the type of tax charged on imported goods in Uganda.  
\_\_\_\_\_
15. Name the winds that bring rain to East Africa.  
\_\_\_\_\_  
\_\_\_\_\_

16. Why is Patrice Lumumba remembered in the history of Democratic Republic of Congo?  

---

---
17. Give one advantage of exporting processed goods other than raw materials.  

---
18. Apart from being cloudy or windy, give any one other change of weather.  

---
19. Give one problem the builders of the Uganda Railway faced in the Nandi area.  

---
20. Why is air transport used by very few people in Africa?  

---

---
21. In which agreement were the boundaries of Buganda drawn?  

---
22. Why should a citizen obey the laws of a country?  

---

---
23. State one reason why some people in Uganda do not get access to social services.  

---

---
24. Name the element on the Uganda coat of Arms that represents Uganda's culture.  

---
25. How did the trade between the coastal Arabs help in the expansion of Buganda Kingdom?  

---
26. State one factor which has made irrigation in the Karamoja region almost impossible.  

---
27. Why was the Nyanza province transferred from Uganda to Kenya in 1902?  

---

---
28. State one problem facing effective communication in Uganda.  

---
29. Why is Kapchorwa cooler than Gulu?  

---

---
30. Where is snow found in East Africa?  

---
31. Which water passage joins the Red sea to the Mediterranean sea?  

---
32. State one reason why German colonial rule was resisted in Tanganyika.  

---

---
33. Which bank is jointly owned by the member countries of the East African community?  

---

---

34. State one cause of land fragmentation in Uganda.

---

---

35. Give any one way in which the people of South Africa fought against Apartheid.

---

---

**For questions 36 – 40, answer Christianity or Islam "BUT NOT" both.**

36. **Either:** What was Moses' work before he was called by God?

---

---

**Or:** What was Musa's work before he became a prophet?

37. **Either:** Who was the father of John the Baptist?

---

---

**Or:** Who was the father of Yahaya?

38. **Either:** Why did God create Eve?

---

---

**Or:** why did Allah create Hawa?

39. **Either:** Give any one way in which God communicates to Christians.

---

---

**Or:** Give any one way in which Allah communicates to Muslims.

40. **Either:** Why did Jesus Christ turn water into wine?

---

---

**Or:** Why did Prophet Muhammad split the moon?

### **SECTION B**

41(a) Name the two explorers who made three journeys to Africa.

(i) 

---

(ii) 

---

(b) State any two problems that were faced by the early explorers in Africa.

(i) 

---

(ii) 

---

42(a) Name two African leaders who attended the Pan African Congress in 1958.

(i) 

---

(ii) 

---

(b) State two ways in which Marcus Garvey contributed to the development of Africa.

(i) 

---

(ii) 

---

43.46(a) State any one of the children's rights.

---

(b) Mention any one of the children's responsibilities.

(c) State any two reasons why children should know their rights and responsibilities.

(i)

(ii)

44. **Study the sketch map of Sudan below and answer the questions that follow.**



(a) Name the country marked with letter X.

(b) What is the major crop grown in the area marked with letter P?

(c) Give one reason why area marked **P** is good for the growing of crops.

(d) Mention any one problem faced by farmers in the area marked **P**.

45. (a) What was the Great Trek?

(b) Mention any two places that were occupied by the Dutch after the Great Trek.

(i)

(ii)

(c) State any one result of the Great Trek.

46.(a) Which organization was replaced by the African Union (AU)?

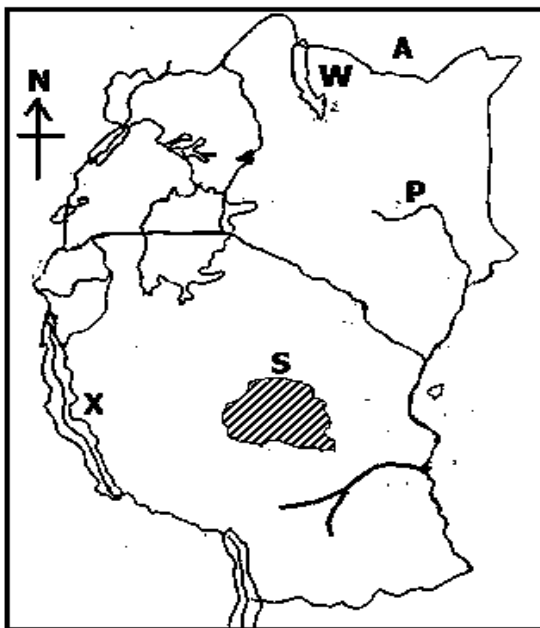
(b) Mention any two organs of the African Union (AU)

(i)

(ii)

(c) State any one way in which the African Union (AU) is helping member states to solve the problem of Civil wars.

47. **Study the map of East Africa below and answer the questions that follow.**



(a) Name the river marked with letter P.

(b) Give one cause of low population in the area marked S

(c) State any one economic activity that is carried out in the lake marked with letter X.

(d) Give one similarity in the formation of lake marked X and the lake marked W.

48.(a) Apart from growing crops, give one other activity carried out by man to support his family.

(b) State any two ways in which man has benefited from growing crops.

(i)

(ii)

(c) Mention any one problem faced by people who grow crops in Uganda.

49.(a) What title is given to the person who heads the Judiciary in Uganda?

(b) Mention any two groups of people who are members of the Judiciary.

(i)

- (ii) \_\_\_\_\_  
(c) How does Parliament contribute to the work of the Judiciary?  
\_\_\_\_\_

50(a) Name any one place at school where waste materials can be disposed.  
\_\_\_\_\_

(b) State any two problems caused by poor waste management in schools.  
\_\_\_\_\_

(i) \_\_\_\_\_

(ii) \_\_\_\_\_

(c) Why is recycling important in waste management?  
\_\_\_\_\_

**For questions 51 – 55, answer either Christianity or Islamic but Not both.**

51. **Either:** (a) According to Christianity, who is the controller of all authority?  
\_\_\_\_\_

(b) State any two miracles Jesus Christ performed on earth.  
\_\_\_\_\_

(i) \_\_\_\_\_

(ii) \_\_\_\_\_

(c) What helped Jesus Christ to exercise His authority?  
\_\_\_\_\_

**Or:** (a) According to Islam, who is the controller of all authority?  
\_\_\_\_\_

(b) State any two miracles Prophet Muhammad (PBUH) performed.  
\_\_\_\_\_

(i) \_\_\_\_\_

(ii) \_\_\_\_\_

(c) What helped Prophet Muhammad (PBUH) to be accepted by people?  
\_\_\_\_\_

52. **Either:** (a) Apart from African Traditional Religion, Christianity and Islam, mention any one other religion practiced in Uganda  
\_\_\_\_\_

(b) Give any two ways in which believers of African Traditional Religion showed that there was life after death.  
\_\_\_\_\_

(i) \_\_\_\_\_

(ii) \_\_\_\_\_

(c) State any one reason why some Christians fear death.  
\_\_\_\_\_

**Or:** (a) Apart from African Traditional Religion, Christianity and Islam, mention any one other religion practiced in Uganda  
\_\_\_\_\_

(b) Give any two ways in which believers of African Traditional Religion showed that there was life after death.  
\_\_\_\_\_

(i) \_\_\_\_\_

(ii) \_\_\_\_\_

(c) State any one reason why some Muslims fear death.  
\_\_\_\_\_

53. **Either:** (a) Name any one of the apostles of Jesus Christ who was closest to Him.  
\_\_\_\_\_

(b) Mention any one reason why Jesus Christ had apostles.

(c) State any two ways in which a good Christian should behave.

(i)

(ii)

**Or:** (a) Name any one companion of Prophet Muhammad (PBUH) who was closest to him

(b) Mention any one reason why Prophet Muhammad (PBUH) had companions.

(c) State any two ways in which a good Muslim should behave.

(i)

(ii)

54. **Either:** (a) According to the Bible, who is regarded as the grandfather of the nations?

(b) Give any one name among the children of the grandfather mentioned above.

(c) Mention any two ways in which the grandfather of the nations showed his faith to God.

(i)

(ii)

**Or:** (a) Which Prophet is regarded as the grandfather of believers according to Islam?

(b) Give any one name among the children of the grandfather mentioned above.

(c) Mention any two ways in which the grandfather of the nations showed his faith to Allah.

(i)

(ii)

55. **Either:** (a) What is Marriage in Christianity?

(b) Give any two reasons why church marriage is important.

(i)

(ii)

(c) Give one reason that may allow someone who had married in church before to marry again.

**Or:** (a) What is Nikah in Islam?

(b) Give any two reasons why Nikah is Important.

(i)

(ii)

(c) Mention any one gift Allah gives to married people.

END



## **SECTION A**

1. Name one product from soft wood trees used at our school.  

---
2. Why does River Congo pour a large volume of water in the Atlantic Ocean?  

---
3. How do animals support crop growing?  

---
4. Why should Primary Seven pupils move in groups on their way home from school?  

---
5. Give one way in which River Nile supports the economic activities carried out in the countries through which it flows.  

---
6. Why do farmers in the Sahara Desert live near the oases?  

---
7. Mention one way in which the Uganda government generates foreign exchange.  

---
8. Compare the Atlas Mountains and the Cape Ranges in terms of formation.  

---
9. How does Lake Victoria contribute to the economic development of Kenya, Uganda and Tanzania?  

---
10. Mention one danger of floods in our community.  

---
11. State one way of ensuring security in our school.  

---
12. State one advantage of having many investors in a country like Uganda.  

---
13. How do traders benefit from the presence of commercial banks in their localities?

---

15. Who was the leader of the Dutch farmers in South Africa?

---

**Use the diagram below to answer question 14 .**



14. How does the map symbol above promote industrialization?

---

16. Name the political party that formed an alliance with the Uganda People's Congress to defeat Democratic party in 1962?

---

17. What is the role of a cobbler in our community?

---

18. Why do you think that some Ugandans have failed to keep animals?

---

19. Why does the government of Uganda make a budget every year?

---

20. Name any one organ of the United Nations.

---

21. Give one value of local languages to the people of East Africa.

---

22. State any one problem facing different families in Uganda today.

---

23. Give one way swamp reclamation should be controlled in Africa.

---

24. How does mass media promote trade in a country?

---

25. State one social value of grass to people in villages.

---

26. Give one reason as to why people practice urban-urban migration today.

---

27. State one importance of a notice board in schools.
- 
28. Why is it good for children in our school to have holidays?
- 
29. Why are the Miombo Woodlands of Central Tanzania sparsely populated?
- 
30. Why are some people kept in prisons?
- 
31. Name the rebellion which was staged in Uganda as a result of forced gun registration by colonialists.
- 
32. Under which condition of weather may Lwanga Brian use an umbrella?
- 
33. Why is salt mining important to the people of Katwe?
- 
34. Name the cheapest method of preserving fish in Uganda.
- 
35. Why is deforestation regarded as a bad practice to a country?
- 

**For questions 36- 40, answer either Christian or Islamic question but not both on the same question**

36. **Either:** State one way in which we use our talents to serve God.
- 
- Or:** Give one way we use our talents to serve Allah.
- 
37. **Either:** How does a good Christian show interest to go to heaven?
- 
- Or:** State one way in which a good Muslim believer shows interest to go to Jana?
-

38. **Either:** Why do our parents work?

---

**Or:** Why do Muslim believers work?

---

39. **Either:** Give one reason why Simon Peter is remembered in Christianity.

---

**Or:** Why is Abubaker remembered in Islam?

---

40. **Either:** Mention any one thing Christians are encouraged to do during Lent

---

**Or:** Give one thing that Muslims are encouraged to do during the Holy month of Ramadhan

---

### **SECTION B**

41. (a) What was apartheid policy as used in south Africa.

---

(b) Give one way in which apartheid policy was practiced in South Africa.

---

(c) What role did Bishop Desmond Tutu play in re-uniting the people of South Africa after apartheid policy.

---

(d) What major event took place in South Africa in 1994?

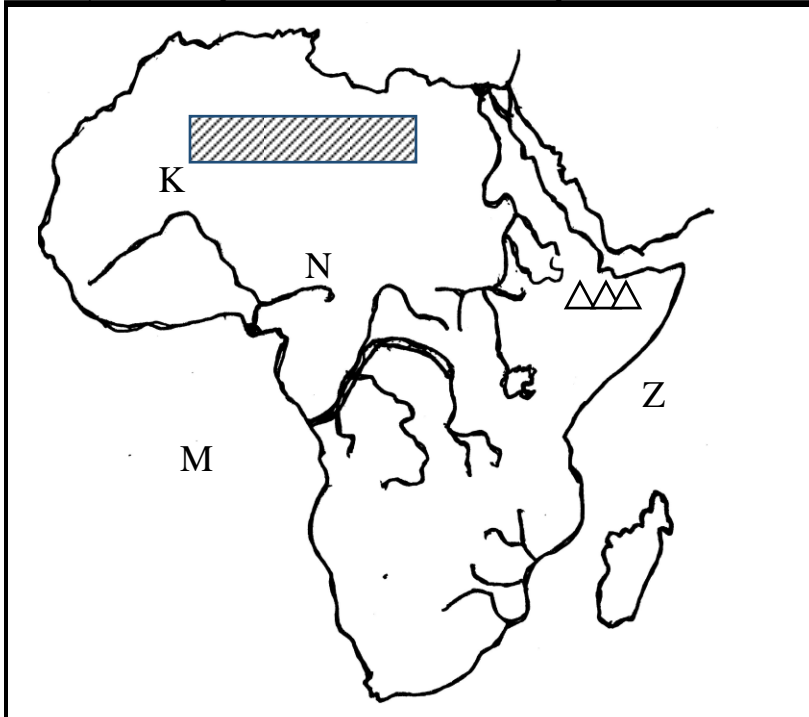
---

42. (a) Complete the table below correctly.

<b>Irrigation Scheme</b>	<b>Crops grown</b>
(i) Richard Toll	_____
(ii) _____	Rice
(iii) Mubuku	_____
(iv) _____	Flowers

43. (a) What are natural resources? \_\_\_\_\_
- \_\_\_\_\_
- (b) How are the following natural resources useful to people?
- (i) vegetation? \_\_\_\_\_
- (ii) Animals? \_\_\_\_\_
- (c) State one way in which man has destroyed water as a resource.
- \_\_\_\_\_

44. **Study the map below and answer questions about it.**



- (a) Name the river marked N.
- \_\_\_\_\_
- (b) State any one characteristic of the climate experienced in the shaded area.
- \_\_\_\_\_
- (c) Use Letter “B” to locate Niger Delta on the map above.
- \_\_\_\_\_
- (d) How is the physical feature marked M on the map useful to the people of Africa?
- \_\_\_\_\_

45. (a) What is a common market?  
\_\_\_\_\_
- (b) Give one reason why countries should co-operate.  
\_\_\_\_\_
- (c) Mention one common market where Uganda is a member.  
\_\_\_\_\_
- (d) What problem is likely to happen to countries that don't join common markets?  
\_\_\_\_\_
46. (a) What is an election? \_\_\_\_\_  
\_\_\_\_\_
- (b) State any one election material you know.  
\_\_\_\_\_
- (c) Mention any one challenge of vote rigging in a national election.  
\_\_\_\_\_
- (d) Which organ in Uganda is responsible for organizing elections?  
\_\_\_\_\_
47. (a) What do we call a person who has a right to belong to a given country?  
\_\_\_\_\_
- (b) State one obligation of the person mentioned in (a) above to a country.  
\_\_\_\_\_
- (c) Give any two examples of rights of the person in (a) above.  
(i) \_\_\_\_\_  
(ii) \_\_\_\_\_
48. Why are the following personalities remembered by Africans?  
(i) Sir Hesketh Bell? \_\_\_\_\_  
\_\_\_\_\_  
(ii) Sir Andrew Cohen? \_\_\_\_\_  
\_\_\_\_\_  
(iii) Dr. Kwame Nkrumah? \_\_\_\_\_

(iv) Nelson Mandela? \_\_\_\_\_

49. (a) Name the kingdom that was formed in the present day Kenya.

(b) Which tribe formed the above kingdom in (a)

(c) State any two benefits of kingdoms to people in our community.

(i) \_\_\_\_\_

(ii) \_\_\_\_\_

50. (a) What is tourism? \_\_\_\_\_

(b) State any two ways in which the tourism industry benefits African countries.

(i) \_\_\_\_\_

(ii) \_\_\_\_\_

(c) Mention one way Uganda government can improve on its tourism sector.

**For questions 51-55 answer either Christian or Islamic question but not both on the same number.**

51. ***Either:*** (a) Define service. \_\_\_\_\_

(b) Mention any two voluntary organizations that provided services to God's followers.

(i) \_\_\_\_\_

(ii) \_\_\_\_\_

(c) What kind of service can you as a candidate offer to your fellow pupil?

***Or:*** (a) What is a service? \_\_\_\_\_

(b) Mention any two services that you as a child can offer to others.

(i) \_\_\_\_\_

(ii) \_\_\_\_\_

(c) State one benefit of providing services to others.

\_\_\_\_\_

52. **Either:** (a) What is the first sacrament according to Christianity?

\_\_\_\_\_

(b) Mention one symbol for the mentioned sacrament in (a) above.

\_\_\_\_\_

(c) State any two benefits of the sacrament mentioned in (a) above.

(i) \_\_\_\_\_

(ii) \_\_\_\_\_

**Or:** (a) What is the second pillar of Islam?

\_\_\_\_\_

(b) Give any two ways Muslim believers benefit from the pillar mentioned in (a) above.

(i) \_\_\_\_\_

(ii) \_\_\_\_\_

(c) How do Muslim believers prepare for this pillar?

\_\_\_\_\_

53. **Either:** (a) What is authority? \_\_\_\_\_

\_\_\_\_\_

(b) Mention any two types of authority.

(i) \_\_\_\_\_

(ii) \_\_\_\_\_

(c) State any one way in which leaders misuse authority today.

\_\_\_\_\_

**Or:** (a) What is authority? \_\_\_\_\_



---

(b) List down any two types of authority.

(i) \_\_\_\_\_

(ii) \_\_\_\_\_

(c) Give one way in which some Muslim leaders misuse their authority.

---

54. **Either:** (a) Name the person in the Bible that survived floods.

---

(b) Why did God send floods?

---

(c) Why did the named person in (a) above survive the floods?

---

(d) How many people survived the floods?

---

**Or:** (a) Name the prophet who survived floods.

---

(b) Why did Allah send floods?

---

(c) Why did the named person in (a) above survive the floods?

---

(d) How many people survived the flood?

---

55. **For Both:** (a) State any two similarities between Christianity and Islam.

(i) \_\_\_\_\_

(ii) \_\_\_\_\_

(b) How does Islam differ from Christianity?

(i) \_\_\_\_\_

(ii) \_\_\_\_\_

## **Section A**

1. Name the symbol on a map used to calculate distance between two places.

---

2. What is the major economic activity carried out around lake Albert in Uganda?

---

3. Why is the government of Uganda encouraging women to form SACCOS?

---

4. Name the major line of longitude marked 0° degrees.

---

5. Why is a radio an effective means of communicating to people in rural areas?

---

6. State one-way East African countries will benefit from DRC after joining the East African Community.

---

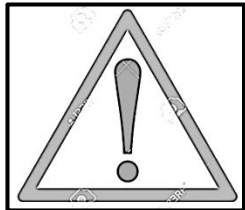
7. Give a reason why it is important to have laws in the community.

---

8. What makes Dr. Julius Kambarage Nyerere popular in East Africa?

---

9. When is the road sign below placed on the road?



---

10. How did the Indian Coolies contribute to the end of Slave trade in East Africa?

---

11. Write L.D.U. full.

---

12. In which climatic region are Oases common?

---

13. Give any one reason why old kingdoms had strong armies.

---

14.State one way a school can promote good relationship with her neighborhood.

---

15.Why is Swamp drainage regarded as a bad practice?

---

16.Mention one way a health Centre can improves the welfare of people in the community.

---

17.Give a reason why Nelson Mandela was against apartheid rule in South Africa.

---

18.What is the major plantation crop grown in Kalangala district in Uganda?

---

19.What type of house is shown below?



---

20.Give a reason to support your answer.

---

21.What makes Ethiopia popular in relation to African Union?

---

22.How has Entebbe International airport contributed to the economic development of Uganda?

---

23.What title is given to the Officer at the district responsible for supervising civil servants?

---

24.Mention any one danger of **floods** to the community.

---

25.How did Alexander Mackay's printing press promote the spread of Christianity in East Africa?

---

26.Mention the type of weather that may require a school child to carry the item below.



---

27. Name the trade that was conducted by the people of West Africa, North America and Europe across the Atlantic Ocean.

---

28. Give a reason why the Germans faced a lot of resistance in Tanganyika.

---

29. How did the Luo people contribute to the collapse of Bunyoro-Kitara Empire?

---

30. State any one way **Covid19** has affected the tourism industry in Uganda.

---

31. What is Immigration?

---

---

32. What name was given to the Law making body during the colonial period?

---

33. Mention one factor that has led to increased destruction of natural forest in Uganda.

---

34. State one way a head teacher can promote security at school.

---

35. Apart from taxes, mention any other source of revenue to the districts.

---

**For questions 36 - 40, answer either Christianity or Islam but not both.**

36. **Either:** Who led the Israelites to the Promised Land?

---

**Or:** Who led the Ban-Israelites to the Promised Land?

---

37. **Either:** Give **one** symbol of the Holy Spirit on the day of Pentecost.

---

**Or:** Give **one** symbol of Islam.

---

38. **Either:** Mention any **one** way Christians benefit from attending church services (mass).

---

**Or:** Mention any **one** way Muslims benefit from attending regular prayers.

---

39. **Either:** Name any one way Jesus bridged the gap between God and mankind.

\_\_\_\_\_

**Or:** Name any one-way Prophet Muhammad perfected Islam.

\_\_\_\_\_

40. **Either:** Write down any one thing that Christians observe during Lent period.

\_\_\_\_\_

**Or:** Write down any one thing Muslims observe during Saum.

\_\_\_\_\_

**SECTION B (60 MARKS)**

41. a) What are Social Activities?

\_\_\_\_\_

b) Give any two examples of social activities carried out in our communities.

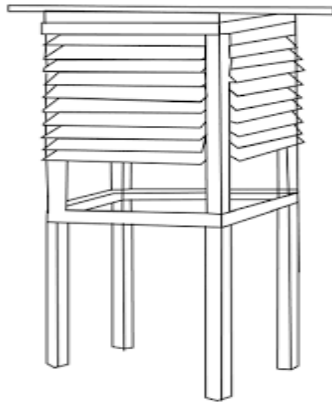
i) \_\_\_\_\_

ii) \_\_\_\_\_

c) How do social activities unite people?

\_\_\_\_\_

42. **Study the diagram below and answer the questions that follow:**



a) Name the feature shown in the diagram above.

\_\_\_\_\_

b) Write down any two weather instruments kept in the above feature.

i) \_\_\_\_\_

ii) \_\_\_\_\_

c) Why is the feature shown above painted white?

\_\_\_\_\_

43. **Complete the table below correctly:**

Service provider	Service centre
Midwife	.....
.....	Cares for our teeth
Barber	.....
.....	Mends our shoes.

44.a) What makes **Vasco da Gama** popular in Africa?

\_\_\_\_\_

b) Mention any two positive results of the Portuguese rule in East Africa.

i) \_\_\_\_\_

ii) \_\_\_\_\_

c) Why did the Portuguese develop conflicts with the Arabs at the East African coast?

\_\_\_\_\_

45.a) Name the last Bantu tribe to enter East Africa.

\_\_\_\_\_

b) Give any two reasons why the Bantu settled along river valleys in East Africa.

i) \_\_\_\_\_

ii) \_\_\_\_\_

c) State one way the Bantu influenced the life of the Plain Nilotes in East Africa.

\_\_\_\_\_

46.a) Name the group of people who founded Bunyoro-Kitara Empire.

\_\_\_\_\_

b) Write down any **two** activities that the Chwezi are remembered for in Uganda.

i) \_\_\_\_\_

ii) \_\_\_\_\_

c) Mention the last dynasty that ruled Bunyoro-Kitara Empire.

\_\_\_\_\_



49.a) Give any **two** reasons why the government carries out a population census.

- i) \_\_\_\_\_
- ii) \_\_\_\_\_

b) Why is a population census carried out after 10 years?

\_\_\_\_\_

c) Mention any one problem **enumerators** face when carrying out population Census.

\_\_\_\_\_

50.a) In which country did the Berlin conference of 1884-5 take place?

\_\_\_\_\_

b) What role did Chancellor Otto Von Bismarck play in the colonization of Africa?

\_\_\_\_\_

c) State any two ways the Berlin conference affected Africa.

- i) \_\_\_\_\_
- ii) \_\_\_\_\_

**For questions 51 – 55, answer either Christianity or Islam but not both**

**51. Either:**

a) Mention any **two** gospel books in the Bible.

- i) \_\_\_\_\_
- ii) \_\_\_\_\_

b) Write down any **two** ways Christians benefit from reading the Bible.

- i) \_\_\_\_\_
- ii) \_\_\_\_\_

**Or:**

a) Mention the books that were received by the following prophets:

- i) Dauda \_\_\_\_\_
- ii) Musa \_\_\_\_\_

b) Write down any **two** ways Muslims benefit from reading the Bible.

- i) \_\_\_\_\_
- ii) \_\_\_\_\_

**52. Either:**

a) Mention any two Christian values.

- i) \_\_\_\_\_
- ii) \_\_\_\_\_



b) State any two ways some Christians have failed to live to God's expectations.

i) \_\_\_\_\_

ii) \_\_\_\_\_

**Or:**

a) State any two Muslim values.

i) \_\_\_\_\_

ii) \_\_\_\_\_

b) State any two ways some Muslim have failed to live to Allah's expectations.

i) \_\_\_\_\_

ii) \_\_\_\_\_

**53. Either:**

a) Write down the place where sinners will go on the day of Judgement.

\_\_\_\_\_

b) Write down any **two** things that will cause people to go to the place mentioned in (a) above.

i) \_\_\_\_\_

ii) \_\_\_\_\_

c) Give any **one** way a Christian can avoid going to the place mentioned in (a) above.

\_\_\_\_\_

**Or:**

a) Write down the place where sinners will go on the Day of Judgment.

\_\_\_\_\_

b) Write down any **two** things that will cause people to go to the place mentioned in (a) above.

i) \_\_\_\_\_

ii) \_\_\_\_\_

c) What role will be played by Angel Israfeel on the Day of Judgment?

\_\_\_\_\_

**54. Either:**

a) What is marriage?

\_\_\_\_\_

\_\_\_\_\_

b) Give any two factors to consider when choosing a marriage partner.

i) \_\_\_\_\_

ii) \_\_\_\_\_

c) Mention one reason why some marriages have failed.

---

**Or:**

a) What Nikkah?

---

---

b) Mention any **two** factors to consider when choosing a marriage partner.

i) \_\_\_\_\_

ii) \_\_\_\_\_

c) Mention one reason why some marriages have failed.

---

**55. Either:**

a) What prayer did Jesus Christ teach his disciples?

---

b) Give a reason why Christians need to pray

i) before meals \_\_\_\_\_

ii) before travelling \_\_\_\_\_

c) What lesson can you learn from Jesus' prayerful life?

---

**Or:**

a) What prayer do Muslims perform at Night during the month of Ramadhan?

---

b) Give a reason why Muslims need to pray,

i) before meals \_\_\_\_\_

ii) before travelling \_\_\_\_\_

c) What lesson can you learn from Prophet Muhammad's prayerful life?

---

---

**SECTION A: (40 MARKS)**

1. Name the main cash crop grown in Kalangala district.

.....

2. State any one duty of a good citizen in promoting law and order.

.....

3. Why is the blue colour used on physical maps?

.....

4. How was Lake Bunyoyi in South Western Uganda formed?

.....

5. Mention the tax charged on all goods locally manufactured in a country.

.....

6. State any one way road transport can be made possible in highland areas.

.....

7. Why was Kabaka Mwanga unable to sign the 1900 Buganda agreement?

.....

8. Write IBEACO in full.

.....

9. What is the role of secretary for older persons on the LCI executive committees?

.....

10. How are newspapers important to the local community?

.....

11. Mention any one challenge faced by security organizations in Uganda.

.....

12. Why is it bad to fish using poison?

.....

13. How is wind important to farmers in your neighbourhood?

.....

14. What was the major role played by political parties in the struggle for independence?

.....

15. Mention any one national symbol found on the Uganda currency.

.....

16. Draw a map symbol of a seasonal lake in the space below.



17. Mention any one neighbouring country of East Africa that is not landlocked.

.....

18. How are the Bagisu similar to the Bakonjo in terms of their settlement?

.....

19. Give any one danger of massive cutting down of trees in an area.

.....

20. What shows that Lake Victoria is on a lower altitude than Lake George?

.....

21. State the aspect of climate that greatly influences human settlement.

.....

22. Why did Tooro Kingdom break away from Bunyoro Kingdom?

.....

23. Why are areas along the equator too hot throughout the year?

.....

24. Why did the British colonialists use native rulers to rule on their behalf?

.....

25. Mention any one factor that promote population growth.

.....

26. Why should wetlands be conserved in an area?

.....

27. State the reason why Ugandan does not have a national language?

.....

28. Mention any one role played by Judiciary in promoting peace in a country.

.....

29. How did lack of fire in the Old Stone Age affect the life of early man?

.....

30. How does the government of Uganda benefit from the tourism industry?

.....

31. Mention any one common characteristic among Bank people.

.....

32. State any one group of people found under the legislature.

.....

33. Which type of education did the missionaries find in Uganda?

.....

34. Why do some people fear to keep domestic animals?

.....

35. Draw an illustration to show a surplus budget in the space below.



**For Questions 36 – 39, Answer Either Christianity or Islamic But Not Both**

36. **Either:** Mention one law book in the bible.

.....

**Or:** Write one Holy Book that was received by prophets in Islam.

.....

37. **Either:** Who was the mother of John the Baptist?

.....

**Or:** Who was the mother of Prophet Muhammad?

.....

38. **Either:** Give one problem faced by the Israelites during Exodus.

.....

**Or:** Give one problem faced by Prophet Mohammed during Hegira.

.....

39. **Either:** How long does lent period take?

.....

**Or:** How long does Saum take?

.....

40. **Both:** Give any one quality of a good Christian / Muslim.

.....

**SECTION B (60 MARKS)**

41. a) Give two importance of a National Constitution of Uganda.

i).....

ii).....

b) Mention any two roles played by the National Assembly.

i).....

ii).....

42.a) How does vegetation support the health sector of a country?

.....

b) Give two human activities that lead to destruction of natural vegetation.

i).....

ii).....

c) Give any one way of conserving natural vegetation.

.....

43. Complete the table below

Ethnic group	Tribe
	Ngoni
	Iteso
Highland Nilotes	
	Acholi

44.a) Give the climate zone that is hot and wet throughout the year.

.....

b) Mention any two characteristics of the above-named climate zone.

i).....

ii).....

c) State any one factor that influences the climate of an area.

.....

45.a) Which level of local council is a district?

.....

b) What title is given to the political head of a district?

.....

c) Give any two reasons why the government of Uganda carries out decentralization.

i).....

ii).....

46.a) What do we call a country's estimation of income and expenditure for financial year?

.....

b) Write any one part of a budget.

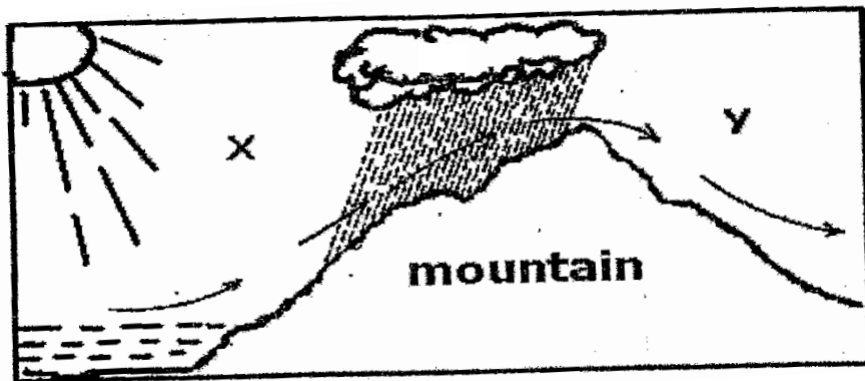
.....

c) Give any two reasons why a country prepares a Budget every year.

i).....

ii).....

47. Study the diagram below and answer questions that follow;



a) Name the two sides of the mountain marked.

X .....

Y .....

b) What type of rainfall is formed in the diagram above?

.....



c) Use letter M to show clouds on the diagram above.

.....

48.a) Identify any two terms of the 1900 Buganda agreement.

i).....

ii) .....

b) Mention two effects of the 1900 Buganda agreement.

i).....

ii) .....

49.a) Give any two duties of the Electoral Commission.

i).....

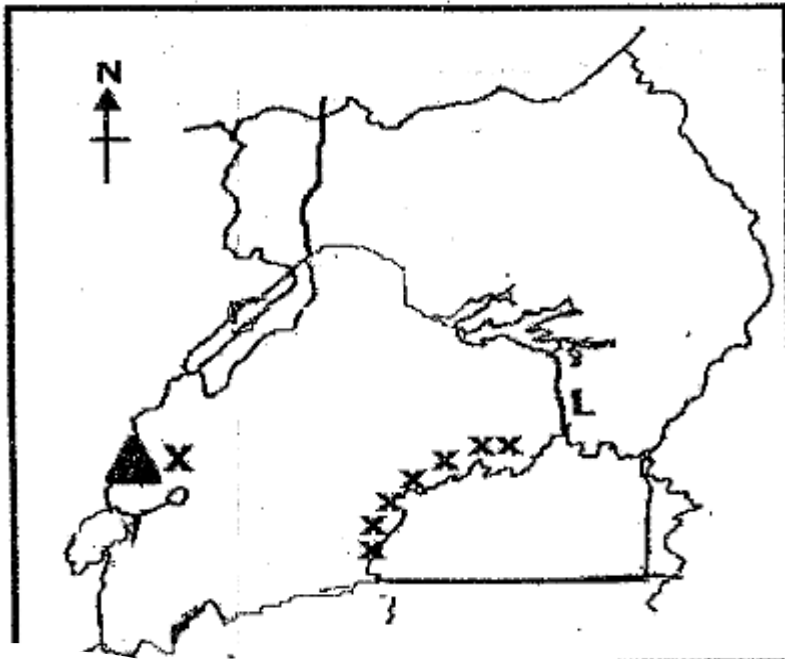
ii) .....

b) Write any two examples of voting materials used in Uganda.

i).....

ii) .....

50. Use the physical map below to answer the questions that follow.



a) Mention the highest peak of the mountain marked X.

.....

b) Why are there many people settling in area marked xxx?

.....

c) Why is water transport difficult along river marked L?

.....

d) Draw a western arm of the rift valley on the sketch map above.

**For questions 51 – 55, answer Either Christianity o Islam but not both**

51. **Either:** “.....The man I kiss is the one you want. Arrest Him.” Mathew 26:48.

a) Who spoke the above words?

.....

b) To whom were the above words spoken?

.....

c) Why did the person in 52 (a) speak the above words?

.....

d) Which lesson do you learn from the person in 52 (a)?

.....

**Or:** (a) Name the person who withdrew from the battle according to the Quran.

.....

b) Give one way the person in (a) showed acts of hypocrisy.

.....

c) How can a Moslem avoid being a hypocrite?

.....

d) Write one danger of hypocrites in the Islamic community.

.....

52. **Either:** a) Who taught disciples how to pray?

.....

b) Which prayer did the person named in (a) above teach the disciples?

.....

c) Give any two benefits of a prayer to a Christian.

i) .....

ii) .....

Or: a) State any one way in which Moslems get ready for Salat.

.....

b) Write the first three daily prayers said by Muslims.

i) .....

ii) .....

iii) .....

53. **Either:** a) Who is a martyr?

.....

b) Name the first Christian martyr in the Bible.

.....

c) How did the above person meet his death?

.....

d) State one lesson you learn from the Uganda Martyrs.

.....

Or: a) Who is a martyr?

.....

b) Name the first Muslim Martyr.

.....

c) How did the above person meet her death?

.....

d) State one lesson learn from the above-mentioned martyr.

.....

54. **Either:** a) Write UJCC in full.

.....

b) State two Christian sects under UJCC.

i) .....

ii) .....

c) How does UJCC promote Christianity in Uganda?

.....

55. **FOR BOTH.** a) Give any two common beliefs of Christians And Muslims.

i).....

ii) .....

b) List any two Religious practices that make Christians and Muslims different from each other.

i).....

ii) .....

**END**

## **SECTION A**

1. Give one basic need of man?  

---
2. On which river are Victoria Falls located?  

---
3. Why is mechanized farming commonly practiced in central Uganda?  

---
4. Who was the Ugandan founder of the first East African Community?  

---
5. Give any one way how your family is important to you.  

---
6. Which Ministry is responsible for refugee problems in Uganda?  

---
7. Give a reason why some parts of river Nile are navigable.  

---
8. Write ECOMOG in full.  

---

---
9. How are polythene bags / papers a danger to our environment?  

---

---
10. What type of trade replaced barter trade?  

---
11. How is Uganda trying to promote peace in its neighbouring countries?  

---
12. How does the government of Uganda gain from foreign tourists?  

---
13. Which was the first European Country to get a colony in Africa?  

---
14. Why was Mt. Rwenzori referred to as the "Mountains of the moon"?  

---

---

15. Suggest any one way the government of Uganda can improve on its labour force.


---

---

16. Give any one reason why the colonial government introduced taxes.

---

---



17. Name the voting item marked with letter P.

---

18. Give any one danger of land fragmentation.

---

19. How did L. Victoria contribute to the rise and expansion of Buganda Kingdom?

---

---

20. How does the climate in the Sahara desert influence people's ways of dressing?

---

---

21. Give one factor that qualifies Uganda to be a member of the East African Community?

---

22. How did Slave trade affect food production in E. Africa?

---

23. State the importance of having one local language in East Africa.

---

24. Give any one advantage of good feeder roads.

---

---

25. How is a Post office useful to a community?

---

26. How did Captain F.D Lugard solve the problem of religious wars in Uganda?

---

---

27. Why do some people fail to meet their needs?

---

28. Name any one man-made cause of environmental degradation.

---

29. Give any one way in which climate influences economic activities.

---

---

30. Identify any one social activity that unites people in a community.

---

31. State one factor that led to the building of a factory at Hima.

---

32. Why is the government of Uganda encouraging people to grow non-traditional cash crops?

---

---

33. Why is the equatorial Climate described as hot and wet?

---

34. Who was the founder of Bunyoro-Kitara Kingdom?

---

35. Mention any one product got from natural forests.

---

**For questions 36-40, answer Christianity or Islamic questions but NOT both in a number.**

36. **Either:** Why did the three wise men give gifts to baby Jesus?

\_\_\_\_\_

**Or:** Why did early Muslims face Jerusalem while praying?

\_\_\_\_\_

37. **Either:** Why do Christians work?

\_\_\_\_\_

**Or:** Why do Muslims work?

\_\_\_\_\_

38. **Either:** Why do Christians take the Bible to be a holy book?

\_\_\_\_\_

**Or:** Why do Muslims take the Quran to be a holy book?

\_\_\_\_\_

39. **Either:** Who was the first disciple to be called by Jesus?

\_\_\_\_\_

**Or:** Who was the first person to convert to Islam

\_\_\_\_\_

40. **Either:** Who was the last prophet according to the Bible?

\_\_\_\_\_

**Or:** Who was the last Prophet according to the Quran?

\_\_\_\_\_

**SECTION B (60 MARKS)**

41. a) What title is given to the highest elected leader in a district local council?

\_\_\_\_\_

b) Identify any two duties of Local Councils?

i) \_\_\_\_\_

ii) \_\_\_\_\_

c) Give any one duty of a sub-county Chief.

\_\_\_\_\_



42. a) How is Uganda's fish for export preserved?

\_\_\_\_\_

b) How does fish poisoning affect Uganda's fish exports?

\_\_\_\_\_

c) Give any two problems that fish face in Uganda's lakes.

i) \_\_\_\_\_

ii) \_\_\_\_\_

43. a) State the difference between internal trade and bilateral trade.

\_\_\_\_\_

\_\_\_\_\_

b) Give any two problems facing traders in Uganda.

i) \_\_\_\_\_

ii) \_\_\_\_\_

c) How has the government of Uganda tried to solve any of the given problems (in 43.b)

\_\_\_\_\_

44. a) Name the agreement which introduced hut and gun tax.

\_\_\_\_\_

b) Which group of people were supposed to pay each of these taxes?

i) Hut tax : \_\_\_\_\_

ii) Gun tax. \_\_\_\_\_

c) How did the Agreement named in (a) above affect Toro Kingdom?

\_\_\_\_\_

\_\_\_\_\_

45. a) Which National game park in Uganda is famous for zebras?

\_\_\_\_\_

b) Identify any two problems faced by people living near National Game Parks.

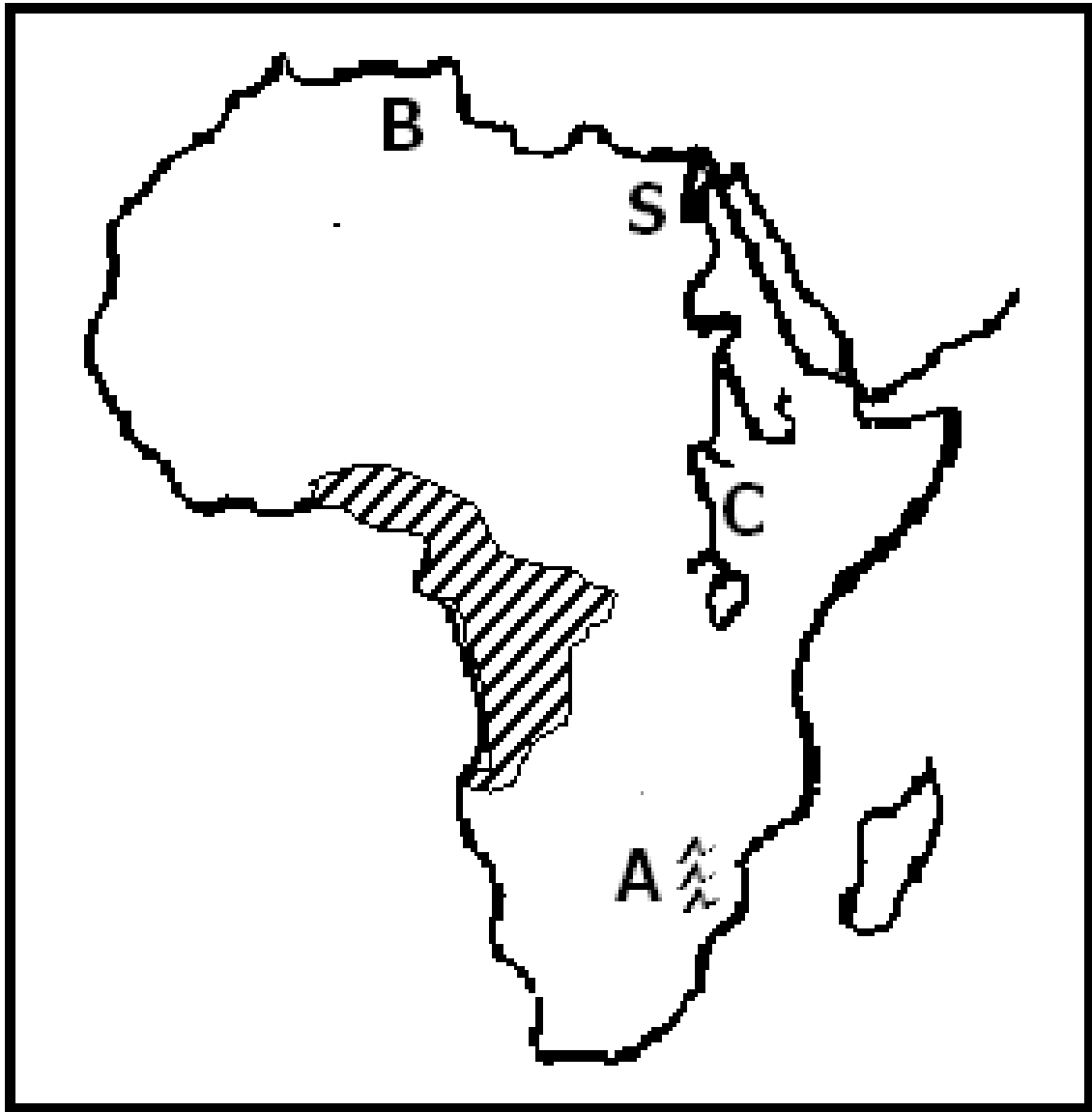
i) \_\_\_\_\_

ii) \_\_\_\_\_

a) How can tourism be a disadvantage to a country's security?

\_\_\_\_\_

46. Use the map of Africa below to answer the questions that follow.



b) Name the city marked S.

---


c) Name mountain ranges marked A.

---

c) Why does river marked C flow northwards?

---

---

d) Why are forests in area shaded  ever green?

---

47. *Sudan is one country in Africa that largely depends on irrigation farming.*

a) State any two advantages of growing crops by irrigation.

i) \_\_\_\_\_

ii) \_\_\_\_\_

b) Mention any two problems faced by farmers on the Gezira Irrigation Scheme.

i) \_\_\_\_\_

ii) \_\_\_\_\_

48. a) Give one reason why government provides social services to its people.

\_\_\_\_\_

\_\_\_\_\_

c) Mention any two problems government faces as it provides social services to its people.

i) \_\_\_\_\_

ii) \_\_\_\_\_

d) What does the word development mean?

\_\_\_\_\_

\_\_\_\_\_

49. a) How did Rwanda join the Common Wealth yet it was not colonized by Britain?

\_\_\_\_\_

\_\_\_\_\_

b) Why were each of these countries at one time suspended from the Common Wealth?

i) South Africa:

\_\_\_\_\_

\_\_\_\_\_

ii) Nigeria :

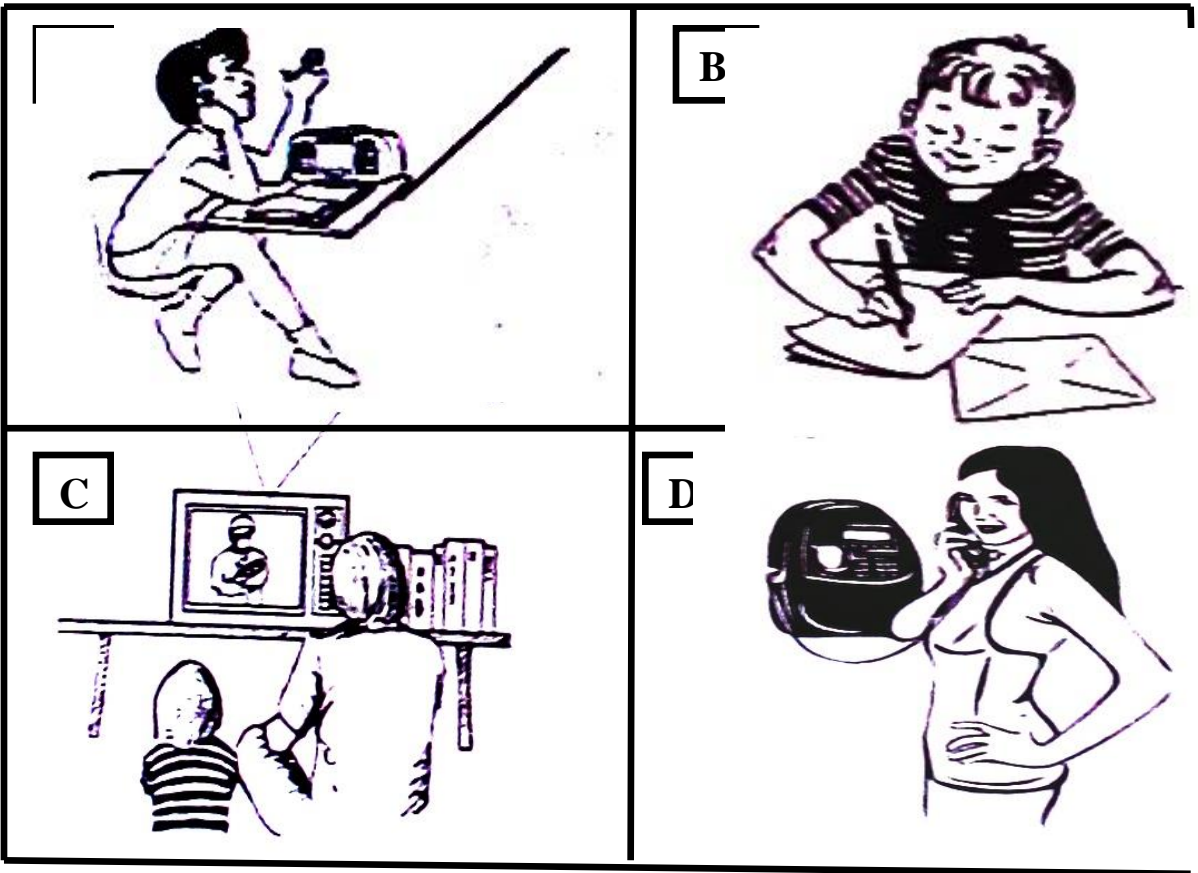
\_\_\_\_\_

\_\_\_\_\_

c) How does Uganda benefit from the activities of the Common Wealth?

\_\_\_\_\_

50. Study the picture below and use it to answer question 50.



- a) Which means of communication is shown in picture,
- i) **A** \_\_\_\_\_
- ii) **C** \_\_\_\_\_
- b) Why is communication means in picture **D** commonly used by most people in Uganda today?
- \_\_\_\_\_
- \_\_\_\_\_
- c) Give one disadvantage of the government would face if it uses communication means **C** when sending information to its citizens.
- \_\_\_\_\_
- \_\_\_\_\_

**For questions 51 to 55, answer either Christianity or Islamic but not both.**

**51. Either:**

a) What is the first sacrament according to Christianity?

\_\_\_\_\_

b) Mention the symbol for the mentioned Sacrament (in 51. a)

\_\_\_\_\_

c) State two benefits of the sacrament mentioned in (51. a)

i) \_\_\_\_\_

ii) \_\_\_\_\_

**Or:**

a) What is the second pillar in Islam?

\_\_\_\_\_

b) Give any two ways Muslim believers benefit from this pillar.

i) \_\_\_\_\_

ii) \_\_\_\_\_

c) How do believers prepare for this pillar?

\_\_\_\_\_

**52. Either:**

a) Name the Prophet who survived floods.

\_\_\_\_\_

b) Why did God send floods?

\_\_\_\_\_

c) Why did the named Prophet (in 52. a) survive the floods?

\_\_\_\_\_

d) How many people survived the floods?

\_\_\_\_\_

**Or:**

a) Name the Prophet who survived floods.

\_\_\_\_\_

b) Why did Allah send floods?

---

c) Why did the named Prophet in (52.a) survive the floods?

---

d) How many people survived the floods?

---

53. **Either:**

a) Why did God give Commandments to the Israelites?

---

b) Mention two greatest commandments of God as taught by Jesus Christ.

ii) 

---

ii) 

---

c) What was the last commandment that Jesus gave to his disciples?

---

**Or:**

a) Give any two ways a Muslim should keep the Qur'an.

i) 

---

ii) 

---

b) Mention any two kinds of people who should not touch the Qur'an.

i) 

---

ii) 

---

54. **Either:**

a) Who led the Israelites across R. Jordan?

---

b) Why was it necessary for Moses to rescue the Israelites?

---

c) Why were the Israelites' baby boys being killed by the authorities in Egypt?

---

d) Where in Egypt were the Israelites staying?

---

**Or:**

a) Who led the Banu - Israelites across the Red Sea?

---

b) Why was it necessary for Musa to rescue the Israelites?

---

c) Why were the Israelites' baby boys being killed by the authorities in Egypt?

---

d) Where in Egypt were the Israelites staying?

---

**FOR BOTH.**

55. Name the Prophet in Islam / Christianity remembered for;

a) Deliverance: \_\_\_\_\_

b) Great rule of wisdom: \_\_\_\_\_

c) Endurance and Perseverance: \_\_\_\_\_

d) Seal of Prophets: \_\_\_\_\_

## SECTION A: 40 MARKS

Questions **1** to **40** carry **one mark** each

1. Mention any **one** group of people who bring goods nearer to your community.  
.....
2. What discovery enabled early man to live a settled life?  
.....
3. Give any **one** advantage of locking dormitory windows and doors at night.  
.....
4. Name the water body that is found at the Eastern Coast of Africa.  
.....
5. Name the source of raw material for making the sanitary ceramics below.



6. State any **one** challenge that farmers in Uganda face in carrying out their work.  
.....
7. Apart from a National Identity card, mention any **one** other document that can be used to identify Ugandan citizens.  
.....
8. How did Semei Kakungulu contribute to the development of Eastern Uganda during colonial rule?  
.....
9. State any **one** way in which human labour is important in an industry.  
.....
10. Mention any **one** cause of domestic violence in most families.  
.....





The diagrams below show two flags **A** and **B**. Use them to answer questions **11** to **13**.



- 11. What name was given to the British colonial flag **A**?  
.....
- 12. How was flag **A** treated by Major Sidney Small on 9th October, 1962?  
.....
- 13. Who raised flag **B** at Kololo Independence grounds on the night Uganda got independence from Britain?  
.....
- 14. Mention any **one** reason why some children run away from their homes to streets.  
.....
- 15. What role did Chief Awich play in defending the independence of Acholi?  
.....
- 16. How is proper disposal of plastics and polythene bags useful to the environment?  
.....
- 17. How did the East African countries solve the problem of limited market for goods in 1967?  
.....
- 18. Mention any **one** way in which electricity costs can be minimized at home.  
.....
- 19. What evidence is there to show that Lake Kyoga is on a lower altitude than Lake Victoria?  
.....

20. Give any **one** way how farmers in hilly areas can control soil erosion.

.....



Study the map symbols below carefully and use them to answer questions **21** to **24**.

<b>W</b>	<b>X</b>	<b>Y</b>	<b>Z</b>

21. Which of the map symbols above represents a feature that can make navigation on most rivers difficult?

.....

22. Name the map symbol marked **Y**.

.....

23. Which map symbol represents what the British used to stop slave trade activities in East Africa?

.....

24. Which of the map symbols is constructed by the government to reduce on power load shedding in the country.

.....

25. State any **one** challenge faced by people living in valleys.

.....

26. State any **one** reason why the government of Uganda is encouraging people to join technical schools.

.....

27. Why do the coastal areas of East Africa experience high temperature?

.....

28. Mention any **one** advantage of electing leaders using the secret ballot.

.....

29. Name the type of communication which involves the use of gestures.

.....

30. What is the main role of a speaker of parliament?  
.....
31. How does the increase in soap prices affect the personal hygiene of school children?  
.....
32. Mention any **one** symbol of Uganda as a nation that promotes nationalism.  
.....
33. How is Dar-es-Salaam an important city to the economic development of Uganda?  
.....
34. Name the highest civil servant in a ministry.  
.....
35. Give any **one** reason why the British used indirect rule in Uganda.  
.....

For each of the questions **36** to **40**, answer **Either** the Christian **OR** Islamic questions but **not** both. No **marks** will be awarded to a candidate who attempts both alternatives in **a particular number**.

36. **EITHER:**  
Name any **one** symbol of the Holy Spirit on Pentecost day.  
.....  
**OR:**  
Name any **one** symbol of Islam on a mosque.  
.....
37. **EITHER:**  
Name the person who led the Israelites out of Egypt.  
.....  
**OR:**  
Name the prophet who led the Banu Israelites out of Egypt.  
.....

38.

**EITHER:**  
How should you as a Christian treat those who mistreat you?  
.....

**OR:**  
How should you as a Muslim treat those who mistreat you?  
.....
39.

**EITHER:**  
Name any **one** book of the law in the Bible.  
.....

**OR:**  
Name the Holy book in Islam that was revealed to Prophet Musa.  
.....
40.

**EITHER:**  
Name the mountain where Moses received the Ten Commandments.  
.....

**OR:**  
Name the mountain where Prophet Muhammad P.B.U.H received the first revelation.  
.....



**SECTION B: 60 MARKS**

Questions **41** to **55** carry four marks each.


41.

(a)

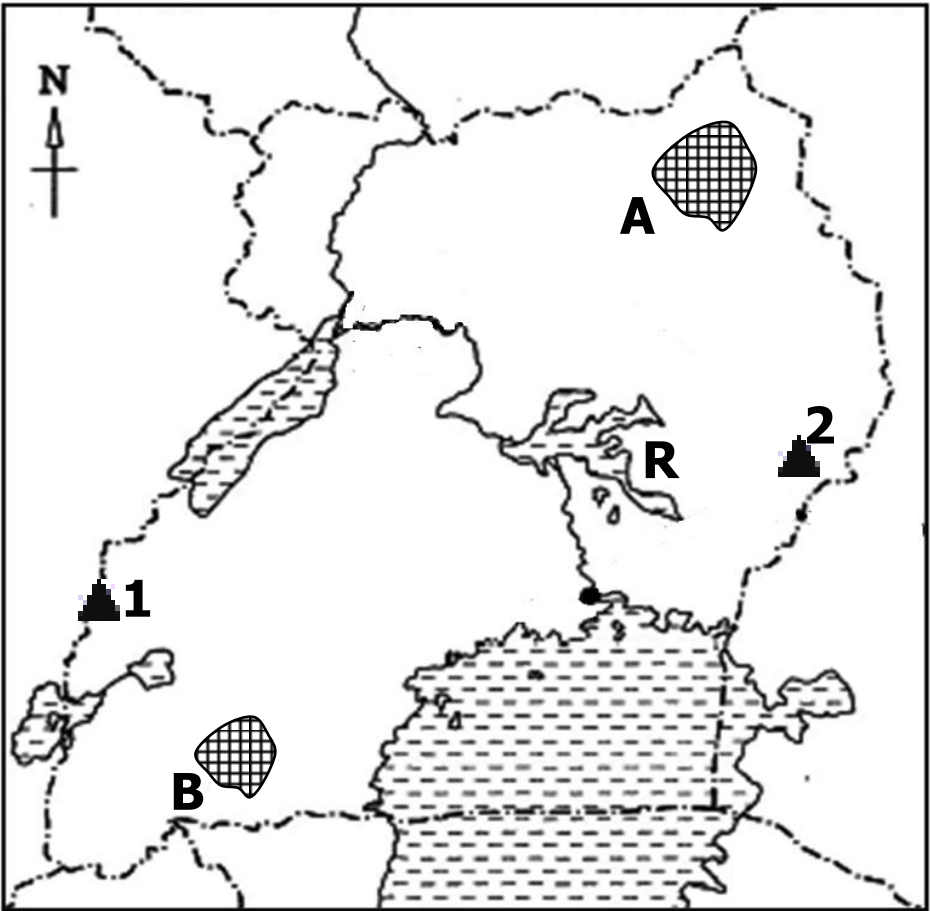
State any **two** roles of children in promoting peace and security at home.  
(i) .....  
(ii) .....
- (b)

Give **one** way children can help the police to carry out its duties.  
.....
- (c)

How can parents help to support their children to live a better life?  
.....

42. Every after 5 years, presidential and parliamentary elections take place in Uganda,
- (a) Name the body that organizes the above elections.  
.....
- (b) State any **one** way the body named in (a) above can control the bad practices done by people during national elections.  
.....
- (c) State any **two** reasons why elections are important in a country.  
(i) .....  
(ii) .....
43. (a) Who is believed to be the first Muganda according to Buganda traditions?  
.....
- (b) Mention any **two** factors that led to the growth and expansion of Buganda Kingdom.  
(i) .....  
(ii) .....
- (c) Give **one** way kingdoms like Buganda are important in a country.  
.....
44. (a) State **one** way COVID 19 has affected the following sectors in Uganda. 
- (i) Education .....
- (ii) Transport .....
- (b) Name the Ministry in Uganda responsible for giving guidelines on how to control the spread of COVID 19.  
.....
- (c) State **one** way the government of Uganda has helped its people to overcome the challenges brought about by COVID 19.  
.....

45. Study the sketch map of Uganda below carefully and use it to answer questions that follow.

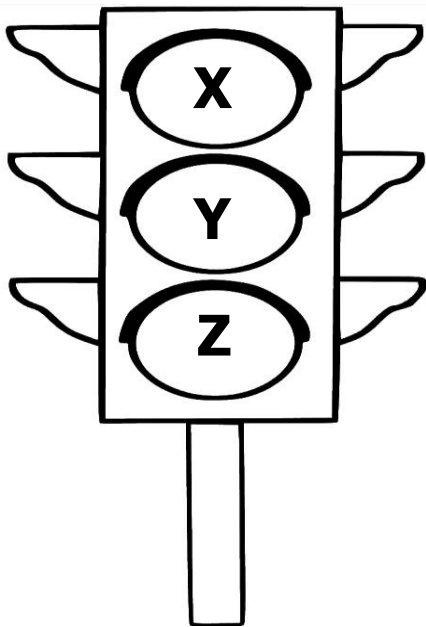


- (a) Why is water transport difficult on lake marked **R**?  
.....
- (b) Name the National Game Parks found at place marked **A**.  
.....
- (c) Which major tourist attraction is mostly admired by tourists who visit the National Game park found in place marked **B**.  
.....
- (d) How is the formation of Mountain **1** different from that of Mountain **2**?  
.....  
.....

46. (a) Name the first **two** European explorers to come to in the interior of East Africa.
- (i) .....
  - (ii) .....
- (b) Name the association that sent the above explorers to East Africa.  
.....
- (c) State **one** contribution of European explorers in East Africa.  
.....



47. Study the diagram below and use it to answer the questions that follow.



(a) Give the meaning of the traffic lights marked **X**, **Y**, **Z**.

- X** .....
- Y** .....
- Z** .....

(b) Give **one** cause of road accidents.

.....

48. (a) How do we call activities that bring people together in the society?

.....

(b) Give any **two** examples of such activities in our community.

- (i) .....
- (ii) .....

(c) Why are such activities important in our community?

.....

49. **Match** the names of the persons in list **A** with the legend said about them in list **B** correctly using a pen.

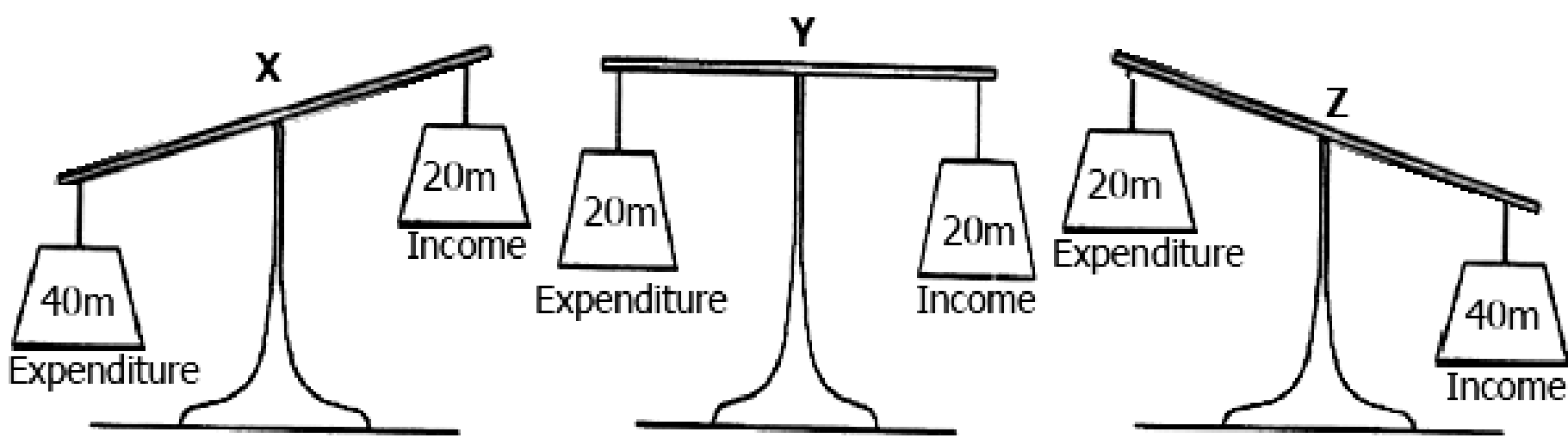
**LIST A.** (Name)

**LIST B.** (Legend)

- |              |  |
|--------------|--|
| (i) Ndahura  | was a gate keeper at Isimbwa’s palace. |
| (ii) Bukuku  | was the last king of the Bachwezi.     |
| (iii) Wamala | was the last king of the Batembuzi     |
| (iv) Isaza   | was the first king of the Bachwezi.    |



50. Study the types of budgets for different countries below carefully and use them to answer the questions that follow.



(a) Which of the three types of budgets will lead a country to always have a heavy debt burden?

.....

(b) Give **one** problem a country that operates under budget **Y** will face.

.....

(c) Which of the three above types of budget should a country like Uganda operate in order to extend better social services to her citizens?

.....

(d) Give any **one** way smuggling of goods affects the local industries in a country.

.....

For each of the questions **51** to **55**, answer **EITHER** Christian **OR** Islamic questions but **not** both. **No mark** will be awarded to a candidate who attempts both alternatives in **a particular number**.

51. **EITHER:**

(a) Apart from Christianity and Islam, mention any **one** other religion practised in Uganda.

.....

(b) State any **three** roles of a Christianity religious leaders to the government of Uganda.

(i) .....

(ii) .....

(iii) .....

**OR:**

(a) Apart from Islam and Christianity, mention any **one** other religion practised in Uganda.

.....



(b) State any **three** roles of a Muslim religious leaders to the government of Uganda.

(i) .....

(ii) .....

(iii) .....

52. **EITHER:**

(a) Who was the mother of Jesus Christ?

.....

(b) State any **two** ways in which Jesus Christ showed friendship to people.

(i) .....

(ii) .....

(c) Mention any **one** way a Christian child can show friendship to others.

.....

**OR:**

(a) Who was the mother of Prophet Muhammad?

.....

(b) State any **two** ways in which Prophet Muhammad (P.B.U.H) showed friendship to people.

(i) .....

(ii) .....

(c) Mention any **one** way a Muslim child can show friendship to others.

.....



53. **EITHER:**

(a) Name the town where Jesus entered during Palm Sunday.

.....

(b) Mention any **two** ways in which the Christians of the above named town welcomed Jesus Christ.

(i) .....

(ii) .....

(c) Why did Jesus Christ go to the above named town?

.....

**OR:**

- (a) Name the town where Prophet Muhammad migrated to from Mecca.  
.....
- (b) Mention any **two** ways in which the people of the above named town reacted to his visit.
- (i) .....
- (ii) .....
- (c) Why did Prophet Muhammad migrate to the above named town?  
.....

54. **EITHER:**

- (a) According to Christian teaching, what is the greatest commandment?  
.....
- (b) Give any **three** ways in which some Christians go against the commandment you have mentioned in (a) above.
- (i) .....
- (ii) .....
- (iii) .....

**OR:**

- (a) According to Islamic teaching, what is the greatest pillar?  
.....
- (b) Give any **three** ways in which some Muslims go against the pillar you have mentioned in (a) above.
- (i) .....
- (ii) .....
- (iii) .....

55. **FOR BOTH:**

- (a) Name any **two** voluntary organizations that offer free services to people.
- (i) .....
- (ii) .....
- (b) State any **two** ways the organizations you have named help the people.
- (i) .....
- (ii) .....



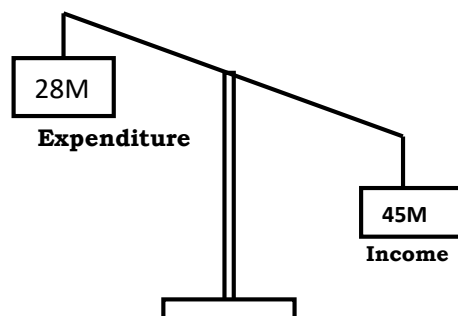
## **SECTION A**

1. Name the island country of Africa crossed by the Tropic of Capricorn.  
.....
2. Mention any one source of materials used to make mats.  
.....
3. Which body is responsible for providing security to animals in national game parks?  
.....
4. Give any one importance of a museum to a country.  
.....
5. Why does the leeward side of a mountain receive little rainfall?  
.....
6. In which way are civic leaders chosen in a district?  
.....
7. State any one way in which immunisation against killer diseases has increased population growth.  
.....
8. Why should people be encouraged to use energy saving stoves in Uganda?  
.....
9. In which way have Ugandans benefited from the East African community?  
.....
10. Draw a map symbol of a canal in the space provided below.



11. Name the mineral that is used to make glass.  
.....
12. In which direction will Sarah be moving in the morning, if her shadow appears on her left-hand side?  
.....
13. Why do people in Equatorial regions build houses with slanting roofs?  
.....
14. State any one way in which an oasis is important to the people who live in the Sahara Desert.  
.....
15. Give any one bad act that can affect the life of a child.  
.....
16. What is population density?  
.....
17. Why did the River-Lake nilotes change from pastoralism to mixed farming?  
.....
18. Which group of people introduced iron smelting in Uganda?  
.....

**Study the diagram below and answer questions 19 and 20.**



19. What type of budget is shown in the diagram above?  
.....

20. Give any one reason to support your answer in (19) above.  
.....
21. How is Lake Kyoga different from Lake Albert in terms of their formation?  
.....  
.....
22. Give any one way in which the maintenance of feeder roads can promote trade in Uganda.  
.....
23. Name the official on the Local Council I executive committee responsible for writing minutes and keeping records.  
.....
24. Give any one importance of the Uganda National Anthem.  
.....
25. Mention any one item of trade that was taken by the Arabs from Buganda.  
.....
26. State any one way in which land is polluted.  
.....
27. Why did Dr. Kwame Nkrumah organise a Pan-African meeting in Ghana in 1958?  
.....
28. How is cattle useful to the Fulani who live in northern Nigeria?  
.....
29. Give any one reason why the government of Uganda introduced Universal Primary Education (UPE).  
.....

30. Name the United Nations agency that helps refugees.  
.....
31. Give any one human activity which promotes vegetation growth in an area.  
.....
32. State any one way in which Africans protested against colonial rule.  
.....
33. Give any one reason why a good government should encourage democracy.  
.....
34. How did early man benefit from iron tools?  
.....
35. What does the handshake at the bottom of the East African Community emblem represent?  
.....

**FOR QUESTIONS 36 TO 40, ANSWER EITHER THE CHRISTIAN OR ISLAMIC QUESTION BUT NOT BOTH.**

36. **Either:** What was the work of Moses before he was called by God?  
.....
- Or:** What was the work of Musa before he was called by Allah?  
.....
37. **Either :** Give any one reason why Christians use water during baptism.  
.....
- Or:** Give any one reason why Muslims use water during ablution.  
.....

38. **Either** : Why did Jesus Christ turn water into wine?

.....

**Or:** Why did Prophet Muhammad split the moon?

.....

39. **Either** : How is reconciliation important in Christianity?

.....

**Or:** How is reconciliation important in Islam?

.....

40. **Either:** Why did God send His messages through prophets?

.....

**Or:** Why did Allah send His messages through prophets?

.....

### **SECTION B**

41(a) Name the first two Christian missionaries to arrive in East Africa.

(i)..... (ii).....

(b) Give any two ways in which the people of East Africa supported missionary work.

(i).....

(ii).....

42(a) Name any one crop grown on plantations in Uganda.

.....

(b) Give any one importance of plantation farming.

.....

(c) State any two ways in which plantation farming can be promoted in Uganda.

(i) .....

(ii).....

43(a) Mention the system of government where political parties compete to gain control of the government.

.....

(b) Give any two advantages of the system named in (a) above.

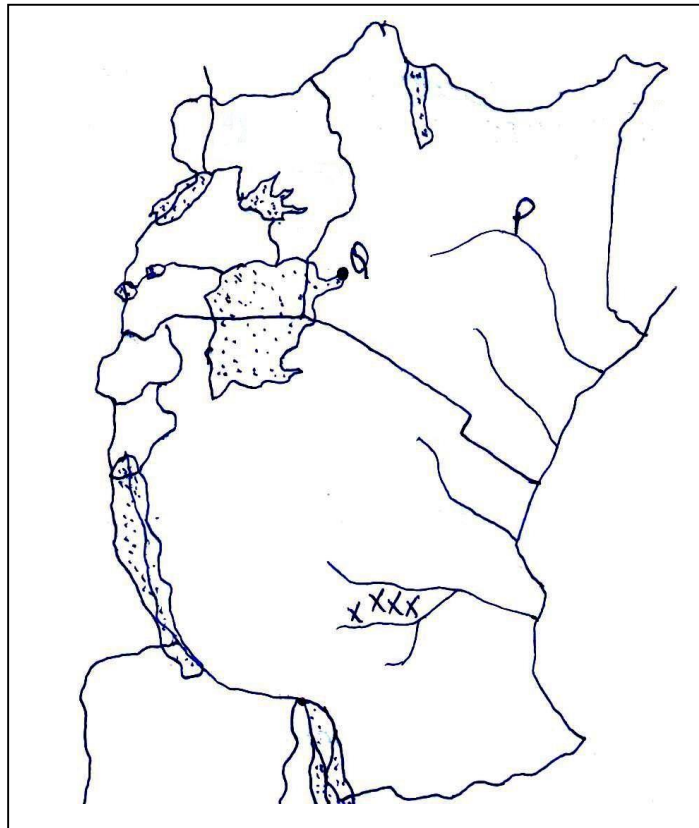
(i).....

(ii).....

(c) State any one negative effect of the above named system.

.....

44. **Study the map of East Africa below and answer the questions that follow.**



(a) Name the river marked with letter P.

CHAGUA



.....

(b) Mention any one economic activity carried out at Port Q.

.....

(c) State any one factor that favour the growth of sugarcane in area marked **xxxx** .

.....

(d) Use letter **W** to show the Albert Nile on the map.

45(a) Which organ of the African Union is responsible for the day-to-day activities?

.....

(b) Give any two achievements of the African Union.

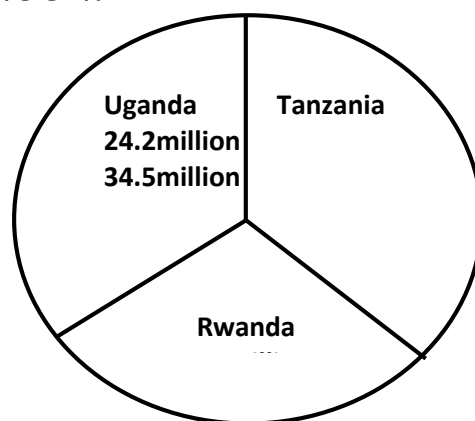
(i).....

(ii).....

(c) State any one problem faced by the African Union.

.....

46. **The pie-chart below shows the population censuses of three countries in 2002.**



(a) Which country had the highest number of people in 2002?

.....

(b) Calculate the range of population.

(c) What advantage did Rwanda have over Uganda?

.....

(d) Mention any one disadvantage of Tanzania population in 2002.

.....

47(a) Give any two reasons why districts are divided into sub-countries.

(i).....

(ii).....

(b) State any one problem faced by districts in meeting needs of people.

.....

(c) Which ministry in Uganda is responsible for creating local administrative units?

.....

48(a) Who signed the 1900 Buganda Agreement on behalf of the British?

.....

(b) State any two terms of the 1900 Buganda Agreement.

(i).....

(ii).....

(c) Why did the British sign the 1900 Buganda Agreement?

.....

49(a) Give any two reasons why the Bantu left their cradle land.

(i).....

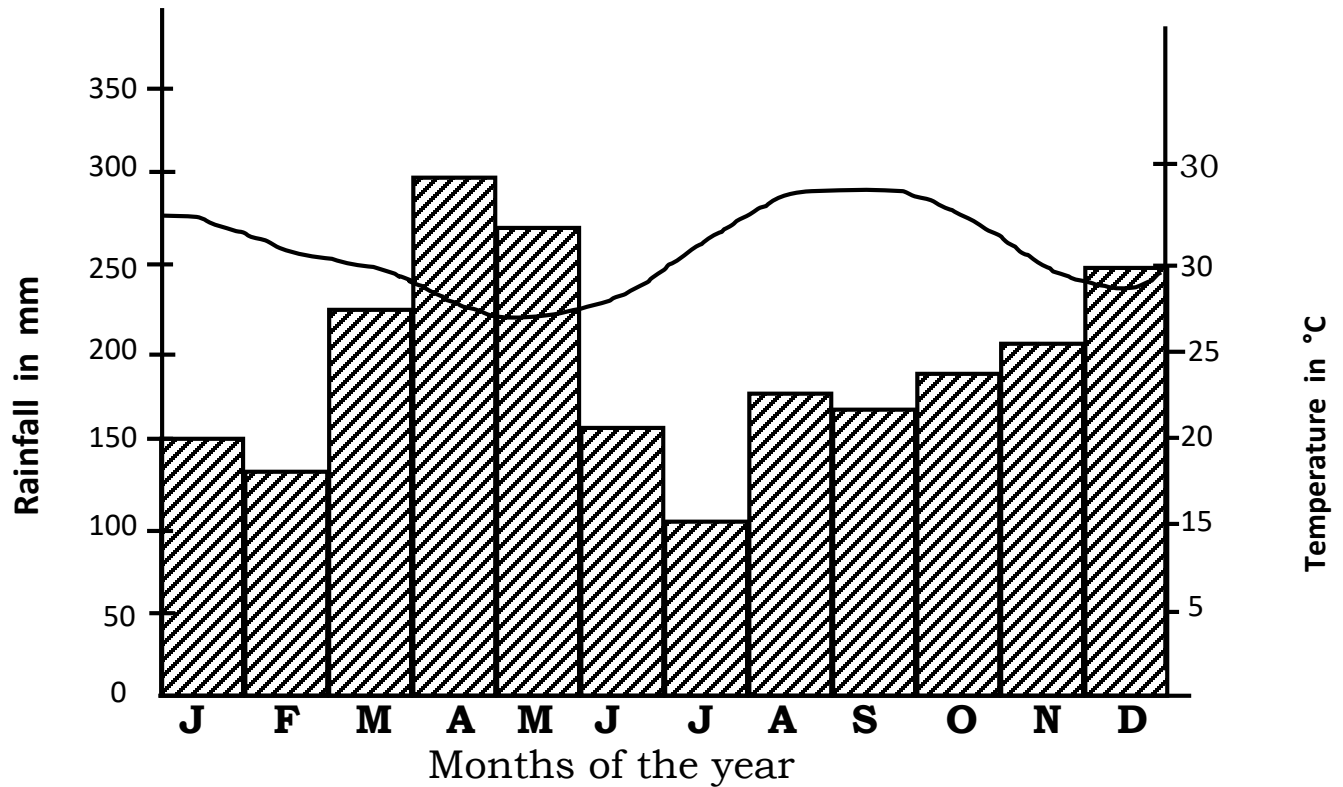
(ii).....

(b) Give any one factor that influenced the settlement of tribal groups in East Africa.

.....

- (c) State any one problem that was faced by the tribal groups during their movement.
- .....

50. **Study the climatic graph of place X carefully and answer the questions that follow.**



- (a) Which month had the highest amount of rainfall?  
.....
- (b) How much rainfall was received in July?  
.....
- (c) Name the type of climate experienced in place X.  
.....
- (d) Give any one reason why place X is suitable for crop growing.  
.....

**FOR QUESTIONS 51 TO 55, ANSWER EITHER CHRISTIANITY OR ISLAM BUT NOT BOTH.**

**51. Either:**

(a) Name the day when God will charge people according to their deeds.

.....

(b) Mention two things that will happen on the day named in (a) above.

(i).....

(ii).....

(c) How is the day in (a) above important in Christianity?

.....

**Or:**

(a) Name the day when Allah will charge people according to their deeds.

.....

(b) Mention two things that will happen on the day named in (a) above.

(i).....

(ii).....

(c) How is the day in (a) above important in Islam?

.....

**52. Either:**

(a) Who was the earthly father of Jesus Christ?

.....

(b) Give any two reasons why Jesus Christ was loved as a child.

(i) .....

(ii) .....

(c) Why was Jesus Christ baptised?

.....

**Or:**

- (a) Who was the father of Prophet Muhammad (PBUH)?  
.....
- (b) Give any two reasons why Prophet Muhammad was loved as a child.  
(i) .....  
(ii) .....
- (c) Why was Prophet Muhammad circumcised?  
.....

53. **Either:**

- (a) Who is a martyr according to Christianity?  
.....
- (b) Give any two lessons Christians learn from martyrs.  
(i) .....  
(ii) .....
- (c) Why do Christians go for pilgrimage?  
.....

**Or:**

- (a) Who is a martyr according to Islam?  
.....
- (b) Give any two lessons Muslims learn from martyrs.  
(i) .....  
(ii) .....
- (c) Why do Muslims go for pilgrimage?  
.....

54. **Either:**

- (a) Mention the message angel Gabriel brought to Zecharia.  
.....
- (b) Why did Zecharia doubt the message?  
.....
- (c) What happened to Zecharia when he doubted the message?  
.....

- (d) What lesson do you learn from the story of Zecharia and angel Gabriel?

.....

**Or:**

- (a) Mention the message angel Jibril brought to Zakariya.

.....

- (b) Why did Zakariya doubt the message?

.....

- (c) What happened to Zakariya when he doubted the message?

.....

- (d) What lesson do you learn from the story of Zakariya and angel Jibril?

.....

55. **Either:**

“Forgive them, Father! They don’t know what they are doing.”  
(Luke 23:34)

- (a) Who said the above words?

.....

- (b) Why did the above mentioned person say so?

.....

- (c) Mention any two things you learn from the above quotation.

(i).....

(ii).....

**Or:**

“These people do not know what I tell them is the truth; they are doing this because they think it is the right thing to do. Don’t be angry with them and don’t punish them but open their eyes to see the truth and help them to accept it.” (Narrated by Muslim)

- (a) Who said the above words?

.....

- (b) Why did the above mentioned person say so?

.....

(c) Mention any two things you learn from the above quotation.

(i).....

(ii).....

### **SECTION A**

1. In which direction does the sun rise?  
\_\_\_\_\_
2. Name one symbol of a school.  
\_\_\_\_\_
3. Give one reason why man is taken as a resource.  
\_\_\_\_\_  
\_\_\_\_\_
4. Give one example of a physical feature.  
\_\_\_\_\_
5. State one reason why fishing activities are not allowed on Lake Mburo.  
\_\_\_\_\_  
\_\_\_\_\_
6. What is the relationship between Sabinyo and Gakinga mountain peaks? \_\_\_\_\_
7. Mention one cause of food shortage in a community.  
\_\_\_\_\_  
\_\_\_\_\_
8. State any one way missionaries contributed in improving the life of the people of Uganda.  
\_\_\_\_\_  
\_\_\_\_\_
9. Which British representative signed the 1955 Namirembe Agreement on its behalf?  
\_\_\_\_\_
10. State one reason why Muteesa II rejected the Federation of East Africa.  
\_\_\_\_\_  
\_\_\_\_\_
11. What was the main role of the LEGCO before Independence?  
\_\_\_\_\_
12. How did the construction of Uganda Railway help to stop slave trade in East Africa?  
\_\_\_\_\_  
\_\_\_\_\_
13. State one reason why slave trade did not take place in most areas of Kenya. \_\_\_\_\_  
\_\_\_\_\_



14. What term was used to refer to Arab slave traders who were coming from Sudan? \_\_\_\_\_
15. Suggest one political reason why Muteesa I invited missionaries to Buganda.
16. What was the main occupation of the Hamites?
17. State any type of labour in your community.
18. Give one reason why a school should have a garden.
19. Who was the last king of the Bachwezi?
20. Give one reason why modern farming is very important to our country.
21. What factor contributes to Uganda limited food production?
22. What is the main source of water for Mobuku irrigation scheme?
23. How is River Semiliki related to Lake Edward and Lake Albert?
24. State one reason why the Organisation of Africa Unity (O.A.U) was transformed into the Africa Union (AU).
25. Give one characteristic of Equatorial climate.
26. What is the main source of government revenue?
27. Give one responsibility of a good government.

28. State one right of a citizen.
- 
- 
29. Mention one way one can protect his/her environment.
- 
30. Name one group of people who provide security in our community.
- 
31. State any one importance of leaders in our community.
- 
- 
32. Mention any one factor that makes the presence of Natural forests in Kalangala district.
- 
- 
33. State any one reason why Dr. A. Cook is remembered in the history of Uganda. \_\_\_\_\_
- 
34. In which way did the Kabaka Yekka Party help Obote to become the first executive prime Minister of Uganda?
- 
- 
35. Why was a cement factory built in Tororo and not in Mbale?
- 
- 
36. State one reason why Kampala has developed more industries than any other town in Uganda.
- 
- 
37. Mention one reason why imported goods are more expensive than locally produced goods.
- 
- 
38. Which ministry in Uganda is in charge of relationship with other countries? \_\_\_\_\_
- 
39. Give one example of any one service which has been decentralised at district level. \_\_\_\_\_
- 
40. Who heads all the civil servants at the district?
- 
-

### SECTION B

41. (a) State three reasons why colonialists introduced cash crops in Uganda.  
i) \_\_\_\_\_  
ii) \_\_\_\_\_  
iii) \_\_\_\_\_  
(b) State any negative result of colonial rule in Uganda.  
\_\_\_\_\_  
\_\_\_\_\_
42. (a) State two advantages of high population to a country.  
i) \_\_\_\_\_  
\_\_\_\_\_  
ii) \_\_\_\_\_  
\_\_\_\_\_  
(b) State two disadvantages of high population to a country.  
i) \_\_\_\_\_  
\_\_\_\_\_  
ii) \_\_\_\_\_  
\_\_\_\_\_
43. (a) Give two ways the government of Uganda can create employment for its people.  
i) \_\_\_\_\_  
\_\_\_\_\_  
ii) \_\_\_\_\_  
\_\_\_\_\_  
(b) Give two reasons why some people are poor.  
i) \_\_\_\_\_  
ii) \_\_\_\_\_
44. (a) What is a weather station?  
\_\_\_\_\_  
\_\_\_\_\_  
(b) State the main use of a wind sock on a weather station.  
\_\_\_\_\_  
\_\_\_\_\_  
(c) Give one reason why some weather instruments are kept in a Stevenson Screen.  
\_\_\_\_\_  
\_\_\_\_\_  
(d) Why should a school record weather everyday?  
\_\_\_\_\_  
\_\_\_\_\_

45. Use the map below to answer the questions that follow.



(a) Name waterfalls marked.

(i) K: \_\_\_\_\_

(ii) P: \_\_\_\_\_

(b) Name towns marked T and X.

i) T: \_\_\_\_\_

ii) X: \_\_\_\_\_

46. (a) Give two provisions of the 1900 Buganda Agreement.

i) \_\_\_\_\_

\_\_\_\_\_

ii) \_\_\_\_\_

\_\_\_\_\_

(b) State two effects (results) of the 1900 Buganda Agreement.

i) \_\_\_\_\_

\_\_\_\_\_

ii) \_\_\_\_\_

\_\_\_\_\_

47. (a) Write ECOWAS in full.

\_\_\_\_\_

\_\_\_\_\_

(b) State one objective of the organisation above.

\_\_\_\_\_

\_\_\_\_\_

(c) State one problem faced by the organisation given in (a).

\_\_\_\_\_

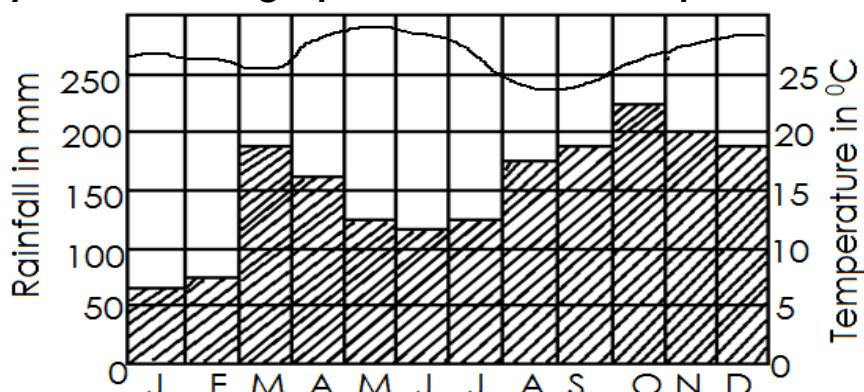
\_\_\_\_\_

(d) Give one member state of ECOWAS.

\_\_\_\_\_

\_\_\_\_\_

48. **Study the climate graph and answer the questions that follow.**



(a) Name the climatic region shown in the graph above.

(b) Which month received the least amount of rain in the region above?

(c) Give any one economic activity done in the above climatic region.

(d) What is the relation between temperature and rainfall?

49. **Read the text below and answer the questions that follow.**

Usually one main crop is grown, processed and packed on the farm. The crop grown always takes more than one year to mature. There are roads and rails to take raw materials to the factories. The workers are provided with facilities like schools for their children, clinics, hospitals and shops.

(a) Which type of farming is described in the text above?

(b) Give one advantage of the farming type above.

(c) State one disadvantage of the farming type above.

(d) Give one example of a crop common on such system of farming in Uganda.

50. (a) State two reasons that caused the migration of Bantu people.  
i) \_\_\_\_\_  
ii) \_\_\_\_\_  
(b) Give four effects (results) of Bantu migration in East Africa.  
i) \_\_\_\_\_  
ii) \_\_\_\_\_
51. (a) Give the two means of communication.  
i) \_\_\_\_\_  
ii) \_\_\_\_\_  
(b) Give two importance of communication in our community.  
i) \_\_\_\_\_  
ii) \_\_\_\_\_
52. (a) Mention two special groups of people represented in the Parliament of Uganda.  
i) \_\_\_\_\_  
ii) \_\_\_\_\_  
(b) Give two duties of the parliament of Uganda.  
i) \_\_\_\_\_  
ii) \_\_\_\_\_
53. (a) Write two examples of social activities in our communities.  
i) \_\_\_\_\_  
ii) \_\_\_\_\_  
(b) Give two importances of social activities in our community.  
i) \_\_\_\_\_  
ii) \_\_\_\_\_
54. **Match the following correctly.**
- |                       |  |
|-----------------------|--|
| Dr. David Livingstone | he exiled Muteesa II   |
| Joseph Thompson       | he was a missionary, doctor and explorer                                       |
| Muteesa II            | he found a direct route from East African coast to Lake Victoria through Kenya |
| Sir Andrew Cohen      | he rejected the East African Federation  |

i) Dr. David Livingstone: \_\_\_\_\_

ii) Joseph Thompson: \_\_\_\_\_

iii) Muteesa II: \_\_\_\_\_

iv) Sir Andrew Cohen: \_\_\_\_\_

55. (a) Give the importance of the following aspects when starting a project.

(i) Land: \_\_\_\_\_

ii) Capital (money): \_\_\_\_\_

(b) Give two reasons why people start projects.

i) \_\_\_\_\_

ii) \_\_\_\_\_

### **SECTION A**

1. In which direction does the sun rise?  
\_\_\_\_\_
2. Name one symbol of a school.  
\_\_\_\_\_
3. Give one reason why man is taken as a resource.  
\_\_\_\_\_  
\_\_\_\_\_
4. Give one example of a physical feature.  
\_\_\_\_\_
5. State one reason why fishing activities are not allowed on Lake Mburo.  
\_\_\_\_\_  
\_\_\_\_\_
6. What is the relationship between Sabinyo and Gakinga mountain peaks? \_\_\_\_\_  
\_\_\_\_\_
7. Mention one cause of food shortage in a community.  
\_\_\_\_\_  
\_\_\_\_\_
8. State any one way missionaries contributed in improving the life of the people of Uganda.  
\_\_\_\_\_  
\_\_\_\_\_
9. Which British representative signed the 1955 Namirembe Agreement on its behalf?  
\_\_\_\_\_
10. State one reason why Muteesa II rejected the Federation of East Africa.  
\_\_\_\_\_  
\_\_\_\_\_
11. What was the main role of the LEGCO before Independence?  
\_\_\_\_\_
12. How did the construction of Uganda Railway help to stop slave trade in East Africa?  
\_\_\_\_\_  
\_\_\_\_\_
13. State one reason why slave trade did not take place in most areas of Kenya. \_\_\_\_\_  
\_\_\_\_\_



14. What term was used to refer to Arab slave traders who were coming from Sudan? \_\_\_\_\_  
\_\_\_\_\_
15. Suggest one political reason why Muteesa I invited missionaries to Buganda.  
\_\_\_\_\_  
\_\_\_\_\_
16. What was the main occupation of the Hamites?  
\_\_\_\_\_  
\_\_\_\_\_
17. State any type of labour in your community.  
\_\_\_\_\_
18. Give one reason why a school should have a garden.  
\_\_\_\_\_  
\_\_\_\_\_
19. Who was the last king of the Bachwezi?  
\_\_\_\_\_
20. Give one reason why modern farming is very important to our country.  
\_\_\_\_\_  
\_\_\_\_\_
21. What factor contributes to Uganda limited food production?  
\_\_\_\_\_  
\_\_\_\_\_
22. What is the main source of water for Mobuku irrigation scheme?  
\_\_\_\_\_
23. How is River Semiliki related to Lake Edward and Lake Albert?  
\_\_\_\_\_  
\_\_\_\_\_
24. State one reason why the Organisation of Africa Unity (O.A.U) was transformed into the Africa Union (AU).  
\_\_\_\_\_  
\_\_\_\_\_
25. Give one characteristic of Equatorial climate.  
\_\_\_\_\_  
\_\_\_\_\_
26. What is the main source of government revenue?  
\_\_\_\_\_
27. Give one responsibility of a good government.  
\_\_\_\_\_  
\_\_\_\_\_

28. State one right of a citizen.  
\_\_\_\_\_  
\_\_\_\_\_
29. Mention one way one can protect his/her environment.  
\_\_\_\_\_  
\_\_\_\_\_
30. Name one group of people who provide security in our community.  
\_\_\_\_\_  
\_\_\_\_\_
31. State any one importance of leaders in our community.  
\_\_\_\_\_  
\_\_\_\_\_
32. Mention any one factor that makes the presence of Natural forests in Kalangala district.  
\_\_\_\_\_  
\_\_\_\_\_
33. State any one reason why Dr. A. Cook is remembered in the history of Uganda. \_\_\_\_\_  
\_\_\_\_\_  
\_\_\_\_\_
34. In which way did the Kabaka Yekka Party help Obote to become the first executive prime Minister of Uganda?  
\_\_\_\_\_  
\_\_\_\_\_
35. Why was a cement factory built in Tororo and not in Mbale?  
\_\_\_\_\_  
\_\_\_\_\_
36. State one reason why Kampala has developed more industries than any other town in Uganda.  
\_\_\_\_\_  
\_\_\_\_\_
37. Mention one reason why imported goods are more expensive than locally produced goods.  
\_\_\_\_\_  
\_\_\_\_\_
38. Which ministry in Uganda is in charge of relationship with other countries? \_\_\_\_\_  
\_\_\_\_\_  
\_\_\_\_\_
39. Give one example of any one service which has been decentralised at district level. \_\_\_\_\_  
\_\_\_\_\_  
\_\_\_\_\_
40. Who heads all the civil servants at the district?  
\_\_\_\_\_  
\_\_\_\_\_

### SECTION B

41. (a) State three reasons why colonialists introduced cash crops in Uganda.  
i) \_\_\_\_\_  
ii) \_\_\_\_\_  
iii) \_\_\_\_\_  
(b) State any negative result of colonial rule in Uganda.  
\_\_\_\_\_  
\_\_\_\_\_
42. (a) State two advantages of high population to a country.  
i) \_\_\_\_\_  
ii) \_\_\_\_\_  
(b) State two disadvantages of high population to a country.  
i) \_\_\_\_\_  
ii) \_\_\_\_\_
43. (a) Give two ways the government of Uganda can create employment for its people.  
i) \_\_\_\_\_  
ii) \_\_\_\_\_  
(b) Give two reasons why some people are poor.  
i) \_\_\_\_\_  
ii) \_\_\_\_\_
44. (a) What is a weather station?  
\_\_\_\_\_  
(b) State the main use of a wind sock on a weather station.  
\_\_\_\_\_  
\_\_\_\_\_  
(c) Give one reason why some weather instruments are kept in a Stevenson Screen.  
\_\_\_\_\_  
\_\_\_\_\_  
(d) Why should a school record weather everyday?  
\_\_\_\_\_  
\_\_\_\_\_

45. Use the map below to answer the questions that follow.



(a) Name waterfalls marked.

(i) K: \_\_\_\_\_

(ii) P: \_\_\_\_\_

(b) Name towns marked T and X.

i) T: \_\_\_\_\_

ii) X: \_\_\_\_\_

46. (a) Give two provisions of the 1900 Buganda Agreement.

i) \_\_\_\_\_

\_\_\_\_\_

ii) \_\_\_\_\_

\_\_\_\_\_

(b) State two effects (results) of the 1900 Buganda Agreement.

i) \_\_\_\_\_

\_\_\_\_\_

ii) \_\_\_\_\_

\_\_\_\_\_

47. (a) Write ECOWAS in full.

\_\_\_\_\_

\_\_\_\_\_

(b) State one objective of the organisation above.

\_\_\_\_\_

\_\_\_\_\_

(c) State one problem faced by the organisation given in (a).

\_\_\_\_\_

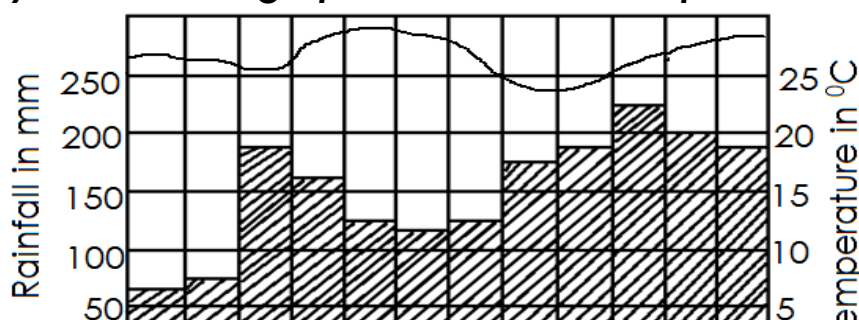
\_\_\_\_\_

(d) Give one member state of ECOWAS.

\_\_\_\_\_

\_\_\_\_\_

48. Study the climate graph and answer the questions that follow.



(a) Name the climatic region shown in the graph above.

---

(b) Which month received the least amount of rain in the region above?

---

(c) Give any one economic activity done in the above climatic region.

---

(d) What is the relation between temperature and rainfall?

---

49. **Read the text below and answer the questions that follow.**

Usually one main crop is grown, processed and packed on the farm. The crop grown always takes more than one year to mature. There are roads and rails to take raw materials to the factories. The workers are provided with facilities like schools for their children, clinics, hospitals and shops.

(a) Which type of farming is described in the text above?

---

(b) Give one advantage of the farming type above.

---

(c) State one disadvantage of the farming type above.

---

(d) Give one example of a crop common on such system of farming in Uganda.

---

50. (a) State two reasons that caused the migration of Bantu people.

i) \_\_\_\_\_

ii) \_\_\_\_\_

(b) Give four effects (results) of Bantu migration in East Africa.

i) \_\_\_\_\_

ii) \_\_\_\_\_

51. (a) Give the two means of communication.

i) \_\_\_\_\_

ii) \_\_\_\_\_

(b) Give two importance of communication in our community.

i) \_\_\_\_\_

ii) \_\_\_\_\_

52. (a) Mention two special groups of people represented in the Parliament of Uganda.

i) \_\_\_\_\_

ii) \_\_\_\_\_

(b) Give two duties of the parliament of Uganda.

i) \_\_\_\_\_

ii) \_\_\_\_\_

53. (a) Write two examples of social activities in our communities.

i) \_\_\_\_\_

ii) \_\_\_\_\_

(b) Give two importances of social activities in our community.

i) \_\_\_\_\_

ii) \_\_\_\_\_

54. **Match the following correctly.**

Dr. David Livingstone

he exiled Muteesa II

Joseph Thompson

he was a missionary, doctor and explorer

Muteesa II

he found a direct route from East African coast to Lake Victoria through Kenya

Sir Andrew Cohen

he rejected the East African Federation

i) Dr. David Livingstone: \_\_\_\_\_

ii) Joseph Thompson: \_\_\_\_\_

iii) Muteesa II: \_\_\_\_\_

---

iv) Sir Andrew Cohen: \_\_\_\_\_

---

55. (a) Give the importance of the following aspects when starting a project.

(i) Land: \_\_\_\_\_

---

ii) Capital (money): \_\_\_\_\_

---

(b) Give two reasons why people start projects.

i) \_\_\_\_\_

---

ii) \_\_\_\_\_

---

- 14) Mention one way people living on the slopes of mountain Elgon can manage landslides.  
.....
- 15) State any one way a national language is important in a country.  
.....
- 16) Which group of people form the surrmit of East African Community. (EAC)?  
.....
- 17) State any one benefit of a low population to a developing country.  
.....
- 18) Give one reason why European explorers came to Africa.  
.....
- 19) Why is Dar-es-salaam hotter than Kampala yet it's near a larger water body?  
.....
- 20) State any one way farmers benefit from good climate in an area.  
.....
- 21) Write UNEB in full.  
.....
- 22) Give one reason why shadows move from East to West during the course of the day.  
.....
- 23) State one way the East African Community helps land locked countries to carry out trade.  
.....
- 24) Mention one way in which Africans benefited from rebellions they staged against colonial rule.  
.....
- 25) Give one example of essential needs.  
.....
- 26) State any one way colonialists controlled Africans struggle for independence.  
.....
- 27) Give any one way farmers can help their crops to grow well during the dry seasons.  
.....
- 28) Which factor enabled captain Lugard in control Buganda Kingdom?  
.....
- 29) Stat one factor that cause over spending in an extended family.  
.....
- 30) Why is a Resident District Commissioner important in a district?  
.....



31) How can the government reduce corruption in the country?

.....

32) Why do people participate in many economic activities in our community?

.....

33) State any one characteristic of ethnic groups in Africa.

.....

34) Why do traffic policemen advised to put on uniforms regularly?

.....

35) In which way can co-operation among East African Community countries promote development?

.....

**Answer Either Christianity or Islam questions but not both.**

36) **Either:** Why do Christians celebrate Christmas?

.....

**Or:** Why do Christians celebrate Eid al Fitr?

.....

37) **Either:** In which parable did Jesus Christ teach about promoting good neighbourhood in the community?

.....

**Or:** In which hadith did Prophet Muhammad teach about promoting good neighbourhood in the community?

.....

38) **Either:** Why should you as a Christian pray for other fellow Christians always?

.....

**Or:** Why should you a Moslem pray for other fellow Moslems always?

.....

39) **Either:** How was Nazareth important to the life of Jesus Christ?

.....

**Or:** How was Mecca important to the life of Prophet Mohammad?

.....

40) **Either:** Mention any one way Christians can use their wealth to appreciate God their creator.

.....

**Or:** Mention any one way Christians can use their wealth to appreciate Allah their creator.

.....

## SECTION B

41) a) What is waste management?

.....  
.....

b) State any two methods of managing wastes.

i) .....

ii) .....

c) Which body in Uganda is responsible for sewage management in Uganda?

.....

42) a) Mention any two historical sites located on the shores of Lake Victoria in Uganda.

i) .....

ii) .....

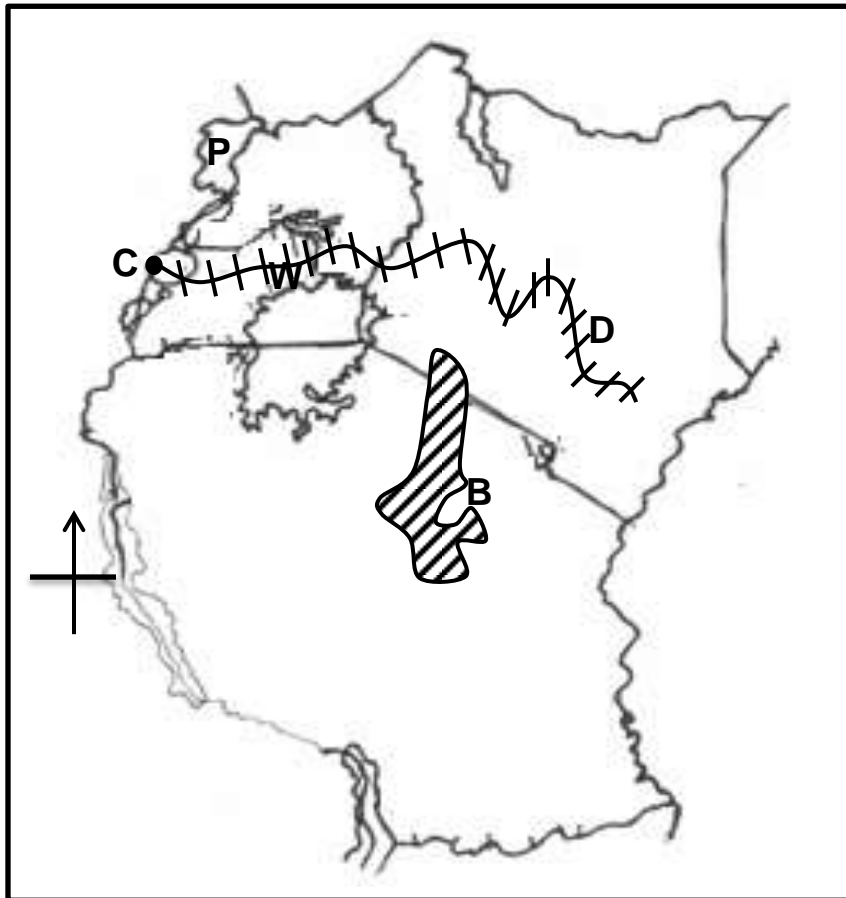
b) State any one historical sites promoting economic development in African countries?

.....

c) State any one historical similarity between cultural sites and kingdoms.

.....

43) **Study the sketch map of East African below and answer question that follow.**



a) Name the National game park marked B.

.....

- b) Which cash crop is mainly grown in a place marked P?  
.....
- c) Why was the railway line marked D constructed up to town C?  
.....
- d) Mention the forest found on the place marked W on the map above.  
.....
- 44) a) What is democracy?  
.....  
.....
- b) State two ways in which democracy is practiced in Uganda.  
i) .....  
ii) .....
- c) Mention one way people mis-use democracy today.  
.....
- 45) a) Name the most important resource in the environment.  
.....
- b) Give any one reason why minerals are referred to as resources.  
.....
- c) How do people benefit from climate as a resource?  
.....
- d) What are renewable resources?  
.....  
.....
- 46) a) State two factors that cause different vegetation zones in Africa.  
i) .....  
ii) .....
- b) Give two ways the tourism industry is important in a country.  
i) .....  
ii) .....
- 47) a) What is a land locked country?  
.....  
.....
- b) Mention any two countries in East Africa that is not landlocked.  
i) .....  
ii) .....
- c) Give one advantage of non-landlocked countries over land locked countries.  
.....
- 48) a) Mention two types of deserts found in Africa.  
i) .....
-

ii) .....  
b) Give any two reasons why living in a desert can be extremely difficult for human beings.

i) .....  
ii) .....

49) Explain the following terms.

i) Population density  
.....  
.....

ii) Population growth  
.....  
.....

b) State any two factors that lead to population growth in an area.  
i) .....  
ii) .....

50) a) Mention any two factors that lead to population growth in an area.

i) .....  
ii) .....  
b) Give any two factors that influenced the settlement of people of long ago.\

i) .....  
ii) .....

**For each of the questions 51 to 55 answer Either Christian or Islamic question but not both. No marks will be awarded to candidates who attempt both alternatives in a particular number.**

51) **Either:** Mention any two examples of morals and virtues in Christianity.

i) .....  
ii) .....

**Or:** Write any two importance of morals and virtues.

i) .....  
ii) .....

52) **Either:** a) State any two types of Christian prayers.

i) .....  
ii) .....

b) Write two reasons why it's important to pray before we go to bed.

i) .....  
ii) .....

**Or:** a) Mention any types of Islamic prayers.

.....

b) Write two reasons why it's important to pray before we go to bed.

i) .....

ii) .....

53) **Either:** a) Give any two reasons why It's not good to worship small gods today.

i) .....

ii) .....

b) Give any two reasons why witchcraft is discouraged in our Christian community today.

i) .....

ii) .....

**Or:** a) State any two reasons why it's not good to worship small gods today.

i) .....

ii) .....

b) Mention any two reasons why witchcraft is discouraged in our Islamic communities today.

i) .....

ii) .....

54) **Either:** a) State any two ways churches have created employment to most people in Uganda today.

i) .....

ii) .....

b) Give any two ways churches solve the challenge of lack of enough funds today.

i) .....

ii) .....

**Or:** a) State any two ways mosques have created employment to most people in Uganda today.

i) .....

ii) .....

b) State any two ways mosques solve the challenge of lack of enough funds today.

i) .....

ii) .....

55) **FOR BOTH CANDIDATES.**

a) Give any two ways in which human beings are different from the rest of the creation.

i) .....

ii) .....

b) Mention any two ways in which we can care for the creation.


i) .....

ii) .....

\*\*\*\*END\*\*\*\*

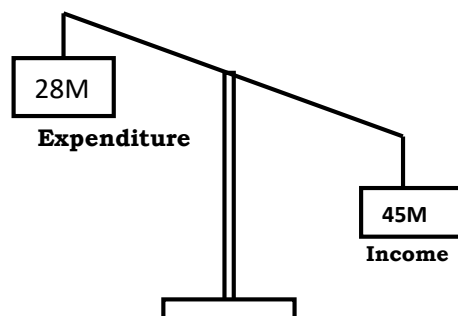
## **SECTION A**

1. Name the island country of Africa crossed by the Tropic of Capricorn.  
.....
2. Mention any one source of materials used to make mats.  
.....
3. Which body is responsible for providing security to animals in national game parks?  
.....
4. Give any one importance of a museum to a country.  
.....
5. Why does the leeward side of a mountain receive little rainfall?  
.....
6. In which way are civic leaders chosen in a district?  
.....
7. State any one way in which immunisation against killer diseases has increased population growth.  
.....
8. Why should people be encouraged to use energy saving stoves in Uganda?  
.....
9. In which way have Ugandans benefited from the East African community?  
.....
10. Draw a map symbol of a canal in the space provided below.



11. Name the mineral that is used to make glass.  
.....
12. In which direction will Sarah be moving in the morning, if her shadow appears on her left-hand side?  
.....
13. Why do people in Equatorial regions build houses with slanting roofs?  
.....
14. State any one way in which an oasis is important to the people who live in the Sahara Desert.  
.....
15. Give any one bad act that can affect the life of a child.  
.....
16. What is population density?  
.....
17. Why did the River-Lake nilotes change from pastoralism to mixed farming?  
.....
18. Which group of people introduced iron smelting in Uganda?  
.....

**Study the diagram below and answer questions 19 and 20.**



19. What type of budget is shown in the diagram above?  
.....

20. Give any one reason to support your answer in (19) above.  
.....
21. How is Lake Kyoga different from Lake Albert in terms of their formation?  
.....  
.....
22. Give any one way in which the maintenance of feeder roads can promote trade in Uganda.  
.....
23. Name the official on the Local Council I executive committee responsible for writing minutes and keeping records.  
.....
24. Give any one importance of the Uganda National Anthem.  
.....
25. Mention any one item of trade that was taken by the Arabs from Buganda.  
.....
26. State any one way in which land is polluted.  
.....
27. Why did Dr. Kwame Nkrumah organise a Pan-African meeting in Ghana in 1958?  
.....
28. How is cattle useful to the Fulani who live in northern Nigeria?  
.....
29. Give any one reason why the government of Uganda introduced Universal Primary Education (UPE).  
.....



30. Name the United Nations agency that helps refugees.  
.....
31. Give any one human activity which promotes vegetation growth in an area.  
.....
32. State any one way in which Africans protested against colonial rule.  
.....
33. Give any one reason why a good government should encourage democracy.  
.....
34. How did early man benefit from iron tools?  
.....
35. What does the handshake at the bottom of the East African Community emblem represent?  
.....

**FOR QUESTIONS 36 TO 40, ANSWER EITHER THE CHRISTIAN OR ISLAMIC QUESTION BUT NOT BOTH.**

36. **Either:** What was the work of Moses before he was called by God?  
.....
- Or:** What was the work of Musa before he was called by Allah?  
.....
37. **Either :** Give any one reason why Christians use water during baptism.  
.....
- Or:** Give any one reason why Muslims use water during ablution.  
.....

38. **Either** : Why did Jesus Christ turn water into wine?

.....

**Or:** Why did Prophet Muhammad split the moon?

.....

39. **Either** : How is reconciliation important in Christianity?

.....

**Or:** How is reconciliation important in Islam?

.....

40. **Either:** Why did God send His messages through prophets?

.....

**Or:** Why did Allah send His messages through prophets?

.....

### **SECTION B**

41(a) Name the first two Christian missionaries to arrive in East Africa.

(i)..... (ii).....

(b) Give any two ways in which the people of East Africa supported missionary work.

(i).....

(ii).....

42(a) Name any one crop grown on plantations in Uganda.

.....

(b) Give any one importance of plantation farming.

.....

(c) State any two ways in which plantation farming can be promoted in Uganda.

(i) .....

(ii).....

43(a) Mention the system of government where political parties compete to gain control of the government.

.....

(b) Give any two advantages of the system named in (a) above.

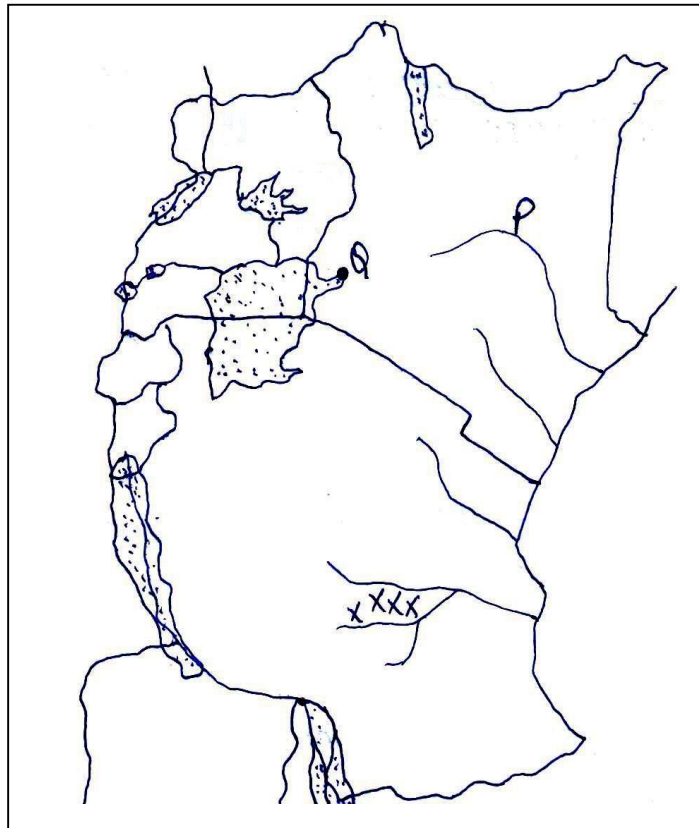
(i).....

(ii).....

(c) State any one negative effect of the above named system.

.....

44. **Study the map of East Africa below and answer the questions that follow.**



(a) Name the river marked with letter P.

CHAGUA

.....

(b) Mention any one economic activity carried out at Port Q.

.....

(c) State any one factor that favour the growth of sugarcane in area marked **xxxx** .

.....

(d) Use letter **W** to show the Albert Nile on the map.

45(a) Which organ of the African Union is responsible for the day-to-day activities?

.....

(b) Give any two achievements of the African Union.

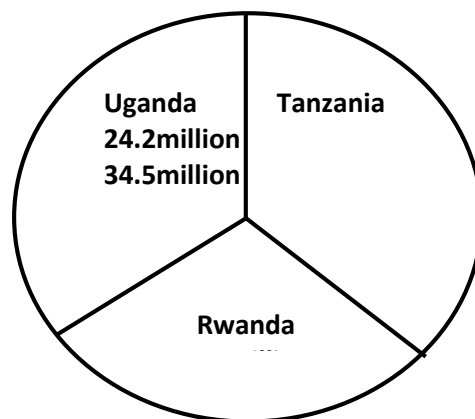
(i).....

(ii).....

(c) State any one problem faced by the African Union.

.....

46. **The pie-chart below shows the population censuses of three countries in 2002.**



(a) Which country had the highest number of people in 2002?

.....

(b) Calculate the range of population.

(c) What advantage did Rwanda have over Uganda?

.....

(d) Mention any one disadvantage of Tanzania population in 2002.

.....

47(a) Give any two reasons why districts are divided into sub-countries.

(i).....

(ii).....

(b) State any one problem faced by districts in meeting needs of people.

.....

(c) Which ministry in Uganda is responsible for creating local administrative units?

.....

48(a) Who signed the 1900 Buganda Agreement on behalf of the British?

.....

(b) State any two terms of the 1900 Buganda Agreement.

(i).....

(ii).....

(c) Why did the British sign the 1900 Buganda Agreement?

.....

49(a) Give any two reasons why the Bantu left their cradle land.

(i).....

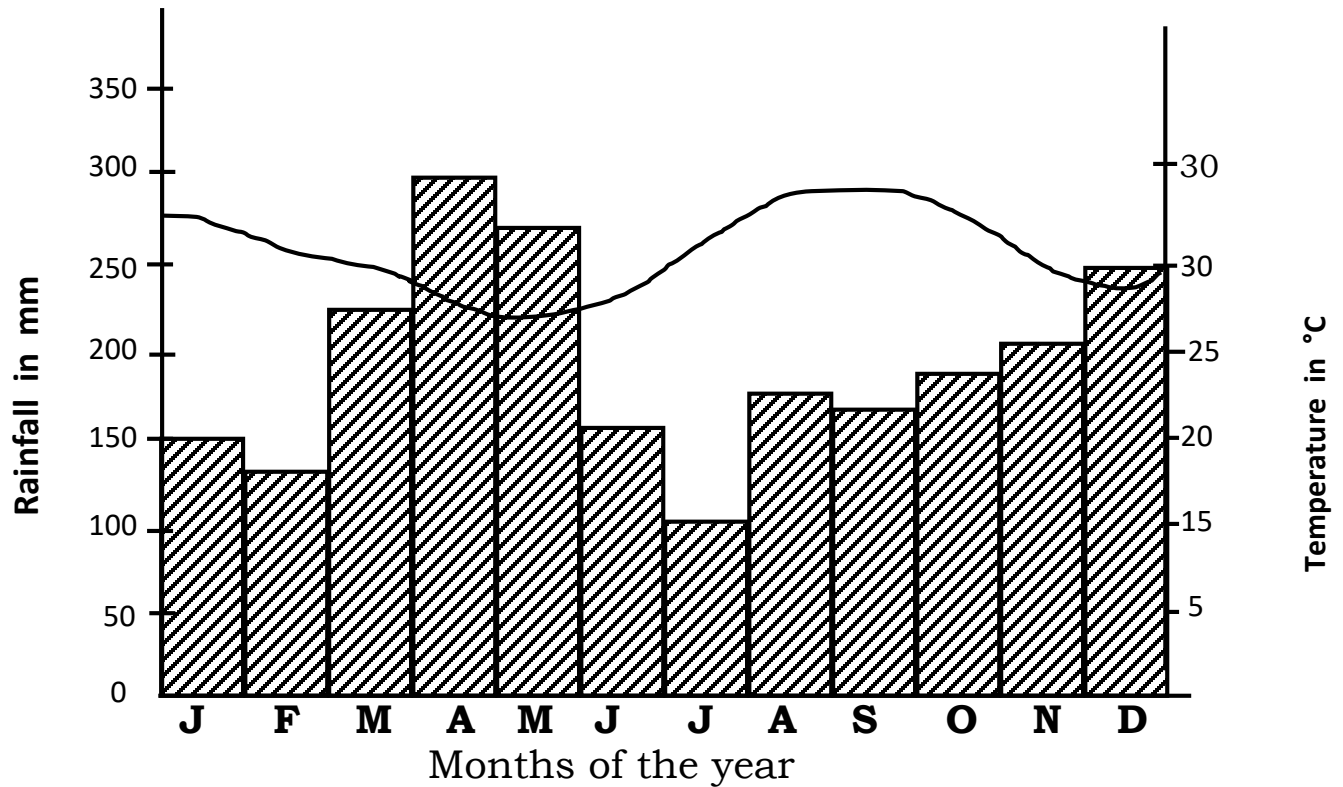
(ii).....

(b) Give any one factor that influenced the settlement of tribal groups in East Africa.

.....

- (c) State any one problem that was faced by the tribal groups during their movement.
- .....

50. **Study the climatic graph of place X carefully and answer the questions that follow.**



- (a) Which month had the highest amount of rainfall?  
.....
- (b) How much rainfall was received in July?  
.....
- (c) Name the type of climate experienced in place X.  
.....
- (d) Give any one reason why place X is suitable for crop growing.  
.....

**FOR QUESTIONS 51 TO 55, ANSWER EITHER CHRISTIANITY OR ISLAM BUT NOT BOTH.**

**51. Either:**

(a) Name the day when God will charge people according to their deeds.

.....

(b) Mention two things that will happen on the day named in (a) above.

(i).....

(ii).....

(c) How is the day in (a) above important in Christianity?

.....

**Or:**

(a) Name the day when Allah will charge people according to their deeds.

.....

(b) Mention two things that will happen on the day named in (a) above.

(i).....

(ii).....

(c) How is the day in (a) above important in Islam?

.....

**52. Either:**

(a) Who was the earthly father of Jesus Christ?

.....

(b) Give any two reasons why Jesus Christ was loved as a child.

(i) .....

(ii) .....

(c) Why was Jesus Christ baptised?

.....

**Or:**

- (a) Who was the father of Prophet Muhammad (PBUH)?  
.....
- (b) Give any two reasons why Prophet Muhammad was loved as a child.  
(i) .....  
(ii) .....
- (c) Why was Prophet Muhammad circumcised?  
.....

53. **Either:**

- (a) Who is a martyr according to Christianity?  
.....
- (b) Give any two lessons Christians learn from martyrs.  
(i) .....  
(ii) .....
- (c) Why do Christians go for pilgrimage?  
.....

**Or:**

- (a) Who is a martyr according to Islam?  
.....
- (b) Give any two lessons Muslims learn from martyrs.  
(i) .....  
(ii) .....
- (c) Why do Muslims go for pilgrimage?  
.....

54. **Either:**

- (a) Mention the message angel Gabriel brought to Zecharia.  
.....
- (b) Why did Zecharia doubt the message?  
.....
- (c) What happened to Zecharia when he doubted the message?  
.....



- (d) What lesson do you learn from the story of Zecharia and angel Gabriel?

.....

**Or:**

- (a) Mention the message angel Jibril brought to Zakariya.

.....

- (b) Why did Zakariya doubt the message?

.....

- (c) What happened to Zakariya when he doubted the message?

.....

- (d) What lesson do you learn from the story of Zakariya and angel Jibril?

.....

55. **Either:**

“Forgive them, Father! They don’t know what they are doing.”  
(Luke 23:34)

- (a) Who said the above words?

.....

- (b) Why did the above mentioned person say so?

.....

- (c) Mention any two things you learn from the above quotation.

(i).....

(ii).....

**Or:**

“These people do not know what I tell them is the truth; they are doing this because they think it is the right thing to do. Don’t be angry with them and don’t punish them but open their eyes to see the truth and help them to accept it.” (Narrated by Muslim)

- (a) Who said the above words?

.....

- (b) Why did the above mentioned person say so?

.....

(c) Mention any two things you learn from the above quotation.

(i).....

(ii).....

SECTION A: (40 marks)

1. Name any one animal kept as a pet.

---

2. State one way in which people in your community get their needs.

---

3. Name the sea that separates Africa from Europe.

---

4. Why should maps have a key?

---

5. What should a motorist do when he comes cross the road sign below?



---

6. Give any one cause of deforestation in Uganda today.

---

7. Why should Uganda hold regular, free and fair election?

---

8. Mention one danger of promoting child labour.

---

9. Give any one way how people protect themselves against bad weather.

---

10. State one way in which time is managed at school.

---

11. How did the people of East Africa benefit from the coming of Arabs?

---

12. What is a continent?

---

13. Which lake was created as a result of the construction of Akasombo dam?

---

14. Draw and name one handicraft made from banana fibres.

---

15. Which natural vegetation zone is described as evergreen?

---

16. How did the immigration of the Bantu affect the Bushmen?

---

17. Why does the government take ten years to conduct population census?

---

18. Give one problem faced by people living in desert areas.

---

19. Mention one traditional method of catching fish in Uganda.

---

20. Write down one problem caused by poaching.

---

21. Name the European explorer who first crossed the Masai land to Mt. Elgon.

---

22. Give one importance of having a granary at home.

---

23. Mention one importance of preserving culture in the community.

---

24. Why should schools have fences on them?

---

25. State one way of locating places on a map.

---

26. How important are waterfalls?

---

27. What main activity is carried out by people in semi - arid areas?

---

28. Name any one type of Ocean currents in Africa.

---

29. State one cause of high population in urban areas.

---

30. Write one factor that affects vegetation distribution in Africa.

---

31. Which continent lies to the south west of Africa?

---

32. Name the political party that led Tanganyika to independence.

---

33. Give one danger of heavy rainfall in an area.

---

34.State one cause for the disintegration of the East Africa Community in 1977.

35.Which activity marked the end of Mesolithic period?

*For questions 36 – 40, answer Either Christianity Or Islamic but not both.*

36.Either: Name the king of Israel who built the first temple in Jerusalem.

Or: Name the Islamic Prophet who built the Kaabah.

37.Either: Give one benefit of giving alms in church.

Or: State one advantage of alms giving in Islam.

38.Either: Mention one way in which people reconcile in Christianity.

Or: Write one way in which people reconcile in Islam.

39.Either: What did Jesus teach us to do to our neighbour?

Or: What did Prophet Muhammad teach us to do our neighbour?

40.Either: State one danger of hypocrisy.

Or: State one danger of kufr.

#### **SECTION B: 60 MARKS**

41. a) What are legends?

b) What caused separation between Gipiir and Labongo?

c) Give two lessons you learn from the legend of Gipiir and Labongo.

i) \_\_\_\_\_

ii) \_\_\_\_\_

42.a) Mention the two divisions of land that were introduced by the 1900 Buganda Agreement.

i) \_\_\_\_\_

ii) \_\_\_\_\_

b) Why were the peasants in Buganda unhappy with the above agreement?

c) Apart from the above agreement, mention any other colonial agreement in Uganda.

43.a) Write two social services provided by the government.

i) \_\_\_\_\_

ii) \_\_\_\_\_

b) Give two problems faced by the government in providing social services.

i) \_\_\_\_\_

ii) \_\_\_\_\_

44.a) Give any two causes of climate change in East Africa.

i) \_\_\_\_\_

ii) \_\_\_\_\_

b) Mention two ways of fighting climate change.

i) \_\_\_\_\_

ii) \_\_\_\_\_

45. Draw a map of Uganda and on it, name and mark the following: Port Buitaba, River Katonga and Kidepo national Game park.

46.a) What are road safety rules?

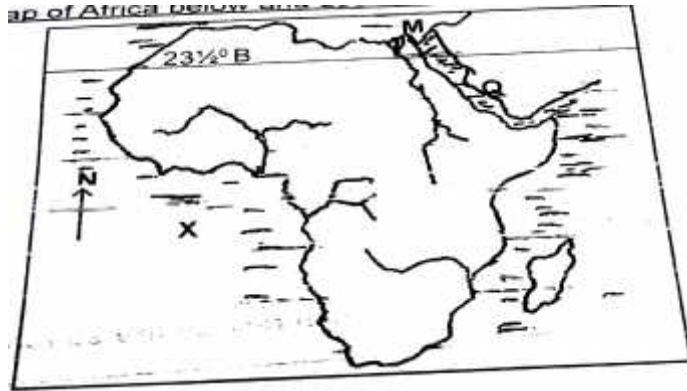
b) State the importance of road safety rules.

c) Give two ways in which pedestrians can keep safe on the road.

i) \_\_\_\_\_

ii) \_\_\_\_\_

47. Study the map of Africa below and use it to answer the questions that follow.



a) Name the water body marked with letters;

i) X \_\_\_\_\_

ii) Q \_\_\_\_\_

b) State the importance of feature labeled M to the economy of Egypt.

c) Mention one country crossed by line latitude marked B.

48.a) What is a national constitution?

b) State two ways in which human rights are violated in Uganda.

i) \_\_\_\_\_

ii) \_\_\_\_\_

c) Write one benefit of a national constitution.

49.a) What title is given to the leader of all civil servants in a ministry?

b) Apart from civil servants, mention two other groups of people found in the executive arm of government.

i) \_\_\_\_\_

ii) \_\_\_\_\_

c) Besides a speaker of parliament, who else chairs parliamentary debate?

---

50. Match the items in A with those in B.

Group A

DVO

O.C

CGP

URA

Group B

supervises police officers at a police station.

promotes animal health in a district.

collects tax in Uganda

heads the prison service

i) DVO: \_\_\_\_\_

ii) O.C: \_\_\_\_\_

iii) CGD: \_\_\_\_\_

iv) URA: \_\_\_\_\_

***For questions 51 - 55, answer either Christianity or Islam but not both.***

51. Either: a) Write one way in which Christians suffer today.

\_\_\_\_\_

b) Give two effects of suffering.

i) \_\_\_\_\_

ii) \_\_\_\_\_

c) Mention one way in which a Christian can reduce the suffering of others.

\_\_\_\_\_

Or: a) Give one way in which Muslims suffer today.

\_\_\_\_\_

b) State any two effects of suffering.

i) \_\_\_\_\_

ii) \_\_\_\_\_

c) Give any one way in which a Muslim can reduce the suffering of others.

\_\_\_\_\_

52. Either: a) Give the meaning of the term Passover.

\_\_\_\_\_

b) Write the last punishment God gave the Egyptians before releasing the Israelites.

\_\_\_\_\_

c) Give two ways in which Israelites benefited from the Exodus event.

i) \_\_\_\_\_

ii) \_\_\_\_\_

Or: a) Give the meaning of the term Hegira.

\_\_\_\_\_

b) Which people did Prophet Muhammad (SAW) go to after leaving Mecca in 622AD?

\_\_\_\_\_



c) Mention two ways in which Islam benefitted from the Hegira.

i) \_\_\_\_\_

ii) \_\_\_\_\_

53. Either: "You shall have no other gods before me" Exodus 20:3.

a) Who said those words?

\_\_\_\_\_

b) To whom were those words said?

\_\_\_\_\_

c) State two benefits of respecting God.

i) \_\_\_\_\_

ii) \_\_\_\_\_

Or: "Hallah! There is no god but He: Al Baqarah 265.

a) Who said those words?

\_\_\_\_\_

b) To whom were those words said?

\_\_\_\_\_

c) Give two benefits of respecting Allah.

i) \_\_\_\_\_

ii) \_\_\_\_\_

54. Either: a) Who is a neighbour according to Christianity

\_\_\_\_\_

b) Why should a Christian respect his neighbour?

\_\_\_\_\_

c) Give two ways of treating your neighbour fairly.

i) \_\_\_\_\_

ii) \_\_\_\_\_

Or: a) Who is a neighbour according to Islam?

\_\_\_\_\_

b) Why should a Muslim respect his neighbour?

\_\_\_\_\_

c) Give two ways of treating your neighbour fairly.

i) \_\_\_\_\_

ii) \_\_\_\_\_

55. Either: a) Write any two Christian values.

i) \_\_\_\_\_

ii) \_\_\_\_\_

b) State two importance of having Christian values.

i) \_\_\_\_\_

ii) \_\_\_\_\_

Or: a) Mention any two important values in Islam.

i) \_\_\_\_\_

ii) \_\_\_\_\_

b) Give two ways in which Islamic values are important.

i) \_\_\_\_\_

ii) \_\_\_\_\_





property of Education giants, call  
us on 0758924184/0762550123