



THE CRANES EXAMINATIONS BOARD

" Ever Forward "

EMAIL:thecranesexaminations@gmail.com

KANSANGA-KAMPALA: 0762136454

**P.4 HOME WORK BOOKLET TERM ONE
2025**


HOMework PRIMARY FOUR BOOKLET

SCHOOL NAME:.....

PUPIL'S NAME:.....

PARENT'S NAME:.....

CONTACT:.....



TR's NAME:.....

CLASS TR'S COMMENT:.....

ABOUT THE CRANES EXAMINATIONS BOARD:

- We are located in Kansanga-Kampala on GABA ROAD just near GALAXY F.M
- We have **HIRED UNEB EXAMINERS** from the best performing schools. That is:-
 1. Muwonge Ahmed (EXAMINER-MTC) GET US ON: EMAIL: thecranesexamination@gmail.com
OR CALL ON: 0762136454
 2. Mpoza Emmie (EXAMINER-SST)
 3. Mukisa David (EXAMINER-SCIENCE)
 4. Ochudanga Amos (ENGLISH-EXAMINER)



Date: _____

(WEEK THREE)

ENGLISH

1. Give the plural form of these words.

chair _____

leaf _____

dish _____

baby _____

mosquito _____

2. Fill in the gaps with “a”, “an” and “the” to complete the sentences.

a) _____ sun shines brightly.

b) He bought _____ orange.

c) That teacher has _____ inkpot.

d) The sun sets in _____ West.

e) Our church is opposite _____ market.

3. Fill in the gaps with the opposite of words in brackets.

a) Our grandmothers are very _____ (young)

b) The cow was under the _____ tree (tall)

c) The boy went _____ the hill. (down)

d) The _____ man bought a new car. (poor)

e) Mummy parked the car _____ the garage. (inside)

Parents' comment: _____

Signature: _____

Date: _____
(WEEK THREE)

SCIENCE

1. What is food?

2. Mention any two uses of water at school.

i) _____

ii) _____

3. Why do we give first aid?

4. Name any two components of air.

i) _____

ii) _____

5. Name any three disease vectors that spreads disease to people.

i) _____

ii) _____

iii) _____

6. What is mulching?

Parents' comment: _____

Signature: _____

Date: _____

(WEEK THREE)

SOCIAL STUDIES

1. What is the name of your school?

2. In which district is your school found?

3. In which division is your school found?

4. Why do children go to school?

5. Who is a child?

6. Mention three symbols of a school.

a) _____

b) _____

c) _____

7. Identify three items used to clean your classroom.

a) _____

b) _____

c) _____

8. Name two problems faced by children on their way to school.

i) _____

ii) _____

9. Give two reasons why people do plant trees in their compounds.

i) _____

ii) _____

Parents' comment: _____

Signature: _____

Date: _____

(WEEK THREE)

MATHEMATICS

1. Add: $208 + 42$

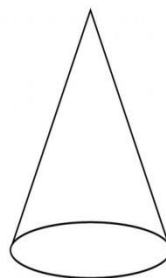
2. What is the place value of 6 in the figure 2684?

3. Okello had 42 mangoes and gave 12 to his friend John. How many mangoes did Okello remain with?

4. find the next number in the sequence
0, 2, 4, 6, 8, 10, _____, _____

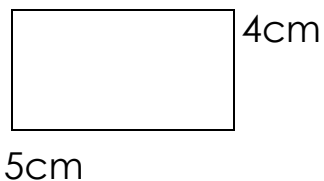
5. Write 462 in words.

6. Name the shape below.



7. Add: $\frac{2}{4} + \frac{1}{4} =$

8. Find the area of the figure below.



9.  represents 2 cups. How many cup are represented in the following pictures      ?

10. One cow has 4 legs. How many legs to do 6 cows have?

Parents' comment: _____

Signature: _____

Date: _____

(WEEK THREE)

RELIGIOUS EDUCATION

1. In which book of the bible do we learn the story of creation?

2. What did God create on the following days?

a) First day _____

b) Second day _____

c) Third day _____

d) Fourth day _____

e) Fifth day _____

f) Sixth day _____

3. Where did God put the first people h created?

4. Identify two importance for forgiving.

i) _____

ii) _____

Parents' comment: _____

Signature: _____

Date: _____
(WEEK FOUR)

ENGLISH

1. Fill in the missing letters.

p___lite

bla____k

sm____rt

ki____d

Go__d

2. Fill in the black space with a suitable word given in the brackets.

a) Annet is a _____ girl. (brown ,green)

b) Bagota is a _____ pupil. (driver ,polite)

c) Hellen has _____ hair.(black ,kind)

d) That man is _____. (ugly, wisdom)

e) Rose is a _____ girl. (bright, dim)

f) You are a _____ person. (playing, smart)

g) Dan is a _____ boy. (green, tall)

h) Gloria is an _____ girl. (honest, bad)

i) Our uncle is a _____ man. (narrow, kind)

j) Some girls have _____ legs. (thin, clever)

Parents' comment: _____

Signature: _____

Date: _____
(WEEK FOUR)

SCIENCE

1. What is an accident?

2. Write any three common accidents at home.

- i) _____
- ii) _____
- iii) _____

3. What are flowering plants?

4. Mention the two systems of a plant.

- i) _____
- ii) _____

5. How are leaves useful to man?

6. Draw a serrated simple leaf in the space below.



7. Mention one plant that stores food in the leaves.

Parents' comment: _____

Signature: _____

Date: _____

(WEEK FOUR)

SOCIAL STUDIES

1. Write the safest place to keep money.

2. Name the domestic animal kept to guard our homes.

3. Mention the cloud that gives us rain.

4. Mention the season when most farmers harvest their cereal crops.

5. Give any four examples of social services.

i) _____

ii) _____

iii) _____

iv) _____

6. How is a police important in our community?

7. Name two local material used to make playing objects.

Parents' comment: _____

Signature: _____

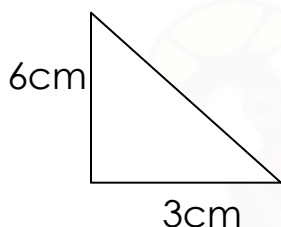
Date: _____
(WEEK FOUR)

MATHEMATICS

1. Workout:
$$\begin{array}{r} 286 \\ - 43 \\ \hline \end{array}$$

2. Find the value of 2 in 284.


3. Find the area of the figure below.



4. Find the cost of 3 books if one book costs sh. 1500.

5. Subtract $\frac{7}{12} - \frac{5}{12}$

6. Shade $\frac{2}{6}$ in the figure.



7. Find the missing $\square + 7 = 10$

8. Write 12 in roman numerals.

9. Add:
$$\begin{array}{r} \text{weeks} \quad \text{days} \\ 2 \quad 2 \\ + 5 \quad 3 \\ \hline \end{array}$$

10. How many days are in two weeks?

Date: _____
(WEEK FOUR)

RELIGIOUS EDUCATION

1. Who baptized Jesus?

2. What shows that the father of the prodigal son had forgiven him?

3. Mention four importance of forgiveness.

i) _____

ii) _____

iii) _____

iv) _____

4. Mention the punishment God gave the following people.

a) Adam _____

b) Eva _____

c) Snake _____

5. On which day did God create the heavenly bodies?

Parents' comment: _____

Signature: _____

Date: _____

(WEEK FIVE)

ENGLISH

1. Fill in the blank spaces with the present simple tense of the verb given in the brackets.

1. Our teacher usually _____ our books. (mark)
2. They _____ news every day. (watch)
3. The cleaner _____ the dustbin every night. (empty)
4. I _____ porridge every morning. (take)
5. We usually _____ our teeth. (brush)
6. The cook _____ beans daily. (cook)
7. My sister _____ T.V every day. (watch)
8. A good teacher _____ pupils every day. (teach)
9. A good child _____ early. (sleep)
10. Our grandfather _____ bad children. (hate)

1. Use the following words to construct meaningful sentences.

- (i) smart _____
- (ii) ugly _____
- (iii) thin _____
- (iv) tall _____
- (v) beautiful _____

Parents' comment: _____

Signature: _____

Date: _____
(WEEK FIVE)

SCIENCE

1. Define the term leaf venation.

2. Mention the two types of leaf venations.

i) _____ ii) _____

3. How are trees useful to animals?

4. Give one way in which transpiration is important to plants.

5. Name the structure plants use for breathing.

6. Name the leaf drawn below.



7. Draw a leaf with parallel leaf venation in the space below.

8. Identify one plant that stores food in roots.

9. Give one reason why some plants climb others.

Parents' comment: _____

Signature: _____

Date: _____

(WEEK FIVE)

SOCIAL STUDIES

1. Write the importance of a compass.

2. Write the four cardinal points of a compass.

i) _____

iii) _____

ii) _____

iii) _____

3. Give the opposite direction of

North _____

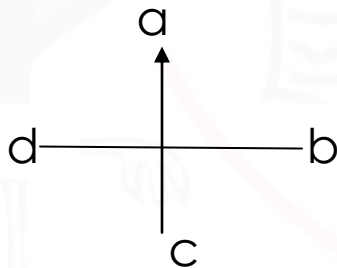
West _____

East _____

South _____

4. What is another name given to semi-cardinal point of a compass?

5. Mention four main cardinal points on a compass



a) _____

c) _____

b) _____

d) _____

6. Identify the opposite direction of.

South West _____

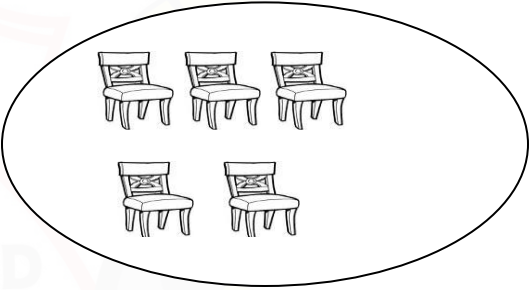
North East _____

Parents' comment: _____

Signature: _____

Date: _____
(WEEK FIVE)

MATHEMATICS

1.	Workout: $42 \div 6$	2.	Draw a set of 5 balls.
3.	Expand 486 using values.	4.	Name the set below. 
5.	Musa went to market and bought the following items. 2kgs of sugar at sh. 5,000 per kg 3bars of soap at sh. 4,500 each 2packets of tea leaves at sh. 500 per packet. 1kg of rice at sh. 4000 per kg.		
a)	How much money did Musa paid to the shop attendant?		

6.	Use =, >, <, to complete the following. a) 8 _____ 4 b) 12 _____ 12 c) 5 _____ 9	7.	Name the fraction below. $\frac{1}{2}$ _____
8.	Multiply 12 X 2	9.	How many months make up a year?
10.	Draw a symbol to represent intersection of set.		

Parents' comment: _____

Signature: _____

Date: _____

(WEEK FIVE)

RELIGIOUS EDUCATION

1. Mention the books of the Bible written by Moses.

2. How did Adam and Eva commit the first sin?

3. By the way which sin did they commit?

4. Give three things which indicate that we were created in God's image.

i) _____

ii) _____

iii) _____

Parents' comment: _____

Signature: _____

Date: _____

(WEEK SIX)

ENGLISH

Re-arrange the letters in the brackets to form correct words.

1. I am an _____ girl. (dientobe)
2. I am a _____ man. (ltal)
3. I am a _____ girl. (rtsma)
4. I am a _____ girl. (blkac)
5. You are an _____ actor. (glyu)
6. I am a _____ boy. (bonrw)
7. He is a _____ king. (dink)
8. She is a _____ girl. (fulbeauti)
9. He is a _____ man. (lipote)
10. You are a _____ pupil. (dab)

Describe the people mentioned in the riddles.

- a) I mend shoes .What am I? _____
- b) I work in a hospital, I treat sick people. What am I? _____
- c) I have big gardens, I grow crops and keep animals .What am I?

- d) I build houses, I use brick and cement. What am I?

- e) I work at a garage. I repair vehicles. What am I? _____

Parents' comment: _____

Signature: _____

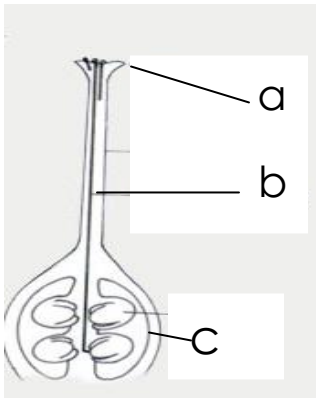
Date: _____
(WEEK SIX)

SCIENCE

1. What do we call swollen underground stems which store food?

2. How are sepals important to a young flower?

3. Name the parts of the pistil.



a _____

b _____

c _____

4. What is pollination?

5. Mention any one type of pollination you know.

6. Give any three agents of pollination.

i) _____

ii) _____

iii) _____

Parents' comment: _____

Signature: _____

Date: _____

(WEEK SIX)

SOCIAL STUDIES

1. Write the major line marked 0°?

2. Identify the use of the following.

a) Title _____

b) Scale _____

c) Compass direction _____




3. Define the following.

a) A map _____

b) A picture _____

4. What are map symbols?

5. Draw the map symbol below.

bridge	swamp	mountain peak	hill
			

Parents' comment: _____

Signature: _____

Date: _____
(WEEK SIX)

MATHEMATICS

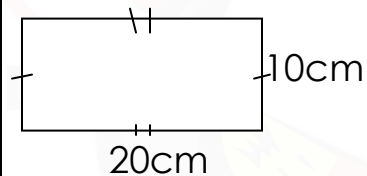
1. Fill in the box.

+ 4 = 13

2. 1kg = 1000gms. How many grams are in 4kg?

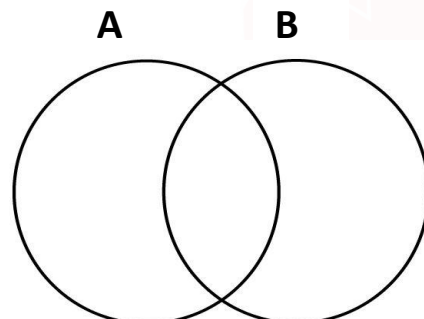
3. Add 7cm + 12cm

4. Find the perimeter of the figure below.



5. Daniel is 18years old and Samuel is 14years old. Who is oldest among the two?

6. Set A = {a, b, c, d, e, f}
Set B = {a, e, i, o, u}
Represent the above information on a venn diagram.



7. Write down the days in a week.

8. How many cups of $\frac{1}{2}$ litre can be got out of 5litre jerrycan?

9. Share 12 mangoes among 6girls.

10. Name the sixth month of the year.

Parents' comment: _____

Signature: _____

Date: _____

(WEEK SIX)

RELIGIOUS EDUCATION

1. Define the following.

a) Covenant _____

b) Ark _____

c) Sacrifice _____

d) Exodus _____

e) Genesis _____

f) Shepherd _____

g) Commandments _____

h) Sabbath _____

i) Create _____

Parents' comment: _____

Signature: _____

Date: _____

(WEEK SEVEN)

ENGLISH

Complete the sentences with a correct word.

1. Some are good and others are _____
2. Some are kind and others are _____
3. Some are strong and others are _____
4. Some are harmful and others are _____
5. Some are present and other are _____
6. Some are hard working and others are _____
7. Some are beautiful and others are _____
8. Some are rich and others are _____
9. Some are clever and others are _____
10. Some are short and others are _____
11. Some are careful and others are _____
12. Some are fast and others are _____
13. Some are happy and others are _____
14. Some are dirty and others are _____
15. Some are late and others are _____

Parents' comment: _____

Signature: _____

Date: _____
(WEEK SEVEN)

SCIENCE

1. Define a seed.

2. Give two types/classes of seeds giving an example of each.

Type

example

i) _____

ii) _____

3. How is a testa important on a maize grain?

4. What is germination?

5. Write any 3 examples of seeds that undergo epigeal germination.

i) _____

ii) _____

iii) _____

Parents' comment: _____

Signature: _____

Date: _____
(WEEK SEVEN)

SOCIAL STUDIES

1. Write KCCA in full.

2. Give two island districts found in Uganda.

i) _____

ii) _____

3. Mention any four roles of KCCA.

a) _____

b) _____

c) _____

4. On which hill is the headquarters of KCCA found?

5. List two reasons why Kampala city is divided into divisions.

a) _____

b) _____

6. State any two problems face by Kampala city.

a) _____

b) _____

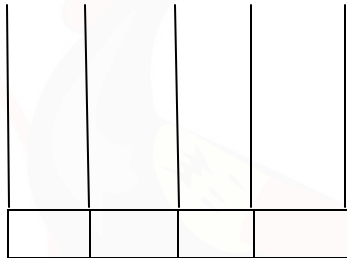
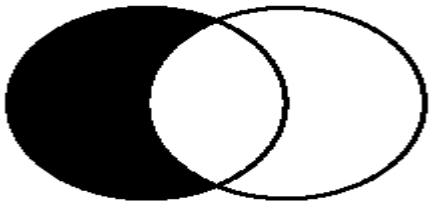
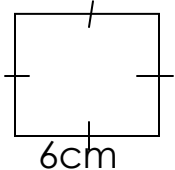

7. Name the biggest referral hospital in your district.

Parents' comment: _____

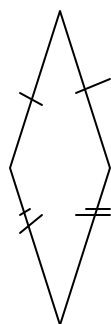
Signature: _____

Date: _____
(WEEK SEVEN)

MATHEMATICS

1.	Add: $\frac{2}{5} + \frac{2}{5} =$	2.	Change 3 hours to minutes. (1 hour = 60 minutes)
3.	Moses is 20 years now. In which year was he born?	4.	Represent the year we are in on the abacus. 
5.	Name the shaded region on the venn diagram below. 	6.	Fill in the missing spaces with the correct operation signs +, -, x, ÷. a) 4 _____ 3 = 12 b) 5 _____ 5 = 1 c) 12 _____ 6 = 6
7.	Find the area of the figure below. 	8.	Find the missing number in the box.  + 3 = 12

9. Name the shape below.



10. Write 9464 in words.

Parents' comment: _____

Signature: _____

EVER
FORWARD

WISDOM BEGETS KNOWLEDGE

Date: _____
(WEEK SEVEN)

RELIGIOUS EDUCATION

1. Who is believed to be the grandfather of all nations?

2. Mention the first two kings of Israel in order.

i) _____

ii) _____

3. State the three promises to Noah.

i) _____

ii) _____

iii) _____

4. Give two promises of God to Abraham.

i) _____

ii) _____

5. Whose wife was turned into a pillar of fire?

6. How did God destroy sinner during Abraham's time?

Parents' comment: _____

Signature: _____

Date: _____
(WEEK EIGHT)

ENGLISH

1. Complete the table below.

Positive	Comparative	Superlative
small		smallest
young	younger	
strong		
happy		
old		older
good	better	
handsome		most handsome
hot		
brave		bravest

2. Use the correct form of the possessive pronoun to fill in the black space.

a) The book is _____ (my)

b) The ruler is _____ (her)

c) The ball is _____ (he)

Parents' comment: _____

Signature: _____

Date: _____

(WEEK EIGHT)

SCIENCE

1. Give two importance of plants in the environment.

i) _____

ii) _____

2. Mention two examples of crops commonly grown in your community.

i) _____

ii) _____

3. Differentiate between annual crops and perennial crop.

4. Mention 3 ways how farmers can care for garden tools.

i) _____

ii) _____

iii) _____

5. What is the garden tool used for digging?

6. At what time of the day should transplanting be carried out?

Parents' comment: _____

Signature: _____

Date: _____

(WEEK EIGHT)

SOCIAL STUDIES

1. What is another name given to physical features?

2. Mention four examples of physical features.

a) _____

b) _____

3. Define the following terms.

Land forms _____

Relief _____

4. Write down any four mountains in Uganda.

a) _____

b) _____

c) _____

d) _____

5. List any two examples of relief features.

a) _____

b) _____

6. Name the peaks of the following mountains.

A) Mt. Rwenzori _____

B) Mt. Mufumbiro _____

Parents' comment: _____

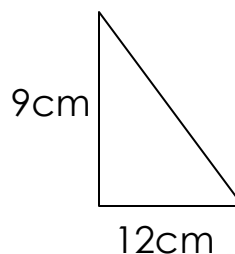
Signature: _____

Date: _____
(WEEK EIGHT)

MATHEMATICS

1. Workout: $\frac{12}{19} - \frac{6}{19}$

2. Find the area of the figure below.



3. Study the table below showing the number of animals for 5 men in the village.

Name of men	Number of animals
Thomas	201
Juma	47
Amos	334
Kasadha	96
Swengere	111

a) Who has the biggest number of animals

b) Find the difference between Amos's animals and Swengere's animals.

c) How many animals did they have altogether?

4. Change $2\frac{1}{4}$ hours to minutes.

5. Expand 524 using place values.

6. What is 26 in roman numerals?

7. John had 124 sheep. He sold 24 sheep. How many did he remain with?

8. Write nine thousand four hundred sixty four in figures.

Parents' comment: _____

Signature: _____

Date: _____
(WEEK EIGHT)

RELIGIOUS EDUCATION

1. Mention two problems Israel confronted during exodus.

a) _____

b) _____

2. List down six punishments god gave the Egyptians during the rejection of pharaoh to let the Israel go.

a) _____

b) _____

c) _____

d) _____

e) _____

f) _____

3. Give two ways how Abraham expressed his faithfulness to God.

a) _____

b) _____

Parents' comment: _____

Signature: _____

Date: _____

(WEEK NINE)

ENGLISH



1. Write true or false for the given statements.

- a) Some plates are round _____.
- b) A square has four sides _____.
- c) A small needle is very heavy _____.
- d) Triangles have fire sides _____.
- e) An egg is oval _____.
- f) Our blackboard is round _____.
- g) We wear clean clothes _____.
- h) We wear clean clothes _____.

2. List four things in your class which are rectangular.

- i) _____
- ii) _____
- iii) _____
- iv) _____

3. Draw and name three things at home which are round.

Parents' comment: _____

Signature: _____

Date: _____

(WEEK NINE)

SCIENCE

1. Identify the season in which planting should be carried out.

2. Mention any three advantages of row planting.

i) _____

ii) _____

iii) _____

3. Apart from row planting, name the other type of planting.

4. What is pruning?

5. Mention two garden tools used for pruning.

i) _____

ii) _____

6. Write two importance of pruning.

i) _____

ii) _____

Parents' comment: _____

Signature: _____

Date: _____

(WEEK NINE)

SOCIAL STUDIES

1. Identify any three reasons why there are many people living on the slopes of mountain.

a) _____

b) _____

c) _____

2. Name any four importance of hills.

a) _____

b) _____

c) _____

d) _____

3. List any one important feature found on the following hills.

a) Makere hill _____

b) Nakasero hill _____

4. Name the physical feature that covers the largest part of our district.

5. Give any two importance of valleys.

a) _____

b) _____

6. How are swamps useful to the people in our district?

7. Mention the economic activities carried out in a valley.

i) _____

ii) _____

Parents' comment: _____

Date: _____

(WEEK NINE)

RELIGIOUS EDUCATION

1. Which apostle is remembered for

i) Betraying Jesus Christ _____

ii) Denying Jesus Christ three times _____

iii) Being the most loved apostle _____

iv) Doubting the resurrection of Jesus Christ _____

2. Why are these people remembered?

i) Simon of Cyrene _____

ii) Joseph of Arimathea _____

iii) Mary Magdalene _____

iv) Virgin Mary _____

3. Write the short notes of the following.

i) Mountain Calvary _____

ii) Mountain Olives _____

Parents' comment: _____

Signature: _____

Date: _____

(WEEK TEN)

ENGLISH

1. Re-arrange the sentences to make a good story.

- a) He removed the big ball and gave it to Osamong.
- b) Osamong started fighting for his big ball.
- c) Okwalinga and Osamong used to be very good friends.
- d) Okwalinga chose the ball first.
- e) One day, Okwalinga and osamong decided to go to the market to buy balls.
- f) Osamong said Okwalinga stole his ball.
- g) On their way home, Okwalinga hid his friend's big ball.
- h) The man separated them from fighting.
- i) Osamong chose the big ball.
- j) Immediately a man came and asked what the matter was.

Good story.

- a) _____
- b) _____
- c) _____
- d) _____
- e) _____
- f) _____
- g) _____
- h) _____
- i) _____
- j) _____

Parents' comment: _____

Signature: _____

Date: _____
(WEEK TEN)

SCIENCE

1. How do you understand the term personal hygiene?

2. Mention two ways of promoting personal hygiene.

i) _____

ii) _____

3. Draw these things used to clean our bodies.

soap	sponge	toothbrush	razor blade

4. Define temperature.

5. In which units are the following

a) rainfall _____

b) temperature _____

Parents' comment: _____

Signature: _____

Date: _____
(WEEK TEN)

SOCIAL STUDIES

1. Why do farmers terrace their land?

2. Give any two raw materials man gets from the swamp.

a) _____

b) _____

3. Name the type of rainfall that is received near water bodies.

4. State any two tourist attractions in Kampala.

a) _____

b) _____

5. List any two Lakes found in Kampala district.

a) _____

b) _____

6. Name the Lake where crude oil was discovered.

7. Identify the deepest lake in Uganda.

8. Give two importance of each of the places in our district.

School

a) _____

b) _____

Hospital

a) _____

b) _____

Market

a) _____

b) _____

Parents' comment: _____

Signature: _____

Date _____
(WEEK TEN)

RELIGIOUS EDUCATION

1. Why is Jerusalem an important place in Christianity?

2. Who buried Jesus Christ?

3. Give the meaning of the following.

a) repent _____

b) resurrection _____

c) crucifixion _____

d) earthquake _____

e) betray _____

f) cripple _____

g) messiah _____

h) tomb _____

i) persecute _____

Parents' comment: _____

Signature: _____
