

# SOCIAL STUDIES PLE 2018

## CANDIDATE'S INFORMATION

Index number :

|  |  |  |  |  |  |  |  |  |
|--|--|--|--|--|--|--|--|--|
|  |  |  |  |  |  |  |  |  |
|--|--|--|--|--|--|--|--|--|

Name :

\_\_\_\_\_

Signature :

\_\_\_\_\_

School name :

\_\_\_\_\_

District name :

\_\_\_\_\_

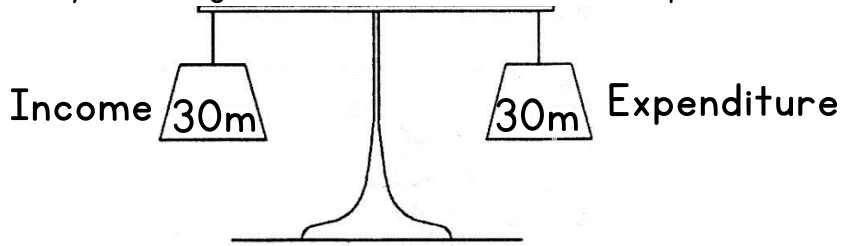
## SECTION A: 40 MARKS

1. Name the largest fresh water lake found on the central plateau of Uganda.  
\_\_\_\_\_
2. Name the system of government that is practiced in Uganda today.  
\_\_\_\_\_
3. Mention any one national symbol found on the Ugandan currency.  
\_\_\_\_\_
4. Name any one place at school where physical education lessons are conducted.  
\_\_\_\_\_
5. Which element gives detailed information about a map?  
\_\_\_\_\_
6. Give any one reason why a radio is important to the community.  
\_\_\_\_\_
7. How did the independence of Eritrea affect Ethiopia?  
\_\_\_\_\_
8. What role did Dr. Kwame Nkrumah play towards promoting Pan-Africanism?  
\_\_\_\_\_
9. Mention any one advantage of a nuclear family over an extended family.  
\_\_\_\_\_
10. How do citizens of Uganda show their respect when singing the national anthem?  
\_\_\_\_\_

11. Mention the weather condition suitable for winnowing grains.

---

Study the diagram below and answer the questions 12 and 13.



12. What name is given to the above type of budget?
- 
13. What is the advantage of having the type of budget shown in the diagram above?
- 
14. Give any one reason why a health centre should have an ambulance?
- 
15. State any one way in which a national constitution promotes people's rights.
- 
16. How does altitude influence the climate of an area?
- 
17. Why was Africa called a dark continent by the Europeans?
- 
18. Give any one way in which culture is important in a community.
- 
19. Mention any one reason why the velds of South Africa are suitable for sheep rearing?
- 
20. Why was the bird below chosen as the Uganda National Emblem?
- 



21. State any one way in which games and sports are important in a community.
-

22. What type of tax is paid on locally manufactured goods?
- 
23. How is a national identity card useful to a citizen of Uganda?
- 
24. How does afforestation influence the climatic condition of a place?
- 
25. Mention any one way through which poverty can be reduced in a community.
- 
26. What is a population structure?
- 
27. Name the political party that led Kenya to independence.
- 
28. Apart from being used for transport, state any one other reason why the Sabiny keep donkeys.
- 
29. Why should busy roads have humps?
- 
30. Mention any one place where a wind sock is found.
- 
31. What time is it at town X which is located  $45^{\circ}$  East if it is 6:00am at Greenwich?
- 
32. How is Lake Victoria similar to Lake Kyoga in terms of formation?
- 
33. State any one way in which forests improve people's health.
- 
34. What moral lesson do we learn from the legend of the spear and the bead?
- 
35. Name any one common market in which Uganda is a member.
-

For each of the questions 36 to 40, answer EITHER the Christian OR Islamic questions but not both. No marks will be awarded to a candidate who attempts both alternatives in a particular number.

36. Either: Who was the wife of Adam?

---

Or : Who was the wife of Adam?

---

37. Either: Name the fasting period for Christians.

---

Or : Name the fasting period for Muslims.

---

38. Either: Why is the Bible called a Holy book?

---

Or : Why is the Qur'an called a Holy book?

---

39. Either: Name the angel who brought the good news about the birth of Jesus Christ.

---

Or : Name the angel who brought the good news about the birth of Prophet Isa.

---

40. Either: Name the servant of God who suffered from serious illness but remained faithful.

---

Or : Mention the prophet of Allah who suffered from serious illness but remained faithful.

---

**SECTION B: 60 MARKS**  
**(Questions 41 to 55 carry 4 marks each)**

41. a. Name the body that is responsible for organising population census in Uganda.

\_\_\_\_\_

b. Mention any two reasons why the government conducts population census.

i. \_\_\_\_\_

ii. \_\_\_\_\_

c. State any one challenge faced by the enumerators during census.

\_\_\_\_\_

42. a. Mention the system of administration that was used by the French in West Africa.

\_\_\_\_\_

b. Give any two ways in which the system in (a) above was implemented.

i. \_\_\_\_\_

ii. \_\_\_\_\_

c. State any one negative effect of the above named system.

\_\_\_\_\_

43. a. Name any two minerals mined in South Africa.

i. \_\_\_\_\_

ii. \_\_\_\_\_

b. State any two economic benefits of the mining industry to South Africa.

i. \_\_\_\_\_

ii. \_\_\_\_\_

44. a. Name the kingdom that replaced the Chwezi dynasty of Bunyoro-Kitara.

\_\_\_\_\_

b. State any two economic contributions of the Chwezi to Uganda.

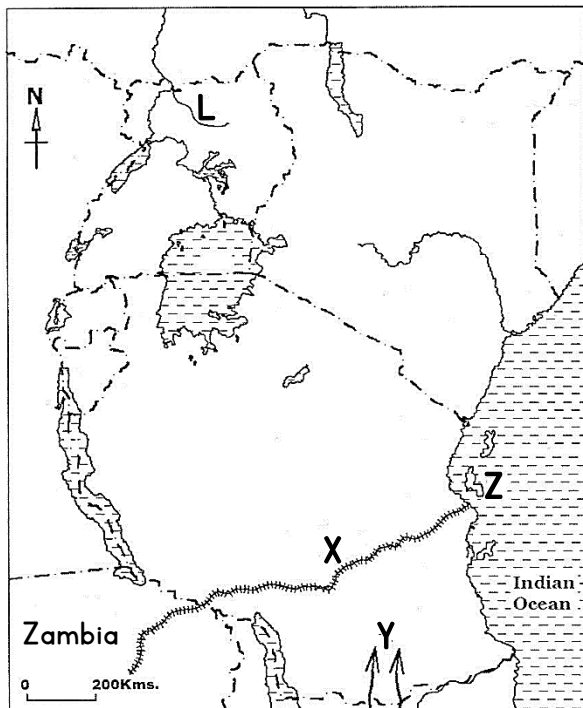
i. \_\_\_\_\_

ii. \_\_\_\_\_

c. Give any one reason why the Chwezi empire collapsed.

\_\_\_\_\_

45. Study the sketch map of East Africa below and answer the questions that follow.



a. Name the river marked L.

\_\_\_\_\_

b. Where was the homeland of the ethnic group that entered East Africa using route Y?

\_\_\_\_\_

\_\_\_\_\_

c. Mention the traditional cash crop grown on the Island marked Z.

\_\_\_\_\_

\_\_\_\_\_

d. How has the railway line marked X contributed to the economic development of Zambia?

\_\_\_\_\_

46. a. State any two roles of the security organs in Uganda.

i. \_\_\_\_\_

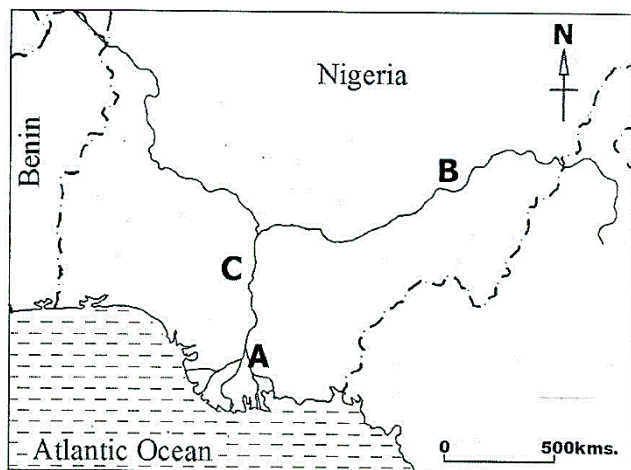
ii. \_\_\_\_\_

b. Give any two challenges faced by the security organs while performing their duties.

i. \_\_\_\_\_

ii. \_\_\_\_\_

47. Study the sketch map below and answer the questions that follow.



a. Name the features marked by the following letters.

A \_\_\_\_\_

B \_\_\_\_\_

b. Name any one other river in Africa that ends in the same way as river marked C above.

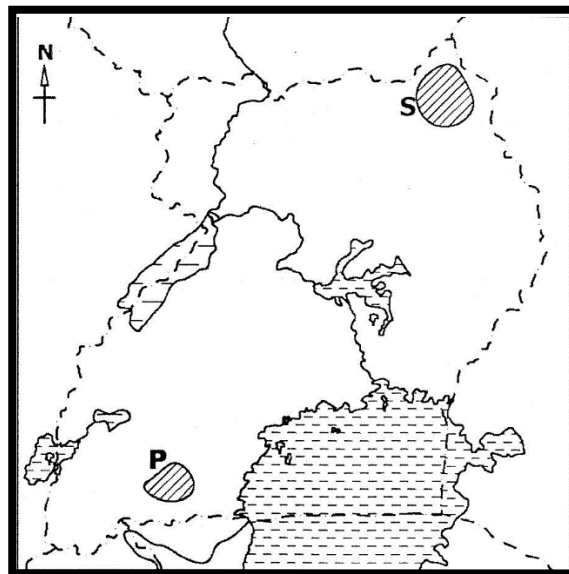
\_\_\_\_\_

c. How is the part marked A economically important to Nigeria?

\_\_\_\_\_

\_\_\_\_\_

48. a. Mention any two materials the Early man used for making his tools.
- i. \_\_\_\_\_
- ii. \_\_\_\_\_
- b. How did the Early man used bolas to live a better life?
- \_\_\_\_\_
- c. Give any one reason why the discovery of fire was important to the early man.
- \_\_\_\_\_
49. a. What is a national election?
- \_\_\_\_\_
- \_\_\_\_\_
- b. Mention any two bad practices done by people during the national elections.
- i. \_\_\_\_\_
- ii. \_\_\_\_\_
- c. In which one way is a voters' register important during elections?
- \_\_\_\_\_
50. Study the sketch map of Uganda below and answer the questions that follow.



- a. Name the National Game Park found at place marked P.
- \_\_\_\_\_
- b. State any one reason why there are no crocodiles in the National Game Park marked S.
- \_\_\_\_\_
- c. State any two economic benefits of National Game Parks in Uganda.
- i. \_\_\_\_\_
- ii. \_\_\_\_\_

For questions 51 to 55, answer EITHER the Christian OR Muslim questions but not both. No marks will be awarded to a candidate who attempts both alternatives in a particular number.

51. Either:

a. Name any one symbol in Christianity.

---

b. State any one way symbols are important to Christians.

---

c. Draw any two symbols of Christianity in the boxes below.



Or :

a. Name one symbol in Islam.

---

b. State any one way symbols are important to Muslims.

---

c. Draw any two symbols of Islam in the boxes provided below.



52. Either:

a. Apart from Christianity and Islam, mention any one other religion practiced in Uganda.

---

b. State any three roles of a Christian religious leader to the government of Uganda.

i. \_\_\_\_\_

ii. \_\_\_\_\_

iii. \_\_\_\_\_

Or :

a. Apart from Islam and Christianity, mention any one other religion practiced in Uganda.

---



b. State any three roles of a Muslim religious leader to the government of Uganda.

i. \_\_\_\_\_

ii. \_\_\_\_\_

iii. \_\_\_\_\_

53. Either:

a. Who was the mother of Jesus Christ?

\_\_\_\_\_

b. State any two ways in which Jesus Christ showed friendship to people?

i. \_\_\_\_\_

ii. \_\_\_\_\_

c. Mention any one way a Christian child can show friendship to others.

\_\_\_\_\_

Or :

a. Who was the mother of Prophet Muhammed (P.B.U.H).

\_\_\_\_\_

b. State any two ways in which Prophet Muhammed (P.B.U.H) showed friendship to people.

i. \_\_\_\_\_

ii. \_\_\_\_\_

c. Mention any one way a Muslim child can show friendship to others.

\_\_\_\_\_

54. Either:

a. Name the town where Jesus entered during Palm Sunday.

\_\_\_\_\_

b. Mention any two ways in which the Christians of the above named town welcomed Jesus Christ.

i. \_\_\_\_\_

ii. \_\_\_\_\_

c. Why did Jesus Christ go to the above named town?

\_\_\_\_\_

Or :

a. Name the town where Prophet Muhammed (P.B.U.H) migrated to from Mecca.

---

b. Mention any two ways in which the people of the above named town reacted to His visit.

i. \_\_\_\_\_

ii. \_\_\_\_\_

c. Why did Prophet Muhammed (P.B.U.H) migrate to the above named town?

---

55. Either: "He never changes. No one can oppose Him or stop Him from doing what He wants to do..... I tremble with fear before Him." (Job: 23: 13-15)

a. Who is talked about in the quotation above?

---

b. Mention two things that one can do to appreciate the one talked about in the quotation above.

i. \_\_\_\_\_

ii. \_\_\_\_\_

c. State any one service people get from the one named in (a) above.

---

Or : "He is the First (nothing is before Him) and the Last (nothing is after Him), the Most High (nothing is above Him) and the most Near (nothing is nearer than Him). And He is All - knower of everything....." (Surah Al-Hadid 57:3)

a. Who is talked about in the quotation above?

---

b. Mention two things that one can do to appreciate the one talked about in the quotation above.

i. \_\_\_\_\_

ii. \_\_\_\_\_

c. State any one service people get from the one named in (a) above.

---

# SOCIAL STUDIES PLE 2017

## CANDIDATE'S INFORMATION

Index number :

|  |  |  |  |  |  |  |  |  |
|--|--|--|--|--|--|--|--|--|
|  |  |  |  |  |  |  |  |  |
|--|--|--|--|--|--|--|--|--|

Name :

\_\_\_\_\_

Signature :

\_\_\_\_\_

School name :

\_\_\_\_\_

District name :

\_\_\_\_\_

## SECTION A: 40 MARKS

56. Give one effect of lighting on buildings.

\_\_\_\_\_

57. What name is given to laws made and passed by local authorities?

\_\_\_\_\_

58. Name one basic need provided by a school.

\_\_\_\_\_

59. What is population growth?

\_\_\_\_\_

60. Mention any one challenge faced by the National Forest Authority as it carries out its work.

\_\_\_\_\_

61. What is the main role of the Speaker of parliament?

\_\_\_\_\_

62. Give one example of a volcanic mountain found in South Africa.

\_\_\_\_\_

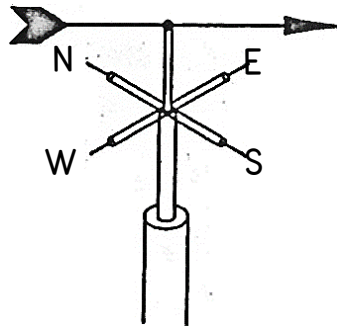
63. Apart from using elections, state any one other way of getting leaders in a community.

\_\_\_\_\_

64. Name the water passage that connects the Mediterranean Sea to the Red Sea.

\_\_\_\_\_

65. The diagram below shows a wind vane. Use it to answer questions that follow.



Use letter K to show the direction to which wind is blowing.

66. State any one reason why early missionaries in Uganda taught people how to read and write.

---

67. Name the landlocked country located in the horn of Africa.

---

68. State any one way in which the government of Uganda benefits from mobile telephone companies.

---

69. Name the line of latitude where the equinox is experienced.

---

70. Why are pipelines the best means of transporting water to homes?

---

71. Give any one danger of fishing using undersized nets.

---

72. Mention any one human activity that affects wild life.

---

73. State any one way in which political parties have contributed towards promoting democracy in Uganda.

---

74. How does Sudan benefit from River Nile?

---

75. Which missionary built the first hospital in Uganda?

---

76. In which one way do mangrove forests promote the fishing industry?

---

77. State any one advantage of having a nuclear family.

---

78. What is the main function of the Uganda People's Defence Forces?

---

79. State any one advantage Kenya has because of being at the coast.

---

80. Name any one lake that forms a natural boundary between Uganda and The Democratic Republic of Congo.

---

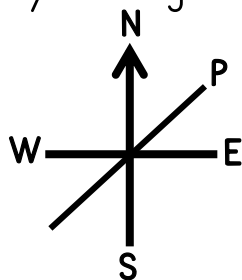
81. State any one use of a class register to a teacher.

---

82. Name one country in East Africa which is a member of the Southern African Development Community (SADC).

---

Study the diagram below and answer questions 28 and 29.



83. What name is given to the diagram above?

---

84. Name the direction marked P in the diagram above.

---

85. Which means of transport helped the Arab traders to cross the Indian Ocean.

---

86. What does the red colour on the Uganda National Flag represent?

---

87. Mention any one island country in the African continent that is found in the Indian Ocean.

---

88. Mention any one natural forest found in Uganda.

---

89. State any one way in which the Stone Age people protected themselves from wild animals.

---

90. How are the Sabiny of Uganda similar to the Chagga of Tanzania in terms of settlement?

---

For each of the questions 36 to 40, answer EITHER the Christian OR the Islamic questions but not both. No mark will be awarded to a candidate who attempts both alternatives in a particular number.

91. Either : According to the Bible, who was instructed to build the Ark?

Or : According to Islam, which prophet was instructed to build the Ark?

92. Either : Why do Christians visit Namugongo on 3<sup>rd</sup> June every year?

Or : Why do Muslims visit Mecca every year?

93. Either : Mention the first commandment according to the Bible.

Or : Mention the first pillar of Islam according to the Qur'an.

94. Either : State any one way in which Christians show respect to God during prayer.

Or : State any one way in which Muslims show respect to Allah during prayer.

95. Either : Name any one gospel book in the Bible.

Or : Name the book that was revealed to prophet Isa.

### **SECTION B: 60 MARKS**

96. The diagram below is of the Uganda Coat of Arms. Use it to answer the questions that follow



a. Name the features marked B and D.

B \_\_\_\_\_

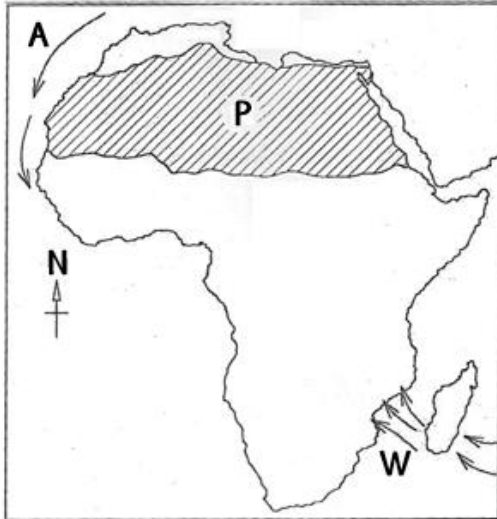
D \_\_\_\_\_

b. What does the feature marked A represent?

c. Why was the feature C chosen as the national emblem?

97. a. State any two rights that children should enjoy.  
i. \_\_\_\_\_  
ii. \_\_\_\_\_  
b. Give any two responsibilities that children must observe.  
i. \_\_\_\_\_  
ii. \_\_\_\_\_
98. a. State any two ways in which human activities can negatively affect the climate of an area.  
i. \_\_\_\_\_  
ii. \_\_\_\_\_  
b. Give any two reasons why farmers should know the weather patterns in their area.  
i. \_\_\_\_\_  
ii. \_\_\_\_\_
99. a. Apart from Tanzania, name any one other East African country that was colonised by the Germans.  
\_\_\_\_\_  
b. Why did Germany lose her colonies in East Africa after the First World War?  
\_\_\_\_\_  
c. Mention two ways in which the people of Tanzania reacted to the German rule.  
i. \_\_\_\_\_  
ii. \_\_\_\_\_
100. a. Name any one place at school where waste materials can be deposited.  
\_\_\_\_\_  
b. State any two problems caused by poor waste management in schools.  
i. \_\_\_\_\_  
ii. \_\_\_\_\_  
c. Why is recycling important in waste management?  
\_\_\_\_\_  
\_\_\_\_\_
101. a. Which plantation crop is mainly grown in Kericho in Kenya?  
\_\_\_\_\_  
b. Mention any two factors that favour the growing of the crop named in (a) above.  
i. \_\_\_\_\_  
ii. \_\_\_\_\_  
c. Write any one advantage farmers get through exporting processed produce instead of raw materials.  
\_\_\_\_\_  
\_\_\_\_\_

102. Study the sketch map of Africa below and use it to answer the questions that follow.



- a. Name the ocean current marked with letter A.  
\_\_\_\_\_
- b. How do the winds marked W affect the climate of the eastern part of Africa?  
\_\_\_\_\_
- c. State the type of climate experienced in the shaded region marked P.  
\_\_\_\_\_
- d. Why does the shaded region marked P experience very cold nights?  
\_\_\_\_\_

103. a. Name the type of budget in which the expected income is equal to the expected expenditure.

b. State any one disadvantage of not preparing a budget for a home.

c. State any two duties of the Uganda Revenue Authority (URA).

i. \_\_\_\_\_

ii. \_\_\_\_\_

104. a. Name any two permanent member countries of the United Nations Security Council.

i. \_\_\_\_\_

ii. \_\_\_\_\_

b. State any two challenges faced by the United Nations.

i. \_\_\_\_\_

ii. \_\_\_\_\_

105. a. Mention any two positive contributions of the Portuguese at the coast of East Africa.

i. \_\_\_\_\_

ii. \_\_\_\_\_

b. State any two causes of the decline of Portuguese rule at the coast of East Africa.

i. \_\_\_\_\_

ii. \_\_\_\_\_



For each of the questions 51 to 55, answer EITHER the Christian OR the Islamic questions but not both. No marks will be awarded to a candidate who attempts both alternatives in a particular number.

106. Either:

a. Mention any one marriage symbol in Christianity.

\_\_\_\_\_

b. Give any three ways in which couples get happiness.

i. \_\_\_\_\_

ii. \_\_\_\_\_

Or:

a. Mention one Islamic symbol.

\_\_\_\_\_

b. Give any three ways in which couples get happiness.

i. \_\_\_\_\_

ii. \_\_\_\_\_

iii. \_\_\_\_\_

107. Either:

a. Who is the Lamb of God who takes away the sins of the world?

\_\_\_\_\_

b. Mention any two ways in which Christians reconcile with God.

i. \_\_\_\_\_

ii. \_\_\_\_\_

c. Give any one benefit of reconciling with one another.

\_\_\_\_\_

Or:

a. Name any one animal a Muslim can give as a sacrifice to Allah.

\_\_\_\_\_

b. Mention any two ways in which Muslims reconcile with Allah.

i. \_\_\_\_\_

ii. \_\_\_\_\_

c. Give any one benefit of reconciling with one another.

---

108. Either:

a. Who was the first apostle to be called by Jesus Christ?

---

b. What was the work of the person you mentioned in (a) above before he was called by Jesus Christ?

---

c. Mention any two ways the apostles were helpful to the people after Jesus Christ ascended into heaven.

i. \_\_\_\_\_

ii. \_\_\_\_\_

Or:

a. Who was the first adult male to convert to Islam?

---

b. What was the work of the person you mentioned in (a) above before he converted to Islam?

---

c. Mention any two ways the caliphs were helpful to the people after Prophet Muhammad's death.

i. \_\_\_\_\_

ii. \_\_\_\_\_

109. Either:

a. According to Christianity, who is the controller of all authority?

---

b. State any two miracles Jesus Christ performed on earth.

i. \_\_\_\_\_

ii. \_\_\_\_\_

c. What helped Jesus Christ to exercise His authority?

---

Or:

a. According to Islam, who is the controller of all authority?

---

b. State any two miracles Prophet Muhammed (PBUH) performed.

i. 

---

ii. 

---

c. What helped Prophet Muhammed (PBUH) to be accepted by people?

---

110. Either:

“I say to you, love your enemies. Do good to those who hate you” Luke 6:27.

a. Who said the above words?

---

b. To whom were the words said?

---

c. Mention any two things you learn from this quotation.

i. 

---

ii. 

---

Or:

“Verily we have granted you A Kauthar, turn in prayer to your Lord and sacrifice .....” 108:1-3

a. Who said the above words?

---

b. To whom were the words said?

---

c. Mention any two things you learn from the above quotation.

i. 

---

ii. 

---

# SOCIAL STUDIES PLE 2016

## CANDIDATE'S INFORMATION

Index number :

|  |  |  |  |  |  |  |  |  |
|--|--|--|--|--|--|--|--|--|
|  |  |  |  |  |  |  |  |  |
|--|--|--|--|--|--|--|--|--|

Name :

\_\_\_\_\_

Signature :

\_\_\_\_\_


School name :

\_\_\_\_\_

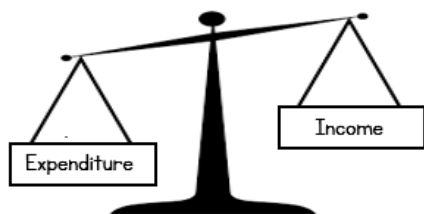
District name :

\_\_\_\_\_

## SECTION A: 40 MARKS

1. How can road transport across rivers and streams be made possible?  
\_\_\_\_\_
2. What does the black colour on the Uganda National Flag represent?  
\_\_\_\_\_
3. What does the symbol below represent on a map?  
\_\_\_\_\_  

4. Mention the use of a barometer at a weather station.  
\_\_\_\_\_
5. State any one reason why it is important to care for forests.  
\_\_\_\_\_
6. Why is a hut not called a permanent house?  
\_\_\_\_\_
7. State any one way in which peace can be developed among pupils at school.  
\_\_\_\_\_
8. What title is given to a political head of a sub-county in Uganda?  
\_\_\_\_\_
9. What is the use of a compass to a sailor?  
\_\_\_\_\_
10. Mention any one way in which children benefit from United Nations Children's Fund (UNICEF).  
\_\_\_\_\_
11. State any one way in which people benefit from small scale industries in their area.  
\_\_\_\_\_

12. Give one reason why elections are important in a country.
- 
13. Give any one reason why the British colonialists promoted road construction in Uganda.
- 
14. Why are Ugandans below 18 years not allowed to participate in national elections?
- 
15. Name the continent which is not suitable for human settlement.
- 
16. Name the country that borders Uganda in the East.
- 
17. Name any one river that flows out of Lake Kyoga.
- 
18. How did the Masai make the movement of the early explorers to East Africa difficult?
- 
19. State any one danger of corruption in the economy of a country.
- 
20. What type of budget is represented by the diagram below?
- 



21. Which group of people introduced the idea of salt mining in Uganda?
- 
22. Mention any one way in which drought affect cattle keepers in East Africa.
- 
23. Mention any one factor that makes Common Wealth countries similar.
- 
24. State any one way in which vegetation helps in controlling soil erosion.
- 
25. What term was used to mean the movement of the Dutch settlers from Cape Colony into the interior of South Africa?
- 
26. Mention any one way in which good hotels promote tourism in a country.
-

27. Which African National helped to unite Zanzibar and Tanganyika to Tanzania?  
\_\_\_\_\_
28. Name the type of education which was introduced by the Christian Missionaries in Uganda.  
\_\_\_\_\_
29. Mention any one condition of weather that affects water transport.  
\_\_\_\_\_
30. State any one problem caused by civic wars to a country.  
\_\_\_\_\_
31. Why does the leeward side of mountains receive very little rainfall?  
\_\_\_\_\_
32. Apart from archaeological findings, how else can we get information about the past?  
\_\_\_\_\_
33. State any one way in which a foreigner can become a citizen of Uganda.  
\_\_\_\_\_
34. Name the regional grouping to which Ghana belongs.  
\_\_\_\_\_
35. State any one way in which a farmer can benefit from a commercial bank.  
\_\_\_\_\_

For each of the questions 36–40, answer EITHER the Christian OR the Islamic question but not both. No marks will be awarded to a candidate who attempts both alternatives in a particular number.

36. Either : Give one example of work Jesus Christ was involved in as a child at home.  
\_\_\_\_\_

Or : Give any one example of work Prophet Muhammed (PBUH) got involved in as a child at home.  
\_\_\_\_\_

37. Either : Name any one of God's promises to faithful Christians.  
\_\_\_\_\_

Or : Name any one of Allah's promises to faithful Muslims.  
\_\_\_\_\_

38. Either : Mention the father of Joseph who was sold to Egypt according to the Bible.  
\_\_\_\_\_

Or : Who was the father of Prophet Yusuf according to the Qur'an?  
\_\_\_\_\_

39. Either : What is Sin according to Christianity?

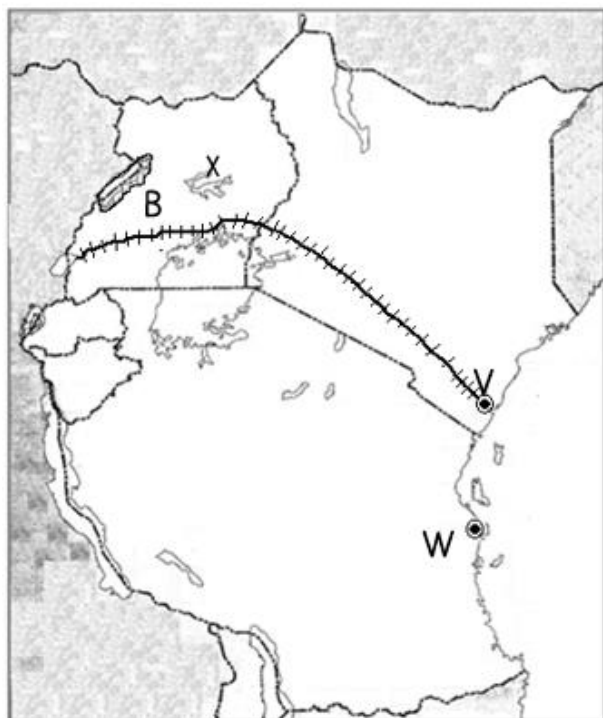
Or : What is Sin according to Islam?

40. Either : Name any one group of people in your Christian community who need special care.

Or : Name any one group of people in your Muslim community who need special care.

### **SECTION B: 60 MARKS**

41. Study the sketch map of East Africa below and use it to answer questions that follow.



a. Name the sea ports marked V and W.

V \_\_\_\_\_

W \_\_\_\_\_

b. Why was the railway built from port V to country X?

\_\_\_\_\_  
\_\_\_\_\_  
\_\_\_\_\_

c. Why is water transport difficult on lake marked X?

\_\_\_\_\_  
\_\_\_\_\_

42. a. What is barter trade?

\_\_\_\_\_  
\_\_\_\_\_

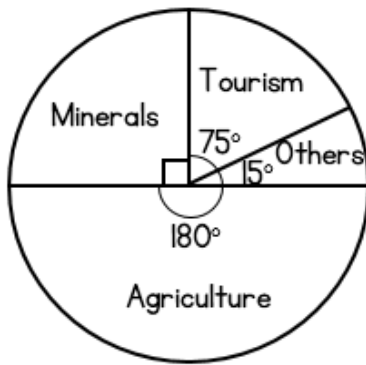
b. Give any one factor that made barter trade possible before the colonial rule.

c. State any two effects of local trade among different societies before the coming of colonial rule.

i. \_\_\_\_\_

ii. \_\_\_\_\_

43. The pie-chart below shows a country's earnings. Use it to answer questions that follow.



- Which is the major export earner of this country?  

---
- Name the second biggest export earner of this country.  

---
- If the total earnings of this country is US dollars 240 million, find how much money was earned from tourism.

44. Study the sketch map of Uganda and use it to answer questions that follow.



- Name the river marked X.  

---
- How was the mountain marked Y formed?  

---
- Give the major cash crop grown in the area marked S.  

---
- Why does Robusta coffee grow well in the area marked V?

45. a. Name the policy practiced in South Africa which separated the blacks from whites.

- b. Name the first black president of South Africa who fought against the above mentioned policy.

- c. State the two ways in which the policy mentioned above negatively affected blacks in South Africa.

- i. \_\_\_\_\_
- ii. \_\_\_\_\_



46. a. Name the animal which is used for transport in desert areas.
- 
- b. Mention any two factors which have enabled the animal you have named in (a) above to survive desert conditions.
- i. \_\_\_\_\_
- ii. \_\_\_\_\_
- c. State any one area that can support farming in the desert.
- 
47. a. Name the source of solar energy.
- 
- b. Name any two uses of solar energy.
- i. \_\_\_\_\_
- ii. \_\_\_\_\_
- c. Give any one advantage of using solar energy over hydro-electricity.
- 
48. a. Name the type of farming where a farmer both grows crops and rears animals.
- 
- b. State any two advantages of the above mentioned type of farming.
- i. \_\_\_\_\_
- ii. \_\_\_\_\_
- c. How do the crops benefit from the animals in the farm?
- 
49. a. Name the place where the Nilotics first settled when they arrived in Uganda.
- 
- b. State any two reasons why the Nilotics left their original homeland.
- i. \_\_\_\_\_
- ii. \_\_\_\_\_
- c. State any one positive effect of the migration of the Nilotics.
- 
50. a. Apart from hospitals, mention any two other health service centres in your community.
- i. \_\_\_\_\_
- ii. \_\_\_\_\_
- b. Mention any two problems faced by the government in providing health services to the people.
- i. \_\_\_\_\_
- ii. \_\_\_\_\_

For each of the question 51 to 55, answer EITHER the Christian OR the Islamic question but not both. No marks will be awarded to a candidate who attempts both alternatives in a particular number.

51. Either:

a. What was the symbol of God's covenant with Noah?

\_\_\_\_\_

b. Mention the mountain Noah's Ark rested after the floods.

\_\_\_\_\_

c. Why did Noah curse his son Ham?

\_\_\_\_\_

d. What lesson do you learn from the story of Noah?

\_\_\_\_\_

Or:

a. What was the symbol of Allah's covenant with Prophet Nuhu?

\_\_\_\_\_

b. Mention the mountain where Prophet Nuhu's boat rested after the floods.

\_\_\_\_\_

c. Why did one of Prophet Nuhu's sons fail to enter the Ark?

\_\_\_\_\_

d. What lesson do you learn from the story of Prophet Nuhu?

\_\_\_\_\_

52. Either:

a. Name any two voluntary organisations that offer free services to the people.

i. \_\_\_\_\_

ii. \_\_\_\_\_

b. State any two ways in which the organisations you have named above help the people.

i. \_\_\_\_\_

ii. \_\_\_\_\_

Or:

a. Name two voluntary organisations that offer free services to the people.

i. \_\_\_\_\_

ii. \_\_\_\_\_

b. State any two ways in which the organisations you have named above help the people.

i. \_\_\_\_\_

ii. \_\_\_\_\_

53. Either:

a. Name any two persons that were raised from the dead by Jesus Christ.

i. \_\_\_\_\_

ii. \_\_\_\_\_

b. Mention any two things that helped Jesus Christ to keep His Father's Glory on earth.

i. \_\_\_\_\_

ii. \_\_\_\_\_

Or:

a. Name any two persons who suffered when they followed Prophet Muhammed (PBUH).

i. \_\_\_\_\_

ii. \_\_\_\_\_

b. Mention any two things that helped Prophet Muhammed (PBUH) to accomplish His work.

i. \_\_\_\_\_

ii. \_\_\_\_\_

54. Either:

a. According to the Christian teaching, what is the greatest commandment?

\_\_\_\_\_

b. Give any three ways in which some Christians go against the commandment mentioned in (a) above.

i. \_\_\_\_\_

ii. \_\_\_\_\_

iii. \_\_\_\_\_

Or:

a. According to the Islamic teaching, what is the greatest pillar?

\_\_\_\_\_

b. Give any three ways in which some Muslims go against the pillar you have mentioned in (a) above.

i. \_\_\_\_\_

ii. \_\_\_\_\_

iii. \_\_\_\_\_

55. Either: Match the days in list A with the events in list B correctly.

| List A        | List B  |
|---------------|---|
| Ash Wednesday | <ul style="list-style-type: none"> <li>• Jesus Christ ascended to Heaven.</li> <li>• Christians begin fasting.</li> <li>• Disciples received the Holy Spirit.</li> <li>• Jesus Christ institutes the Holy Eucharist.</li> </ul> |
| Holy Thursday |   |
| Ascension day |   |
| Pentecost day |   |

- a. Ash Wednesday \_\_\_\_\_
- b. Holy Thursday \_\_\_\_\_
- c. Ascension day \_\_\_\_\_
- d. Pentecost day \_\_\_\_\_

Or: Match the events in list A with those in list B correctly.

| List A      | List B  |
|-------------|---|
| Eid al-Adha | <ul style="list-style-type: none"> <li>• Holy journey to Mecca.</li> <li>• Prophet Muhammed's journey from Mecca to Medina</li> <li>• Festival that marks the end of Ramadhan.</li> <li>• Festival to remember Prophet Ibrahim's sacrifice to Allah.</li> </ul> |
| Eid al-Fitr |   |
| Hijjah      |   |
| Hijrah      |   |

- a. Eid al-Adha \_\_\_\_\_
- b. Eid al-Fitr \_\_\_\_\_
- c. Hijjah \_\_\_\_\_
- d. Hijrah \_\_\_\_\_

# SOCIAL STUDIES PLE 2015

## CANDIDATE'S INFORMATION

Index number :

|  |  |  |  |  |  |  |  |  |  |
|--|--|--|--|--|--|--|--|--|--|
|  |  |  |  |  |  |  |  |  |  |
|--|--|--|--|--|--|--|--|--|--|

Name :

\_\_\_\_\_

Signature :

\_\_\_\_\_

School name :

\_\_\_\_\_

District name :

\_\_\_\_\_

## SECTION A: 40 MARKS

1. Name any one domestic animal kept for milk.  
\_\_\_\_\_
2. Which landform covers most areas of Uganda?  
\_\_\_\_\_
3. Give any one modern way of preserving fish.  
\_\_\_\_\_
4. Apart from Rwanda name one other landlocked country that borders Uganda.  
\_\_\_\_\_
5. What is the direction of Uganda from Burundi?  
\_\_\_\_\_
6. Mention any one activity that the Bachwezi are remembered for.  
\_\_\_\_\_
7. Give any one way in which children can help to keep security at home.  
\_\_\_\_\_
8. Which element of weather is measured using a barometer?  
\_\_\_\_\_
9. Mention any one port in East Africa that handles Uganda's imports and exports.  
\_\_\_\_\_
10. Name any one tribe in Uganda that belongs to the plain Nilotes.  
\_\_\_\_\_

11. How does the heading of a map help a map reader?

12. How are trees in a school compound useful to pupils?

13. What was the major item of trade from Africa to America during the Triangular trade (Trans-Atlantic trade)?

14. Give any one main crop grown in Doho Irrigation scheme.

15. Give any one way in which democracy is practiced in schools.

16. What does the road sign shown below mean?



17. Mention any one way in which Africans showed that they were not happy with the European rule.

18. State any one advantage of getting a leader through inheritance.

19. Name the type of soil that is used in the pottery industry.

20. Name any one of the tools used in schools to change from one daily activity to another.

21. What was the bolas used for during the Stone Age period?

22. Give any one reason why a re-cycling factory can be useful in an area.

23. Why is it important for a farmer to have the knowledge of seasons of the year?

24. Mention any one group of leaders who serve without payment.
- 
25. Give one social reason for the construction of the Kenya-Uganda railway in 1896.
- 
26. Name any one group of people who help to keep rules and regulations in a community.
- 
27. How is the work of a veterinary officer different from that of an agricultural officer?
- 
28. Why is tourism called an industry?
- 
29. Mention any one way in which government spends its income.
- 
30. Name the rapids along river Niger where Mungo Park drowned.
- 
31. Name any one Relief Agency that cares for the people who have been affected by landslides in Uganda.
- 
32. State any one way in which an Oasis is important to the people who live in the Sahara Desert.
- 
33. Give any one factor that attracted the Bantu cultivators to settle within the lake regions of East Africa.
- 
34. Mention any one island country found in West Africa.
- 
35. State any one way in which the judiciary promotes peace in a country.
-

For each of the questions 36 to 40, answer EITHER the Christian OR the Islamic questions but not both. No marks will be awarded to a candidate who attempt both alternatives in a particular number.

36. Either: Name the son of Adam who killed his brother.

Or: Name the son of Adam who killed his brother.

37. Either: How did Abraham show his faith to God?

Or: How did Prophet Ibrahim show his faith to Allah?

38. Either: What was the work of Mathew before he became an Apostle?

Or: What was the work of Khadija the wife of Prophet Muhammad (PBUH)?

39. Either: In which one way can a Christian reconcile with others?

Or: In which one way can a Muslim reconcile with others?

40. Either: Why is the Bible called Holy Book?

Or: Why is the Qur'an called a Holy Book?

## **SECTION B: 60 MARKS**

Questions 41 to 55 carry four marks each

41. a. Name the two European explorers who made two journeys to East Africa.

i. \_\_\_\_\_

ii. \_\_\_\_\_

b. Mention any two ways in which the work of the early explorers contributed to the development of Africa.

i. \_\_\_\_\_

ii. \_\_\_\_\_



42. a. What title is given to the highest civil servant in a ministry?

b. State the way in which one can become a chairperson LC.V in any district of Uganda.

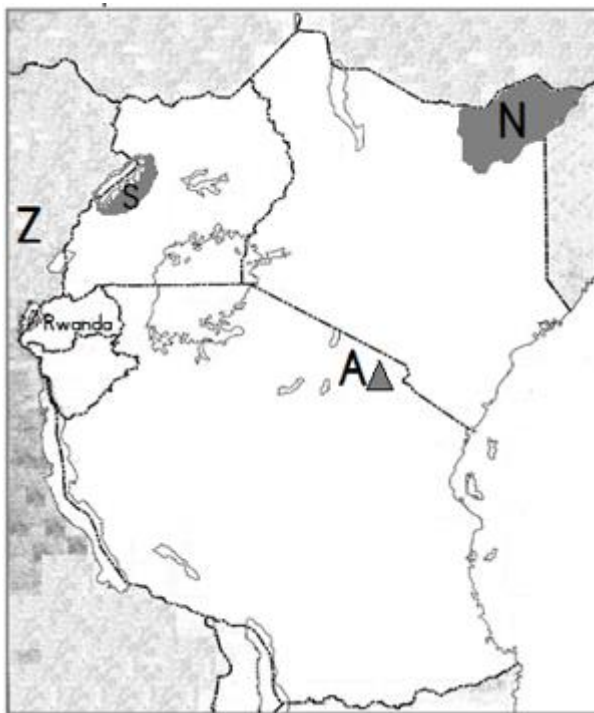
c. Give any two ways in which leaders can improve on the welfare of the people in their communities.

i. \_\_\_\_\_

ii. \_\_\_\_\_

43. Study the sketch map of East Africa below and answer the questions that follow.

a. Name the mountain peak marked with letter A.



b. Why is the shaded area marked with letter N not suitable for plantation farming?

c. Give any one advantage country marked with letter Z has over Rwanda when carrying out international trade.

d. Give any one reason why settlement is not allowed in the area marked S.

44. a. Name two elements of wind that are measured at a weather station.

i. \_\_\_\_\_

ii. \_\_\_\_\_

b. Why are the North-East and South-East Monsoon winds called trade winds?

c. Give any one reason why the North-East trade winds that blow towards the horn of Africa do not bring rainfall.

45. a. Name the organization that was replaced by the African Union.

b. Mention one country in Africa which is not a member of the African Union.

c. Give any two major organs of African Union.

i. \_\_\_\_\_

ii. \_\_\_\_\_

46. a. What mineral is mined from Wit waters rand in South Africa?

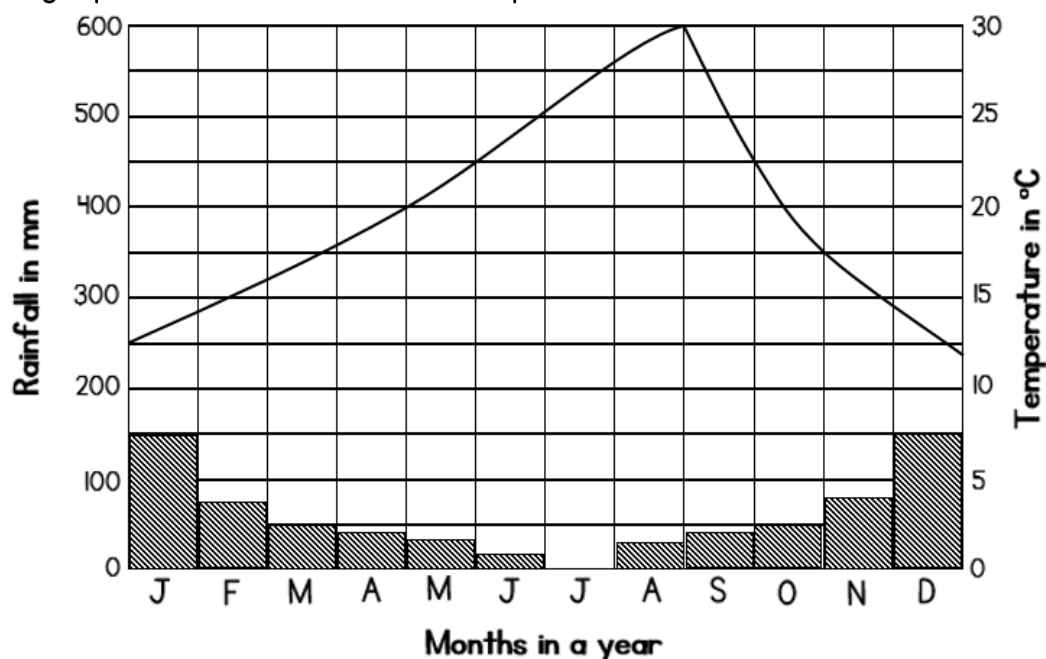
b. Mention any two factors that have promoted the development of mining in South Africa.

i. \_\_\_\_\_

ii. \_\_\_\_\_

c. State any one danger of the mining industry to the environment.

47. Study the graph below and answer the questions that follow.



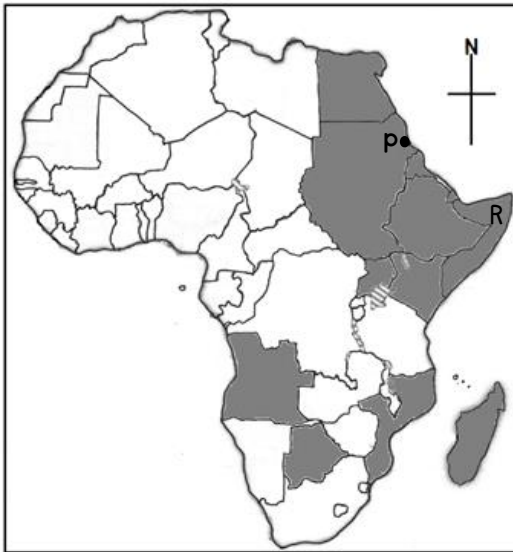
a. During which month of the year does this place experience no rainfall at all?

b. Name the months in which the highest amount of rainfall will be received.

c. What type of climate is shown on the graph?

d. Mention any one economic activity suitable in this area.

48. Study the sketch map of Africa below and answer questions that follow.



a. Name the port marked with letter P on the map above.

b. In which one way does port P benefit its country?

c. Name the regional economic grouping to which the shaded countries belong.

d. Mention any one problem faced by country marked R on the map.

49. Complete the table below correctly.

| Country    | Political leader       | Political party                     |
|------------|------------------------|-------------------------------------|
| Tanganyika | Mwalimu Julius Nyerere | _____                               |
| Uganda     | _____                  | Uganda People's Congress (UPC)      |
| _____      | Nelson Mandela         | African National Congress (ANC)     |
| Kenya      | _____                  | Kenya African National Union (KANU) |

50. The diagram below shows a method of farming practiced in some parts of Uganda. Use it to answer the questions that follow.



a. Name the method of farming shown in the diagram above.

b. State the importance of the planted grass in the method of farming shown in the diagram above.

- c. State any two problems faced by farmers in the above named physical features.
- 

For each of the questions 51 to 55, answer EITHER the Christian OR the Islamic questions but not both. No marks will be awarded to candidates who attempt both alternatives in a particular number.

51. EITHER:

- a. Name any one church founded organization that promotes youth activities in Uganda.
- 

- b. State any two challenges faced by the organization you have mentioned in (a) above.
- 

- c. Mention any one example you can copy from the activities of the organization named in (a) above
- 

OR:

- a. Name any one Islamic founded organization that promotes youth activities in Uganda.
- 

- b. State any two challenges faced by the organization you have mentioned in (a) above.
- 

- c. Mention any one example you can copy from the activities of the organization named in (a) above.
- 

52. EITHER: "We are going to Jerusalem, where the son of man will be handed over to the chief priest and teachers of the law. They will condemn him to death". (Matt 20:18-19)

- a. Who said these words?
- 

- b. Name the group of believers to whom the above words were said.
- 

- c. Mention any two things which happened shortly after the death of the person named in a above.
-

53. OR: "There is no God except Allah. Really causes pain. Oh God! Cover me with your forgiveness and mercy" Reported by: Abu Hurairat.

a. Who said these words?

---

b. Who was the most beloved wife of the person you named in (a) above?

---

c. Mention any two things which you learn from the person you have named in (a) above.

---

54. EITHER:

a. Mention any two types of prayer in Christianity.

---

b. Apart from playing, state any one other way Christians communicate to God.

---

c. State any one way prayer is important in Christianity.

---

OR:

a. Mention any two types of prayer in Islam.

---

b. Apart from praying, state any other way Muslims communicate to Allah.

---

c. State any one way prayer is important in Islam.

---

55. EITHER:

a. Which sacrament joins a man and a woman as husband and wife in church?

---

b. What do the following represent during the Holy Communion?

- Bread

- Wine

c. Why do Christians get the sacrament of Holy Communion?

---

OR:

a. Which pillar of Islam brings the rich and the poor together?

---

b. Give the two types of the pillar you named in (a) above.

---

c. What is the importance of the pillar you have mentioned in (a) above?

---

56. Either: Use a pen and match correctly the days of the Christian calendar in list A to their events in List B.

| List A        | List B                        |
|---------------|-------------------------------|
| Palm Sunday   | resurrection of Jesus Christ. |
| Good Friday   | birth of Jesus Christ.        |
| Easter Sunday | end of lent.                  |
| Christmas day | death of Jesus Christ.        |

- a. Palm Sunday \_\_\_\_\_
- b. Good Friday \_\_\_\_\_
- c. Easter Sunday \_\_\_\_\_
- d. Christmas day \_\_\_\_\_

OR: Match the information in list A to that in List B.

| List A                        | List B                      |
|-------------------------------|-----------------------------|
| 1 <sup>st</sup> Muharram      | celebration of Eid al-Fitr. |
| 12 <sup>th</sup> Rabbil-awwal | celebration of Eid al-Adha. |
| 1 <sup>st</sup> Shawwaal      | birth of prophet Muhammed.  |
| 10 <sup>th</sup> Dhul-hijjah  | beginning of New Year.      |

- a. 1<sup>st</sup> Muharram \_\_\_\_\_
- b. 12<sup>th</sup> Rabbil-awwal \_\_\_\_\_
- c. 1<sup>st</sup> Shawwaal \_\_\_\_\_
- d. 10<sup>th</sup> Dhul-hijjah \_\_\_\_\_

**SOCIAL STUDIES PLE 2014**

| CANDIDATE'S INFORMATION |  |  |  |  |  |  |  |  |  |
|-------------------------|--|--|--|--|--|--|--|--|--|
| Index number :          |  |  |  |  |  |  |  |  |  |
| Name :                  |  |  |  |  |  |  |  |  |  |
| Signature :             |  |  |  |  |  |  |  |  |  |
| School name :           |  |  |  |  |  |  |  |  |  |
| District name :         |  |  |  |  |  |  |  |  |  |

|  |  |  |  |  |  |  |  |  |
|--|--|--|--|--|--|--|--|--|
|  |  |  |  |  |  |  |  |  |
|--|--|--|--|--|--|--|--|--|

• \_\_\_\_\_

• \_\_\_\_\_

\_\_\_\_\_

• \_\_\_\_\_

• \_\_\_\_\_

• \_\_\_\_\_

• \_\_\_\_\_

- What basic need is provided by dogs in a home?
- 
- Name the type of clouds that bring rain.
- 
- Draw a map of a tree in the space provided below.
- 
- What safety wear is used by passengers crossing water bodies to protect their lives?
- 
- Apart from providing water for irrigation which other way is River Nile important to the Sudanese?
- 
- Mention any one way in which forests help to reduce the effect of bad weather
- 
- Mention the best season for harvesting cotton.
- 
- State any one example of a mineral that improves soil fertility.
- 
- State any one way in which prisons are important to a country.

10. What name is to a group of people living together?



11. Name the country whose flag is shown above.

---

12. How did FD clerk contribute to the end of Apartheid rule in South Africa?

---

13. Give any one service being provided by Uganda National Roads Authority (UNRA).

---

14. State any one economic importance of River Tana to Kenya.

---

15. Mention the first form of currency to be used in East Africa.

---

16. Mention any one way in which Prince Henry the Navigator was useful to the Portuguese explorers.

---

17. Name the archaeological site in Eastern Uganda where rock paintings are found.

---

18. Mention any one type of mining used in East Africa.

---

19. Why was the railway line extended from Kampala to Kasese?

---

20. Which international organization unites all countries that were colonized by the British?

---

21. What is citizenship by descent?

---

22. Name the organization that replaced the League of Nations.

---



23. State any one way in which the government can preserve cultural information for future generation.
- 
24. Give any one reason why some wild animals are killed in the National Game Parks.
- 
25. On what type of goods is customs duty charged?
- 
26. Give any one reason why the floor of the rift valley has high temperatures.
- 
27. What did raising of the Union Jack flag in 1894 mean in Uganda?
- 
28. What title is given to the head of the Executive arm of government?
- 
29. Give any one reason why land is the most important resource.
- 
30. State any one way in which competition for sunlight affects trees in tropical rain forest.
- 
31. Mention any one way in which distance from the Equator affects climate of an area.
- 
32. Mention any one way in which the coming of the Nilotes into Uganda was a disadvantage to the Bunyoro-Kitara empire.
- 
33. How is a key different from a title on a map?
- 
34. How does alcoholism cause child abuse in the community?
- 
35. Which country in West Africa was not colonized by Europeans?
-

For each of the questions 36 to 40, answer EITHER the Christian OR the Islamic questions but not both. No marks will be awarded to a candidate who attempts both alternatives in a particular number.

36. Either: According to the Bible, who was sent on earth by God to save the world?

---

Or: According to the Quran who was sent on earth by Allah as the last messenger.

---

37. Either: Mention any one result of sin.

---

Or: Mention any one result of sin?

---

38. Either: Give any one evidence to show that Jesus Christ was the true son of God.

---

Or: Give any one evidence to show that Prophet Muhammad (PBUH) was a true messenger of Allah.

---

39. Either: Who led the Israelites to the Promised Land?

---

Or: Who led the Ban Israel out of Egypt?

---

40. Either: State any one way in which the Holy Spirit appeared to the disciples.

---

Or: State any one way in which Prophet Muhammad (PBUH) performed miracles.

---

## **SECTION B: 60 MARKS**

Questions 41 to 55 carry four marks each

41. a. State any two traditional methods of catching fish in Uganda.
- i. \_\_\_\_\_
- ii. \_\_\_\_\_
- b. Give any two reasons why modern methods of catching fish are commonly used on Lake Victoria.
- i. \_\_\_\_\_
- ii. \_\_\_\_\_
42. a. Name the continent from which Arab traders came.
- \_\_\_\_\_
- b. Give any two reasons why the early Arab traders settled at the coast of East Africa.
- i. \_\_\_\_\_
- ii. \_\_\_\_\_
- c. State any one way in which the Arabs benefited from their stay at the coast of East Africa.
- \_\_\_\_\_
43. a. State any two reasons why the government carries out population census.
- i. \_\_\_\_\_
- ii. \_\_\_\_\_
- b. Give any two reasons why the slopes of mountain Elgon have a high population.
- i. \_\_\_\_\_
- ii. \_\_\_\_\_
44. a. State any two ways through which people show their culture.
- i. \_\_\_\_\_
- ii. \_\_\_\_\_
- b. Give any two reasons why people should promote culture in their area.
- i. \_\_\_\_\_
- ii. \_\_\_\_\_

45. a. What title is given to the person heading Bank of Uganda?

\_\_\_\_\_

b. Mention any two reasons why Bank of Uganda is important to the government.

i. \_\_\_\_\_

ii. \_\_\_\_\_

c. Give any one way in which a person benefits from keeping money in a bank.

\_\_\_\_\_

46. a. Give any two causes of the Maji-Maji rebellion in Tanganyika.

i. \_\_\_\_\_

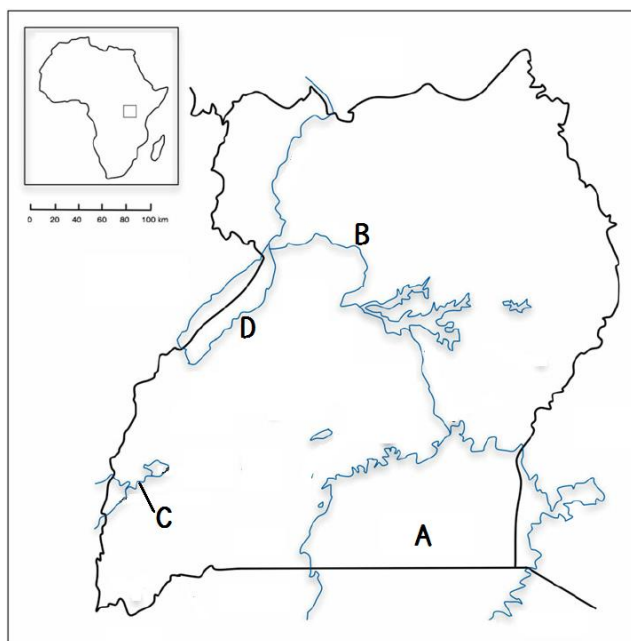
ii. \_\_\_\_\_

b. State any two ways in which the Maji-Maji rebellion benefited the people of Tanganyika.

i. \_\_\_\_\_

ii. \_\_\_\_\_

47. Study the sketch map of Uganda below and answer the questions that follow.



a. Name the features marked with letters B and C.

B \_\_\_\_\_

C \_\_\_\_\_

b. Why are many people living around the feature marked A?

\_\_\_\_\_

\_\_\_\_\_

c. Which mineral is mined in the area marked D?

\_\_\_\_\_

48. Match and re-write what is in part A and that in part B of the table provided in the spaces below.

| Part A             | Part B                              |
|--------------------|-------------------------------------|
| Service providers  | Services                            |
| Veterinary officer | produces crops and animal products. |
| Police officer     | buys and sells things.              |
| Traders            | treats animals.                     |
| Farmer             | Keeps law and order.                |

- a. Veterinary officer \_\_\_\_\_
- b. Police officer \_\_\_\_\_
- c. Traders \_\_\_\_\_
- d. Farmer \_\_\_\_\_
49. a. Name any two physical features colonialists used to fix boundaries in East Africa.
- i. \_\_\_\_\_
- ii. \_\_\_\_\_
- b. State any two problems that have been caused by the fixing of boundaries.
- i. \_\_\_\_\_
- ii. \_\_\_\_\_
50. a. Mention any two countries in Africa which experience the Mediterranean type of climate.
- i. \_\_\_\_\_
- ii. \_\_\_\_\_
- b. Name any two crops grown in this type of climate.
- i. \_\_\_\_\_
- ii. \_\_\_\_\_

For each of the questions 51 to 55, answer EITHER the Christian OR the Islamic questions but not both. No marks will be awarded to candidates who attempt both alternatives in a particular number.

51. EITHER:

a. What helped Jesus Christ to be successfully when he was on earth?

\_\_\_\_\_

b. Give any three factors that lead people to a successful life today.

i. \_\_\_\_\_

ii. \_\_\_\_\_

iii. \_\_\_\_\_

OR:

a. What helped Prophet Muhammad (PBUH) to be successful when he was on earth?

\_\_\_\_\_

b. Mention any three factors that lead people to successful life today.

i. \_\_\_\_\_

ii. \_\_\_\_\_

iii. \_\_\_\_\_

52. EITHER:

a. Name the two materials used in Holy Communication by Christians.

i. \_\_\_\_\_

ii. \_\_\_\_\_

b. Why are the above materials important in Christianity?

\_\_\_\_\_

c. How is Holy Communion important to a Christian life?

\_\_\_\_\_

OR:

a. Give the title these groups of people acquire after performing the pilgrimage

- Male Muslims \_\_\_\_\_

- Female Muslims \_\_\_\_\_

b. State any one reason why Muslims visit the tombs of Medina.

---

c. Mention one Holy Mosque that Muslims visit on a Pilgrimage.

---

53. EITHER:

a. Who was the husband of Elizabeth?

---

b. Mention the message angel Gabriel brought to Elizabeth's husband.

---

c. Why did Elizabeth's husband doubt the message?

---

d. What happened to Elizabeth's husband when he doubted the message?

---

OR:

a. Who was Hadijja's last husband?

---

b. Mention the first message Angel Jibril brought to Hadijja's last husband.

---

c. Why was Hadijja's last husband filled with fear when the angel appeared to him?

---

d. What lesson do you learn from the first message brought to Hadijja's last husband?

---

54. EITHER:

a. Name any one of the apostles of Jesus Christ who was closest to him.

---

b. Mention any one reason why Jesus Christ had apostles.

---

c. State any two ways in which a good Christian should behave.

i. 

---

ii. 

---

OR:

a. Name any one companion of Prophet Muhammad (PBUH) who was closest to him.

---

b. Mention any one reason why Prophet Muhammad (PBUH) had these companions.

---

c. State any two ways in which a good Muslim should behave.

i. 

---

ii. 

---

55. EITHER:

a. What type of religion existed in Africa before the coming of Christianity?

---

b. Give any two ways in which believers of the religion in (a) above showed that there was life after death.

i. 

---

ii. 

---

c. State any two reasons why some Christians fear death.

i. 

---

ii. 

---

OR:

a. What type of religion existed in Africa before the coming of Islam?

---

b. Give any two ways in which believers of the religion in (a) above showed that there was life after death.

i. 

---

ii. 

---

c. State any two reasons why some Muslims fear death.

i. 

---

ii. 

---



# SOCIAL STUDIES PLE 2013

## CANDIDATE'S INFORMATION

Index number :

|  |  |  |  |  |  |  |  |  |
|--|--|--|--|--|--|--|--|--|
|  |  |  |  |  |  |  |  |  |
|--|--|--|--|--|--|--|--|--|

Name :

\_\_\_\_\_

Signature :

\_\_\_\_\_

School name :

\_\_\_\_\_

District name :

\_\_\_\_\_

## SECTION A: 40 MARKS

1. Name one inland port found on Lake Victoria in Uganda.  
\_\_\_\_\_
2. Give any one traditional means of communication.  
\_\_\_\_\_
3. Give the opposite direction of North east on a compass.  
\_\_\_\_\_
4. What title is given to the head of civil servants in a district?  
\_\_\_\_\_
5. Which type of transport is most suitable for carrying flowers from Uganda to the United Kingdom?  
\_\_\_\_\_
6. Apart from windy and rainy conditions, give any one other weather condition.  
\_\_\_\_\_
7. What is important about the place called Magosi in Karamoja sub-region.  
\_\_\_\_\_
8. Mention the Muganda agent used by the British to extend their rule to Eastern Uganda.  
\_\_\_\_\_
9. Name the chief who is remembered for his resistance to colonial rule in Northern Uganda.  
\_\_\_\_\_

10. Give any one benefit which a family can get by living near a health centre.
- 
11. Give any one reason why Sir Andrew Cohen forced Kabaka Muteesa II to go to exile.
- 
12. Mention any one climatic condition which has enabled dairy farming to be carried out in the Kenya Highlands.
- 
13. Apart from water, give any one other commodity that can be transported using a pipe-line.
- 
14. Give any one way in which game parks promote economic development in Africa.
- 
15. State any one problem farmers may face as a result of cutting down forests.
- 
16. Give any one similarity between the East African Community (EAC) and the economic community of West African States (ECOWAS).
- 
17. Why were the caravans helpful to the Arab traders in East Africa?
- 
18. Mention any one way in which industrial growth can be a problem to the environment.
- 
19. Give any one economic advantage that people living in mining areas of South Africa get.
- 
20. State any one way in which a school can promote sanitation in the community.
- 
21. Ghana lies on the Prime Meridian if the time in Ghana is 1.00pm, what time will it be in East African standard time?
-

22. How did the work of Sir Samuel Baker benefit the people of Northern Uganda?
- 
23. Why did German lose its power in Tanganyika after the First World War?
- 
24. Apart from cultivation, state one other way in which people misuse swamps in Uganda.
- 
25. Give any one reason why colonialists constructed roads and railway lines in East Africa.
- 
26. Which colour on the Uganda Flag symbolizes brotherhood?
- 
27. Give any one reason why the Portuguese built Fort Jesus at Mombasa.
- 
28. Where are the Mangrove forests found in East Africa?
- 
29. Why is it necessary for a country with a fast-growing population to modernize its agriculture?
- 
30. State any one similar cultural practice among the Bagisu and Bakonzo.
- 
31. Give any one way in which the coming of the Arabs helped to improve the economy of Uganda.
- 
32. What process led to the formation of Lake Kyoga?
- 
33. Name any one member state of East African Community (EAC) that lies in both the Northern and Southern hemispheres.
-

34. Why is Africa known as the cradle land of mankind?

---

35. What term is used to mean the action of planting many trees in an area?

---

For each of the questions 36 to 40, answer EITHER the Christian OR the Islamic questions but not both. No marks will be awarded to a candidate who attempts both alternatives in a particular number.

36. Either: Name the first Martyr according to the bible.

---

Or: Name the first Martyr according to Islam.

---

37. Either: In which town was Jesus Christ buried?

---

Or: In which town was Prophet Muhammad (PBUH) buried?

---

38. Either: How long did God take to create the universe?

---

Or: How long did Allah take to create the universe?

---

39. Either: Name the Angel who brought the Good News to Mary that she would be the mother of Jesus Christ.

---

Or: Name the Angel that used to bring revelations to Prophet Muhammad (PBUH).

---

40. Either: Give any one sign of the Holy Spirit on the day of Pentecost.

---

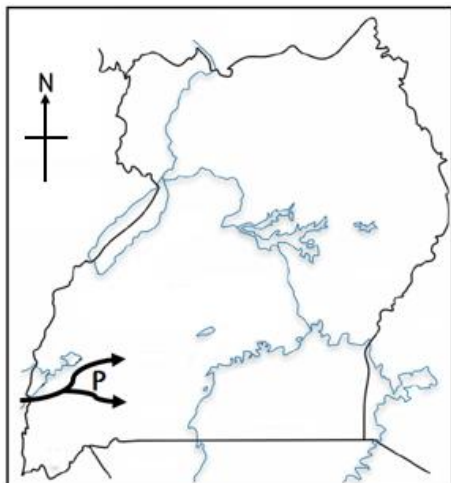
Or: Give any one holy place in Islam.

---

## SECTION B: 60 MARKS

Questions 41 to 55 carry four marks each

41. Study the sketch map of Uganda below and use it to answer the questions that follows:



- a. Name the ethnic group that followed the route marked P.

\_\_\_\_\_

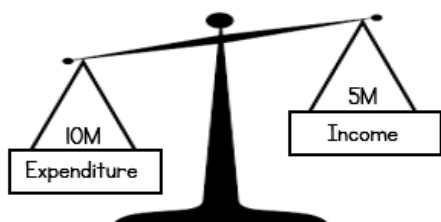
- b. Give any two reasons why the ethnic group in (a) above left their original home-land.

i. \_\_\_\_\_

ii. \_\_\_\_\_

- c. Use an arrow to show on the map above, the route Nilo-Hamites followed when entering Uganda.

42. The diagram below shows a school budget. Use it to answer the questions that follow.



- a. Name the type of budget shown in the diagram above.

\_\_\_\_\_

- b. Give any two problems a school may face when it has a budget shown above.

i. \_\_\_\_\_

ii. \_\_\_\_\_

- c. State any one reason why a school should have a budget.

\_\_\_\_\_

43. Match the elements of a map in list A to their uses in list B correctly.

| List A  | List B  |
|---------|---|
| Title   | to calculate actual distance between places on map. |
| Scale   | to interpret symbols on a map.                      |
| Compass | to understand what the map is all about.            |
| Key     | to find direction between places on a map.          |

- a. Title \_\_\_\_\_
- b. Scale \_\_\_\_\_
- c. Compass \_\_\_\_\_
- d. Key \_\_\_\_\_

44. a. Give any two uses of mobile phones.

- i. \_\_\_\_\_
- ii. \_\_\_\_\_

b. Give any two disadvantages of mobile phones.

- i. \_\_\_\_\_
- ii. \_\_\_\_\_

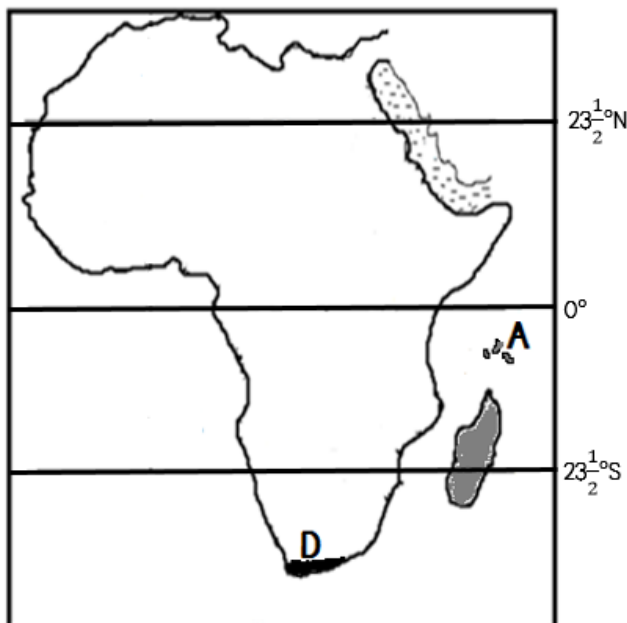
45. a. Who heads the Commonwealth of Nations?

b. Mention any two functions of the Commonwealth of Nations.

- i. \_\_\_\_\_
- ii. \_\_\_\_\_

c. Give any one way in which Ugandans benefit from participating in the Commonwealth of Nations games.

46. Study carefully the sketch map of Africa below and use it to answer the questions that follow.



a. Name the islands marked A on the map above.

b. Why are the islands marked A on the map above remembered in the colonial history of Bunyoro and Buganda Kingdoms?

\_\_\_\_\_

\_\_\_\_\_

\_\_\_\_\_

- c. Show letter C the Tropic of Cancer on the sketch map above.
- d. Mention any one way in which the vegetation zone marked D is important to the people of this area.

- 
47. a. Give any two natural disasters which can affect the settlement of people in an area.
- i. \_\_\_\_\_
  - ii. \_\_\_\_\_
- b. Mention any two ways in which government can assist the people affected by natural disasters.
- i. \_\_\_\_\_
  - ii. \_\_\_\_\_
48. a. Name the method of farming in which water is applied to help crops grow.
- 
- b. Mention any one area in Uganda where the method named in (a) above is used.
- 
- c. Give any two advantages of using the method of farming named above.
- i. \_\_\_\_\_
  - ii. \_\_\_\_\_
49. a. Apart from sugarcane and tea, give any two other plantation cash crops grown in East Africa.
- i. \_\_\_\_\_
  - ii. \_\_\_\_\_
- b. Give any two factors that make it difficult for Rwanda to carry out plantation agriculture.
- i. \_\_\_\_\_
  - ii. \_\_\_\_\_
50. a. Which river drains the largest part of the Democratic Republic of Congo (DRC)?
- 
- b. Give any two reasons why the river you have named in (a) above carries the largest volume of water to the sea.
- i. \_\_\_\_\_
  - ii. \_\_\_\_\_
- c. Name the ocean into which the river named in (a) above pours its water.
-

For each of the questions 51 to 55, answer EITHER the Christian OR the Islamic questions but not both. No marks will be awarded to a candidate who attempts both alternatives in a particular number.

51. EITHER: Match the given information in list A to that in list B correctly:

| List A              | List B  |
|---------------------|---|
| Cain                | was the first to see Jesus Christ after resurrection. |
| Joseph of Arimathea | replaced Judas Escariot.                              |
| Mathias             | buried Jesus Christ.                                  |
| Mary Magdalene      | killed his brother.                                   |

- a. Cain \_\_\_\_\_
- b. Joseph of Arimathea \_\_\_\_\_
- c. Mathias \_\_\_\_\_
- d. Mary Magdalene \_\_\_\_\_

OR: Match the given information in list A to that in list B correctly:

| List A  | List B                          |
|---------|---------------------------------|
| Abubakr | mother of Prophet Muhammad.     |
| Amina   | the book given to Prophet Musa. |
| Tuarat  | wife of Prophet Muhammad        |
| Aisha   | first Caliph in Islam.          |

- a. Abubakr \_\_\_\_\_
- b. Amina \_\_\_\_\_
- c. Tuarat \_\_\_\_\_
- d. Aisha \_\_\_\_\_

52. EITHER:

a. Name the special day of the week when Christians have general prayers.

\_\_\_\_\_

b. Why was the day named above chosen for general prayers?

\_\_\_\_\_



c. Mention any two things that general prayers promote.

i. \_\_\_\_\_

ii. \_\_\_\_\_

OR:

a. Name the special day of the week when Muslims have general prayers.

\_\_\_\_\_

b. Why was the day named above chosen for general prayers?

\_\_\_\_\_

c. Mention any two things that general prayers promote among Muslims.

i. \_\_\_\_\_

ii. \_\_\_\_\_

53. EITHER:

a. According to the Bible, who is regarded as grandfather of the nations?

\_\_\_\_\_

b. Give any one name among the children of the grandfather mentioned above.

\_\_\_\_\_

c. Mention any two way in which the grandfather of the nations showed his faith to God.

i. \_\_\_\_\_

ii. \_\_\_\_\_

54. OR:

a. Which Prophet is regarded as the grandfather of believers according to Islam?

\_\_\_\_\_

b. Give any one name among the children of the grandfather mentioned above.

\_\_\_\_\_

c. Mention any two ways in which the grandfather of the nations showed his faith to Allah.

i. \_\_\_\_\_

ii. \_\_\_\_\_

55. EITHER:

a. Who was the twin brother of Jacob?

\_\_\_\_\_

b. Mention any two promises God made to Jacob.

i. \_\_\_\_\_

ii. \_\_\_\_\_

c. What lesson do you learn from the story of Jacob and his twin brother?

\_\_\_\_\_

OR:

a. Name the son of Prophet Yaaquib who was sold to Egypt.

\_\_\_\_\_

b. Mention any two promises of Yaaquib.

i. \_\_\_\_\_

ii. \_\_\_\_\_

c. What lesson do you learn from the story of Yaaquib?

\_\_\_\_\_

56. EITHER:

a. Name the companion that God gave to Adam

\_\_\_\_\_

b. According to the Bible, where did God get Adam's companion?

\_\_\_\_\_

c. "..... for this reason, a man will leave his father and mother and unite with his wife" (Mathew 19:5)

Give two reasons why a man leaves his parents to unite with his wife.

i. \_\_\_\_\_

ii. \_\_\_\_\_

57. OR:

a. Name the wife that Allah gave to Prophet Adam.

\_\_\_\_\_

b. According to the Qur'an where did Allah get Adam's companion?

\_\_\_\_\_

c. "Any woman who dies when her husband is pleased with her will enter paradise" (Imaam Trimidhi 4:3256)

According to Islam give any two things a woman can do to please her husband in marriage.

i. \_\_\_\_\_

ii. \_\_\_\_\_

# SOCIAL STUDIES PLE 2012

## CANDIDATE'S INFORMATION

Index number :

|  |  |  |  |  |  |  |  |  |
|--|--|--|--|--|--|--|--|--|
|  |  |  |  |  |  |  |  |  |
|--|--|--|--|--|--|--|--|--|

Name :

\_\_\_\_\_

Signature :

\_\_\_\_\_

School name :

\_\_\_\_\_

District name :

\_\_\_\_\_

## SECTION A: 40 MARKS

1. Name the largest natural forest found in the central part of Uganda.  
\_\_\_\_\_
2. Mention the traditional cash crop that grows well on volcanic soils of East Africa.  
\_\_\_\_\_
3. What is the main cause of land fragmentation in Uganda?  
\_\_\_\_\_
4. Give any one problem caused by too much rainfall to the community.  
\_\_\_\_\_
5. Why should children be encouraged to plant trees to school?  
\_\_\_\_\_
6. Mention any one human activity which causes the number of wild animals to reduce in National Game parks.  
\_\_\_\_\_
7. Give the quickest means in which government sends information to its citizens.  
\_\_\_\_\_
8. Mention any one way in which African countries can improve on agricultural production.  
\_\_\_\_\_

9. Apart from constructing schools, state any one way missionaries contributed in improving the life of the people of Africa.
- 
10. Name the country in the Horn of Africa which was not colonized.
- 
11. Which major activity do farmers in Uganda carry out during a dry season?
- 
12. State any one way in which wild animals are important to the people of East Africa.
- 
13. Which king in Uganda did Captain Lugard sign an agreement with in 1890?
- 
14. State any one reason why persons aged 18 and above take part in national elections.
- 
15. Apart from cultivating crops and grazing animals, mention any other way the people of Uganda use land to earn a living.
- 
16. State any one reason why African countries are not developing at the same level.
- 
17. What is an import tax?
- 
- 
18. What causes ocean currents?
- 
19. Give any one reason why people should not settle in swamps.
- 
20. Why is the government of Uganda building more classrooms in schools across the country?
- 
21. Give any one advantage a tarmac road has over a murrum road.
-

22. Mention any one danger of polythene paper bags to soil.
- 
23. State any one way in which lakes promote crop farming.
- 
24. Write any one responsibility carried out by the National Environment Management Authority (NEMA).
- 
25. Mention any one material in our environment which can be used for making balls and skipping ropes to enjoy physical Education (P.E) lessons.
- 
26. Name any one group of people who provide security services in our community.
- 
27. In which one way did Dr. Livingston show the evil of slave trade in Africa?
- 
28. Mention any one contribution of a teacher to the community?
- 
29. Mention any one peaceful methods used by British establish their rule in Uganda.
- 
30. In what direction will Opio face if he turns through  $180^\circ$  clockwise from the North?
- 
31. Mention any one problem people living in mountain areas face.
- 
32. State any one way in which the government of Uganda helps pastoralists in semi-arid areas to overcome the problem of lack of water.
- 
33. Mention any one factor that makes lumbering to be done in Democratic Republic of Congo (DRC).
- 
34. Give any one characteristic of rift valley lakes.
- 
35. In which one way did the coming of early migrants to the coast of East Africa affect lives of the people in that area?
-

For each of the questions 36 to 40, answer EITHER Christianity OR Islamic questions but not both. No marks will be awarded to a candidate who attempts both alternatives in a particular number

36. Either: Name the mother of Isaac.

Or: Name the father of prophet Muhammad (PBUH).

37. Either: As a Christian child, how can you show love to your elders?

Or: As an Islamic child, how can you show love to your elder?

38. Either: Give any one example of sin that a pupil can commit at school.

Or: Give any one example of sin that a pupil can commit at school.

39. Either: What was the work of Joseph, the husband of Mary, mother of Jesus Christ?

Or: What was the work of Prophet Muhammad's first wife?

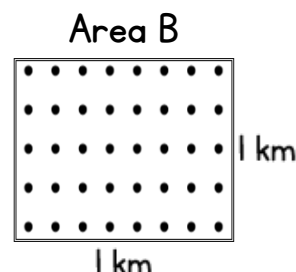
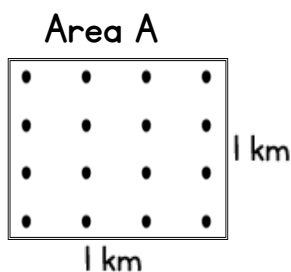
40. Either: Mention any one similarity between Christianity and Islam.

Or: Mention any one similarity between Islam and Christianity.

## **SECTION B: 60 MARKS**

Questions 41 to 55 carry four marks each

41. The diagrams below show the population distribution of two different areas in a country. Use them to answer the questions that follow.



a. What is the population distribution of area;

A \_\_\_\_\_

B \_\_\_\_\_

b. Mention any one disadvantage of the population distribution of area B to a country.

\_\_\_\_\_

c. Give any one advantage of the people living in area A over those living in area B

\_\_\_\_\_

42. a. Mention any two economic activities carried out in Kalangala District.

i. \_\_\_\_\_

ii. \_\_\_\_\_

b. State any one problem that has slowed down the development of Kalangala District.

\_\_\_\_\_

c. In Which way can the problem you have mentioned in (b) above be solved?

\_\_\_\_\_

43. a. Give one safe method of keeping money.

\_\_\_\_\_

b. State any three reasons why Ugandans are encouraged to save money today.

i. \_\_\_\_\_

ii. \_\_\_\_\_

iii. \_\_\_\_\_

44. a. Mention any one way the colonialists used to show that they had control over an area.

\_\_\_\_\_

b. Give any two reasons that made the African natives to resist payment of taxes.

i. \_\_\_\_\_

ii. \_\_\_\_\_

c. State any one reason why the colonialists did not want the natives of Kenya to grow cash crops.

\_\_\_\_\_

45. a. Why was early man known as the Stone Age man?

c. Mention any two methods Stone Age men used to kill the animals for food.

i. \_\_\_\_\_

ii. \_\_\_\_\_

c. How did the discovery of Iron change man's way of life?

\_\_\_\_\_

46. a. Which United Nations Agency is responsible for;

- preserving culture and promoting research?

\_\_\_\_\_

- caring for refugees?

\_\_\_\_\_

b. State any two ways in which the Red Cross cares for war victims.

i. \_\_\_\_\_

ii. \_\_\_\_\_

47. a. What do you call a place where weather is recorded?

\_\_\_\_\_

b. Write any two elements of weather which are recorded at the place you have named in (a) above.

i. \_\_\_\_\_

ii. \_\_\_\_\_

c. Mention any one way the recorded information about weather benefits the people in the community.

\_\_\_\_\_

48. a. Which was the largest inland slave market in East Africa?

\_\_\_\_\_

b. Give any two ways Arabs used to get slaves in East Africa.

i. \_\_\_\_\_

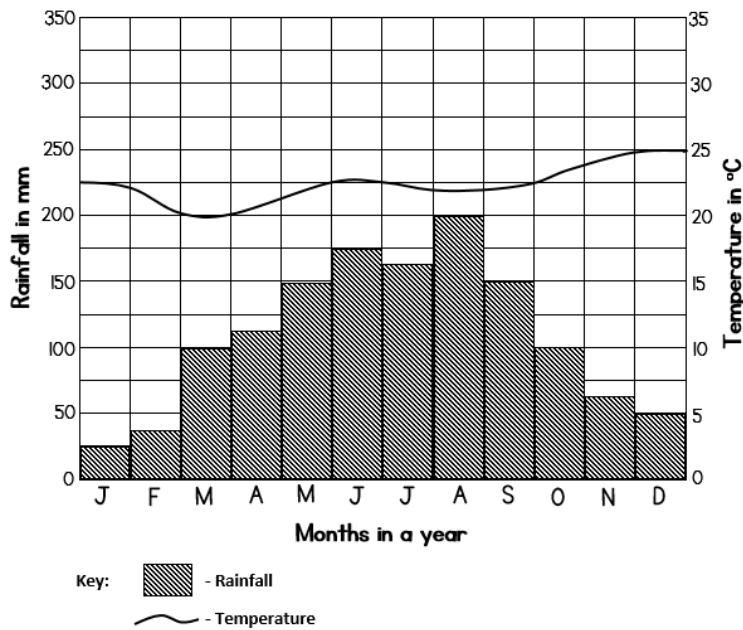
ii. \_\_\_\_\_

c. Mention any one result of slave trade in East Africa.

\_\_\_\_\_



49. Below is a climatic graph of Town A. study it carefully and answer questions that follow.



- a. In which month did town A receive the highest amount of rainfall?

\_\_\_\_\_

\_\_\_\_\_

- b. Name the month in which the highest temperature was recorded to town A above.

\_\_\_\_\_

\_\_\_\_\_

- c. What was the temperature range of town A?

\_\_\_\_\_

- d. Name the type of climate experienced in this town.

\_\_\_\_\_

50. Use the sketch map of East Africa below and answer the questions that follow.



- a. Name the port marked S.

\_\_\_\_\_

\_\_\_\_\_

- b. Give any one economic activity that is carried out at port S.

\_\_\_\_\_

\_\_\_\_\_

- c. Name the part of River Nile marked with letter L.

\_\_\_\_\_

- d. Use letter P to mark the deepest lake in East Africa.

For each of the questions 51 to 55, answer EITHER the Christian OR Islamic questions but not both. No marks will be awarded to a candidate who attempts both alternatives in a particular number.

51. EITHER:

a. Mention any two things you learn from Jesus Christ when he was a child.

i. \_\_\_\_\_

ii. \_\_\_\_\_

b. Give any two things Jesus Christ did to show love to people.

i. \_\_\_\_\_

ii. \_\_\_\_\_

OR:

a. Mention any two things you learn from prophet Muhammad (PBUH) when he was a child.

i. \_\_\_\_\_

ii. \_\_\_\_\_

b. Give any two things Prophet Muhammad did to show love to people.

i. \_\_\_\_\_

ii. \_\_\_\_\_

52. EITHER:

a. State any two things that happened immediately after Jesus Christ's death on the cross.

i. \_\_\_\_\_

ii. \_\_\_\_\_

b. Mention the man who went to Pilate to request for Jesus Christ's body.

\_\_\_\_\_

c. Where was Christ's body buried?

\_\_\_\_\_

OR:

a. State any two things that happened immediately Prophet Muhammad died.

i. \_\_\_\_\_

ii. \_\_\_\_\_

b. Name the first successor of Prophet Muhammad (PBUH).

---

c. Where was Prophet Muhammad buried?

---

53. EITHER:

a. Name the organization that unites the Roman Catholic, Orthodox and Church of Uganda.

---

b. State any three functions of this Organization you have mentioned in (a) above.

i. \_\_\_\_\_

ii. \_\_\_\_\_

iii. \_\_\_\_\_

OR:

a. Name the organization that unities the Muslims in Uganda.

---

b. State any three functions of this organization you have mentioned in (a) above.

i. \_\_\_\_\_

ii. \_\_\_\_\_

iii. \_\_\_\_\_

54. EITHER:

a. What is marriage in Christianity?

---

b. State any two reasons why Church marriage is important.

i. \_\_\_\_\_

ii. \_\_\_\_\_

iii. \_\_\_\_\_

c. Mention any one gift God gives to married people.

---

OR:

a. What is Nikah in Islam?

---

b. Mention any two reasons why Nikah is important.

i. \_\_\_\_\_

ii. \_\_\_\_\_

c. Mention any one gift Allah gives to married people.

---

EITHER:

a. Who is a Reverend/Priest?

---

b. State any three ways which a Reverend/Priest is important in our community.

i. \_\_\_\_\_

ii. \_\_\_\_\_

iii. \_\_\_\_\_

OR:

a. Who is an Imam?

---

b. State any three ways in which an Imam is important in our community.

i. \_\_\_\_\_

ii. \_\_\_\_\_

iii. \_\_\_\_\_

# SOCIAL STUDIES PLE 2011

## CANDIDATE'S INFORMATION

Index number :

|  |  |  |  |  |  |  |  |  |
|--|--|--|--|--|--|--|--|--|
|  |  |  |  |  |  |  |  |  |
|--|--|--|--|--|--|--|--|--|

Name :

\_\_\_\_\_

Signature :

\_\_\_\_\_

School name :

\_\_\_\_\_

District name :

\_\_\_\_\_

## SECTION A: 40 MARKS

1. What name is given to moving air?  
\_\_\_\_\_
2. Name the main cash crop grown in Kumasi in Ghana.  
\_\_\_\_\_
3. Why did Uganda join the World War II?  
\_\_\_\_\_
4. Which neighbouring country of Uganda is mainly covered by equatorial rain forests?  
\_\_\_\_\_
5. What was the kingdom of the Bachwezi known as?  
\_\_\_\_\_
6. Name the element which shows a map reader what the map is about.  
\_\_\_\_\_
7. Mention any one problem the government of Uganda is trying to solve by introducing universal primary education.  
\_\_\_\_\_
8. Name any one features on a river that helps in generation of Hydro-electric power.  
\_\_\_\_\_
9. How did Alexander Mackay promote education in Uganda?  
\_\_\_\_\_

10. Give any one reason why the people of Uganda wanted to be represented in the Legislative Council (LEGCO).
- 
11. Mention any one way in which farmers in the rural areas can be helped to transport their produce to bigger market.
- 
12. Apart from rainy season, under which other weather condition would one use an umbrella.
- 
13. How are forests important to carpenters?
- 
14. Ssendawula was facing the North. He turned clockwise through  $90^\circ$ . What was his new direction?
- 
15. Give any one danger of fishing using poison.
- 
16. Mention any one way in which pupil keep law and order in the school.
- 
17. Name any one United Nations Organization that has promoted medical treatment of children in Uganda today.
- 
18. Why did cotton growing in Tanganyika lead to the Maji-Maji rebellion?
- 
19. Name the body that promotes trade among the West African States.
- 
20. What is citizenship by naturalization?
- 
21. What name is given to the laws that are set by the local council of an area?
- 
22. Why Kiswahili connected to the coming of Arabs?
-

23. Apart from the Equator, name any one other important line of latitude.
- 
24. Give any one reason why fast maturing crops are suitable for growing in Karamoja.
- 
25. Name the organization that replaced Organization of African Unity (OAU).
- 
26. State any one way in which the Arab traders contributed to the economic development of the interior of East Africa.
- 
27. In which one way is a water body important in the formation of rainfall?
- 
28. How did the introduction of cash crops in East Africa help to improve transport network?
- 
29. Give any one reason why a school should have a weather station.
- 
30. Which discovery marked the end of the stone-age period?
- 
31. Why is English spoken in Nigeria and Uganda?
- 
32. Give any one reason why a child should not move from school to home alone.
- 
33. State any one reason why Mombasa is important to the economy of Uganda.
- 
34. Give any one reason why Mbale town is more densely populated than Moyo town.
- 
35. Mention one of the lake shared by Uganda and Democratic Republic of Congo (DRC).
- 
36. Why did the British want to form the East Africa Federation?
-

For each of the questions 37 to 40 answer EITHER the Christian OR Islamic question but not both. No marks will be awarded to a candidate who attempts both alternatives.

37. Either: Mention the religion that existed in Uganda before introducing of Christianity and Islam.

Or: Mention the religion that existed in Uganda before introduction of Islamic and Christianity.

38. Either: From what did God create Man?

Or: From what did Allah create Man?

39. Either: What title do we give to the followers of Jesus?

Or: What title do we give to the followers of Mohammad?

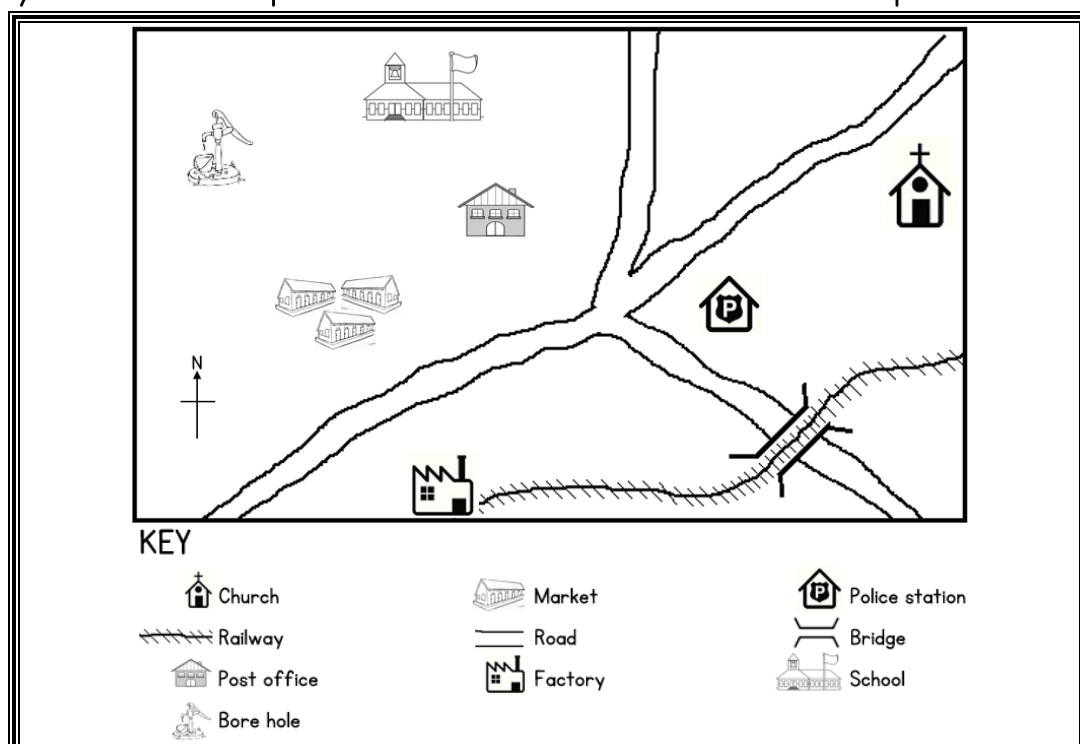
40. Either: Name the country in Africa where Jesus once lived.

Or: Name the country in Africa where Issa once lived

## **SECTION B: 60 MARKS**

Each question carries 4 marks.

41. Study the sketch map below and then use it to answer the questions that follow.





a. Name any two social services found in this area.

i. \_\_\_\_\_

ii. \_\_\_\_\_

b. Give any one reason why many people would settle in this area.

\_\_\_\_\_

c. What direction is the post Office from the factory?

\_\_\_\_\_

42. a. Name any two plantation crops grown in Uganda.

i. \_\_\_\_\_

ii. \_\_\_\_\_

b. State any two advantages plantation farming.

i. \_\_\_\_\_

ii. \_\_\_\_\_

43. a. Give any two reasons why a family needs to make a budget.

i. \_\_\_\_\_

ii. \_\_\_\_\_

b. What type of budget can bring development in a family?

\_\_\_\_\_

c. In which one way can the budget you have mentioned above bring development in the family?

\_\_\_\_\_

44. a. Where in Africa do we find the temperature grasslands?

\_\_\_\_\_

b. Give any two main economic activities of the temperature grassland?

i. \_\_\_\_\_

ii. \_\_\_\_\_

c. What method is used for growing sugarcanes in the area mentioned in (a) above?

\_\_\_\_\_

45. a. Give any two reason why informal education is good in the community.

i. \_\_\_\_\_

ii. \_\_\_\_\_

b. In Which two ways do parents help their children to learn about their culture?

i. \_\_\_\_\_

ii. \_\_\_\_\_

46. a. State any two reasons why the level of literacy among the girls is lower than that of the boys in Uganda.

i. \_\_\_\_\_

ii. \_\_\_\_\_

b. Give any two ways in which girl can be encouraged to keep in school to study.

i. \_\_\_\_\_

ii. \_\_\_\_\_

47. a. State any one duty for each of these arms of Government:

- Parliament \_\_\_\_\_

- Executive \_\_\_\_\_

b. What is the main duty of the speaker of parliament?

\_\_\_\_\_

c. State any one condition that can lead to holding a bye-election.

\_\_\_\_\_

48. a. State any one reason why the crested crane was selected as one of the items of the Uganda Coat of Arms.

\_\_\_\_\_

b. What does the red colour on the Uganda National flag represent?

\_\_\_\_\_

c. Give any two reasons why people stand up while singing the National Anthem.

i. \_\_\_\_\_

ii. \_\_\_\_\_

49. a. Mention any two reasons why the explorers came to Africa.

i. \_\_\_\_\_

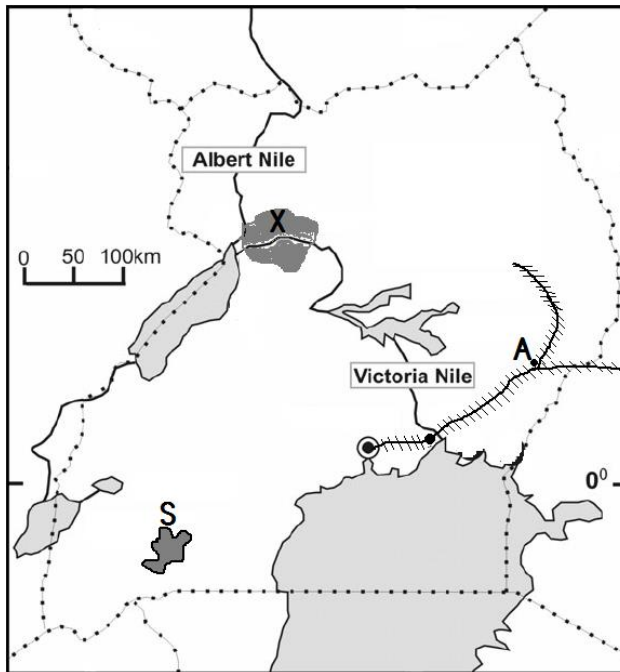
ii. \_\_\_\_\_

b. State any two difficulties early explorers faced in Africa.

i. \_\_\_\_\_

ii. \_\_\_\_\_

50. Study the sketch map of Uganda below and then use it to answer the questions that follow.



a. Name the town marked A.

\_\_\_\_\_

b. Mention the tourist attraction places marked X and S.

X \_\_\_\_\_

S \_\_\_\_\_

c. Use letter P to show the lake where oil has been discovered in Uganda

51. a. Give any two means of transport used on Lake Victoria.

i. \_\_\_\_\_

ii. \_\_\_\_\_

b. State any two ways in which transport, as a service, provide employment to people.

i. \_\_\_\_\_

ii. \_\_\_\_\_

52. a. What is a population census?

\_\_\_\_\_

\_\_\_\_\_

b. State any one reason why information on each of these is collected during a population census:

- Age \_\_\_\_\_

- Gender (sex) \_\_\_\_\_

c. Give any one reason why population census is not carried out every year.

\_\_\_\_\_

For each of the questions 53-55, answer EITHER the Christians OR Islamic question not both. No marks will be awarded to a candidate who attempts both alternatives.

53. EITHER:

a. In the story of the prodigal son, what did ask from his father before he left?

---

b. What did his father do to him when he returned?

---

c. How did his brother receive him when he returned?

---

d. As a Christian, give one lesson you learn from this story.

---

OR:

a. What is Hadith?

---

---

b. When is a grown up girl not allowed to pray in Islam?

---

c. Give two reasons why Moslems are supposed to dress properly during prayers.

i. 

---

ii. 

---

54. EITHER:

a. Name the missionary who was killed at Luba's palace in Busoga on the order of Kabaka Mwanga.

---

b. Mention any two ways in which the Uganda martyrs showed faith in their religion.

i. 

---

ii. 

---

c. What lessons do Christians learn from the suffering and death of the martyrs?

---

OR:

- a. Give the name of prophet Mohammad's uncle who took care of him after the death of his parents.

---

- b. Mention two reasons why Prophet Mohammad was loved by his uncle.

i. \_\_\_\_\_

ii. \_\_\_\_\_

- c. How did Prophet Mohammad overcome the plot to kill him by the Meccans?

---

55. EITHER:

- a. "I do not know the man you are talking about" who said these words?

---

- b. Why did he say so?

---

- c. Later on, what do we learn from Bible story?

---

- d. As a Christian, what do we learn from this Bible story?

---

OR:

- a. What is Tayammam?

---

---

- b. Give three conditions for Tayammam.

i. \_\_\_\_\_

ii. \_\_\_\_\_

iii. \_\_\_\_\_

# SOCIAL STUDIES PLE 2010

## CANDIDATE'S INFORMATION

Index number :

|  |  |  |  |  |  |  |  |  |
|--|--|--|--|--|--|--|--|--|
|  |  |  |  |  |  |  |  |  |
|--|--|--|--|--|--|--|--|--|

Name :

\_\_\_\_\_

Signature :

\_\_\_\_\_

School name :

\_\_\_\_\_

District name :

\_\_\_\_\_

## SECTION A: 40 MARKS

1. Name one of the human basic needs.  
\_\_\_\_\_
2. Which type of climate covers a greater part of Africa?  
\_\_\_\_\_
3. What can help a map reader use to know the meaning of symbols on a map?  
\_\_\_\_\_
4. What was the title given to the leader of government in Uganda after independence between 1966?  
\_\_\_\_\_
5. Given one example of a crater lake in Uganda.  
\_\_\_\_\_
6. Name one tribe in Uganda that belongs to the Nile -Hamites.  
\_\_\_\_\_
7. In which country in East Africa were the Akidas and Jumbe used by colonialists to rule?  
\_\_\_\_\_
8. State any one way in which the partition of East Africa affected some tribes.  
\_\_\_\_\_

9. State one reason why some people cannot get proper health services in your community.
- 
10. Give one way in which communication has become easy in Uganda.
- 
11. State the use of a wind -sock at a weather station.
- 
12. Which ministry is responsible for major roads in Uganda?
- 
13. What kind of vegetation mostly provides food for mountain gorillas?
- 
14. How were the British colonialists able to communicate with the local people?
- 
15. Why was the Berlin conference important to the European countries?
- 
16. Apart from the judiciary and the Executive, name one other arm of government.
- 
17. Give any one way in which a time-table puts order in a class.
- 
18. Where is snow found in East Africa?
- 
19. Mention one way in which stories of origin of tribes are important to the people of Uganda.
- 
20. State any one problem an area would face if it received no rain throughout the year.
- 
21. Give any one source of power used in copper smelting in Zambia.
-

22. Show the direction of South East on the compass below.



23. Apart from being the first president of Kenya, give any one other reason why Jomo Kenyatta is remembered in the history of Kenya.

24. Give one way in which one becomes a citizen of Uganda.

25. What shows that Uganda was once colonized by the British?

26. Mention one benefit of having midwife in the community.

27. How do commercial banks help people to develop?

28. Why is strip cropping practiced in areas which are hills?

29. Give any one reason why there was a mutiny of Sudanese soldiers in Uganda.

30. What is Oasis?

31. What is greatest cause of environmental degradation in most parts of Africa?

32. When does a bill become law in Uganda?

33. State one reason why there is little trade among the East Africa countries.

34. Why did the people of Kenya support the Mau-Mau rebellion?

35. Give the main occupation of people who live in dry areas of East Africa.

36. Why is the year 1894 important in the history of Uganda?



For each of the questions 37 to 40, answer EITHER the Christian OR Islamic question but not both. No marks will be given to a candidate who attempts both questions.

37. Either: Give a reason why Christians kneel during prayers.

Or: Why do Moslems stand in rows during prayers?

38. Either: Give one way in which Christians can show love to the people they live with.

Or: Give one way in which Moslems can show love to the people they live with.

39. Either: Apart from repentance, give one thing Christians can help can do to renew their faith in God.

Or: Apart from repentance, give one act which can help Moslems to renew their faith in Allah.

40. Either: Why did Adam and eve fail to live in peace forever?

Or: Why did Adam and Hawa fail in live in peace forever?

### **SECTION B: 60 MARKS**

41. a. State any two reasons for keeping domestic animals.

i. \_\_\_\_\_

ii. \_\_\_\_\_

b. Give any two reasons why some homes do not keep domestic animals.

i. \_\_\_\_\_

ii. \_\_\_\_\_

42. a. Into which Sea does River Nile flow?

b. State any two advantages of River Nile to the people who live along it.

i. \_\_\_\_\_

ii. \_\_\_\_\_

c. Give any one problem that people who live along River Nile experience.

\_\_\_\_\_

43. a. Write down any two causes of famine in Africa.

i. \_\_\_\_\_

ii. \_\_\_\_\_

b. State two ways in which illiteracy may lead to poor farming practices.

i. \_\_\_\_\_

ii. \_\_\_\_\_

44. a. Why was Kabaka Mwanga afraid of foreigners coming to Buganda through the East?

\_\_\_\_\_

b. Where did Bishop Hannington meet his death on his way to Buganda?

\_\_\_\_\_

c. State any one way in which the Imperial British East Africa Company (IBEACO) helped missionaries to work in Buganda

\_\_\_\_\_

d. Give any one way the missionaries helped in the development of Uganda.

\_\_\_\_\_

45. a. Apart from Uganda and Kenya mention two other countries which are members of East Africa Community.

i. \_\_\_\_\_

ii. \_\_\_\_\_

b. Give any two reasons why Uganda should live peacefully with her neighbouring countries.

i. \_\_\_\_\_

ii. \_\_\_\_\_

46. a. What kind of goods is usually transported by ship?

b. Why are flowers transported from Uganda to Europe by air?

c. Give two disadvantages of air transport.

i. \_\_\_\_\_

ii. \_\_\_\_\_

47. a. Write down two advantages of a large population in an area.

i. \_\_\_\_\_

ii. \_\_\_\_\_

b. State two problems caused by a big increase of population in an area.

i. \_\_\_\_\_

ii. \_\_\_\_\_

48. a. What is solar energy?

b. What is hydroelectric power?

c. Give two reasons why people in rural areas do not use electricity.

49. The Democratic republic of Congo has a lot of natural resources.

a. Name any two natural resources found in the Democratic Republic of Congo.

i. \_\_\_\_\_

ii. \_\_\_\_\_

b. Give any two reasons why the Democratic Republic of Congo has not been able to use its natural resources fully.

i. \_\_\_\_\_

ii. \_\_\_\_\_

50. a. Give two reasons why Robusta coffee is grown more than Arabica coffee in Africa.

i. \_\_\_\_\_

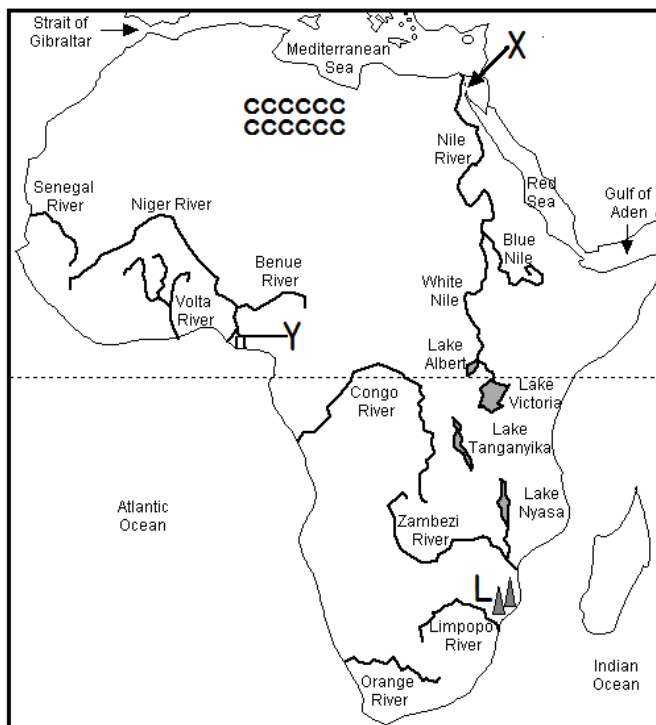
ii. \_\_\_\_\_

b. Mention any two problems that coffee farmers face.

i. \_\_\_\_\_

ii. \_\_\_\_\_

51. Use the map of Africa below to answer the questions that follow.



a. Name the water passage marked with X.

\_\_\_\_\_

b. Mention one economic activity carried out in the area marked Y.

\_\_\_\_\_

c. Why is the region marked CCC sparsely populated?

\_\_\_\_\_

d. How the mountain ranges were marked L formed?

\_\_\_\_\_

52. a. Give any two economic advantages of the growth of industries in a country.

i. \_\_\_\_\_

ii. \_\_\_\_\_

b. State any two reasons why it is necessary to build industries in rural areas.

i. \_\_\_\_\_

ii. \_\_\_\_\_

For each of the questions 53 to 55, answer EITHER the Christian OR Islamic questions but not both. No marks will be awarded to a candidate who attempts both alternatives.

53. EITHER:

a. Who committed the original sin?

\_\_\_\_\_

b. Why is it called the original sin?

\_\_\_\_\_

c. State any two ways through which man is punished for the original sin.

i. \_\_\_\_\_

ii. \_\_\_\_\_

OR:

a. Who committed the original sin?

---

b. Why is it called the original sin?

---

c. State any two ways through which man is punished for the original sin.

i. \_\_\_\_\_

ii. \_\_\_\_\_

54. EITHER:

a. Why did God give Moses the Ten Commandments?

---

b. How does keeping the Ten Commandments help Christians;

- on earth? \_\_\_\_\_

- after death? \_\_\_\_\_

c. Give any one way in which a constitution is similar to the commandments.

---

OR:

a. Why did God give Musa the Pillars of Islam?

---

b. How do the pillars help Moslems;

- on earth? \_\_\_\_\_

- after death? \_\_\_\_\_

c. Give one way in which the pillars of Islam are similar to a constitution.

---

55. EITHER:

a. What happened when Jesus was baptized in river of Jordan?

---

b. Why did Jesus accept to be baptized and yet he was the son of God?

---

c. Give any one reason why water is used in baptism.

---

d. What happens to a person when he or she is baptized?

---

OR:

a. What is the first prayer for the day in Islam?

---

b. Why is this prayer important?

---

c. Name the prayer performed immediately the sun sets.

---

d. How does fasting help in the health of Moslem?

---

# SOCIAL STUDIES PLE 2009

## CANDIDATE'S INFORMATION

Index number :

|  |  |  |  |  |  |  |  |  |
|--|--|--|--|--|--|--|--|--|
|  |  |  |  |  |  |  |  |  |
|--|--|--|--|--|--|--|--|--|

Name :

\_\_\_\_\_

Signature :

\_\_\_\_\_

School name :

\_\_\_\_\_

District name :

\_\_\_\_\_

## SECTION A: 40 MARKS

1. What helps a person to find the actual distance between two places on a map?  
\_\_\_\_\_
2. Name any one food crop that grows well in a swamp.  
\_\_\_\_\_
3. What is the compass direction of Mt. Elgon from Mt. Rwenzori?  
\_\_\_\_\_
4. Apart from colonial rulers, which other group of people helped to develop social services in Uganda?  
\_\_\_\_\_
5. What does the road sign below mean?  
\_\_\_\_\_



6. Give one reason why farmers are advised to plant crops at the beginning of a rainy season.  
\_\_\_\_\_
7. Name the winds that bring rain to East Africa.  
\_\_\_\_\_

8. Which mineral is mined in the Osukuru hill in Tororo?  

---
9. Which people used dhows to come to East Africa?  

---
10. How many countries does Uganda share its borders with?  

---
11. Why was Uganda known as a “protectorate?”  

---
12. Why is Dr. Kwame Nkrumah remembered in Ghana?  

---
13. Mention one reason why goats are more common than cattle in most parts of East Africa.  

---
14. Give one advantage of exporting processed goods other than raw materials.  

---
15. How can a small scale sugarcane grower in Jinja benefit from the nearby Kakira sugar factory?  

---
16. What is Bwindi National park famous for?  

---
17. Give one reason why the people living in Sahara Desert wear turbans on their heads.  

---
18. State any one way the discovery of iron improved the life of the early man.  

---
19. State any one way in which freedom of association is practiced in Uganda today.  

---
20. Mention any one way in which nomadic pastoralism in North – Eastern Uganda can be reduced.  

---



21. What is the advantage of a country having its own sea port?
- 
22. Give one reason why the North – Eastern part of East Africa receives little rainfall.
- 
23. Why is it difficult for one to travel by boat along the Victoria Nile?
- 
24. Give any one way in which people can be encouraged to live and work in rural areas.
- 
25. In which agreement were the boundaries of Buganda drawn.
- 
26. Give one reason why Mutesa I was not happy with the missionaries.
- 
27. Why should a citizen obey the laws of a country?
- 
28. Mention one source of income for the colonial government in Uganda.
- 
29. Why is air transport used by very few people in Africa?
- 
30. State one reason why the coastal areas of east Africa have high temperatures.
- 
31. Name the physical features that form the natural boundary between Tanzania and Democratic Republic of Congo (Zaire).
- 
32. State one reason why traditional education is important to your community.
- 
33. How did the coming of the Luo Babiito affect the Bunyoro Kitara Kingdom?
- 
34. What is the importance of a National Anthem in a country?
-

35. Name the port at the East African coast where the railway line from Tanzania to Zambia begins.

---

36. Give one reason why the people of South Africa fought against Apartheid.

---

For each of the questions 37 to 40, answer EITHER the Christian OR Islamic question but not both. No marks will be given to a candidate who attempts both questions.

37. Either: What does wine in the holy Eucharist represent?

---

Or: Why should a Moslem read Suratu Nas everyday?

---

38. Either: Who was the mother of the John Baptist?

---

Or: Who was the father of prophet Muhammad (S.A.W.)?

---

39. Either: How did Jesus show his power over death?

---

Or: Why do Moslems wash a dead body before it is buried?

---

40. Either: What was Moses' work before he was called by God?

---

Or: Write a single word which means "Total submission to the will of Allah."

---

## **SECTION B: 60 MARKS**

Each question carries 4 marks

41. Study the table below showing the climate of place A and answer questions that follow.

**CLIMATE OF A PLACE**

| Month        | J   | F  | M   | A   | M   | J   | J  | A  | S   | O   | N   | D   |
|--------------|-----|----|-----|-----|-----|-----|----|----|-----|-----|-----|-----|
| Temp. °C     | 22  | 21 | 22  | 24  | 23  | 25  | 21 | 21 | 23  | 22  | 24  | 25  |
| Rainfall(mm) | 100 | 90 | 100 | 150 | 130 | 165 | 90 | 95 | 120 | 110 | 150 | 160 |

a. In which month of the year does place A receive the highest amount of rainfall?

---

b. Give any one reason why crops can be grown at any time of the year at place A.

---

c. Mention one cash crop that can grow well under this type of climate.

---

d. Calculate the temperature range of place A.

---

42. a. Mention any two problems that can be caused by floods.

i. \_\_\_\_\_

ii. \_\_\_\_\_

b. Give two ways in which the government can help the people affected by floods.

i. \_\_\_\_\_

ii. \_\_\_\_\_

43. a. Give the importance of each of the following in the development of an industry:

- Labour \_\_\_\_\_

- Capital \_\_\_\_\_

b. Mention any two reasons why good roads are important in the development of an industry.

i. \_\_\_\_\_

ii. \_\_\_\_\_

44. a. Give any two reasons why people migrate from one place to another.

i. \_\_\_\_\_

ii. \_\_\_\_\_

b. Mention any two problems caused by low population density in some rural areas.

i. \_\_\_\_\_

ii. \_\_\_\_\_

45. a. Mention two modern cattle – keeping methods being practiced today.

i. \_\_\_\_\_

ii. \_\_\_\_\_

b. Which of the methods mentioned above is practiced mainly in Central Kenya?

\_\_\_\_\_

c. How can artificial insemination help a cattle farmer in Uganda?

\_\_\_\_\_

46. Study the map of Sudan below and answer the question that follow:



a. Name the country named A.

\_\_\_\_\_

b. What is the major cash crop grown in the area marked S?

\_\_\_\_\_

c. Give one reason why area marked S is good for the growing of crops.

\_\_\_\_\_

\_\_\_\_\_

d. Mention any one problem faced by farmers in the area marked S.

\_\_\_\_\_

47. a. State any two problem faced by Arabs when spreading Islam in East Africa?

i. \_\_\_\_\_

ii. \_\_\_\_\_

b. Mention any two good changes the Arabs brought to east Africa.

i. \_\_\_\_\_

ii. \_\_\_\_\_

48. a. State any one of the children's rights.

\_\_\_\_\_

b. Mention any one of the children's responsibilities.

\_\_\_\_\_

c. State any two reasons why children should know their rights and responsibilities.

- i. \_\_\_\_\_
- ii. \_\_\_\_\_

49. a. Mention any one area in Uganda where the people fought against British colonialist.

b. Give any two reasons why the people in those areas fought against the British.

- i. \_\_\_\_\_
- ii. \_\_\_\_\_

c. In which way did Semei Kakungulu help the colonialist in Uganda?

50. a. Give any two causes of causes of a large family sizes in Uganda.

- i. \_\_\_\_\_
- ii. \_\_\_\_\_

b. Mention any two problems of having a large family.

- i. \_\_\_\_\_
- ii. \_\_\_\_\_

51. Give any two ways in which each of the following has helped the people of Uganda.

a. Red Cross/ Red Crescent.

- i. \_\_\_\_\_
- ii. \_\_\_\_\_

b. United Nations International Children's Emergency Fund (UNICEF).

- i. \_\_\_\_\_
- ii. \_\_\_\_\_

52. a. Give any two reasons why it was important for African countries to unite after getting independence.

- i. \_\_\_\_\_
- ii. \_\_\_\_\_

b. State any two reasons why most African countries continue to depend on foreign countries.

- i. \_\_\_\_\_
- ii. \_\_\_\_\_

For each of the questions 53 to 55, answer EITHER the Christian OR Islamic question but not both. No marks will be given to a candidate who attempts both questions.

53. EITHER:

- a. "Blessed are you among women and blessed is the fruit of your womb" who said those words?

---

- b. What is the meaning of the word "fruit" mentioned above?

---

- c. Why was Mary "blessed among women"?

---

- d. "Behold servant of the Lord; let it happen to me according to your word" what lesson do we learn from this?

---

OR:

- a. What did Muhammad do to the woman who wanted to poison him?

---

- b. What happened to Mohammad when he went to ask for help from the people of Taif?

---

- c. What did people of Taif like about Muhammad?

---

- d. What lesson do we learn from what happened to Muhammad?

---

54. EITHER:

- a. What is Holy Matrimony?

---

---

- b. State one reason that may allow someone that may stop Holy Matrimony from taking place.

---

- c. Give one reason that may allow someone who had married in church before to marry again.

---

- d. Mention any one advantage of Holy matrimony.

---

OR:

- a. What is Nikah?

---

---

- b. Give three conditions that allow Nikah to take place.

i. 

---

ii. 

---

iii. 

---

55. This question is for all candidates (both Christians and Moslems) to answer.

- a. Give any two qualities of a God fearing person.

i. 

---

ii. 

---

- b. State any two ways in which religious organizations have improved the lives of the people of Uganda.

i. 

---

ii. 

---

# SOCIAL STUDIES PLE 2009

## CANDIDATE'S INFORMATION

Index number :

|  |  |  |  |  |  |  |  |  |
|--|--|--|--|--|--|--|--|--|
|  |  |  |  |  |  |  |  |  |
|--|--|--|--|--|--|--|--|--|

Name :

\_\_\_\_\_

Signature :

\_\_\_\_\_

School name :

\_\_\_\_\_

District name :

\_\_\_\_\_

## SECTION A: 40 MARKS

1. State one problem affecting cattle keeping in Karamoja region.  
\_\_\_\_\_
2. Give any one importance of mountains to farmers who live near them.  
\_\_\_\_\_
3. Mention any one disadvantage of building in a wetland.  
\_\_\_\_\_
4. Give one reason why it was easier for the British to rule Buganda and not Lango or West Nile.  
\_\_\_\_\_
5. What is the similarity between the motto of Uganda and the first verse of the National Anthem?  
\_\_\_\_\_
6. Why is Carl Peters important in the history of East Africa?  
\_\_\_\_\_
7. Give one reason why there are many different types of natural vegetation in Africa.  
\_\_\_\_\_
8. Suggest one way of improving the labour force in Africa.  
\_\_\_\_\_



9. Give one reason why landslides are not common in many parts of central and Northern Uganda.
- 
10. Name any international economic organization that includes Nigeria, Algeria and Libya.
- 
11. Mention one way in which the coming of Arabs affected the people of East Africa.
- 
12. State one way in which the police contributes to the welfare of the people in the community.
- 
13. Give one contribution made by Omukama Kasagama of Toro in the colonization of Uganda by the British.
- 
14. Mention the instrument that is used to measure the amount of rainfall at a weather station.
- 
15. Name the ethnic group of people who occupy the North-Eastern part of Uganda.
- 
16. Why is the symbol below important on a map?
- 



17. In which way is the formation of Lake Kyoga different from that of Lake Edward?
- 
- 
18. Identify any one problem faced by people living near cement industry.
- 
19. Suggest any one way the government can help the people in rural areas increase agricultural produce.
-

20. In which way does peace promote development in the country?
- 
21. Why is it difficult to carry out crop farming in North – eastern Kenya?
- 
22. State one reason why controlling population increase is difficult.
- 
23. How did explorers contribute to the colonization of Uganda?
- 
24. State the importance of political parties in Uganda before 1962.
- 
25. On which river is the Sennar dam found?
- 
26. How is the harvesting of cocoa in Ghana different from the harvesting of coffee in Uganda?
- 
27. State one way in which the African Union (A.U) is helping member states to solve the problem of civil wars.
- 
28. Apart from providing water for industrial use how has Lake Victoria contributed to the growth of industries in Kampala?
- 
29. In which is an extinct volcano different from an active volcano?
- 
30. Name the major crop grown in the Kilombero irrigation Scheme in Tanzania.
- 
31. Why did Egypt try to colonize Uganda?
- 
32. How are the camels helpful to the Berbers of North Africa?
-

33. Give one problem the builder of Uganda Railway faced in the Nandi area.

---

34. State one reason why crop farming is common in the highland areas of Kisoro.

---

35. Apart from being cloudy or windy, give any one other change of weather.

---

36. Mention one reason why the equator is marked 0°.

---

For each of the questions 37 to 40, answer EITHER the Christian OR Islamic question but not both. No marks will be awarded to a candidate who attempts both alternatives.

37. Either: Why did God create Eve?

---

Or: Why did Allah create Hawa?

---

38. Either: Why do Christians ask for the Holy spirit to be with them?

---

Or: Why is the Angel who is always on the right – hand side of every Moslem.

---

39. Either: What is the difference between Cana and Canaan?

---

Or: Give one way in which Yusuf's dream was fulfilled.

---

40. Either: In which way does God communicate to his people?

---

Or: How do Moslems show respect to the Holy house of Allah?

---

## SECTION B: 60 MARKS

Each question carries 4 marks

41. a. Name one missionary who contributed to the development of Uganda.

---

b. How did missionary named above contribute to the economic development of Uganda?

---

c. Give two ways in which missionaries improved the health of the people of Uganda.

i. \_\_\_\_\_

ii. \_\_\_\_\_

42. Give any four factors that have made the Republic of South Africa a leading industrial country in Africa.

i. \_\_\_\_\_

ii. \_\_\_\_\_

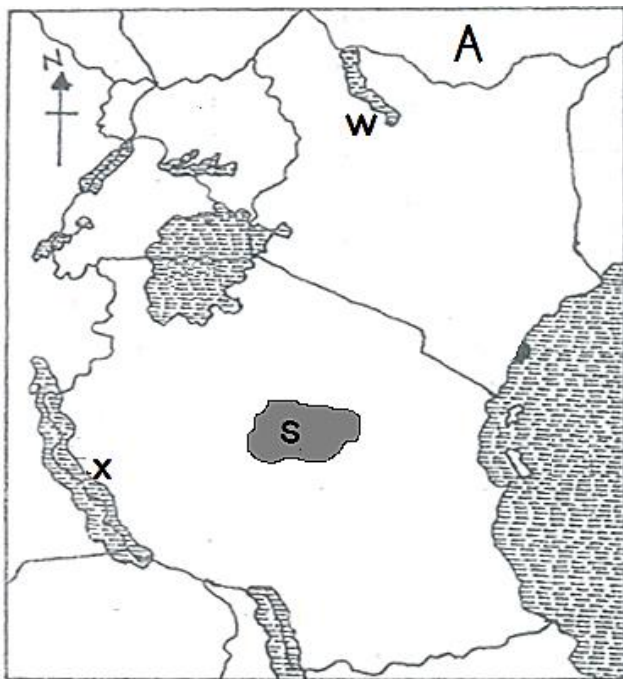
iii. \_\_\_\_\_

iv. \_\_\_\_\_

43. Use the map below to answer questions that follow:

a. Name the country marked A.

---



b. Give one cause of low population in the area marked S.

---

c. State one economic activity carried out in the lake marked X.

---

d. Give one similarity in the formation of Lake W and Lake X.

---

44. a. Give one way in which Lake Tana is important to the Blue Nile.

b. Explain the meaning of these words?

- Tributary of a river

- Mouth of a river

- Distributary of a river

45. Match the items in group A with their uses in group B.

| Group A          | Group B                                |
|------------------|--|
| Barometer        | measures humidity.                     |
| Stevenson screen | measures speed of wind.                |
| Hygrometer       | keeps maximum and minimum thermometer. |
| Anemometer       | measures air pressure.                 |

a. Barometer

b. Stevenson screen

c. Hygrometer

d. Anemometer

46. a. Name two African leaders who attended the Pan African Congress in 1958.

i. \_\_\_\_\_

ii. \_\_\_\_\_

b. State two ways in which Marcus Garvey contributed to the development of Africa.

i. \_\_\_\_\_

ii. \_\_\_\_\_

47. a. What title is given to the person who heads the judiciary in Uganda?

b. Mention any two groups of people who are members of the judiciary?

i. \_\_\_\_\_

ii. \_\_\_\_\_

c. How does parliament contribute to the work of the judiciary?

---

48. a. Name two services the government provides that make it easy for people to carry out trade.

i. \_\_\_\_\_

ii. \_\_\_\_\_

b. Give two ways in which the government of the East African countries is improving social services for their people.

i. \_\_\_\_\_

ii. \_\_\_\_\_

49. a. Which type of cows did Arabs introduce in East Africa?

---

b. Name two items the Arabs traded in with the people of East Africa.

i. \_\_\_\_\_

ii. \_\_\_\_\_

c. In which way did the Acholi people use the guns got from slave trade?

---

50. a. What was the Great Trek?

---

b. Mention any two places that were occupied by the Dutch after the Great Trek.

i. \_\_\_\_\_

ii. \_\_\_\_\_

c. State at least one result of the Great Trek.

---

51. a. State two activities carried out on Port Butiaba.

i. \_\_\_\_\_

ii. \_\_\_\_\_

b. Give two reasons why Port Butiaba was built.

i. \_\_\_\_\_

ii. \_\_\_\_\_

52. a. Apart from growing crops, give one other activity carried out by man to support his family.

\_\_\_\_\_

b. State two ways in which man has benefited from growing crops.

i. \_\_\_\_\_

ii. \_\_\_\_\_

c. Give one reason that has made it difficult to improve livestock in Uganda.

\_\_\_\_\_

For each of the questions 52 to 54, answer EITHER the Christian OR Islamic questions but not both. No marks will be awarded to a candidate who attempts both alternatives.

53. Either:

a. What does the word Gospel mean?

\_\_\_\_\_

b. Name any two people who wrote the Gospel.

i. \_\_\_\_\_

ii. \_\_\_\_\_

c. What guided the people mentioned above to write the Gospel?

\_\_\_\_\_

OR:

Write the meaning of each of the following words in Islamic faith;

a. Kaaba \_\_\_\_\_

b. Saum \_\_\_\_\_

c. Umra \_\_\_\_\_

d. Imam \_\_\_\_\_

54. Either:

a. Who the led Jews to arrest Jesus?

---

b. Why was Jesus arrested?

---

c. Give one reason why Jesus was taken to Pontius Pilate.

---

d. Why did Pontius Pilate wash his hand when he gave Jesus to the Jews?

---

OR:

Give any four things which a person who is fasting is advised to do by Prophet Mohammad P.B.U.H.

i. \_\_\_\_\_

ii. \_\_\_\_\_

iii. \_\_\_\_\_

iv. \_\_\_\_\_



# SOCIAL STUDIES PLE 2007

## CANDIDATE'S INFORMATION

Index number :

|  |  |  |  |  |  |  |  |  |
|--|--|--|--|--|--|--|--|--|
|  |  |  |  |  |  |  |  |  |
|--|--|--|--|--|--|--|--|--|

Name :

\_\_\_\_\_

Signature :

\_\_\_\_\_

School name :

\_\_\_\_\_

District name :

\_\_\_\_\_

## SECTION A: 40 MARKS

1. A part from sunshine, give any one other element of weather, which helps people to dry their clothes.  
\_\_\_\_\_
2. Name the country that borders Uganda on the eastern side.  
\_\_\_\_\_
3. Give any one reason why symbols are put on a map instead of real objects.  
\_\_\_\_\_
4. How did Dr. I.K. Musaazi contribute to the struggle for independence in Uganda?  
\_\_\_\_\_
5. In which way was the formation of Mt. Elgon different from that of Mt. Rwenzori.  
\_\_\_\_\_
6. Give any one reason why you think that Lake Victoria is at a higher altitude than Lake Kyoga?  
\_\_\_\_\_
7. Why does Kalangala District receive convectional rainfall?  
\_\_\_\_\_
8. In which way was the coming of Captain F.D. Lugard of an advantage to the Toro Kingdom?  
\_\_\_\_\_

9. In which way is the work of the Judiciary different from that of the legislation.
- 
10. State any one way in which the coming of Asians to east Africa helped in the economic development of East Africa?
- 
11. In Uganda which type of coffee grows best in volcanic soil?
- 
12. State any one economic advantage that Uganda gets as result of being a member of the East African community.
- 
13. Which type of climate favours the growing of citrus fruits?
- 
14. Give any one reason why the people of Northern Nigeria practice nomadic pastoralism.
- 
15. State any one way in which traditional leaders are important in Uganda.
- 
16. State any one bad fishing practice in Uganda.
- 
17. Give any one advantage of growing crops by irrigation.
- 
18. Give any one reason why Africans are not able to make use of all the natural resources in Africa.
- 
19. Suggest any one reason why the Bachwezi are remembered in Uganda.
- 
20. Which important latitude lies at 23° North of the Equator?
- 
21. Give any one reason why Africans in Kenya refused to work on the construction of the Kenya-Uganda railway.
- 
22. Why is it generally hot at Dar-es-Salaam and yet it is near the Indian Ocean?
-

23. Give the meaning of the physical feature known as plateau.
- 
24. Why was Ethiopia not colonized?
- 
25. Give any one use of timetable in a school.
- 
26. Give any one reason why most of the early Europeans who came to Uganda used a route through Tanganyika (Tanzania) and not Kenya.
- 
27. State any one way in which democracy is practiced in Uganda today.
- 
28. Apart from Uganda, Kenya and Tanzania, name any one other country, which is a member of The East Africans Community.
- 
29. Mention any one month of the year when the sun is directly overhead at the Equator.
- 
30. In which way are taxes important to the government?
- 
31. What do you understand by population density?
- 
32. Mention the ethnic group of people in East Africa who originated from Cameroon highlands.
- 
33. Give any one method which Europeans used to extend their rule in East Africa.
- 
34. Why is Olduvai Gorge a very important historic place in east Africa?
- 
35. Give any one reason why there are few large – scale industries in east Africa.
- 
36. What is the work of person called a speaker in parliament?
-

For each of the question 37 to 40, answer EITHER the Christians OR Islamic questions but not both. No marks will be awarded to a candidate who attempts both alternatives.

37. Either: Mention the last creation God made before resting.

Or: Who is believed to be the first prophet on earth?

38. Either: What message did Mary receive from Angel Gabriel?

Or: What message did Mohammed (P.B.U.H) receive from Angel Gabriel?

39. Either: Why was Jesus Christ sent to earth?

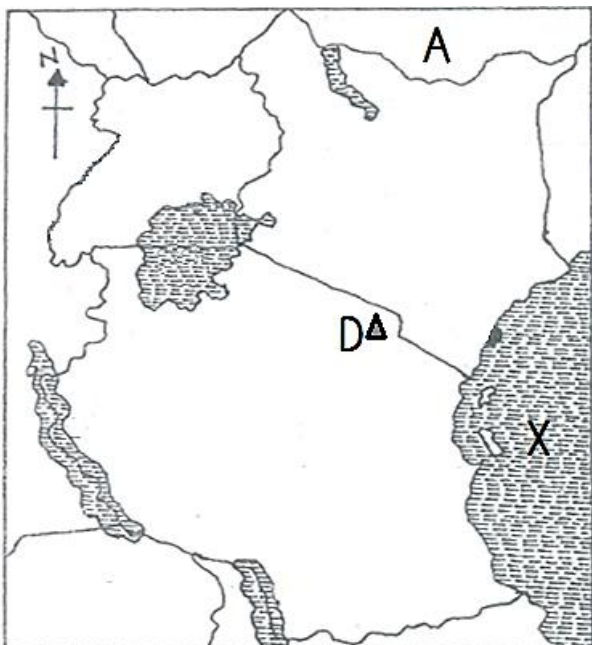
Or: State any one thing that a Moslem must fulfil before performing salat.

40. Either: As a Christian, what should you do to a person who does something wrong to you?

Or: As Moslem, what should you do to a person who does something wrong to you?

### **SECTION B: 40 MARKS**

41. Use the map of east Africa given below to answer the questions that follow.



a. Name the country marked with the letter A.

b. Name the mountain marked with the letter D.

c. Name the shaded Ocean marked with letter X.

d. Draw Lake Edward on the map.

42. a. Name the two parts of the Budget.
- i. \_\_\_\_\_
  - ii. \_\_\_\_\_
- b. If you were given Shs 20,000 as pockets money, give any two reasons why you need to budget before you spend that money.
- i. \_\_\_\_\_
  - ii. \_\_\_\_\_
43. a. Give any two reasons why Europeans colonized Africa.
- i. \_\_\_\_\_
  - ii. \_\_\_\_\_
- b. Suggest any two reasons why Africans disliked the colonial rulers.
- i. \_\_\_\_\_
  - ii. \_\_\_\_\_
44. a. Apart from Libya, Gabon and Egypt, name any two other oil producing countries in Africa.
- i. \_\_\_\_\_
  - ii. \_\_\_\_\_
- b. Suggest any two ways in which oil producing countries in Africa benefited.
- i. \_\_\_\_\_
  - ii. \_\_\_\_\_
45. a. Suggest any two reasons why the Portuguese came to settle in Mombasa.
- i. \_\_\_\_\_
  - ii. \_\_\_\_\_
- b. Why did the Portuguese build fort Jesus?
- \_\_\_\_\_
- c. How did fort Jesus contribute to economy of Kenya at present?
- \_\_\_\_\_
46. a. Name any two lakes in Uganda found in the western rift valley.
- i. \_\_\_\_\_
  - ii. \_\_\_\_\_

b. Give any two characteristics of a rift valley lake.

i. \_\_\_\_\_

ii. \_\_\_\_\_

47. a. State any two factors that influence vegetation distribution in an area.

i. \_\_\_\_\_

ii. \_\_\_\_\_

b. State any two ways in which people destroy vegetation in Uganda.

i. \_\_\_\_\_

ii. \_\_\_\_\_

48. a. What is population census?

\_\_\_\_\_

\_\_\_\_\_

b. State any two ways in which population census is important to the government.

i. \_\_\_\_\_

ii. \_\_\_\_\_

c. Suggest any one problem faced by a government when conducting population census.

\_\_\_\_\_

49. Study monthly temperature and rainfall shown in the table below and answer the questions that follow.

| Month        | J  | F  | M   | A   | M   | J  | J   | A   | S   | O   | N  | D  |
|--------------|----|----|-----|-----|-----|----|-----|-----|-----|-----|----|----|
| Temp. °C     | 23 | 21 | 20  | 21  | 25  | 24 | 23  | 21  | 20  | 20  | 21 | 24 |
| Rainfall(mm) | 40 | 80 | 200 | 250 | 170 | 70 | 110 | 150 | 250 | 220 | 90 | 50 |

a. Name the type of climate shown in the table.

\_\_\_\_\_

b. Give any one characteristic of the climate shown in the table.

\_\_\_\_\_

c. State any one reasons why this climate is good for growing crops.

\_\_\_\_\_

d. State any one way in which the people living in this area can protect their environment in order to continue with the climate shown in the table.

\_\_\_\_\_

50. a. Mention any two pastoral tribes in East Africa who lead a nomadic life.
- i. \_\_\_\_\_
  - ii. \_\_\_\_\_
- b. Suggest any two problems that they face in their occupation.
- i. \_\_\_\_\_
  - ii. \_\_\_\_\_
51. a. Give any two reasons why the Mau rebellion took place in Kenya.
- i. \_\_\_\_\_
  - ii. \_\_\_\_\_
- b. State any two disadvantages of the Mau Mau rebellion in Kenya.
- i. \_\_\_\_\_
  - ii. \_\_\_\_\_
52. a. Name two elements of climate.
- i. \_\_\_\_\_
  - ii. \_\_\_\_\_
- b. Suggest any two things that can be done to maintain good climate in an area.
- i. \_\_\_\_\_
  - ii. \_\_\_\_\_

For each of the questions 53-55, answer either Christianity or Islamic questions but not both. No marks will be awarded to a candidate who attempts both alternatives.

53. Either:
- a. Who received the Ten Commandments from God?
- \_\_\_\_\_
- b. State the place where these Ten Commandments were given to the person you have named in (a) above.
- \_\_\_\_\_
- c. What should a Christian do when he/she breaks any commandment?
- \_\_\_\_\_
- d. Give any one way in which commandments are important in the Christian faith.
- \_\_\_\_\_

Or:

a. Give two reasons why Muslims perform salat?

i. \_\_\_\_\_

ii. \_\_\_\_\_

b. State any two ways in which Imam is important during prayers.

i. \_\_\_\_\_

ii. \_\_\_\_\_

54. Either:

a. Give any one way in which prophets are important in the Christian faith.

\_\_\_\_\_

b. Give any one reason why each of the following people is remembered in the Christian faith;

- Abraham \_\_\_\_\_

- John the Baptist \_\_\_\_\_

- Moses \_\_\_\_\_

Or:

a. Give any four reasons why Muslims fast.

i. \_\_\_\_\_

ii. \_\_\_\_\_

iii. \_\_\_\_\_

iv. \_\_\_\_\_

55. Either:

In the parable of the lost sheep, Jesus teaches that if one sheep out of one hundred is lost, the shepherd will leave the ninety nine and look for the lost one.

a. Who is the shepherd in the parable?

\_\_\_\_\_

b. Who are the sheep?

\_\_\_\_\_



c. Whom did Jesus refer to as the lost sheep?

---

d. Why are the ninety nine sheep not as important as the lost one according to Jesus?

---

Or:

a. What is zakat?

---

b. Give any one reason why Muslims should give zakat to others.

---

c. Give any two categories of people who should be given zakat.

i. 

---

ii. 

---

# SOCIAL STUDIES PLE 2006

## CANDIDATE'S INFORMATION

Index number :

|  |  |  |  |  |  |  |  |  |
|--|--|--|--|--|--|--|--|--|
|  |  |  |  |  |  |  |  |  |
|--|--|--|--|--|--|--|--|--|

Name :

\_\_\_\_\_

Signature :

\_\_\_\_\_

School name :

\_\_\_\_\_

District name :

\_\_\_\_\_

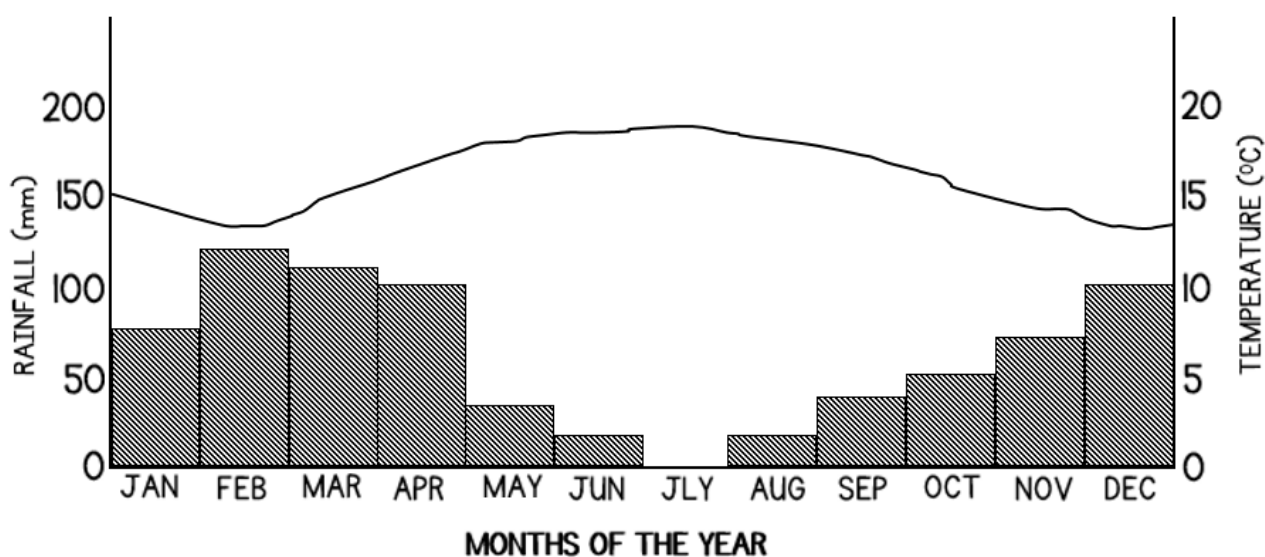
## SECTION A: 40 MARKS

1. What help a pilot flying a plane from Arua to Entebbe to find the direction to Entebbe Airport?  
\_\_\_\_\_
2. Apart from school uniform, give any one other symbol of a school.  
\_\_\_\_\_
3. Give any one use of a Zebra crossing.  
\_\_\_\_\_
4. State any one way which weather records are important to a farmer.  
\_\_\_\_\_
5. State any one way which Jomo Kenyatta contributed to the struggle for the independence of Kenya.  
\_\_\_\_\_
6. Give any one way in which Game parks are important in East Africa.  
\_\_\_\_\_
7. Suggest any one disadvantage which a country with a low population faces.  
\_\_\_\_\_
8. Which lake is shared by all the three East African Countries?  
\_\_\_\_\_

9. What was the work of the Legislative Council (LEGCO) in Colonial Uganda?
- 
10. Give any one way in which the government gets its income.
- 
11. How was indirect Rule exercised by the Colonialist in east Africa?
- 
12. Give any one reason why Libya, which is a desert, is one of the richest countries in Africa.
- 
13. Give any one reason why the British chose to settle in Kenya.
- 
14. State any one reason why some children have left their homes to go and live on the streets in towns.
- 
15. How the union Jack (British National flag) was treated on the 9<sup>th</sup> October 1962?
- 
16. Which organization has been replaced by the African Union?
- 
17. Give any one reason why a radio is better than a television as a means of communication in Uganda.
- 
18. Why is it not advisable to transport tomatoes from Uganda to Europe using water transport?
- 
19. Give any one contribution of Asians to the economic development of Uganda.
- 
20. How has the government tried to solve the problem of water shortage in the drier parts of Uganda?
-

21. Apart from mountains, highlands, rift valleys, give any one other physical feature of Uganda.
- 
22. State any one element of a map which tells the reader what a map is all about.
- 
23. Suggest any one way in which people in the rural areas of Uganda can fight poverty.
- 
24. Give any one reason why Ugandans should respect the National flag.
- 
25. Why is Uganda called a land-locked country?
- 
26. Give any one agricultural activity done in rural areas during the wet season.
- 
27. State any one danger which children can meet on the way to and from school.
- 
28. What is natural vegetation?
- 
29. Give any one reason why all the people in Uganda should keep law and order.
- 
30. What is the use of barometer?
- 
31. Give one reason why cattle keepers move from place to place.
- 
32. Why did Omukama Kabalenga of Bunyoro rebel against the British?
-

The graph below shows average monthly rainfall and temperature recorded at a weather station. Study it carefully and use the information to answer questions 33 to 36 that bellow.



33. In which month was the average rainfall highest?
- 
34. In which month was there no rainfall at all?
- 
35. What was the lowest average temperature recorded at the station?
- 
36. What relationship do you notice between average rainfall and average temperature in the graph?
- 

For each of the questions 37 to 40 answer EITHER the Christian OR Islamic question but not both. No marks will be awarded to a candidate who attempts both alternatives.

37. Either: What message did prophet Isaiah preach?
- 
- Or: What is the importance of prophet in Islam?
- 
38. Either: State the most important commandment that Jesus taught His disciples.
- 
- Or: Give any one reason why female Muslims do not sit in the same place with males in the mosque during prayers.
-

39. Either: Moses was chosen by God as a leader. Which group of people did Moses lead?

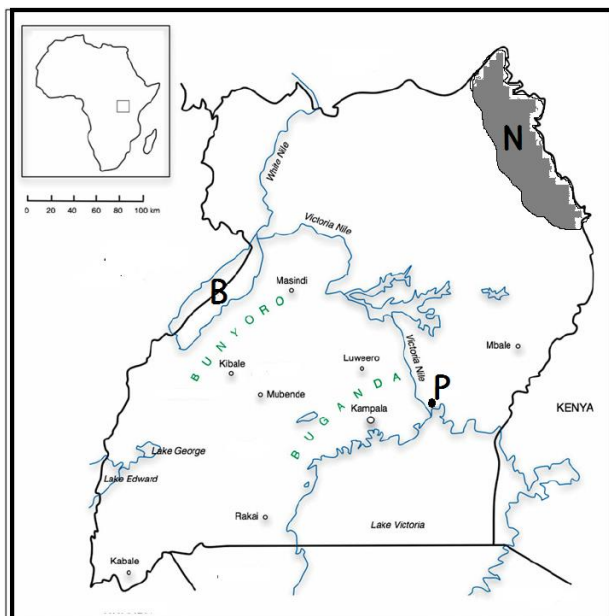
Or: Why is Musa remembered in Islam?

40. Either: What lesson does Christian learn from the story of the prodigal son?

Or: Give the meaning of Ibadat.

### **SECTION B: 60 MARKS**

41. Study the map of Uganda given below and use it to answer the question that follows.



a. Name the town marked with the letter P.

b. Name the lake marked with the letter B.

c. Show with the letter R the position of Rwanda on the map.

d. Give the main occupation of the people who live in the shaded area marked with the letter N.

42. a. Give any two basic human needs.

i. \_\_\_\_\_

ii. \_\_\_\_\_

b. Give any two reasons why it is difficult for people to satisfy their needs.

i. \_\_\_\_\_

ii. \_\_\_\_\_

43. a. State any two reasons why road transport is the most common type of transport used in East African.

i. \_\_\_\_\_

ii. \_\_\_\_\_

b. Give any one advantage of air transport over road transport.

44. a. State any one cash crop introduced in Uganda by the colonialists.

b. Give any three reasons why cash crops were introduced in Uganda colonialists.

i. \_\_\_\_\_

ii. \_\_\_\_\_

iii. \_\_\_\_\_

45. a. A factory producing posho (maize milling factory) has been built in a place suggest any two ways in which people living near that place will benefit from the factory.

i. \_\_\_\_\_

ii. \_\_\_\_\_

b. Suggest any two ways in which the factory will benefit from the people living near the place.

i. \_\_\_\_\_

ii. \_\_\_\_\_

46. a. Name the main rebellion which opposed the German rule in Tanganyika / Tanzania.

b. Give a reason why the rebellion was given the name you have mentioned above.

c. Give any two causes of that rebellion.

i. \_\_\_\_\_

ii. \_\_\_\_\_

47. a. What is a common Market?

b. Name any one common market in Africa.

c. State any two benefits of a common market to its member states.

i. \_\_\_\_\_

ii. \_\_\_\_\_

48. a. In which country is the Gezira Irrigation Scheme found?

\_\_\_\_\_

b. In which way is the River Nile important in the Gezira Irrigation scheme?

\_\_\_\_\_

c. Suggest any two problems, which the people in the Gezira Irrigation scheme face.

i. \_\_\_\_\_

ii. \_\_\_\_\_

49. a. Give any two reasons why Kabaka Edward Mutesa I invited missionaries to come to Buganda.

i. \_\_\_\_\_

ii. \_\_\_\_\_

b. Suggest any two problems, which the early missionaries faced in Uganda.

i. \_\_\_\_\_

ii. \_\_\_\_\_

50. a. Give any two factors which influence the distribution of population in Uganda.

i. \_\_\_\_\_

ii. \_\_\_\_\_

b. Suggest any two ways in which the government can control population growth in Uganda.

i. \_\_\_\_\_

ii. \_\_\_\_\_

51. a. Name any two main resources of Africa.

i. \_\_\_\_\_

ii. \_\_\_\_\_



b. Give any two reasons why Africa has few industries.

i. \_\_\_\_\_

ii. \_\_\_\_\_

52. a. Give any one reason why Kabaka Daudi Chwa did not sign the Buganda agreement.

\_\_\_\_\_

b. Give any three results of the Buganda agreement.

i. \_\_\_\_\_

ii. \_\_\_\_\_

iii. \_\_\_\_\_

For each of the questions 53 to 55, answer EITHER the Christian OR Islamic questions but not both. No marks will be awarded to a candidate who attempts both alternatives.

53. EITHER:

a. Give any one reason why God created Adam.

\_\_\_\_\_

b. In which way the creation of Adam different from Adam different from that of other creatures?

\_\_\_\_\_

c. How did Adam sin against God?

\_\_\_\_\_

d. Whom did Adam blame for his sin.

\_\_\_\_\_

OR:

a. Give any one reason why Allah created Adam.

\_\_\_\_\_

b. In which way was the creation of Adam different from that of other creatures?

\_\_\_\_\_

c. How did Adam sin against Allah?

\_\_\_\_\_

d. Whom did Adam blame for his sin.

54. EITHER:

a. State any two reason why Christian pray as soon as they wake up in the morning.

i. \_\_\_\_\_

ii. \_\_\_\_\_

b. Give any two symbols of a Christian family.

i. \_\_\_\_\_

ii. \_\_\_\_\_

OR:

a. What is Tayammum?

\_\_\_\_\_

\_\_\_\_\_

b. Give any one condition under which Tayammum is done.

\_\_\_\_\_

c. Give any two things that may be used for Tayammum.

\_\_\_\_\_

55. This question is to be answered by all candidates.

Give any four similar beliefs of both Christians and Moslems.

i. \_\_\_\_\_

ii. \_\_\_\_\_

iii. \_\_\_\_\_

iv. \_\_\_\_\_

[illegible]

[illegible]