

# **SOCIAL STUDIES MARKING POINTS**

**Compiled by Tr. Meris Nshuti**

**0747638023**

1. What is a picture?

- A picture is a representation of an object as drawn from the side. - A picture is a representation of an object drawn from sides.

(Reject: ... aside.)

2. What are physical features?

- Physical features are landforms of an area.

(Reject: ... natural landforms of an area)

3. What is weather?

- Weather is the average conditions of an area recorded for a short time.
- Weather is the average conditions of an area recorded for a short period. (Reject: ... for a short period of time.)

4. What is climate?

- Climate is the average weather conditions of an area recorded for a long time.
- Climate is the average weather conditions of an area recorded for a long period. (Reject: ... long period of time.)

5. Name the closest point between Africa and Europe.

Strait of Gibraltar

(Reject: Straight of Gibraltar)

6. Write any one human activity that reduces rainfall.

Charcoal burning/ Lumbering, etc.

(Reject: Swamp drainage, deforestation, etc.)

Get the difference between human activities and human practices

7. How are Uganda and Kenya related in terms of nations? - Both are heterogeneous nations

- Both Uganda and Kenya are heterogeneous nations

(Reject: ... heterogenous nations)

Teach the difference between monolithic and heterogeneous nations.

8.

Cape blanc

(Reject: Cape blank)

Teach learners the spellings of Cape blanc and Cape Verde. They should not misspell them as Cape blank, and or Cape Verd.

9. Why is Kabale cooler than Kampala?

- Kabale is on a higher altitude than Kampala - Kabale is on a higher altitude

(Reject: Kabale is on a high altitude)

This is a comparison question. Answer using higher, not high, since the question uses the adjective cooler, not cool.

10. Name the water weed that hinders transport on Lake Victoria.

Water hyacinth

(Reject: Water haycinth)

11. In which image was man created according to Islam?

Best image

(Reject: Allah's image)

Islam teaches that there is nothing that can be likened to Allah according to Qur'an 112 : 4

وَلَمْ يَكُنْ لَهُ كُفُوًا أَحَدٌ

And there is none comparable unto Him.

Man was created in the best image according to Qur'an 95: 4

لَقَدْ خَلَقْنَا الْإِنْسَانَ فِي أَحْسَنِ تَقْوِيمٍ

**Surely We created man of the best stature**

In a word, it is an insult to His Majesty to think that we, humans, are like Allah in any form.

12. In which units is rainfall measured? Millimeters

(Reject: Milimeters/ Millimetres)

13. Name the oldest stone age site in East Africa.

Olduvai gorge

(Reject: Olduval gorge / Oldvai gorge/ Olduvai George / Bigobyamugenyi)

Olduvai gorge is where the oldest skull of man was discovered, making it the oldest stone age site.

14. What name is given to crops that take over a year to mature?

Perennial crops

(Reject: Perrenial crops)

Teach the difference between perennial and annual crops.

15. Write IBEACO in full.

Imperial British East Africa Company

(Reject: Imperial British East African Company)

16. Write the British governor who turned Makerere College into a university.

Phillip Mitchell

(Reject: Philip Mitchell)

17. Write RGS in full. Royal Geographical Society

(Reject: Royal Georgraphical Society / Royal Georgraphic Society)

18. Who founded PARMEHUTU in Rwanda?

Gregoire Kayibanda

(Reject: Gregory Kayibanda)

19. Why do people in the Equatorial region build houses with slanting roofs?

For easy flow of rainwater

(Reject: ... rain water / For decoration/ To regulate temperature/ For shelter/ To get where to sleep)



20. What does the map symbol below represent?



Hill

(Reject: Contour)

Teach the difference between a hill and a contour i.e.

			
Hill	Hill	Contour	Contour

21. Name the map symbol below.



Waterfall

(Reject: Water fall)

Teach learners the difference between waterfalls and water dams

22. What is a home and its surroundings called?

Homestead

(Reject: Home stead)

23. Write the currency that was introduced by the Arabs in East Africa. Cowrie shells

(Reject: Cowerie shells / Cowres shells / Cowrise shells / Cowire shells)

24. Give one product obtained from tobacco.

Cigarettes

(Reject: Cigaretes / Cigarretes)

25. Name the founder of IBEACO.

Sir William Mackinnon

(Reject: Sir William Makinon / Sir William Mackinon)

26. Which school symbol is shown below?



School signpost

(Reject: Signpost / Sign post / School sign post / School badge)

27. Who were caliphs?

Caliphs were successors of Prophet Muhammad.

(Reject: ... successors of Prophet Muhammad)

28. How do mangrove forests help the transport sector?

Mangrove forests produce waterproof timber for boat making

(Reject: ... water proof ...)

29. What name is given to heavenly messengers of Allah?

Angels

(Reject: Angles)

30. On which mountain did Prophet Musa receive the ten commandments?

- Mt. Sinai

- Mt. Horeb

(Reject: Mt. Sinial/ Mt Horrible)

31. What caused the fall of man? Man ate the forbidden fruit.

(Reject: Man ate the for bidden fruit)

32. Who signed the Buganda agreement of 1900 on behalf of the British?

Sir Harry Johnston

(Reject: Sir Harry Johnstone)

33. Give a reason why people in Karamoja build muddy houses. To reduce heat

- To regulate temperature

(Reject: For shelter/ To get where to sleep)

34. Name the president of Uganda who killed Bishop Janani Luwum.

Idi Amin Dada

(Reject: Idd Amin Dada)

35. What is a swamp?

A swamp is a waterlogged area covered with vegetation.

(Reject: A swamp is a waterlogged area / A swamp a water logged area covered with vegetation)

36. Name the son of Prophet Ibrahim that was about to be sacrificed.

Prophet Ismail

Ismail

(Reject: Ishaq / Isaac / Prophet Ishaq)

Isaac is what the Bible teaches, but the Qur'an teaches Ismail

37. Who chaired the Berlin conference of 1884 - 1885?

Chancellor Otto von Bismarck

(Reject: Chancellor Ottovon Bismarck)

38. Write the body that organises elections in Uganda.

Electoral Commission

(Reject: Electral Commission)

39. What name is given to an organization that unites former colonies of Britain?

- Commonwealth

- Commonwealth of Nations

(Reject: Common Wealth)

40. By what process was Lake Victoria formed?

By downwarping

(Reject: ... down warping)

41. Name the kingdom that broke away from Bunyoro in 1830.

Toro kingdom

(Reject: Tooro kingdom)

42. Write UNHCR in full.

United Nations High Commissioner for Refugees

(Reject: ... High Commission for Refugees)

43. What name is given to a country without a seaport?

Landlocked country

(Reject: Land locked country)

44. Write the highest peak in Uganda?

Margherita peak

(Reject: Margharita peak)

45. What evidence shows that Mt. Rwenzori crosses the ice line?

Mt. Rwenzori is snow - capped throughout the year.

(... snowcapped ...)

46. Why does Mt Elgon have no snow on its peak? The peak of Mt Elgon does not cross the snow line

(Reject: ... snowline)

47. What type of wood is produced by Budongo forest?

Hardwood

(Reject: Hard wood)

48. Name the type of wood produced by planted forests such as Magamaga forest.

Softwood

(Reject: Soft wood)

49. Write the type of natural vegetation which produces softwood.

Mediterranean vegetation

(Reject: Equatorial vegetation)

50. Define the term migration.

Migration is the movement of large numbers of people from one place to another for settlement

(Reject: Migration is the movement of large numbers of people from one place to another)

51. What is a community?

A community is a group of people living or working together in a particular area

(Reject: ... living and working together in a particular area)

Some people live together, but do not work together.

52. Why is Uganda called a landlocked country?

- Uganda does not have a seaport

- She does not have a seaport

(Reject: Uganda does not have a sea port / It does not have a seaport)

Uganda is addressed with 'her' because she is a motherland

53. What are coastal countries?

- Coastal countries are countries that have coastlines

- Coastal countries are countries that have seaports  
(Reject: ... sea ports/ ... coast lines)

54. Name the type of electricity produced by fast running water.

Hydroelectricity

(Reject: Hydro electricity / Hydro electric power)

55. Write the highest peak of Mt. Moroto.

Sokdek peak

(Reject: Sokdak peak)

56. What is the direction of Rwanda from Uganda?

- Southwest/South West/SW
- Southwestern direction

(Reject: South west / South western direction)

Write semi - cardinal points especially as single words, e.g. Southwest, Southeast, Northeast, Northwest

Tell the direction starting at the from point

57. Why is Prime Meridian called Greenwich Meridian?

- Prime Meridian crosses Greenwich city in London
- It crosses Greenwich city in London

(Reject: Prime Meridian crosses Green wich city in London / It crosses Green wich city in London)

58. What are deciduous trees?

Deciduous trees are trees which shed their leaves during dry season

(Reject: Deciduous trees are trees which shed off their leaves during dry season / Deciduous trees are trees which shade their leaves during dry season)

59. Define the term population.

Population is the total number of people who live in an area

(Reject: Population is the number of people living in an area)

60. What is the growing of crops for home consumption and the surplus for sale called?

Subsistence farming

(Reject: Subsistance farming)

61. What is the major role of the police?

- To enforce law
- To enforce order



- To enforce law and order
- (Reject: To keep law / To keep order / To keep law and order)

It is the duty of the citizens to keep law and order

62. Name any one group of people that keep law and order.

Citizens

(Reject: The police)

63. Write the first woman to be appointed to the LEGCO in Uganda.

- Pumla Ellen Kisosonkole
- Pumla Kisosonkole

(Reject: Pulma Kisosonkole)

64. Write the king of Buganda who killed the Uganda martyrs.

- Kabaka Mwanga II
- Kabaka Daniel Basamula Mwanga
- Mwanga II
- Daniel Basamula Mwanga

(Reject: Kabaka Mwanga)

65. Which area is considered the cradle land of the Nilotics.

Bahr - el - Ghazal

(Reject: Bahr - el – Ghazel)

66. Name the pastoral tribe that lives both in Kenya and Tanzania.

Masai

(Reject: Maasai)

67. Apart from John Hanning Speke, name the first explorer to enter into the interior of East Africa.

Richard Burton

(Reject: Richard Button)

68. Name the social event that brings mourners together.

Burial ceremony

(Reject: Burrial ceremony)

69. Name one group of people who practise human sacrifice.

Witch doctors

(Reject: Wich doctors / Which doctors)

70. What name is given to animals which live in water?  
Aquatic animals  
(Reject: Acquatic animals)
71. In which direction did Henry Morton Stanley circumnavigate around Lake Victoria?  
Anticlockwise direction  
(Reject: Anteclockwise direction / Ant clockwise direction)
72. Write the commonest ball games played at school.  
- Football  
- Netball  
- Volleyball  
(Reject: Foot ball / Net ball / Volley ball)
73. What do you call the act of stopping being angry with someone that has offended you?  
Forgiveness  
(Reject: Forgive ness)
74. Write the major tourist attraction that can be found at Mgahinga National Park and Bwindi Impenetrable National Park.  
Mountain gorillas  
(Reject: Mountain gorillas / Mountain gorrillas / Mt gorillas/ Mt Gorillas)  
  
Uganda has Mt. Rwenzori, Mt. Elgon, etc. , but nothing like Mt. Gorillas!
75. Which kingdom in Uganda was not restored by the 1995 Constitution?  
Ankole kingdom  
(Reject: Ankore kingdom)
76. Name the first Indian/Asian to open a shop in Kampala.  
Allidina Visram  
(Reject: Aldina Visram)
77. Name the Portuguese who discovered the shortest route to India.  
Vasco da Gama  
(Reject: Vasco Da Gama)
78. Which mineral was recently discovered in the Albertine region?  
Crude oil  
(Reject: Clude oil / Clyde oil)

79. How was the formation of L. Albert similar to that of the Great Karas mountains in Namibia?
- Both were formed by faulting
  - Both L. Albert and the Great Karas mountains were formed by faulting (Reject: Both were formed by faulting)
80. Which cloth was introduced by the Chwezi in Uganda?
- Bark cloth
- (Reject: Back cloth)
81. Name the pastoral tribe that occupies Northeast Uganda.
- Karimojong
- (Reject: Karimajong)
82. Write the delicate weather instrument that measures wind speed.
- Anemometer
- (Reject: Anenometer / Anemometre)
83. What is R. Volta's major dam? Akosombo dam
- (Reject: Akasombo dam)
84. Write the largest city in the East African Community.
- Kinshasa
- (Reject: Kinshasha)
85. Name the element of weather that leads to floods.
- Rainfall
- (Reject: Rain fall / Rainfal)
86. How did the Alur come into existence?
- Through intermarriage between the Nilotics and the Lendu
- (Reject: ... inter marriage ...)
87. Name the election held to fill a vacant political position.
- By - election
- (Reject: By election / Bye - election)
88. What do you call the laws made by local authorities?
- Bye – laws
  - Bylaws
- (Reject: By - laws)
89. Why does a compass needle rest in the north when freely suspended?

- A compass needle is made up of a magnet
- It is made up of a magnet

(Reject: ... magnet)

90. Who founded GEACO?

- Dr Carl Peters
- Carl Peters

(Reject: Dr Carl Peter / Carl Peter)

91. Name Uganda's major airport.

Entebbe International Airport

(Reject: Entebbe International Air port)

92. What type of coffee is commonly grown on the slopes of Mt. Elgon/Rwenzori/Kilimanjaro?

Arabica coffee

(Reject: Arabic coffee / Arabical coffee)

93. Name the British official who called Uganda the pearl of Africa.

Winston Churchill

(Reject: Winston Church Hill)

94. Write the president who called back the Indians back to Uganda.

Yoweri Kaguta Museveni

(Reject: ... Museven)

95. Which river is associated with Maji Maji rebellion in Tanzania?

R. Rufiji

(Reject: R. Rufigi)

96. Which disaster recently affected the people of Bududa?

Landslides

(Reject: Land slides)

97. Name the mountain ranges in South Africa that were formed as a result of volcanicity

Drakensberg mountains

(Reject: Drankensberg mountains / Drakensburg mountains)

98. What title is given to the cultural head of the Iteso?

Emorimori

(Reject: Emori mori)

99. Midwife

(Reject: Mid wife / Middle wife)

100. Why are there no crocodiles/ hippos in Kidepo Valley National Park?

There are no large waterbodies in Kidepo Valley National Park

(Reject: ... water bodies ...)

101. Apart from Kalangala, name one island district found in the largest lake in Uganda.

- Buvuma
- Buvuma district

(Reject: Buvuma island /Bwuma district)

102. Apart from Kalangala island, name one island found in the largest lake in Uganda.

- Buvuma island
- Buvuma

(Reject: Buvuma district / Bwuma island)

103. Write GMT in full.

Greenwich Mean Time

(Reject: Green wich Meridian / Green which meridian / Green witch meridian)

104. Draw a map symbol for a hut



(Reject: )

105. Why is 9th October an important day in Uganda?

To remember when Uganda got her independence

(Reject: 9th October is when Uganda got her independence / It is when Uganda got her independence)

106. Why do Ugandans honour 9th October every day? - To celebrate when Uganda got her independence

- To remember when Uganda got her independence

(Reject: 9th October is when Uganda got her independence / It is when Uganda got her independence)

107. Why is 9th October 1962 an important date in Uganda?

- 9th October 1962 is when Uganda got her independence
- 9th October 1962 is when Uganda got independence

(Reject: 9 October 1962 is when Uganda got its independence/ To remember when Uganda got her independence)

Uganda is a motherland, so she can be addressed as a mother.

108. Draw the Equator on the map below.

(Reject: The Equator that is drawn in pencil / The Equator that does not cross L. Victoria and L. George)

109. How was the formation of Mt Moroto similar to that of Mt Elgon?

- Both were formed by volcanicity
- Both Mt Moroto and Mt Elgon were formed by volcanicity (Reject: They were both formed by volcanicity)

110. Which country borders Uganda to the east?

Kenya

(Reject: Democratic Republic of Congo / DRC)

111. Which country is bordered by Uganda to the east?

- Democratic Republic of Congo
- DRC

(Reject: Kenya)

Mind the way this question is phrased, and you will realise Kenya is not correct in this case.

112. What name was given to the boats that brought the Arabs in East Africa?

Dhows

(Reject: Does / Dows)

113. Child rights

(Reject: Children rights)

114. State any one advantage a boda boda has over a taxi. A boda boda can easily go through a traffic jam

(Reject: A boda boda is not caught by a traffic jam unlike a taxi)

Both a boda boda and a taxi are actually caught by traffic jam

115. Write any one role of a tribal leader.

- A tribal leader settles tribal disputes/ A tribal leader settles disputes among members of the tribe
- A tribal leader chairs tribal meetings / A tribal leader chairs meetings of the tribe (Reject: A tribal leader settles disputes / A tribal leader chairs meetings)

Encourage learners to give roles tailored to tribal leaders, and not general roles of leaders

116. Why is Miombo woodland in Central Tanzania not good for settlement?

Miombo woodland is infested with tsetse flies

(Reject: Miombo woodland is infested by tsetse flies)

117. Name the body that unites all religious faiths in Uganda.

- Inter - Religious Council of Uganda - IRCU

(Reject: Uganda Joint Christian Council / UJCC / Inter – Religious Council for Uganda/ Inter Religious Council of Uganda)

UJCC unites only Christian faiths, but not all faiths in Uganda

118. Write UNBS in full.

Uganda National Bureau of Standards

(Reject: Uganda National of Statistics / Uganda Bureau of Statistics / Uganda National Bureau of Standards)

Let the learners get to know the difference between UNBS and UBOS – Uganda National Bureau of Standards and Uganda Bureau of Statistics, and their different roles.

Learners tend to confuse URA and UNRA as well. Uganda Revenue Authority and Uganda National Roads Authority

119. Write the general name given to the first four books of the New Testament of the Bible

Gospels

(Reject: Gospel books)

120. Name the first gospel in the New Testament

Gospel according to Matthew

(Reject: Matthew)

121. Write the date and the year Prophet Muhammad born?

12th Rabbil Awal 571 AD

(Reject: 12th Rabbil Awal 571 AH)

122. How does Uganda's membership to the East African Community benefit her citizens?

- Citizens enjoy peace
- Citizens enjoy security
- Citizens get a wider market for their goods

(Reject: Uganda enjoys peace / ... enjoys a wider market / ... gets a wider market for her goods)

Let learners know benefits of common markets like EAC to member countries, and to member citizens

123. Write any one reason why most households in Uganda are still living in poverty.

- Due to laziness
- Due to sickness
- Due to unemployment/ ... lack of jobs

(Reject: Due to corruption / ... lack of skilled labour)

Do not give reasons for under development on a question like this

124. State any one method the government is using to eradicate poverty among Ugandans.

- Giving soft loans to farmers -  
Creating jobs to people

(Reject: Points that state the roles of the government to its citizens, and accept methods the government uses to stop poverty)

125. Name the stone age site that is believed to have been the headquarters of the Chwezi.

Bigobyamugenyi

(Reject: Bigo byamugenyi)

126. Which stone age site is found in Murchison Falls National Park?

Paraa stone age site

(Reject: Paara stone age site)

Teach for the mastery of stone age sites in Uganda and East Africa at large. Let learners draw a map symbol for a stone age site, and talk about archaeological sites famous for rock paintings

127. Name the mass media that promotes literacy.

Newspapers



(Reject: News papers)

128. Wildlife

(Reject: Wild life)

129. How is latitude different from line of latitude?

Latitude is the distance of a place north or south of the Equator while a line of latitude is an imaginary line drawn on a map from east to west

(Reject: ... line on a map running from east to west)

Let learners discuss terms like latitude, latitudes, line of latitude, longitude, longitudes, line of longitude, etc.

Latitudes and longitudes are measured in degrees, and latitudes are parallel. Latitudes stop at 090°.

The area that lies between the tropics is the tropical region, and beyond the tropical region is the temperate region

130. Name the line of longitude that determines time.

Greenwich Meridian

Prime Meridian

(Reject: Green wich meridian / International Date line)

131. Which line of longitude determines dates?

- International Date Line -

IDL

(Reject: International Dateline / Greenwich Meridian)

132. Why are children encouraged to kneel down while greeting elders?

To promote morals

(Reject: To promote good morals)

Morals are good, so no need to say good morals. That's repetition.

133. Name the first European to cross Nandi and Masai land.

Joseph Thomson

(Reject: Joseph Thompson)

134. Name the explorer who circumnavigated around L. Victoria.

- Henry Morton Stanley
- H.M. Stanley

(Reject: Henry Mutton Stanley / Henry Morton Stanely)

135. Apart from fault mountain, give another name for a block mountain.

Horst mountain

(Reject: Host mountain)

136. What type of authority is possessed by God?

Divine authority

(Reject: Devine authority)

137. Ozone layer

(Reject: O zone layer / Ozonal layer)

138. Name the seaport that handles most of Uganda's imports and exports.

Port Mombasa

(Reject: Mombasa)

139. In which town was the construction of the Uganda railway began?

Mombasa

(Reject: Port Mombasa)

140. Name the Christian sect that sent the Church Missionary Society to Uganda in 1877.

Anglicans

(Reject: Angelicans)

141. River Mobuku

(Reject: River Mubuku)

142. Write the major cash crop grown in the West Nile sub - region.

Tobacco

(Reject: Tobbaco / Tobbacco)

143. Name the holy book for Christians.

Bible

(Reject: bible)

144. What is child abuse?

Child abuse is the violation of a child's rights physically, mentally, sexually or emotionally

(Reject: ... mistreatment of a child's rights)

145. Child rights

(Reject: Children's rights)

146. State the type of vegetation that covers the largest part of Uganda.

Natural vegetation

(Reject: Savannah vegetation / Savanna vegetation)

Savannah/ Savanna vegetation is a type of natural vegetation)

147. Write NEMA in full.

National Environment Management Authority

(Reject: National Environmental Management Authority)

148. Write two types of communication.

(i) Verbal communication

(ii) Nonverbal communication

(Reject: Modern communication and Traditional communication)

Modern and traditional communication

Forms, not types of communication

149. Name the largest natural forest in Uganda

Budongo forest

(Reject: Mabira forest)

Mabira forest is no longer the largest natural forest in Uganda due to encroachment on its area by investors

150. Write the largest national park in East Africa

The Great Ruaha National Park

(Reject: Serengeti National Park)

151. Define a continent.

A continent is a mass of land completely surrounded by water.

(Reject: ... a large mass of land ...)

152. Jakob Erhardt

(Reject: Jacob Erhard)

153. Name the line of latitude marked X.

Tropic of Cancer  
(Reject: Tropical of Cancer)

Teach the learners the spellings of Tropic of Cancer and Tropic of Capricorn

154. Hubert Maga  
(Reject: Herbert Maga)

155. Gamal Abdel Nasser  
(Reject: Gamel Abdel Nasser)

156. Jan Van Riebeeck  
(Reject: Jan Von Riebeck)

157. Who founded British South Africa Company (BSACO)?  
Cecil Rhodes  
(Reject: Cecil Rides)

158. Diallo Telli  
(Reject: Diallo Teli)

159. Bartholomew Diaz / Bartolomeu Dias  
(Reject: Batholomew Diaz)

160. Port Sagres  
(Reject: Port Sagress)

161. Harmattan winds  
(Reject: Hamattan winds / Hammartan winds)

162. What was the largest slave market in West Africa?

Goree island

(Reject: Gore island / Goore island)

163. Heinrich Barth

(Reject: Henrich Bath)

164. Samora Machel

(Reject: Samora Michael)

165. Write the first Kenyan to be appointed to the LEGCO.

Eliud Mathu

(Reject: Eluid Mathu)

166. Name the official who signed the 1955 Namirembe Agreement on behalf of Buganda.

- Michael Kintu

(Reject: Micheal Kintu)

167. Apart from Sennar dam, name one dam that supplies water to Gezira Irrigation Scheme.

Jebel Aulia dam

(Reject: Jabel Aulia dam)

168. Lake Mweru

(Reject: Lake Meru)

169. Write River Niger's major dam.

Kainji dam

(Reject: Akosombo dam)

170. Name R. Volta's major dam.

Akosombo dam

(Reject: Akasombo dam/ Kainji dam/ Kariba dam)

171. Name River Zambezi's major dam in Mozambique.

- Cabora Bassa dam
- Cahora Bassa dam

(Reject: Cabbora Bassa dam / Kabora Bassa dam)

172. Write R. Zambezi's major dam.

Kariba dam

(Reject: Akosombo dam)

173. Name the major dam of River Congo.

Nzilo dam

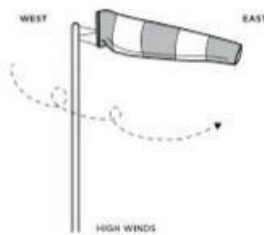
(Reject: Nziro dam)

174. Name the largest island country in Africa.

Madagascar

(Reject: Magadascar)

175. What name is given to the weather instrument below?



Windsock

(Reject: Wind sock)

176. Name the weather instrument shown in the diagram below.



Wind vane

(Reject: Windvane)

177. Apart from Mt Kilimanjaro and Mt Meru, write one mountain in Tanzania that was formed by volcanicity. Ol Doinyo Lengai

(Reject: Oldoinyo Lengai)

178. Write any one district found in Karamoja sub – region apart from Abim and Katakwi. Kaabong district

(Reject: Kaboong district)

179. What name is given to an area served by a seaport?

Hinterland

(Reject: Hinter land)

180. What is the other name for Equatorial vegetation?

Tropical rainforest / Tropical rainforests)

(Reject: Tropical rain forest / Tropical rain forests)

181. What does the red colour of the Uganda national flag symbolise?

It symbolises brotherhood

(Reject: ... brother hood ...)

182. Write one historical sentence on Kenneth Borup.

Kenneth Borup introduced fast growing cotton seeds in Uganda

(Reject: ... first growing cotton seeds in Uganda)

183. Of what use is a ceilometer at a weather station?

A ceilometer measures cloud cover

(Reject: ... cloud cover)

184. Name the first hospital to be built in Uganda.

Mengo hospital

(Reject: Mulago hospital)

185. What was the use of the tool below by the early man?



To trap fast running animals  
(Reject: To trap first running animals)

186. What is the major physical feature that creates a natural boundary between Uganda and Democratic Republic of Congo? Rift valley  
(Reject: Riftvalley)

187. How did the serpent lead to the fall of man?  
- The serpent tempted Hawah /Eve to eat the forbidden fruit  
- It tempted Hawah /Eve to eat the forbidden fruit  
(Reject: The serpent tempted Eve to eat the for bidden fruit)

188. Glacial lake  
(Reject: Glacier lake)

189. Give a reason why coastal areas experience high temperatures.  
Coastal areas are on a low altitude  
(Reject: .... lower altitude. / ... alow altitude)

This is not a comparison question, so don't use the comparative 'lower'.

190. Why does the sun rise earlier in Mbale than Kaseses?  
Mbale is farther east than Kasese  
Mbale is farther east  
(Reject: .... far east ....)

This is a comparison question, so use the comparative 'farther', not far.

191. Suggest the tax paid by civil servants.  
- PAYE



- Pay As You Earn

(Reject: Pay as you earn)

PAYE is an acronym, so each letter must be capitalised since it stands for a particular word.

192. Why do people in highland areas control soil erosion?

- To protect the environment
- To conserve the environment
- To be able to carry out farming

(Reject: By terracing/ contour ploughing/ strip cropping)

This is a why, not how question. Guide learners on answering why, how and other critical thinking questions

193. Why is a rain gauge placed in an open area?

To avoid obstruction of raindrops so as to take accurate measurements

(Reject: ... rain drops ....)

194. Write the process that led to the formation of rift valley lakes.

By faulting

(Reject: By downwarping)

195. Name the first ethnic group to enter East Africa.

- Cushites
- Hamites
- Kushites

(Reject: Bantu)

Guide learners that Bantu were the first ethnic group to enter Uganda, but not East Africa as a whole.

196. In the space below, draw a map symbol for a canal.

(Reject: )

197. Why are people advised not to live near game parks? People may be attacked by dangerous wild animals

(Reject: Presence of dangerous wild animals)

Animals can't be dangerous to people unless they attack them

198. Give any one role of a school nurse. A school nurse takes care of sick pupils

(Reject: A school nurse treats sick pupils)

Treating is for a doctor, not the nurse.

199. Name the major cash crop grown in Kericho district of Kenya.

Tea

(Reject: Rice)

200. Write the official who signed the 1955 Namirembe Agreement on behalf of the British.

Sir Andrew Cohen

(Reject: Sir Keith Hancock)

201. Who signed the 1955 Namirembe Agreement on behalf of Buganda?

Sir Edward Mutesa II

(Reject: Michael Kintu)

202. What is the main role of a carpenter in the community?

To make wooden furniture

(Reject: To make furniture)

A carpenter only wooden furniture.

203. Name the example of material culture drawn below.

Bow and arrow

(Reject: Bow/ arrow)

A bow and an arrow work hand in hand i.e. a bow cannot work without an arrow

204. Mention the name of sexual abuse committed by people to children.

Defilement

(Reject: Rape)

Rape is sex played by force without the consent of a person, and it is committed even to adults. However, the crime a person commits by playing sex with a child whether by force or willingly is defilement.

205. Write any one type of migration today Internal /External migration

(Reject: Bantu/ Luo migration/ Rural – Urban migration, etc.)

206. Why is Friday an important day for Muslims?

It is a special day for worship among Muslims

(Reject: It is used for worship)

207. Write PARMEHUTU in full.

The Hutu Emancipation Movement Party

(Reject: ... any full form without the word ‘movement’)

208. What is vegetation?

Vegetation is the plant cover of an area

(Reject: Vegetation is the green plant cover of an area)

Some plants are not green

209. On which mountain was the Qur’an revealed?

Mt. Noor

(Reject: Mt. Hira)

Hira is a cave on Mt. Noor