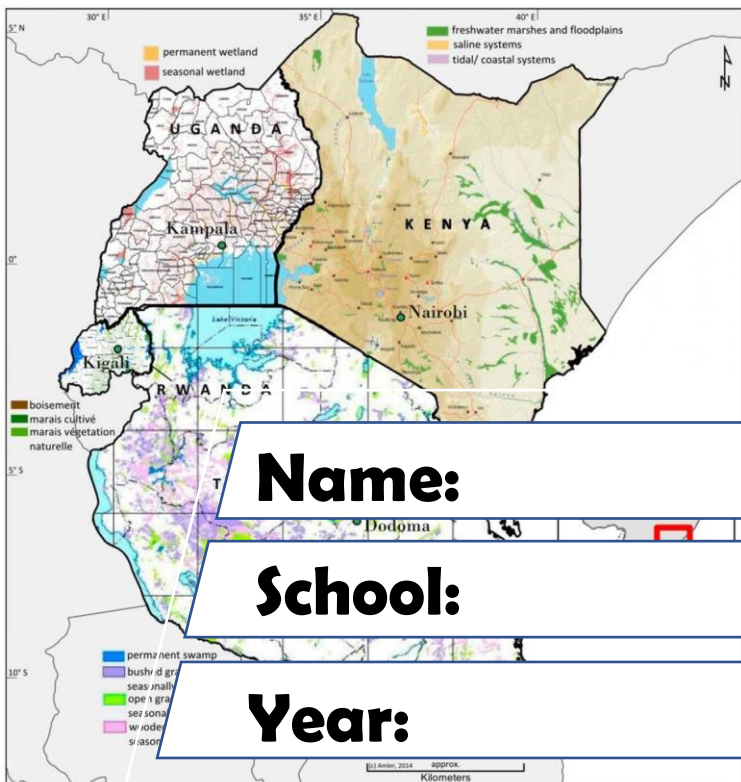


Tekart

Social Studies Revision

6



Name:

School:

Year:

Table of Contents

PAPER 1.....	3
PAPER 2.....	13
PAPER 3.....	24
PAPER 4.....	34
PAPER 5.....	44
PAPER 6.....	54
PAPER 7.....	65
PAPER 8.....	76
PAPER 9.....	86
PAPER 10.....	96
PAPER 11.....	106
PAPER 12.....	114
PAPER 13.....	121
PAPER 14.....	131
Section B	135
PAPER 15.....	142

For more Booklets of this kind, Visit www.tekartlearning.com or call [+256754895241](tel:+256754895241)

PAPER 1

1. Name **one** semi cardinal point of a compass.

2. Give **one** way a factory can benefit people around.

3. Mention **one** river which flows into Lake Victoria.

4. State **one** duty of the Bank of Uganda.

5. How does the fencing of a school promote its security?

6. Why is central Tanzania not good for cattle keeping?

7. Which explorer followed R. Nile from its mouth?

8. Give **one** reason why monkeys live in forests.

9. Why is it difficult to control population growth in Uganda?

10. Give **one** way in which the vegetation in a compound helps to control soil erosion.

11. Name the land locked country in the North of Kenya.

12. State **one** duty of veterinary officers in a district.


13. In which way does security promote development in an area?

14. Which missionary contributed to the economic development of Uganda?

15. Give **one** reason why many lions are found in savannah vegetation.

16. How is a rainy weather important to farmers?

17. **In the space below draw a traffic road sign for roundabout.**



18. How are legends important to people?

19. How has drought affected people in most parts of East Africa?

20. Write **one** organ of the East African community.

21. State **one** factor which influenced the settlement patterns of ethnic groups in East Africa.

22. Why should every community be with a midwife?

23. In which **one** way can accidents be reduced on Lake Victoria?

The climatic table below was recorded from one of the districts of Uganda.

Use it to answer the questions.

Rain(mm)	80	80	150	150	140	120	100	170	230	220	120	90
Temp (0°C)	26	26	25	25	25	25	24	26	24	26	25	26
Months	J	F	M	A	M	J	J	A	S	O	N	D

24. What type of climate is shown above?

25. Give **one** reason why high rainfall is received in the month of September.

26. Which activity can be done by farmers in the month of January?

27. Give **one** way the ethnic groups were socially organized during the pre – colonial time.

28. Apart from water, write any other item transported using pipe lines.

29. State **one** way in which high population promotes industrialization.

30. How have people in districts benefited from decentralization?

31. Write **one** element of weather which makes people sweat.

32. Give **one** reason why explorers came to Uganda.

33. How do people in a constituency benefit from their representatives in the parliament?

34. State **one** way of managing wastes in a school.

For questions 36 – 40, answer Either Christianity OR Islam but not both.

35. **EITHER:** Who was the father of John the Baptist?

OR: Who was the father of Prophet Muhammed?

36. **EITHER:** State **one** way people have benefited from their talents.

OR: How do Muslims benefit from their talents?

37. **EITHER:** How did Jesus show concern to people during his life time?

OR: How do Muslims show concern to other people today?

38. **EITHER:** Give the importance of baptism to Christians.

OR: In which **one** way is circumcision important to Muslims.

39. **EITHER:** Why was Moses chosen by God to lead the Israelites out of Egypt?

OR: Why was Musa chosen by God to lead the Israelites out of Egypt?

40. **FOR BOTH:** How is a Quran similar to a Bible?

SECTION B

41. (a) What is a common market?

(b) State **two** ways in which common markets are important to their

member states.

- (i) _____
- (ii) _____
- (c) Give **one** factor that led to the disintegration of the defunct East African community.

42. (a) State any **two** problems facing the fishing industry in East Africa.

- (i) _____
- (ii) _____
- (b) Mention any **two** ways of preserving fish.
- (i) _____
- (ii) _____

43. (a) Give the meaning of the term "communication"

- _____
- _____
- (b) State any **two** importance of mobile phone companies operating in Uganda.
- (i) _____
- (ii) _____
- (c) Mention any **one** mobile company operating in Uganda.

44. (a) Mention any **two** major resources found in E. Africa.

- (i) _____
- (ii) _____
- (b) State **two** major problems facing the mining industry in E.Africa.
- (i) _____
- (ii) _____

45. (a) What is population distribution?

(b) Give any **two** factors that influence population distribution in E. Africa.

(i) _____

(ii) _____

(c) Give **one** effect of immigration to Kampala city.

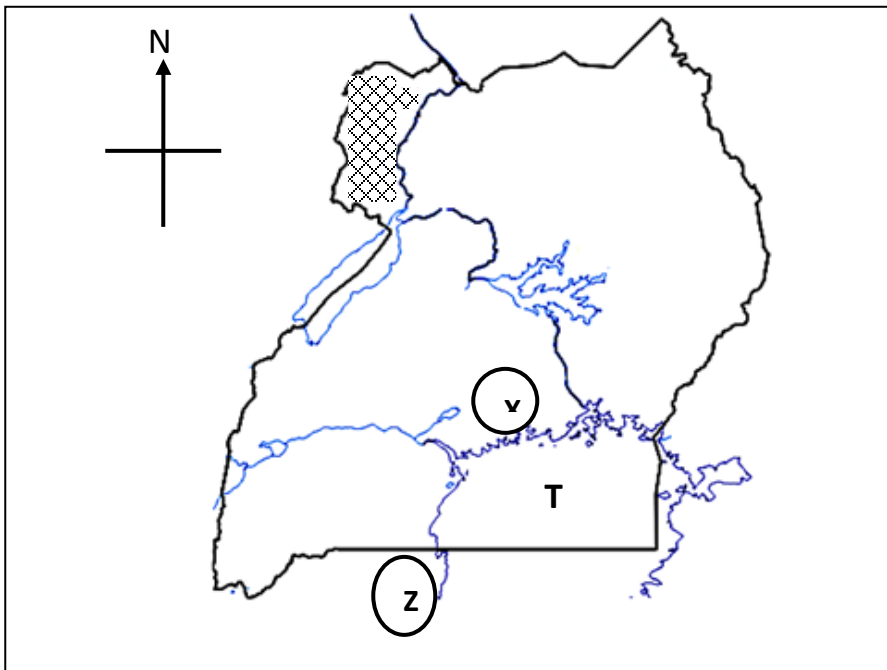
46. (a) What is a time zone?

(b) Give **one** reason why Uganda is ahead of Rwanda by one hour.

(c) Write GMT in full.


How does Kenya benefit from Port Mombasa?

Use the map of Uganda below to answer question 47.



47. (a) Name the kingdom marked **X** and **Z**.

- (b) How did kingdom **X** politically benefit from Lake marked **T** during the pre – colonial time?

- (c) Which tribal group is living in the shaded area? 

48. (a) What is transport?

- (b) State **two** reasons why there are many road accidents in Uganda today.
(i) _____
(ii) _____
- (c) In which way can road accidents be controlled in Uganda?

49. (a) What are human rights?

- (b) Mention any **two** human rights known to you.
(i) _____
(ii) _____
- (c) State **one** reason why citizens should know their rights.

50. (a) Write in full the ruling political party in Uganda.

- (b) Apart from the party mentioned above, name any other **two** political parties operating in Uganda today.
(i) _____
(ii) _____

(c) Why were political parties formed in the early 1950s?

For questions 51 – 55 answer Either Christianity OR Islamic questions but not both

51. EITHER:

In which way are the following days important in Christianity?

- (a) Pentecost day _____
- (b) Christmas day _____
- (c) Easter Sunday _____
- (d) Ash Wednesday _____

OR:

Name any four pillars of faith (Iman) in Islam

- (i) _____
- (ii) _____
- (iii) _____
- (iv) _____

52. EITHER:

(a) Which book in the Old Testament talks about creation?

(b) Whom did God send as a Redeemer to man?

(c) Mention any **two** ways to show that Jesus cared for others.

- (i) _____
- (ii) _____

OR:

(i) Which holy books were revealed to the following prophets?

- (a) Musa _____
- (b) Dauda _____

(ii) Mention any **two** ways through which prophet Muhammad showed care for others.

(i) _____

(ii) _____

53. EITHER

(a) Write down any **two** gifts of the Holy spirit.

(i) _____ (ii) _____

(b) State any **two** ways the Holy Spirit is helpful to the church today.

(i) _____

(ii) _____

OR:

(a) What is Ramadhan?

(b) Mention any **three** groups of people exempted from fasting.

(i) _____

(ii) _____

(iii) _____

54. EITHER

(a) How did God create Eve?

(b) Give **one** reason why God created Eve.

(c) How do people today take care of God's creation?

(i) _____

(ii) _____

OR:

(a) How did Allah create Hawa?

(b) Give **one** reason why Allah created Hawa.

(c) In which **two** ways do people take care of Allah's creation?

(i) _____

(ii) _____

FOR BOTH

55. (a) State any **two** similar practices between Islam and Christianity.

(i) _____

(ii) _____

(b) State any **two** differences in practice in Muslims and Christians.

(i) _____

(ii) _____

PAPER 2

1. Name the school symbol that can be recorded and played to send a message about our school.

2. State **one** challenge the government may face in providing social services to its people.

3. Mention any **one** advantage of traditional means of transport over modern means.

4. How can the Uganda police help to reduce crime in our community today?

5. How do the prevailing winds influence the climate of East Africa?

6. State **one** way religious leaders may help in keeping peace and security in our community.

7. Draw and name the map symbol of a rift valley in the space below.
8. Name the latitude that is marked 0°.

9. State any **one** characteristic of colonial administration.

10. Name the stage of a river that is suitable for the construction of Electric dams.

11. Name the Bantu tribe that migrated from South Africa to settle in East Africa.

12. Child abuse is the physical maltreatment or several molestations of a child. Give **one** effect of child abuse.

13. Why is a radio station regarded as an important place in our community today?


14. State **one** problem of high population density in an area.

15. Why was slave trade regarded as evil practice to East Africa?

16. Identify any **one** positive effect of colonial rule in Uganda.

17. Name the British governor who was responsible for Kabaka crisis in Buganda in 1953 / 1955.

18.



Name the method of farming indicated in the diagram.

19. Why is the above method used by farmers in that area?

20. Why did the British advise Ugandans to have national symbols before the 9th October?
-
21. State **one** role of the Electoral Commission in a democratic state / government.
-
22. Why did the British use direct rule in some parts of Uganda?
-
23. Aggrey is a Ugandan boy of 15 years. State the way this boy became a citizen of Tanzania after realizing that one of his grandparents was a Tanzanian.
-
24. State **one** function of the East African Legislative Assembly.
-
25. How can rainfall be dangerous to people?
-
26. State **one** way how formal education contributed to the success of missionary work in Uganda.
-
27. How do the people of Kabale adapt to the cool climatic conditions?
-
28. What role is played by the Legislature in the budgeting process?
-
29. How did the 1966 constitution affect kingdom in Uganda?
-
30. How was **IBEACo** useful in Christian missionaries in Uganda?
-
31. Mention any **one** pastoral tribe in Kenya.
-
32. What part of the Uganda Coat of Arms represent Uganda's traditional communication?
-

33. State **one** political impact of Bantu migrants to East Africa.

34. Write **E.A.C.J** in full.

35. How are the Turkana's and Karimojong similar in terms of their activities?

From question 36 – 40, answer either Christianity or Islam but not both.

36. **Either:** How were God's messengers useful to Christians?

Or: How were Allah's messengers useful to Muslims?

37. **Either:** Mention **one** trial Jesus faced while in the wilderness.

Or: Mention any **one** trial prophet Muhammad faced in Mecca.

38. **Either:** How did God test job's faith?

Or: How did Allah test Prophet Ayoub's faith?

39. **Either:** How is Jesus' resurrection important to Christians?

Or: How should a Muslim prepare for the judgment day?

40. **Either:** State any **one** way Jesus showed concern to those who were suffering?

Or: State any **one** way Prophet Muhammad showed concern to those who were suffering.

SECTION B

41.(a) Give any **two** human activities that has led to the destruction of the environment.

(i) _____ ii) _____

(b) State **two** ways of conserving the environment.

(i) _____ ii) _____

42.(a) There are 3600 people in Kaberamaido district which covers a distance of 40 kilometres. Find its population density.

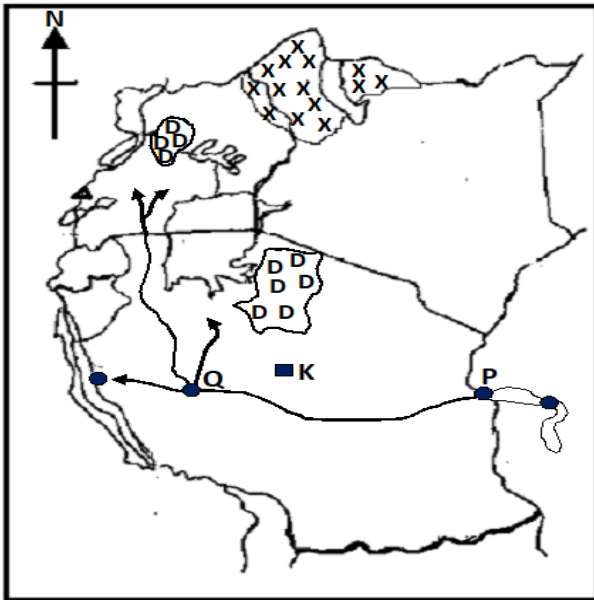
(b) State any one disadvantage of;

(i) Sparse population

(ii) High population density

(c) How can the government help to control rapid population growth in a country?

Study the map of East Africa and answer the questions that follow.



(i) Name the town marked with letter **Q**.

(ii) How is town **K** important to Tanzania?

(iii) Name the economic activity carried out in the place marked **XXXXX**.

(iv) Why is human settlement discouraged in place labelled **DDDD**?

43. (a) What are social services?

(b) Mention any **two** social service provider found in Mulago hospital.

(i) _____

(ii) _____

(c) How can the government help to make medical services better in Uganda?

44.(a) Name the type of leaders that we get through elections.

(b) Give any **two** examples of the above type of leaders.

(i) _____

(ii) _____

(c) State **one** way leaders can be useful to their people.

45.(a) Give any **one** tribe in Uganda.

(b) Who were the founders of Bunyoro Kitara Kingdom?

(c) State any **two** causes of the down fall of Bunyoro Kitara.

(i) _____

(ii) _____

46.(a) How does tourism contribute towards the government revenue?

(b) State any **two** external sources of government revenue.

(i) _____

(ii) _____

(c) How may government officials misuse government revenue in a country like Uganda?

47.(a) Identify any **two** semi – cardinal points on a compass.

(i) _____

(ii) _____

(b) Give any **two** ways people may use shadows.

(i) _____

(ii) _____

48. (a) Name the town where the headquarters of the East African Development Bank are located.

(b) State any **two** organs of the East African Community.

(i) _____

(ii) _____

(c) How has the East African Community helped to promote trade among its member states?

49. (a) Name the largest climatic zone of Uganda.

(b) Give any **two** characteristics of equatorial climate.

(i) _____

(ii) _____

(c) How does climate influence vegetation distribution in an area?

For questions 51 – 54, answer either Christian or Islam but not both.

50. EITHER:

(a) How are the following creations of God important to us?

(i) Plants _____

(ii) Land _____

(iii) Animals _____

(b) Why is it advisable for people to care for the above creations of God?

OR

(a) How are the following creations of Allah important to a Muslim?

(i) Plants _____

(ii) Land _____

(iii) Animals _____

(b) Why is it advisable for people to care for the above creations of Allah?

51. EITHER

(a) Apart from Abraham, mention any **one** leader in the Old Testament.

(b) State any **two** ways Jesus showed good leadership through service.

(i) _____

(ii) _____

(c) Identify any **one** difficulty faced by Christian leaders today.

OR

(a) Apart from Ibrahim, mention any other leader in the Quran.

(b) State any **two** ways Prophet Muhammad showed good leadership through service.

(i) _____

(ii) _____

(d) Identify any **one** difficulty faced by Muslim leaders today.

52. EITHER

(a) Who is a messenger of God?

(b) What message did the following messenger preach / deliver to the world?

(i) Elijah

(ii) John the Baptist

(c) How can a Christian overcome temptations today?

OR

(a) Who is a messenger of Allah?

(b) What lessons do we learn from the following messengers of Allah?

(i) Prophet Nuhu

(ii) Ayub

(c) How can a Muslim overcome temptations today?

53. EITHER

(a) Why is a Bible an important book in Christianity?

(b) How many books make up the Old Testament?

(c) Which book explains the journey of the Israelites from Egypt to the Promised Land?

(d) How can a non-believer mishandle the Bible?

OR

(a) Why is a Quran an important book in Islam?

(b) Which book was revealed to Prophet Musa?

(c) Which Islamic book explains the birth, life and death of Prophet Musa?

(d) How can a non-believer mishandle the Quran?

54. EITHER

(a) What is authority according to Christianity?

(b) The Uganda National Constitution is respected by all citizens of Uganda. What type of authority does it possess?

(c) Give any **two** ways in which people may misuse their authority.

(i) _____

(ii) _____

OR

(a) What is authority according to Islam?

(b) The Uganda National Constitution is respected by all citizens of Uganda. What type of authority does it possess?

(c) Give any **two** ways in which people may misuse their authority.

(i) _____

(ii) _____

PAPER 3

1. How many cardinal points has a compass rose?

2. Why was the East African Community formed?

3. How is the equator line important to a map reader?

4. What are social service centres?

5. State **one** reason why the Bantu settled around the shores of Lake Victoria.

6. Identify **one** importance of conducting a population census in a country.

7. Education is a common social service everywhere in the world. Explain the importance of the above social service.

8. Mention **one** human activity that can destroy our environment.

9. How is a bell important in a school community?

10. Write down any **one** non-cardinal point on a campus rose.

11. What role was played by Sir Apollo Kaggwa during the 1900 Buganda agreement?

12. Name the African country that tried to colonise Uganda.

13. How was river Nile responsible for the coming of early explorers to Uganda?

14. Why are the Bachwezi economically remembered in the history of Uganda?

15. Give **one** reason why people save money.

16. Mention the major cash crop that was introduced by the Arabs along the coast of East Africa.

17. How is Olduvai Gorge important in the development of Tanzania?

18. Give **one** weather instrument that can be kept in the Stevenson screen.

19. John was facing North East, he made a turn of 45° clock wise. State his new direction.

20. Identify **one** problem that is faced by people who live around hilly and mountainous areas.

21. Name the physical feature that crosses atleast five East African countries.

22. How is democracy exercised in a school community?

23. How important were clan- heads in the pre-colonial societies?

24. Give **one** reason for controlling soil erosion in mountainous areas.

25. Give **one** disadvantage of using traditional methods of fishing.

26. It is 10:00am at Accra, what is the time at **town Y** 60° East?

27. How can people protect lakes as Natural resources?

28. State **one** importance of planting grass in the school compound.

29. Name the biggest water mass that neighbours East Africa in the East.

30. Name **one** tributary of R.Nile in Uganda.

31. How does corruption affect the development of a country?

32. State any **one** disadvantage of smuggling in a country like Uganda.

33. Which European missionary brought a printing press in Uganda?

34. Mention **one** factor that can influence the climate of an area.

35. Who was the last king of the Bachwezi?

Answer Either a Christian question Or Islamic question BUT NOT BOTH for numbers from 36 – 39.

36. **Either:** Who was the earthly father of Jesus?

Or: Who was the father of Prophet Muhammed?

37. **Either:** What was God's first creation?

Or: What was Allah's first creation?

38. **Either:** What is a talent?

Or: What is a talent?

39. ***Either:*** Why was Moses chose by God to lead the Israelites out of Egypt?

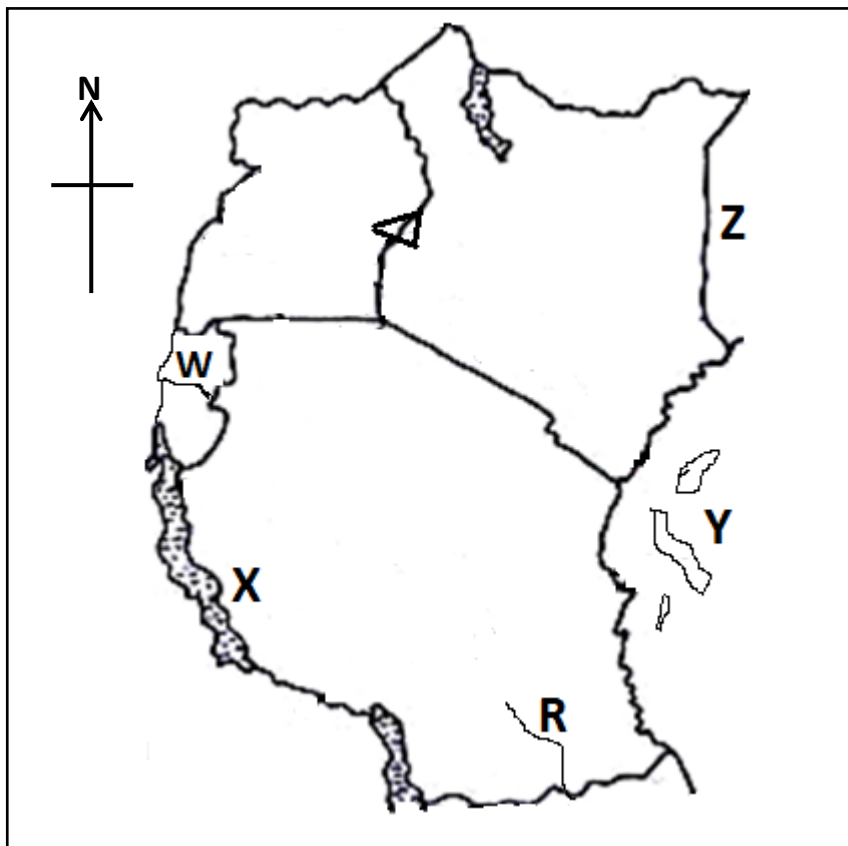
Or: Why was Musa chosen by Allah to lead the Israelites out of Egypt?

40. ***For both:***

How is forgiveness important to God fearing people?

SECTION B

41. ***Study the map of East Africa and answer the questions that follow.***



a) Name the capital city of country marked **W**.

b) What is the political importance of River **R** to Tanzania?

c) Which East African country has the least population?

d) Give any **one** problem likely to be faced by people who live in the slopes of mountains in East Africa.

42. a) Give any **one** symbol of a school.

b) State any **two** benefits of a school from its neighbourhood.

(i) _____

(ii) _____

c) Identify any **one** cause of problems between a school and its neighbourhood.

43. i) What is child abuse?

ii) Give **one** form of child abuse.

iii) State any **one** way in which we can reduce the rate of child abuse in our community today.

iv) Mention **one** effect of child abuse in our community.

44. a) What is farming?

b) Mention **one** problem that is faced by farmers in Uganda today.

c) How does farming create employment?

(i) _____

(ii) _____

45. a) What is Emigration?

b) State any **two** causes of early tribal migrations into East Africa.

(i) _____

(ii) _____

c) Why did the River Lake Nilotes change from their pastoral life to mixed farming?

46. a) Who signed the 1900 Buganda agreement on behalf of the following ?

(i) Buganda Kingdom

(ii) British government

47. a) What are by-laws?

b) Who makes the by-laws?

c) Give any **two** importance of by-laws in our community.

(i) _____

(ii) _____

48. a) In which **two** ways did the Arabs contribute to the development of East

Africa.

(i) _____

(ii) _____

b) Why did slave trade take long to end in East Africa?

(i) _____

(ii) _____

49. (i) Why is tourism referred to as an industry?

(ii) Give any **two** problems that are faced by the tourism industry in our country.

(i) _____

(ii) _____

(iii) Identify any invisible export of Uganda to Kenya and Rwanda.

50. a) Apart from a television , give **two** other forms of mass media.

(i) _____

(ii) _____

b) Give any **one** reason why televisions are not commonly used in rural areas.

c) State any **one** way television stations promote employment opportunities to people.

For questions 51 to 55 , answer either Christianity or Islamic BUT NOT BOTH.

51. ***Either.*** a) What was the work of Joseph the earthly father of Jesus?

b) State any **one** problem Christians face as they do God's work.

c) Give any **two** reasons why God encourages good Christians to work.

(i) _____

(ii) _____

Or. a) What was the work of Yusuf the father of prophet Isa?

b) State any **one** problem Christians face as they do Allah's work.

c) Give any **two** reasons why Allah encourages good Muslims to work.

(i) _____

(ii) _____

52. **Either.** a) What is a church?

b) Give any **two** reasons why Christians pray.

(i) _____

(ii) _____

c) How do Christians support their churches?

Or. a) What is a mosque?

b) Give any **two** reasons why Muslims pray.

(i) _____

(ii) _____

c) How do Muslims support their mosques?

53. **Either.** a) What is divine authority?

b) State any **two** ways Jesus used his authority.

(i) _____

(ii) _____

c) What helped Jesus to exercise his authority?

Or. a) What is divine authority?

b) State any **two** ways Prophet Muhammad used his authority.

(i) _____

(ii) _____

c) What helped Prophet Muhammad to exercise his authority?

54. **Either.** a) What do you understand by the term gospel?

b) Name any **three** gospel writers.

(i) _____

(ii) _____

(iii) _____

Or. a) What is Hadith?

b) Write any **three** people to whom the Holy books in Islam were revealed.

(i) _____

(ii) _____

(iii) _____

55. **Either.** a) Name the period when Christians fast.

b) Give any **two** ways Christians benefit from fasting.

(i) _____

(ii) _____

c) What good practice should Christians promote during fasting?

Or. a) Name the period when Muslims fast.

b) Give any **two** ways Muslims benefit from fasting.

(i) _____

(ii) _____

c) What good practice should Muslims promote during fasting?

PAPER 4

1. Name the largest country in the East African region.

2. State the importance of Port Bell to the economic development of Uganda.

3. Why did the early man tame a dog?

4. Where was the first settlement area of the River lake Nilotes when they entered Uganda?

5. State **one** way pupils promote democracy in schools.

6. How can peace and security be promoted in schools?

7. Give the ministry in charge of elections in Uganda.

10. State **one** way the government can promote agriculture in the dry areas of East Africa.

11. Why does River Nile flow northwards?

12. How did the missionaries promote education in East Africa?

13. Give any **one** problem Uganda faces because of its geographical location.

14. State **one** economic activity that is carried out in the tropical rain forests.

15. How are the Basoga and Baganda similar in terms of their economic activity?

-
16. Give **one** importance of social activities.
-
17. Name the representative of **IBEACO** who was sent to Uganda.
-
18. State **one** effect of creation of boundaries by the colonial government to the people of Uganda?
-
19. Why do people stand upright when singing the national anthem?
-
20. How are Members of Parliament important to the people in their constituencies?
-
21. State any **one** importance of lines of latitudes to a map reader.
-
22. Why do pilots use a compass?
-
23. Why is Arabic coffee commonly grown on the slopes of Mountain Elgon and Mountain Kirimanjalo?
-
24. Mention the vegetation zone that favours the development of game parks.
-
25. Give **one** product got from cotton.
-
26. How do people care for social service centres?
-
27. How is poaching a threat to the tourism industry?
-

28. Why is it advisable to plant trees in the school compound?

29. How do citizens of Uganda benefit from the East African community?

30. Why is East Africa called the cradle land of man?

31. How did the coming of the Arab traders into Uganda improve on trade?

32. What discovery marked the end of the Stone Age period?

33. How is the government of Uganda helping people affected by drought (famine) in some parts o Uganda?

34. Name the member state of the East African community that attained independence in 2011.

35. Why is the year 1894 remembered in the political history of Uganda?

For questions 36 – 40, answer Either Christianity Or Islamic but not both

36. **EITHER:** How can Christians strengthen their faith in God?

OR: How can Moslems strengthen their faith in Allah?

37. **EITHER:** What was God’s creation on the first day?

OR: What was Allah’s creation on the first day?

38. **EITHER:** State one way Christians worship God.

OR: How do Moslems worship Allah?.

39. **EITHER:** How did Adam sin against God?

OR: How did Adam sin against Allah?

40. **FOR BOTH:** Why is it important to obey and follow God's commandments?

SECTION B

41. (a) Who is a citizen of Uganda?

(b) State any two ways one can become a citizen of Uganda.

(i) _____

(ii) _____

(c) Give one way one can lose his / her citizenship in Uganda today.

42. (a) Give any one aspect of climate.

(b) How does the climate of an area affect the economic activities done by people?

(c) Write down two factors which influence the climate of an area.

(i) _____

(ii) _____

43. (a) Mention two methods which were used by the colonialists to establish

their rule in Uganda.

(i) _____

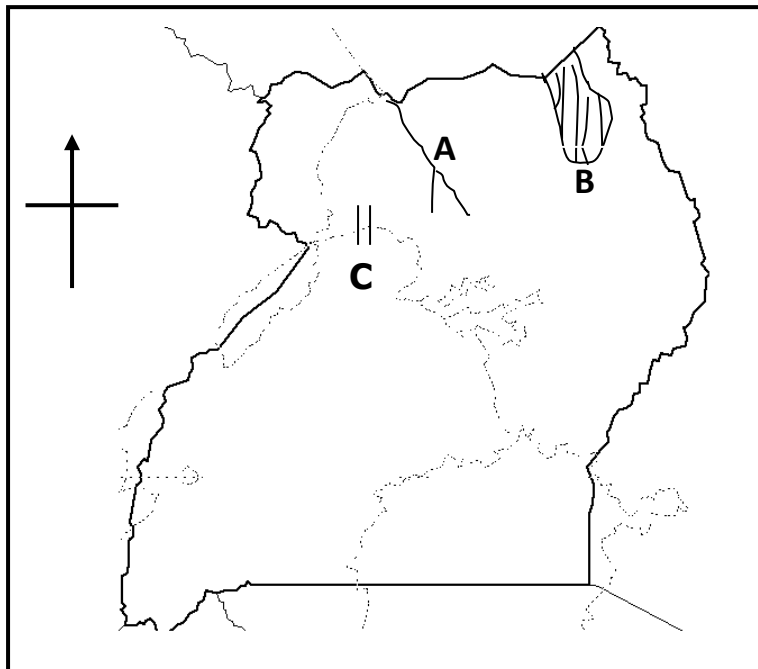
(ii) _____

(b) Give **two** methods which were used by the colonialists to administer Uganda.

(i) _____

(ii) _____

44. Study the map below and answer the questions that follow.



(a) Draw the Equator on the map drawn above.

(b) Name;

(i) river **A** _____

(ii) waterfall marked **C** _____

(c) Why are people not allowed to settle in area marked **B**?

45. (a) Where did the Bantu originate from?

(b) What was the last Bantu tribe to enter East Africa?

(c) Why did the Bantu settle in the areas with fertile soils?

(d) How did the Bantu influence the River – lake Nilotes?

46. (a) State **two** reasons why the East African heads of state formed the **EAC** in 1967.

(i) _____

(ii) _____

(b) Name **two** of the above heads of state who formed the **EAC** in 1967.

(i) _____

(ii) _____

47. (a) What is child labour?

(b) Mention any **two** forms of child labour.

(i) _____

(ii) _____

(c) State **one** way of controlling child labour in the East African countries

48. (a) What is population distribution?

(b) State **one** way a country benefits from having a large population.

(c) Mention **two** disadvantages of a large population to a country.

(i) _____

(ii) _____

49. Match carefully

Semei Kankungulu	Staged the Lamogi rebellion due to forceful registration of guns.
Nuwa Mbaguta	Exiled by Sir Andrew Cohen in 1953.
Chief Awich	Extended colonial rule to Eastern parts of Uganda.
Sir Edward Muteesa II	Extended colonial rule to Western parts of Uganda.

i) Semei Kakungulu _____

ii) Nuwa Mbaguta _____

iii) Chief Awich _____

iv) Sir Edward Muteesa II _____

50. (a) Write **NEMA** in full.

(b) State any **two** roles played by NEMA in Uganda

(i) _____

(ii) _____

(c) How are wetlands important to people?

For questions 51 – 55, answer Either Christianity or Islamic but not both

51. **EITHER:**

(a) State the meaning of the term “prayer”

(b) Mention any **two** types of prayers in Christianity.

(i) _____

(ii) _____

(c) Why do Christians pray?

OR:

(a) State the meaning of the term "Salat"

(b) Mention any **two** types of Salat in Islamic faith.

(i) _____

(ii) _____

(c) Why do Moslems pray?.

52. **EITHER:**

(a) Write any **two** Christian organizations in Uganda.

(i) _____

(ii) _____

(b) In which **two** ways have the Christians promoted development in Uganda?

(i) _____

(ii) _____

OR:

(a) Mention any **two** Muslim organizations in Uganda.

- (i) _____
- (ii) _____
- (b) In which **two** ways have the Muslims promoted development in Uganda?
- (i) _____
- (ii) _____

53. **EITHER:**

- (a) Who is a prophet?

- (b) Which prophet in the Bible preached about the following messages?
- (i) The coming of the messiah.

- (ii) Repentance in preparation for the Messiah.

- (c) Name any **one** prophet who went to heaven alive.

OR:

- (a) Who is a prophet?

- (b) Which prophet is Islam preached about the following?
- (i) Deliverance _____
- (ii) Great rule of wisdom _____
- (iii) The seal of prophets _____

54. **EITHER:**

- (a) How do we call a group of Christians worshipping God?

- (b) State **two** roles of Christians in the church.

- (i) _____
- (ii) _____
- (c) How is the Holy Spirit important to the church today?

OR:

- (a) What title is given to the supreme head of all Muslims in Uganda?

- (b) Give any **three** ways in which Moslems are important to the surrounding community.
 - (i) _____
 - (ii) _____
 - (iii) _____

55. **FOR BOTH**

- (a) What is work?

- (b) Mention any **two** reasons why people work.
 - (i) _____
 - (ii) _____
- (c) State **one** challenge people face at their places of work.

PAPER 5

55. State **one** quality of a good map.

56. In which compass direction is Tanzania from Uganda?

57. How does Kenya benefit from her sea port?

58. Which missionary contributed to the economic development of Uganda?

59. Why is modern agriculture not well developed in many parts of Uganda?

60. State **one** reason for maintaining grass in a school compound.

61. How did the Berlin Conference affect African states?

62. Give **one** reason why distance should be considered before choosing the means of transport.

63. How was mountain Moroto formed?

64. Give **one** importance of cultural activities in a community.

65. Which weather condition makes people to slide?

66. Give **one** example of a recreation centre in our community.

67. Name **one** district in Uganda where people keep donkeys for transport.

68. Give **one** way in which ethnic groups can be identified.

69. Give **one** reason why the distance between Kampala and Kasese is shorter by air transport than road transport.
-
70. Name **one** voluntary organisation found in schools.
-
71. Which British governor of Uganda promoted education?
-
72. How is a factory important to the people around it?
-
73. What type of vegetation covers the largest part of Uganda?
-
74. Name the river in East Africa which attracted explorers.
-
75. In which **one** way is the work of the RDC different from that of the CAO?
-
76. Why were most Stone Age sites found near water bodies?
-
77. Give **one** way in which the East African Community has promoted trade in the region.
-
78. What is population distribution?
-
79. Give **one** way NEMA has tried to protect wetlands from destruction.
-
80. Why should school children learn their rights?
-
81. How was iron important to early man?
-
82. Why would it be so dangerous for a business man to keep a lot of cash/money in his house?
-

83. State **one** cause of child labour in Uganda.

84. How can land as a natural resource be protected?

85. Which National symbol promotes the love for our country?

86. Name **one** Crater Lake in Uganda.

87. Give **one** way poverty has affected people in most communities.

88. State the best means of road transport for charcoal.

89. Which planted vegetation provides food to people?

From question 36 – 40, answer either Christianity or Islam but not both.

90. **Either:** Name **one** son of Noah in the Bible.

Or: Name **one** son of Nuhu in the Quran.

91. **Either:** What does the rainbow symbolise in Christianity?

Or: What does the rainbow symbolise in Islamic faith?

92. **Either:** Give **one** way Christians take care of God's creation.

Or: Give **one** way Moslems take care of Allah's creation.

93. **Either:** How does God reward the good Christians?

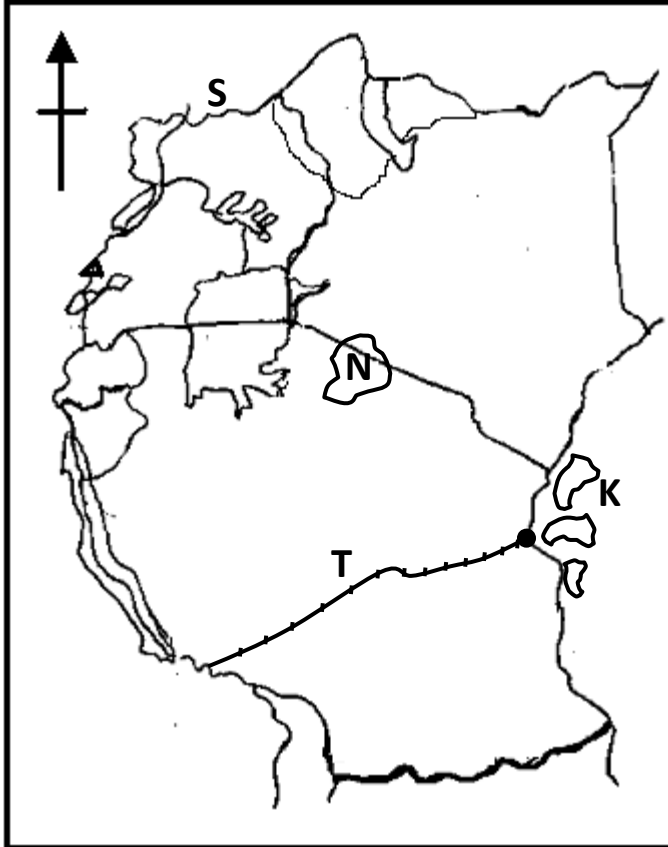
Or: How does Allah reward the good Muslims?

94. **Either:** What did God create on the first day?

Or: What did Allah create on the first day?

SECTION B

95. Use the map below to answer question 41



(a) Name the Island marked **K**.

(b) Give **one** reason why the railway line marked **T** was built.

(c) Why are people discouraged from settling in area marked **N**?

(d) In which **one** way has the war in country **S** affected Uganda?

96. (a) Which organisation in East Africa was replaced by the East African community in 1967?

(b) Give **two** reasons why the East African Community was revived in 2001.

(i) _____

(ii) _____

(c) State **one** challenge of the East African Community.

97.(a) What is child abuse?

(d) State **two** ways in which child abuse is practised in Uganda.

(i) _____

(ii) _____

(e) Give **one** way the government of Uganda can control child abuse.

98.(a) How do water bodies affect the climate of an area?

(b) Write down **two** activities that can be done by people to improve on the climate of an area.

(i) _____

(ii) _____

(c) State **one** way agriculture can be promoted in the dry areas of Uganda.

99. (a) Mention **two** attributes of a school that are related to the national symbols of Uganda.

(i) _____

(ii) _____

(b) State **two** reasons why schools should have attributes.

(i) _____

(ii) _____

100. (a) Why is tourism called an industry?

(b) Write down **three** problems facing the tourism industry in Uganda.

(i) _____

(ii) _____

(iii) _____

Use the map below to answer question 47.



101. (a) Name the mountains marked;

K _____

L _____

(b) How was Lake **T** formed?

(c) Use letter "**W**" to show river Katonga on the map above.

102. (a) In which country was the Maji Maji rebellion staged?

(b) Give any **two** reasons for staging the Maji – Maji rebellion in the above country.

(i) _____

(ii) _____

(c) How did the above rebellion affect the people of the above mentioned country?

103. (a) Give **two** traditional methods of fishing.

(i) _____

(ii) _____

(b) State **one** disadvantage of traditional method of fishing.

(c) In which ministry is the fishing industry?

104. (a) Name the type of farming where a farmer grows both crops and rear animals.

(b) State any **two** advantages of the above mentioned type of farming.

(i) _____

(ii) _____

(c) How do crops benefit from the animals on the farm?

For questions 51 – 55, answer either Christian or Islamic questions but not both

105. EITHER:

(e) What is sin according to Christianity?

(f) Give any **two** ways in which Christians commit sins today.

(i) _____

(ii) _____

(g) How have religious leaders helped Christians to avoid sinning?

OR

(c) What is sin according to Islamic teaching?

(b) Give any **two** ways in which Muslims commit sin today.

(i) _____

(ii) _____

(c) How have religious leaders helped Muslims to avoid sinning?

106. EITHER

(c) What is suffering?

(d) State any **two** causes of suffering among people today.

(iii) _____

(iv) _____

(e) How did Jesus suffer during his life time on earth?

OR

(a) What is suffering?

(b) State any **two** causes of suffering among people today.

(i) _____

(ii) _____

(c) How did Prophet Muhammed suffer during his life time?

107. EITHER

(e) Name any **two** parts on your body you can use to worship God.

(i) _____

(ii) _____

(f) How do you use each of the above parts to worship God?

(i) _____

(ii) _____

OR

(a) Name any **two** parts on your body you can use to worship Allah.

(i) _____

(ii) _____

(b) How do you use each of the above body parts to worship Allah?

(i) _____

(ii) _____

108. EITHER

(a) In which **two** ways did Jesus serve people during his time on earth?

(i) _____

(ii) _____

(b) How do Christians serve others today?

(i) _____

(ii) _____

OR

(a) In which **two** ways did Prophet Muhammed serve people during his time on earth?

(i) _____

(ii) _____

(b) How do Muslims serve others today?

(i) _____

(ii) _____

109. BOTH

(d) Who were the first **two** sons of Adam?

(i) _____

(ii) _____

(e) Which son of Adam killed his brother?

(f) Why did he kill his brother?

PAPER 6

1. Name the land form that covers the largest part of Uganda.

2. Name the section of the police which controls the flow of cars on roads.

3. How do radio stations promote the development of people in a country?

4. Why do farmers harvest their crops in the dry season?

5. Give **one** reason why the Acholi did not want to register their guns with the government.

6. Why should each district have veterinary doctors?

7. What is the difference between formal and informal education?

8. How did the introduction of the printing press by missionaries contribute to the spread of Christianity?

9. State any **one** unsafe way of using roads.

10. Why did the Bantu settle in the interlacustrine regions?

11. How were the people of Uganda organized during the pre-colonial time?

12. What is population census?

13. Give any **one** traditional means of road transport.

14. How has the EAC promoted trade in the region?

15. Give **one** reason why most Stone Age sites were found near water bodies.

16. How does Kenya benefit from port Mombasa?

17. In which meridian is East Africa located?

18. Name **one** physical feature that is shared by all the three East African countries.

19. Why is Karamoja area hotter than Kisoro?

20. How have people in North-Eastern Uganda solved the problem caused by pro-longed drought?

21. How do people benefit from archaeological sites in their area?

22. Which is the major mineral mined at Kasese?

23. How does rural-urban migration affect rural areas?

24. What advantage does a country with a high population have over one with a sparse population?

25. A democratic country like Uganda has three organs/branches. Name the branch that is headed by the president.

26. Why did Egypt attempt to colonize Uganda?

27. Which European missionary brought a printing press in Uganda?

28. Why was slave trade a bad practice?

29. Why did the people of Toro like Captain F.D Lugard very much?

30. Who was the first Arab trader to come to Uganda?

31. Why does the Uganda cranes team travel with the Uganda flag wherever they go for international matches?

32. How did the British help Uganda to become a nation?

33. What type of trade replaced barter trade?

34. Which is the ruling political party in Uganda?

35. Why is Bagamoyo an important town in the history of E. Africa?

For question 36-40, answer Either Christianity or Islam but not both.

36. **Either:** According to Christianity, why did God create man?

Or: According to Islam, why did Allah create man?

37. **Either:** Why should Christians pray together?

Or: Why should Moslems in a community pray together?

38. **Either:** Which book in the Bible tells the story of creation?

Or: Which holy book of Islam tells the story of prophet Isa?

39. **Either:** Why should a good Christian repent?

Or: Why should a good muslim repent?

40. **Either:** How can a Christian use his talents to help others?

Or: How can a good muslim use his talents to help others?

SECTION B:

41.(a) Write EAC in full.

(b) Why was the EAC formed?

(c) Name any **two** former East African presidents who introduced EAC.

i. _____

ii. _____

42.(a) What are by-laws?

(b) Which leaders make by-laws?

(c) Give the importance of by-laws.

(d) How are by-laws different from a constitution?

43.(a) Mention any **one** source of government income.

(b) How can people benefit from the improved income?

i. _____

ii. _____

(c) State any **two** ways people in Uganda can improve their income.

i. _____

ii. _____

44.(a) Give the meaning of each of the following climatic terms.

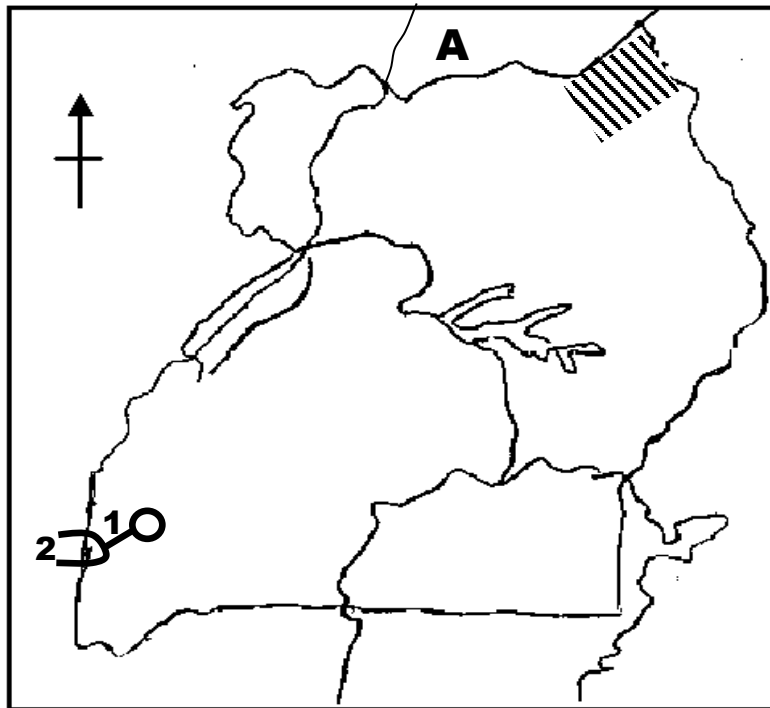
i. Temperature

ii. Wind

(b) Why should a school have a weather station?

(c) Where in a school should a weather station be placed?

45. Use the map below to answer questions that follow



(a)(i) Name Lake **2** _____

(ii) Water channel **1** _____

(iii) Name country **A** _____

(b) Why is area marked  sparsely populated?

46.a) Why did the European countries struggle to colonise East Africa?

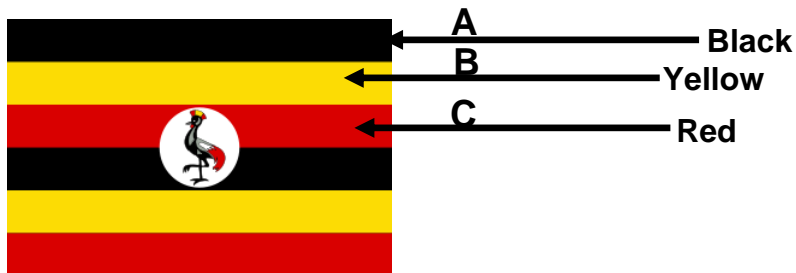
b) Name the European country which colonized Uganda?

c) Give any **two** positive effects of colonization to the people of East Africa.

i. _____

ii. _____

47. **Study the Uganda National Flag and answer the questions that follow.**



a) Why is the crested crane in the flag standing on one leg?

b) What do the following colours marked **A** and **B** above represent?

i. **A** _____

ii. **B** _____

c) Write the date when the above flag was flown for the first time in Uganda.

48. Match the list in **A** with that in **B**.

A

Dr. Apollo Milton Obote

I. K. Musaazi

Mwalimu Julius Nyerere

Sir Edward Mutesa II

B

composed the National Anthem

led Tanzania to independence

the first president in Uganda.

led Uganda to independence

- (a) Dr. Apollo Milton Obote _____
- (b) I.K Musaazi _____
- (c) Mwalimu Julius Nyerere _____
- (d) Sir Edward Mutesa II _____

49.(a) Give the difference between natural and planted vegetation.

(b) List any **two** factors that influence vegetation in an area.

i. _____

ii. _____

(c) Which vegetation region covers the largest part of East Africa?

50.(a) How is a National language important in a country?

(b) Mention any **two** duties of a good citizen.

i. _____

ii. _____

(c) Suggest any **one** way a person can become a citizen in Uganda?

For numbers 51 to 55, answer Either Christianity or Islam but not both

51.**Either:** a) What is lent period?

(b) Why is lent important to Christians?

(c) What day marks the beginning of the lent in Christianity?

(d) State any activity Christians carry out during lent.

Or: (a) Why is the month of Ramathan important in Islam?

(b) What day marks the end of Ramathan?

(c) State any **two** things a Muslim ought to do during the month of Ramathan.

i) _____

ii) _____

52. **Either:** (a) Why did Jesus perform miracles?

(b) Which was Jesus' first miracle?

(c) How was Jesus able to perform miracles?

(d) Name any **one** person whom Jesus raised from the dead.

Or: (a) Why did prophet Muhammed perform miracles?

(b) How was prophet Muhammed able to perform miracles?

(c) Give any **two** miracles performed by prophet Muhammed.

i) _____

ii) _____

53. **Either:** (a) State the **first** commandment in Christianity.

(b) Why did God give the Ten Commandments to the Israelites?

(c) How are the Ten Commandments similar to the national constitution?

What happens to a Christian who does not obey the Ten Commandments?

Or: (a) State the **first** pillar in Islam.

(b) Why was prophet Muhammed given the five pillars by Allah?

(c) How are the **five** pillars similar to the national constitution?

(d) What happens to a Muslim who does not follow the five pillars?

54. **Either** (a) Why is a Bible called a unique book by Christians?

(b) How many books make up a Bible?

(c) State any **two** writers of the Gospel books.

i) _____

ii) _____

Or: (a) Why is a Quran called a unique book by the Muslims?

(b) How many holy books do Moslems believe in?

(c) Who received each of the holy books below?

i) Injir _____

ii) Quran _____

55. **Either:**

(a) What is prayer according to Christianity?

(b) State any **two** types of prayer in Christianity.

i. _____

ii. _____

(c) Apart from prayer, how else do Christians communicate to God?

Or: (a) What is salat according to Islam?

(b) State any **two** types of salat in Islam.

i) _____

ii) _____

(c) Apart from salat, mention any other way Moslems communicate to Allah.

PAPER 7

1. Name the animal reared for transport in Bundibugyo.

2. Apart from using latitudes and longitudes, how else can we locate places in our district?

3. State **one** way school symbols are important in schools.

4. How can the training of more nurses and midwives help to promote health services in our communities?

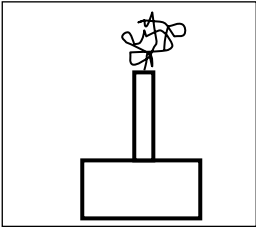
5. Why is it important to promote peace and security in an area?

6. How did the migration of ethnic groups affect East Africa economically?

7. State any **one** way European traders helped the people of Uganda.

8. Give any **one** challenge people faced in using traditional means of transport.

9. Which feature on the E.A.C coat of arms shows unity and friendship among the member states?

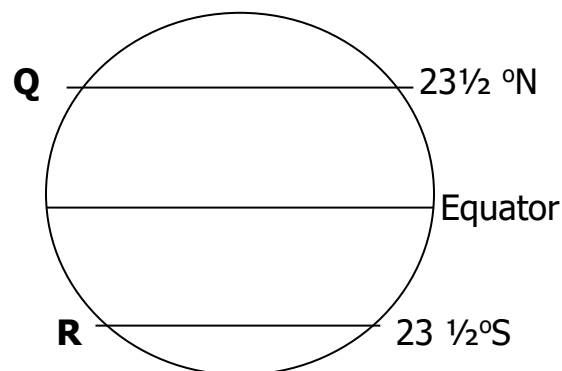
10.  Name the map symbol shown in the diagram.

11. How can mining help to promote development in a country like Uganda?

12. State how soils influence the settlement pattern of people in East Africa.

-
13. How did Ugandans react towards colonial rule?
-
14. State any **one** safe way of using water (lakes).
-
15. State **one** challenge that was faced by the East African countries after the collapse of E.A.C in 1977.
-
16. Why are people encouraged to participate in electing their leaders in a district (country)?
-
17. How were the monsoon winds useful to the early Arab traders?
-
18. State any **one** way slave trade affected families in Uganda.
-
19. Mention any **one** natural hazard that led to the downfall of Bunyoro Kitara.
-
20. How did the Nyamwezi chiefdom benefit from long distance Trade?
-
21. Name any **one** crop grown in wet climatic conditions.
-
22. Why is George .W. Kakoma still remembered in the history of Uganda?
-
23. In which way do the legends help to promote culture among people today?
-
24. What is the meaning of the term "renewable resources?"
-
25. How can high population be dangerous to the natural vegetation in an area?
-

26. How is NEMA and NFA similar in terms of roles?
27. Name any **one** metallic mineral.
28. State **one** way government can promote plantation agriculture in E. Africa.
29. How can conflicts between a school and its neighbourhood be controlled?
30. What was the main cause of Kabaka crisis in 1953?
31. State any **one** way environment can be used positively by people in your area.
32. Why should communities have local leaders in Uganda today?
33. Give any **one** area where the government spends its revenue for the people to benefit.
34. **Use the diagram below to answer questions 34 and 35.**



State the date at which the sun is overhead at,

Line Q _____

35. Name the Ministry in charge of schools in Uganda.

For questions 36 to 40 answer EITHER for Christian OR of Islamic but NOT both

36. **Either:** State the major role of the Archbishop to the church.

Or: State the major role of the Mufit to the Muslim community in Uganda.

37. **Either:** Name the final place of rest for believers in Christ.

Or: Name the final place of rest for believers in Allah.

38. **Either:** Why is it good to forgive one another?

Or: Why is it good to forgive one another?

39. **Either:** What is a parable?

Or: What is Hadith?

40. **Either:** Why were the high priests and teachers of the law against Jesus' ministry?

Or: Why were the elders and Meccan leaders against prophet Muhammad?

SECTION B

41. (a) What are social services?

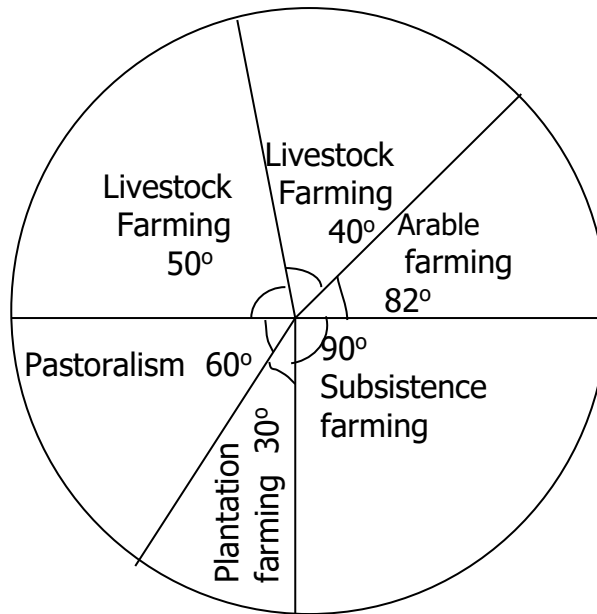
(b) Mention any **two** social services.

(i) _____

(ii) _____

(c) Why did colonialists build schools and hospitals in Uganda?

42. **Study the pie chart carefully and answer questions that follow.**



(a) What form of agriculture is practised by the largest number of people in the area indicated above?

(b) Name the agricultural practice that is carried out at the lowest percentage?

(c) State any **two** reasons why some people carry out the above activities in the pie chart.

(i) _____

(ii) _____

43. (a) What is an ethnic group?

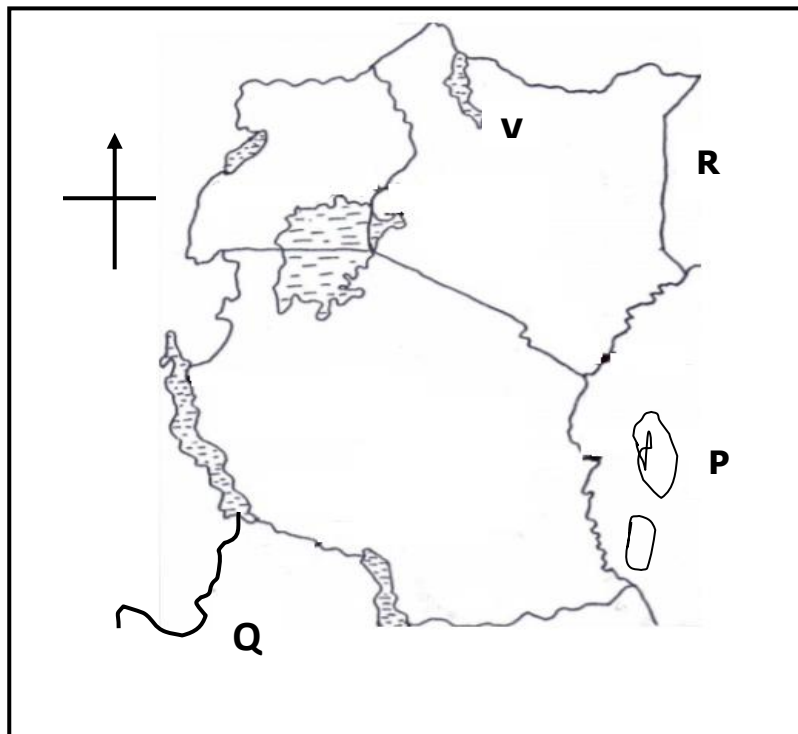
(b) Mention any **two** ethnic groups of East Africa.

(i) _____

(ii) _____

(c) State any **one** social contribution of the above ethnic groups in East Africa.

44. **Study the map carefully and answer questions that follow;**



(a) Name the major cash crop grown on the East African Island labeled **P**.

(b) How is country **Q** and Rwanda similar in terms of location?

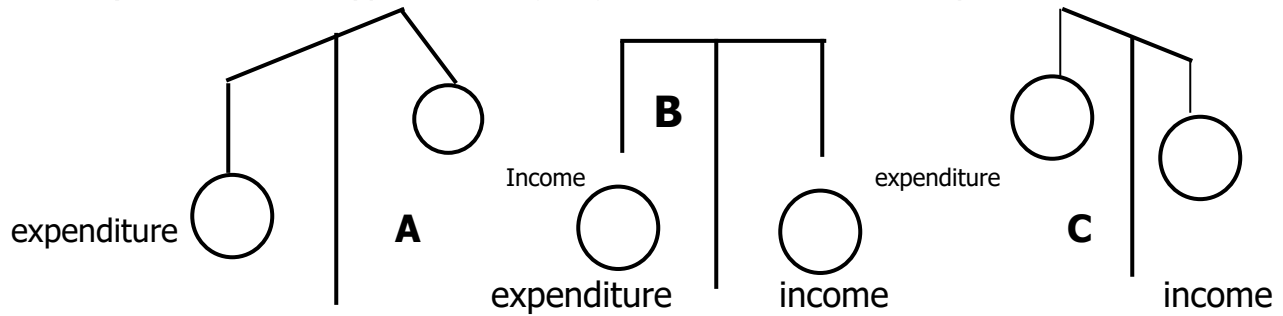
(c) What political / social problem is faced by country **R**?

(d) Give the importance of Lake marked **V**.

45. (a) Mention **one** form of tax that was introduced by British administrators in Uganda.
- _____
- (b) Name any **two** people who signed the 1900 Buganda Agreement on behalf of King Daudi Chwa.
- (i) _____
- (ii) _____
- (c) Why did colonialists introduce taxation policy in Uganda?
- _____
46. (a) Give **one** element of weather.
- _____
- (b) Mention any **two** disasters caused by weather
- (i) _____
- (ii) _____
- (c) How can people in your community help to control weather disaster?
- _____
47. (a) Name the European country that colonized Uganda.
- _____
- (b) Why did the above country colonize Uganda?
- _____
- (d) State any **two** results of British rule in Uganda.
- (i) _____
- (ii) _____
48. (a) What type of climate that is described as hot and dry?
- _____
- (b) How do plants in the above climatic region survive the hot and dry conditions?

(c) State any **one** way of controlling hot and dry conditions in East Africa.

49. (Use the three types of budget given below to answer questions.)



(a) Name the types of budget marked with letter.

(i) **A** _____

(ii) **B** _____

(b) Which of the above budgets promotes development of a country?

(c) State **one** part of a budget.

50. **Complete the table correctly.**

A	B
crop	Product
_____	Gun powder
Pyrethrum	_____
_____	Cooking oil
cotton	_____

In questions 51 – 55 answer Either for Christians Or for Islamic but not both.

51. EITHER:

(a) What is a talent?

(b) Mention any **two** examples of talents.

(i) _____

(ii) _____

(c) State any **one** way talents have helped Christians to earn a living.

OR:

(a) What is a talent?

(b) Mention any **two** examples of talents

(i) _____

(ii) _____

(c) How have talents helped Moslems to earn a living?

52. EITHER:

(a) Give the meaning of the term "suffering"

(b) Write down any **two** forms of suffering.

(i) _____

(ii) _____

(c) State **one** way one can control situations that may lead to suffering.

OR:

(a) Give the meaning of the term "suffering"

(b) Write down any **two** forms of suffering.

(c) How can one control situations that can lead to suffering?

53. EITHER

(a) What message did Angel Gabriel deliver to Mary?

(b) Name any **two** prophets in the Bible.

(i) _____

(ii) _____

(c) Name the prophet who preached about repentance.

OR:

(a) What message did Angel Gabriel deliver to Prophet Muhammad?

(b) Name any **two** prophets in Islam.

(i) _____

(ii) _____

(c) Name the prophet that is known for deliverance.

54. EITHER:

(a) Name any **two** types of prayers

(i) _____ (ii) _____

(b) State any **two** ways prayers are important to a Christian.

(i) _____

(ii) _____

OR:

(a) Name any **two** obligatory prayers.

(i) _____

(ii) _____

(b) State any **two** ways prayers are important to a Muslim.

(i) _____

(ii) _____

55. For Both

(a) Which son of Adam killed his brother?

(b) Name the brother who was killed.

(c) Why was the brother you have mentioned in 55 (b) killed?

(d) State any **one** way in which God punished the one who killed the brother mentioned above.

PAPER 8

110. Which country is the smallest among the East African Community members?

111. Name the river which creates a Natural boundary between Uganda and Tanzania.

112. Give **one** reason why people should spend their money wisely?

113. Why did the Banyoro stage the Nyangire rebellion?

114. Why does Mt. Rwenzori attract many tourists?

115. Which people built TANZAM railway?

116. Why is Pubungu still remembered in the history of Uganda?

117. State **one** value we learn from Legends?

118. How did the Africans benefit from joining LEGCO in 1945?

119. Give **one** way of solving conflicts between a school and its neighbourhood.

120. How did some Ugandans benefit from the indirect rule used by the British?

121. State **one** characteristic of L.Victoria.

122. State **one** factor that has caused the difference in climate between Kabale and Kotido.
- _____
123. Give **one** way in which a high population can lead to the development of a country.
- _____
- _____
124. Give one factor that influences vegetation distribution.
- _____
125. State **one** challenge of traditional means of communication.
- _____
126. Give any **one** way of using roads safely.
- _____
127. State **one** function of judiciary as an organ of government.
- _____
128. What type of a nation is Uganda?
- _____
129. Why is it difficult to control population growth in East Africa?
- _____
- _____
130. State **one** effect the rotation of the earth on its axis.
- _____
131. What type of rainfall is received in plains?
- _____
132. How does vegetation influence human activities?
- _____
133. What is immigration?
- _____
- _____
134. How did the people of Uganda socially benefit from the colonialists?

135. Give **one** reason why the people of Uganda struggled for national independence.

136. State **one** type of tax collected in Uganda.

137. How can child labour education be important in a community?

138. How is Mwanua in Tanzania economically important?

139. How can road accidents be reduced along Kampala Masaka / Mbarara road?

140. How can the government control population growth?

141. Why does the government of Uganda carry out population census?

142. Give the difference between natural and planted vegetation.

143. How has farming created employment among the people of E. Africa?

144. How are religious leaders important in a community?

From question 36 – 40, answer either Christianity or Islam but not both.

145. **Either:** Why did Jesus wash His disciples' feet?

Or: Why did Prophet Muhammed live and work with his followers?

146. **Either:** What do you understand by voluntary work in Christianity?

Or: What do you understand by voluntary work in Islam?

147. **Either:** How can a Christian musician use his talent to serve God?

Or: How can a Muslim musician use his talent to serve Allah?

148. **Either:** Give **one** quality of a good friend in Christianity.

Or: Give **one** quality of a good friend in Islam.

149. **Either:** What can cause suffering among young Christians?

Or: What can cause suffering among young Moslems?

SECTION B

150. (a) In the space below, draw the map symbols of each of the following features.

Rift valley	Swamp

(f) Why should symbols be used on a map?

(g) How different is a map from a picture?

151. (a) Write EAC in full.

(b) Who was the founder President of EAC in Uganda?

(c) How is Kenya important to Uganda in terms of trade?

(d) Which is the newest member country of EAC?

152. (a) Who is a missionary?

(b) Which was the first mission station in East Africa?

(d) State any **two** effects of missionary work in East Africa.

(i) _____

(ii) _____

153. (a) How has deforestation affected the climate of East Africa?

(b) Which instrument measures speed of wind?

(c) When is the sun overhead at the Equator?

(e) Give any **one** reason why places near the equator have high temperatures.

154. (a) What do you understand by direct rule as used by colonialists in East Africa?

(b) Why did colonial rulers use indirect rule?

(d) Mention **one** local leader who collaborated with colonialists.

(d) Why did some local leaders resist colonial rule?

155. (a) Why should a country carry out regular elections?

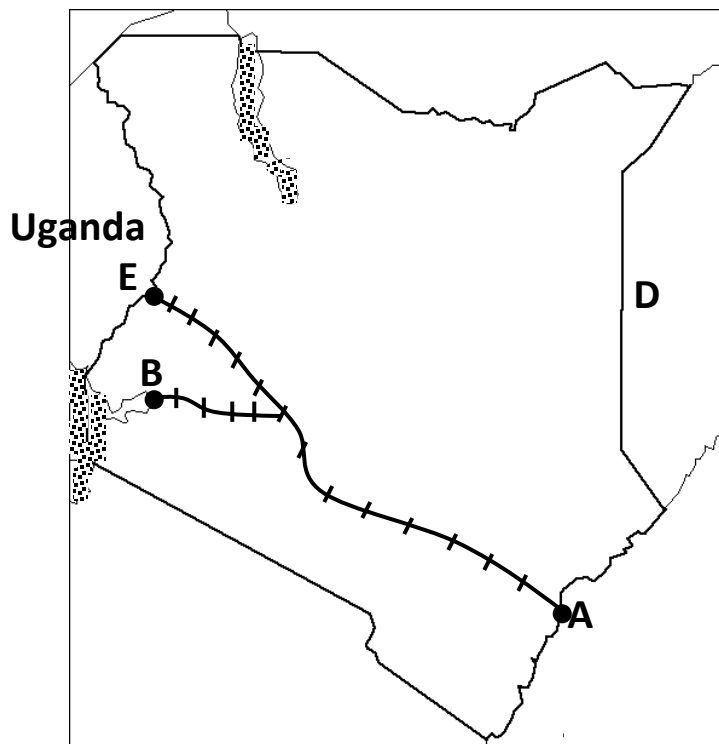
(b) What problem can political candidates face when campaigning for votes in Uganda?

(i) _____

(ii) _____

(d) Which body conducts national elections in Uganda?

156.



(a) What name is given to railway line from **A** to **B**?

(b) Why was the railway line above built?

(e) Name town **A**

(f) Name country **D**.

157. (a) Why did local leaders in East Africa participate in long distance trade?

(b) Give any **two** trade items brought by Arabs during the long distance trade.

(i) _____

(ii) _____

(d) How were slaves obtained during this trade?

158. (a) Why is child abuse at a high rate in Uganda today?

(b) How can the Ugandan government reduce child abuse in the country?

(c) State any **one** effect of child abuse.

(d) Name the local council official in charge of children's rights.

159. (a) Write **one** sentence about each of the following people in the history of East Africa

(i) Dr. David Livingstone.

(ii) H.M Stanley

(iii) John Hannington Speke

(iv) Sir Samuel Baker

For questions 51 – 54, answer either Christian or Islam but not both.

160. EITHER:

(h) Who is a neighbour according to Christianity?

(i) What did Jesus teach us to do to our enemies?

(j) How can religious leaders promote peace in the community?

(k) State the second greatest commandment in Christianity?

OR

(d) Who is a neighbour according to Islam?

(d) What did Prophet Muhammed teach us to do to our enemies?

(e) How can religious leaders promote peace in the community?

(f) State the third pillar of Islam.

161. EITHER

(f) What is work according to Christianity?

(g) Why should a good Christian work?

(v) _____

(vi) _____

(d) For how many days did God work during creation?

OR

(a) What is work according to Islam?

(b) Why should a good Moslem work?

(i) _____

(ii) _____

(e) For how many days did Allah work during creation?

162. EITHER

(g) Who was the mother of Jesus?

(h) Why was the person in **(a)** above chosen by God to be the mother of Jesus?

(i) Why was baby Jesus taken to Egypt after his birth?

(j) How was the birth of Jesus important to Christians today?

OR

(d) Who was the mother of Prophet Muhammed?

(e) Why was the person in **(a)** above chosen by Allah to be the mother of Prophet Muhammed?

(f) Why did Prophet Muhammed move from Mecca to Medina?

(g) How was the birth of Prophet Muhammed important to Moslems today?

163. EITHER

(g) As a Christian, mention any **two** good pieces of advice you can give to a classmate.

(iii) _____

(iv) _____

(h) Why are there rules and regulations in schools?

(i) Why should Christians forgive those who offend them?

OR

(c) As a Moslem, mention any **two** good pieces of advices you can give to a classmate.

(iii) _____

(iv) _____

(d) Why are there rules and regulations in schools?

(e) Why should Moslems forgive those who offend them?

164. FOR BOTH

(d) What is selfishness?

(e) State any **two** dangers of selfish behaviour.

(iii) _____

(iv) _____

(f) How did Kain / Kabir express selfishness towards his brother?

PAPER 9

1. Give **one** feature found on the school sign post.

2. What was direct rule as applied by the colonialists?

3. How is a granary important in a home?

4. Name the means of communication drawn below.



5. Give **one** element of weather.

6. How did the coming of the Luo speakers affect Bunyoro Kitara Empire?

7. Why is it important for people to pay taxes?

8. Name the climate that covers the largest part of Uganda.

9. Why is fish poisoning a bad fishing practice in East Africa?

10. Who designed the independence monument?

11. State any **one** reason for the collapse of the East African community in 1977.

12. In the space below, draw a traffic road sign for danger ahead.

13. How is democracy practised at school?
-
14. State the reason why few people in East Africa use Air transport.
-
15. In which way does our school benefit the community?
-
16. How is an ambulance important in our community?
-
17. Give **one** way the people of Uganda have benefited from River Nile.
-
18. State any **one** danger facing the fishing industry.
-
19. Why should the government of Uganda encourage the growing of non-traditional cash crops?
-
20. Apart from the Uganda Red cross Society, name any other voluntary organisation operating in your community.
-
21. What are non – renewable resources?
-
22. Why are tourists encouraged to hire tour guides when visiting game parks in Uganda?
-
23. Apart from keeping security, give any other one responsibility of a gate keeper at home.
-
24. State the reason why Milton Obote is remembered in the political history of Uganda.
-
25. Which discovery marked the end of Stone Age period?
-

-
26. State **one** reason why people keep their money in banks.
-
27. How was the formation of Mt. Rwenzori different from that of Mt. Kilimanjaro?
-
28. Why are midwives important in our community?
-
29. Give the reason why a rain gauge is put in an open space.
-
30. Give **one** reason why direct rule was used in Eastern Uganda by the British.
-
31. What is population structure?
-
32. How was the East African Examination council important to the East African Community member states?
-
33. How is the Red Colour of the traffic light useful to the pedestrians?
-
34. Give the importance of a school garden to the teachers.
-
35. How did River Rufigi support the fighters of the Maji Maji rebellion?
-

For questions 36 – 40, answer either Christianity or Islam but not both.

36. **Either:** How did the people of Jerusalem receive Jesus Christ on Palm Sunday?
-
- Or:** How did the people of Medina receive Prophet Mohammed?
-
37. **Either:** Who was the first Martyr according to the Bible?
-

Or: Who was the first Martyr according to Islam?

38. **Either:** How useful were the apostles to Jesus?

Or: How useful were the Caliphs to Prophet Muhammad?

39. **Either:** Who were the first foreigners to introduce Christianity in Uganda?

Or: Who were the first foreigners to introduce Islam in Uganda?

40. **Either:** How did St Francis of Assisi live a life of true discipleship?

Or: How did Khadijah live a life of true Moslem?

SECTION B

41. (a) Name the plant cover that covers the largest part of East Africa.

(b) Give **two** reasons why there are few people living near forested areas of East Africa.

(i) _____

(ii) _____

(c) How do the herbalists benefit from forests?

42. (a) State any **two** causes of urban – rural migration.

(i) _____

(ii) _____

(b) Why do people migrate today?

(c) How can the government of Uganda encourage urban – rural migration?

43. (a) Name the political head of a district.

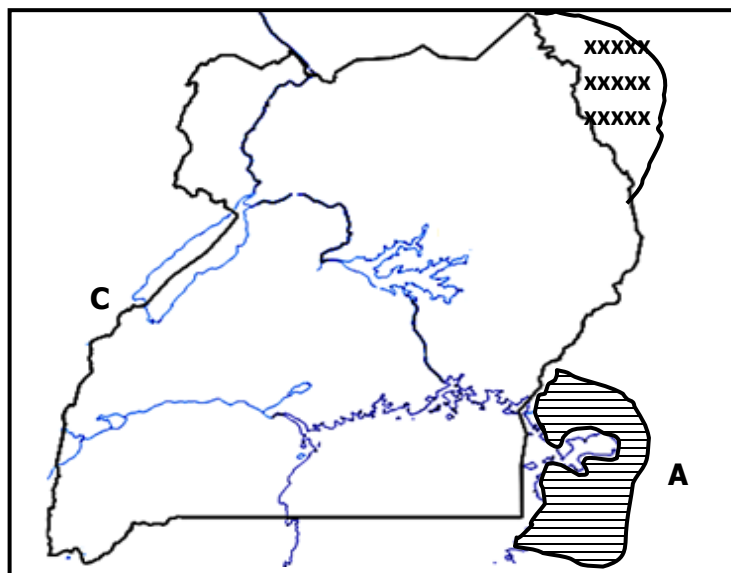
(b) State **two** ways of choosing leaders in our community.

(i)

(ii)

(c) Give **one** problem created by getting leaders through elections.

44. **Study the map below and answer the questions that follow.**



(a) State **one** reason why area marked **A** was transferred from Uganda to Kenya during the fixing of Uganda's boundaries.

(b) Name the **two** tribes that were separated during the demarcation of area marked **XXXXXX**.

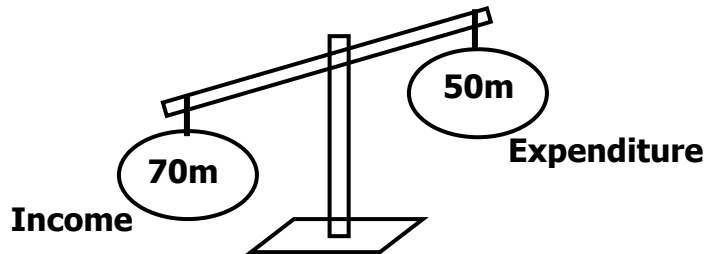
(i)

(ii)

(c) What is the direction of country marked **C** from Uganda?

45. (a) What is a national budget?

(b) Give **one** reason why a P.6 pupil should make a budget.



(c) Which type of budget is drawn above?

(d) Why is the above budget good for a school?

46. (a) Name **two** organs of a democratic government.

(i)

(ii)

(b) Give any **two** reasons why we need leaders in our country.

(i)

(ii)

47. **Match correctly.**

(a) Gold used to manufacture cement.

(b) Phosphates used to manufacture of glass.

(c) Limestone for making artificial fertilizers.

(d) Soda ash Used to manufacture artificial teeth.

(a) Gold

(b) Phosphates

(c) Limestone

(d) Soda ash _____

48. What do the following represent on the Uganda coat of arms?

(i) Blue stripes at the bottom of the shield.

(ii) The sun

(iii) The kob

(iv) The Uganda Motto

49. (a) Name the first stage of early man.

(b) Draw and name any **two** tools early man used while hunting.

(c) State the reason why early man never lived in caves before the discovery of fire.

50.



(a) Name the item drawn above which was used to carry grains.

(b) From which raw material is the above item made?

(c) Give **one** danger of making the above item to the environment.

-
- (d) Why do people make the above item in (a)?
-

For questions 51 – 55, answer either Christian or Islamic questions but not both.

51. EITHER

- (l) Who was the first person to be created by God?

- (m) How did the above person fail to live up to God's standards?

- (n) What was the immediate punishment that was given to the above person?

- (o) State **one** way people fail to live up to God's standards today.

OR

- (a) Who was the first person to be created by Allah?

- (b) How did the above person fail to live up to Allah's expectations?

- (c) What was the immediate punishment Allah gave to the person in (a) above?

- (d) State **one** way people fail to live to Allah's expectations today.

52. EITHER

- (a) What is suffering?

(b) Give any **one** type of suffering?

(c) State any **two** results of suffering today.

(i) _____

(ii) _____

OR

(a) What is suffering?

(b) Give any **one** type of suffering.

(c) State any **two** results of suffering today.

(i) _____

(ii) _____

53. EITHER

(a) Name the prayer that Jesus taught to his disciples.

(b) State any **two** reasons why Christians pray before going to sleep.

(i) _____

(ii) _____

(c) How is a prayer useful to a Christian?

OR

(a) What is salat?

(b) Give any **two** of the daily prayers said by Moslems.

(i) _____

(ii) _____

(c) How is salat useful to a true Moslem?

54. EITHER

(a) What is marriage?

(b) Give any **two** reasons why a mature Christian should marry.

(i) _____

(ii) _____

(c) Give **one** factor that can end marriage in Christian.

OR

(a) What is Nikkah?

(b) Give any **two** reasons why a mature Moslem should marry.

(i) _____

(ii) _____

(c) Give **one** factor that can cause divorce in marriage.

55. For both

(a) State any **two** ways the church / mosque has led to the development of our communities.

(i) _____

(ii) _____

(b) Mention **two** problems the church / mosque faces today.

(i) _____

(ii) _____

PAPER 10

165. How many countries share boundaries with Uganda?

166. What is Latitude?

167. Give one way traders promote development in a community.

168. Write one Highland tribe in Uganda

169. Which people helped Uganda to become a nation?

170. How does Peace and Security promote development in a country?

171. How did the missionaries undermine the culture of the people of East Africa?

172. Give one way in which the member countries of the East African community are going to benefit from South Sudan as a new member of the community.

173. State one proper way of managing wastes in your community.

174. Give one way schools have created employment in the community.

175. Which body in Uganda replaced the East African Examinations council?

176. How is Uganda location a disadvantage to her development?

177. Give one reason for saving money as a resource.

178. How has drought caused famine in most parts of East Africa?

179. Give one advantage of having a small family size.

180. State one way of preventing conflicts between a school and its neighbourhood.

181. In which compass direction is Kenya from Uganda?

182. Give one result of down warping on the earth's surface.

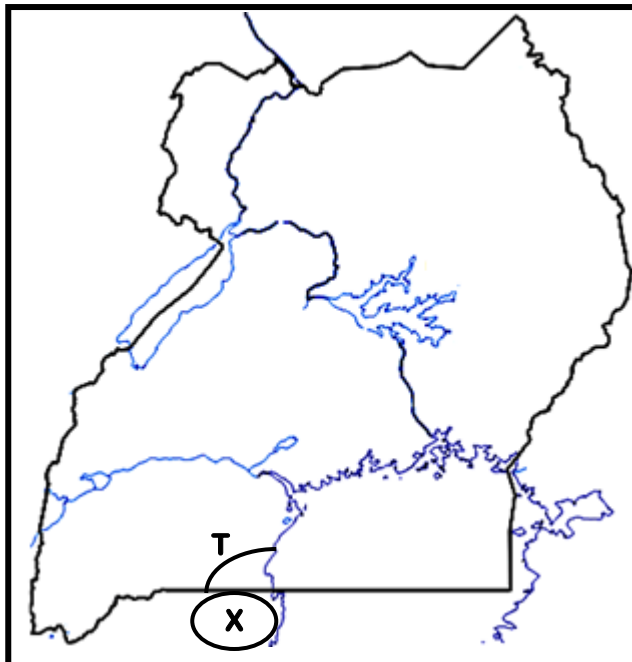
183. Why does Kasese district receive relief rainfall?

184. Why did Kabaka Muteesa I invite the Christian missionaries?

185. Give one reason why early man lived near Lakes?

186. Which country in East Africa is known as the Cradle land of man?

Use the map below to answer questions 24 – 27



187. Name the Kingdom marked X.

188. Which people formed the above kingdom?

189. Name river marked T.

190. Give one reason why the shaded area receives very little rainfall.

191. How do people benefit from recreational centres in their community?

192. If it is 12:00 O'clock at GMT what is the time at town Y 60° East.

193. Give one example of children with special needs.

194. How does rural urban migration affect villages?

195. Why do farmers prepare their land in dry seasons?

196. Give one way the people of East Africa benefited from explorers

197. State the main reason for advising farmers to grow non-traditional cash crops.

198. Give one reason why Local leaders need by laws

199. Give one way in which people have benefited from Legends.

From question 36 – 40, answer either Christianity or Islam but not both.

200. **Either:** What happened to Jesus at the garden of Gethsemane?

Or: What happened to prophet Muhammed at Mecca?

201. **Either:** State one weakness Christians have today

Or: State one weakness Muslims have today.

202. **Either:** Give the importance of the commandment Jesus left with his disciples.

Or: Write the first pillar of Islam.

203. **Either:** What do you learn from Christian martyrs?

Or: What do you learn from Muslim martyrs?

204. **Either:** How do Christians worship God?

Or: How do Muslims worship Allah?

SECTION B

205. (a) Write EAC in full

(h) Mention one founder president of the East African community.

(i) Give one symbol of the East Africa community.

(i) _____

(ii) _____

(j) State one factor that led to the collapse of the East African community in 1977.

206. (a) What are natural resources?

(b) How can vegetation as a natural resource be protected?

(c) Apart from the above, mention any other two examples of natural resources.

(i) _____

(ii) _____

207. Match list A and B correctly.

(i) Ignatius K. Musaazi	He was the first prime minister in Uganda.
(ii) Dr. Apollo M. Obote	He was the first president of Tanzania.
(iii) Julius Nyerere	He was a British collaborator in Uganda.
(iv) Semei Kakungulu	He informed the first political party in Uganda

(i) Ignatius K. Musaazi _____

(ii) Dr. Apollo M. Obote _____

(iii) Julius Nyerere _____

(iv) Semei Kakungulu _____

208. (a) What do you understand by the term population?

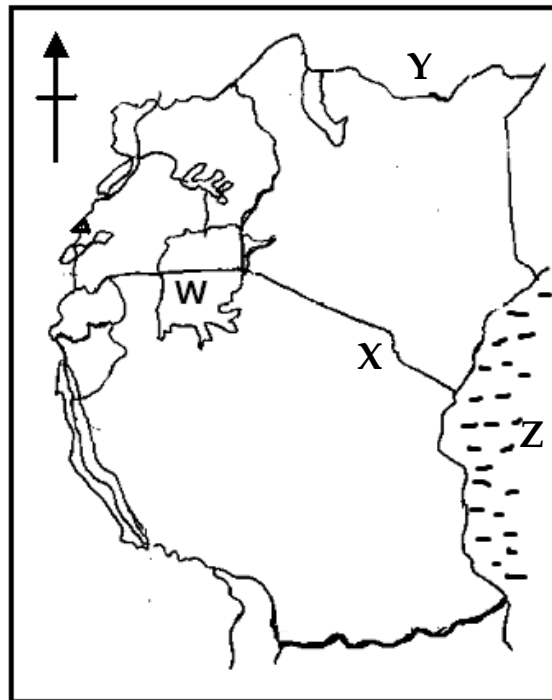
(b) Mention any one element of population structure.

(c) Give any two advantages of a bigger population in a country.

(i) _____

(ii) _____

209. Study the map of East Africa and answer the questions that follow.



(v) Name the major cash crop that is grown in district marked **W**.

(vi) Name Mountain marked **X**.

(vii) State one problem faced by country **Y**.

(viii) How does the water body **Z** promote development in East Africa?

210. (a) Why was early man also known as Stone Age man?

(b) Which discovery marked the end of Stone Age period?

(c) How did the discovery of farming help early man to live a settled life?

(d) Mention any one way through which early man got his food.

211. (a) What was long distance trade?

(b) Mention any two trade items that were brought to East Africa by the Arabs.

(i) _____

(ii) _____

(c) Why did the traders move in Caravans?

212. (a) How are wetlands important to people living in the surrounding areas?

(b) State two effects of swamp drainage

(i) _____

(ii) _____

(c) Mention one crop that grows well in wetlands.

213. (a) Give one aspect of climate.

(b) State the importance of each of the following weather instruments.

(i) Anemometer _____

(ii) Windvane _____

(c) Give one weather instrument that is kept in the Stevenson screen.

214. (a) Write NEMA in full.

(b) How are forests economically important in our region?

(c) State any two possible causes of deforestation in an area.

(i) _____

(ii) _____

For questions 51 – 54, answer either Christian or Islam but not both.

215. EITHER:

(p) What is a talent?

(q) How can people benefit from their talents?.

(r) How do people use their talents to benefit others?

(i) _____

(ii) _____

OR

(a) What is a talent?

(b) How can people benefit from their talents?

(c) How do people use their talents to benefit others?

(i) _____

(ii) _____

216. EITHER

(h) State any two different ways Christians show love to each other.

(i) _____

(ii) _____

(i) Give two ways through which we take care of God's creation.

(vii) _____

(viii) _____

OR

(a) State any two different ways moslems show love to each other.

(i) _____

(ii) _____

(b) Give two ways through which we take care of God's creation.

(i) _____

(ii) _____

217. EITHER

(k) What is a prayer?

(l) How do Christians benefit from prayers?

(m) State two requests we make in the Lord's Prayer?

(i) _____

(ii) _____

OR

(a) What is Salat?

(b) How do Moslems benefit from Salat?

(c) State any two types of prayers performed by Moslems in a day.

(i) _____

(ii) _____

218. EITHER

(j) What are Sacraments?

(k) Which Sacrament unites a woman and man as husband and wife?

(l) Other than the above, mention any two Sacraments in Christianity.

(i) _____

(ii) _____

OR

(a) What are pillars of Islam?

(b) State any three different pillars in Islam?

(i) _____

(ii) _____

(iii) _____

219. EITHER

(g) Write any two Christian organizations in Uganda

(i) _____

(ii) _____

(h) In which two ways have the Christian organizations promoted development in Uganda.

(v) _____

(vi) _____

OR

(a) Mention any two Muslim organizations in Uganda

(i) _____

(ii) _____

(b) In which two ways have Moslem organizations promoted development in Uganda.

(i) _____

(ii) _____

PAPER 11

1. What name is given to the holy book for Christians?

2. Why did Joseph and Mary take baby Jesus to Egypt?

3. Mention **one** sacrament that was administered by Jesus on Holy Thursday.

4. Which son of Adam committed the first murder against his brother?

5. State **one** thing you can do as a Christian in order to come back to God after sinning.

6. In which book in the bible do we find the story on the Israelites leaving Egypt for Canaan?

7. What does the suffering and death of Jesus Christ on the cross remind Christians of?

8. Pontius Pilate knew that Jesus had no blame before the law. Give one reason why he gave Jesus over to be crucified.

9. What is the importance of fasting to a Christian?

10. State the origin of suffering people go through today.

11. How can a Christian child show respect to his/ her elders?

12. What event marked the beginning of the church?

13. How did Jesus show that leaders are servant of their followers?

14. Why did God choose Moses to lead the Israelites to the Promised Land?

15. Why did God send Jesus to earth?

16. What event took place in the garden of Gethsemane?

17. How was Noah and his family saved from the floods?

18. Give any **one** symbol of Holy Communion.

19. Where will the righteous people go after death according to Jesus teaching?

20. Which prayer did Jesus teach his apostles?

21. What do we call the holy book for Christians?

22. Name any **one** apostle of Jesus.

23. Why do Christians mark Easter Sunday?

24. What important message did God tell Moses on Mount Sinai?

25. Name the prophet who was swallowed by a fish because of his disobedience.
-
26. State any **one** way in which Abraham showed his obedience to God.
-
27. Give **one** reason why Moses ran away from Egypt to Midian.
-
28. Name **one** cause of suffering in Christianity.
-
29. State any **one** lesson we learn from the parable of the lost son.
-
30. Mention the importance of the Ten Commandments to Christians today.
-
31. Why is the Bible considered to be a unique book?
-
32. How do pupils show obedience to school rules and regulations?
-
33. "I will make you fishers of men". To whom did Jesus make the above promise?
-
34. Mention **one** role of the church today.
-
35. Give **one** reason why Jesus Christ promised to send helper to the apostles.
-
36. Who was Abraham's father?
-

37. Why is it important to reconcile with others?

38. How can personal irresponsibility be a cause of suffering?

39. Write any **one** voluntary organization in Uganda.

40. On which day did the Holy Spirit descend on the apostles?

SECTION B

41. Match the following correctly.

i) Divine authority the authority where husbands and wives have power over each other.

ii) Civil authority the power which is possessed by the devil.

iii) Marital authority the authority possessed by God.

iv) Satanic authority the power and control that leaders have over the people they lead.

i) Divine authority _____

ii) Civil authority _____

iii) Marital authority _____

iv) Satanic authority _____

42. a) Mention any **two** things in the environment that were created by God.

i) _____

ii) _____

b) State one way each of the above things help people to live a happy life.

i) _____

ii) _____

43. a) Give the meaning of the word “disciple”.

b) Mention any **one** person out of the Bible who lived a true life of discipleship.

c) Write **two** qualities of a disciple.

i) _____

ii) _____

44. a) How did Jesus help people during his lifetime?

i) _____

ii) _____

b) State **two** ways in which the church today contributes to the bodily needs of people.

i) _____

ii) _____

45. a) What term is used to mean short stories with hidden meaning as taught by Jesus?

b) State **two** reasons why Jesus used the above short stories.

i) _____

ii) _____

c) What do Christians learn from the short story of the ten virgins?

46. a) What is a prayer?

b) Mention any **one** type of prayer.

c) Give any **two** ways people benefit from prayers.

i) _____

ii) _____

47. "Get all the advice you can and you will succeed; without it you will fail"

Proverbs 15:22

a) Write **two** ways people have been wrongly advised.

i) _____

ii) _____

b) Give **one** danger of wrong/ bad advice.

c) Who is the author of Proverbs?

48. a) Name the first **two** Anglican missionaries to arrive in Buganda in 1877.

i) _____

ii) _____

b) Identify any **two** ways in which Christianity has promoted social development in Uganda.

i) _____

ii) _____

49. a) Mention any **two** forms of suffering.

i) _____

ii) _____

b) How can you share suffering with a sick neighbour?

c) Why should Christians share in the suffering of others?

50. a) Who is a friend?

b) Write **one** quality of a true friend.

c) State **two** ways Jesus was a true friend to the people around him.

i) _____

ii) _____

51. State the importance of these sacraments as practiced by Christians.

i) Confirmation

ii) Holy orders

iii) Holy Communion

iv) Baptism

52. a) What is marriage?

b) State **two** reasons why people marry.

i) _____

ii) _____

c) Name the district official who presides over civil marriages.

53. a) Give **two** ways in which a Christian can give selfless service to people in a community.

i) _____

ii) _____

b) Mention **two** selfish behaviours among Christians today.

i) _____

ii) _____

54. a) Name the town in Galilee where Jesus Christ lived with his parents.

b) Mention **one** Christian value Jesus showed to his parents during His childhood.

c) Give the name of Zechariah's wife who was a relative to Mary the mother of Jesus.

d) How did God punish Zechariah when he refused to believe in the angel's message of his wife bearing a son at an old age?

55. a) What should a Christian do when he/ she is faced with challenges?

b) Why do Christians pray with their eyes closed?

c) Give any **two** activities that Christians should do during prayer service at church.

i) _____

ii) _____

PAPER 12

Name any one land locked country that neighbours Uganda.

Which physical feature covers the largest part of Uganda?

State one cultural practice among the Bagishu.

How are radios important to people?

Why are the slopes mountains densely populated?

Draw a map of a tree in the space provided below.



Name the clouds that bring rain.

What name is given to a group of people living together?

Name one inland port found on Lake Victoria in Uganda.

10. Apart from windy and rainy conditions, give any one other weather conditions.

11. Give any one reason why Sir Andrew Cohen forced kabaka Muteesa II to go to exile.


12. Which colour on the Uganda coat of arms symbolizes brotherhood?

13. State any one similar cultural practice among the Bagishu and the Bakonzo.

14. Give one reason why the Portuguese built fort Jesus at Mombasa.

15. Why is air transport used by a few people in East Africa?

16. In the space below, draw around sign for No parking.



17. Name the main line of latitude marked 0°.

18. Mention one legend told by the Baganda.


19. Write down one organ of the government of Uganda.

20. Name the town where headquarters of EADB are found.

21. How are volcanic mountains formed?

Mention any one bad practice during elections in your community.

Which type of budget is shown in the picture drawn below.



State any one reason for the coming of foreigners to East Africa.

Why did the Portuguese build for Jesus at Mombasa?

Give any one newspaper you printed in Uganda.

In which district is uganda's capital city found?

Which element of weather helps in winnowing?

Write one lake crossed by equator in Uganda.

Mention one season when most farmers plant their crops.

Why are most game parks found in savanna grasslands?

Give one reason why people cut down trees.

Name one tool used by a police man.

How can a primary six pupils keep the classroom clean?

State any one element of a good map.

Give the meaning of the term wind.

Name the largest lake in Uganda.

Mention any one semi cardinal point of a compass.

Give any one activity farmers do in the dry season.

Which colour on the Uganda flag represents sunshine.

SECTION B

Match the words in list A to the correct sentences in list B

List A	List B
Key	Measures the actual distance between two places on a map
Scale	Show direction
Title	Explain symbols used on a map
compass	Tells what a map is all about

- i) Key _____
ii) Scale _____
iii) Title _____
iv) Compass _____

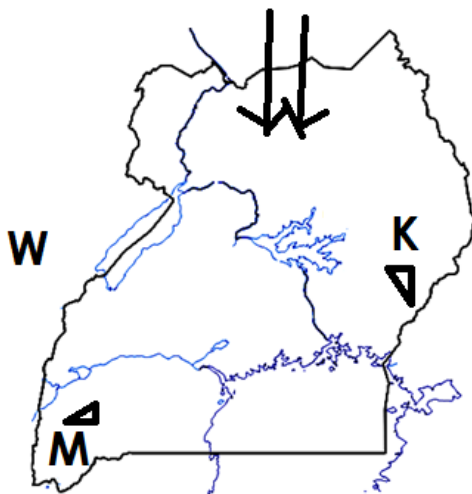
Write EAC in full.

b. Where are the EAC headquarters found.

c. Name any one organ of the revived EAC.

d. Apart from EAC flag, give any other one symbol of the EAC.

Study the sketch map of Uganda to answer questions below.



a. Name the mountains marked;

M _____ K _____

b. Which ethnic group entered Uganda following arrows above.

c. Name the country marked with letter W.

. What are human basic needs?

b. Mention any two examples of human basic needs.

i) _____

ii) _____

c. Why is a car not regarded as a human basic need?

. Give any two reasons for the coming of the Christian Missionaries to Uganda.

i) _____

ii) _____

b. Which type of education was introduced by missionaries to Uganda?

c. State any one problem that were faced by the Christian Missionaries in Uganda.

. What are social activities?

b. Apart from naming, give any other two examples of social activities.

c. Of what importance are social activities to the community?

. What term is used to mean basic freedom every child should have and enjoy?

b. State any three examples children's rights.

. Give the meaning of the term revenue?

b. Name any two source of government revenue.

c. State any one way the government spends its income.

. Define the term by-election.

b. Give any two causes of by-election.

i) _____

ii) _____

c. Name the body responsible for organizing national elections.

. Name any two lakes in Uganda that were formed by faulting.

i) _____

ii) _____

b. Give any two uses of lakes to people.

. Mention any two examples of cultural practices in our society.

i) _____

ii) _____

b. Write down any two ways culture is important to people in our community.

i) _____

ii) _____

. What is meant by the term budget?

b. Name any one part of a budget.

c. Apart from balanced budget, name any other two types of budgets.

. What is weather?

b. Write down two elements of weather.

i) _____

ii) _____

c. State one danger of heavy rainfall.

. State any four symbols of Uganda as an independent nation.

i) _____

ii) _____

iii) _____

iv) _____

. (a) Mention **one** group of people who benefit from forest.

(b) Which **type** of wood is got from planted forests?

(c) How do children benefit from trees planted in their compound?

i) _____

ii) _____

PAPER 13

1. Either: Who was the mother of Jesus Christ?

OR: Who was the mother of prophet Muhammad (PBUH)

2. Either: How do Christians talk to God

OR: How do Muslims talk to Allah?

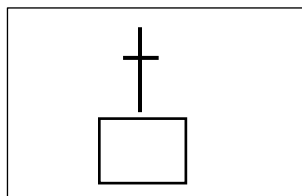
3. Either: Give any one cause of suffering among Christians

OR: Give any one cause of suffering among Muslims.


4. Either: which book in the Bible talks about creation.

OR: Which Islamic revealed book talks about the law of prophet Musa?

5. Either: Name the symbol below



Or. Name the symbol below



6. Either: Write any one way Christians show their faith in God.

Or. State any one way Muslims show their faith in Allah

7. EITHER: why do Christians pray before meals?

OR: Why do Muslims pray before meals?

8. Either: on which day do Christians remember the birth of Jesus Christ.

OR: On which day do muslims remember the birth of Prophet Muhammad?

9. EITHER: Name the sin which was committed by Cain.

OR: Mention the sin that was committed by Qabeel.

10. Either: who built the ark?

OR: Who built the ark?

11. Either: On which day was man created?

OR: On which day was man created?

12. Either: Name the first person to be created by God.

OR: Name the first person to be created by Allah.

13. Either: state any one role of pastors in the church.

OR: State any one role of an Imam in the mosque.

14. Either: Name any one book in the Bible.

OR: Name any one revealed book in Islam

15. Either: What is work?

OR: What is work?

16. Either: state any one way of helping the sick person.

OR: State any one way of helping the sick person.

17. Either: Give one example of God's messenger.

OR: Give one example of Allah's messenger.

18. Either: Why is virgin Mary remembered in Christianity.

OR: Why is Khadijah remembered in Islam?

19. Either: Write your religious name.

20. Who helped David to kill Goliath?

SECTION B

21. Either: (a) On which day did God create animals?

(b) Mention any **three** animals God created.

i) _____

ii) _____

iii) _____

OR: (a) On which day did Allah create man?

(b) Mention any **three** animals Allah created.

22. (a) Either: What is a community?

(b) Write any three ways you can help the needy in our community.

OR:(a) What is a community?

(b) Write down any three ways you can help the needy people in our community.

23.(a) Either: Name any **two** causes of suffering where we live.

(b) Mention any **two** effects of suffering to a Christians.

OR:(a) Name any two causes of suffering in where we live.

(b) Mention any two effects of suffering to a Muslim

24.Either: (a) What is a talent?

(b) List down any two talents God gives people

(c) Give one importance of talents to people.

OR:(a) What is a talent?

(b) List down any talents Allah gives to people.

(c) Give one importance of talents to people.

25.Either:(a) Give any two reasons why people do work.

(b) Who started work according to Christianity?

(c) Mention any one way how work is important to people

OR:(a) give any two reasons why people work.

(b) Who was the first worker according to Islam?

(c) Mention one way how work is important to people.

26.Either: Write down any two types of prayers.

Give any two reasons why people pray to God.

OR: Write down any two daily prayers in Islam.

Give any two reasons why Muslims pray to Allah.

27. Either : (a) Name the final place for the following types of people.

Believers

Sinners

(b) Give any two ways in which God will reward the believer on judgment day.

OR:(a) Mention the final place for the following types of people.

Believers

Sinners

(b) Give any two ways in which Allah will reward the believers on judgement day.

28. Either (a) Mention any two gifts of the Holy Spirit.

(b)List down any two fruits of the Holy Spirit.

OR:(a) Mention any two good things a Muslim child can do while on the road.

(b) Give any two ways in which Allah rewards people who do good things to others.

29. state any four qualities of a good religious' child.

30.(a)Write down any two selfish acts done by people.

(b) Give any two good decisions a P 6 child can make at home.

31.Either:(a) Name the first miracle to be performed by Jesus Christ.

(b) Mention any three miracles performed by Jesus Christ.

or: (a) Mention any three miracles performed by prophet Muhammad (PBUH)

(b) Why did he perform miracles?

32.Either: Mention any four things you can offer to God.

OR:(a) Mention any two things you can give as Zakah.

(b)Give any two groups of people who are to be given Zakah.

33.(a)Mention three symbols of the Holy Spirit.

(b) Give any one work of the Holy Spirit in the life Christians today.

OR: Mention any four pillars of Islam.

34. Write down any four things created by GOD.

35. State any four reasons why people fast

PAPER 14

1. Give one secondary point on a compass direction?

2. Which similarity is there between the Jopadhola and the Acholi in terms of ethnicity?

3. Draw a Crested Crane in the Uganda National Flag in the space provided below.
4. How do deciduous trees benefit from shedding off leaves in the dry season?

5. Write U.H.R.C in full

6. Name the only country in Africa that shares boundary with Lesotho.

7. Who chairs Local Council I meeting at the village level?

8. In which way does the insecticide making industry benefit from pyrethrum growing?

9. Which political party ruled Uganda during Internal self rule?

10. What is another name for the Six's thermometer?

11. Identify one human activity that is greatly disturbed by the water hyacinth.

12. How do people in cold areas keep themselves warm?

13. What makes Lake Victoria basin to be densely populated?

14. Who is a pilot?

15. Which raw material is used to make the item shown in the diagram below?



16. Identify one change brought by the Church Missionary Society (C.M.S) in Uganda.

17. A part from East African Community (E.A.C), name another common market where Uganda is a member.

18. Why did Kintu do all the tasks given to him by King Gulu?

19. State one advantage of a small family.

20. Give one way how climate determines human activities in an area.

21. Name the type of transport in which canoes are used.
-
22. Mention one way how the 1900 agreement benefited the British.
-
23. Why do the people in Mombasa town see the sun earlier than those in Kasese town?
-
24. Give one similarity between a Radio and a Drum.
-
25. What made Liberia not to be colonized by any European country?
-
26. State the type of wood obtained from planted forests.
-
27. In which way does a distributary affect the volume of water in the main river?
-
28. Name one month in the year in which the Equinox appears.
-
29. Give one importance of multi –purpose river projects to countries where they are found.
-
30. State one benefit the hospital gets from the community.
-
31. Calculate the population density of Owino Market which has 10,000 people and a Total Area of 2km².

32. What is Foreign exchange?

33. Give another name for Old Stone Age period.

34. State one way Rwanda can use to promote its tourism industry.

35. How is the Presiding Officer different from the Returning Officer?

For questions 36 – 40 answer either Christian or Islam but not both.

36. **Either:** How did Jesus hide his message from the enemies?

Or: What do we call the saying of Prophet Mohammad?

37. **Either:** Give one request you ask in the Lord 's Prayer.

Or: Where do Moslems face while praying?

38. **Either:** Name the first book in the New Testament.

Or: Name the Holy Book that was received by Prophet Dauda.

39. **Either:** What is Tithe?

Or: Give one condition which must be fulfilled before paying Zakat.

40. **Either:** Give one way of winning happiness from God.

Or: Give one way of winning happiness from Allah.

Section B

41(a).What group of people offer assistance to needy people without payments?

(b) Name any two examples of such groups.

(i) _____

(ii) _____

(c) Give one type of assistance, the needy people can get from such groups

42(a) What organization unites countries that extract oil?

(b) Mention any two products of oil.

(i) _____

(ii) _____

(c) How is oil mining beneficial to some African countries

43(a) What is a National Constitution?

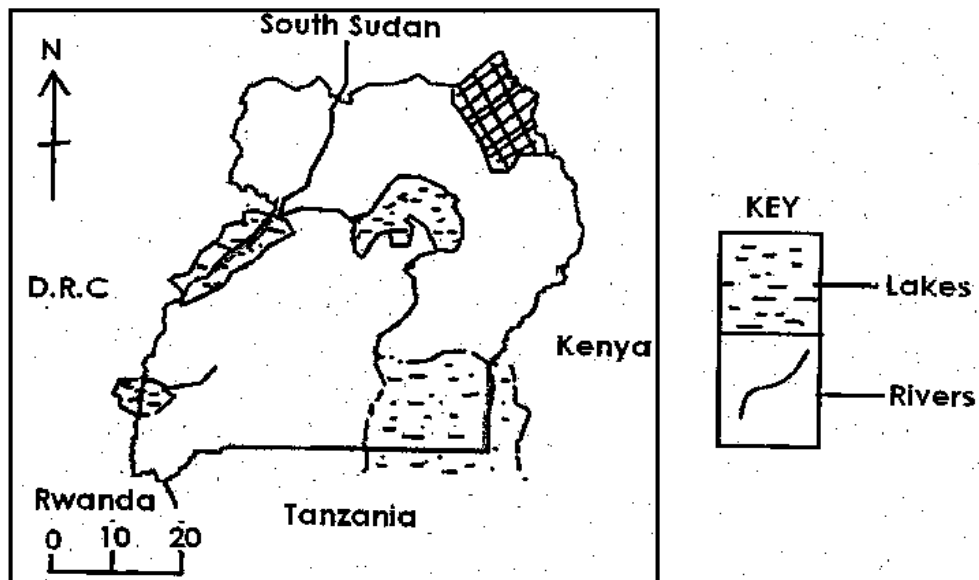
(b) Which National Constitution made the following?

(i) Uganda becoming a republic

(ii) Rescuing Traditional Leadership

(c) State one importance of a national constitution.

44. Study the map of Uganda below and answer the questions that follow.



(a) Draw Lake George on the map above.

(b) Which park is found in the shaded area on the map?

(c) Name two neighbors of Uganda where High commissioners represent it.

(i) _____

(ii) _____

45(a) Apart from appointment, how else do political leaders get leadership?

(b) Name any two groups of political leaders that get leadership through appointment.

(i) _____

(ii) _____

(c) State one importance of leaders in our community.

46(a) Name two physical features that were formed by faulting

(i) _____

(ii) _____

(b) How is Lake Katwe different from Lake Kyoga?

(c) In which way do lakes support wild life?

47(a) Who were the Boers?

(b) How did the coming of the British affect Boers?

(c) State any two effects of the Great Trek.

(i) _____

(ii) _____

48(a) What are children's rights?

(b) Give one example of children's rights.

(c) Which L.C.I official is in –charge of children affairs?

(d) A part from children, name one special group of people represented at Local Councils I


49(a) Why are schools advised to have Stevenson Screens?

(b) Which colour is painted on Stevenson Screens?

(c) From what material are Stevenson Screens made?

(d) How is gaseous exchange made possible in the Stevenson screens?

50(a) Name the road signs below.



(b) Which department is responsible for putting up the road signs in (a)?

(c) What is the importance of Road signs to Road users?

For questions 51 – 55 answer either Christianity or Moslem but not Both.

51. **Either:** (a) What term was given to the three wise men that went to see Baby Jesus?

(b) Which source of light guided the three wise men to baby Jesus?

(c) How did these wise men show love to baby Jesus when they met him?

(d) Mention one name among these three wise men?

Or: (a) What is the meaning of the name “Mohammad”?

(b) Who raised Prophet after the death of parents?

(c) How was Fatimah related to Prophet Mohammad (P.B.U.H)

(d) Which beloved wife of Mohammad rested him on her laps at the time of his death?

52. **Either:** (a) Mention two ways how a Christian prepares for Heaven.

(i)

(ii)

(b) In which two ways can a Christian fail to go to heaven?

(i)

(ii)

Or: (a) Give another name for Hell.

(b) Mention any three groups of people who will go to hell.

(i)

(ii)

(iii)

53. **Either:** (a) Name the helper God gave Moses when going to Egypt.

(b) What role did the helper in (a) above do before the Pharaoh?

(c) Give two evidences to show that God protected the Israelites in Egypt.

(i)

(ii)

Or: (a) Name the helper Allah gave Musa when going to Misiri.

(b) What role did the helper in (a) above do before the Pharaoh?

(c) Give two evidences to show that Allah protected the Ban – Israel in Misiri.

(i)

(ii)

54. **Either:** (a) What is a prayer?

(b) State two types of prayer.

(i)

(ii) _____

(c) How is a prayer important to a Christian?

Or:(a) Name the last daily prayer in Islam.

(b) Give two ways how Moslems prepare for prayer.

(i) _____

(ii) _____

(c) When are Tarawiih prayers said in Islam?

55. **For Both:** State for ways how Christian and Muslim teachings are important in society?

(i) _____

(ii) _____

(iii) _____

(iv) _____

PAPER 15

1. Why are the pupils in your school taught how to draw maps?

2. Which East African country is referred to as the "Pearl of Africa?"

3. Give one reason for not allowing people to settle in swamps.

4. Name one building material which can be got from a lake.

5. How was the formation of Lake Albert different from that of Lake Victoria?

6. How is a feeder road useful to the people in your sub-county?

7. Mention one basic need of a community.

8. How does mountain Rwenzori promote economic development?

9. Give one effect of spending money without a budget?

10. In what way has the parliament of Uganda tried to protect our forests?

11. How did Ethiopia become a land locked country?

12. Why are most people in Libya settled along the Mediterranean coast?
-
13. State one disadvantage of an extended family.
-
14. Mention one way that children's rights are being abused in our schools.
-
15. Why is it possible to carry out large scale irrigation in Sudan?
-
16. How will the programme of rural electrification reduce rural-urban migration in Uganda?
-
17. Give one way Apartheid affected the blacks in the Republic of South Africa.
-
18. What is a passport important?
-
-
19. Give one reason for introducing many industries in Uganda.
-
20. Which missionary brought the first improved cotton seed in Uganda?
-
21. Apart from attracting tourists, how is Lake Katwe economically important?
-

-
22. Name the East African country which is not a member of COMESA.
-
23. Give one symbol of the East African Community.
-
24. How was the formation of Mt. Elgon similar to that of Mt. Mufumbiro?
-
25. Mention one way that the Africans were affected by white settlers in Kenya.
-
26. Why was it easy for the Arab traders to get slaves from East Africa?
-
27. Mention one problem facing the forests in Uganda.
-
28. Why is it good for countries to join international organizations?
-
29. Give one factor that has led to the increase in population in Kampala?
-
30. How is the Uganda police force promoting Law and order in your home area?
-

31. Apart from spreading Christianity and Islam, how have the religious Organizations improved the standards of living in our communities?

32. How is the government of Uganda trying to fight poverty in our homes?

33. Which organization unites all English speaking countries of the world?

34. Why are some people kept in prisons?

35. Give one factor that delayed the entry of Europeans into Africa.

For each of the questions 36 to 40, answer Either the Christian Or Islamic questions but Not both. No marks will be given to a candidate who attempts both questions in a particular number.

36. **Either:** Give one way Jesus Christ showed concern for the suffering.

Or: Give one way Mohammed (PBUH) showed concern for the suffering.

37. **Either:** How was Adam helpful after the completion of creation?

Or: How was Adam helpful after the completion of creation?

38. **Either:** Why is it food for every Christian to make an offertory?

Or: Why is it good for every Muslim to give Zakat el-Fitri?

39. **Either:** Give one duty of the church when a Christian dies.

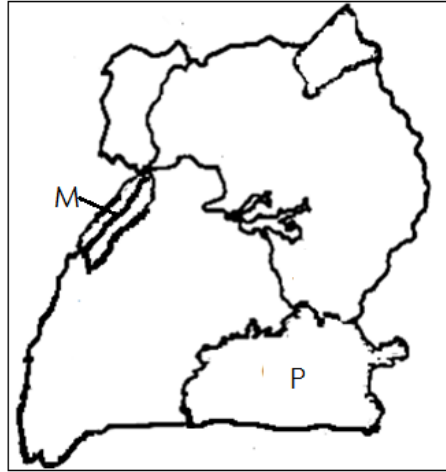
Or: Give one duty of angels when Muslims die.

40. **Either:** Why was King Herod unhappy with the birth of Jesus Christ?

Or: Why did Prophet Mohammed migrate from Mecca to Medinah in 622 A.D?

SECTION B

41. Study the map below and answer questions a-d



a) Name one district of Uganda found in the feature marked P.

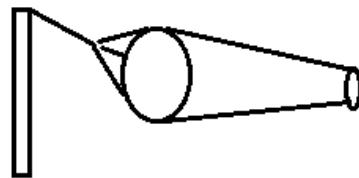
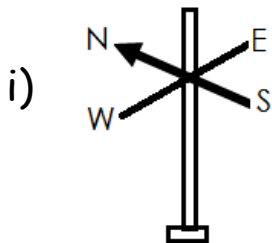
b) What problem does the district in (a) above face?

c) How is the government of Uganda trying to settle the problem in (b) above?

d) In what way is feature P economically different from M?

42. a) Why is it good to study weather?

b) Give one importance of each of the following instruments.



- i) _____
ii) _____
c) Why do people in mountainous areas wear thick clothes?
i) _____

43. a) Name two countries that share the Nile Valley basin.

- i) _____
ii) _____

b) Why did farming in Africa originate in the Nile Valley?

c) Which cash crop is grown under irrigation in the Nile Valley?

44. a) Apart from power, give two factors that have led to the fast development of Kampala City.

- i) _____
ii) _____

b) Mention two problems that have been caused by a large population in the towns of Uganda.

- i) _____
ii) _____

45. a) Give two traditional methods of fishing.

- i) _____
ii) _____

b) Why does the fishing industry need a good transport system?

c) How have the modern fishing methods affected the fishing industry?

46. a) Apart from Civil Authority, give two types of authority.

i) _____

ii) _____

b) Write down two symbols of civil authority.

i) _____

ii) _____

47. a) Mention two causes of the refugee problem in Africa.

i) _____

ii) _____

b) Give one organization that is helping the refugees in Uganda.

c) State one way refugee problem can be reduced in Africa.

48. a) Name two pan-Africanists who led their countries to self rule in East Africa.

i) _____

ii) _____

b) Give two methods used by the Pan-Africanists?

i) _____

ii) _____

49. a) Name two symbols of Uganda that are found in our Coat of Arms.

i) _____

ii) _____

b) Why is it important for every country to have symbols?

c) How do school children show patriotism at their assemblies?

50. a) Name the country in the Horn of Africa which affected by civil war?

b) Give one way that the African Union is helping the people who are suffering from wars in Africa.

c) How have wars affected the people of Africa?

For each of the questions 51-55, answer Either Christian or Islamic questions but NOT both. No marks will be given to a candidate who attempts both questions in a particular number.

51. **Either:** Complete the sentences in B by matching with words in List A below.

List A

i) Adam

ii) Abel

- iii) Eve
- iv) Noah

B

- i) The first person to kill _____
- ii) The first person to be killed _____
- iii) The first person to sin _____
- iv) The first person to hear God's voice _____

Or: Complete the sentences in B by matching with words in List A below.

List A

Adam
Habeel
Hawa
Nuuh

B

- i) The first person to kill _____
- ii) The first person to be killed _____
- iii) The first person to sin _____
- iv) The first person to hear God's voice _____

52. **Either:** a) Who was sold to the Egyptians by his brother?

b) Which prophet was born in Egypt?

c) Why was bay Jesus taken to Egypt?

d) Give one result of the Exodus.

Or: a) Who was sold to the Egyptians by His brothers?

b) Which prophet was born in Misri?

c) Name the prophet who was a son of Mariam?

d) Give one result of the Exodus.

53. **Either:** a) Give two ways of reconciliation.

i) _____

ii) _____

b) State two benefits of reconciliation.

i) _____

ii) _____

Or: a) Give two ways of reconciliation.

i) _____

ii) _____

b) State two benefits of reconciliation.

i) _____

ii) _____

54. **Either:** a) Which summarized commandment makes us to believe that there is only one God? _____

b) Give two Christian practices that strengthen one's faith.

i) _____

ii) _____

c) What is the greatest reward from being faithful?

Or: a) Which pillar of Islam makes us to believe that there is only one God?

b) Give two Islamic practices that strengthen one's faith.

i) _____

ii) _____

c) What is the greatest reward from being faithful?

55. **Either:** Write short note about each of the following words.

a) Christmas: _____

b) Good Friday: _____

c) Easter: _____

d) Pentecost: _____

Or: Write short notes about each of the following words.

a) Minna: _____

b) UMRA: _____

c) Idd el-Adhuha _____

d) Miraj _____