

Tekart

Social Studies

Revision Practice Booklet

tekartlearning.com

Book 7



Vol 1

Index No:

Name:

School:

Year:

For more Booklets of this kind, Visit www.tekartlearning.com or call [+256754895241](tel:+256754895241)

SECTION A

1. Name the type of climate described as hot and wet throughout the year.

2. Mention any one place where people get spiritual guidance.

3. State any one factors that attracted the Bantu cultivators to settle within the lake regions.

4. Give any one way sand mining can negatively affect farming in an area.

5. Mention the national symbol which is similar to a school badge.

6. How did Dr. Albert Cook socially contribute to the life of people of Uganda?

7. Name the river which separates Tanzania from Uganda.

8. Why is road maintenance in rural areas still difficult?

9. Give any one reason why people make plans of what to buy before shopping.

10. How did Johann Ludwig Krapt make it easy for the coastal people to understand the bible?

11. What was the main reason for the signing of Moresby treaty?

12. How has prolonged drought contributed to loss of lives in Uganda?

13. What happens to a law breaker when the court has proved him/ her guilty?

14. How did the Namirembe agreement bring back happiness in the Buganda kingdom?

15. State any one role played by civil servants.

16. Name the body responsible for conserving the environment.

17. Give the importance of having voluntary workers in the district.

18. How is a scale useful to a map reader?

19. Below is the number plate of Dr. Tayala's vehicle. What does letter U stand for on the number plate?

UBA 600B

20. Why is tourism called an invisible trade?

21. Write NEMA in full.

22. Give any one way the early man protected himself from danger.

23. Which type of timber is used in the ship building industry?

24. Why is there no hydro-electricity in Kalangala district?

25. What does the Golden colour on the African Union flag represent?

26. Mention any one effect of lighting on buildings.

27. How do people in rural areas benefit from the establishment of small scale industries?

28. What do we call the sudden increase in the number of people living in an area?

_ 29. How does a school provide market to the community?

30. Name the leader of the Democratic party who took part in the independence elections of Uganda.

_ 31. State any one way children abuse their rights.

32. How was the Royal Geographical Society important to early explorers who came to Uganda?

33. Give any one way the government benefits from people when they pay taxes promptly.

34. Name the only high land Nilotes tribe found in Uganda.

35. State any one common cause of accidents on water.

In questions 36 – 40, answer Either Christianity or Islam but not alternatives in a number

36. **Either:** Name the sacrament that makes people to become priests.

Or: What title is given to a person who leads prayers in the Mosque?

37. **Either:** Name the first prophet in Christianity.

Or: Name the last prophet in Islam.

38. **Either:** Give any one reason why Christians visit Namugongo.

Or: Give any one reason why Muslims visit Mecca.

39. **Either:** How do people use their mouth to serve God?

Or: How do people use their mouth to serve Allah?

40. **Either:** Give the importance of the Holy Bible to Christians.

Or: Give the importance of the Holy Quran to Muslims.

SECTION B (60 MARKS)

41. a) State any two indicators of a good transport network system in a country.

i) _____

ii) _____

b) Give two ways a good transport network promotes development in a country.

i) _____

ii) _____

42. a) Name one selfless organization in Uganda which provides shelter/homes for orphans.

b) Apart from providing homes, how else do orphans benefit from the above organization?

c) Mention any two other organizations which provide similar services to people in Uganda.

i) _____

ii) _____

43. a) What title is given to the head of the Judiciary?

b) Give one example of people who make up the Judiciary.

c) State any two roles of the Judiciary.

i) _____

ii) _____

44. Match the following dams to the rivers where they are found.

i) River Niger - Akosombo dam

ii) River Orange - Kariba dam

iii) River Zambezi - Verwoerd dam

iv) River Congo - Kainji dam

a) River Niger _____

b) River Orange _____

c) River Zambezi _____

d) River Congo _____

45. a) Name the major tourist attraction found in Mgahinga National park.

b) Give any two reasons why the tourism industry in Uganda has developed.

i) _____ ii) _____

c) What can the government of Uganda do to attract more tourists into the country?

46. a) State any two factors that unite members of a nuclear family.

i) _____

ii) _____

b) Give any two ways how order can be created in a home.

i) _____

ii) _____

47. a) Name the organization that unites all the former colonies of the British empire.

b) Give any two ways a country like Uganda benefits as a member of the above body.

i) _____

ii) _____

c) State any one challenge the above body faces today.

48. a) What is urbanization?

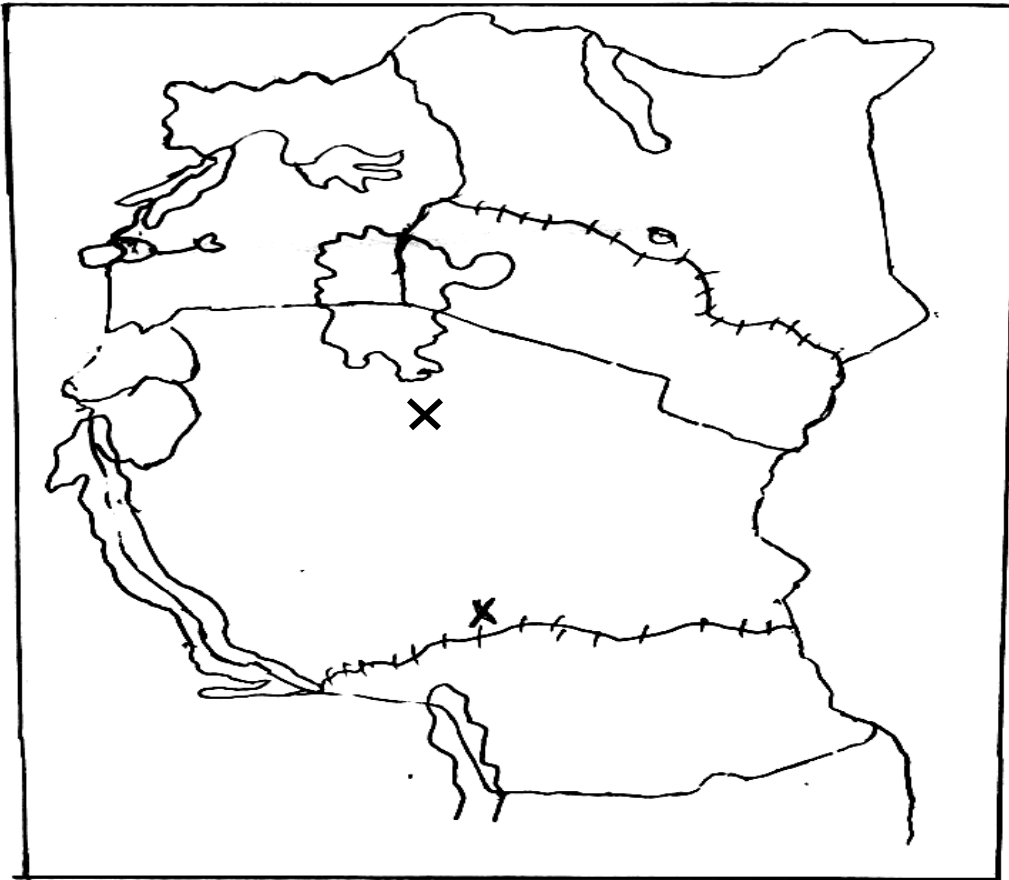
b) Give any two roles of urban centres to rural areas.

i) _____

ii) _____

c) Give one role of rural areas to urban areas.

49. Use the map below to answer questions that follow



a) Name the railway lines marked with letters Q and X.

i) Q _____

ii) X _____

b) Give the reason why the colonialists encouraged railway construction in East Africa.

c) Why is railway transport not commonly used by people in Uganda today?

d) Give any two ways faulting is important to the economic development of Uganda.

i) _____

ii) _____

50. a) What is relief?

b) Mention any one feature that was formed through faulting.

For questions 51 – 54, answer Christianity or Islam not both on each

51. **Either:** a) Who was the first human being to be created by God?

b) Name two of the sons God gave to the above person

i) _____

ii) _____

c) Which son did God give to the above person to replace Abel after his death?

Or: a) Who was the first human being to be created by Allah?

b) Name two of the sons Allah gave to the above person in “a”

i) _____

ii) _____

c) Which son was killed by the brother?

52. **Either:** a) What is suffering?

b) How did the Uganda martyrs suffer because of their faith?

c) How did the persecution of the Uganda martyrs affect the Christian religion? _____

d) Who was the youngest among the Christian martyrs?

Or: a) What is suffering?

b) Which prophet is known for suffering and perseverance in Islam?

c) How did he know that the floods had ended?

53. **Either:** a) Name the prophet in the Bible who survived floods.

b) Give one reason why the above mentioned prophet survived the floods.

c) How did he know that the floods had ended?

Or: a) Name the prophet in the Quran who survived floods.

b) Give one reason why the above mentioned prophet survived floods.

c) Why did God send the floods?

54. **Either:** a) State any one way a Christian can help a neighbor who is sick.

b) Give any two ways Jesus showed concern to the sick

i)

ii)

c) What lesson do we learn from Jesus' concern?

Or: a) Give any one way a Muslim can help a neighbor who is sick.

b) State any two ways Prophet Muhammad showed concern to the sick.

i)

ii)

c) What lesson do we learn from prophet Muhammad's concern?

55. **For Both:** a) What is a misunderstanding?

b) State any two causes of misunderstandings.

i) _____

ii) _____

c) State any one effect of misunderstandings.

END

8. Why is Africa regarded as a Cradle land of man-kind?

9. What factor of climate influences settlement of people in an area?

10. Write ECOWAS in full.

11. How are the Masai and Karamojong similar in their occupation?

12. State any one way soil erosion is being reduced in Kabale.

13. Why are school assemblies important in a school?

14. Which colour on the Uganda flag symbolizes brotherhood of mankind?

15. What is the main duty of Judiciary organ to the democratic government?

16. Name the Pan Africanist who founded the Universal Negro-Improvement Association.

17. Why is tourism called an invisible trade?

18. Why are slopes of mountain Kenya densely populated?

19. Mention any one characteristic of rift valley lakes.

20. Which animal is commonly referred to as the ship of the desert?

21. How did Mungo Park meet his death in West Africa?

22. Which type of land form covers the largest part of Africa?

23. In which direction will David face if he turns anti-clock wise from North through 90°?

24. What is a bye-election?

25. Name the winds that bring rains to the Mediterranean region in winter.

26. Give one use of a mobile phone to the youth today.

27. What is decentralization?

28. Name the most common type of fish caught in Lake Victoria.

29. How did Alexander Mackey promote Education in Uganda?

30. Who was the founder of the Imperial British East-African Company?

31. Why was Liberia not colonized?

32. Why are the Miombo woodland of Tanzania poorly inhabited?

33. Name one instrument of power given to Yoweri Kaguta Museveni when he was sworn in as president of Uganda.

34. State one result from the signing of the 1900 Buganda Agreement.

35. Give one contribution of Indians to the economic development of Uganda.

For each of the questions 36-40, answer either Christian or Islamic but not both alternatives in a number.

36. **Either:** Give one reason why God created Eva from Adam's rib.

Or: Why did Allah create Hawa from Adam's rib?

37. **Either:** Which angel announced the birth of Jesus Christ to Virgin Mary?

Or: How is angel Jibril related to the spread of Islam?

38. **Either:** Which creature is blamed for the down fall of man?

Or: How did Ibris cause Adam to leave Janah?

39. **Either:** Give one evidence to show that Noah was faithful to God.

Or: Give one evidence to show that Prophet Nuhu was faithful to Allah.

40. **Either:** Give one reason why a Christian should be friendly to a neighbour.

Or: Give one reason why a Muslim should be friendly to a neighbour.

SECTION B

41. **Match the following items in list A with those in list B correctly.**

List A

Lake Katwe
Lake Albert
Lake Kyoga
Kabaka's lake

List B

faulting
man-made lake
volcanicity
down warping

- a) Lake Katwe _____
b) Lake Albert _____
c) Lake Kyoga _____
d) Kabaka's lake _____
42. a) What is a budget?

b) Give two reasons why a school needs a budget.
i) _____

ii) _____

c) Which ministry prepares a National budget in Uganda?

43. a) State one of the children's rights.

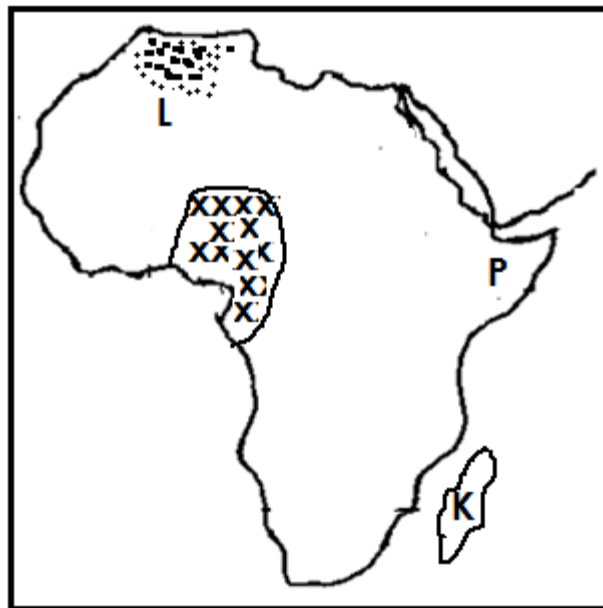
b) Mention any two ways how children's rights are violated.

i) _____

ii) _____

c) Which local council I executive is responsible to protect children's rights?

44. Below is a map of Africa, use it to answer the questions that follow.



a) Name the:

i) Mountain marked L _____

ii) Country marked K _____

b) What name is given to the part of Africa marked P?

c) Why does the area shaded xxx receive rainfall throughout the year?

45. What role was played by the following personalities in the history of Africa?

i) Dr. David Livingstone: _____

ii) Sir Samuel Baker: _____

iii) Dr. Kwame Nkrumah: _____

iv) Nelson Mandela: _____

46. a) Name the chief economic activity of the following people living around:

i) Lake Victoria: _____

ii) Mabira forest: _____

b) State two disadvantages of encroaching on forest lands.

i) _____

ii) _____

47. a) What is population?

b) Stat two factors that influence population growth in Uganda.

i) _____

ii) _____

48. a) Name one game park in East Africa where tourists may find each of the following:

i) Flamingo birds _____

ii) Mountain gorillas _____

b) State any two problems facing game parks of East Africa.

i) _____

ii) _____

49. a) What does the term 'migration ' mean?

b) State any two causes of migration by the early man?

i) _____

- ii) _____
c) What is urban-rural migration?

50. a) Give any two uses of land as a major resource of people.
i) _____
ii) _____
b) Apart from land, give any two other major resources in East Africa.
i) _____
ii) _____

For each of the questions 51-55, answer Either the Christian or Islamic questions but not Both alternatives in a number.

51. **Either:** a) What is marriage in Christianity? _____

b) State two reasons why people marry one another.
i) _____
ii) _____
c) Mention the commandment which protects married couples.

- Or:** a) What is Nikah? _____

b) Mention two reasons why Nikah is important.
i) _____
ii) _____
c) Mention any one gift Allah gives to married people.

52. **Either:** a) Mention any two miracles performed by Jesus Christ.
i) _____
ii) _____
b) Give any two reasons why Jesus Christ performed miracles.
i) _____
ii) _____

Or: Mention any four pillars of Islam.

- i) _____
- ii) _____
- iii) _____
- iv) _____

53. **Either:** a) Give the importance of the following days on the Christian calendar.

i) Good Friday: _____

ii) Easter Sunday: _____

iii) Palm Sunday: _____

b) Which apostle doubted the resurrection of Jesus Christ?

Or: a) Mention two groups of people who are supposed to get zakat.

i) _____

ii) _____

b) Give any two reasons why Muslims give zakat.

i) _____

ii) _____

54. **Either:** a) Write down any two gospel books in the Bible.

i) _____ ii) _____

b) Write down any two miracles performed by Jesus Christ in the Bible.

i) _____

ii) _____

Or: a) Write down any two books in Islamic faith.

i) _____ ii) _____

b) Mention two prayers in Islamic faith.

i) _____ ii) _____

FOR BOTH

55. a) Identify two similarities between the Christian belief and Islamic belief.

i) _____

ii) _____

b) In which two ways is Islamic different from Christianity?

i) _____

ii) _____

SPECIAL ITEMS

6. Write NEMA in full.

7. Which ministry in Uganda is in charge of vegetation conservation?

8. How do lions benefit from vegetation in areas where they stay?

9. Give any one example of a natural forest outside East Africa.

10. Name the plant cover that grows mostly in the East African coast.

11. State one reason why the above vegetation grows well in the coastal areas.

12. Mention any one example of tree species found in desert vegetation zones.

13. What are oasis?

1

14. State any one way oasis promote vegetation growth in an area.

15. Write down any one factor that makes areas in Karamoja to have scattered vegetation.

16. What does the term 'Game Park' mean?

17. State any one reason why school children are encouraged to conserve grass planted in the school compound.

18. Mention any one difference between natural and planted forests.

19. What general name is given to the group of people that extract timber from mature trees?

.....
20. Give any one way NEMA conserves the environment.

.....
21. Write REMA in full.

.....
22. How does massive cutting down of tree lead to environmental hazards?

.....
23. Why is Bwindi impenetrable forest National Game Park having many mountains gorillas?

.....
24. Write down the type of timber that is mainly harvested from Mediterranean vegetation zone.

.....
25. State one factor that make equatorial regions to have evergreen vegetation.

.....
26. What term is used to describe grasslands of South Africa?

.....
27. Name one economic activity carried out in temperate grasslands.

.....
28. State one factor that makes natural forests to have thick undergrowth.

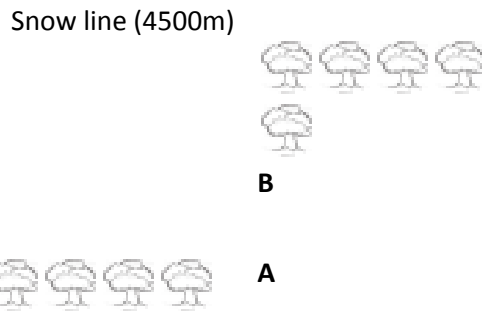
.....
29. Mention any one example of citrus fruit tree grown in Mediterranean areas.

.....
30. Give the meaning of the term 'global warming'.

.....
31. What is a sanctuary?

.....
32. Name the largest sanctuary found in East Africa.

Study the drawing below.



33. What major economic activity is carried out in the area marked A.

.....

34. Give a reason why area marked B is suitable for lumbering.

.....

35. Mention the weather instrument that determines the snow line as shown in the diagram above.

.....

36. State any one way the government can promote the tourism industry.

.....

37. How does tourists benefit from hotels and lodges located near Game parks?

.....

38. Write down any one negative effect of the tourism industry to a country.

.....

39. State any one way a craft maker in Jinja can benefit from the tourism industry.

.....

40. What major tourist attraction is common at Tsavo National Game Park?

.....

Section B

41. Study the table below and fill in the missing information.

Tree species	Product
Cypress

Ficus tree
Wattle tree
Mvule

42. Write down two differences between natural forests and planted forests in terms of;

(i) Wood.

.....

(ii) tree species;

.....

(iii) maturity

.....

(b) Name the largest natural forest along Jinja highway on your to the East of Uganda.

.....

43.a) Write down any two importance of forests to the economic development of Uganda.

(i)

(ii)

(b) State any two ways in which forests can be a danger to people in areas where they are located.

(i)

(ii)

44. Write down one way how each of the following factors influence the distribution of vegetation in an area.

(a) Nature of the soils.....

(b) Rainfall distribution.....

(c) Human activities.....

4

(d) Altitude.....

45.a) What is swamp drainage?

.....

(b) Give any three factors that contribute to swamp drainage in Uganda.

(i)

(ii)

(iii)

46.a) State the main reason why most parts of Africa are covered by savanna grasslands

.....

(b) Give any two ways wild animals benefit from savanna grasslands.

(i)

(ii)

(c) Mention the major economic activity carried out in savanna woodlands.

.....

47.a) Mention any two vegetation zones found in central Africa.

(i)

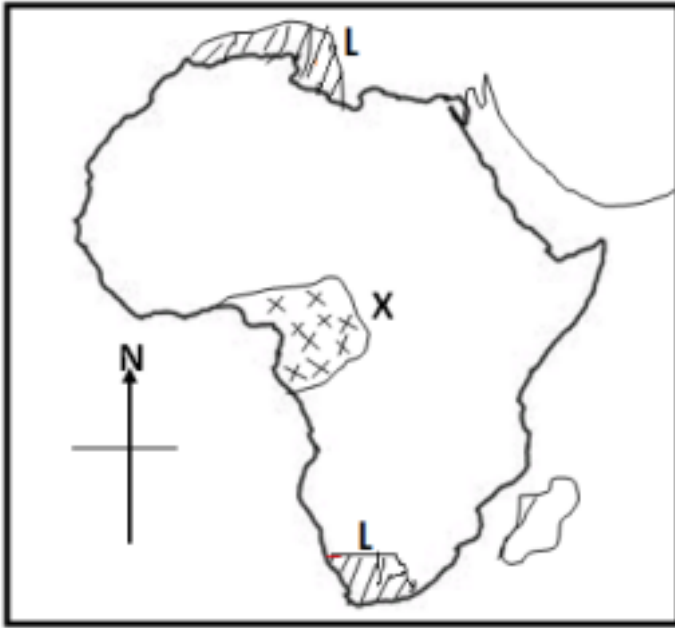
(ii)

(b) State any two factors that make the above area to experience the above vegetation zones.

(i)

(ii)

48. Study the map of Africa below and use it to answer questions that follow.



5

(a) Name the vegetation zone marked.

X

L.....

(b) Write down any one tree species found in the vegetation zone marked;

X.....

L.....

49.a) Mention the game parks in East Africa that are famous for;

(i) zebras.....

(ii) lions.....

(iii) Gorillas.....

(iv) ostriches.....

50.a) What major economic activities are carried out in the following area.

i) Great Karoos

ii) Maize triangle

(b) Write down any two factors that favours the above economic activities.

(i)

(ii)

51.a) Give the meaning of the term poaching.

.....
(b) Write down any two reasons why people carry out the above activity.

(i)

(ii)

(c) State the economic effect of the above activity to a country like Uganda.

.....
52.a) Mention any two human activities that positively affect vegetation distribution.

(i)

(ii)

(b) Write down any two ways the above activities influence vegetation distribution.

(i)

(ii)

53.a) How does vegetation influence animal distribution across Africa.

.....
(b) Give one reason why Miombo woodlands are sparsely populated.

.....
(c) Name the major economic activity carried out in Miombo woodlands.

.....
(d) State any one way of overcoming challenges faced in the Miombo woodlands.

.....
54.a) Briefly describe each of the following kinds of animals found in Game parks.

i) herbivores.....

ii) carnivores.....

iii) omnivores.....

(b) Give any one example of herbivores.

.....
55.a) Write any one method of ensuring vegetation growth in semi-arid areas.

.....
(b) State any two advantages of using the above method mentioned in (a) above.

(i)

(ii)

(c) Mention any one place in East Africa where the above method is used.

.....

End

SECTION A (40 Marks)

1. Name any one food crop that grows well in a swamp.

2. Mention the instrument that is used to measure the amount of rainfall at a weather station.

3. Name the ethnic group of people that occupy the north – eastern part of Uganda.

4. What is the compass direction of Uganda from Rwanda?

5. Apart from missionaries, which other group of foreigners helped to develop social services in Uganda?

6. Give any one reason why farmers are advised to plant crops at the beginning of a rainy season.

7. Mention any one disadvantage of building in wetlands.

8. Give one reason why there are many different types of natural vegetation in Africa.

9. State any one way in which labour force can be improved in Africa.

10. In which way is the formation of Mt. Rwenzori different from that of Mt. Elgon?

11. Give one reason why controlling population increase is difficult.

12. Mention any one way in which the government can help the people in rural areas to increase agricultural produce.

13. Name the lake that is the source of the Blue Nile.

14. Name the type of tax charged on imported goods in Uganda.

15. Name the winds that bring rain to East Africa.

16. Why is Patrice Lumumba remembered in the history of Democratic Republic of Congo?

17. Give one advantage of exporting processed goods other than raw materials.

18. Apart from being cloudy or windy, give any one other change of weather.

19. Give one problem the builders of the Uganda Railway faced in the Nandi area.

20. Why is air transport used by very few people in Africa?

21. In which agreement were the boundaries of Buganda drawn?

22. Why should a citizen obey the laws of a country?

23. State one reason why some people in Uganda do not get access to social services.

24. Name the element on the Uganda coat of Arms that represents Uganda's culture.

25. How did the trade between the coastal Arabs help in the expansion of Buganda Kingdom?

26. State one factor which has made irrigation in the Karamoja region almost impossible.

27. Why was the Nyanza province transferred from Uganda to Kenya in 1902?

28. State one problem facing effective communication in Uganda.

29. Why is Kapchorwa cooler than Gulu?

30. Where is snow found in East Africa?

31. Which water passage joins the Red sea to the Mediterranean sea?

32. State one reason why German colonial rule was resisted in Tanganyika.

33. Which bank is jointly owned by the member countries of the East African community?

34. State one cause of land fragmentation in Uganda.

35. Give any one way in which the people of South Africa fought against Apartheid.

For questions 36 – 40, answer Christianity or Islam "BUT NOT" both.

36. **Either:** What was Moses' work before he was called by God?

Or: What was Musa's work before he became a prophet?

37. **Either:** Who was the father of John the Baptist?

Or: Who was the father of Yahaya?

38. **Either:** Why did God create Eve?

Or: why did Allah create Hawa?

39. **Either:** Give any one way in which God communicates to Christians.

Or: Give any one way in which Allah communicates to Muslims.

40. **Either:** Why did Jesus Christ turn water into wine?

Or: Why did Prophet Muhammad split the moon?

SECTION B

41(a) Name the two explorers who made three journeys to Africa.

(i)

(ii)

(b) State any two problems that were faced by the early explorers in Africa.

(i)

(ii)

42(a) Name two African leaders who attended the Pan African Congress in 1958.

(i)

(ii)

(b) State two ways in which Marcus Garvey contributed to the development of Africa.

(i)

(ii)

43.46(a) State any one of the children's rights.

(b) Mention any one of the children's responsibilities.

(c) State any two reasons why children should know their rights and responsibilities.

(i)

(ii)

44. **Study the sketch map of Sudan below and answer the questions that follow.**



(a) Name the country marked with letter X.

(b) What is the major crop grown in the area marked with letter P?

(c) Give one reason why area marked **P** is good for the growing of crops.

(d) Mention any one problem faced by farmers in the area marked **P**.

45. (a) What was the Great Trek?

(b) Mention any two places that were occupied by the Dutch after the Great Trek.

(i)

(ii)

(c) State any one result of the Great Trek.

46.(a) Which organization was replaced by the African Union (AU)?

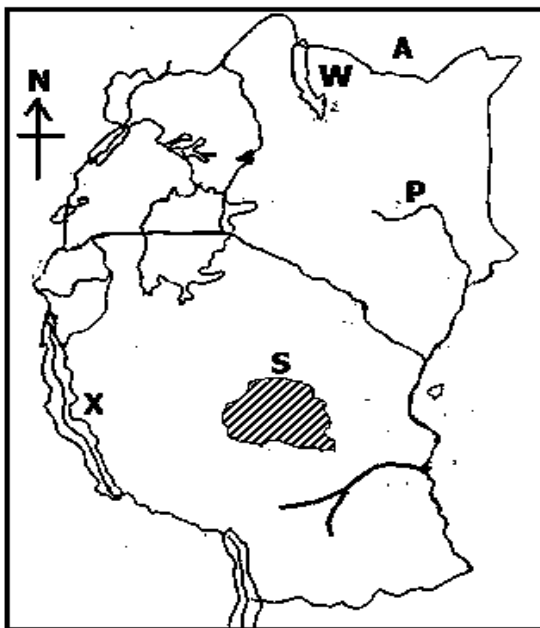
(b) Mention any two organs of the African Union (AU)

(i)

(ii)

(c) State any one way in which the African Union (AU) is helping member states to solve the problem of Civil wars.

47. **Study the map of East Africa below and answer the questions that follow.**



(a) Name the river marked with letter P.

(b) Give one cause of low population in the area marked S

(c) State any one economic activity that is carried out in the lake marked with letter X.

(d) Give one similarity in the formation of lake marked X and the lake marked W.

48.(a) Apart from growing crops, give one other activity carried out by man to support his family.

(b) State any two ways in which man has benefited from growing crops.

(i)

(ii)

(c) Mention any one problem faced by people who grow crops in Uganda.

49.(a) What title is given to the person who heads the Judiciary in Uganda?

(b) Mention any two groups of people who are members of the Judiciary.

(i)

- (ii) _____
(c) How does Parliament contribute to the work of the Judiciary?

50(a) Name any one place at school where waste materials can be disposed.

(b) State any two problems caused by poor waste management in schools.

(i) _____

(ii) _____

(c) Why is recycling important in waste management?

For questions 51 – 55, answer either Christianity or Islamic but Not both.

51. **Either:** (a) According to Christianity, who is the controller of all authority?

(b) State any two miracles Jesus Christ performed on earth.

(i) _____

(ii) _____

(c) What helped Jesus Christ to exercise His authority?

Or: (a) According to Islam, who is the controller of all authority?

(b) State any two miracles Prophet Muhammad (PBUH) performed.

(i) _____

(ii) _____

(c) What helped Prophet Muhammad (PBUH) to be accepted by people?

52. **Either:** (a) Apart from African Traditional Religion, Christianity and Islam, mention any one other religion practiced in Uganda

(b) Give any two ways in which believers of African Traditional Religion showed that there was life after death.

(i) _____

(ii) _____

(c) State any one reason why some Christians fear death.

Or: (a) Apart from African Traditional Religion, Christianity and Islam, mention any one other religion practiced in Uganda

(b) Give any two ways in which believers of African Traditional Religion showed that there was life after death.

(i) _____

(ii) _____

(c) State any one reason why some Muslims fear death.

53. **Either:** (a) Name any one of the apostles of Jesus Christ who was closest to Him.

(b) Mention any one reason why Jesus Christ had apostles.

(c) State any two ways in which a good Christian should behave.

(i)

(ii)

Or: (a) Name any one companion of Prophet Muhammad (PBUH) who was closest to him

(b) Mention any one reason why Prophet Muhammad (PBUH) had companions.

(c) State any two ways in which a good Muslim should behave.

(i)

(ii)

54. **Either:** (a) According to the Bible, who is regarded as the grandfather of the nations?

(b) Give any one name among the children of the grandfather mentioned above.

(c) Mention any two ways in which the grandfather of the nations showed his faith to God.

(i)

(ii)

Or: (a) Which Prophet is regarded as the grandfather of believers according to Islam?

(b) Give any one name among the children of the grandfather mentioned above.

(c) Mention any two ways in which the grandfather of the nations showed his faith to Allah.

(i)

(ii)

55. **Either:** (a) What is Marriage in Christianity?

(b) Give any two reasons why church marriage is important.

(i)

(ii)

(c) Give one reason that may allow someone who had married in church before to marry again.

Or: (a) What is Nikah in Islam?

(b) Give any two reasons why Nikah is Important.

(i)

(ii)

(c) Mention any one gift Allah gives to married people.

END

SECTION A: 40 MARKS

Questions 1 to 40 carry **one mark** each

1. Name the lake into which River Katonga pours its water.

.....

2. Why is it shorter to use an aeroplane from Entebbe to Soroti than using a bus?

.....

.....

3. Give any **one** way crater lakes are important to people.

.....

4. Mention the element of weather, which enabled Arabs to come from Asia to Africa?

.....

5. Give any **one** way rift valley lakes are similar.

.....

6. Why should a school have a motto?

.....

7. Mention any **one** social activity practiced in our community.

.....

8. How were oases important to traders who travelled through the desert during the Trans-Saharan trade?

.....

9. Why are most game parks found in the tropical regions of East Africa?

.....

10. Give any **one** factor that made Mau-Mau rebellion last for long in Kenya.

.....

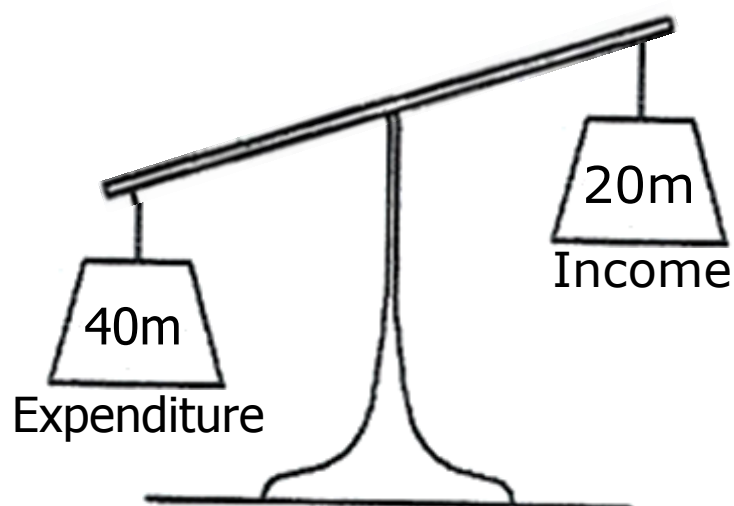


11. How is the internet better than Newspapers as means of communication?

.....

.....

Study the diagram below and answer questions **12** and **13**.



12. Name the type of budget shown above.

.....

13. How can the government overcome the above type of budget?

.....

14. State any **one** role played by midwives in our community.

.....

15. State any **one** way the youth can be supported in order to fight poverty and unemployment.

.....

16. Give any **one** way the Arabs contributed to the development of trade in East Africa.

.....

17. Name any **one** factor the Bantu were looking for during their migration.

.....

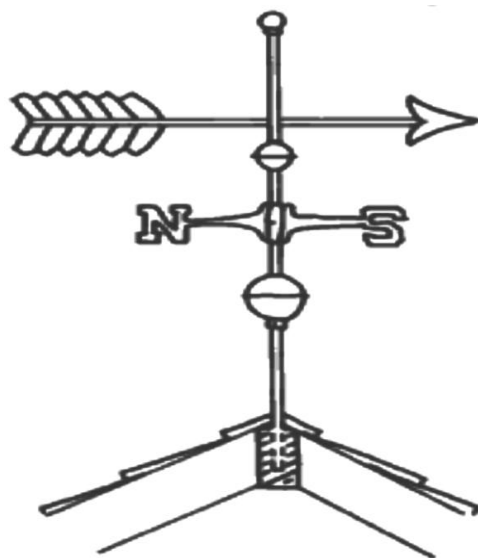
18. How do people in cold areas keep themselves warm?

.....


19. Give any **one** way the Bachwezi contributed to the development of farming in Uganda.

.....

20. The arrow of the wind vane below was seen pointing to the South on a windy day. To which direction was the wind blowing?



.....



21. How do warm ocean currents influence the climate of an area?

.....

22. Why did movement of goods and people within East Africa reduce between 1977 and 2001?

.....

23. How did African kings and chiefs benefit from the colonialists?

.....

24. Mention any **one** group of leaders in our district got through ordination.

.....

25. What title is given to a person who represents a Commonwealth member country to another?
.....
26. Mention any **one** problem faced by nomadic tribes in East Africa.
.....
27. Which body is responsible for assessing taxes collected in Uganda?
.....
28. Why did the early traders move in caravans during long distance trade?
.....
29. Identify **one** human activity that is greatly disturbed by the water hyacinth.
.....
30. How did the 1900 Buganda Agreement benefit the British?
.....
- A small empty square box, likely for a mark or grade.
31. What made Ethiopia not to be colonized by any European country?
.....
32. Calculate the population density of Kyawagonya market which has 1000 people and a total Area of 10km².
.....
33. Give any **one** importance of multi –purpose river projects to countries where they are found.
.....

34. In which way does a distributary affect the volume of water in the main river?

.....

35. State any **one** way a school uses land as a resource to benefit itself.

.....

For each of the questions **36** to **40**, answer **Either** the Christian **OR** Islamic questions but **not** both. No **marks** will be awarded to a candidate who attempts both alternatives in **a particular number**.

36. **EITHER:**

Mention any **one** way Job suffered when his faith was being tested according to the Bible.

.....

OR:

Mention any **one** way Prophet Ayub suffered according to Islamic teachings.

.....

37. **EITHER:**

Who became the leader of the apostles after the ascension of Jesus?

.....

OR:

Who became the immediate leader of the Muslims after the death of Prophet Muhammad?

.....

38. **EITHER:**

Give any **one** way Christians show humility to God.

.....

OR:

Give any **one** way Muslims show humility to Allah.

.....

39. **EITHER:**

Give any **one** way of winning happiness from God.

.....

OR:

Give any **one** way of winning happiness from Allah.

.....

40. **EITHER:**

State any **one** way Christian teachings promote democracy.

.....

OR:

State any **one** way Muslim teachings promote democracy.

.....



SECTION B: 60 MARKS

Questions **41** to **55** carry four marks each.

41. a) Mention the natural vegetation which covers most parts of East Africa.

.....

b) State any **one** factor that influence vegetation distribution in Uganda.

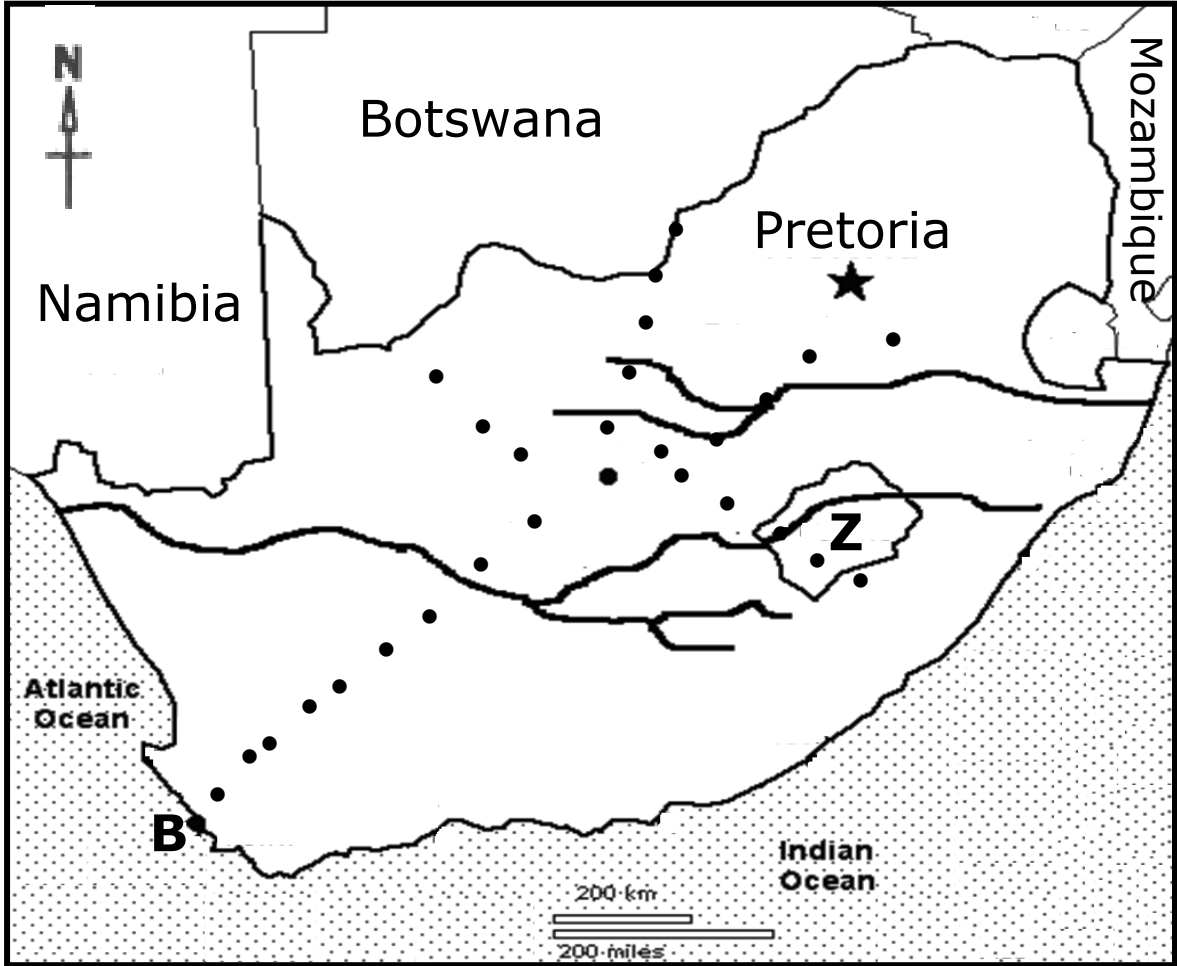
.....

c) Give any **two** ways vegetation can be protected in East Africa.

i)

ii)

42. Study the sketch map of South Africa below showing the journey made by the Boers and answer the questions that follow.



- a) Name Cape marked **B** on the map.
.....
- b) Which journey was made by the Boers to the interior of South Africa?
.....
- c) State any **one** positive result of the journey named in (b) above.
.....
- d) Why is country **Z** called an enclave state?
.....

- 43.
- a) Name the largest ethnic group in East Africa.
.....
 - b) How were the Tembuzi related to Bunyoro-Kitara empire?
.....
 - c) State any **one** factor that led to the collapse of the Chwezi state of Bunyoro Kitara.
.....
 - d) How did the Bantu influence some nomadic tribes of East Africa?
.....



44. a) Give any **two** reasons why some resources in Africa are not fully exploited.
 i)
 ii)
 b) How are natural resources economically important to the governments of East Africa?

 c) Give any **one** example of a non-renewable resource.

45. a) Which physical feature covers most parts of Uganda?

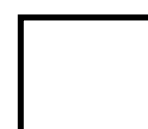
 b) Why is Mt. Rwenzori snow-capped throughout the year?

 c) How is the formation of L. Kyoga different from that of L. Albert?

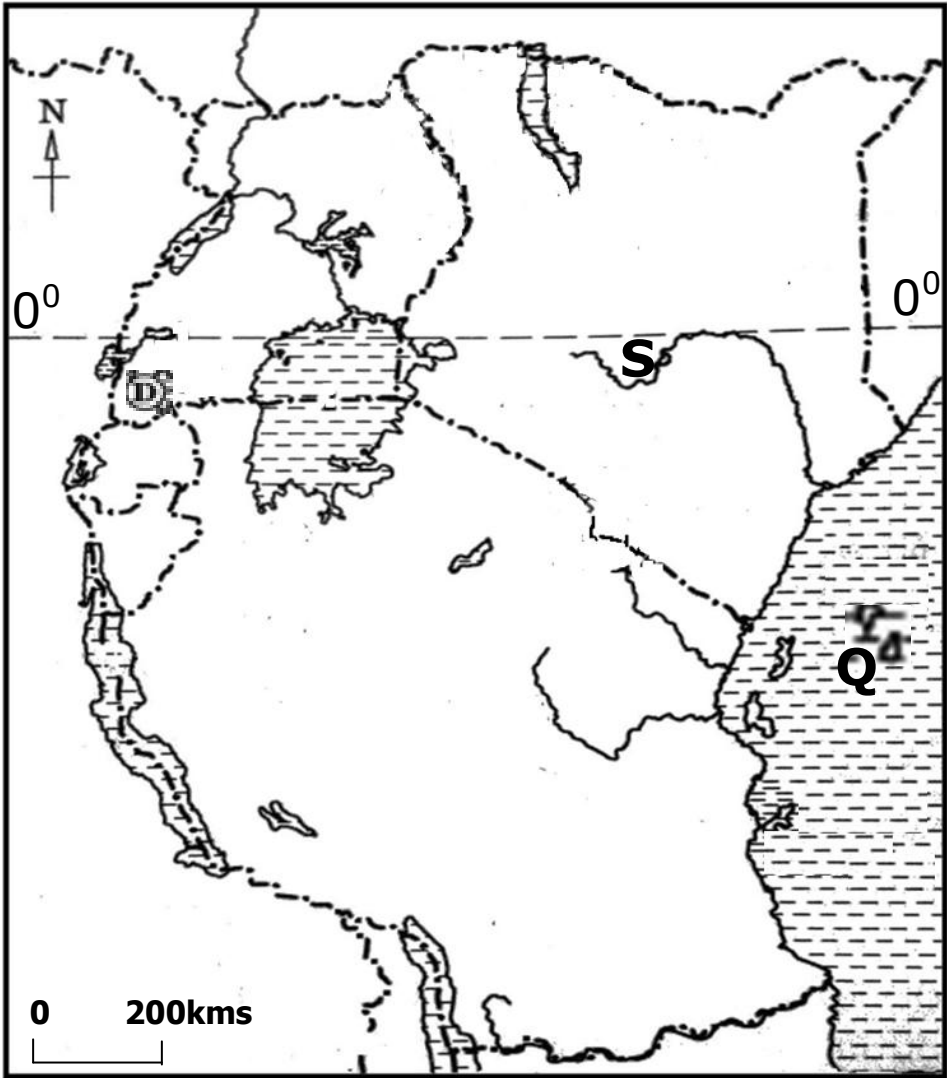
 d) How do some physical features support the mining industry in East Africa?

46. a) Give any **two** roles of the Electoral Commission in Uganda.
 i)
 ii)
 b) How can the government reduce the number of invalid votes during general elections?

 c) What title is given to the person who swears in the president elect into office?



47. Study the sketch map of East Africa below and use it to answer the questions that follow.



- a) State any **one** factor that favours the existence of mountain gorillas in game park marked **D**.
.....
- b) Mention the date and month when the sun over heads line of latitude marked 0°.
.....
- c) Name river marked **S**.
.....
- d) What historical link do the Baganda and Banyoro have on Islands marked **Q**?
.....

- 48.
- a) State any **one** reason for the formation of the United Nations Organisation (UNO) after World War II.
.....
 - b) Give any **one** way UNO has managed to fulfill any of the objectives for its formation today.
.....

- c) Name the UN agency responsible for,
 i) the welfare of refugees in the world.

.....

- ii) controlling the outbreak of epidemics like Covid 19.

.....

49. List **A** below shows African nationalists and their contribution for their countries in List **B** but in wrong order.

LIST A

LIST B

Nnamdi Azikiwe

led Malawi to independence.

Dr. Apollo Milton Obote

defended the independence of Ethiopia

Emperor Haile Selassie

led Nigeria to independence.

Kamuzu Banda

formed UPC which led Uganda to independence.

From the lists above, match the nationalist to his right contribution

- a) Nnamdi Azikiwe

.....

- b) Dr. Apollo Milton Obote

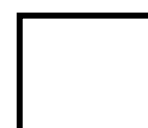
.....

- c) Emperor Haile Selassie

.....

- d) Kamuzu Banda

.....



50. a) What is meant by the term climate?

.....

.....

- b) Mention any **one** human activity that affects climate negatively.

.....

- c) Why do places around the equator receive a lot of rainfall?

- d) How do Harmattan winds influence the climate of Northern parts of West Africa?

For each of the questions **51** to **55**, answer **EITHER** the Christian **OR** Islamic questions but **not** both. **No mark** will be awarded to a candidate who attempts both alternatives in **a particular number**.

51. EITHER:

- a) Name the parable Jesus Christ used that encourages children to ask for forgiveness.

- b) Give any **two** ways Christians benefit from the parables of Jesus Christ today.
 i)
 ii)
- c) Name the town where Jesus grew up from.

OR:

- a) What is Hadith?

- b) Give any **two** ways Muslims benefit from the hadiths of Prophet Muhammad (P.B.U.H) today.
 i)
 ii)
- c) Name the town where Prophet Muhammad(P.B.U.H) grew up from.

52. **EITHER:**

“If you are really God’s son, order these stones to turn into bread”
(Mathew: 4:3)

- a) Who said the above words?
.....
- b) To whom were the above words said?
.....
- c) Where were the above words said from?
.....
- d) Write any **one** lesson you learn from the person named in (b) above?
.....

OR:

“Fasting has been prescribed to you as it was for those before you”
(Quran 2:183)

- a) Which month was prescribed for Muslims to fast?
.....
- b) Give any **two** groups of Muslims that should not fast.
 - i)
 - ii)
- c) Give any **one** way in which fasting is important to Muslims.
.....



53. **EITHER:**

- a) Name any two things God created to provide light.
 - i)
 - ii)
- b) Give any **one** way Christians care for God’s creations today.
.....
- c) How do Christians go against God’s expected standards?
.....

OR:

- a) Name any two things Allah created to provide light.
 - i)
 - ii)
- b) Give any **one** way Muslims care for Allah's creations today.
.....
- c) How do Muslims go against Allah's expected standards today?
.....

54. **EITHER:**

- a) Name the helper God gave Moses when going to Egypt.
.....
- b) What role did the helper in (a) above do before the Pharaoh?
.....
- c) Give any **two** evidences to show that God protected the Israelites in Egypt.
 - i)
 - ii)

OR:


- a) Name the helper Allah gave to Prophet Musa when going to Misiri.
.....
- b) What role did the helper in (a) above do before the Pharaoh?
.....
- c) Give any **two** evidences to show that Allah protected the Ban-Israel in Misiri.
 - i)
 - ii)


55. **EITHER:**

- a) Give any **one** way diseases cause suffering among Christians.
.....
- b) Mention any **one** way a Christian child shows care to a relative suffering from a disease.
.....
- c) How did Jesus show that God has power over diseases?
.....
- d) State any **one** way Christians can reduce God's anger for the sins some people commit.
.....

OR:

- a) Give any **one** way diseases cause suffering among Muslims.
.....
- b) Mention any **one** way a Muslim child shows care to a relative suffering from a disease.
.....
- c) Mention any **one** Surat in the Qura'n Prophet Muhammad advised Muslims to use if they want to overcome diseases.
.....
- d) State any **one** way Muslims can reduce Allah's anger for the sins some people commit.
.....



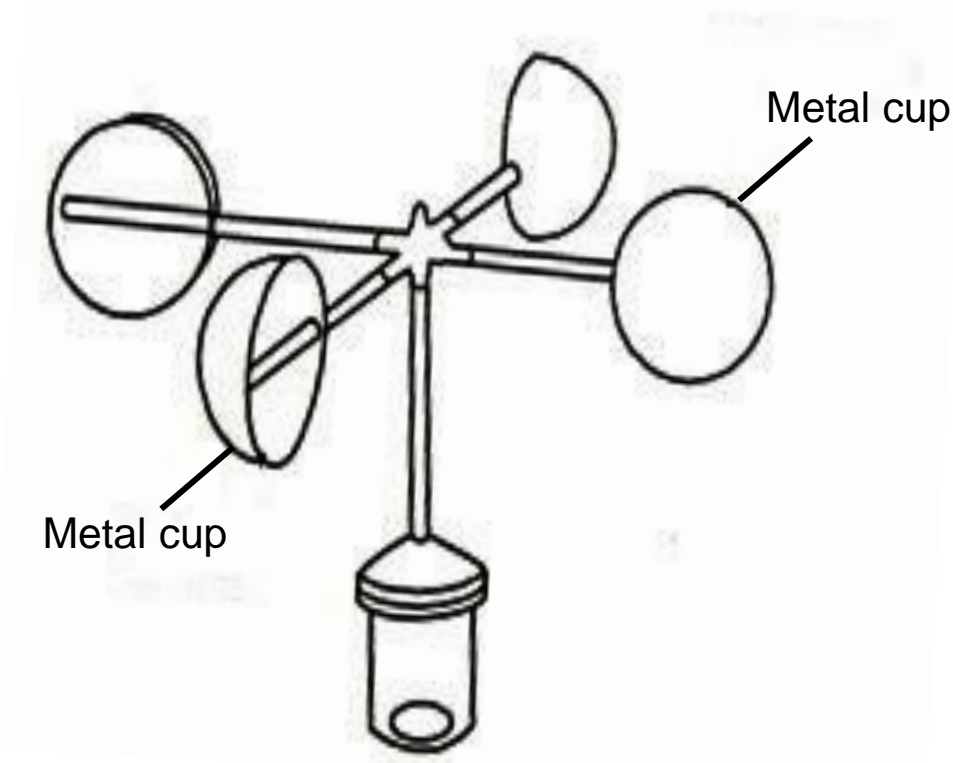


SECTION A: 40 MARKS

Questions 1 to 40 carry **one mark** each

- 1. Mention **one** physical feature which was formed as a result of faulting.
.....
- 2. How does bad weather affect children going to school?
.....
.....
- 3. Give **one** way democracy is practiced in schools today.
.....
- 4. State **one** reason why people in central Tanzania find it difficult to carry out animal rearing.
.....

The diagram below shows weather instrument. Use it to answer question 5.

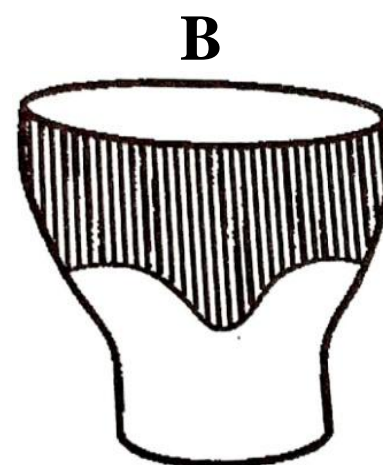


- 5. State the main use of the above weather instrument at a weather station.
.....
- 6. How did the Baganda benefit from the Namirembe agreement?
.....
.....
- 7. State **one** way agro based industries benefit from modern agriculture.
.....


8. Why were the Portuguese so interested in discovering the sea route to India?
.....
9. State **one** way in which the violation of human rights can be reduced in most African countries.
.....
10. How does a school benefit the community?
.....
.....
11. What name is given to latitude marked $66\frac{1}{2}^{\circ}$ S on the globe.
.....



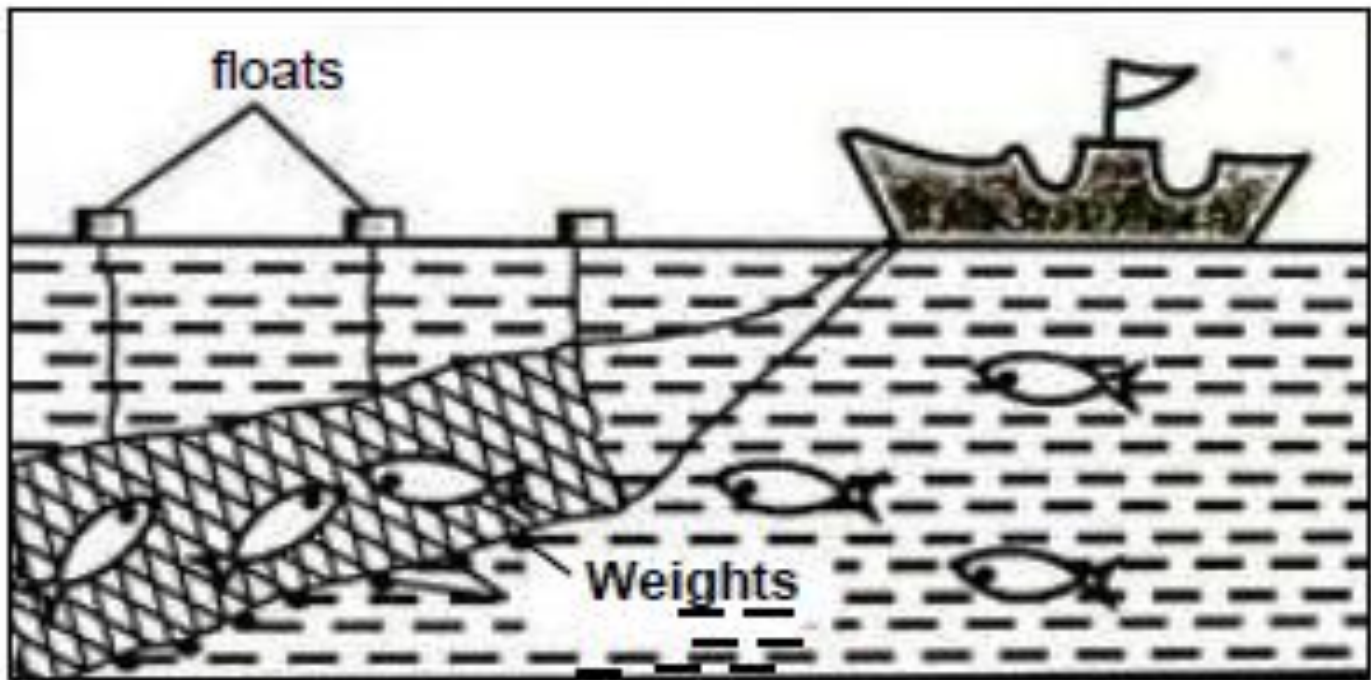
Below are diagrams of two different means of communication. Use them to answer question **12**.



12. Give any **one** advantage communication mean **A** has over communication mean **B**.
.....
.....
13. Which discovery marked the end of the Stone Age period?
.....

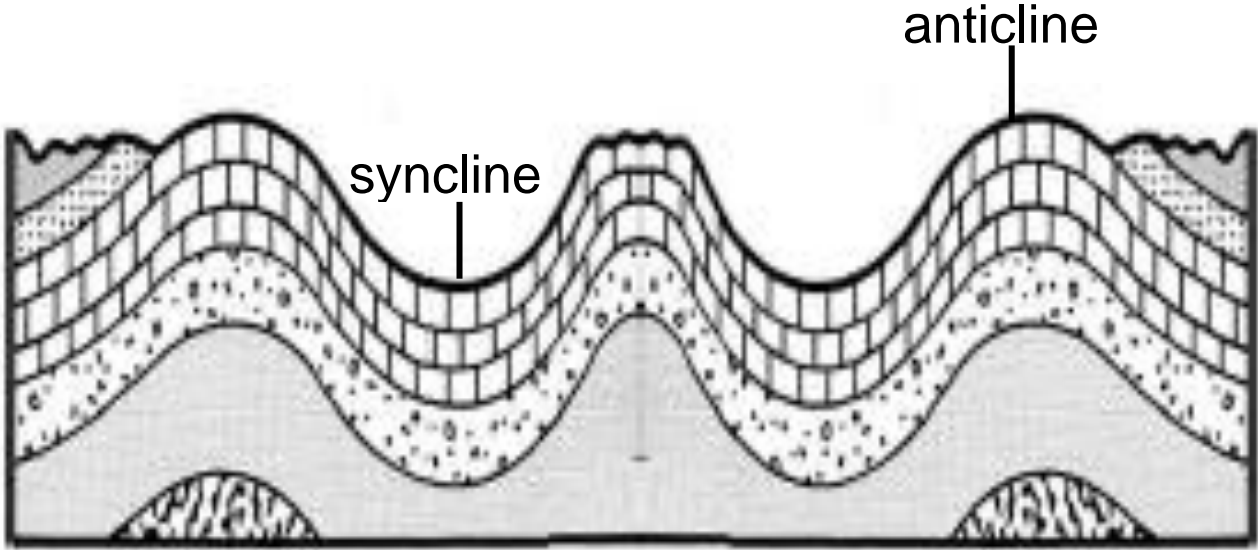
14. How do local communities benefit from the money earned from tourism?
.....
.....
15. State **one** way of reducing accidents on Lake Victoria.
.....
16. State any **one** reason why Europeans referred Africa to as a dark continent?
.....
.....
17. In which one way did the Luo invasion affect Bunyoro-Kitara Empire?
.....
.....
18. Give any **one** reason why Kalangala has a low population.
.....
19. Which similar attitude did Semei Kakungulu and Nuwa Mbaguta have towards colonial rule?
.....
20. What is the main cash crop grown in Kilombero valley irrigation scheme in Tanzania?
.....
- 
21. Give **one** reason why budgeting is important to a country.
.....

The diagram below shows a method of fishing used on water bodies in East Africa. Use it to answer the questions **22** and **23**.



22. Name the method of fishing shown in the diagram.
.....
23. Give **one** danger of using undersize nets.
.....
24. How does a key help a person who is reading the map of Uganda?
.....
25. Give **one** challenge of having very many pupils in a school.
.....
26. State **one** factor that leads to the existence of forests on some mountain slopes in East Africa.
.....
27. How are traditional leaders important in Uganda?
.....
.....
28. In which **one** way has HIV/AIDS affected some Ugandans economically?
.....

The diagram below shows formation of a type of mountain. Use it to answer question **29**.



29. Name **one** mountain in Africa which was formed by the process shown in the above diagram.
-
30. Why do most people prefer building homes near roads?
-
-
-
31. Give **one** way the Christian missionaries improved on the standards of living among Ugandans.
-
32. State any **one** reason why the people of Kenya formed political parties like KADU?
-
33. Give **one** reason why there are few banks in rural areas.
-
34. How did slave trade affect the production of food in East Africa?
-
-
35. Why did the Germans in Tanganyika use direct rule yet it was expensive?
-

For each of the questions **36** to **40**, answer **Either** the Christian **OR** Islamic questions but **not** both. No **marks** will be awarded to a candidate who attempts both alternatives in **a particular number**.

36. **EITHER:**

Why is the suffering and death of man blamed on Adam and Eve?

.....

OR:

Why is the fall of man blamed on Adam and Hawa in Islam?

.....

37. **EITHER:**

State **one** quality we can learn from Jesus’ work on earth.

.....

OR:

State **one** quality we can learn from Mohammad’s work on earth.

.....

38. **EITHER:**

How can a Christian child work for the good of the family he/she belongs?

.....

OR:

How can a young Muslim show the spirit of work in the family?

.....

39. **EITHER:**

Give **one** importance of reconciliation among people after a misunderstanding.

.....

OR:

Give **one** importance of reconciliation among people after a misunderstanding.

.....

40. **EITHER:**

State any **one** way a Primary Seven child can make God happy.

.....

OR:

State any **one** way a Primary Seven child can make Allah happy.

.....




SECTION B: 60 MARKS

Questions **41** to **55** carry four marks each.

41. a) State **one** reason why security is an important service in an area?
.....
- b) Give any **two** reasons why most Ugandans have lost trust in security organs.
(i)
(ii)
- c) State any **one** way security organs can restore the lost trust among Ugandans
.....
42. a) State any **one** cultural practices that can lead to a high population growth.
.....
- b) Give **one** way a fast growing population can be a danger to the environment.
.....
- c) Give **two** advantages of a fast growing population to industrial development?
(i)
(ii)

43. The diagram below shows a process of rainfall formation received in some areas of Uganda. Use it to answer the questions that follow.



- a) Name the type of rainfall shown in the diagram.
.....
- b) Give any **one** district in Uganda that receives the type of rainfall shown above.
.....
- c) What do the arrows pointing to the clouds represent in the above process?
.....
- d) Give **one** reason why crop growing would be favourable in the district given in (b) above.
.....



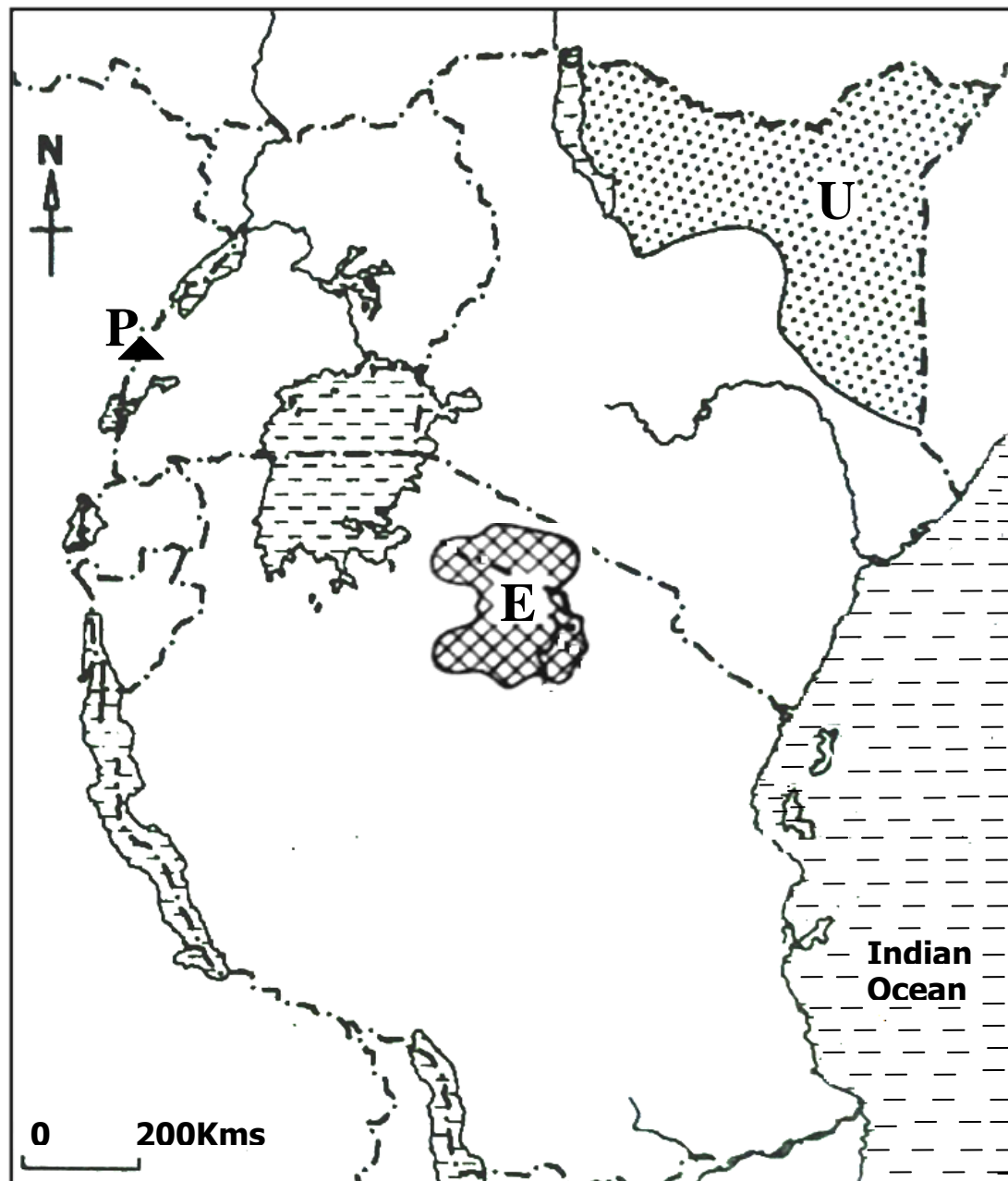
44. a) Which water body separates Africa from Asia?
.....
- b) Why was the suez canal in Egypt constructed?
.....
.....

c) Mention **two** Island countries of Africa found in Indian Ocean.

(i)

(ii)

45. Study the sketch map of East Africa below carefully and use it to answer the questions that follow.



a) State the major economic activity carried out in shaded area **U**.

.....

b) Name the National Game Park marked **E**.

.....

c) Name the main cash crop grown by the people who settled on the slopes of mountain **P**.

.....

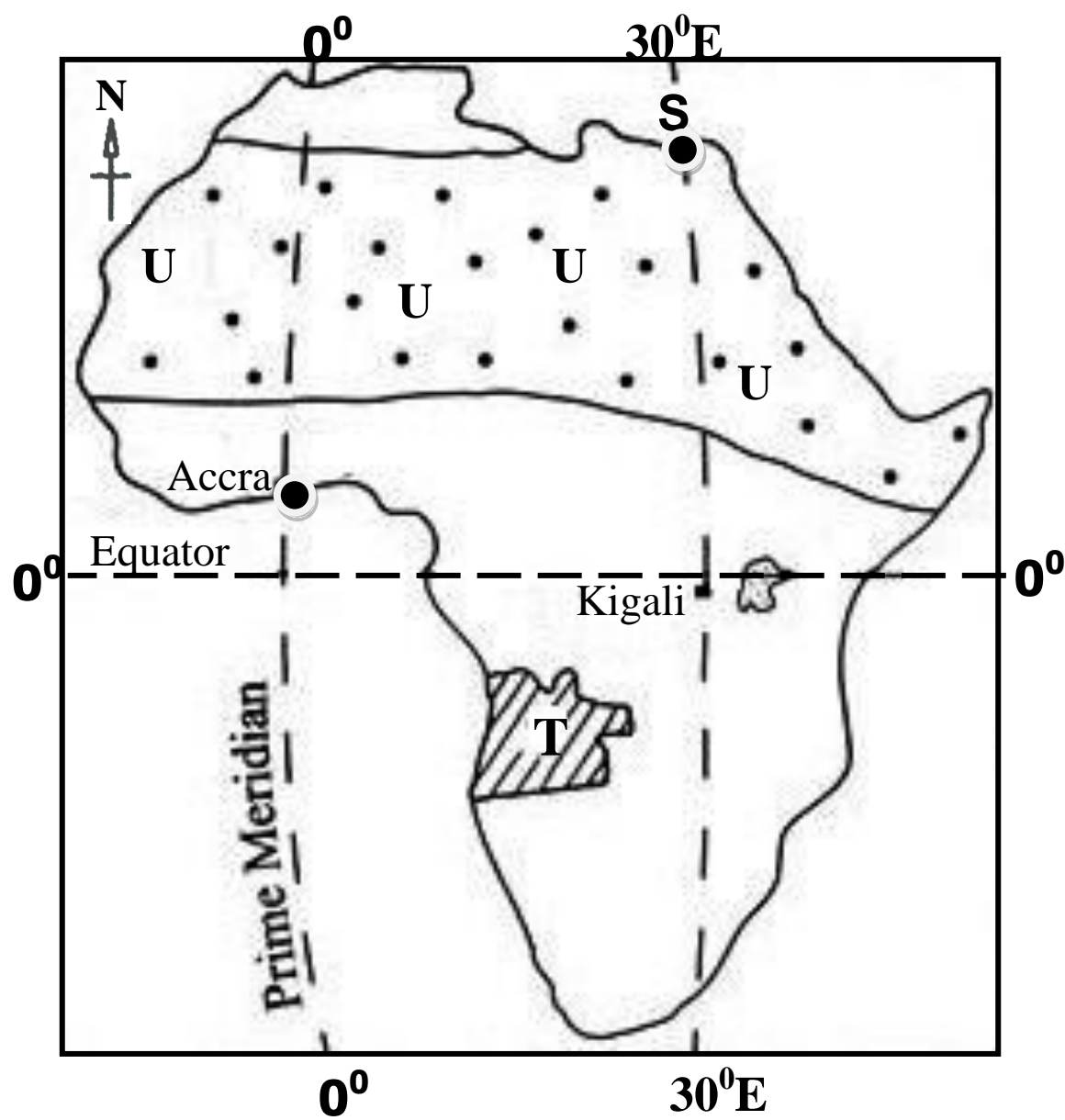
d) On the map above, use letter **S** to show the river on which the Seven folks dam river project was established.

46. a) Give the meaning of the term “Immigration”
.....
.....
- b) State **two** causes of Bantu migration to East Africa.
(i)
(ii)
- d) How was the coming of the Bantu to East Africa a disadvantage to original inhabitants?
.....
-

47. a) Give **two** reasons why the mining industry of East Africa is not fully developed.
(i)
(ii)
- b) Which minerals are mined in the areas below?
(i) Hima
(ii) Hoima

48. a) What title is given to the highest elected leader in the district?
.....
- b) State **two** duties of the local Council One in your area.
(i)
(ii)
- c) Mention **one** way people acquire leadership in a country like Uganda?
.....

49. Study the sketch map of Africa below and then answer the questions that follow.



- a) Name port marked **S**.
.....
- b) If the time at Accra is 9:00a.m. What is the time at Kigali?
.....
- c) Name the European country that colonized country **T**.
.....
- d) Give **one** reason why dotted area marked **U** is sparsely populated.
.....



50. a) Where are the headquarters of East African community found?
.....
- b) Outline **two** aims of the revived East African community.
 (i)
 (ii)
- b) State **one** problem that affects co-operation among African countries.
.....

For each of the questions **51** to **55**, answer **EITHER** Christian **OR** Islamic questions but **not** both. **No mark** will be awarded to a candidate who attempts both alternatives in **a particular number**.


51. **EITHER:**
- a) What was Jesus’ greatest action of love to people?
.....
- b) Give **one** lesson we learn from Jesus’ crucifixion.
.....
- c) Mention any **two** ways a Christian can express his love in God.
 (i)
 (ii)
- OR:**
- a) State **one** way prophet Mohammed and his followers were mistreated by the Meccans because of their great love for Allah.
.....
- b) Give **one** lessons we learn from prophet Mohammad’s suffering in Mecca because of Allah.
.....
- c) Mention any **two** ways a Muslim can express his love in Allah the way prophet Mohammad did..
 (i)
 (ii)

52. **EITHER:**

- a) Mention the sacrament that initiates a Christian into God’s family.
.....
- b) What do the following symbols represent when performing the above mentioned sacrament?
 - (i) the candle
.....
 - (ii) the white cloth
.....
- c) According to Christian customs, who is allowed to perform the sacrament mentioned in (a) above?
.....

OR:

- a) Mention the pillar of Islam that initiates one into Islam.
.....
- b) State the **two** parts of the pillar you have mentioned in (a) above.
 - (i)
 - (ii)
- c) State any **one** act of disobedience that may spoil one’s above mentioned pillar.
.....



53. **EITHER:**

- a) Give any **two** things a Christian should do in order to come closer to God.
 - (i)
 - (ii)
- b) State **one** way a Christian can serve his fellow Christians.
.....

c) What important lesson do Christians learn from the righteousness of Abraham?


.....

OR:

- a) Give any **two** things a Muslim should do in order to come closer to Allah.
- (i)
- (ii)
- b) State **one** way a Muslim can help a needy Muslim.
-
- c) What important lesson do Muslims learn from the righteousness of Prophet Ibrahim?
-

54. **EITHER:**

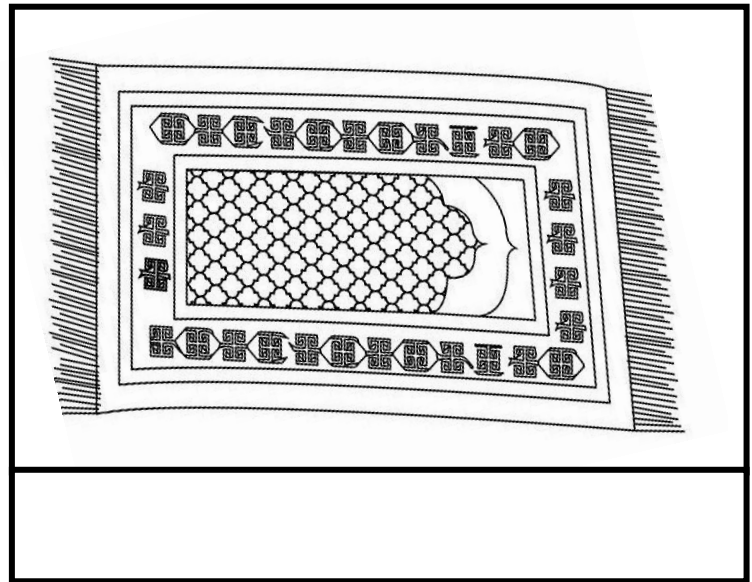

a) Name the following symbols of a Christian family.



- b) State **one** importance of a rosary as a symbol of a Christian family.
-
- c) As a Christian child, how can you promote the Christian values?
-

OR:

- a) Name the following symbols of a Islamic faith.



- b) State the importance of circumcision in Islamic faith.

.....

- c) As a Muslim child, how can you promote Islamic values?

.....

55. **FOR BOTH:**

- a) What term is used to refer to any productive or useful activity that requires the use of energy?

.....

- b) Give **two** reasons why believers should put their energy to use.

(i)

(ii)

- c) Give **one** reason why some people are not happy at their places of employment.

.....



SECTION A

1. Why do people in most parts of Uganda wear light clothing?

.....

2. Why is cement factory situated at Hima?

.....

3. Name one organisation under which the independent East African countries operated before 1977.

.....

4. Which political party won the first general election in Uganda?

.....

5. Why is conservation of trees important?

.....

6. Of what use are national parks to Uganda?

.....

7. What is the main economic activity of the Masai?

.....

8. Apart from missionaries, name one other group of Europeans who came to Buganda before 1900.

.....

9. Name one country to which Uganda exports fish.

.....

10. Give one way in which UNHCR is different from red cross.

.....

11. In what way was River Nile responsible for the coming of the first Europeans to Uganda?

.....

12. Which lake in East Africa lies within the Eastern Rift valley?

.....

13. Why was a fort built in the area where Fort portal is located today?

.....

14. In which one way can one become a citizen of Uganda?

.....

15. Give one important thing Ronald Ngala did.

.....

16. How does draining of swamps affect the climate?

.....

17. Why do people stand up right whenever the National Anthem is being sung?

.....

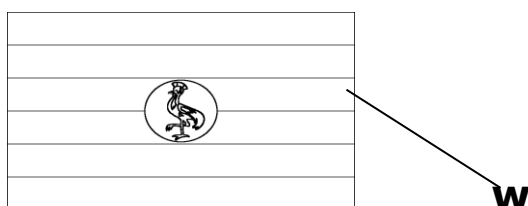
18. State one danger of over cultivation.

.....

19. Why did the black people in South Africa struggle to get rid of apartheid policy?

.....

The diagram below shows the National flag of Uganda. Use it to answer the questions that follow.



20. What does the colour marked W represent on the flag?

.....

22. Why was the crested crane chosen as the national emblem of Uganda?

.....

23. What is the function of the Uganda Revenue Authority?

24. Why do you think the pastoral people in East Africa did not form kingdoms?

.....

25. Why is snow found on top of Mt. Rwenzori although it is near the equator?

.....

26. Why is the rain gauge usually placed in a flat open area?

.....

27. State one similarity between the function of legislative council and the parliament in Uganda.

.....

28. Give one reason why Islam took long to spread in East Africa.

.....

29. What advantage does Kenya have over Uganda in transportation of goods?

.....

30. Give one way by which the growth of the population of a country may be controlled.

.....

31. Give one reason why Uganda imports purified oil products instead of crude oil?

.....

32. If the wind is blowing to the West, which direction will the wind vane point to?

.....

33. Give the meaning of **national constitution**

.....

34. Which direction is Uganda from Kenya?

.....

35. Name one country in Africa which tried to colonise Uganda.

.....

36.State one way in which the government can encourage tourists to come to Uganda.

.....

In questions 37 to 40 , answer EITHER the Christian OR the Islamic question but not both.

37.EITHER:Give one reason why Jesus Christ promised to send a helper to the apostles.

.....

OR.Give a reason why female muslims do not sit in the same place with males in a mosque.

.....

38.EITHER:What is the importance of the cross as a symbol of Christianity?

.....

OR:What is the importance of circumcision in Islam?

.....

39.EITHER:Why is Angel Gabriel important to christianity?

.....

OR:Who is considered the first prophet in Islam?

.....

40.EITHER:Who baptised Jesus?

.....

OR:How did Angel Ibis disobey Allah.

.....

SECTION B

41a)State any two problems which the schools are facing as a result of UPE.

.....

.....

b)Give any two advantages of Universal Primary Education.

.....

.....

42a)Mention any two conditions that can make trade between the people of Mbarara and Gulu possible.

.....

.....

b)Name any two commodities that people of Mbarara can sell to people in Gulu.

.....

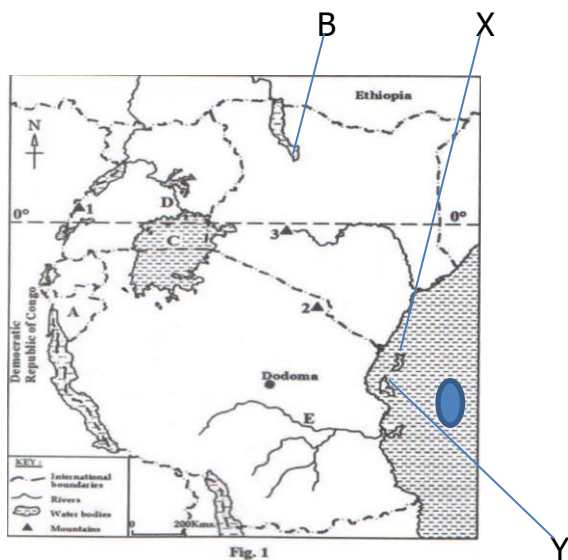
43a)Name the lake where Kalangala is found.

.....

b)State any three reasons why water transport on some parts of river Nile is not possible.

.....

44.Use the map of East Africa given below to answer the questions that follow.



a)Name part marked C

.....

b)What compass direction is lake B from lake C

.....

c)Give any one reason why Islands X and Y are densely populated.

.....

d)Give any one economic activity carried out on lake C.

.....

45a)Give any two serious problems facing fishing industry in Uganda

.....

b)Mention two possible solutions for the above serious problems you have given.

.....

46.Complete the table below by filling the raw material used to produce the product given.

Raw material	Product
Tobacco
Limestone
.....	Posho
.....	charcoal

47a)Name one district in North East of Uganda which receives little rain in a year.

.....

b)What do you think is the main occupation of the people who live in this district?

.....

c)Which two problems are the people above likely to find in their occupation?

.....

48a)Which country in East Africa was mostly affected by the first world war.

.....

b)Give any two reasons why African opposition to colonial rule was easily defeated

.....

.....

c)How did Jomo Kenyatta oppose colonial rule in Kenya?

.....

49a)Give any two reasons why there is land shortage in Kabale district.

.....

.....

b)Give any two ways in which farmers in highland areas protect their land from soil erosion.

.....

.....

50a)State any two most important minerals mined in Katanga(Shaba) region in DRC.

.....

.....

b)Apart from minerals,give one product obtained from the Equatorial rain forests in Democratic Republic of Congo(DRC)

.....

c)Give one reason why the construction of roads in DRC is very difficult.

.....

51a)Which dam was constructed on River Zambezi in Zambia.

.....

b)Name one mineral mined in Zambia.

.....

c)How has the construction of the dam in 51(a) above helped mining industry in Zambia.

.....

d)Which problem does Zambia face in transporting her goods from the coast?

.....

52a)State any one type of a family.

.....

b)Give any three benefits one gets by being a member of a family.

.....

.....

.....

For questions 53 and 54 answer EITHER the Christian OR the Islam questions but not both.No mark will be awarded to a child who attempts all alternatives.

53.EITHER:How does one become a member of God's family?

.....

b)Why do Christians receive Holy communion?

.....

c)Give any two symbols of Christian family.

i).....ii).....

OR.Give any two reasons why Zakat is paid.

.....

.....

b)Give any two groups of people that should receive Zakat.

i).....ii).....

54.EITHER:Give any two ways in which Jesus helped the needy.

.....

.....

b)Give any two reasons why Jesus did what you have mentioned in (a) above.

.....

.....

OR.According to Quran which is the greatest pillar of Islam?

.....

b)What do moslems learn from the acts of Ibrahim?

.....

c)Why is Surat al Fatiha(1) very important in Islamic worship?

.....

d)Give one condition when a moslem is excused from fasting.

.....

FOR BOTH.

55.Give any two similarities between a Bible and a Quran.

.....

.....

b)Give any two ways in which both the Christian and Islamic religions have led to the development of Uganda.

.....

.....

.....

END AND GOOD LUCK.

8.What was the result of the Lamogi rebellion?

9.In what way did William Mackinnon help in the development of East Africa?

10.Give the meaning of the word **national budget**.

11.How did Kabaka Yekka help Obote to become the first prime minister of Uganda?

12.State one reason why it is not profitable to build a fish processing factory in Tororo?

13.What compass direction is Gulu from Kampala?

14.Why is it important for a farmer to know the climatic conditions of a place?

15.Give one advantage of having a small family size

16.Why is the area around lake victoria densely populated?

17.State one factor which has contributed to low population growth in Karamoja

18.Give one way in which UNICEF is helping to improve health in Uganda

19. Why is Uganda's climate different from that of Ghana yet both are in equatorial region?

20. In which one way can one become a member of Parliament in Uganda?

21. When does a bill become a law in Uganda?

22. Name one town in East Africa where oil is refined

23. How is the map symbol below important to a map reader?



24. How did the rift valley affect the construction of the Uganda railway?

25. How does smuggling of goods affect the revenue of the country?

27. What does a coat of Arms of a nation represent?

28. How is soil erosion controlled in highland areas?

29. How can the government of Uganda assist primary schools to improve the quality of teaching?

30. Give one reason why Ethiopia was not colonised at all

32. Why were political parties formed in Uganda before 1960?

33. Why did the size of Bunyoro Kitara Empire contribute to its decline?

34. State the main difference between a map and a picture

35. How can the government improve on the tourism industry of Uganda?

36. Which important discovery marked the end of stone age period?

For 37 to 40, answer either the Christian or Islamic questions but not both. No mark will be awarded to a child who will write both.

37. Either. Where were Adam and Eve living before they disobeyed God?

Or. Where were Adam and Hawa living before they disobeyed Allah?

38. Either. How did the wise men from the East find where baby Jesus?

Or. Give a reason why the early Muslims prayed facing Jerusalem?

39.Either.Name the final place of rest for believers in Christ

Or.Name the final place of rest for believers in Allah

40 Either.Why did Jesus love sinners?

Or.Why is Mt.Hira important in Islamic faith?

SECTION B

41a)Give two reasons why the people of East Africa fought for independence

i)_____

ii)_____

b)Give two political parties that were formed in Kenya to fight for independence.

i)_____ ii)_____

42a)Give two reasons why the missionaries came to Uganda

i)_____

ii)_____

b)State two problems which the early missionaries met in East Africa.

43a)Of what value are national parks to Uganda (give two values)

i)_____

b)What are the main dangers which animals in National parks face.

i) _____

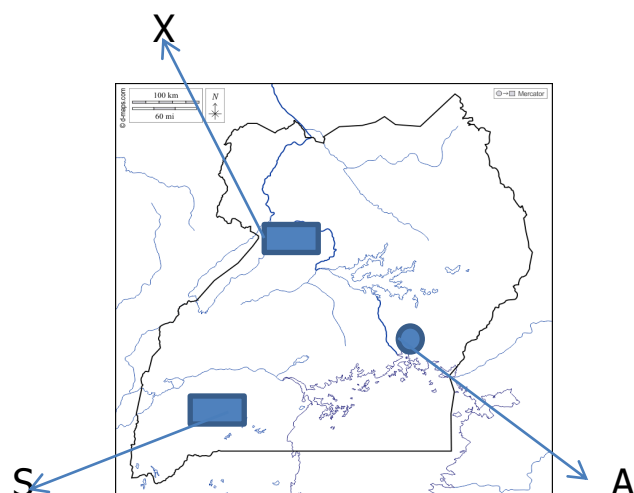
ii) _____

44a) Where did the Bantu migrate from into Uganda?

b) Give one reason why the Bantu migrated from their homeland

c) Give two effects of the Bantu on the people they found in Uganda

45 Study the sketch map of Uganda and use it to answer the questions that follow.



a) Name the town marked A _____

b) Mention the tourist attraction places marked X and S

X _____ S _____

c) Use letter P to show the lake where oil has been discovered in Uganda

47. State any one duty for each of these arms of government.

i) Parliament _____

ii) Executive _____

b)In which arm of the government do judges belong?

c)What is the main duty of the speaker of parliament?

48a)State any one reason why the crested crane was selected as one of the items of the Uganda coat of arm.

b)What does the red colour on the Uganda national flag represent?

c)Give any two conditions which may make someone fail to stand while singing the National Anthem

49a)Where in Africa do we find temperate climate?

b)Give two main economic activities of temperate grassland.

c)What method is used for growing sugarcane in the area in (a) above.

50a)Name any two services the government provides that make it easy for people to carry out trade.

b)Give two ways in which the government of East African countries are improving social services for their people.

51a) State two activities carried on port Butiaba.

i) _____ ii) _____

b) Give two reasons why port Butiaba was built.

52a) Give one way in which lake Tana is important to the Blue Nile.

b) Give the meaning of the following words.

a) Tributary of a river _____

b) Mouth of a river _____

c) Distributary of a river _____

For each of the questions from 53 to 55 answer EITHER the Christian OR the Islamic question but not both.

53. EITHER. What does the word Gospel mean?

b) Name any two people who wrote the gospel

i) _____ ii) _____

c) What guided the people mentioned above to write the gospel.

OR. Write the meaning of each of the following word in Islamic faith

i) Kaaba _____

ii)Imam_____

iii)Umra_____

iv)Saum_____

54.EITHER.Who led the Jews to arrest Jesus?

b)Give one reason why Jesus was taken to Pontius Pilate

c)Why was Jesus arrested?_____

d)Why did Pontius Pilate wash his hands when he gave Jesus to the Jews?_____

OR.State the duty of Angel Israafeel on the day of Judgement.

b)Mention any two things that will happen on the day of judgement

c)Why will Allah judge all believers on the day of judgement?

55.FOR BOTH.Give any two qualities of a God fearing person

b)State any two ways in which religious organisations have improved the lives of people of Uganda.

i)_____ ii)_____

SECTION A

1. What does a map reader use to tell the direction of Uganda from Kenya?

2. Give **one** advantage of canal method of irrigation over sprinkler method of irrigation.

3. How do hills support road construction?

4. Mention **one** service provided by petrol stations.

5. Which Lake in East Africa provides soda ash?

6. Give any **one** importance of social norms.

7. In which one way can the high rate of immigration affect districts?

8. Write the month when equinox is experienced.

9. Which water body separates Africa from Europe?

10. Give any **one** good thing foreigners brought to Uganda.

11. In which one way can people protect lakes and rivers?

12. Which tribal group settled in Karamoja region?

13. Give **one** reason for registering voters before elections.

14. How did Semei Kakungulku contribute to the establishment of colonial rule in Eastern Uganda?

15. How do schools contribute to the development of their neighbourhood?

16. Give **one** way members of Parliament serve people they represent.
-
17. Why was Suez Canal constructed?
-
18. Mention the capital city of the largest country in the East Africa Community.
-
19. Why do farmers in highlands control soil erosion?
-
20. Give **one** reason why indirect rule was not used in some parts of Eastern Uganda.
-
21. Name the highest Mountain in Africa.
-
22. Give **one** function of the East African development bank in the region.
-
23. How important is a constitution to a nation?
-
24. Name **one** tributary of R. Nile in Uganda.
-
25. State **one** positive effect of the rebellion which was staged in Rwanda.
-
26. How does the National constitution promote human rights?
-
27. Give **one** way of managing waste materials in our environment.
-
28. What causes seasons?
-
29. State **one** way of promoting tourism in East Africa.
-
30. Give **one** reason of planting grass in a school compound.
-
31. How did the missionaries promote education in Uganda?
-

32. Give **one** reason why the British never used the people of East Africa during the construction of the Uganda railway.

33. Give any **one** activity that can be carried out on a plateau.

34. In which season do farmers harvest their crops?

35. State **one** factor which influenced the settlement patterns of Bantu in Uganda.

From questions 36 – 40, answer either Christianity or Islam but not both.

36. **Either:** How did Adam and Eve fail to live up to God's standards?

Or: How did Adam and Hawa fail to live up to Allah's standards?

37. **Either:** Give **one** way in which Holy Communion is important to Christians.

Or: How do Muslims benefit from fasting?

38. **Either:** Which material did God use to create man?

Or: Which material did Allah use to create man?

39. **Either:** State the importance of reconciliation among Christians.

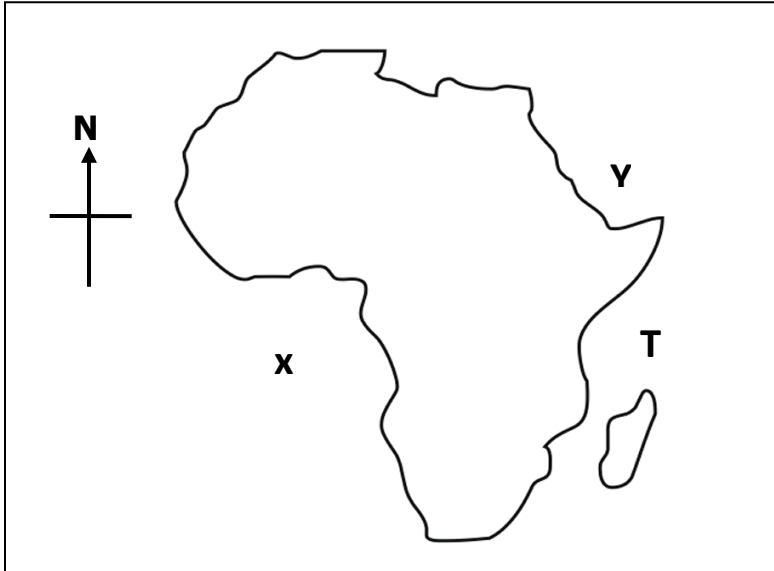
Or: In which one way is reconciliation important among Muslims?

40. **Either:** Name the last prophet in Christianity.

Or: Who is the last prophet in Islam?

SECTION B

Use the map below to answer questions



41. (a) Name the water bodies marked **X** and **Y**.

X _____

Y _____

- (b) How does Kenya benefit from the water body marked **T**?

(i) _____

(ii) _____

42. (a) Mention any **two** minerals mined from Karamoja region.

(i) _____

(ii) _____

- (b) How does mining create employment for people?

(i) _____

(ii) _____

43. (a) Give **two** reasons why population growth should be discouraged in Uganda.

(i) _____

(ii) _____

- (b) How does a country benefit from its high population?

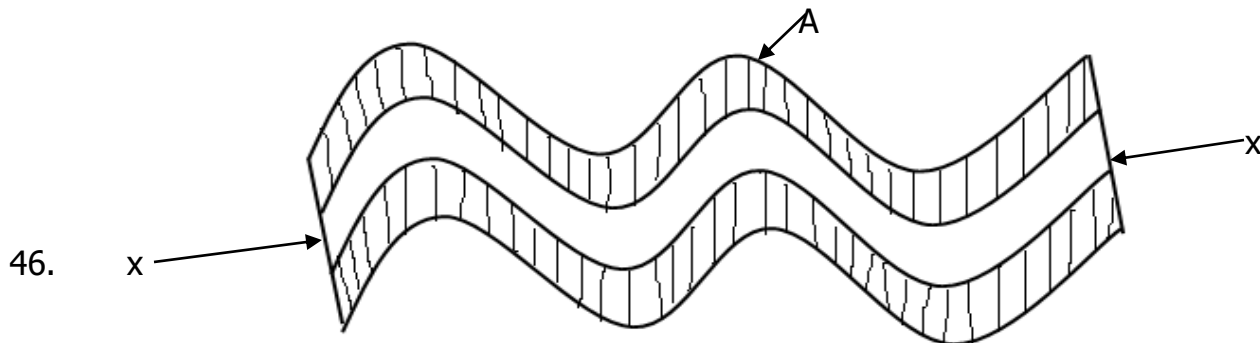
- (c) Which Ministry in Uganda is responsible for population census?

44. (a) In which East African country was Rabai Mpya established?

- (b) How did Rabai Mpya contribute to the spread of Christianity in East Africa?
(i) _____
(ii) _____
- (c) How did the missionaries contribute to the economic development of Uganda?

45. (a) Give **two** reasons why there was need to revive the East African community.
(i) _____
(ii) _____
- (b) State any **two** organs of the revived East African community.
(i) _____
(ii) _____

Use the diagram below to answer questions.



- (a) Which mountain in Africa was formed as the diagram above describes?

- (b) Name the part marked **A**.

- (c) Which forces are marked **X** ?

- (d) How are the problems of transport solved in mountainous areas?

47. (a) State the importance of peace and security in our communities.
(i) _____
(ii) _____

- (b) Give **two** examples of people who provide peace and security in a district
- (i) _____ (ii) _____
46. (a) Which people carried out slave trade in East Africa?
- _____
- (b) Give **one** reason why slave trade was carried out in East Africa.
- _____
- (c) Why did slave trade take long to end in East Africa?
- (i) _____
- (ii) _____
47. (a) Why are social activities important in our communities?
- (i) _____
- (ii) _____
- (b) Write any **two** examples of social activities.
- (i) _____
- (ii) _____
48. (a) Name the first explorer to come to Uganda.
- _____
- (b) Give **one** reason why the above explorer came to Uganda.
- _____
- (c) Which **two** problems did the explorers face in Uganda?
- (i) _____
- (ii) _____

Answer Either Christianity Or Islam But Not Both.

49. EITHER:

- (a) When do Christians start fasting?
- _____
- (b) How do Christians benefit from fasting?
- _____
- (c) Give **one** practice among Christian during the lent period.
- _____
- (d) How long does the lent period take?
- _____

OR:

(a) When do Moslems start fasting?

(b) How do Moslems benefit from fasting?

(c) Give **one** practice among Moslems during Ramadhan.

(d) How long does Ramadhan take?

50. EITHER:

(a) How do Christians benefit from their talents?

(b) Give **two** examples of talents you know.

(i) _____ (ii) _____

(c) How can other people benefit from your talents?

OR:

(a) How do Moslems benefit from their talents?

(b) Give **two** examples of talents you know.

(i) _____ (ii) _____

(c) How can other people benefit from your talents?

51. EITHER:

(a) What do you understand by the term authority?

(b) Give any **two** types of authority.

(i) _____ (ii) _____

(c) Which type of authority is possessed by God?

OR:

(a) What do you understand by the term authority?

(b) Give any **two** types of authority

(i) _____ (ii) _____

(c) Which type of authority is possessed by Allah?

52. EITHER:

(a) What was God's first creation?

(b) Why did God create man in his image?

(c) From which material did God create human beings?

(d) How did God punish Eve for her disobedience?

OR:

(a) What was Allah's first creation?

(b) Why did Allah create man in his image?

(c) From which material did Allah create human beings?

(d) How did Allah punish Hawa for her disobedience?

53. FOR BOTH:

(a) How do God fearing people communicate to God / Allah?

(i) _____

(ii) _____

(b) How does God / Allah communicate to his people?

(i) _____

(ii) _____

END

SECTION A (40 MARKS)

1. What title is given to the head of security in a district?

2. Mention the use of a barometer at a weather station.

3. How did Arabs promote farming in East Africa?

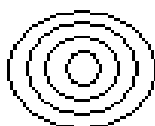
4. Name any one river that forms a watershed in Uganda.

5. Why should farmers harvest their crops during the dry season?

6. Apart from using elections, state any other one way of getting leaders.

7. How is Katanga province economically important to the economy of the Democratic Republic of Congo(DRC)?

8. Mention any one way poverty affects people's way of life.



9. What does the symbol above represent?

10. Write in full the common market that brings together all the countries of East Africa.

11. Why is it important to have rules and regulations at home?

12. Why is the government of Uganda encouraging foreign investors to start business in the country?

13. How are the Fulani of Nigeria similar to Turkana of Kenya in terms of occupation?

14. How can we get information about the past?

15. Mention any one role played by Dr. David Livingstone in the abolition of slave trade.

16. What type of breeze is shown in the diagram below?



17. Name the mineral that was discovered on the shores of Lake Albert.

18. Why was the Suz canal constructed?

19. Give any one way a farmer benefits from a commercial bank.

20. How was formal education important during the struggle for Africa's independence?

21. State any one advantage of mixed farming.

22. Why is Patrice Lumumba still remembered in the history of Africa?

23. Name the type of wood obtained from natural forests.

24. Mention any one way early man obtained food.

25. How did Long Distance Trade lead to the demand?

26. Write down any one social contribution of the Bacwezi.

27. How does vegetation help in controlling soil erosion?

28. State any one method that the government can use to get the rate of population growth.

29. Name the multi-purpose river project built in E. Africa.

30. Give any one factor that made Africa's resistance to be easily defeated by the colonial government.

31. State any one reason why it is important to have a school fence.

32. Mention any one way good hotels and lodges promote tourism in the country.

33. Which African nationalist helped to unite Zanzibar and Tanganyika to form Tanzania?

34. How were the Monsoon Winds helpful to the Arab traders who came to East Africa?

35. How were inselbergs formed?

For questions 36 – 40 answer either Christianity or Islam but not both

36. **Either:** According to the Bible, who was instructed to build the Ark?

Or: According to the Qur'an, who was instructed to build the Ark?

37. **Either:** Why do Christians visit Namugongo on 3rd June every year?

Or: Why do Muslims visit Mecca?

38. **Either:** Give any one reason why Christians are encouraged to repent after sinning.

Or: Give any one reason why Muslims are encouraged to repent after sinning.

39. **Either:** Mention the first commandment according to Christianity.

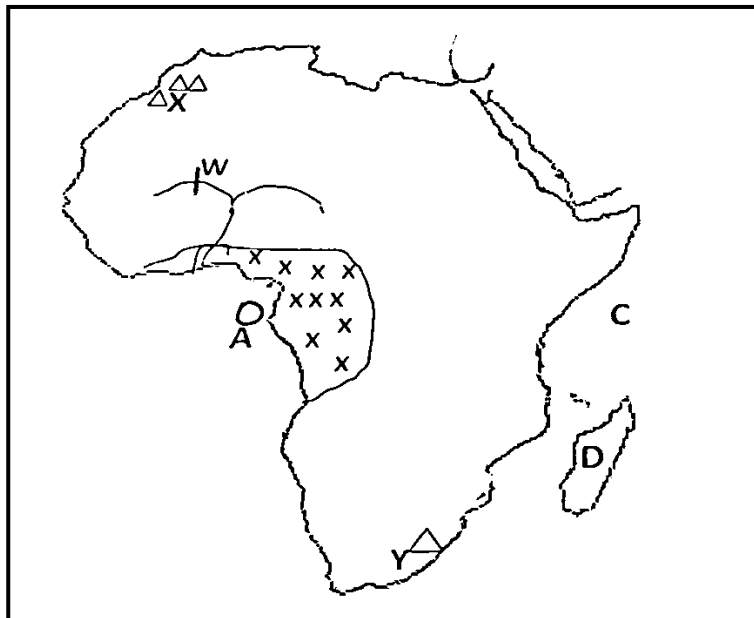
Or: Mention the first pillar according to Islam.

40. **Either:** State any one way Christians show respect to God during prayer.

Or: State any one way Muslims show respect to Allah during prayer.

SECTION B

41. **Study the map of Africa below and use it to answer the questions that follow**



a) Describe the type of climate in the shaded area xxx.

b) Name the Island country marked letter A.

c) How are mountains labelled X and Y different in terms of formation?

d) Name the multi-purpose river project marked W on river Niger.

42. a) What type of transport is suitable for transporting breakable goods like glass over long distances?

b) Mention any one common means of transport used in the type of transport you have mentioned in (a) above.

c) State any one reason why the type of transport above is not well developed in East Africa.

43. a) Name the first European explorer to cross through the Maasai Land.

b) Write down any two problems faced by European explorers in East Africa.

i) _____

ii) _____

c) How did exploration work speed up the colonization process of African states?

44. a) Name the organ of government which approves the National budget in Uganda.

b) Apart from approving the National budget, mention any other two duties of the organ named above in (44.a)

i) _____

ii) _____

c) Give any one major reason for holding by-elections in Uganda.

45. Kato earns a monthly salary of shs. 960, 000 and spends as follows

House rent = shs. 200,000/=

Transport = shs. 300,000/=

Food = shs. 340,000/=

Medical = shs. 120,000/=

Clothes = shs. 100,000/=

a) What is Kato's monthly expenditure?

b) Name the type of budget Kato has.

c) State any two advantages of making a budget before spending money.

i) _____

ii) _____

46. a) Give any two social reasons why Europeans colonized Africa.

i) _____

ii) _____

b) Give two reasons why assimilation policy was replaced in the French colonies.

i) _____

ii) _____

47. a) What term is used to mean the increase in number of people living in an area?

b) Mention any three factors that can cause population to increase in a country.

i) _____

ii) _____

iii) _____

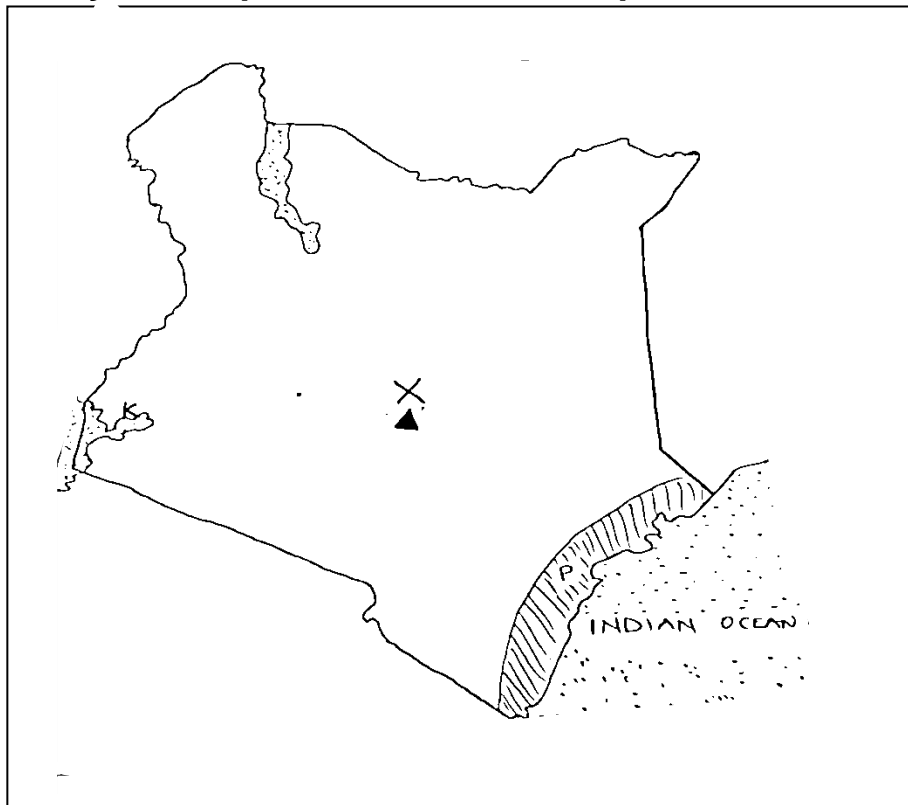
48. a) Name the first Portuguese explorer to reach the coast of East Africa.

b) State the use of a compass to a sailor.

c) Give one reason why the Portuguese explorers wanted to find a sea route to India.

d) State any one reason why the Portuguese were interested in the coast of East Africa.

49. **Study the map below and answer questions that follow**



a) Name the water body marked K.

b) Give any one reason why area marked X receives relief rainfall.

c) Name the vegetation type in area marked P.

d) Name the tourist attraction found in area marked P.

50. a) Name the ministry to which the Independent Electoral Commission of Uganda belongs.

b) State any two duties of the Independent Electoral Commission of Uganda.

i) _____

ii) _____

c) Mention any one election malpractice in during elections.

For question 51-55 answer either Christianity or Islam but not both

51. **Either:**

a) Give any two ways God treated man in a special way during the creation.

i) _____

ii) _____

b) How did Adam and Eve bring suffering?

c) What lesson do Christians learn from story of Adam and Eve?

Or: a) Give any two ways Allah treated Adam in a special way.

i) _____

ii) _____

b) How did Adam and Hawa bring suffering?

c) What lesson do Moslems learn from the story of Adam and Hawa?

52. **Either:**

a) What is marriage?

b) When is a Christian who had ever married in the church allowed to re-marry?

c) Which sacrament unites a man and a woman as a husband and wife?

d) Why do people marry?

Or: a) What is Nikkah?

b) Mention any two conditions one must fulfill before Nikkah is carried out.

i) _____

ii) _____

c) Give any one condition under which Divorce (Talaq) is done in Islam.

53. Either:

a) Why did Jesus accept to be baptized and yet he was a son of God?

b) Give any two unusual things that happened after the baptism of Jesus Christ.

i) _____

ii) _____

c) What happens to a person when he/ she is baptized?

Or: a) Which pillar initiates one to Islam?

b) Apart from the pillar named in (a) above, mention any other two pillars of Islam.

i) _____

ii) _____

c) Why should a good Moslem observe the above pillars?

54. Either: "Eloi Eloi Lema Sabachthani" Mathew 27:46-47)

a) Who said the above words?

b) What is the meaning of the stated words in (54.a) above?

c) State any two things which happened immediately after the death of the above mentioned person in (54.a).

i) _____

ii) _____

Or: "He will admit his mercy to whom he wills and for the wrong doers he has prepared a painful torment". (Surat Insan 76.31)

a) Who said the above words?

b) What is the meaning of the stated words above?

c) State any two things which happened immediately after the death of prophet Muhammad(PBUH).

i) _____

ii) _____

55. **Either:**

a) Write UJCC in full.

b) State any two roles of UJCC.

i) _____

ii) _____

c) Give any one challenge facing UJCC.

Or: a) Write UMSC in full.

a) State any two roles of UMSC.

i) _____

ii) _____

b) State any one challenge of UMSC.

END

SECTION A (40 MARKS)

1. What title is given to the head of security in a district?

2. Mention the use of a barometer at a weather station.

3. How did Arabs promote farming in East Africa?

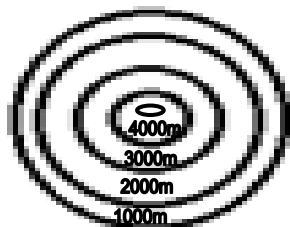
4. Name any one river that forms a watershed in Uganda.

5. Why should farmers harvest their crops during the dry season?

6. Apart from using elections, state any other one way of getting leaders.

7. How is Katanga province economically important to the economy of the Democratic Republic of Congo(DRC)?

8. Mention any one way poverty affects people's way of life.



9. What does the symbol above represent on a map?

10. Write in full the common market that brings together all the countries of East Africa.

11. Why is it important to have rules and regulations at home?

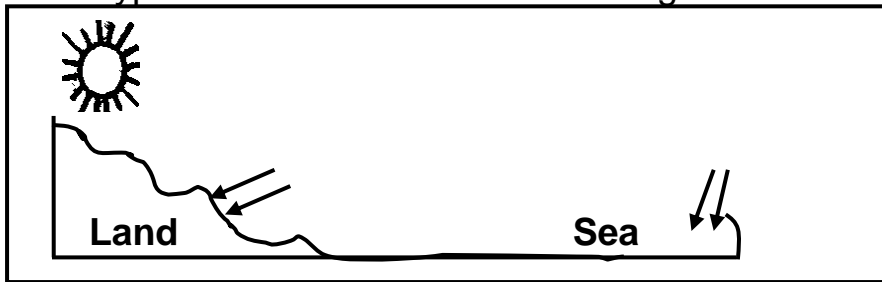
12. Why is the government of Uganda encouraging foreign investors to start business in the country?

13. How are the Fulani of Nigeria similar to Turkana of Kenya in terms of occupation?

14. How can we get information about the past?

15. Mention any one role played by Dr. David Livingstone in the abolition of slave trade.

16. What type of breeze is shown in the diagram below?



17. Name the mineral that was discovered on the shores of Lake Albert.

18. Why was the Suz canal constructed?

19. Give any one way a farmer benefits from a commercial bank.

20. How was formal education important during the struggle for Africa's independence?

21. State any one advantage of mixed farming.

22. Why is Patrice Lumumba still remembered in the history of Africa?

23. Name the type of wood obtained from natural forests.

24. Mention any one way early man obtained food.

25. How did Long Distance Trade lead to the demand?

26. Write down any one social contribution of the Bacwezi.

27. How does vegetation help in controlling soil erosion?

28. State any one method that the government can use to get the rate of population growth.
-
29. Name the multi-purpose river project built in E. Africa.
-
30. Give any one factor that made Africa's resistance to be easily defeated by the colonial government.
-
31. State any one reason why it is important to have a school fence.
-
32. Mention any one way good hotels and lodges promote tourism in the country.
-
33. Which African nationalist helped to unite Zanzibar and Tanganyika to form Tanzania?
-
34. How were the Monsoon Winds helpful to the Arab traders who came to East Africa?
-
35. How were inselbergs formed?
-

For questions 36 – 40 answer either Christianity or Islam but not both

36. **Either:** According to the Bible, who was instructed to build the Ark?
-
- Or:** According to the Qur'an, who was instructed to build the Ark?
-
37. **Either:** Why do Christians visit Namugongo on 3rd June every year?
-
- Or:** Why do Muslims visit Mecca?
-
38. **Either:** Give any one reason why Christians are encouraged to repent after sinning.
-
- Or:** Give any one reason why Muslims are encouraged to repent after sinning.
-
39. **Either:** Mention the first commandment according to Christianity.
-

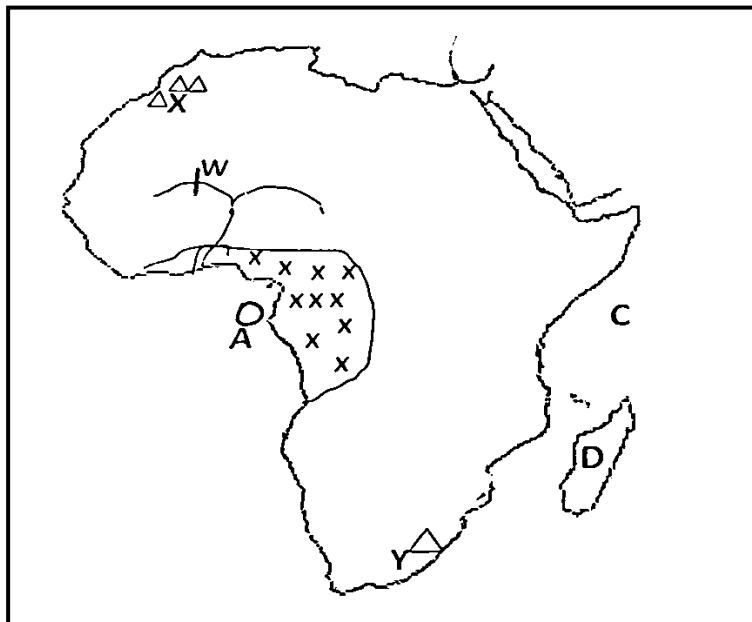
Or: Mention the first pillar according to Islam.

40. **Either:** State any one way Christians show respect to God during prayer.

Or: State any one way Muslims show respect to Allah during prayer.

SECTION B

41. **Study the map of Africa below and use it to answer the questions that follow**



a) Describe the type of climate in the shaded area xxx.

b) Name the Island country marked letter A.

c) How are mountains labelled X and Y different in terms of formation?

d) Name the multi-purpose river project marked W on river Niger.

42. a) What type of transport is suitable for transporting breakable goods like glass over long distances?

b) Mention any one common means of transport used in the type of transport you have mentioned in (a) above.

c) State any one reason why the type of transport above is not well developed in East Africa.

43. a) Name the first European explorer to cross through the Maasai Land.

b) Write down any two problems faced by European explorers in East Africa.

i) _____

ii) _____

c) How did exploration work speed up the colonization process of African states?

44. a) Name the organ of government which approves the National budget in Uganda.

b) Apart from approving the National budget, mention any other two duties of the organ named above in (44.a)

i) _____

ii) _____

c) Give any one major reason for holding by-elections in Uganda.

45. Kato earns a monthly salary of shs. 960, 000 and spends as follows

House rent = shs. 200,000/=

Transport = shs. 300,000/=

Food = shs. 340,000/=

Medical = shs. 120,000/=

Clothes = shs. 100,000/=

a) What is Kato's monthly expenditure?

b) Name the type of budget Kato has.

c) State any two advantages of making a budget before spending money.

i) _____

ii) _____

46. a) Give any two social reasons why Europeans colonized Africa.
i) _____
ii) _____
- b) Give two reasons why assimilation policy was replaced in the French colonies.
i) _____
ii) _____
47. a) What term is used to mean the increase in number of people living in an area?

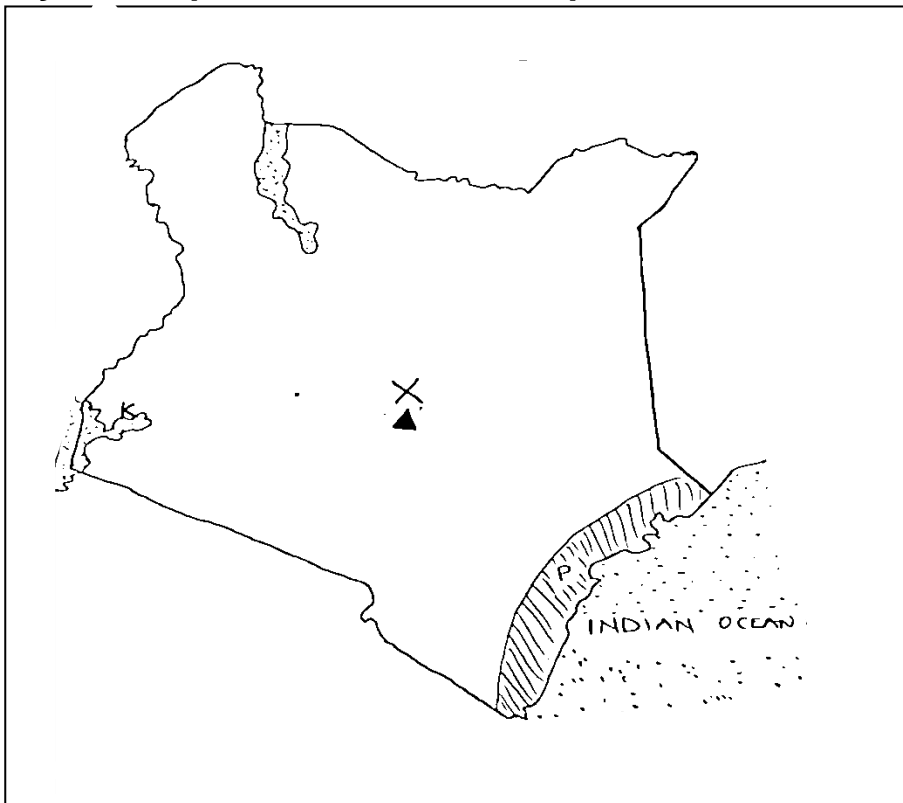
- b) Mention any three factors that can cause population to increase in a country.
i) _____
ii) _____
iii) _____
48. a) Name the first Portuguese explorer to reach the coast of East Africa.

- b) State the use of a compass to a sailor.

- c) Give one reason why the Portuguese explorers wanted to find a sea route to India.

- d) State any one reason why the Portuguese were interested in the coast of East Africa.

49. **Study the map below and answer questions that follow**



a) Name the water body marked K.

b) Give any one reason why area marked X receives relief rainfall.

c) Name the vegetation type in area marked P.

d) Name the tourist attraction found in area marked P.

50. a) Name the ministry to which the Independent Electoral Commission of Uganda belongs.

b) State any two duties of the Independent Electoral Commission of Uganda.

i) _____

ii) _____

c) Mention any one election malpractice in during elections.

For question 51-55 answer either Christianity or Islam but not both

51. **Either:**

a) Give any two ways God treated man in a special way during the creation.

i) _____

ii) _____

b) How did Adam and Eve bring suffering?

c) What lesson do Christians learn from story of Adam and Eve?

Or:

a) Give any two ways Allah treated Adam in a special way.

i) _____

ii) _____

b) How did Adam and Hawa bring suffering?

c) What lesson do Moslems learn from the story of Adam and Hawa?

52. **Either:**

a) What is marriage?

b) When is a Christian who had ever married in the church allowed to re-marry?

c) Which sacrament unites a man and a woman as a husband and wife?

d) Why do people marry?

Or:

a) What is Nikkah?

b) Mention any two conditions one must fulfill before Nikkah is carried out.

i) _____

ii) _____

c) Give any one condition under which Divorce (Talaq) is done in Islam.

53. **Either:**

a) Why did Jesus accept to be baptized and yet he was a son of God?

b) Give any two unusual things that happened after the baptism of Jesus Christ.

i) _____

ii) _____

c) What happens to a person when he/ she is baptized?

Or:

a) Which pillar initiates one to Islam?

b) Apart from the pillar named in (a) above, mention any other two pillars of Islam.

i) _____

ii) _____

c) Why should a good Moslem observe the above pillars?

54. **Either:** "Eloi Eloi Lema Sabachthani" Mathew 27:46-47)

a) Who said the above words?

b) What is the meaning of the stated words in (54.a) above?

c) State any two things which happened immediately after the death of the above mentioned person in (54.a).

i) _____

ii) _____

Or: “He will admit his mercy to whom he wills and for the wrong doers he has prepared a painful torment”. (Surat Insan 76.31)

a) Who said the above words?

b) What is the meaning of the stated words above?

c) State any two things which happened immediately after the death of prophet Muhammad(PBUH).

i) _____

ii) _____

55. **Either:**

a) Write UJCC in full.

b) State any two roles of UJCC.

i) _____

ii) _____

c) Give any one challenge facing UJCC.

Or:

a) Write UMSC in full.

b) State any two roles of UMSC.

i) _____

ii) _____

c) State any one challenge of UMSC.

END

Section A

1. Name the symbol on a map used to calculate distance between two places.

2. What is the major economic activity carried out around lake Albert in Uganda?

3. Why is the government of Uganda encouraging women to form SACCOS?

4. Name the major line of longitude marked 0° degrees.

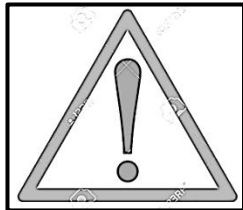
5. Why is a radio an effective means of communicating to people in rural areas?

6. State one-way East African countries will benefit from DRC after joining the East African Community.

7. Give a reason why it is important to have laws in the community.

8. What makes Dr. Julius Kambarage Nyerere popular in East Africa?

9. When is the road sign below placed on the road?



10. How did the Indian Coolies contribute to the end of Slave trade in East Africa?

11. Write L.D.U. full.

12. In which climatic region are Oases common?

13. Give any one reason why old kingdoms had strong armies.

14.State one way a school can promote good relationship with her neighborhood.

15.Why is Swamp drainage regarded as a bad practice?

16.Mention one way a health Centre can improves the welfare of people in the community.

17.Give a reason why Nelson Mandela was against apartheid rule in South Africa.

18.What is the major plantation crop grown in Kalangala district in Uganda?

19.What type of house is shown below?



20.Give a reason to support your answer.

21.What makes Ethiopia popular in relation to African Union?

22.How has Entebbe International airport contributed to the economic development of Uganda?

23.What title is given to the Officer at the district responsible for supervising civil servants?

24.Mention any one danger of **floods** to the community.

25.How did Alexander Mackay's printing press promote the spread of Christianity in East Africa?

26.Mention the type of weather that may require a school child to carry the item below.



27. Name the trade that was conducted by the people of West Africa, North America and Europe across the Atlantic Ocean.

28. Give a reason why the Germans faced a lot of resistance in Tanganyika.

29. How did the Luo people contribute to the collapse of Bunyoro-Kitara Empire?

30. State any one way **Covid19** has affected the tourism industry in Uganda.

31. What is Immigration?

32. What name was given to the Law making body during the colonial period?

33. Mention one factor that has led to increased destruction of natural forest in Uganda.

34. State one way a head teacher can promote security at school.

35. Apart from taxes, mention any other source of revenue to the districts.

For questions 36 - 40, answer either Christianity or Islam but not both.

36. **Either:** Who led the Israelites to the Promised Land?

Or: Who led the Ban-Israelites to the Promised Land?

37. **Either:** Give **one** symbol of the Holy Spirit on the day of Pentecost.

Or: Give **one** symbol of Islam.

38. **Either:** Mention any **one** way Christians benefit from attending church services (mass).

Or: Mention any **one** way Muslims benefit from attending regular prayers.

39. **Either:** Name any one way Jesus bridged the gap between God and mankind.

Or: Name any one-way Prophet Muhammad perfected Islam.

40. **Either:** Write down any one thing that Christians observe during Lent period.

Or: Write down any one thing Muslims observe during Saum.

SECTION B (60 MARKS)

41. a) What are Social Activities?

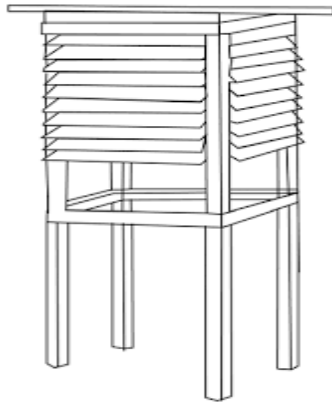
b) Give any two examples of social activities carried out in our communities.

i) _____

ii) _____

c) How do social activities unite people?

42. **Study the diagram below and answer the questions that follow:**



a) Name the feature shown in the diagram above.

b) Write down any two weather instruments kept in the above feature.

i) _____

ii) _____

c) Why is the feature shown above painted white?

43. **Complete the table below correctly:**

Service provider	Service centre
Midwife
.....	Cares for our teeth
Barber
.....	Mends our shoes.

44.a) What makes **Vasco da Gama** popular in Africa?

b) Mention any two positive results of the Portuguese rule in East Africa.

i) _____

ii) _____

c) Why did the Portuguese develop conflicts with the Arabs at the East African coast?

45.a) Name the last Bantu tribe to enter East Africa.

b) Give any two reasons why the Bantu settled along river valleys in East Africa.

i) _____

ii) _____

c) State one way the Bantu influenced the life of the Plain Nilotes in East Africa.

46.a) Name the group of people who founded Bunyoro-Kitara Empire.

b) Write down any **two** activities that the Chwezi are remembered for in Uganda.

i) _____

ii) _____

c) Mention the last dynasty that ruled Bunyoro-Kitara Empire.

49.a) Give any **two** reasons why the government carries out a population census.

- i) _____
- ii) _____

b) Why is a population census carried out after 10 years?

c) Mention any one problem **enumerators** face when carrying out population Census.

50.a) In which country did the Berlin conference of 1884-5 take place?

b) What role did Chancellor Otto Von Bismarck play in the colonization of Africa?

c) State any two ways the Berlin conference affected Africa.

- i) _____
- ii) _____

For questions 51 – 55, answer either Christianity or Islam but not both

51. Either:

a) Mention any **two** gospel books in the Bible.

- i) _____
- ii) _____

b) Write down any **two** ways Christians benefit from reading the Bible.

- i) _____
- ii) _____

Or:

a) Mention the books that were received by the following prophets:

- i) Dauda _____
- ii) Musa _____

b) Write down any **two** ways Muslims benefit from reading the Bible.

- i) _____
- ii) _____

52. Either:

a) Mention any two Christian values.

- i) _____
- ii) _____

b) State any two ways some Christians have failed to live to God's expectations.

i) _____

ii) _____

Or:

a) State any two Muslim values.

i) _____

ii) _____

b) State any two ways some Muslim have failed to live to Allah's expectations.

i) _____

ii) _____

53. Either:

a) Write down the place where sinners will go on the day of Judgement.

b) Write down any **two** things that will cause people to go to the place mentioned in (a) above.

i) _____

ii) _____

c) Give any **one** way a Christian can avoid going to the place mentioned in (a) above.

Or:

a) Write down the place where sinners will go on the Day of Judgment.

b) Write down any **two** things that will cause people to go to the place mentioned in (a) above.

i) _____

ii) _____

c) What role will be played by Angel Israfeel on the Day of Judgment?

54. Either:

a) What is marriage?

b) Give any two factors to consider when choosing a marriage partner.

i) _____

ii) _____

c) Mention one reason why some marriages have failed.

Or:

a) What Nikkah?

b) Mention any **two** factors to consider when choosing a marriage partner.

i) _____

ii) _____

c) Mention one reason why some marriages have failed.

55. Either:

a) What prayer did Jesus Christ teach his disciples?

b) Give a reason why Christians need to pray

i) before meals _____

ii) before travelling _____

c) What lesson can you learn from Jesus' prayerful life?

Or:

a) What prayer do Muslims perform at Night during the month of Ramadhan?

b) Give a reason why Muslims need to pray,

i) before meals _____

ii) before travelling _____

c) What lesson can you learn from Prophet Muhammad's prayerful life?

SECTION A

1. Which element of a map explains map symbols?

2. Give any one way children show respect to their parents at home.

3. How is the government of Uganda controlling rural urban migration today?

4. State any one method that was used by Africans to demand for self – rule.

5. Draw any one of the mass media means of communication in the space below.



6. Name the missionary that introduced vocational education in Uganda.

7. How was the IBEACO helpful to the Christian missionaries in East Africa?

8. Of what importance are lines of latitude and longitude in map reading?

9. Why are most industries in Uganda established in areas with a high population?

10. Name the railway line that connects Zambia to Port Dar – es – Salaam.

11. State any one way insecurity is a problem to developing countries.

12. What does the Kob signify on The Uganda Coat of Arms?

13. Write any one importance of farming to East African countries.

14. Give any one benefit of East African Community to member states.

15. Why is it policy in Uganda to carry out population census after ten years?

16. Name any one area in Africa where crude oil is mined on a large scale.

17. Give one advantage of having a Post Office in a district.

18. How is the Great Made River useful to Libya's economy?

19. State the social reason why the British constructed the Uganda railway.

20. Why does the government of Uganda encourage the use of family planning?

21. Which economic activity was introduced by the colonialists in Kenya highlands?

22. State one role played by Secretariat of the East African Community.

23. Why do oceans and seas have salty waters?

24. Give one reason why crop farmers in hilly areas terrace their land.

25. Why does NEMA encourage people to conserve the existing wetlands?

26. Name the physical feature in South Africa that was formed by folding of rocks.

27. What role did Sir Gerald Portal play in the colonization of Uganda?

28. Why was Africa known as a "Dark continent" by the Europeans?

29. Give the reason why the Electoral Commission organizes by – elections?

30. State one reason why the school should be at good terms with the neighbours.

31. Name the tool early man used to chop meat into small pieces.

32. What is the effect of the Mozambique Ocean on Africa's climate?

33. State one way the government of Uganda is trying to promote literacy.

34. Give one reason why the government is expanding roads in urban areas.

35. Why does the government collect taxes from the citizens?

For questions 36 – 40, answer Either Christianity or Islamic but not both.

36. Either: In which way was the death of Jesus Christ important to Christians?

Or: How is death important to a good Muslim?

37. Either: Why do Christians give offertory in church?

Or: Why do Moslems give zakat?

38. Either: Name the son of Jacob who was sold to Egypt by his brothers.

Or: Name the prophet who is known for rescuing Allah's people from Egypt.

39. Either: Mention one religion that existed in Uganda before the introduction of Christianity.

Or: Mention the first foreign religion to be introduced in Uganda.

40. Either: Why did Mary and Joseph go with Baby Jesus to Egypt?

Or: Why did Prophet Muhammad go to Taif?

SECTION B

41.a) Mention any one natural component of the environment.

b) Give two ways of conserving resources in the environment.

i) _____

ii) _____

c) Write NFA in full.

42.a) Mention the trade organization in which the traders crossed Sahara desert.

b) Write any two trade items that were got from West Africa in the above trade.

i) _____

ii) _____

c) Why did the Traders in the above trade organization move in caravans?

43.a) What term is used to mean the violation of children's rights?

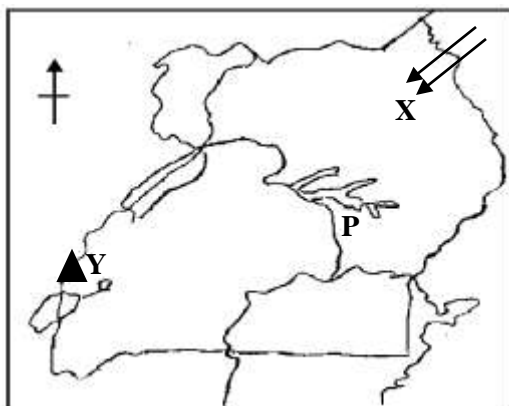
b) State two forms of child neglect in Uganda today.

i) _____

ii) _____

c) Why should children be educated about their rights?

44. **Study the map below and answer the questions that follow.**



a) Name any one tribe under the ethnic group that entered through route X.

b) Why is the Mountain peak marked Y snow capped throughout the year?

c) Mention the direction of Mountain Y from Lake P.

d) Give one reason why lake marked P is shallow.

45.a) Mention the earliest ethnic group to come to East Africa.

b) State any two causes of early ethnic migrations in Africa.

i) _____

ii) _____

c) Why did the Ngoni migrate from South Africa?

46.a) Name the body that promotes tourism in Uganda.

b) State any two tourist attractions in Uganda.

i) _____

ii) _____

c) Why does the government of Uganda create more game reserves?

47.a) State any one organ of a democratic government besides the Parliament.

b) Why should every democratic country have a Parliament?

c) What is the work of the following officials in the Parliament?

i) Sergeant – at – arms: _____

ii) Clerk to Parliament: _____

48.a) What is meant by the term Great Trek?

b) Give one cause of the Great Trek.

c) Mention any two effects of the Great Trek.

i) _____

ii) _____

49. Match the types of climate to the famous economic activities carried out there;

A: Types of climate

B: Economic activity

a) Mediterranean

plantation farming

b) Temperate

Citrus fruit growing

c) Equatorial

Tourism

d) Tropical

Rearing of Merino sheep

a) Mediterranean _____

b) Temperate _____

c) Equatorial _____

d) Tropical _____

50.a) Name any one of the industrialized towns in Uganda today.

b) State two factors that promote industrialization in an area.

i) _____

ii) _____

c) Draw a symbol of a factory in the space below.



For questions 51 – 54, answer Either Christianity or Islam but not BOTH.

51. Either: a) Write any two religious denominations in Uganda today.

i) _____

ii) _____

b) Give any two ways religions cater for the bodily needs of the people.

i) _____

ii) _____

Or: a) Write any two religious denominations in Uganda today

i) _____

ii) _____

b) Give any two ways religions cater for the bodily needs of the people.

i) _____

ii) _____

52. Either: a) State two reasons why Christians should care for God's creations.

i) _____

ii) _____

b) Mention any two ways of caring for God's creations.

i) _____

ii) _____

Or: a) Mention two reasons why Muslims should care for Allah's creations

i) _____

ii) _____

b) Give two ways of caring for Allah's creations.

i) _____

ii) _____

53. Either: a) State any two ways Abraham demonstrated in faith to God.

i) _____

ii) _____

b) Name the son of Abraham that he accepted to sacrifice to God.

c) Give one way of showing our faith to God.

Or: a) Mention two ways prophet Ibrahim showed his faith to Allah.

i) _____

ii) _____

b) Name the son of prophet Ibrahim that he wanted to sacrifice to Allah.

c) Give one way of showing our faith to Allah.

54. Either: a) What event took place on Pentecost day?

b) In which two ways was the Holy Spirit important to the Apostles?

i) _____

ii) _____

c) State any one symbol of the Holy Spirit.

Or: a) Differentiate between Iman and Imam.

b) Mention any two pillars of Islam.

i) _____

ii) _____

c) What role is played by Muezzin in Islam?

55. **FOR BOTH CANDIDATES**

a) Mention the type of marriage that is officiated by a religious leader.

b) Give any two qualities of a good marriage partner.

i) _____


ii) _____

c) Write any one reason why Christians / Muslims marry.

END

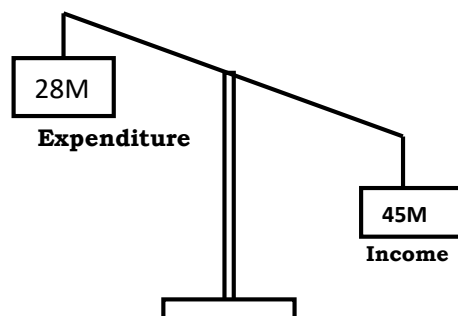
SECTION A

1. Name the island country of Africa crossed by the Tropic of Capricorn.
.....
2. Mention any one source of materials used to make mats.
.....
3. Which body is responsible for providing security to animals in national game parks?
.....
4. Give any one importance of a museum to a country.
.....
5. Why does the leeward side of a mountain receive little rainfall?
.....
6. In which way are civic leaders chosen in a district?
.....
7. State any one way in which immunisation against killer diseases has increased population growth.
.....
8. Why should people be encouraged to use energy saving stoves in Uganda?
.....
9. In which way have Ugandans benefited from the East African community?
.....
10. Draw a map symbol of a canal in the space provided below.



11. Name the mineral that is used to make glass.
.....
12. In which direction will Sarah be moving in the morning, if her shadow appears on her left-hand side?
.....
13. Why do people in Equatorial regions build houses with slanting roofs?
.....
14. State any one way in which an oasis is important to the people who live in the Sahara Desert.
.....
15. Give any one bad act that can affect the life of a child.
.....
16. What is population density?
.....
17. Why did the River-Lake nilotes change from pastoralism to mixed farming?
.....
18. Which group of people introduced iron smelting in Uganda?
.....

Study the diagram below and answer questions 19 and 20.



19. What type of budget is shown in the diagram above?
.....

20. Give any one reason to support your answer in (19) above.
.....
21. How is Lake Kyoga different from Lake Albert in terms of their formation?
.....
.....
22. Give any one way in which the maintenance of feeder roads can promote trade in Uganda.
.....
23. Name the official on the Local Council I executive committee responsible for writing minutes and keeping records.
.....
24. Give any one importance of the Uganda National Anthem.
.....
25. Mention any one item of trade that was taken by the Arabs from Buganda.
.....
26. State any one way in which land is polluted.
.....
27. Why did Dr. Kwame Nkrumah organise a Pan-African meeting in Ghana in 1958?
.....
28. How is cattle useful to the Fulani who live in northern Nigeria?
.....
29. Give any one reason why the government of Uganda introduced Universal Primary Education (UPE).
.....

30. Name the United Nations agency that helps refugees.
.....
31. Give any one human activity which promotes vegetation growth in an area.
.....
32. State any one way in which Africans protested against colonial rule.
.....
33. Give any one reason why a good government should encourage democracy.
.....
34. How did early man benefit from iron tools?
.....
35. What does the handshake at the bottom of the East African Community emblem represent?
.....

FOR QUESTIONS 36 TO 40, ANSWER EITHER THE CHRISTIAN OR ISLAMIC QUESTION BUT NOT BOTH.

36. **Either:** What was the work of Moses before he was called by God?
.....
- Or:** What was the work of Musa before he was called by Allah?
.....
37. **Either :** Give any one reason why Christians use water during baptism.
.....
- Or:** Give any one reason why Muslims use water during ablution.
.....

38. **Either** : Why did Jesus Christ turn water into wine?

.....

Or: Why did Prophet Muhammad split the moon?

.....

39. **Either** : How is reconciliation important in Christianity?

.....

Or: How is reconciliation important in Islam?

.....

40. **Either:** Why did God send His messages through prophets?

.....

Or: Why did Allah send His messages through prophets?

.....

SECTION B

41(a) Name the first two Christian missionaries to arrive in East Africa.

(i)..... (ii).....

(b) Give any two ways in which the people of East Africa supported missionary work.

(i).....

(ii).....

42(a) Name any one crop grown on plantations in Uganda.

.....

(b) Give any one importance of plantation farming.

.....

(c) State any two ways in which plantation farming can be promoted in Uganda.

(i)

(ii).....

43(a) Mention the system of government where political parties compete to gain control of the government.

.....

(b) Give any two advantages of the system named in (a) above.

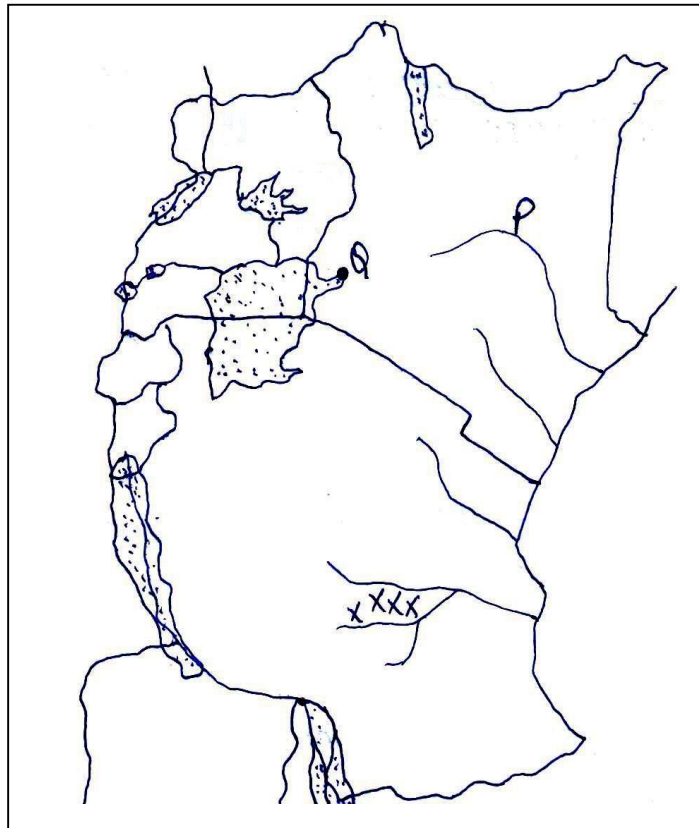
(i).....

(ii).....

(c) State any one negative effect of the above named system.

.....

44. **Study the map of East Africa below and answer the questions that follow.**



(a) Name the river marked with letter P.

.....

(b) Mention any one economic activity carried out at Port Q.

.....

(c) State any one factor that favour the growth of sugarcane in area marked **xxxx**.

.....

(d) Use letter **W** to show the Albert Nile on the map.

45(a) Which organ of the African Union is responsible for the day-to-day activities?

.....

(b) Give any two achievements of the African Union.

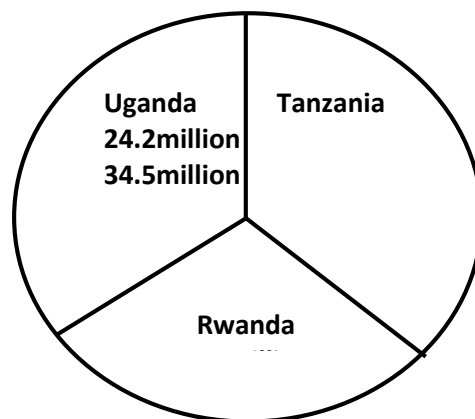
(i).....

(ii).....

(c) State any one problem faced by the African Union.

.....

46. **The pie-chart below shows the population censuses of three countries in 2002.**



(a) Which country had the highest number of people in 2002?

.....

(b) Calculate the range of population.

(c) What advantage did Rwanda have over Uganda?

.....

(d) Mention any one disadvantage of Tanzania population in 2002.

.....

47(a) Give any two reasons why districts are divided into sub-countries.

(i).....

(ii).....

(b) State any one problem faced by districts in meeting needs of people.

.....

(c) Which ministry in Uganda is responsible for creating local administrative units?

.....

48(a) Who signed the 1900 Buganda Agreement on behalf of the British?

.....

(b) State any two terms of the 1900 Buganda Agreement.

(i).....

(ii).....

(c) Why did the British sign the 1900 Buganda Agreement?

.....

49(a) Give any two reasons why the Bantu left their cradle land.

(i).....

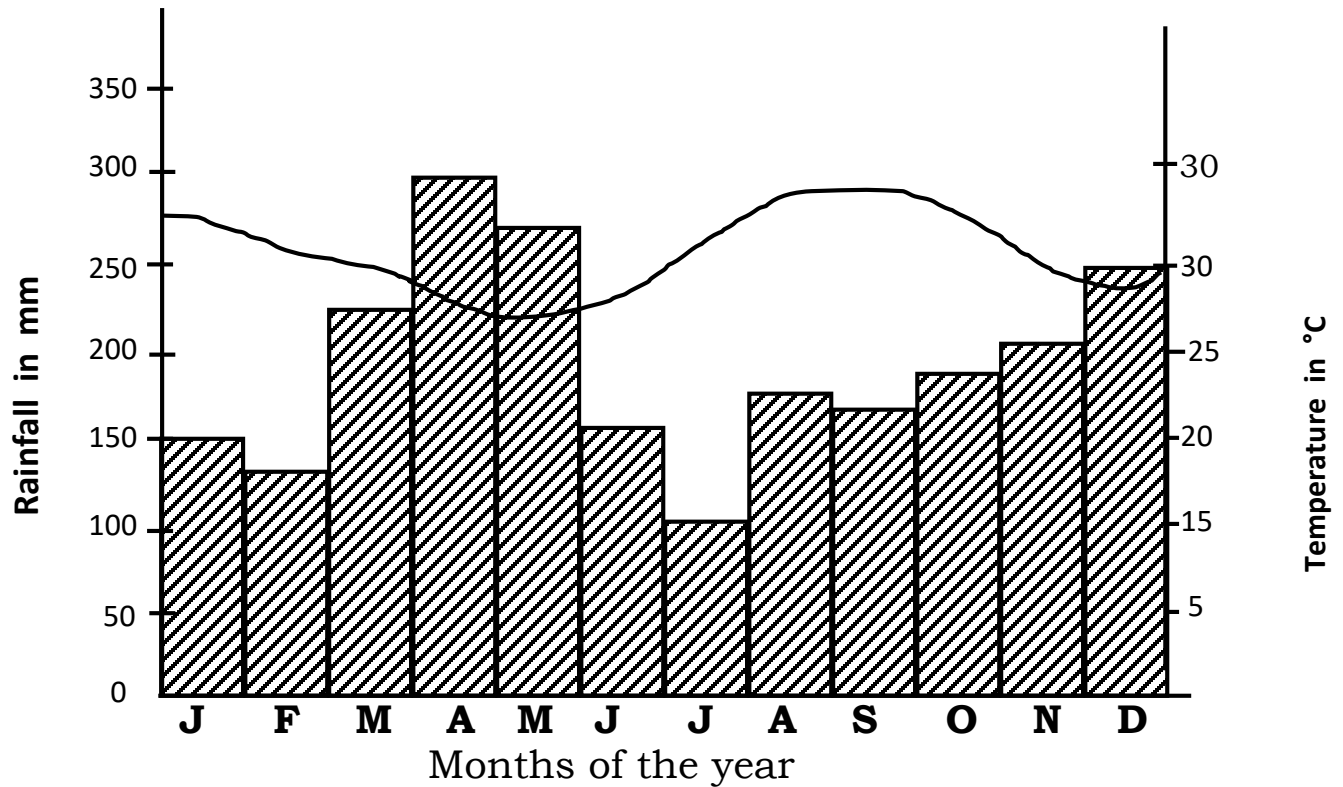
(ii).....

(b) Give any one factor that influenced the settlement of tribal groups in East Africa.

.....

- (c) State any one problem that was faced by the tribal groups during their movement.
-

50. **Study the climatic graph of place X carefully and answer the questions that follow.**



- (a) Which month had the highest amount of rainfall?
.....
- (b) How much rainfall was received in July?
.....
- (c) Name the type of climate experienced in place X.
.....
- (d) Give any one reason why place X is suitable for crop growing.
.....

FOR QUESTIONS 51 TO 55, ANSWER EITHER CHRISTIANITY OR ISLAM BUT NOT BOTH.

51. Either:

(a) Name the day when God will charge people according to their deeds.

.....

(b) Mention two things that will happen on the day named in (a) above.

(i).....

(ii).....

(c) How is the day in (a) above important in Christianity?

.....

Or:

(a) Name the day when Allah will charge people according to their deeds.

.....

(b) Mention two things that will happen on the day named in (a) above.

(i).....

(ii).....

(c) How is the day in (a) above important in Islam?

.....

52. Either:

(a) Who was the earthly father of Jesus Christ?

.....

(b) Give any two reasons why Jesus Christ was loved as a child.

(i)

(ii)

(c) Why was Jesus Christ baptised?

.....

Or:

- (a) Who was the father of Prophet Muhammad (PBUH)?
.....
- (b) Give any two reasons why Prophet Muhammad was loved as a child.
(i)
(ii)
- (c) Why was Prophet Muhammad circumcised?
.....

53. **Either:**

- (a) Who is a martyr according to Christianity?
.....
- (b) Give any two lessons Christians learn from martyrs.
(i)
(ii)
- (c) Why do Christians go for pilgrimage?
.....

Or:

- (a) Who is a martyr according to Islam?
.....
- (b) Give any two lessons Muslims learn from martyrs.
(i)
(ii)
- (c) Why do Muslims go for pilgrimage?
.....

54. **Either:**

- (a) Mention the message angel Gabriel brought to Zecharia.
.....
- (b) Why did Zecharia doubt the message?
.....
- (c) What happened to Zecharia when he doubted the message?
.....

- (d) What lesson do you learn from the story of Zecharia and angel Gabriel?

.....

Or:

- (a) Mention the message angel Jibril brought to Zakariya.

.....

- (b) Why did Zakariya doubt the message?

.....

- (c) What happened to Zakariya when he doubted the message?

.....

- (d) What lesson do you learn from the story of Zakariya and angel Jibril?

.....

55. **Either:**

“Forgive them, Father! They don’t know what they are doing.”
(Luke 23:34)

- (a) Who said the above words?

.....

- (b) Why did the above mentioned person say so?

.....

- (c) Mention any two things you learn from the above quotation.

(i).....

(ii).....

Or:

“These people do not know what I tell them is the truth; they are doing this because they think it is the right thing to do. Don’t be angry with them and don’t punish them but open their eyes to see the truth and help them to accept it.” (Narrated by Muslim)

- (a) Who said the above words?

.....

- (b) Why did the above mentioned person say so?

.....

(c) Mention any two things you learn from the above quotation.

(i).....

(ii).....