



THE E-LEARN EXAMINATIONS BOARD

PRE NATIONAL MOCK 2024

SET TWO / FOUR

SOCIAL STUDIES WITH RELIGIOUS EDUCATION

Time Allowed: 2 hours 15 minutes

Index No.	EMIS No..					Personal No..		

Pupil's Name:.....

Pupil's Signature:

School Name:

District Name:

Read the following instructions carefully:

1. Do not forget to write your **school** or **district name** on the paper..
2. This paper has two sections: **A** and **B**..
Section **A** has **40** questions and section **B** has **15** questions.. The paper has **12** printed pages..
3. Answer **all** questions.. **All** working for both sections **A** and **B** must be shown in the spaces provided..
4. **All** answers **must** be written using a **blue or black** ball point pen or ink.. Any work written in pencil will **not** be marked..
5. Unnecessary **changes** in your work and handwriting that cannot be read easily may lead to **loss of marks**..
6. Do not fill anything in the table indicated: "**For Examiners' use only**" and boxes inside the question paper

FOR EXAMINERS' USE ONLY		
Qn.. No..	MARKS	EXR'S NO..
1 – 10		
11 – 20		
21 – 30		
31 – 40		
41 – 43		
44 – 46		
47 – 49		
50 – 52		
53 – 55		
TOTAL		

SECTION A: 40 MARKS

Questions **1** to **40** carry **one** mark each.

1. What method is used to mean the locating of places using latitudes and longitudes?
.....
2. State any **one** negative effect of smuggling to a country.
.....
3. Give any **one** reason why community members should ensure peace and security.
.....
4. Mention any **one** way of obtaining leaders in the community.
.....
5. Name the type of tax paid by civil servants according to way they earn.
.....
6. How is Lake Magadi economically important to the people of Kenya?
.....
7. State **one** cause of traffic jam to the urban centers of Kampala.
.....
8. Name the river in Kenya where the seven forks dams are found.
.....
9. State any **one** way in which member states of the East African community benefits from its expansion.
.....
10. What is national population census?
.....
11. Write down any **one** economic importance of multi-purpose River projects to Africa Countries.
.....



12. State any **one** reason why road transport is not well developed in the Democratic Republic of the Congo.

.....

13. What does the map symbol below represent on a map?



.....

14. What title is given to the political head of a village?

.....

15. State any **one** way how the government of Uganda can improve on the household income of Ugandans.

.....

16. Mention any **one** natural disaster that checks on the population growth of an area.

.....

17. State any **one** way of managing projects.

.....

18. Why is a hut called a temporary house?

.....

19. State any **one** problem faced by pastoral communities.

.....

20. Name the water fall located on river Zambezi.

.....




21. State the reason why Nyanza province was transferred to Kenya by the British during boundary fixing.

.....

22. What name was given to Tanganyika under the German Rule?

.....

23. How does sea breeze modify the climate of an area?
.....
24. Give any **one** way the government can control cattle rustling in Karamoja.
.....
25. State any **one** way how long distance trade contributed to the growth of some Kingdoms in East Africa.
.....
26. Which mineral is meanly mined in the Katanga region in DRC Congo?
.....
27. Name any **one** treaty that was signed to end slave trade in East Africa.
.....
28. What is Agriculture mechanization?
.....
29. Name any **one** tribe in Uganda that belongs to the Highland Nilotes.
.....
30. State any **one** negative effect of the White settlers to the Kenyan natives.
.....
31. State the main reason why Joseph Thomas was sent to east Africa.
.....
32. Why is civic education important before elections?
.....
33. What name was given to the Dutch farmers in South Africa?
.....
34. Why is the machine below not commonly used on farms in highland areas?
.....



35. Name the military wing of ECOWAS.

.....

For each of the questions **36 to 40**, answer **EITHER** the Christian **OR** Islamic question but not both. **No mark** will be awarded to a candidate who attempts both alternatives in a **particular number**.

36. **EITHER:** What is reconciliation?

.....

OR: What is reconciliation?

.....

37. **EITHER:** What sacrament was introduced by Jesus on Holy Thursday?

.....

OR: Name the prophet who received the Quran.

.....

38. **EITHER:** How do we call Gods given ability to do something well?

.....

OR: What does the greeting Assalam Alaikum mean?

.....

39. **EITHER:** Who led the Israelites to the Promised Land?

.....

OR: Give a reasons why Musa was chosen by Allah to lead his people.

.....

40. **EITHER:** In which part of the Bible are gospels found?

.....

OR: What name was given to the successors of Prophet Muhammad?

.....



SECTION B: 60 MARKS

Questions **41** to **55** carry four marks each.

41 (a) Name the **two** types of wastes in the environment.

(i).....

(ii).....

(b) State any **two** ways of managing wastes in the environment.

(i).....

(ii).....

42 (a) Name the company that was used by the British government to administer Uganda on their behalf.

.....

(b) Who formed the company you have mentioned in 42(a)

.....

(c) State any **two** reasons why the above company in 42 (a) ran bankrupt.

(i).....

(ii).....

43 (a) What name is given to a well gazetted area by the government to conserve wildlife.

.....

(b) State any **two** ways animals in gazette areas can be protected from extinction.

(i).....

(ii).....

(c) Mention **one** problem faced by animals in the wilderness.

.....



44 (a) What are social activities

.....

(b) Give any **two** examples of social activities in our community.

(i).....

(ii).....

(c) How do social activities unite people?

.....

45 (a) Name the group of people who founded Bunyoro Kitara Empire.

.....

(b) Mention any **two** economic contributions of the Chwezi people in Uganda.

(i).....

(ii).....

(c) Name the last dynasty to rule Bunyoro Kitara kingdom.

.....

46 (a) State any **two** factors that promote population growth in Uganda.

(i).....

(ii).....


(b) Mention any **two** factors that contribute to population distribution in an area.

(i).....

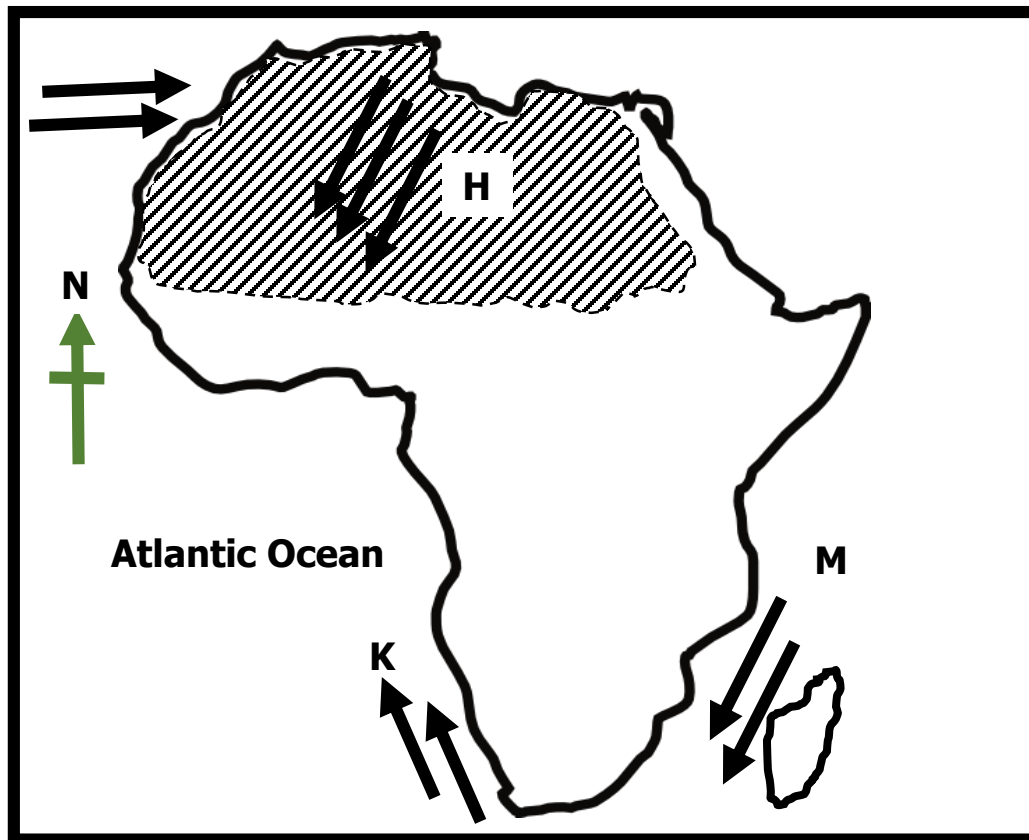
(ii).....



- 47 (a) In which country did the Berlin conference of 1884-1885 take place.
.....
- (b) What role did Chancellor Otto Von Bismarck play in the colonization of Africa?
.....
- (c) State any **two** ways Berlin Conference affected Africa.
- (i).....
- (ii).....
48. (a) What name is given to the structure at a weather station where delicate weather instruments are kept?
.....
- (b) Mention any **two** weather instruments kept in the above mentioned structure in 48(a).
- (i).....
- (ii).....
- (c) Why is the above mentioned structure in 48(a) made with Louvers?
.....
- 49 (a) State any **two** ways how Uganda was made a nation by the colonialists.
- (i).....
- (ii).....
- (b) Mention any **two** attributes of Uganda as a nation
- (i).....
- (ii).....



50. Study the sketch map of Africa below and use it to answer the questions that follow.



- (a) Name the ocean current marked **K** on the map above.
-
- (b) Give any **one** reason why prevailing winds marked **H** bring no rain to the Sahara Desert.
-
- (c) State any **one** reason why people who live in the shaded region build houses with flat roofs.
-
- (d) How do ocean currents marked **M** influence climate at the coast of Africa
-

For each of the questions **51** to **55**, answer **EITHER** the Christian **OR** Islamic question but not both. **No mark** will be awarded to a candidate who attempts both alternatives in a **particular number**.

51 (a) **EITHER:** State any **two** things Christians ask from God in the Lord's Prayer.

(i).....

(ii).....

(b) State any **two** ways through which God communicates with His people.

(i).....

(ii).....

OR: (a) Give any **two** ways how Muslims respect the Mosque.

(i).....

(ii).....

(b) State any **two** ways through which Allah communicates with His people.

(i).....

(ii).....

52 **EITHER** (a) Give any **two** Christian values.

(i).....

(ii).....

(b) State any **two** importance of Christian values to the community

(i).....

(ii).....

OR: (a) Write two punishments recommended by sharia law.

(i).....

(ii).....

(b) What did Prophet Muhammad(PBUH) teach about the following people:

(i) Children:

(ii) The sick:

53 **EITHER:**(a) Give any **two** reasons why Christians marry.



(i).....

(ii).....

(b) Give any **two** qualities Christians should consider before choosing a good marriage partner.

(i).....

(ii).....

OR: (a) Give any **two** reasons why Muslims marry.

(i).....

(ii).....

(b) Give any **two** qualities a Muslim should consider before choosing a good marriage partner.

(i).....

(ii).....

54 **EITHER:** (a) Give the meaning of the term “transfiguration” according to the Bible.

.....

.....

Turn Over

(b) Name the **two** servant of God who were seen with Jesus during transfiguration.

(i).....

(ii).....

(c) State any **one** significance of transfiguration.

.....

OR: Write the meaning of the following terms in Islam:

(a) Maskin:

(b) Hejira:

(c) Jihad:

(d) Miraj:

55 **BOTH:** (a) Mention any **two** contributions of the first missionaries in Uganda.

(i).....

(ii).....

(b) Why did missionaries set up worship places on hills?

.....

(c) State any **one** challenge faced by religious organizations in Uganda today.

.....



END

