



## P.4 BEGINNING OF TERM I EXAMINATION 2025

### SOCIAL STUDIES

*Time Allowed: 2 hours 15 minutes*

Pupil's Name: .....

School: .....

Class: ..... Stream: .....

District: ..... Date: .....

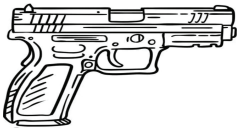
### SECTION A: 40 MARKS

1. Name any **one** activity carried out during school assemblies.  
\_\_\_\_\_
2. How is a cobbler important in our sub-county?  
\_\_\_\_\_
3. Mention the domestic animal that guards our home.  
\_\_\_\_\_
4. Draw any **one** means of road transport used by people in our sub-county in the space below.

5. Why do people in your division or sub-county work?  
\_\_\_\_\_
6. In which division or sub-county does your school belong?  
\_\_\_\_\_
7. Give **one** importance of water bodies to people in your division.  
\_\_\_\_\_
8. Give **one** way of controlling accidents at home.  
\_\_\_\_\_
9. State the use of wind to people in our community.  
\_\_\_\_\_
10. Write **one** item that a school-going child requires.  
\_\_\_\_\_
11. How can P.4 children maintain peace with one another in their classroom?  
\_\_\_\_\_

12. What is the source of the material used to make pots?
13. Write the important place where people get medical care services.
14. Name the group of people that uses a compass while doing their work of keeping peace and security.
15. Mention **one** cultural practice that is done by people in your sub-county.
16. Name **one** example of holidays that is celebrated in Uganda.
17. Give **one** way of helping the needy people in your sub-county.
18. How can the Hungry Caterpillar School children help to keep their school clean?
19. Write **one** tool that people in your division can use to manage rainy weather.
20. What is the use of a duster in your class?
21. What is a nuclear family?
22. Mention any **one** act that is done by children at school and it is not allowed.
23. Which legend tells the origin of the Baganda?
24. Name the social service providers for education in your division.
25. How can people become leaders in your division?
26. Write the largest tribe in Uganda.
27. In which season do farmers harvest crops?
28. Why do most people in your division use road transport?
29. Give the largest tribe in your sub-county.
30. Why do we need televisions at home?
31. How is drought dangerous to animals?

32. Name the school symbol that promotes equality among pupils.
- 
33. Name the river in Uganda that is used to generate hydro-electric power.
- 
34. State **one** problem faced by people while doing their work.
- 
35. Mention **one** recreation activity that children do at school.
- 
36. How do people benefit from forests?
- 
37. Mention any **one** element of a good map.
- 
38. At what time of the day do shadows appear shortest?
- 
39. State **one** role of children at home.
- 
40. How is the item below useful in your sub-county?




### SECTION B: 60 MARKS

41. a) Who is a leader?
- 
- b) What type of leader is a king or chief?
- 
- c) State **two** importance of leaders in your sub county/ division.
- i) \_\_\_\_\_
- ii) \_\_\_\_\_
42. a) Name any **two** examples of physical features apart from hills.
- i) \_\_\_\_\_
- ii) \_\_\_\_\_
- b) State **one** problem faced by people in hilly areas.
- i) \_\_\_\_\_
- c) Give **one** way of controlling soil erosion in hilly areas.
- 
43. a) Write **one** way people communicate with one another in your division.
- 
- b) Mention **one** traditional means of communication.
- 
- c) Why do we need phones in our community?
-


44. Study the table below and answer the given questions.




**A**



**B**



**C**




**D**

### KEY



lake



hens



cows



forest

a) How do people benefit from area marked **A**?

b) Give **one** product got from area marked **C**.

c) State **one** way carpenters benefit from area marked **D**.

d) Why should a P.4 child start project marked **B**?

45. Complete the table below correctly.

Crop	Product
sugarcane	_____
_____	ropes
tea	_____
_____	cassava flour

46. a) Mention **two** members found in an extended family but not in a nuclear family.

i) \_\_\_\_\_  
ii) \_\_\_\_\_

b) Write **two** roles of a father in a home.

i) \_\_\_\_\_  
ii) \_\_\_\_\_

47. a) State **one** way people get food in your sub-county.

b) Why do some people fail to get their basic needs?

c) Name **one** place where people can get their basic needs from.

48. a) Write down **two** rights of children.

i) \_\_\_\_\_  
ii) \_\_\_\_\_

b) How do children cause abuse of their rights?

c) What should a P.3 child do to control child abuse?

49. a) Write BOU in full.

b) Why do people keep their money in the bank?

c) Give **two** importance of banks to people in your division.

i) \_\_\_\_\_  
ii) \_\_\_\_\_

50. a) What title is given to a person who heads a chiefdom?

b) Write the languages spoken by the following tribes:

i) Iteso. \_\_\_\_\_  
ii) Bakiga. \_\_\_\_\_

c) Name any **one** kingdom you know.

51. a) Mention **two** problems children face while going to school.

i) \_\_\_\_\_  
ii) \_\_\_\_\_

b) How is a school important in our division?

c) Why do some children in your area fail to go to school?

52. a) What are cardinal points?

---

---

b) Which compass point is directly opposite the west?

c) How is a compass important to pilots?

---

d) Name any **one** semi-cardinal point of a compass.

---

53. a) Mention **one** group of people that cause insecurity.

b) State **two** dangers of insecurity.

i) \_\_\_\_\_

ii) \_\_\_\_\_


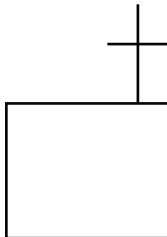

c) Where are criminals kept after arresting them?

---

54. a) How is a map different from a picture?

---

b) Name the following map symbols.

55. a) Mention **one** dangerous animal found in lakes and rivers.

b) Name the commonest method of preserving fish.

c) Write **one** problem faced by the fishing industry.

d) Name the commonest fish got from swamps.

---

**END**