



NANSANA MUNICIPAL COUNCIL

PRIMARY LEAVING MOCK EXAMINATIONS 2025

SOCIAL STUDIES WITH RELIGIOUS EDUCATION

Time Allowed: 2 hours minutes

Random No.						Personal No.		

Candidate's Name:

Candidate's Signature:

District ID No.

--	--	--	--

Read the following instruction carefully:

1. Do not write your **school** or **district** name anywhere on this paper.
2. This paper has **two** sections: **A** and **B**. Section **A** has **40** questions and section **B** has **15** questions. The paper has **16 printed pages**.
3. Answer **all** the questions. **All** the answers for both sections **A** and **B** must be shown in the spaces provided.
4. **All** the answer **must** be written using a **blue** or **black** ball point pen or ink. Any work written in pencil other than drawings in pencil will **not** be marked.
5. Unnecessary **changes** in your work and handwriting that cannot be read easily may lead to **loss of marks**.
6. Do not fill anything in the table indicated: **"FOR EXAMINERS' USE ONLY"** and boxes inside the question paper.

FOR EXAMINERS' USE ONLY		
QN.NO.	MARKS	EXR'S NO.
1 - 10		
11 - 20		
21 - 30		
31 - 40		
41 - 43		
44 - 46		
47 - 49		
50 - 55		
53 - 55		
TOTAL		

Turn Over

SECTION A: 40 MARKS

Question 1 to 40 carry one mark each.

1. Mention any one tool that helps in maintaining order in a school.

2. How does an umbrella help school children in managing rainy weather?

3. Mention any one example of a river that flows into Lake Victoria.

4. Identify any one proper way of acquiring land in Uganda

5. Name the discovery that enabled Early man to live a settled life.

6. Give any one reason why some people fence their homes.

7. Which type of budget promotes a saving culture in a family?

8. Give a reason the government of Uganda is constructing Industrial parks in different parts of Uganda?

9. Write down any one way the East African Community promotes development among its member states.

10. How did the industrial revolution in Europe lead to the colonization of Africa?

11. State any one way people benefit from the taxes they pay.

12. Why is it good for people in your community to participate in social activities?

13. How does tree planting help to improve on the climate of an area.

14. Mention one mineral resource that was discovered in South Africa as a result of the Great Trek.

15. Name the main way people of long ago got goods they could not produce.

16. Name the major cash crop grown in Kalangala District.

17. How can landlocked countries in Africa reduce on the challenges they face as a result of their geographical location?

18. State the reason why the windward side of a mountain receives plenty of rainfall.

19. Mention one way Savanna grasslands help in conserving wild animals?

20. Name any one coastal country that neighbours Uganda.

21. How can a citizen participate in promoting democracy in his/her country?

22. Give one reason why newspapers are not commonly used in rural areas of East Africa as means of communication?

23. State any one way the United Nations High Commissioner for Refugees (UNHCR) promotes the welfare of refugees.

24. Why are shores of lakes good for crop growing?

25. Give one reason why tourism is regarded as an export.

26. Mention any one reason why the Bantu settled in their present day areas.

27. Identify one way children can protect themselves from being abused?

28. Mention one way formal education helped in the independence struggle in Africa.

29. How are recreational activities important in a school?

30. Give any one result of improper disposal of wastes.

31. How was the formation of Lake Kyoga different from that of Lake Albert?

32. Identify any one reason why many mineral resources in Africa have not been fully exploited.

33. How does the feature represented by the symbol below promote the craft industry?



34. Give a reason why the electoral commission carries out civic education about elections before the voting day?

35. Name the Christian organization that sent Alexander Mackay to Uganda.

For each of the questions **36 to 40**, answer **EITHER** the Christian **OR** Islamic questions but **not** both. **No marks** will be awarded to a candidate who attempts both alternatives in **a particular number**.

36. EITHER:

Name the person who helped Jesus Christ to carry the cross.

OR: Who was the foster mother of Prophet Muhammad?

37. EITHER:

Why is it good to ask for forgiveness after sinning?

OR: Why is it good to ask for forgiveness after sinning?

38. EITHER:

Mention any one role God gave to Adam in the Garden of Eden.

OR: Mention any one role Allah gave to Adam in the Garden of Eden.

39. EITHER:

How did Jesus Christ live an exemplary life?

OR:

How did Prophet Muhammad live an exemplary life?

40. **EITHER:**

Write down any one Epistle in the Bible

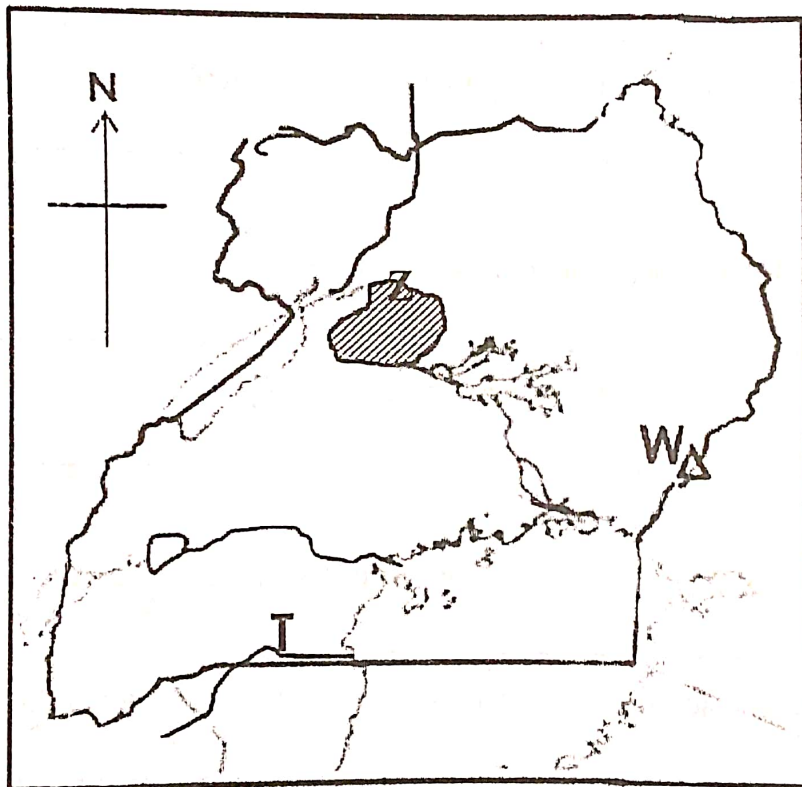
OR:

Write down any one Sulat in the Quran

SECTION: B 60 marks each.

Questions 41 to 55 carry four marks each.

Study the sketch map of Uganda below and use it to answer question that follow.



41a) Mention the type of coffee grown on the slopes of Mountain marked with letter W on the map above.

b) Why does river marked T flow into Lake Victoria?

c) Give one reason why the shaded area marked **Z** is sparsely populated?

d) State one way in which the shaded area marked **Z** is economically important to Uganda.

42a) Name the ethnic group that migrated from Bahr- el- Ghazal to East Africa.

b) Give any two reasons why the ethnic group in (a) above migrated to East Africa.

i) _____

ii) _____

c) Identify any one positive effect of the migration of Ethnic groups to East Africa

43a) Name the physical feature that attracted most European explorers to come to East Africa?

b) Mention any two ways the work of European explorers promoted the colonization of Africa.

i) _____

ii) _____

c) Identify one problem explorers faced while in Africa.

44a) Mention any two human activities that can increase the problem of climatic change.

i) _____

ii) _____

b) Suggest two activities that can be carried out in a school to control climatic change.

i) _____

ii) _____

c) How did slave trade affect the economic development of East Africa?

45a) State any two reason why some households in Uganda still have very low income.

i) _____

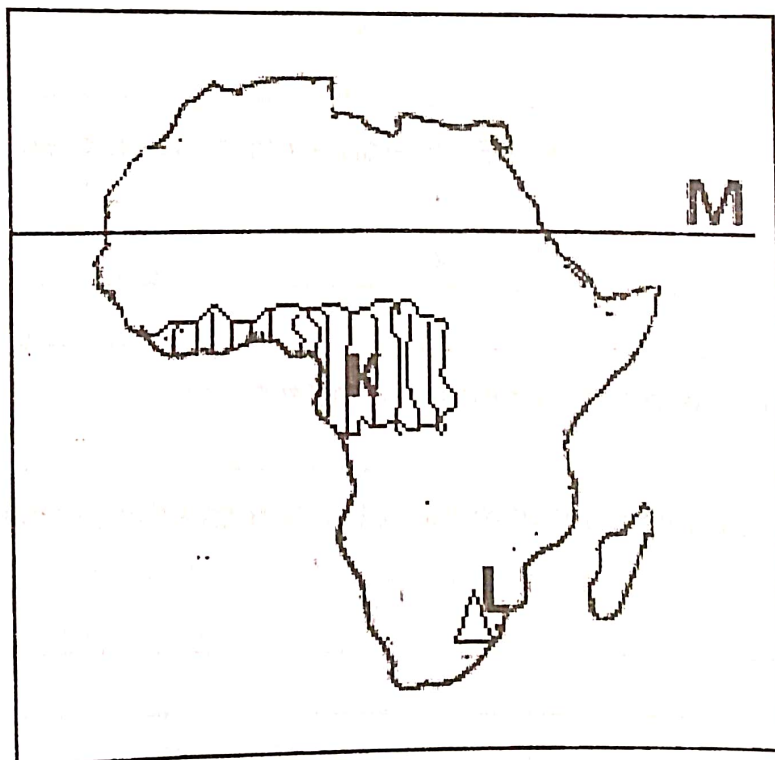
ii) _____

b) Suggest any two ways households can use to improve on their income.

i) _____

ii) _____

46. Study the sketch map of Africa below and use it to answer questions that follow.



a) Name the major line of latitude marked M.

b) Mention the climatic zone in the shaded area marked K.

c) Describe the climatic zone mentioned in 43(b) above

d) How was the mountain marked C formed?

47a) Mention any one social service centre in your community that provides security.

b) Suggest any two ways of promoting security in the community.

i) _____

ii) _____

c) Identify any one cause of insecurity in the community.

48a) Name the British official who extended IBEACo activities to Uganda.

b) Write down any two things that made IBEACo to run bankrupt.

i) _____

ii) _____

c) Give the reason why the Church Missionary Society (CMS) was interested in supporting IBEACo to continue working in Uganda.

49a) Name the organ that runs the daily activities of the African Union. .

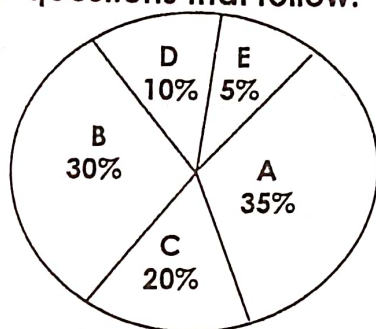
b) State any two challenges the African Union faces today.

i) _____

ii) _____

c) Identify any one way the African Union has promoted peace among its member states.

50 The pie chart below shows population of the East African countries. Use it to answer the questions that follow.



a) Which country in East Africa is represented by population sector?

A _____

B _____

b) Compare the population of country C and that of D.

c) Give one advantage country A has over country E in terms of their population.

For each of questions 51 to 55, answer **EITHER** the Christian **OR** the Islamic questions but **not** both. No marks will be awarded to a candidate who attempts both alternatives in a **particular** number.

51. EITHER: a) What is the first book in the Bible?

b) How is the Bible different from other books?

c) Name two kings in Israel who wrote books in the Bible.

i) _____

ii) _____

OR: a) What is the first Surat in the Qur'an?

b) How is the Qur'an different from other books?

c) Mention any two people who received Holy books in Islam.

i) _____

ii) _____

52. EITHER: a) Who was the mother of Jesus Christ?

b) How did John the Baptist prepare for the coming of Jesus Christ?

c) Mention any two ways Christians today benefit from the birth of Jesus Christ.

i) _____

ii) _____

OR: a) How was Amina related to Prophet Muhammad?

b) Mention any one way the Caliphs helped in the spread of Islam after the death of Prophet Muhammad.

c) State any two ways Muslims today benefit from the works of Prophet Muhammad.

i) _____

ii) _____

53. FOR BOTH

a) How is death useful to a faithful believer?

b) Give any two ways believers should prepare for life after death.

i) _____

ii) _____

c) Give a reason why people fear death?

54. Either: "Each of you should give what you have decided in your heart to give" (2 Corinthians 9:7)

(a) Give **one** reason why it is important to give willingly.

(b) State any **two** groups of people who need to be given.

(i) _____

(ii) _____

(c) What lesson do you learn from the above quotation?

OR: "Those who spend their wealth in the way of Allah and do not follow up their benevolence and causing hurt, will find reward with their Lord"

(a) Who said the above words.

(b) Give **two** reasons why we should offer in the mosque.

(i) _____

(ii) _____

(c) State any **one** lesson you learn from the above quotation.

55. EITHER:

Match the place in List A with the correct event in List B.

List A	List B
Golgotha	It is where Jesus prayed from on the night of his betrayal and arrest.
Gethsemane	It is the place where Jesus was crucified.
Cana	It is where Moses received the Ten commandments.
Mt. Sinai	It is where Jesus performed His first miracle.

i) Golgotha_____

ii) Gethsemane_____

iii) Cana_____

iv) Mt. Sinai _____

OR:

Match List A with List B correctly using a pencil

List A	List B
Saum	It involves giving of alms
Salat	It is a holy journey to Mecca
Zakat	It is fasting in Islam
Shahadah	It means praying five times a day

i) Saum_____

ii) Salat_____

iii) Zakat_____

iv) Shahadah _____

END