



PACE EDUCATION SERVICES
PRE PREPARATION EXAMINATION SET II (MARS)
2025

SOCIAL STUDIES AND RELIGIOUS EDUCATION

Time Allowed: 2 hours 15 minutes

Random NO.					Personal No.		

Candidate's Name:

Candidate's Signature:

School EMIS No.

--	--	--	--	--	--

Read the following instruction carefully:

1. Do not write your **school** or **district name** anywhere on this paper.
2. This paper has **two** sections: **A** and **B**. Section **A** has **40** questions and section **B** has **16** questions. The paper has **16 printed pages** altogether.
3. Answer **all** the questions. **All** answers to both sections **A** and **B** must be written in the spaces provided.
4. All answers **must** be written using a **blue** or **black** ball point pen or ink. Any work written in pencil will **not** be marked.
5. Unnecessary **changes** in your work and handwriting that cannot be read easily may lead to **loss of marks**.
6. Do not fill anything in the table indicated: **"FOR EXAMINERS' USE ONLY"** and boxes inside the question paper.

FOR EXAMINERS' USE ONLY		
QN.NO.	MARKS	EXR'S NO.
1 - 10		
11 - 20		
21 - 30		
31 - 40		
41 - 43		
44 - 46		
47 - 49		
50 - 52		
53 - 55		
TOTAL		

SECTION A: 40 MARKS

Answer all questions in this section
Questions **1** to **40** carry one mark each.

1. Write any **one** example of natural vegetation.

.....

2. Mention the country in Africa where apartheid was practiced.

.....

3. Give any **one** way how absenteeism of children negatively affect their academic progress in school

.....

4. In which **one** way does poor waste management effect people's living standards in urban areas?

.....

5. State any **one** advantage of a polygamous marriage

.....

6. With the help of a pencil, draw a picture of a traditional hut in the space below.

7. Mention **one** factor that favours arable farming on the slopes of Mountain Elgon

.....

8. Name the largest Bantu tribe found in Tanzania

.....

9. Give **one** way children benefit from the learning/ teaching aids displayed in their classrooms.

.....

10. Mention any **one** reason why the government of Uganda banned corporal punishments in schools and homes.

.....

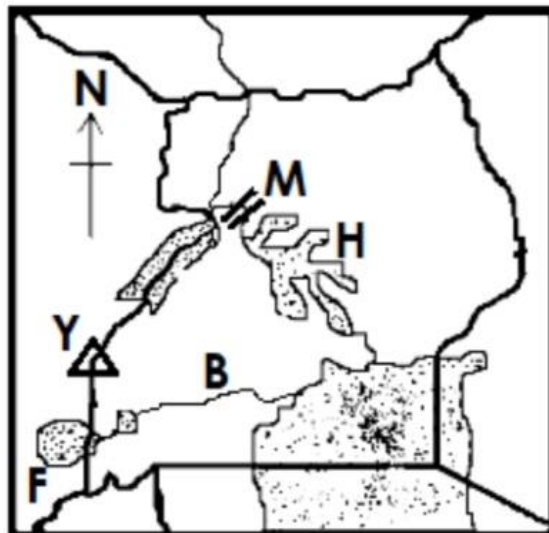
11. State **one** role played by the Special Revenue Protection Services (SRPS) in fighting tax evasion in Uganda.

.....

12. Mention **one** measure the government should take in order to curb cattle rustling among pastoral tribes.

.....

The diagram below shows the map of Uganda. Study it and answer questions **13** and **14**



13. Name the river marked with letter **B**

.....

14. Compare lake marked **H** with mountain **Y** in terms of their mode of formation.

.....

15. Women emancipation refers to giving women freedom and equal rights in society. state **one** way women benefit from this policy.

.....

16. Mention the nationalist who helped to merge Tanganyika and Zanzibar to form the Republic of Tanzania in 1964.

.....

17. State **one** way in which acidic rainfall affects food production in an area.

.....

18. Mention any **one** factor that makes Rift Valley lakes salty

.....


19. How does the District Director of Health Service (DDHS) assume office?

.....

20. State **one** reason why most countries in Africa have failed to practice true democracy.

.....

21. State any **one** way in which the tool drawn below promotes order in an a school.



.....

22. What was the major item of trade obtained from West Africa during the Trans-Saharan trade?

.....

23. Name the process that led to the formation of Lake Tana in Ethiopia.

.....

24. Give **one** reason why head teachers should organize Parents-Teachers' Association (PTA) meetings regularly.

.....

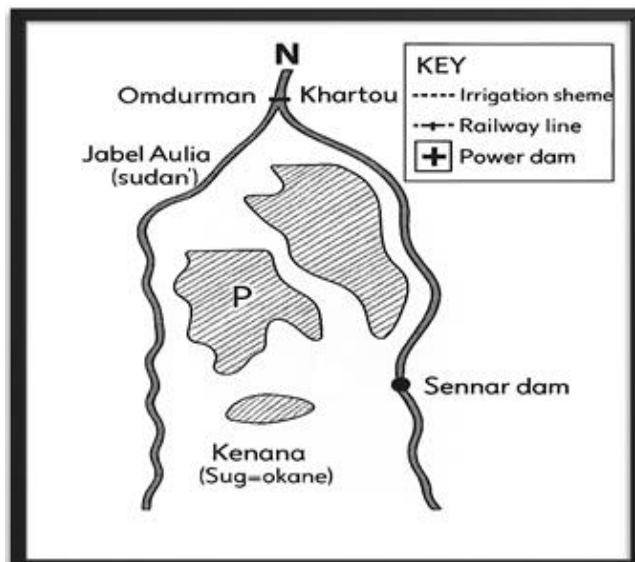
25. State **one** role played by the United Nations Security Council in promoting peace in the world.

.....

26. In which **one** way has the use of family planning helped to control rapid population growth in East African countries?

.....

The diagram below shows the Gezira irrigation project, study and use it to answer questions **27** and **28**.



27. Name the extension of the scheme marked with letter P

.....

28. State any **one** factor that led to the establishment of the extension mentioned in (27) above

.....

29. Mention any **one** reason why the government of Uganda banned corporal punishments in schools.

.....

30. State **one** reason why some Ugandan elites prefer working abroad especially after completing their studies.

.....

31. State **one** duty of the Prime Minister in national development

.....

32. Which line of longitude helps to determine days and dates?

.....

33. Give **one** way citizens benefit from civic education conducted before an election is held.

.....

34. How did Vasco da Gama benefit from finding the sea route to India?

.....

35. Write any **one** example of a social amenity in the community

.....

36. Mention **one** type of weather that hinders navigation across rivers and lakes.

.....

For each of the questions **36** to **40**, answer Either the Christian OR Islamic questions but not both. No marks will be awarded to a candidate who attempts both alternatives in a particular number.

37. Either Give any **one** attribute of God according to Christianity.

.....

Or. Give any **one** attribute of Allah according to Islamic teaching.

.....

38. Either Write **one** way religious symbols helps to boost a Christian's faith

.....

Or. Write **one** way how religious symbols can help to boost a Muslim's faith

.....

39. Either : State any **one** social evil of sexual deviation in the society today.

.....

Or. State any **one** social evil of sexual deviation in the society today.

.....

40. Either : State the important event that Christians remember on Assumption Day .

.....

Or. State the important event that Muslims celebrate on Eid al-Adha


.....

SECTION B: 60 MARKS

Answer all questions in this section

Questions **41** to **55** carry four marks each

41. The diagram below shows a group of people cutting down trees on a large scale. Study it and answer the questions that follow.



(a) Suggest any **two** likely outcomes of the above practice to the natural environment.

(i).....

(ii).....

(b) State **two** measures people can put in place to reduce tree cutting in their localities

(i).....

(ii).....

42. (a) State any **two** reasons why it is necessary for every citizen of Uganda to have a valid National Identity card

(i).....

(ii).....

(b) Mention the body in Uganda responsible for the renewal of National Identity cards.

.....

(c) State **one** challenge the above body faces during registration exercise.

.....

43. (a) Mention any **two** inland ports found on Lake Victoria in Tanzania.

(i).....

(ii).....

(b) State **one** way the inland ports mentioned above benefit the people of East Africa

.....

(c) Write **one** economic activity carried out at a seaport

.....

44. (a) Mention the regional bloc that unites the largest number of African countries

.....

(b) Besides the above economic bloc, Name any other **two** economic groupings found in Africa.

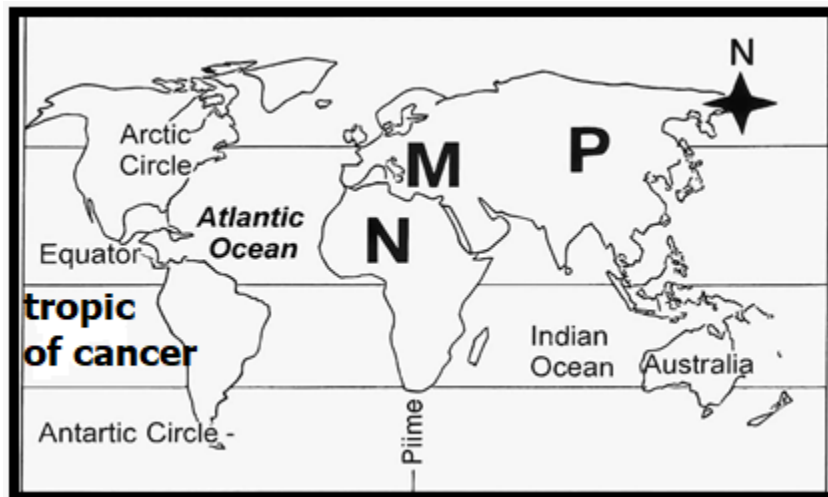
(i).....

(ii).....

(c) State any **one** reason why African regional blocs have failed to fulfill their objectives

.....

45. Study the world map below and use it to answer questions that follow.



(a) Name the continent marked **P** on the map above.

.....

(b) State any **two** factors that kept the interior of continent N unknown to most Europeans.

(i).....

(ii).....

(c) Write **one** reason why countries from continent M struggled to acquire territories in continent **N**.

.....

46. (a) Name the meeting organized every two years by the Commonwealth Heads of State to discuss matters of mutual interest.

.....

(b) State any **two** ways Uganda benefited from hosting the above Commonwealth meeting in 2007

(i).....

(ii).....

(c) Mention **one** symbol of the Commonwealth of Nations.

.....

47. (a) State any **two** advantages a tarmac road has over a murrum road in the transport sector of a country.

(i).....

(ii).....

(b) In which does a well developed transport network promote tourism in a country like Uganda?

.....

(c) Mention any **one** reason why the completion of the East African Crude Oil Pipeline (EACOP) has delayed

.....

48. (a) State the meaning of the term **infant mortality rate**.

.....

.....

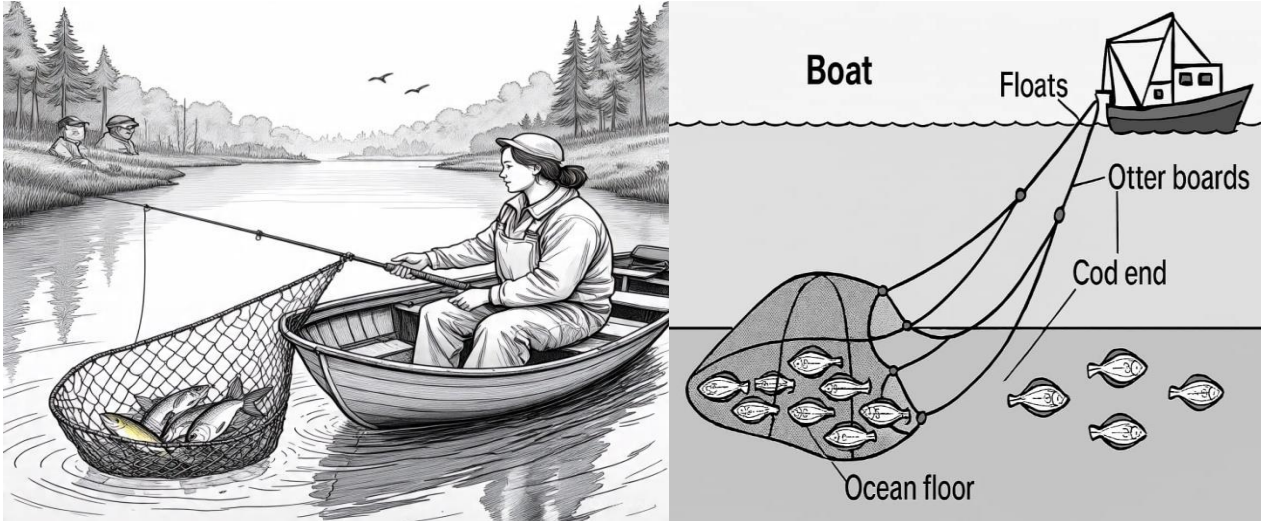
b) Suggest any **two** causes of high infant and maternal mortality in Africa today

(i).....

(ii).....

- c) Write **one** possible measure government can undertake to reduce infant mortality rates.
-

49. The diagram below shows one of the modern methods used to catch fish from deep waters. Study it and answer the questions that follow



- (a) Name the modern method of catching fish shown in the diagram above.
-

- b) Mention any other **one** modern method of catching fish apart from the one mentioned above
-

- c) State any **one** danger of the water hyacinth and water weeds to the fishing industry in Uganda
-

- d) Under which Ministry does Fishing and Agriculture belong?
-

50. Kibwona ward in Masindi Municipality has a population density of approximately 380 persons / km² covering an area of land of 85 km². Determine the number of people in Kibwona ward.

b) State **one** way how each of the factors below influence population distribution of an area.

(i) Nature of the soil

.....

(ii) Government Policy

.....

c) Give any **one** reason why the government of Uganda carries out population census every after ten years.

.....

For each of the questions **51** to **55**, answer EITHER Christian OR Islamic questions but not both. No mark will be awarded to a candidate who attempts both alternatives in a particular number.

51. Either

a) State any **two** values of repentance to a faithful Christian.

(i).....

(ii).....

b) Mention any **two** examples of sins children commonly commit at school.

(i).....

(ii).....

Or (a) State any **two** values of repentance to a faithful Muslim.

(i).....

(ii).....

b) Mention any **two** examples of sins children commonly commit at school.

(i).....

(ii).....

52. (a) State the meaning of the phrase "**Transfiguration of Jesus Christ**".

.....

(b) Mention the **two** prophets who witnessed the transfiguration of Jesus Christ on mountain Tabor

(i).....

(ii).....

(c) State **one** significance of the transfiguration of Jesus Christ to Christians.

.....

Or . State the meaning of the phrase **Al-Mi'raj**.

.....

.....

(b). Mention the **two** prophets whom prophet Muhammad PBUH met during Al-Miraj

(i).....

(ii).....

(c) State **one** significance of the Al- Miraj to a modern Muslim. .

.....

53. Either: "And when you pray, do not be like the hypocrites, for they love to pray standing in the synagogues and on the street corners to be seen by others. Truly I tell you, they have received their reward in full." Matthew 6:5 (NIV) :

(a) Give any **two** reasons why it was necessary for Jesus Christ to teach his disciples how to pray

(i).....

(ii).....

(b) Mention any **one** request made in the prayer Jesus taught His disciples

.....

c) State **one** reason why people should pray daily

.....

Or. "Whoever prays like us and faces our Qibla and eats our slaughtered animals is a Muslim and is under Allah's and His Apostle's protection." Sahih al-Bukhari 39.

(a) Give any **two** reasons why it is necessary for every Muslim to learn how to pray

(i).....

(ii).....

(b) Mention any **one** of the daily obligatory prayers in Islam.

.....

(c) State **one** reason why people should pray daily

.....

54. Either

a) Mention any **two** examples of injustice acts in the church today

(i).....

(ii).....

b) State any **two** ways Christians can show acts of fairness in the society today.

(i).....

(ii).....

(c) Write any **one** form of suffering young children go through.

.....

Or. (a) Mention any **two** examples of injustice acts in the church today

(i).....

(ii).....

(b) State any **two** ways Christians can show acts of fairness in the society today.

(i).....

(ii).....

(c) Write any **one** form of suffering young children go through.

.....

55. FOR BOTH

a) Suggest any **two** causes of failure among Christians or Muslims

(i).....

(ii).....

b) State **one** way Christians or Muslims can overcome failure in their daily life.

.....

.....

- c) Mention **one** consequence of Adam's disobedience to the modern man.

.....

.....

PACE EDUCATION SERVICES
wishes you success