



THE SPECTRUM EXAMINATIONS HUB

TEACHERS' INTERVIEW

SUBJECT: SOCIAL STUDIES WITH RELIGIOUS EDUCATION

SECTION: UPPER PRIMARY

Time: 2 hours

DATE _____

TEACHER'S CODE _____ **TEL.** _____

FOR EXAMINER'S USE ONLY

SECTION	SCORE	HEAD OF DEPT'S COMMENT
A		
B		
TOTAL		

Read the following instructions carefully:

1. The paper is made up of section A and B.
2. Section A has 40 short answer questions (40 marks).
3. Section B has 15 questions (60 answers).
4. Answer ALL questions. All answers to both section **A** and **B** must be written in the spaces provided.
5. All answers must be written in blue ink.
6. Any handwriting that cannot easily be read will lead to loss of marks.
7. Unnecessary alteration of work may lead to loss of marks.
8. Show all the necessary sides work in pencil.

SECTION A: (40 marks)

1. What is the compass direction of Uganda from Rwanda?
.....
2. Mention the stage of a river where ox-bow lakes are common.
.....
3. What time will it be in Uganda which lies in the East African standard Time Zone if it is 2:00pm in Ghana.
.....

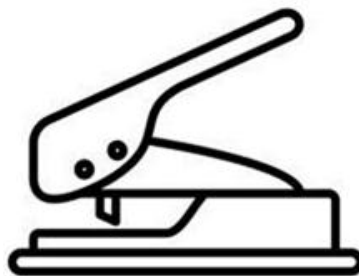


4. Which world organization uses the above logo?
.....
5. What does part marked **R** on the above logo signify?
.....
6. State the meaning of the term “military coup”?
.....
7. Why is agricultural mechanization almost impossible in Bundibugyo?
.....
8. State the reason why West was called the white man’s grave by Europeans.
.....

9. Give any one way in which archaeological sites promote economic development in East Africa.
.....
10. State the difference between immigration and emigration.
.....
.....
11. How did Ruaha National park become the largest game park in East Africa?
.....
12. Under which arm of government are all the security organs in Uganda?
.....
13. Give the reason why Arabica coffee is mainly grown on the slopes of mountain Elgon and not in central Uganda.
.....
14. What is nationalism?
.....
15. What role was played by Major Sydney Small in Uganda on 9th October 1962 in Uganda?
.....
16. Name the largest man-made lake in Africa and the world at large.
.....
17. Name the British commissioner who exiled Omukama Kabalega and Kabaka Mwanga to the Seychelles island.
.....

18. Suggest any one type of tax paid by all civil servants in Uganda.
.....
19. Why do places in the rain shadow receive little or no rain?
.....
20. What role did political parties play towards the independence of African states?
.....
21. Give a reason why there are many mountain gorillas in Bwindi and Mgahinga national parks.
.....
22. Who is a citizen by naturalisation?
.....
23. Name the prison where Nelson Mandela was jailed for 27 years for opposing apartheid in South Africa.
.....
24. Name the ethnic group in Uganda that migrated from the Horn of Africa?
.....

Use the diagram below to answer questions 25 and 26.



25. Name the tool shown in the diagram above.
.....

26. State the importance the above tool to teachers and learners.
.....
27. Name the country in the Horn of Africa that belongs to both the northern and southern hemispheres.
.....
28. State the effect of phototropism on trees in tropical rain forests.
.....
29. How did the people of East Africa benefit from their struggle against foreign rulers?
.....
30. State one way missionaries contributed to the colonization of Africa.
.....
31. Mention the reason why the Suez Canal was constructed.
.....
32. Which aspect of climate that determines human settlement?
.....
33. State any one problem faced by African nationalists during the struggle for independence.
.....
34. Which stage of the stone age period is also known **Paleolithic** period?
.....
35. Write UNHCR in full.
.....

For questions 36 – 40 answer either Christian or Islam but not both.

36. **Either:** How did Jesus show concern for other people?

.....

Or: How did prophet Muhammad show concern for other people?

.....

37. **Either:** Why was Jesus Christ circumcised yet he was not a Muslim?

.....

Or: Give one reason why Muslims circumcise.

.....

38. **Either:** What was the work of Mary the mother of Jesus Christ?

.....

Or: What was the work of Hadijah the first wife of Prophet Mohammad?

.....

39. **Either:** Name the prophet who preached "true worship and trust".

.....

Or: Name the prophet who received the book of Injir.

.....

40. **Either:** When Jesus was arrested by the enemies, he did not try to revenge. What lesson can we learn from Him?

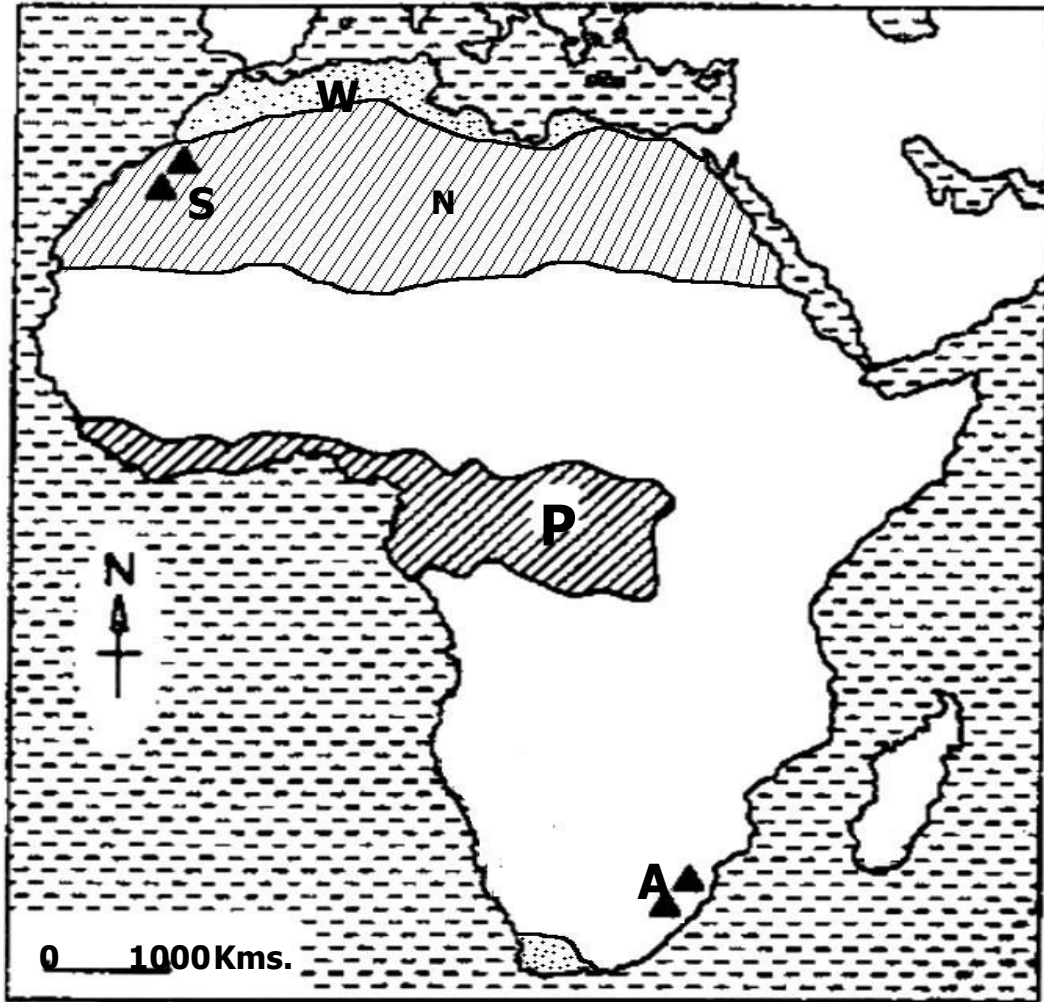
.....

Or: State any one situation which can lead a Muslim to miss a prayer (salat).

.....

SECTION B

41. Study the map below and answer questions about it.



- (a) Name the process that led to the formation of the mountain range marked **S** on the map.

.....

- (b) Which trade organisation was carried out between region marked **N** and West Africa.

.....

- (c) What makes road transport difficult in region marked **P** on the map?

.....

(c) Use letter **F** to show the strait of Gibralter on the map above.

.....

42. (a) What does the term "Great Trek" mean?

.....

(b) Mention any two causes of the Great Trek.

(i).....

(ii).....

(d) Give any one way the Great Trek economically benefitted the people of South Africa.

.....

43. (a) Give any two causes of the Maji Maji rebellion between 1905 and 1907.

(i)

(ii)

(b) Give any two reasons why the Africans who staged the Maji Maji rebellion were defeated.

(i)

(ii)

44. (a) State the difference between the solstice and equinox.

.....

.....

(b) Write the dates when the following occur;

(i) Summer solstice

.....

(ii) Winter solstice

.....

45. (a) What was the “assimilation policy” as used by the French colonialists in West Africa?

.....

.....

(b) State any one reason why the French colonialists used the Assimilation policy as a system of administration in West Africa.

.....

.....

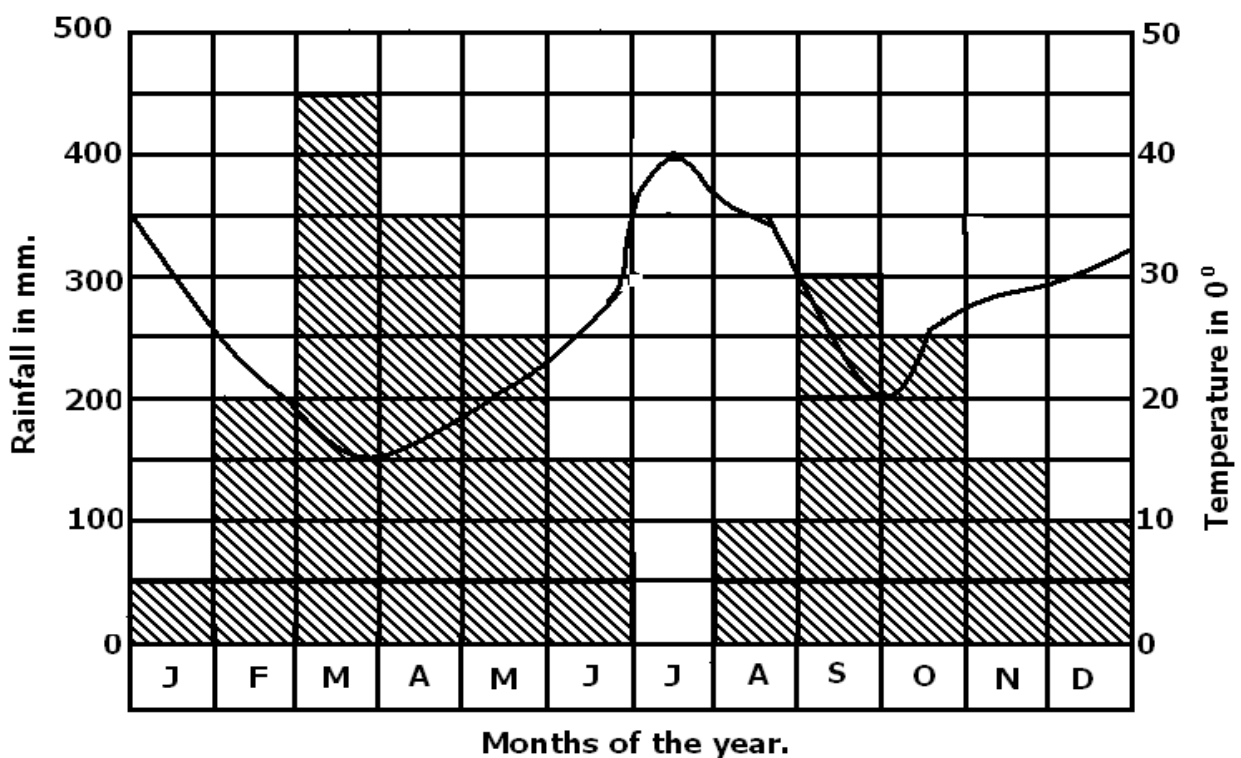
(c) Give the main reason why the assimilation policy failed in west Africa.

.....

(d) Which alternative system was introduced in West Africa when assimilation method failed?

.....

46. **Study the graph and use it to answer question 46.**



(a) Which month received the highest rainfall?

.....

(b) How much rainfall was received in April?

.....

(c) What type of climate is experienced in areas recorded on the graph?

.....

(d) Give one economic activity suitable for people living under the above climatic conditions.

.....

47.(a) Name the first hospital to be built by missionaries in Uganda.

.....

(b) In which way did Alidina Visram who was an Indian trader, contribute towards the building of the hospital named in 47 (a) above”?

.....


(c) Why is Robert Ashe as a missionary remembered in Uganda?

.....

(e) Name the protestant (CMS) missionary who arrived in East Africa in 1844.

.....

48. Study the means of transport below and answer the questions below.



- (a) State any one way in which the means of transport in picture (1) has contributed to insecurity in Uganda.

.....
.....

- (b) How is part labeled **T** of picture (1) above related to the Firestone company in Liberia?

.....
.....

- (c) Why is the means of transport in picture (2) not widely used in Uganda yet it is cheap?

.....

- (d) The means of transport in picture (2) moves on railway lines. Name the group of foreigners who built the first rail line in East Africa.

.....

49. (a) Give any two types of communications used in Uganda.
- (i)
- (ii)
- (b) How are radio stations and news papers important in the development of a country?
- (i)
- (ii)
50. (a) Mention the two agreements that were signed between the British and the Germans during the partition of Africa.
- (i)
- (ii)
- (b) Give any two social effects of the partition of East Africa.
- (i)
- (ii)

FOR QUESTIONS 51 -55 ANSWER EITHER CHRISTIANITY OF MOSLEM BUT NOT BOTH.

51. **Either:**

- (a) Why did God create Adam?

.....

- (b) How did Adam disobey God?

.....

- (c) Give any one reason why God loved Adam more than other creatures.

.....

(d) What was the immediate punishment God gave Adam and Eve when they disobeyed Him?

.....

Or:

(a) Why did Allah create Prophet Adam?

.....

(b) How did Prophet Adam disobey Allah?

.....

(c) Give one reason why Allah loved Prophet Adam more than other creatures.

.....

(d) What was the immediate punishment Allah gave to prophet Adam and Hawa when they sinned against Him?

.....

51. Either:

(a) What is the age of consent for marriage in Uganda?

.....

(b) Mention any two symbols used in a religious marriage.

(i)

(ii)

(c) Write down any one quality of a woman suitable for marriage.

.....

Or:

(a) What is the age of consent for a Islamic marriage in Uganda?

.....

(b) Mention any two symbols used in a religious marriage.

(i)

(ii)

(c) Write down two qualities of a woman suitable for marriage.

.....

52. **Either:**

(a) What was Abraham's original homeland?

.....

(b) What was the name of Abraham's son whom he had accepted to offer as a sacrifice to God?

.....

(c) Mention any two ways in which Abraham demonstrated his faith.

(i)

(ii)

Or:

(a) What was prophet Ibrahim's original homeland?

.....

(b) What was the name of prophet Ibrahim's son whom he had accepted to sacrifice to Allah?

.....

(c) Mention any two ways in which prophet Ibrahim demonstrated his faith in Allah.

(i)

(ii)

54. Either:

(a) What do you understand by the term sin?

.....

(b) Mention any one way through which a Christian commits sin.

.....

(c) Mention any two types of sin according to Christianity.

(i)

(ii)

Or:

(a) What is sinning according to Islam?

.....

(b) Mention any one way a Muslim commits sin.

.....

(c) Mention any two types of sin according to Islam.

(i)

(ii)

55. Either:

(a) Write down any two good practices we learn from other Christians.

(i)

(ii)

(b) Mention any two importance of performing a pilgrimage to
Namugongo Martyrs' Shrine.

(i)

(ii)

Or:

(a) Write down any two good practices we learn from other Muslims.

(i)

(ii)

(b) Mention any two importance of Hijja to a Muslim.

(i)

(ii)

END