



SUREKEY EDUCATION SERVICES
PRIMARY TWO PROMOTIONAL EXAMINATION 2025
LITERACY ONE (A)

My name is:

My School is:

SECTION A

1. Name the body part used for writing.

2. State **one** use of food in the body.

3. Mention any **one** living thing in the environment.

4. Why do people wash fruits before eating them?

5. How many legs does a spider have?

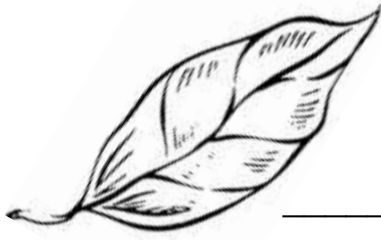
6. Mention **one** area at home that should be kept clean.

7. Name **one** part of a plant found in soil.

8. How does a bee move?

9. Name **one** basic need of a child.

10. Name the part of plant drawn below.



11. Underline **one** importance of a balanced diet.

Sleeping well, body growth, good health

12. Which element of weather helps us to dry our clothes?

13. Name **one** example of accident children while at school

14. Write **one** item people get from sugarcane plants.

15. In which season do farmers sow their seeds?

16. To which class of food is the food item below




17. Name the disease spread by a mosquito.

18. Which domestic animal protects itself when it barks?

19. Name the first aid tool below



20 Identify the type of weather shown below.



21. Why is a cow called a domestic animal?

22. Write **one** use of leaves to people.

23. Write down **one** characteristic of insects.

24. Tick any **one** cause of accidents in our community.

poor housing

☐

sleeping

☐

drinking water

☐

25. Mention **one** use of water to a P.2 child.

26. On which main part of an insect are the eyes found?

27. Draw and name any **one** source of food




28. Write **one** role of the mother at home?

29. In which units can milk be measured?

30. Name **one** item we use to clean our teeth?

SECTION B (70marks)

31. (a) Identify these ways of caring for body parts.



(b) Draw and name **one** item used for cleaning our bodies.



32. (a) Give **two** products people get from animal skins.

(i) _____ (ii) _____

(b) Tick **two** ways people care domestic animals.

Giving them water

☐

beating them well

☐

providing shelter.

☐

33. (a) Write correctly;

(i) pin safety _____

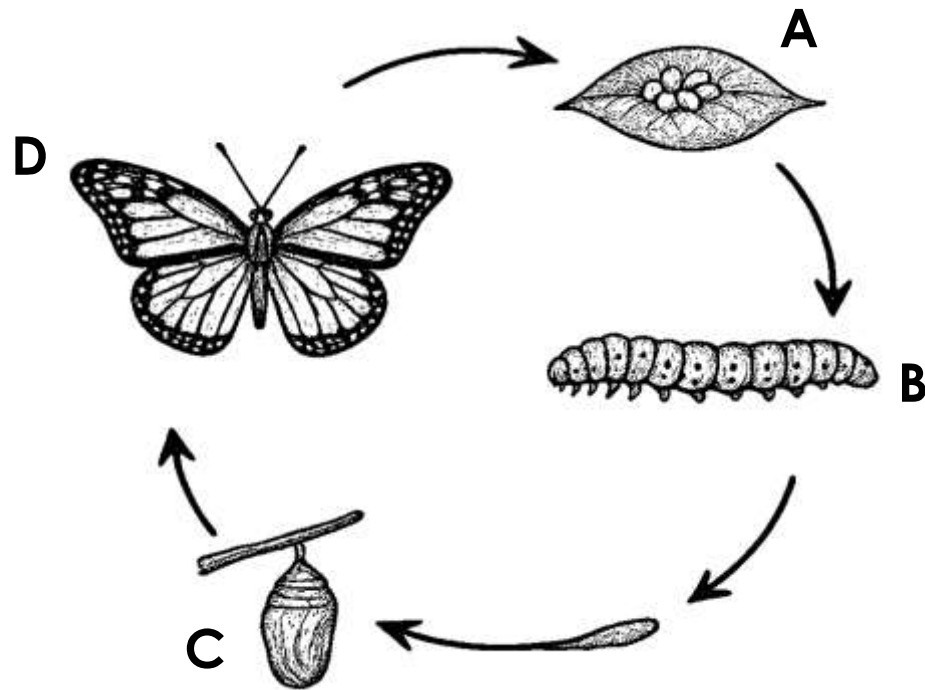
(ii) blade razor _____

(b) Use these words to construct sentences.

(i) cut _____

(ii) burn _____

34. Below is the life cycle of an insect.



(a) Name the stages marked **A**, **B** and **C**.

(i) **A** _____ (ii) **B** _____

(iii) **C** _____

(b) Name the insect that provides honey and wax.

35. Study the table below and then, answer the questions that follow.

A	B	C	D	E
cow	goat	sheep	lion	rabbit

(a) Which animal is the odd man out?

(b) Name the young one of animal C.

(c) What do we call the home of animal E?

(d) What type of animal is animal D?

36. (a) Match the elements of weather to their uses.

Sunny winnowing seeds

Windy planting seeds

Rainy drying seeds

Sunny _____

Windy _____

Rainy _____

(b) Name the crop growing practice below.



37. (a) Name the sources of food below.



(b) Write **two** ways of keeping food safe.

(i) _____ (ii) _____

38. Write **correct** or **wrong** to complete the sentences.

Polio can be prevented by immunisation

Six days make a week

Cows and goats provide meat and milk

A habitat is a home of a living thing

39. (a) Write a word to mean the following;

(i) The first treatment given a casualty

(ii) A person who has got an accident

(b) Underline **two** items used to give first aid.

plaster

stones

spirit

water

*****END*****