



SUREKEY EDUCATION SERVICES

PRIMARY TWO PROMOTIONAL EXAMINATION

2025

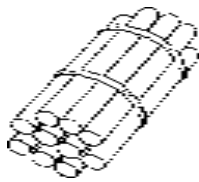
LITERACY ONE (B)

My name is:

My School is:

SECTION A

1. Which school need is shown below.

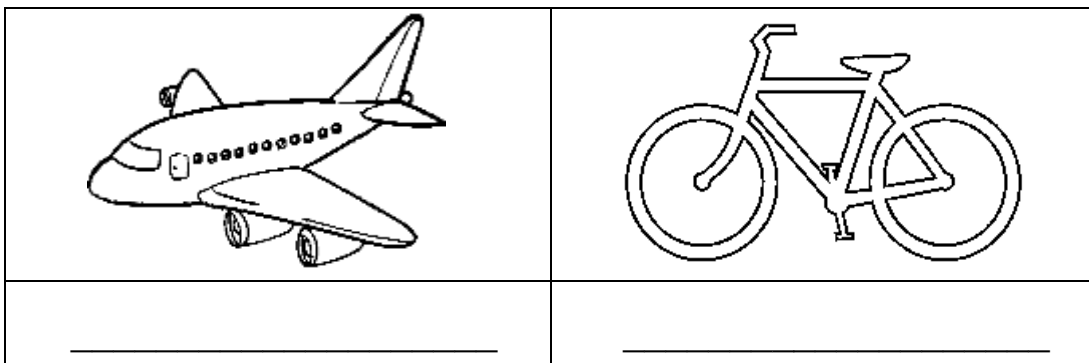


2. What do we call a group of people related by blood or marriage?

3. Name **one** type of weather.

4. Which symbol of a school is used to locate a school?

5. Name these types of transport in our community.



6. Write down **one** activity done by children at school.

7. Mention **one** member of a nuclear family.

8. How is a donkey useful to people?

9. Write down **one** safe way of using the road.

10. Name the building at school where sick children rest from.

11. Underline the reason why school children wear school uniforms.

To be healthy,

To be identified easily

12. Write **one** activity we do at school.

13. Write any **one** dangerous thing on the road.

14. Mention **one** person in the community who keeps peace and security.

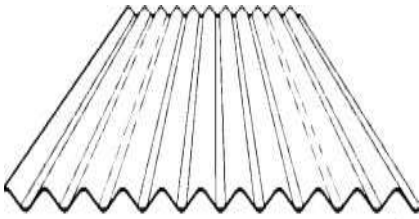
15. Which form of child abuse is shown below.



16. Give any **one** recreation activity at home.

17. Mention **one** example of a public holiday.

18. Which building material is shown below?



19. Write down any **one** basic need of a child.

20. Mention any **one** person who helps in traffic.

21. Where is a ladle used at home?

22. Write down any **one** item we can make out of wood.

23. List down **one** item we can get from banana fibres.


24. Tick the importance of promoting peace and security.

Fighting ☐

sharing ☐

quarreling ☐

25. Name the domestic bird below.



26. What do we call the mother of your mother?

27. In the space below, draw and name **one** activity we do in the classroom.



28. Apart from "Sir", write **one** title used to people in our school.

29. Name the school symbol below.



30. Which room in a house is a place for bathing?

31. What is the role of a carpenter in our community?

32. Underline **one** activity people do in our community.

Stealing, fighting, fishing

33. Name the raw material for making the item below.



34. Tick **one** way of conserving the environment.

Overgrazing

☐

mulching

☐

building in wetlands

☐

35. Write **one** cause of insecurity in our school.

36. What is a special way of talking to God called?

37. What do we call a group of people related by blood, adoption or marriage?

38. Write your religious name.

39. Tick **one** way we can respect and care for our neighbour.
Abusing them ☐ greeting them ☐
giving them water ☐
40. Mention **one** importance of giving out to others.

SECTION B (60marks)

41. Write **true** or **false** in each of the following sentences.
A carpenter makes furniture _____
A barber flies aero planes _____
A doctor treats sick people _____
A cobbler teaches pupils at school _____
42. Match the types of transport to their means.
(i) Air transport ferry
(ii) Road transport train
(iii) Water transport aero plane
(iv) Railway transport lorry
43. (a) Tick any **two** causes of insecurity at school.
beating ☐ love ☐
stealing ☐ good health ☐
- (b) Write a sentence on these words.
(i) abuse _____
(ii) steal _____
44. (a) How is the item below useful at home?



(b) _____ is the state of the atmosphere of a place at a given time.

(c) Underline **two** temporary houses.

bungalow tent hut flat

45. (a) Write the importance of these tools in a home.

(i) Mortar and pestle _____

(ii) A stool _____

(iii) A stove _____

(b) Which part of the house is used to let in fresh air?

46. (a) _____ is situation when people are free from harm or danger.

(b) Write down **three** people who help in keeping peace and security at school.

(i) _____ (ii) _____

(iii) _____

47. (a) What do we call things we make using our local material?

(b) Name these things that we make using our hands.

(c) Mention the source of banana fibres.

48. Name any **two** activities done at school.

(i) _____ (ii) _____

(b) Write these words correctly;

(i) tyrisecu _____

(ii) cepea _____

49. (a) Match the elements of weather to their uses.

Mualim leads prayer in the mosques

Muezzin teaches Islam

Imam calls Moslems for prayers

(b) Give **one** why a Moslem should pray to Allah.

54. (a) Give any **two** living things God/Allah created

(i) _____ (ii) _____

(b) Identify any **two** needy people in the community.

(i) _____ (ii) _____

55. (a) What lesson do you learn from the story of the Good Samaritan?

(b) Give any **one** way you can show concern to your neighbour.

(c) Who was the father of Cain and Abel?

(d) Who was the mother of Cain and Abel?
