



SUREKEY EDUCATION SERVICES
PRIMARY ONE PROMOTIONAL EXAMINATION 2025
LITERACY ONE (B)

My name is:

My School is:

SECTION A

1. Name the place where pupils go to learn.

2. Write down **two** members of an extended family.
(i) _____ (ii) _____
3. How are nurses important in a community?

4. Name the colour of the traffic lights that tells drivers to stop.

5. Write the element of weather which forces people to wear sweaters.

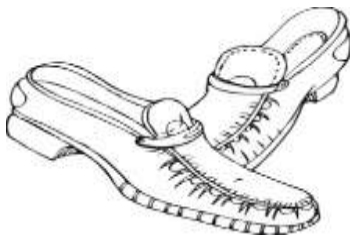
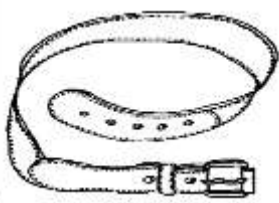
6. Draw and name any **two** materials made out of sisal.

7. Which animal provides security at home?

8. In which do farmers dry their seeds?

9. _____ is the movement of people and goods from one place to another.

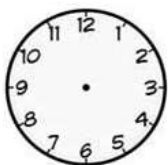
10. Name these things we get from animal skins.

	
Cotton wool	Spirit

11. How are animals important to people?

12. Write the use of these objects at school;





13. How do parents show care to their children?

14. Give **one** use of a knife in the kitchen.

15. Give **two** examples of basic needs to people.

(i) _____ (ii) _____

16. Which element of weather helps in winnowing?

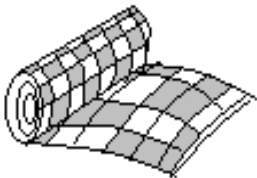
17. Match these things to their materials used.




Banana fibre



Palm leaves



Wood



Clay

18. Name **two** things found in a sitting room.

(i) _____ (ii) _____

19. How do you care for your school uniform?

20. Write **two** birds kept for eggs in the community.


(i) _____ (ii) _____

21. Why do we need cleaners at school?

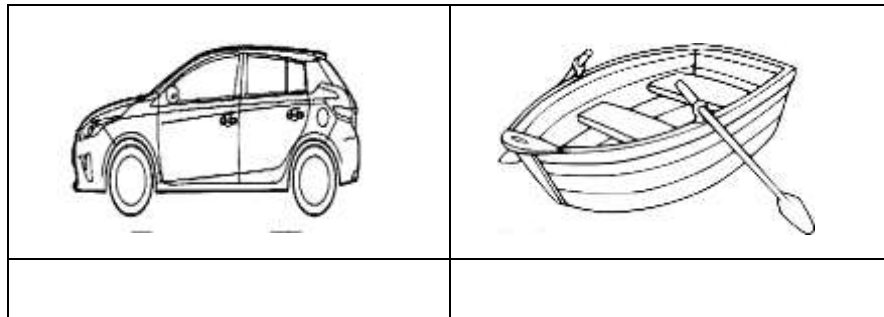
22. Which part of a bird keeps it warm?

23. Mention the work of a matron at school.

24. Name the traffic road sign below.



25. Name these types of transport in our community.



26. Mention **two** activities done by people in our community.

(i) _____ (ii) _____

27. Write these words correctly.

(a) Ketmar _____ (b) therwea _____

(c) dsfloo _____

SECTION B (60 marks)

28. Name these items used to keep peace and security.



29. How can we keep our home clean?

(i) _____ (ii) _____

30. List **two** symbols of a school.


(i) _____ (ii) _____

31. (a) What is this item made of?



(b) What is the use of the item above?

32. Name these important places in the community.




33. How are the following people useful in a community?
teacher _____
policeman _____
34. Underline **two** ways of living together.
Fighting helping others stealing respecting others
35. Match the items kept at home to their uses.



For eating food on it.



For transport



For sweeping



For storing harvested crops

36. How do children show respect to their parents?
- _____

37. Study the picture below and answer the questions.



(a) Name the activity she is doing.

(b) Write down **two** items she is using.

(i) _____ (ii) _____

38. Draw these things found in the church.

mat	rosary	Bible

39. Identify **two** birds that God / Allah created.

(i) _____ (ii) _____

40. Give **one** way in which we can care for animals
