




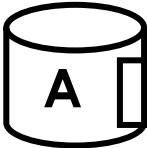







SUREKEY EDUCATION SERVICES
PRIMARY ONE PROMOTIONAL EXAMINATION 2025
ENGLISH

My name is:

My School is:

SECTION A (40 marks)

1.	Count and write .  = _____	2.	Name figure below.  _____
3.	Add: $5 + 2 =$ _____	4.	Write the place value of 3 in 31.
5.	Draw a set of 4 trees 	6.	Write 34 in words.
7.	Fill in the missing numbers. 6, 8, 10, _____, _____	8.	Add: $\frac{1}{3} + \frac{1}{3}$
9.	Compare using "more" or "less"   Tin A holds _____ water than Tin B .	10.	Take away. $6 - 4 =$ _____

11.	Fill in the missing numbers. 342 = _____ hundreds _____tens _____ones		
12.	What number comes just after 8? 8, _____	13.	How many balls are in the set below? 
14.	Arrange 2, 9, 5, and 6 starting with the biggest.	15.	Circle the smaller number 200 or 100
16.	Compare using “taller” or “shorter” Kato  Smith  Kato is _____ than Smith		
17.	Shade $\frac{2}{3}$ on the diagram below. 	18.	Work out: Sh. 2 0 0 + Sh. 1 0 0 ----- -----

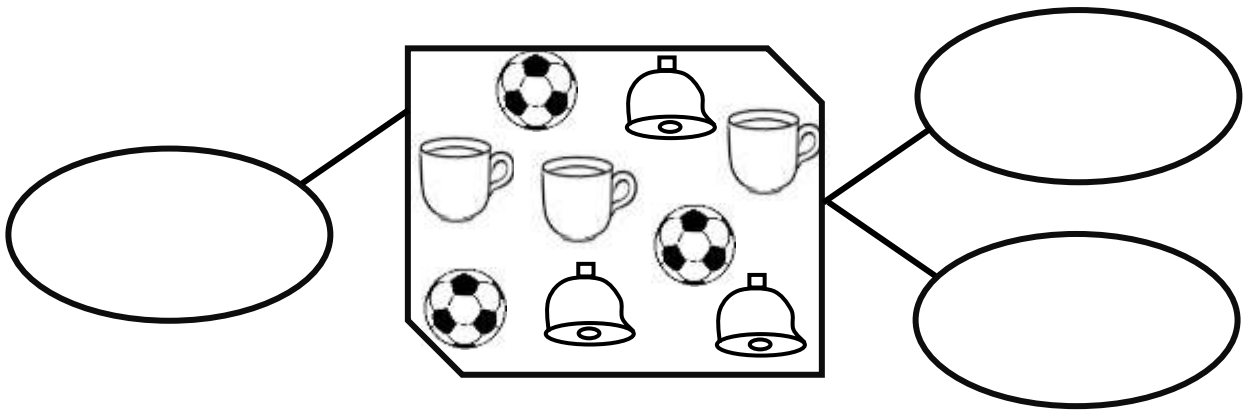
19. Write 3rd in words.

20. How many people can you see?



SECTION B (60 marks)

21. Form the small sets from the bigger set below. (06 marks)



22. (a) Write in figures;

(i) Twenty-eight _____

(ii) Ninety-nine _____

(02 marks)

(b) Write in words; (02 marks)


(i) 102

(ii) 57


(c) Circle the bigger number; 47 or 33 (01 mark)

23. Write the names of the shapes correctly.

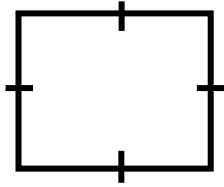
(05 marks)



ngletria



clecir



resqua

24.

Match correctly.

(06 marks)



Two



Three



four

25.

(a) Workout:

$$\begin{array}{r} 1 \quad 2 \\ + 1 \quad 3 \\ \hline \\ \hline \end{array}$$

(02 marks)

(b)

Add: Seven cows plus four cows

equals _____ cows

(02 marks)

(c) Take away: five sweets minus three sweets

equals _____ cows

26.

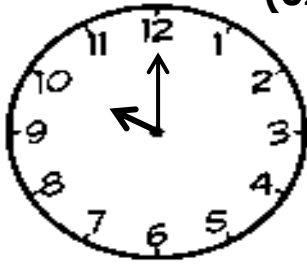
Match correctly.

(03 marks)



27. (a) Tell the time shown on the clock face below.

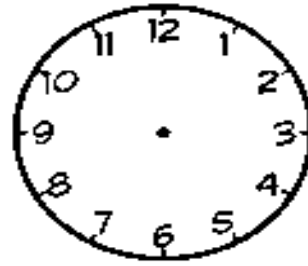
(02 marks)



It is _____ o'clock.

(b)

Show 5 o'clock on the clock face below.



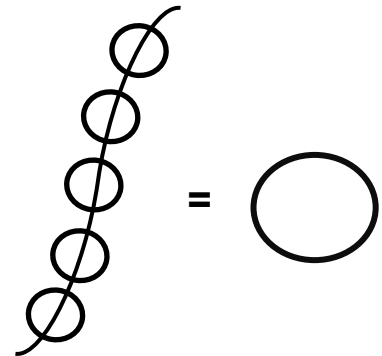
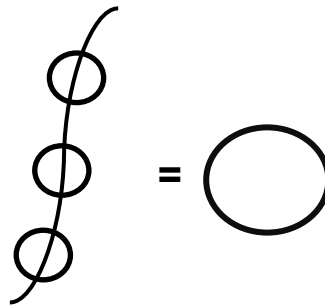
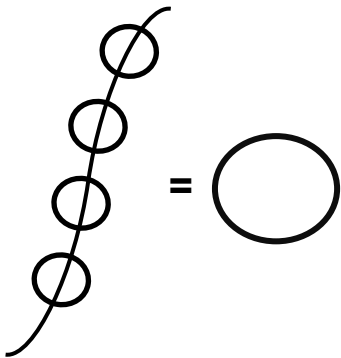
(02 marks)

(c) How many days make a week?

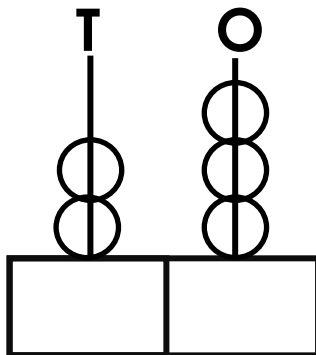
(02 marks)

28. Count and write the number in the box.

(06 marks)



29. (a) Complete the abacus Below. (02 marks)



(b)

Write 25 in words.

(01 mark)

(c) Complete correctly

634 = 6 _____ 3 _____ 4 _____

(02 marks)












30. Use the two objects to answer the questions that follow. Use “longer” or “shorter” to compare.



- (a) Which is shorter? (2marks)

- (b) A stick is _____ than a key. (2marks)
- (c) Add: 5metres + 4 metres = _____ metres. (2marks)

31. The pictograph below shows the number of tables that were bought by different people. Use it to answer the questions that follow.

Belinda	   
Ethan	  
Sendi	 
Ketra	 

(a) Who made the highest number of pots? (01 mark)

(b) _____ and _____ made the same number of pots. (02 marks)

(c) How many pots did Belinda make? (02 marks)

(d) Who made 3 pots? (01 mark)

*******END*******