



HILLSIDE PRIMARY SCHOOL
MID-TERM TWO EXAMINATIONS
2025

INTEGRATED SCIENCE (SET SIX)
Time Allowed: 2 Hours 15 Minutes

Index No.

--	--	--	--	--	--	--	--	--

Candidate's Name.....Stream.....

Candidate's Signature.....

EMIS No.....

District Name.....

Read the following instructions carefully

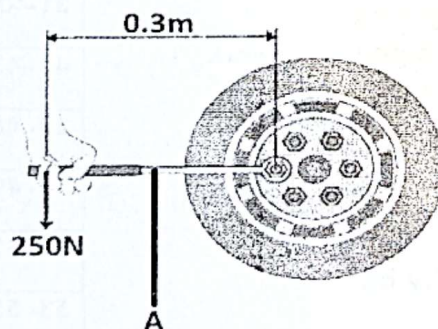
1. The paper has **two** sections: **A** and **B**.
Section A has 40 questions and Section B has 15 questions
2. Answer **all** questions. All answers to both sections **A** and **B** must be written in the spaces provided.
3. **All** answers must be written using a blue or black ball-point pen or fountain pen. Any work written in pencil other than graphs and diagrams will not be marked
4. Unnecessary changes in work may lead to loss of marks.
5. Any handwriting that cannot easily be read may lead to loss of marks.
6. Do not fill anything in boxes indicated: **"For Examiners' Use Only"** and those inside the paper.

FOR EXAMINERS' USE ONLY		
Qn. No.	MARKS	EXRS' NO
1-10		
11-20		
21-30		
31-40		
41- 43		
44- 46		
47- 49		
50- 52		
53- 55		
TOTAL		

SECTION: A

1. Mention any one inborn characteristic that differentiates a boy child from a girl child.
.....
2. Name the component of soil formed when animal dung decomposes.
.....
.....
3. Apart from the mechanical method, state any one other method of storing sound.
.....
.....
4. Identify the type of teeth that grows last in the human jaws.
.....

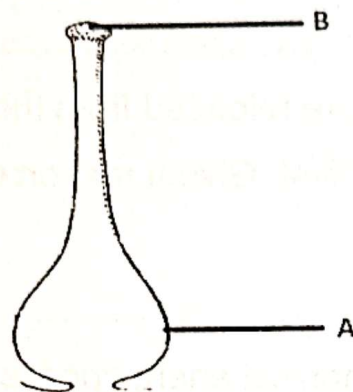
The diagram below shows a device used to by mechanics to repair car tyres. Study and use it to answer question 5 and 6



5. Name the device marked A

-
6. To which group of simple machines does device marked A belong?
.....
7. State any one way echoes help bats to locate their food.
.....
8. When a pen and paper are released from the top of a building, the pen reached the ground first. Give a reason why the pen reached the ground first.
.....
9. Identify the type of mechanical energy possessed by a passenger in a moving bus.
.....
10. State the cause of marasmus in children.
.....
11. Give any one way of preventing partial deafness.
.....
12. Mention any one danger of earthworms to crop farmers.
.....
13. State the importance of white blood cells in the human body.
.....
14. Give any one way feeding on roughages helps to prevent constipation.
.....

The diagram below shows a reproductive part of a flower. Use it to answer question 15 and 16.



15. Name the gametes produced at part marked A.
.....
16. State the function of part **B** to the structure above.
.....
17. Give any one reason why blowing air into the surface of a mirror distorts reflection for a short time.
.....
18. Give any one reason why it is advisable to sneeze into a handkerchief when in a crowded place.
.....
19. State any one way animals can be used as an energy resource.
.....

20. Write any one way in which the circulatory system depends on the skeletal system.

.....

21. Give any one use of heat energy to a blacksmith.

.....

22. State the difference in function between the gills of a mushroom and gills of a fish.

.....

23. Name the element of primary health care that can reduce the pain of a casualty.

.....

24. Give any one reason why breast milk is considered the best food for babies.

.....

25. State the main use of sedative drugs.

.....

26. Identify the type of immunity obtained from feeding on a balanced diet.

.....

27. State the role of sunlight during photosynthesis.

.....

28. Suggest any one way of preventing vectors in the environment.

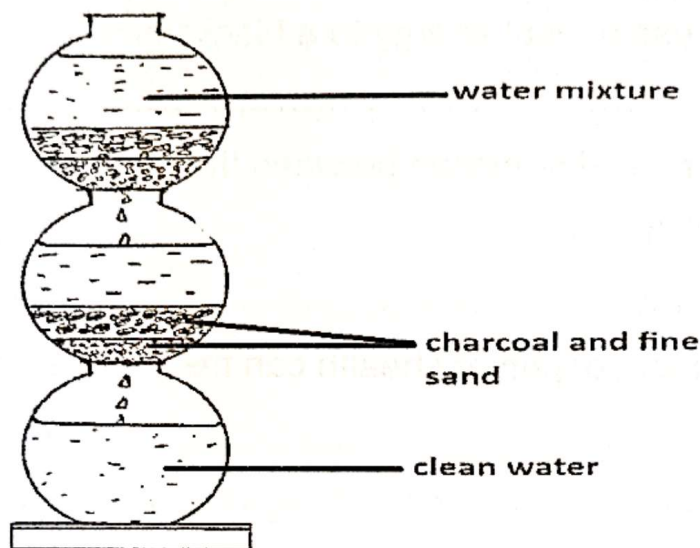
.....

29. Mention one way docking of sheep is an important farming practice.

.....

The diagram below shows a method of making dirty water clean.

Study and use it to answer the questions that follow.



30. Name the method of obtaining clean water drawn above.

.....

31. State the importance of charcoal and fine sand in the above process.

.....

32. State the importance of the micropyle to a germinating bean seed.

.....

33. Name the disease responsible for causing blindness in babies.

.....

34. State the reason why mulching is done mostly in the dry season.

.....

35. State any one method of conserving heat during the cooking process.

.....

36. Give any one reason why litter in a poultry house should be changed from time to time.

.....

37. Name the type of objects that do not form shadows.

.....

38. State any one reason why copper wires are insulated during electrical installation.

.....

39. Write any one advantage of boiling food before eating.

.....

40. Give any one sign of scours in rabbits.

.....

SECTION: B

41. (a) Identify the type of current electricity produced by the following

i. Generator.....

ii. Dry cell.....

(b) Write down any one local method of producing electricity at home.

.....

(c) State any one reason why solar electricity is not commonly found in most homes.


.....
.....
42. (a) Name the germ that causes COVID 19.

.....
.....
(b) Mention any one soft body part where COVID 19 germs can easily enter the human body.

.....
.....
(c) State any one danger of sitting near a person suffering from COVID 19.

.....
.....
d) Give any one sign of COVID 19.

.....
43. The diagram below shows the water cycle. Study and use it to answer the questions that follow.



(a) State the cause of process marked R in the admosphere.

.....

(b) Mention any two other forms of process marked S apart from rain.

i.

ii.

(c) State the type of soil erosion that creates channels marked T on hill tops and mountains.

.....

(d) Give any one adaptations of birds to flight.

.....

44. (a)State any two characteristics used to determine a breed of cattle.

i.

ii.

b) Why do farmers rear Ayrshire breed of cattle?

.....

c) Mention any one disease of cattle caused by a virus.

.....

45. Study the groups of animals below carefully and use them to answer the questions that follow.

A	B	C
i) Salamander	Chameleon	Slug
ii) Toad	Tortoise	Oyster
iii) Newt	Komodo dragon	Octopus
iv) Caecilian	Snake	Snail

a) State the general name given to animals in group C.

.....

(b) Mention any one other member of animals in group B

.....

.....

(c) State any one way animals in group A are helpful in disease control in our communities.

.....

.....

(d) Give any one similarity between an octopus and a chameleon in the way they protect themselves from enemies.

.....

.....

46. a) State the difference between soil texture and soil structure.

.....

.....

b) Briefly describe the arrangement of soil particles in the following types of soil;

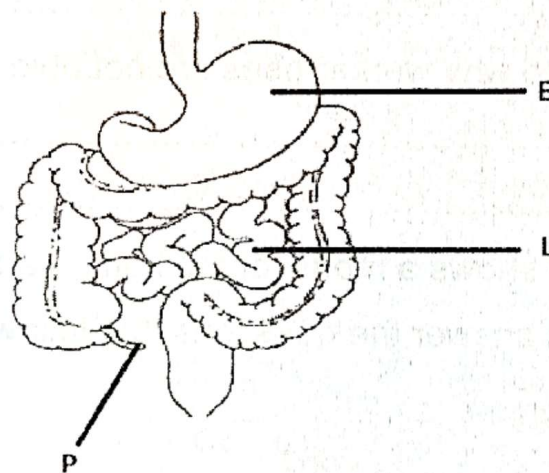
i. Sandy soils.....

ii. Clayey soils.....

(c) Apart from the presence of humus, give any one other way loam soil is suitable for growing crops.

.....

47. The diagram below shows the human digestive system. Study it and answer the questions that follow.



- (a) State the function of part marked P.

.....

- (b) Name two important processes that takes place at part marked L.

i)

ii)

(c) Mention any one disease that affects part marked with letter E

.....

48. a) State any one difference between the traditional method and modern methods of harvesting honey.

.....

.....

b) Give any two reasons why bee farmers harvest honey during day.

i.

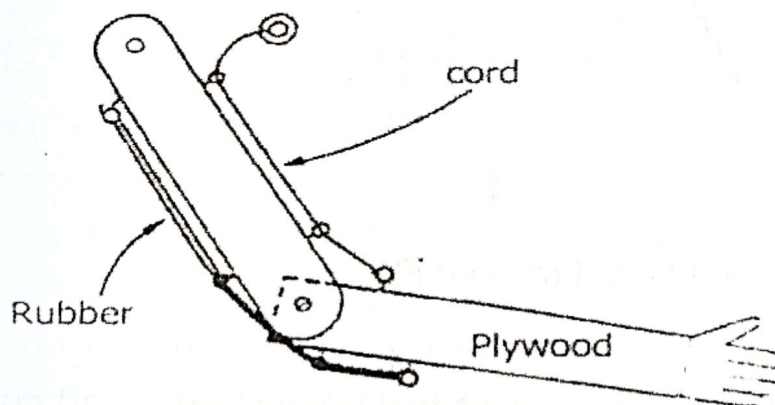
ii.

(c) Give any one reason why worker bees are not able to lay eggs.

.....

.....

49. The diagram below shows a model of the human arm made by P.7 Pupils. Study it and answer the questions that follow.



(a) Identify the body muscle represented by;

i) chord

ii) rubber.....

(b) Mention the bones represented by the plywood.

- i)
 ii)

50. a) State any two reasons why farmers of coffee should carry out gap filling.

- i.
 ii.

b) Give any one sign of crop pest damage on crops.

.....

c) Mention any one garden tool used for pruning crops.

.....

51. The information below is designed by the young farmers club of a certain school in order to start a goat rearing project. Study and use it to answer questions that follow.

Activity	Item	Number	Estimated date
Construction	Goat shed	2	10/06/2025
Purchasing	Nanny goats	7	18/07/2025
Vaccination	Kids	15	19/07/2025
Artificial insemination	Nannies on heat	All nannies on heat	18/07/2025

a) Give the collective name for such information on a farm.

.....

b) State the reason why the young farmers club has no interest in Billy goats.

.....

c) Give any one importance of vaccinating kids in the goat farm.

.....

d) State any one way having such information on a goat farm can be helpful to farmers.

.....

52. a) Give any one example of a water vector habitat disease apart from malaria.

b) Give any one way each of the following measures helps to control malaria.

i. Draining stagnant water

.....

ii. Sleeping under a treated mosquito net

.....

c) Identify the blood cells affected by malaria in the human body.

.....

53. a) State any two problems faced by teenage mothers.

i).....

ii).....

(b) Mention any two life skills teenage girls can use to avoid getting teenage pregnancies.

i.

ii.

54. You are provided with the following materials to carry out an experiment to show that soil contains water.

Dry saucepan, lump of moist soil, plate, burning stove.

Describe the steps you would follow to carry out the experiment above.

.....

.....

.....

.....

.....

.....

.....

55. a) Give any two natural changes in the environment that take place under moist conditions.

i.

ii.

b) State any one way drought can affect crop production in villages.

.....

c) Give any one way of managing drought conditions in an area.

.....

END



HILLSIDE PRIMARY SCHOOL
MID-TERM TWO EXAMINATIONS

2025

MATHEMATICS (SET SIX)

Time Allowed: 2 Hours 30 Minutes

Index No.

--	--	--	--	--	--	--	--	--

Candidate's Name.....Stream.....

Candidate's Signature.....

EMIS No.....

District Name.....

Read the following instructions carefully:

1. The paper has **two** sections: **A** and **B**.
Section A has 20 questions and Section B has 12 questions
2. Answer **all** questions. All answers to both sections **A** and **B** must be written in the spaces provided.
3. **All** working must be done using a blue or black ball-point pen or fountain pen. Any work written in pencil other than graphs and diagrams will not be marked
4. No calculators are allowed in the examination room.
5. Unnecessary changes in work may lead to loss of marks. Any handwriting that cannot easily be read may lead to loss of marks.
6. Do not fill anything in boxes indicated: **"For Examiners' Use Only"** and those inside the paper.

FOR EXAMINERS' USE ONLY		
Qn. No.	MARKS	EXRS' NO
1- 5		
6- 10		
11- 15		
16- 20		
21- 22		
23- 24		
25- 26		
27- 28		
29- 30		
31- 32		
TOTAL		

SECTION A: 40 MARKS

Answer all questions in this section

Questions 1 to 20 carry 2 marks each

1. Find the difference of: 42 and 56.

2. What number has been expanded to give:
 $5000 + 80 + 0.04 + 0.0001$

3. How many twenty eighths are equivalent to three quarters.

4. A school team scored the following goals in a tournament: 4, 4, 2, 5, 3, 0
4 and 5. Find the mode of the goals.

5. Draw a Venn diagram showing that pupils (P) and teachers (T) are part of
the school(S).

6. Write all prime numbers between 90 and 100.

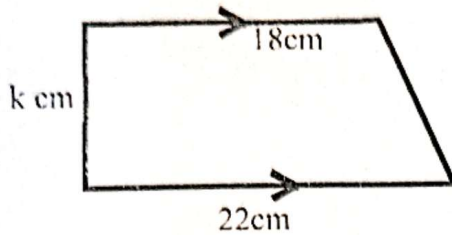
7. Solve for n: $\frac{2}{3}n + 5 = 1 + n$

8. Work out: -2×-3 on a number line.

9. The price of a shirt was increased by 20%. If its new price is sh. 60,000.
Find the old price.

10. The school bursar was 27th from either side of the queue at Stanbic bank.
How many customers were in queue?

11. The figure below has an area of 100cm^2 . Find the value of k .



12. 12 jackets take 2 hours to dry in hot sunshine. How long will 24 jackets take if they are exposed to the same sunshine at the same time?

13. A motorcyclist covers a distance of 560km at a speed of 80km/hr. How many hours more will he use if he drives at 40km/hr. to cover the same distance.

14. Solve for f : $6^{2f+1} \div 36 = 1$

15. Through what angle does a minute hand of a clock move in 50 minutes.

16. Use distributive property to work out: $(3.6 \times 23) + (3.6 \times 7)$

17. Work out:

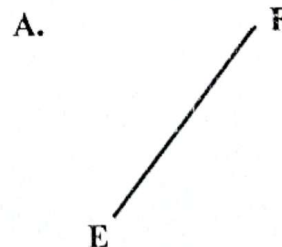
	Kg	g
	8	403
–	2	627
	<hr/>	
	<hr/>	

18. Express 149 in roman numerals.

19. Tell the afternoon time shown on the clock face.



20. Using a ruler, a pencil and a pair of compasses only construct a line through a point A. parallel to line EF.



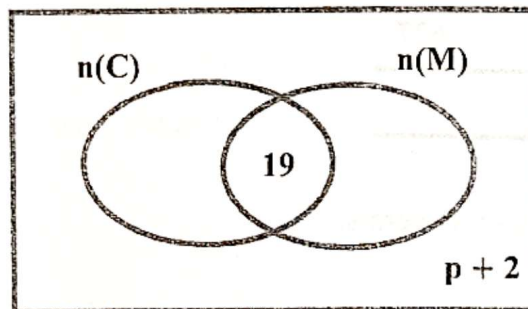
SECTION B: 60 MARKS

Answer all questions in this section

Marks for each question are indicated in the brackets

- 21.a) At a party, 35 children ate chicken (C), $(3p - 3)$ children ate meat (M) only, 19 ate both. $(p + 2)$ did not eat any of the food.

- a) Complete the Venn diagram below. (2 marks)



- b) Find the value of p given that the number of children who ate meat only was twice the number of those who did not eat any of the food. (3 marks)

22. Two bells are rung at intervals of 30 minutes and 45 minutes for lower and upper primary classes respectively.

- a) After how many minutes will the two bells be sounded together? (3 marks)

- b) If they are sounded together for the first time at 7:30 a.m. At what time will the two bells sound together for the second time? **(2 marks)**

23.a) Solve and write the solution set for: $2 - 3m < 17$. **(3 marks)**

- b) Clara is four years younger than Christine. Chloe is two years younger than Clara. If the age of Chloe and Clara is 42, how old is Clara?

(3 marks)

24. At end of year party, adults were served with 5 pieces of chicken each, pupils were served with 4 pieces of meat each and each person who attended was served with a bottle of soda. If 140 pieces of chicken and 224 pieces of meat were served, how many people attended the party.
(3 marks)

b) If a crate of soda contains 24 bottles and costs sh. 21,600. How much was spent on soda?
(2 marks)

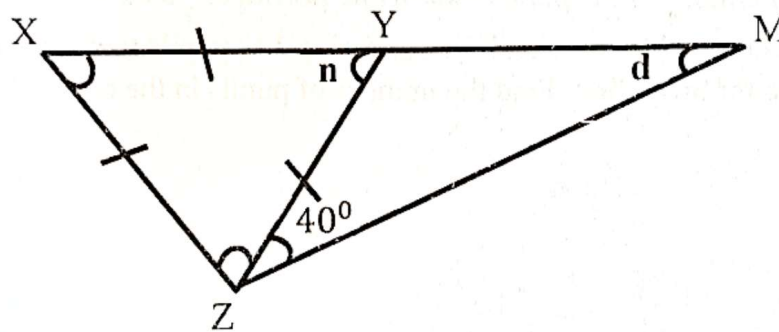
25.a) Find the difference of the place value of 3 and value of 7 in the number 430,2675.

(2 marks)

b) Given that $35_m = 26$. Find the unknown base m .

(2 marks)

26. Study the figure below carefully:



a) (I) Find the value of angle n .

(2 marks)

(II) Find angle d .

(2 marks)

- b) The exterior angle of a regular octagon is $2k - 5^\circ$. Find the value of k .
(2 marks)

27. In a P.7 class, $\frac{1}{4}$ of the pupils took white porridge, $\frac{1}{3}$ took milk, $\frac{1}{2}$ of the remainder took black tea and the remaining 130 pupils took brown porridge for break first. Find the number of pupils in the class. (5 marks)

28. Moses drove a car from town A to town B at a speed of 90km/hr. in 3 hours. He rested at town B for an hour and drove back at an average speed of 54km/hr. Calculate Moses's average speed for the whole journey.
(5 marks)

29.a) Using a pair of compasses, ruler and a very sharp pencil only, construct a triangle XYZ where line XY = 5cm, angle XYZ = 105° and line YZ = 4.5cm.

(4 marks)

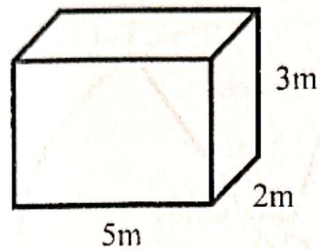
b) Measure line ZX _____ (1 mark)

30. The table below shows the denominations, number of notes and amount.
Use it to complete the blank spaces correctly with correct working.

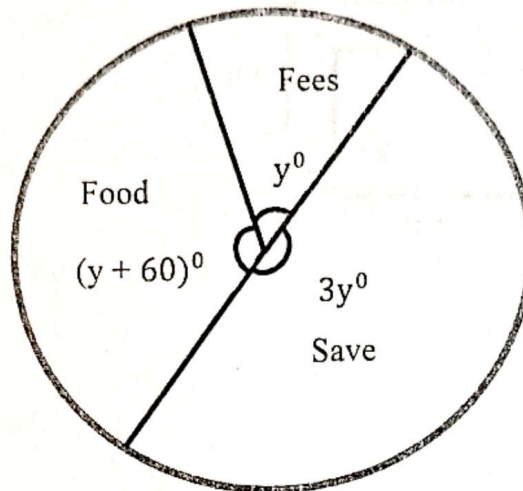
Denomination	Number of notes	Amount
Sh. 1000	30	Sh. _____
Sh. 2000	10	Sh. 20, 000
Sh. 5000	_____	Sh. 90,000
Sh. _____	7	Sh. 70,000
Sh. _____	12	Sh. _____
Total		Sh. 450,000

(5 marks)

31. How many 5 litre jerrycans of milk can be obtained from a rectangular tank of 5m by 2m by 3m? (4 marks)



32. The pie chart below shows how Mr. Byarugaba spent his monthly salary of April. Study and use it to answer questions that follow.



a) Find the value of y in degrees.

(2 marks)

b) If he saved sh. 300,000 more on than he spent on food, find how much he spent on fees.

(3 marks)

END



HILLSIDE PRIMARY SCHOOL
MID-TERM TWO EXAMINATIONS
2025

ENGLISH (SET SIX)

Time Allowed: 2 Hours 15 Minutes

Index No.

--	--	--	--	--	--	--	--	--	--

Candidate's Name.....

Candidate's Signature.....

EMIS No..... Stream

Read the following instructions carefully

1. The paper has **two** sections: **A** and **B**.
2. Answer **all** questions. All answers to both sections **A** and **B** must be written in the spaces provided.
3. **All** answers must be written using a blue or black ball-point pen or fountain pen.
4. Unnecessary changes of work may lead to loss of marks.
5. Any handwriting that cannot easily be read may lead to loss of marks.
6. Do not fill anything in boxes indicated: **"For Examiners' Use Only"** and those inside the paper.

FOR EXAMINERS' USE ONLY		
Qn. No.	MARKS	EXRS' NO
1-10		
11-20		
21-30		
31-40		
41-50		
51		
52		
53		
54		
55		
TOTAL		

SECTION A

(Questions 1 to 50 carry one mark each)

Sub-section I

In each of the questions 1 to 10, fill the correct form of the word in the brackets to complete each sentence.

1. Nyakato is the.....of the twins. (old)
2. All the.....came late to the examination centre.
(invigilate)
3. Mariam has justfrom United kingdom. (arrive)
4. Henry is one of the.....who stay in Uganda. (Holland)
5. I failed to attend my uncle's.....because I was in exams.
(bury)
6. The carpenter lost.....hammer yesterday. (she)
7. Most fatal accidents are caused by.....drivers.(drink)
8. All the villagers cleaned the road..... (voluntary)
9. Our Primary Seven teachers are very.....people.(courage)
10. We go swimming.....a month. (two)

In each of the questions 9 to 15, fill in the blank space with a suitable word or group of words.

11. Five pupils divided all the mangoes.....themselves.
12. Here is the girl.....video is on the school website.
13. Mr. Yusani is.....Ghanaian national.
14. No sooner had my father's car broken down.....he called
the mechanic.
15. I heard the cock.....last night.

*In each of the questions **16 to 18**, rewrite giving a single word for the underlined group of words.*

16. The chairperson presented the list of items to be discussed in the meeting at the beginning.

.....
.....

17. Our team did not win the first game.

.....
.....

18. Babirye always arrives at school in time.

.....
.....

*In questions **19 and 20**, arrange the given words in alphabetical order.*

19. task, chores, term, holiday

.....
.....

20. supervisor, invigilator, examination, candidate

.....
.....

*In each of the questions **21 to 23**, write the full form of the following.*

21. e-mail.....

22. doesn't.....

23. G.P.O.....

*In each of the questions **24 to 26**, rewrite giving the opposite of the underlined words.*

24. Mr Onyare Ronald is a very honest gentleman.

.....
.....

25. The early departure of the chief guest surprised us.

.....
.....

26. This restaurant employed smart waiters.

.....
.....

*In each of the questions **27 and 28**, give the plural of the given words.*

27. cloth.....

28. a bar of soap.....

*In each of the questions **29 and 30**, use each of the given words in a sentence to show that you know the difference in their meaning.*

29. live

.....
.....

30. leave

.....
.....

Sub-section II

In each of the questions 31 to 50, rewrite the sentences as instructed in the brackets.

31. Patra is a citizen of Uganda.

(Rewrite the sentence ending:national.)

.....
.....

32. Ian likes swimming more than reading.

(Rewrite the sentence using:prefer.....)

.....
.....

33. Who is the owner of that CD player?

(Rewrite the sentence beginning: To whom.....)

.....
.....

34. I have never seen a man stronger than Badanga.

(Rewrite the sentence using:the strongest.....)

.....
.....

35. There isn't any paraffin in the lamp.

(Rewrite the sentence using:some.....)

.....
.....

36. Edidah sent an e-mail without anybody's help.

(Rewrite the sentence ending:herself.)

.....
.....

37. Biringwa bought a book. It had ninety pages.

(Rewrite as one sentence ending:book.)

.....
.....

38. It was not necessary for the mechanic to repair that old vehicle.

(Rewrite the sentence using:needn't.....)

.....
.....

39. They have constructed a big borehole in our village.

(Rewrite the sentence beginning: A big borehole.....)

.....
.....

40. You can pay dowry in cash. You can pay dowry in kind.

(Rewrite as one sentence using:either.....or.....)

.....
.....

41. Much as cows are animals, they need protection.

(Rewrite the sentence beginning: In spite of.....)

.....
.....

42. Ramospha studied with a student. He had a light-skin. He was tall. He was from Sudan. (Join as one sentence without using any conjunction)

.....
.....

43. May I know the name of your village?

(Rewrite the sentence ending:called?)

.....
.....

44. My niece is very young. She cannot join a nursery school.

(Join as one sentence using:too.....to...)

.....

.....

45. Laura can't do research because she had no idea.

(Rewrite as one sentence using:would.....)

.....

.....

46. Farmers will plant trees on that hill.

(Rewrite the sentence using:going to.....)

.....

.....

47. The holiday began on Friday. We wrote exams the day before.

(Rewrite as one sentence beginning: By the time.....)

.....

.....

48. Njoroge is not proud of her culture, is she?

(Rewrite the sentence ending:isn't she?)

.....

.....

49. "Faith, sign on the pay-slip," said the cashier.

(Join as one sentence using:told.....)

.....

.....

50. What a nice wedding party we attended.

(Rewrite the sentence beginning: We attended.....)

.....

.....

SECTION B: 50 Marks

(Questions 51 to 55 carry ten marks each)

51. Read the passage below and answer questions that follow in full sentences.

Last Sunday, after prayers, we had a family meeting. In that very meeting, a decision was taken to travel to Nakasongola. Nakasongola is our ancestral home where most of our relatives live. We had last visited him a decade ago. Our eldest brother, Mukiibi was then in Primary Seven but he is now working with Bank of Baroda.

We set off on our journey the following day. We travelled in our father's vehicle. We were all excited to travel to our home district after a long time. before setting off, we had a prayer as soon as we finished our breakfast. We set off at around 8:00a.m. The journey to Nakasongola was very interesting. We admired not only the forests along way but also the wild animals especially the monkeys. My little brother Dickson asked my mother to buy pieces of chicken for him but she refused. She told us that such flesh is always not healthy and may cause some body disorders.

At midday, we reached the small town near to our ancestral home. My parents made some shopping and then headed home. Our relatives were very happy to see us after such a long time. My grand father had prepared sweet porridge which feasted on for the rest of the day until dinner time.

Questions.

a) When was the family meeting held?

.....
.....

b) What was decided in that meeting?

.....
.....

c) How did the family travel to Nakasongola?

.....
.....

d) After how long had this family not visited their relatives?

.....
.....

e) Who is the writer's eldest brother?

.....
.....

f) Why do you think the family travelled to the village?

.....
.....

g) What made the journey interesting?

.....
.....

h) Give a word or group of words to mean the same as following as used in the passage?

(i) asked.....

(ii) happy.....

i) Give a suitable title to the passage.

.....
.....

52. Read the poem below carefully and answer the questions that follow.

I respect the police
For they play a big role
Of promoting peace and security
Not only in our community
But also in the entire country

I respect the police
For they spend sleepless nights
Even patrolling villages and towns
For the sake of our security
In our community and beyond.

I respect the police
Tirelessly they work
To **eliminate** crime
From our community
For the **residents** to live in peace.

I respect the police
For their sacrifice and dedication
Which has cost some their lives
As they do their work
In our community and beyond.

Mugabe Robert

Questions

a) What is the poem about?

.....

.....

b) Whom does the writer respect?

.....
.....

c) According to the poem, what is the role of the police?

.....
.....

d) Where do the police promote peace and security?

.....
.....

e) When do the police patrol villages and towns?

.....
.....

f) Why do the police work tirelessly?

.....
.....

g) When do the residents live in peace?

.....
.....

h) Which danger have the police faced while promoting peace and security?

.....
.....

i) Give a word to mean the same as the following as used in the passage.

i. eliminate.....

ii. residents.....

53. The advertisement appeared in The New Vision of 20th June 2025 and answer the questions that follow in full sentences.

OPPORTUNITY OPPORTUNITY OPPORTUNITY

The UNEB has announced the following vacant posts to be occupied before 20th August 2025

- Chief Examiner
- Chief inviligilator
- Two senior supervisors
- Four examiners- to evaluate the PLE setting committee
- One competent lower primary teacher
- Two experience drivers - to help in transportation of items to marking centres

N.B. The job opportunities are temporary and will take a two-month contract

All applicants should be below 45 years

Mutebi Jonathan

HRM

17th June 2025

Questions

a) What is the advertisement all about?

.....
.....

b) In which newspaper did the advertisement appear?

.....
.....

c) Name any one vacant post to be occupied.

.....
.....

d) How many chief invigilators are needed?

.....
.....

e) According to the advertisement, why do you think UNEB is looking for four examiners?

.....
.....

f) What will be the role of the experienced drivers?

.....
.....

g) What is the deadline of submitting applications?

.....
.....

h) Write UNEB in full.

.....
.....

i) Will Mr Walugembe be given a job in this body?

.....
.....

j) Give a word or group of words to mean the same as **announced** as used in the notice.

.....

54. *The sentences below are in a wrong order. Rearrange them correctly to form a meaningful story about an accident on Entebbe Highway.*

- a) And a saloon car which was being driven by a citizen of Rwanda.
- b) The driver of the saloon car died instantly.
- c) But this three-year-old son survived with minor injuries.
- d) Last week, as we were travelling to Entebbe.
- e) It involved our vehicle which had six passengers.
- f) This man was driving on the night side as it in their country.
- g) We had a serious accident.
- h) Our driver tried to swerve the vehicle but it was not possible.
- i) The police ambulance arrived ten minutes later and took the dead body and the injured to Entebbe Grade B hospital.
- j) So, we had a head-on-collision.

.....

.....

.....

.....

.....

.....

.....

.....

.....

.....

.....

.....

.....

.....

.....

55. Your name is Apio Mellisa, a primary seven candidate at Aleber primary school, P.O Box234, Alebtong and you are soon writing Mock examination but your parents have not paid for the Mock examination fee. Write a letter to one of them requesting for that fee. Indicate the amount and the deadline for the payment. ***Use your school address***

.....

.....

.....

.....

.....

.....

.....

.....

.....

.....

.....

.....

.....

.....

.....

.....

.....

.....

.....

.....

.....

END



HILLSIDE PRIMARY SCHOOL
MID-TERM TWO EXAMINATIONS

2025

SOCIAL STUDIES WITH RELIGIOUS EDUCATION (SET SIX)

Time Allowed: 2 Hours 15 Minutes

Index No.

--	--	--	--	--	--	--	--	--	--

Candidate's Name.....

Candidate's Signature..... Stream

EMIS No.....

District.....

Read the following instructions carefully

1. The paper has **two** sections: **A** and **B**.
2. Answer **all** questions. All answers to both sections **A** and **B** must be written in the spaces provided.
3. **All** answers must be written using a blue or black ball-point pen or fountain pen.
4. Unnecessary changes of work may lead to loss of marks.
5. Any handwriting that cannot easily be read may lead to loss of marks.
6. Do not fill anything in boxes indicated: **"For Examiners' Use Only"** and those inside the paper.

FOR EXAMINERS' USE ONLY		
Qn. No.	MARKS	EXRS' NO
1-10		
11-20		
21-30		
31- 40		
41- 43		
44- 46		
47- 49		
50- 52		
53- 55		
TOTAL		

SECTION A (40 MARKS)

1. Mention any one symbol of a clan.

.....

2. Name the basic need that is provided to people by schools.

.....

3. Why is livestock farming not widely carried out in forested area?

.....

4. State any one reason why schools organize sports days.

.....

5. Name any one Nile valley country.

.....

6. What was the first group of Europeans to come to East Africa?

.....

7. Why are warm ocean currents important to areas along the coast?

.....

8. Write the major factor which causes the difference in vegetation distribution on a mountain.

.....

9. State any one way good roads can promote industrialization.

.....

10. How did the creation of Eritrea affect the size of Ethiopia?

.....

11. Give any one way port Mombasa promotes trade in East Africa.

.....

12. How did missionaries solve the problem of language barrier during missionary work in Africa?

.....

13. Give the evidence to show that the earth rotates on its axis.

.....

14. Name the organ of EAC that is made up of heads of state of member states.

.....

15. Mention any one example of a traditional cash crop.

.....

16. Give any one way of solving problems between the school and its neighbouring community.

.....

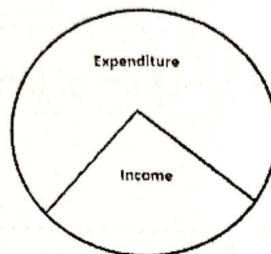
17. How do people acquire land in your district?

.....

18. State any one effect of child abuse in the community.

.....

Study the diagram below and use it to answer the questions that follow.



19. Name the type of budget illustrated above.

.....

20. Give any one way a country can prevent the type of budget shown above.

.....

21. Name any one traditional leader who fought for Uganda's independence.

.....

22. Why did colonialists introduce cash crop growing in their colonies?

.....

23. Write any one way the mining of salt at lake Katwe has promoted the fishing industry.

.....

24. Which type of climate is described as warm and wet?

.....

25. Why is water transport not commonly used by people in Uganda even when it is the cheapest?

.....

26. Name any one pastoral tribe in East Africa.

.....

27. State any one way smuggling of goods affects the development of local industries?

.....

28. Why is Eswatini called an enclave country?

.....

29. Give one reason why Lake Kyoga is shallow?

.....

30. Give the reason why minerals are regarded as non-renewable resource.

.....

31. Why did Sir Apollo Kaggwa sign the 1900 Buganda agreement on behalf of Buganda Kingdom?

.....

32. Why are sign posts important in community?

.....

33. Mention health service provided by hospitals to people in our community.

.....

34. How does sunny weather affect people's way of dressing?

.....

35. Write any one Advantage of decentralization.

.....

For questions 36- 40, answer Either Christianity or Islam but not both.

36. **Either:** Mention any one service a Christian offers in the church.

.....

OR: Mention any one service a Muslim offers in the Mosque.

.....

37. **Either:** Write any one example of a human weakness according to Christianity.

.....

OR: Write any one example of a human weakness according to Islam.

.....

38. **Either:** State any one reason why a faithful Christian should not fear death.

.....

OR: State any one reason why a faithful Muslim should not fear death.

.....

39. **Either:** Write any one evidence to show that Jesus Christ was a true son of God.

.....

OR: Write any one evidence to show that prophet Mohammad was a true prophet of Allah.

.....

40. **Either:** Why are there many family breakups in homes today?

.....

OR: Why are there many family breakups among Muslims today?

.....

SECTION B (60 MARKS)

41. (a) What is mass media?

.....

.....

(b) Name any two examples of mass media means of communication.

(i)

(ii)

(c) State any one way some mass media means of communication have led to poor moral standards among the young people.

.....

42. a) Which vegetation zone covers the largest part of the following areas in Africa?

i. Central Africa

.....

ii. The coastal areas of East Africa

.....

b) Write any two factors that influence vegetation distribution.

i.

ii.

43.(a) State any two reasons why culture should be preserved.

i.

ii.

(b) Mention any two cultural practices that are common in Uganda today.

(i)

(ii)

44. (a) Give any two ways people in East Africa demanded for independence.

i.

ii.

(b) State any one problem that people in East Africa faced in the demand for independence.

.....

(c) Name any one symbol of Uganda that was handed over to Dr. Apollo Milton Obote as assign that Uganda had got independence.

.....

45. a) Mention any two human activities that increase global warming.

i.

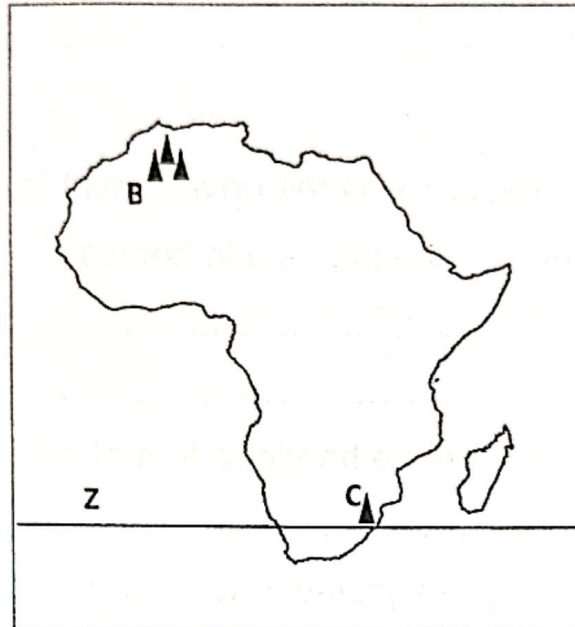
ii.

b) Give any two effects of global warming.

i.

ii.

46. Study the map of Africa below and use it to answer the questions that follow.



(a) Name the line of latitude marked **Z**.

.....

(b) Write the date when the sun is directly overhead the line marked **Z**.

.....

(c) Compare mountain range marked **B** and mountain marked **C** in terms of their formation.

.....

(d) Use letter **A** to show the Mediterranean Sea on the map above

.....

47. (a) Write any two income generating project that can be set up at home.

- i.
- ii.

(b) State any two reasons why the government is encouraging people to set up income generating projects in homes.

- (i)
- (ii)

48.(a) Name the city where the headquarters of EAC are found.

.....

(b) Write any one country that joined EAC in 2007

.....

c) State any two problems affecting common markets in Africa.

- i.
- ii.

49.(a) How does the police ensure law and order in a community?

- (i).....
- (ii).....

b) state any two problems faced by police in ensuring law and order in a community

- (i).....
- (ii).....

50. Match list A with B correctly.

A

B

Dr. Albert cook

overall supervisor the Uganda railway line

George Whitehouse

he built Mengo Hospital

Sir Lord Rosebery

established first mission station in E.Africa

Luduig krapf

declared Uganda as a British protectorate

For questions 51- 54, answer Either Christianity Or Islam but not both.

51. Either: "love one another just like I have loved you"

a) Who said the above words?

.....

(b) To whom were the above words said?

.....

c) Write any two acts of love any Christian in the community.

(i)

(ii)

OR: Indeed, in the message of Allah you have a good example to follow him who hopes (the meeting with) Allah and the last and remember Allah" surat-ahzab 33:21.

a) Who said the above words?

.....

(b) To whom were the above words meant for.

.....

c) Write any two good deeds a Muslim must do to show love to others.

(i)

(ii)

52. Either: a) Whom did God choose to lead Israelites to the Promised Land?

.....

(b) Write any two problems the Israelites faced on their way to the Promised Land.

(i)

(ii)

(c) How did God help the Israelites to overcome some of the problems they faced on their way to the promised land?

.....

OR: a) Whom did Allah choose to lead Ban-Israel from Msri?

.....

(b) Write any two problems faced by Ban-Israel on their way from Msri.

(i)

(ii)

(c) How did Allah help Ban-Israel to overcome some of the problems they faced on their way from Msri?

.....

53. Either: (a) Mention any one type of prayer in Christianity.

.....

(b) Give two reasons why Christians pray to God.

(i)

(ii)

(c) Name the prayer that Jesus Christ taught his disciples.

.....

OR: (a) Mention any one type of prayer in Islam.

.....

(b) Give two reasons why Muslims pray to Allah.

(i)

(ii).....

(c) Name any one of the daily prayers in Islam.

.....

54. Either: (a) Name the place where righteous people will be taken after judgement day.

.....

(b) Write any one good condition that is found in the place above according to Christianity.

.....

(c) Give any two things a Christian can do in order to go to the place you have named in (a) above?

(i).....

(ii).....

OR: Name the place where righteous people will be taken after judgement day according to Islam.

.....

- (b) Write any one good condition that is found in the place above according to the Islam.

.....

- (d) Give any two things a Muslim can do in order to go to the place you have named in (a) above?

(i)

(ii)

55. Either: (a) Write any two examples of Christian religious beliefs.

(i)

(ii)

- (b) State any two differences in belief between Christians and Muslims.

(i)

(ii)

OR: (a) Write any two examples of Islamic religious beliefs.

(i)

(ii)

- (c) State any two differences in belief between Muslims and Christians.

(i)

(ii)

END