

JUBRA EDUCATIONAL CONSULTS- KAMPALA
END OF TERM III ASSESSMENT 2025

SUBJECT : SOCIAL STUDIES & RELIGIOUS EDUC.

CLASS : PRIMARY SIX

DURATION : 2 HOURS 15 MINUTES

PUPIL'S NAME : _____

SCHOOL : _____

DO NOT OPEN THIS BOOKLET UNTIL YOU ARE TOLD TO DO SO.

READ THE FOLLOWING INSTRUCTIONS CAREFULLY.

1. This paper is made up of two sections A and B.
2. Section A has 40 questions (40 marks)
3. Section B has 15 questions (60 marks)
4. Answer ALL questions. All answers to both section A and B must be written in the spaces provided.
5. All answers must be written using a blue or black ball-point pen or ink.
6. Unnecessary alteration of work may lead to loss of marks.
7. Any handwriting that cannot easily be read may lead to loss of marks.
8. Do not fill anything in the boxes indicated "For Examiner's use only."

FOR EXAMINERS' USE ONLY

PAGES	MARKS	SIGN
Page 1		
Page 2		
Page 3		
Page 4		
Page 5		
Page 6		
Page 7		
Page 8		
TOTAL		



© Jubra Associates Co. Ltd.

Located at Modern Sara Building Room F4, 1st Floor and Intersoft building (Basement) Turn Over
Tel: 0200 909 858, 0200909817, 0703-192727, 0783-867736

SECTION A: 40 MARKS

Questions 1-40 carry one mark each

1. Mention any one tribe that belongs to the Highland Nilotes in Uganda.


2. In which way does shortage of funds affect the provision of social services in a district?

3. How can a pupil easily understand the meaning of symbols used on the map of Uganda?

4. Name any one major waterfall on River Nile in Uganda.

5. Give one reason why Uganda doesn't have a national language.

6. **Draw any one traditional means of transport in the space provided below.**



7. State any one advantage of using a lorry over a motorcycle in transporting goods.

8. Mention any one natural source of materials used to make crafts.

9. Why is Rwanda called a monolithic nation?

10. Mention any one important process in the rain cycle.

11. How do good roads encourage agricultural production in rural areas?

12. Mention any one group of people who provide security in the community.

13. Compare Lake Albert and Lake Bunyonyi in terms of formation.

14. Give any one reason why some people in our community find it difficult to improve their standards of living.
15. How does industrialization encourage destruction of vegetation in an area?
16. Mention any one tool which tourists use to locate places of interests in a country.
17. Why is it important for a country like Uganda to have an army?
18. Give any one advantage of proper management of wastes in the environment.
19. Why do schools organize parenting sessions for children?
20. Mention the type of tax that URA charges on goods brought into the country.
21. Why has the government of Uganda installed security cameras in the major cities?
22. How do citizens of Uganda show the spirit of nationalism on independence day?
23. Mention any one example of children's rights promoted by the national constitution.
24. What role is played by the Resident District Commissioner in the district?
25. How has the government tried to improve the welfare of the youths in Uganda?
26. In which way did the Arabs benefit from the caravans during the Long Distance Trade?
27. Name the type of goods on which excise duty is paid in Uganda.
28. Give one problem faced by a mid wife in a community while doing her work.
29. Name any one natural cause of changes in the environment.
30. Why is the government of Uganda encouraging the growing of non-traditional cash crops?
31. It is 4:00p.m in Ghana, what time will it be in Kampala which is 60°E of Greenwich?

32. Give one reason why West Nile was transferred to Uganda during the evolution of boundaries.

33. What role is played by the Bank of Uganda to all commercial banks?

34. Why is it important for all qualified Ugandans to take part in elections?

35. Why has Democratic Republic of Congo remained one of the poorest countries in Africa yet it is rich in mineral resources?

For questions 36 to 40, answer Either Christianity Or Islam but not both.

36. **Either:** Give any one common practice among Christians.

OR: Mention any one common practice performed by Muslims.

37. **Either:** Name the person God ordered to build the ark.

OR: Name the Prophet whom Allah ordered to build the ark.

38. **Either:** Write any one event of the Pentecost day.

Or: Mention the event that took place during the year Prophet Muhammad (PBUH) was born.

39. **Either:** Give the meaning of the term Amen.

OR: Give the meaning of the term Alhamudulilla.

40. **Either:** Write any one service a Reverend offers to the Church community.

OR: State any one role played by an Imam in the community.

SECTION B: (60 Marks)

41. a) Write any one security organ operating in Uganda today.

b) State any two importance of having peace in a community.

(i)

(ii)

c) Why does the government provide vehicles to Police Officers while carrying out their duties?

42.a) Give the meaning of the term National Constitution.

b) Which arm of the democratic government makes and amends a National Constitution?

c) State any two ways a national constitution can promote peace in a country.

(i)

(ii)

43.a) Why is the national population census not a common practice in Uganda?

b) Give any one reason for carrying out population census in Uganda.

c) Name the ministry responsible for carrying out population census in Uganda.

d) Write the title given to the people who conduct population census.

44.a) Mention the special interest group of people in uniform represented in the parliament of Uganda.

b) What role is played by the people below in the parliament of Uganda?

(i) Clerk to parliament

(ii) Sergeant at Arms

c) How does the government of Uganda benefit from the work of parliament?

45.a) How did the following personalities contribute to the struggle for independence in Uganda?


(I) I.K Musaazi

(ii) Benedicto Kiwanuka

b) How was Uganda's road to independence peaceful?

c) How did Missionary education contribute to the fight for independence of Uganda?

46. Study the pie chart below about economic activities done in Uganda and use it to answer the questions that follow.



a) Why is agriculture having the largest percentage according to the pie-chart?

b) State any one problem affecting the development of the mining sector in the pie-chart.

c) How has the agricultural sector contributed to the development of Uganda?

d) How have banks helped trade to develop in Uganda?

47.a) Which neighbouring country of Uganda has a sea Port at the Atlantic ocean?

b) How has Uganda benefited from its neighbours with sea ports?

c) Give one way the following can help Uganda to reduce on the problems of being landlocked.

(i) Building of many industries.

(ii) Improving on air and railway transport.

48. Name the body that is responsible for conserving forests in Uganda.

b) Mention any two reasons why the government conserves forests.

(i)

(ii)

c) State any one challenge faced by the forests officials during their work.

49.a) Mention any one political party which organized demonstrations against colonial rule in Uganda.

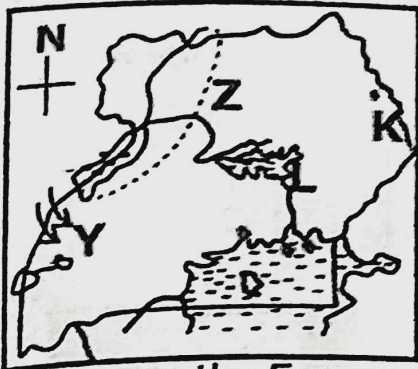
b) Give any two reasons why leaders of political parties organized demonstrations against colonial rule.

(i)

(ii)

c) Name the nationalist leader who led Uganda to self rule in 1961.

50. Study the sketch map of Uganda and answer the questions that follow.



a) Name the stone age site shown with letter K.

b) How was the Royal Geographical society helpful to the explorer who used the route marked Z?

c) Why were the European explorers interested in finding the source of river marked L?

d) Which ethnic group entered Uganda through route Y?

For questions 51 to 55, answer Either Christianity or Islam but not Both.

51. **Either:** a) How does one become a member of God's family?

b) Give any two ways you can show love for God as a family.

(i) _____

(ii) _____

c) Mention any one challenge facing Christians today.

OR: a) How does one become a member of the Muslim Community?

b) Give any two ways you can show love for Allah as a family.

(i) _____

(ii) _____

c) Mention any one challenge facing Muslims today.

52. **BOTH:** a) What is selfishness?

b) Give any two acts of selfishness?

(i) _____

(ii) _____

c) Give any one danger of selfishness.

53. **Either:** Give any two reasons why Christians have built more churches.

(i) _____

(ii) _____

b) State any two ways Christians can contribute to the development of the church.

(i) _____

(ii) _____

OR: a) Give any two reasons why Muslims have built more mosques.

- (i) _____
(ii) _____
b) State any two ways Muslims can contribute to the development of the mosques.

- (i) _____
(ii) _____

54. Either: a) Mention one example of optional prayers in Christianity.

b) State any two advantages of praying together as a family.

- (i) _____
(ii) _____

c) Mention any one way God rewards those who pray with an intention.

OR: a) Mention one example of optional prayers in Islam.

b) State any two advantages of praying together as a family.

- (i) _____
(ii) _____

c) Mention any one way Allah rewards those who pray with an intention.

55. Either: Match the information below correctly.

List A

- a) Moses
b) Abraham
c) Jacob
d) Noah

List B

built the ark
saved from water.
father of all believers
stole the brother's blessings.

- a) Moses _____
b) Abraham _____
c) Jacob _____
d) Noah _____

OR: Match the prophets to the books they received.

Prophet

- a) Prophet Muhammad (PBUH)
b) Prophet Dauda
c) Prophet Musa
d) Prophet Isa

Book

Injir
Tauret
Qur'an
Zabur

- a) Prophet Muhammad (PBUH) _____
b) Prophet Dauda _____
c) Prophet Musa _____
d) Prophet Isa _____