

KAMULI DISTRICT EXAMINATION BOARD

MOCK 2025

SUBJECT : SOCIAL STUDIES & RELIGIOUS EDUCATION

CLASS : PRIMARY SEVEN

DURATION : 2 HOURS 15 MINUTES

Index No.

Random No.						Personal No.		

CANDIDATE'S NAME :

CANDIDATE'S SIGNATURE:

SCHOOL NAME :

District Name :

--

DO NOT OPEN THIS BOOKLET UNTIL YOU ARE TOLD TO DO SO.

Read the following instructions carefully.

INSTRUCTIONS.

1. This paper has two sections: A and B
2. Section A has 40 questions (40 marks)
3. Section B has 15 questions (60 marks)
4. All answers must be written using blue or black pen.
5. Unnecessary crossing or changes may lead to loss of marks.
7. Do not fill anything in the boxes indicated for examiners use only.
8. The use of mathematical table and electronic calculators is not allowed.

FOR EXAMINERS' USE ONLY

QNS	EXAMINERS' MARKS	EXAMINERS' INITIALS
1 - 16		
17 - 30		
31- 40		
41 - 43		
44 - 48		
49 - 52		
53 - 55		
TOTAL		

SECTION A: 40 MARKS
Questions 1-40 carry one mark each


1. What title is given to the political head of a parish?

2. Why is tourism called an industry ?

3. How did the construction of the Uganda railway promote colonial rule?

4. Give one example of a non traditional cash crop.

5. In which one way do parents promote rights of their children ?

6. Name the map symbol below.


7. How does the existence of HEP in rural areas control rural - urban migration?

8. Name the mineral that improves soil fertility .

9. Name one way people can contribute to climate change in Uganda .

10. State any one reason why the government is encouraging teenagers to acquire vocational skills.

11. Name the largest Island country in Africa?

12. In which way did the missionaries promote the health sector in Uganda?


13. Give any one way valley dams have helped the Karimojongs.

14. Why are cultural days organized by most schools in Uganda?

15. Write any one duty a P.5 pupil can play in promoting sanitation at school.

16. Why is it important for school going children to make a budget before carrying out expenditures?

17. State any one way communities are benefitting from the Parish Development Model (PDM) programme.
-
18. Give any one way slave trade was abolished in East Africa.
-
19. In which way are recycling industries economically important to the people of East Africa?
-
20. Why does the government of Uganda encourage its citizens to renew their national identity cards?
-
21. Give any one economic benefit of Kiroba sugar industry to the people of Kamuli District .
-
22. Which type of rainfall is received around mountainous areas?
-
23. Name the unit in the Uganda Revenue Authority that fights against smuggling.
-
24. Give any one role of the chief Administrative officer (CAO) in a district.
-
25. In the space below , draw a road sign that informs drivers about an accident ahead.



26. Name the river that flow from L.kyoga to L. Albert?
-
27. Why are fly overs constructed across busy roads in most cities in Africa?
-
28. How is the government planning to transport crude oil from Hoima city to Port Tanga in Tanzania?
-
29. In which geographical region of Africa is Eritrea?
-
30. Why is Arusha in Tanzania an important town to the E.African countries?
-

31. Which method did the Banyoro use to resist colonial agents in their areas?

32. Name one irrigation scheme in northern Uganda known for citrus fruit growing.

33. How does Rwanda benefit from being a member of E.A.C ?

34. How are camels useful to people in desert areas of Africa?

35. Which type of climate is described as hot and wet throughout the year?

For each of the questions 36 to 40 answer Either Christian Or Islamic questions but not both , No marks will be awarded to a candidate who attempts both alternatives in a particular number.

36. **Either:** How do Christian pupils show their faithfulness to God?

Or: How do Moslem pupils show their faithfulness to God?

37. **Either:** Who was the earthly father of Jesus ?

Or: Who was the father of Prophet Muhammed ?

38. **Either:** Give any one reason why mature Christians should marry.

Or : State any one reason why mature Moslems should marry.

39. **Either :** In which way do Christians care for God's creatures today?

Or : Give one way Moslems care for Allah's creatures today.

40. **Either :** How do Christians promote friendship for one another?

Or : How do Moslems promote friendship for one another?

SECTION B 60 MARKS.

41a). Write UBOS in full.

b. State any two reasons why UBOS is carrying out base line Education census in schools.

(I) _____

(ii) _____

c. Apart from LIN, which other requirement was needed from a pupil during the baseline Education census .

42. What is an Ethnic group?

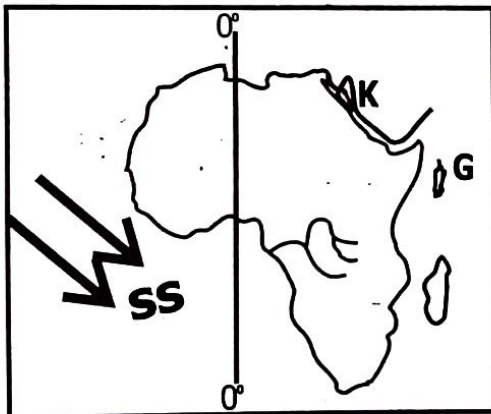
b. Mention any two characteristics of Ethnic groups .

(i) _____

(ii) _____

c. How were the Bantu politically organized?

43. Study the map below and use it to answer questions that follow.



a. Why was the water channel marked with letter **K** dug?

b. How is the Island marked with letter **G** remembered in the history of Buganda kingdom?

c. How do prevailing winds marked with letter **SS** affect the climate of Africa?

d. Name the city in Africa which is crossed by the line drawn on the map above .

44.a) State any two importance of waste management.

- (i) _____
- (ii) _____

b. Give any two methods used in waste management.

- (i) _____
- (ii) _____

45.Name Uganda's National Emblem.

b) Identify two features on which the above emblem is found.

- (i) _____
- (ii) _____

c) Why was the above bird chosen as Uganda's national emblem?

46.a) In which two ways does a country benefit in a fast growing population?

- (i) _____
- (ii) _____

b. Mention two measures the government of Uganda is using to control its fast growing population.

- (i) _____
- (ii) _____

47.a) Which term is used to mean the trade which took place between the Arabs at the coast of East Africa and the people in the interior of East Africa?

b. State three negative effects of the system of trade mentioned in "a" above.

- (i) _____
- (ii) _____
- (iii) _____

48a) Name the body responsible for organizing National elections in Uganda.

b) What term is used to mean an election carried out to replace a vacant post?

c) Give one difference between by-elections and a referendum?

d) Give any one reason why Moses a p.2 pupil will not be allowed to participate in the forth coming general elections.

49a) Mention any two play materials in our schools .

- (i) _____
(ii) _____

b) State any two ways playing is important to school children .

- (i) _____
(ii) _____

50a) Give any one significant contribution of the following people in the struggle for independence.

(i) Julius Kambalage Nyerere _____

(ii) Dr. Apollo Milton Obote . _____

b) Which political party led the following countries to independence?

(i) Kenya _____

(ii) Uganda _____

For each of the questions 51 to 55 , answer Either Christian Or Islamic questions but not both . No mark will be allowed to a candidate who attempts both alternatives in particular number.

51. **Either:** a) What does the word gospel mean according to Christian teachings?

b) What inspired the gospel writers to write books without any difficult?

c) Mention any two of the gospel books

(i) _____ (ii) _____

Or: a) Name the holy book for Moslems.

b. What inspired people to write the Holy Quran without any difficult?

c. Mention any other two sacred books in Islam.

(i) _____ (ii) _____

52. **Either:** a) Who was the first man to be created by God .

b. Name any two children of the man in (a) above .

(i) _____

(ii) _____

c. What was the work of his elder son according to the bible?

Or: a) Who was the first man to be created by Allah?

b) Name any two children of the man in (a) above .

(I) _____ (ii) _____

c) What was the work of the elder son according to the Quran?

53. **Either:** a) Name the parable Jesus Christ used that encourages children to ask for forgiveness.

b) Give any two ways Christians benefit from the parable of Jesus Christ today.

(i) _____

(ii) _____

c) Name the town where Jesus grew up from .

Or: a) what is Hadith ?

b) Give any two ways Moslems benefit from the hadith of Prophet Muhammad (P.B.U.H) today .

(i) _____

(ii) _____

c) Name the town where Prophet Muhammad (P.B.U.H) grew up from.

54. **Either:** a) State any two forms of child abuse practiced in our homes.

(i) _____

(ii) _____

b) Give any two ways children have contributed to the abuse of their rights.

(i) _____

(ii) _____

Or: a) State any two pillars of Islam .

(i) _____

(ii) _____

b. Give any two ways Moslems benefit from fasting today.

(i) _____

(ii) _____

55. For Both

a) What is a talent ?

b) In which two ways are talents important to people ?

(i) _____

(ii) _____

c) How do sports men/women use their talents ?