

The Spectrum Examinations Hub

Beginning of term two assessment -2025


P.1 Mathematics

My name is _____


My school is _____

1. Read and draw these sets


A set of two books




A set of four chalkboards




A set of 3 bags



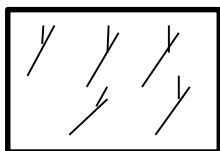
A set of five chairs



2. Name these sets.

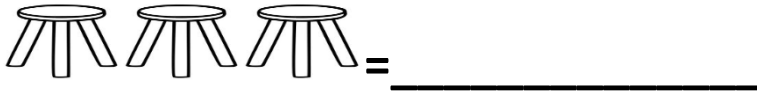


A set of _____

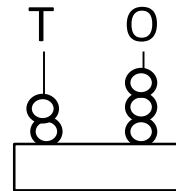
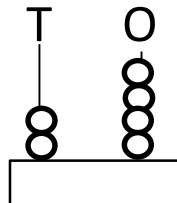
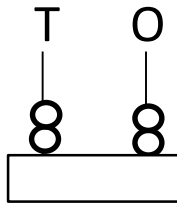


A set of _____

3. Count and write the number



4. Complete the abacus.

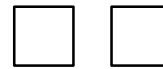


5. Match the same



3 3 3 3

0 0 0 0




3 3 3 3



0 0 0 0

6. Make new sets from the big set.







7. Circle the bigger number.

4 or 6

8 or 2

7 or 9

12 or 21

8. **Write the number names**

5- five

8 _____


2 _____

6 _____


10 _____

3 _____

9. **Read and match**




oval



cone



triangle



circle



rectangle

10. **Add the following.**

$$2 + 1 =$$

$$4 + 3 =$$

$$1 + 5 =$$

11. **Write the number before**

____, 3

____, 6

____, 5

12. **Write the number after**

8, ____

6, ____

13. **Shade for the number.**

7 = ○○○○○○○○

3 = △△△△△△△

1 = □□□□□□□

5 = 0000000

2 =         

14. **Fill in the missing number**

1, 2, ____, 4, 5, 6, 7, ____, 9, 10

END