



RAPHA EXAMINATIONS BOARD

"Education is an investment"

BEGINNING OF TERM TWO EXAMINATIONS

2025

P.1 MATHEMATICS

NAME:.....

SCHOOL:.....

DISTRICT NAME:.....

READ THE FOLLOWING INSTRUCTIONS CAREFULLY

1. This paper has **two** sections: **A** and **B**. Section **A** has **40** questions(**40 Marks**) and Section **B** has **15** questions(**60 Marks**)
2. Answer **ALL** questions. **A** ll answers to both Sections **A** and **B** **must** be written in the spaces provided.
3. **All** answers must be written using a **blue** or **black** ball point pen or ink. Any work in pencil other than diagrams will **not** be marked.
4. Unnecessary **changes** in your work and handwriting that cannot be ready easily may lead to **loss of marks**.
5. Do not fill anything in the table indicated "FOR EXAMINERS' USE ONLY"

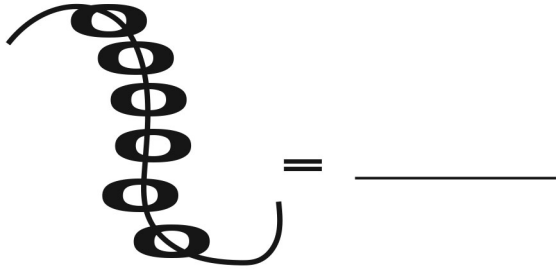
**FOR EXAMINERS'
USE ONLY**

SECTION	
A	
B	
TOTAL	

SECTION:A (40 MARKS)

1. Add: $2 + 3 =$ _____

2. Count and write the number.



3. (a) Draw a set of three cars.



(b) Draw a set of 4 trees.



4. Shade the fraction.



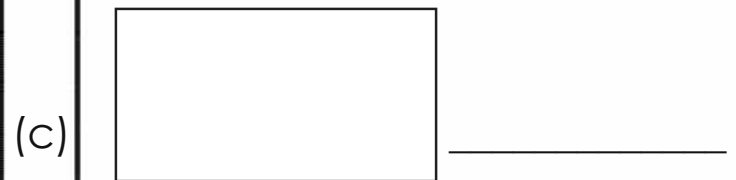
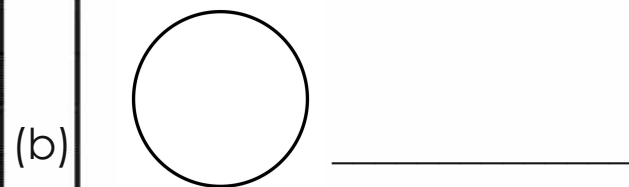
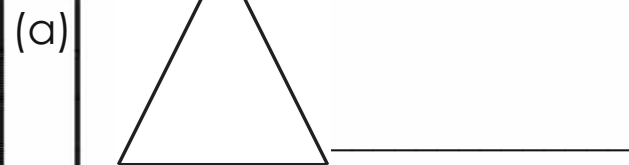
5. Take away.

(a) $5 - 2 =$ _____

(b) $8 - 4 =$ _____

(c) $9 - 3 =$ _____

6. Name the shapes below.



(Triangle, Circle, Oval, Rectangle)

7. One cow has 2 eyes. How many eyes do 3 cows have?

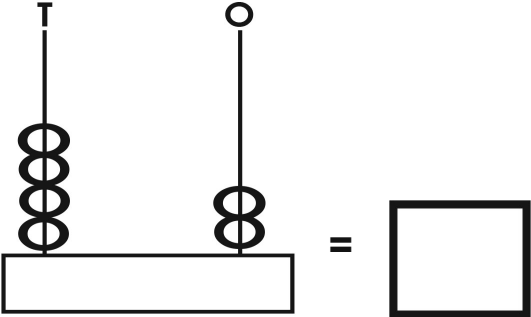
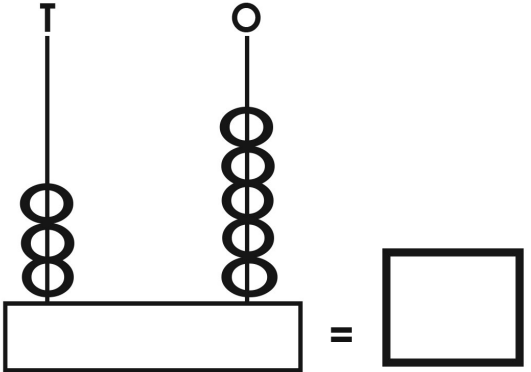
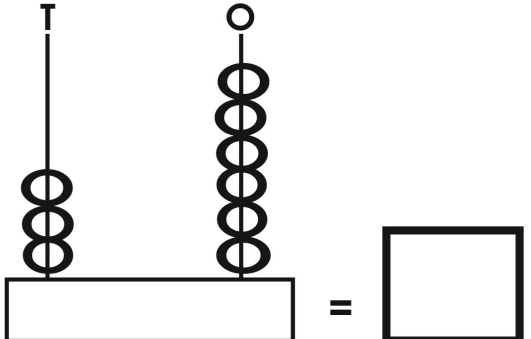
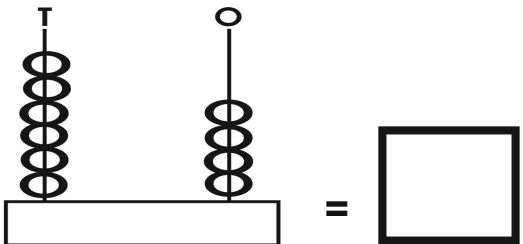


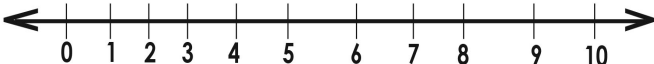
8. Which number comes after;

(a) 12 , _____

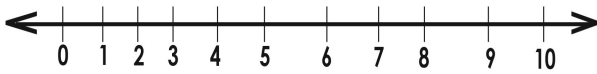
(b) 18 , _____

9.	<p>Fill in the missing days of the week.</p> <p>Sunday, Monday, _____</p> <p>Wednesday, _____</p> <p>Friday, _____</p>	10.	<p>Read and workout the following.</p> <p>(a) Eight mangoes take away three mangoes equals _____</p> <p>(b) A hen has _____ legs.</p> <p>(c) Two oranges plus five oranges equals _____</p>
----	--	-----	---

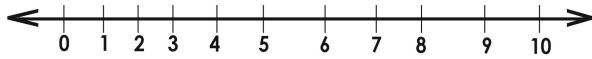
SECTION:B

11.	<p>Complete the abacus and write numbers in the box.</p> <p>(a)</p>  <p>(b)</p>  <p>(c)</p> 	(d)	
		12.	<p>Complete using: "lighter or heavier" (1 Mrk each)</p> <div style="display: flex; justify-content: space-around; align-items: center;">   </div> <p>(a) A leaf is _____ than a stone.</p> <p>(b) A stone is _____ than a leaf.</p>
		13.	<p>Workout using a number line.</p> <p>(a) $5 + 2$</p> 

(b) $4 + 1$



(c) $8 - 5$



14. Match correctly. **(1 Mrk each)**

20

Fifteen

9

Twenty-five

15

Nine

25

Twenty

15. Workout:

(a)
$$\begin{array}{r} 1 \quad 4 \\ + 1 \quad 2 \\ \hline \end{array}$$

(b)
$$\begin{array}{r} 2 \quad 5 \\ + 2 \quad 3 \\ \hline \end{array}$$

(c)
$$\begin{array}{r} 6 \\ - 5 \\ \hline \end{array}$$

(d) $2 \times 3 =$ _____

16. Compare using "less" or "more"
(1 Mrk each)


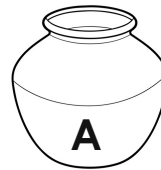
(a)



Container **X** carries _____
water than container **Y**.

Container **Y** carries _____
than container **X**.

(b)



Pot **A** carries _____ than
pot **B**.

Pot **B** carried _____ than pot **A**.

18. Write in figures. **(2 Marks each)**

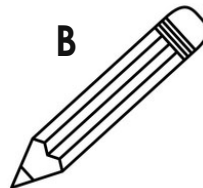
(a) Thirteen: _____

(b) Twelve: _____

(c) Eighteen: _____

19. Compare using "longer" or "shorter"

(a)




Pencil **B** is _____ than pencil **C**.

Pencil **C** is _____ than pencil **B**.



W



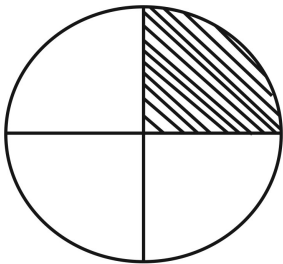
X

Boy **X** is _____ than boy **W**.

Boy **W** is _____ than boy **X**.

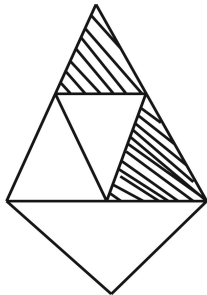
20 Write the unshaded fraction.
(2 Mrks each)

(a)



= _____

(b)



= _____

21. Daddy gave me shs. 100.
Mummy also gave me shs. 300.

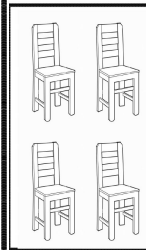
(a) Who gave me much money?
(1 Mrk)

(b) How much money did Daddy give me?
(1 Mrk)

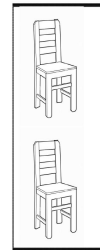
(c) How much money did they give me altogether?
(2 Mrks)

22. Join small sets and bigger sets.
(1 Mrk each)

(a)



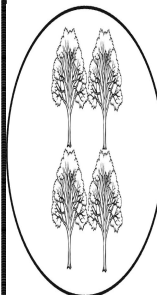
+



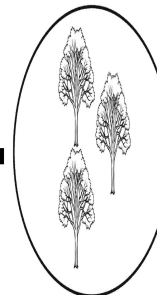
=




(b)



+



=



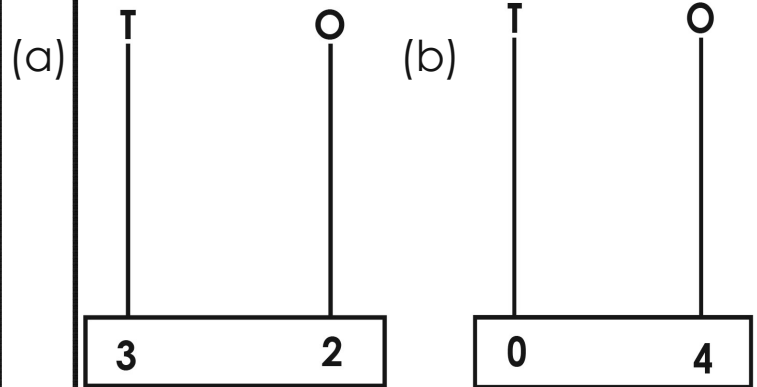
23. Fill in the missing numbers.

(a) 1, 2, 3, _____, 5, _____, 7

(b) 8, _____, 10, 11, _____

24. Show the number on the abacus.

(1 Mrk each)



25. Fill in the missing number.

(1 Mrk each)

(a) $5 + \boxed{} = 8$

(b) Two minus _____ = two