



THE CRANES EXAMINATIONS BOARD

" Ever Forward "

BEGINNING OF TERM TWO EXAMINATIONS 2025

PRIMARY TWO

LITERACY ONE-A

NAME:

SCHOOL:.....

DISTRICT NAME:.....

READ THE FOLLOWING INSTRUCTIONS CAREFULLY

1. This paper has **two** sections: **A** and **B**. Section **A** has **40** questions(**40 Marks**) and Section **B** has **15** questions(**60 Marks**)
2. Answer **ALL** questions. **A** ll answers to both Sections **A** and **B** **must** be written in the spaces provided.
3. **All** answers must be written using a **blue** or **black** ball point pen or ink. Any work in pencil other than diagrams will **not** be marked.
4. Unnecessary **changes** in your work and handwriting that cannot be ready easily may lead to **loss of marks**.
5. Do not fill anything in the table indicated **"FOR EXAMINERS' USE ONLY"**

**FOR EXAMINERS'
USE ONLY**

| SECTION | |
|---------|--|
| A | |
| B | |
| TOTAL | |

***APPROVED BY
TR. BRIDGET
HEAD- LOWER
DEPARTMENT
THE CRANES
EXAMINATIONS
BOARD-KIRA***

THE CRANES EXAMINATIONS BOARD IS WELL EQUIPPED WITH ALL LEARNING ITEMS THAT SUIT YOUR PERFORMANCE DESIRE. FIND US IN KANSANGA OR CALL: 0766737572-0762136454

2025

SECTION:A(40 MARKS)

1. Circle the things we get from animal skins.

cup, shoes, book, bag, pens

2. Name and draw three people found at home.

| | | |
|--|--|--|
| | | |
| | | |



3. Name **two** sources of water.

i) _____ ii) _____

4. a) _____ are things that make our school different from others. (**school garden, school symbols**)

b) Write your school motto.

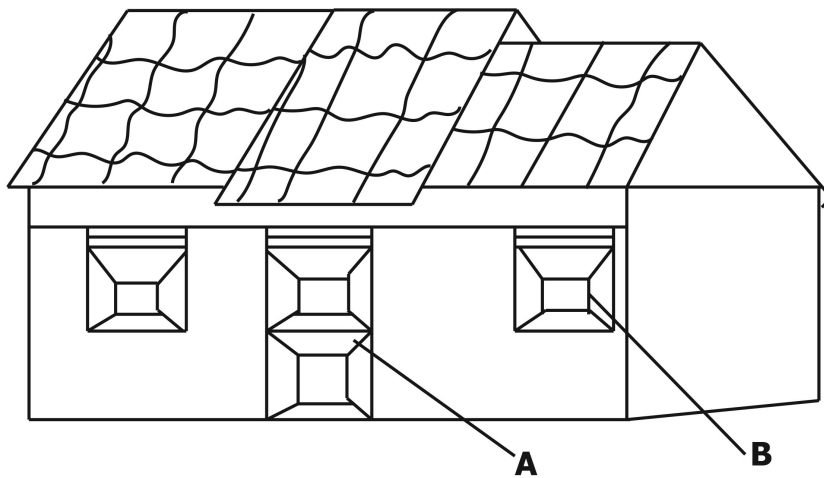
5. Name these things we use to manage rainy weather.

| | |
|---|--|
|  |  |
| | |

6. Draw the road signs.

| | |
|----------------|------------|
| | |
| zebra crossing | No parking |

7. Name the parts of the house marked A and B.



(window, veranda, steps, door)

a) **A:** _____

b) **B:** _____

8. Write four people we find in an extended family.

a) _____

c) _____

b) _____

d) _____

9. A person who treats sick people is a _____.

SECTION B (60 MARKS)

10. Match correctly.

| | |
|--------|---------------------|
| dog | used for transport. |
| hen | gives us mutton. |
| bees | guides our home. |
| sheep | gives us eggs. |
| donkey | give us honey. |

11.a) An _____ is a family where we find father, mother, children and their relatives.

(nuclear family, extended family)

b) Write two roles of children at home.

i) _____

ii) _____

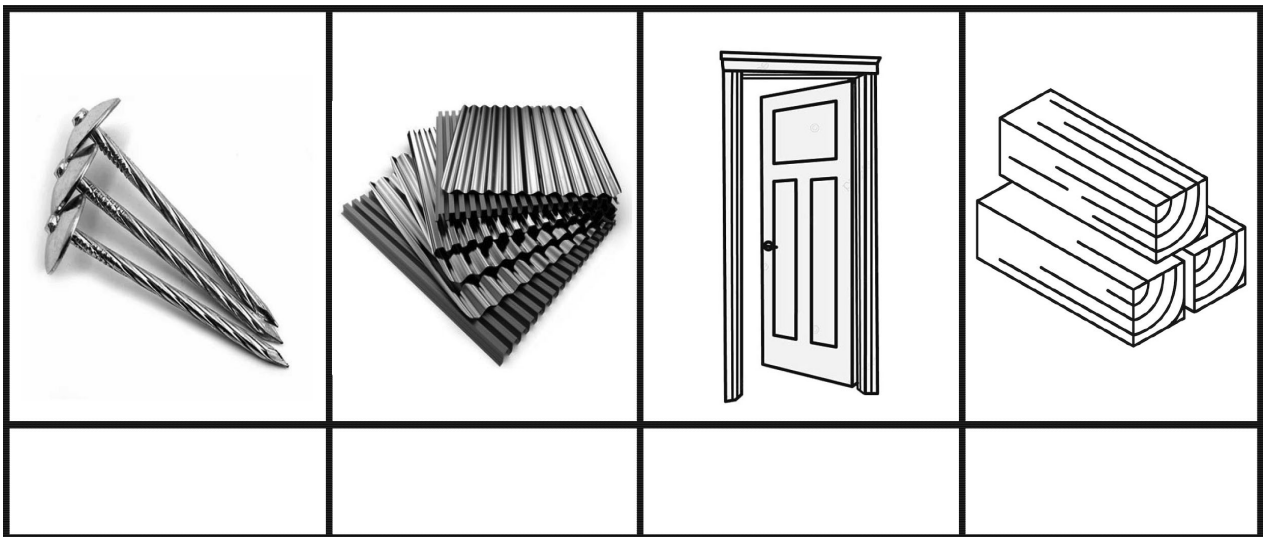
c) **Draw the basic needs below.**

| | | | |
|---------|---------|------|----------|
| | | | |
| shelter | clothes | food | medicine |

12. **Circle four non-living things from the list.**

bench, plant, radio, pig, bag, insect, stone

13. Name these building materials.



(timber, door, iron sheets, nails)

b) Write any **two** examples of houses you know.

i) _____

ii) _____

14. Draw these important places in our community.

| | | |
|----------|--------|--------|
| | | |
| hospital | church | market |

15. Match the people with their roles in the community.

A

doctor

teacher

carpenter

farmer

fisherman

B

teaches children at school.

grows crops in the garden.

catches fish from the lake.

treats sick people.

makes furniture.