

# CREATIVE EDUCATIONAL SERVICES KAMPALA

## BEGINNING OF TERM TWO EXAMINATION 2025

PRIMARY THREE

### LITERACY 1B (SOCIAL STUDIES)

Time allowed: 2 hours 15 minutes

Index Number:

Admission Number						Personal Number		

Candidate's Name: \_\_\_\_\_

Candidate's Signature: \_\_\_\_\_

School Name: \_\_\_\_\_

District Name: \_\_\_\_\_

**DO NOT OPEN THIS BOOKLET UNLESS YOU ARE TOLD TO DO SO**

**Read and follow these instructions carefully:**

1. This paper has two sections: **A** and **B**. Section A has **40** questions and section B has **15** questions. The paper has **10** printed pages.
2. Answer all questions. **All** answers to both sections **A** and **B** must be shown in the spaces provided.
3. All answers must be written using a **blue** or **black** ball point pen or ink. Any answer written in pencils other than on graphs and diagrams will not be marked.
5. No calculators are allowed in the examination room.
6. Unnecessary changes in your work and handwriting that cannot easily be read may lead to **loss of marks**.
7. Do not fill anything in the table indicated: "**FOR EXAMINERS' USE ONLY**" and boxes inside the question paper.

#### FOR EXAMINERS USE ONLY

QN. NUMBER	MARKS	EXAMINER'S INITIAL
1 -10		
11 - 20		
21 - 30		
31 - 40		
41 - 43		
44 - 46		
47 - 49		
50 - 53		
54- 55		
<b>TOTAL</b>		

## SECTION A

**In each of the questions 1 to 5, fill the blank space with a suitable word.**

1. A drawing of an object as seen from above is called \_\_\_\_\_.
2. Cousins and nephews are members of \_\_\_\_\_ family.
3. Rice grows well in \_\_\_\_\_ areas.
4. We use a \_\_\_\_\_ to know the actual distance between places on a map.
5. Lake \_\_\_\_\_ provides us with salt.

**In each of questions 6 to 10, complete with a suitable word from the brackets.**

6. A President is the head of a \_\_\_\_\_. (**county, country**)
7. A \_\_\_\_\_ is a group of people who live and work together. (**family, community**)
8. Coffee is an example of \_\_\_\_\_ crops. (**food, cash**)
9. \_\_\_\_\_ is the highest mountain in Uganda. (**Rwenzori, Elgon**)
10. The largest ethnic group in Uganda is \_\_\_\_\_. (**Nilotics, Bantu**)

**In each of questions 11 to 15, answer in full sentences.**

11. What led to the separation of Gipiir and Labong?

---

---

12. Give the main duty of the police in our community.

---

---

13. Why do we wear clothes?

---

---

14. Who was the kind brother of Nambi?

---


---

15. Name the fastest means of transport.

---

**In questions 16 to 19, draw the map symbols of the given features.**


16. railway line



17. waterfall



18. mountain peak



19. bridge



**For questions 20 to 22, write the given abbreviations in full.**

20. L.C: \_\_\_\_\_

21. R.D.C: \_\_\_\_\_

22. HM: \_\_\_\_\_

**In numbers 23 to 25, write the biggest place.**

23. county, sub-county, district  
\_\_\_\_\_

24. dispensary, clinic, hospital  
\_\_\_\_\_

25. airport, airfield, airstrip  
\_\_\_\_\_

**In each of questions 26 to 30, read the sentence and give one word for the underlined group of words.**

26. The vehicle which carries patients has gone.

---

27. The first domestic animal to be kept by man needs food.

---

28. The capital city of Uganda is big.

---

29. The head of a family has money.

---

30. The three sons of Kintu were strong.

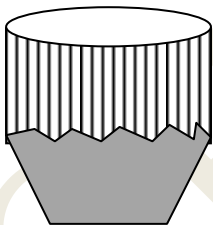
---

**In questions 31 and 32, make a sentence using the given words.**

31. sty: \_\_\_\_\_

32. den: \_\_\_\_\_

**Study the diagram below and answer questions 33 to 35.**



33. Name the instrument shown above.

---

34. What is the use of the above instrument?

---

35. Name the material used to make the instrument above.

---

**For questions 36 to 40, answer ☐ Either Christianity ☐ Or Islam but not both.**

36. **Either:** Who created Adam?

---

**Or:** Who created Adam?

---

37. **Either:** Why do Christians pray?

---

**Or :** Why do Moslems pray?

---

38. **Either:** What should Christians do during lent?

---

**Or :** What should Moslems do during Ramathan?

---

39. **Either:** Name the river where Jesus was baptized.

---

**Or :** Who received the Quran from Allah?

---

40. **Either:** Name one symbol of Christianity found in a home for Christians.

---

**Or :** Name one symbol of Islam found in a home for Moslems.

---

### **SECTION B**

41. **Re-arrange the letters to form school symbols.**

(a) galf 

---

(b) daebg 

---

(c) otomt 

---

(d) ormunfi 

---

42. **Write the services provided by the following people.**

- (a) Doctor: \_\_\_\_\_
- (b) Driver: \_\_\_\_\_
- (c) Teacher: \_\_\_\_\_
- (d) Policeman: \_\_\_\_\_

43. **Match the social service in list A to its source in list B correctly.**

	<b>A (Social service)</b>	<b>B (Source)</b>
(a)	Education	taxi parks
(b)	Health care	police station
(c)	Security	schools
(d)	Transport	hospitals
		banks

- (a) Education: \_\_\_\_\_
- (b) Health care: \_\_\_\_\_
- (c) Security: \_\_\_\_\_
- (d) Transport: \_\_\_\_\_

44. Name any **four** needs of a school.

- (i) \_\_\_\_\_
- (ii) \_\_\_\_\_
- (iii) \_\_\_\_\_
- (iv) \_\_\_\_\_

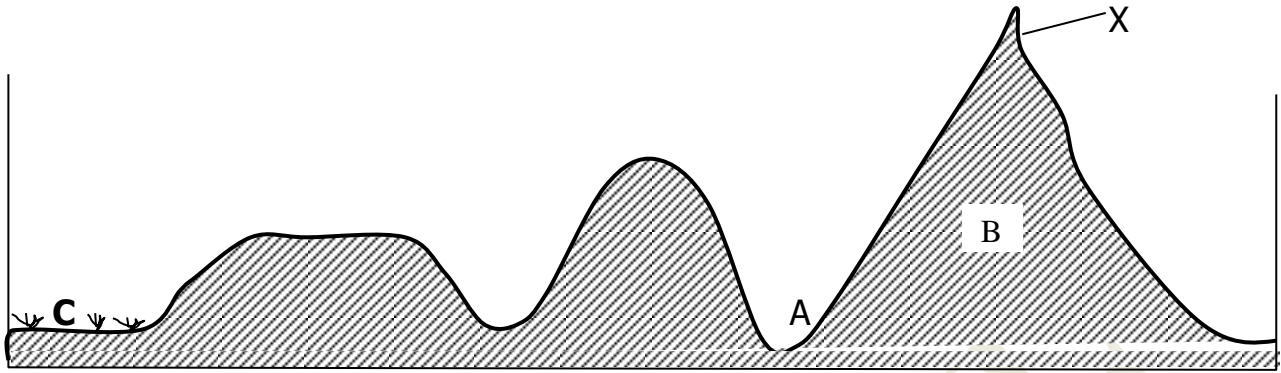
45a) Give any **two** groups of people who use a compass.

- (i) \_\_\_\_\_
- (ii) \_\_\_\_\_

(b) Name any **two** cardinal points of a compass.

- (i) \_\_\_\_\_
- (ii) \_\_\_\_\_

46. **Study the diagram below carefully and answer the questions about it.**



- (a) Name the physical features marked **A** and **B**.

**A** \_\_\_\_\_

**B** \_\_\_\_\_

- (b) What name is given to the point marked **X**?

\_\_\_\_\_

- (c) State any one thing we get from place marked **C**.

\_\_\_\_\_

47. **Complete correctly.**

(a) Mutton is to sheep as pork is to \_\_\_\_\_.

(b) \_\_\_\_\_ is to eggs as cow is to milk.

(c) Fur is to rabbit as \_\_\_\_\_ is to sheep.

(d) Beef is to \_\_\_\_\_ as chicken is to hens and cocks.

48. **Draw and name three means of communication used long ago.**

(horns, smoke, drum)


- 49a) What is a forest?

\_\_\_\_\_  
\_\_\_\_\_

(b) List any **three** things we make from wood.

(i) \_\_\_\_\_

(iii) \_\_\_\_\_

(iii) \_\_\_\_\_

50. **Write True or False about the traditional dances.**

(a) Bakisimba is the dance from Buganda. \_\_\_\_\_

(b) Bagisu have a dance called dingidingi. \_\_\_\_\_

(c) The Acholi's dance is called Imbalu. \_\_\_\_\_

(d) Tameneibuga is common among the Basoga. \_\_\_\_\_

51a) What name is given to a woman who produces twins?

\_\_\_\_\_

(b) Write the surname for Babirye's twin sister.

\_\_\_\_\_

(c) Give **one** use of a name.

\_\_\_\_\_

(d) Name Wasswa's twin brother.

\_\_\_\_\_

**In each of questions 52 to 55, Answer Either a Christian Or an Islamic question but not both.**

52. **Either:**

(a) In the story of creation, where did Adam and Eve live?

\_\_\_\_\_

(b) What kind of food did they eat?

\_\_\_\_\_

(c) Who tempted Eve?

\_\_\_\_\_

(d) What sin did Eve commit?

\_\_\_\_\_

**Or:**

(a) What sin did Adam and Hawa commit?

---

(b) Write **three** things which annoy Allah.

(i) \_\_\_\_\_

(ii) \_\_\_\_\_

(iii) \_\_\_\_\_

53. **Either:**

(a) Mention two good things God has given to you.

(i) \_\_\_\_\_

(ii) \_\_\_\_\_

(b) Write two groups of people who need help.

(i) \_\_\_\_\_

(ii) \_\_\_\_\_

**Or:**

(a) Mention **two** good things you ask from Allah in prayer.

(i) \_\_\_\_\_

(ii) \_\_\_\_\_

(b) Name any **two** afternoon prayers.

(i) \_\_\_\_\_

(ii) \_\_\_\_\_

54. **Either:**

(a) **Draw and name two things God created.**


(b) Give two things you can do to make God happy.

(i) \_\_\_\_\_

(ii) \_\_\_\_\_

**Or:** (a) **Draw and name two things Allah created.**


(b) Give any **two** things you can do to make Allah happy.

(i) \_\_\_\_\_

(ii) \_\_\_\_\_

55. **Either:**

(a) **Draw and name the Christian symbol found on churches.**



(b) How do you show respect to God during prayer?


\_\_\_\_\_

(c) Give any **two** things which are not allowed in church.

(i) \_\_\_\_\_

(ii) \_\_\_\_\_

**Or:** (a) Draw the Islamic symbol found on Mosques.



(b) How do you show respect to Allah during prayer

\_\_\_\_\_

(c) Give any **two** things that are not allowed in a mosque.

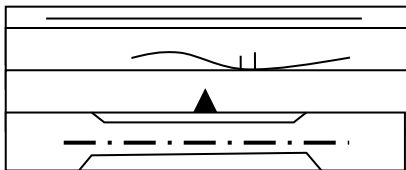
(i) \_\_\_\_\_

(ii) \_\_\_\_\_

***Good Luck***

### **Marking guide for P3 Lit 2ABOT II 2025**

1. A map
2. Extended
3. Swampy
4. Scale
5. Katwe
6. Country
7. Community
8. Cash
9. Rwenzori
10. Bantu
11. The spear and the bead led to the separation of Gipiir and Labong.
12. To keep Law and order.
13. To keep warm: To look smart.
14. Kaikuzi.
15. Aeroplane.



- 16.
- 17.
- 18.
- 19.
20. Local Council.
21. Resident District Commissioner.
22. Headmaster.
23. District
24. Hospital
25. Airport
26. Ambulance
27. Dog
28. Kampala
29. Father
30. Kana
- 31.
- 32.
33. Drum
34. Communication/entertainment
35. Animal skins/wood
36. Either: God  
Or: Allah
37. Either: To thank God/To make requests/To repent.  
Or: To thank God/To make requests/To repent.
38. Either: fast  
Or: fast
39. Either: Jordan  
Or: Muhammad

40. Either: Cross/Bible/Hymn books/Rosary  
Or: Quran
41. (a) Flag  
(b) badge  
(c) motto  
(d) uniform
42. (a) To treat the sick people.  
(b) To control vehicles to places.  
(c) To teach children.  
(d) To keep law and order.
43. (a) Education schools  
(b) Health care hospitals  
(c) Security police station  
(d) Transport taxi parks
44. Furniture/Stationery/Structures/Electricity/Waters
45. Police/South West/
46. (a) A - Valley  
B. - Mountain  
(b) peak  
(c) fish/rice/water/clay/
47. (a) pigs  
(b) Hen  
(c) wool  
(d) cattle/cow
- 48.
49. (a) A group of trees in one place.  
(b) chairs/boxes/tables/beds
50. (a) True  
(b) False  
(c) False  
(d) True
51. (a) Nalongo  
(b) Nakato  
(c) For identification (showing one)  
(d) Kato
52. Either:  
(a) Garden of Eden.  
(b) Fruits/vegetables  
(c) Satan/devil/serpent/snake  
(d) Eating the forbidden fruit.  
Or:  
(a) Eating the forbidden fruit.  
(b) (i) stealing/Dodging prayer  
(ii) killing/ dodging saum  
(iii) telling lies/dodging zakat
53. Either:  
(a) Hands/eyes/legs/mouth/environment/

(b) Elderly/young children/disabled/sick.

Or:

(a) Forgiveness/joy/food/fife/good  
friends.

(b) Zuhur, Aswir

54. – Either:

(a)

(b) Pray/worship/praise/help the needy/give.

Or:

(a)

(b) Pray/pay zakat/fast.

55. Either:

(a)

(b) By kneeling down.

(c) Alcohol/fighting/abusing each  
other/making noise/playing.

Or:

(a)

(b) Facing the Ka'abah/Not making noise.

(c) Making noise/sleeping during  
prayers/entering with shoes.