



**PRIMARY THREE  
BEGINNING OF TERM I EXAMINATION 2025  
LITERACY 1B (SOCIAL STUDIES)**

My name is \_\_\_\_\_

My school is \_\_\_\_\_

My class is \_\_\_\_\_

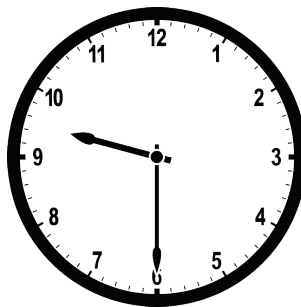
**SECTION A: 40 MARKS**

1. Name any **one** leader at school.

2. Write down **one** animal used for hunting.

3. Name the biggest government hospital in Uganda?

4. How is the instrument below useful in a classroom?



5. Give a reason why a cow needs water.


6. Name the school symbol that identifies a school-going child.

7. Who moves a ship on top of water?

8. What do we call a home and its surroundings?

9. In which type of weather do people harvest water?

10. Give a reason why a helicopter is not commonly used by people in our community.
- 
11. Name the building where we find story books.
- 
12. Mention any **one** thing found on a timetable.
- 
13. Write down **one** craft made by a potter.
- 
14. Why is a hut called a temporary house?
- 
15. In what type of family do we find grandparents?
- 
16. Mention any **one** road sign that controls traffic jam on busy roads.
- 
17. Name **one** recreational centre where pupils go for swimming.
- 
18. Name any **one** play material used at school.
- 
19. State **one** role of prefects at school.
- 
20. Mention the cultural ceremony where we find a bridegroom and a bride.
- 
21. How are shops important in our community?
- 
22. Give **one** use of the item below.



23. Name **one** thing a school can buy from its community.
-

24. Which tribe speaks Lugishu language?
- 
25. What do we call the two children born on the same day by the same mother?
- 
26. How is a bank useful to people in your community?
- 
27. Write down **one** example of a cloth worn by girls.
- 
28. Why are snakes not kept by people in their homes?
- 
29. Mention **one** tool used by a cleaner to keep our school clean.
- 
30. Where do people get iron sheets for building houses?
- 
31. Write down any **one** garden tool.
- 
32. When do Ugandans celebrate their independence?
- 
33. Mention any **one** place where people go for holidays.
- 
34. How is a school signpost useful to people in a community?
- 
35. Write down any **one** children's right.
- 
36. Mention any **one** thing that makes up culture.
- 
37. What do we call the laws learners must follow in a classroom?
- 
38. Mention **one** item used by your mother to communicate to people in far areas.
- 
39. Who collects school fees at school?
- 
40. Give **one** importance of windows on a house.
-

## SECTION: B 60 MARKS

41. a) Draw these types of weather.

Sunny weather	Windy weather

b) Name the element of water in the dry season.

c) Mention any **one** thing used for managing the wet season.

42. Match the following people to their roles:

A carpenter

grows crops.

A fishmonger

repairs vehicles.

A farmer

makes furniture.

A mechanic

sells fish.

i) \_\_\_\_\_

ii) \_\_\_\_\_

iii) \_\_\_\_\_

iv) \_\_\_\_\_

43. a) What do we call the activities people do during their free time?

b) List down **two** examples of recreation activities.

i) \_\_\_\_\_

ii) \_\_\_\_\_

c) Why do pupils go for holidays?

44. a) Name the smallest community in our sub-county.


b) Mention any **two** things a good home must have.

i) \_\_\_\_\_ ii) \_\_\_\_\_

c) Give **one** reason why people build houses.

45. a) What do we call things we make out of local materials using our hands?

b) Name these things we make using our hands.



46. a) Mention **two** ways people celebrate.

i) \_\_\_\_\_


ii) \_\_\_\_\_

b) Write down any **two** ceremonies that take place at school.

i) \_\_\_\_\_ ii) \_\_\_\_\_

c) How can you help a neighbour in need?

48. Study the picture below and answer the questions that follow.



a) Name the type of transport shown in the diagram above.

b) Identify the means of transport used in the above picture.

c) Write down any **two** causes of road accidents.

i) \_\_\_\_\_

ii) \_\_\_\_\_

49. a) Mention any **two** people found and work at school.

i) \_\_\_\_\_ ii) \_\_\_\_\_

b) Why are children taken to school?

c) Name any **one** tool teachers use while in class.

50. a) Name the animal that lives in a kennel.

b) Identify any **two** animals that live in a bush.

i) \_\_\_\_\_ ii) \_\_\_\_\_

c) How are wild animals kept in the zoo useful to us?

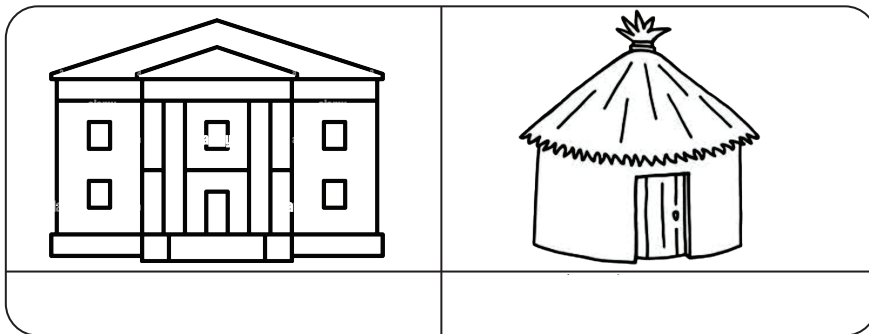
51.a) List down any **two** examples of utensils.

i) \_\_\_\_\_ ii) \_\_\_\_\_

b) Which utensil is used for cooking?

c) Why is it good to keep utensils clean?

52. a) Name these types of houses.



b) Mention any **two** materials used to construct houses.

i) \_\_\_\_\_ ii) \_\_\_\_\_

53. a) List down any **two** activities children do during holidays.

i) \_\_\_\_\_ ii) \_\_\_\_\_

b) Write down any **two** needs of children.

i) \_\_\_\_\_ ii) \_\_\_\_\_

54. a) What is the work of a policeman in our sub-county?

b) Write down **two** tools used by a policeman.

i) \_\_\_\_\_ ii) \_\_\_\_\_

c) Mention any **one** group of wrongdoers handled by policemen

55. a) Write down any **one** ceremony that takes place at home.

b) Give **one** reason why people attend ceremonies.

c) Mention any **two** types of foodstuffs people eat on parties.

i) \_\_\_\_\_ ii) \_\_\_\_\_

**END**