



**PRIMARY FOUR
BEGINNING OF TERM I EXAMINATION 2025
MATHEMATICS**

Name: _____

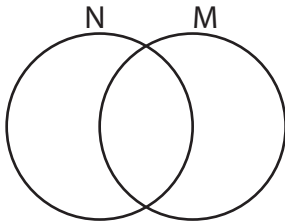
Class: _____

School: _____

SECTION A (40 MARKS)

1. Add: 4 1
 + 1 7

2. On the Venn diagram below, shade set M.



3. Find the next number in the sequence.
17, 18, 20, 23, 27, _____


4. Ernest bought the following items from a shop.

book	sh 1200
pen	sh 300
rubber	sh 200

How much did he pay for all the items?

5. Write the place value of 9 in 493.

6. On the clock face below, show half past nine.



7. In the space provided, draw a rectangle.

8. Simplify: 8 goats + 2 goats + 3 goats

9. Convert 400cm to metres.

10. Write $\frac{3}{4}$ in words.

11. Agnes is 5 years old. If Peter is 2 years older than Agnes, how old is Peter?

12. Given that  represents 3 mangoes, draw such pictures to represent 15 mangoes.

13. Given that set $A = \{p, q, r, s, t\}$ and set $B = \{p, o, r, t\}$. Find $A \cap B$

14. Fill in the box correctly.

$$\boxed{} - 4 = 6$$

15. Expand 94 in value form.

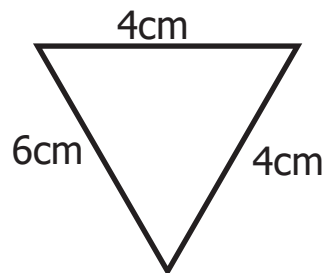
16. Work out:

Kilograms	Grams
4	700
+ 3	215
<hr/>	
<hr/>	

17. Work out:

$$\begin{array}{r} 2 \overline{) 24} \end{array}$$

18. Find the total distance around the figure below.



19. Change 3 weeks to days.

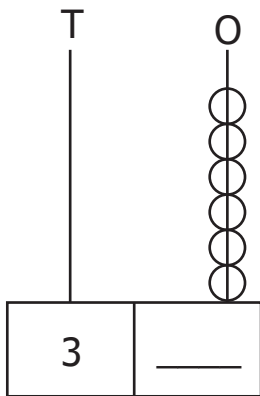
20. Subtract $\frac{2}{7}$ from $\frac{5}{7}$.

SECTION B (60 MARKS)

21. Find the number that was expanded to give: (2 marks)
 $(4 \times 1000) + (6 \times 1)$

b) Work out the value of 7 in 571. (2 marks)

c) Complete the abacus below correctly. (2 marks)

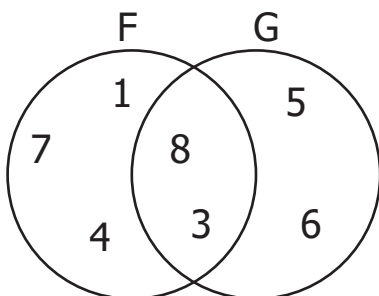


22. Work out: (2 marks)
 $\frac{3}{8} + \frac{2}{8}$

b) On the diagram below, shade $\frac{3}{5}$. (2 marks)



23. Study the Venn diagram below carefully and use it to answer the questions that follow.



a) How many elements are there in FUG? (2 marks)

b) List all the elements of set F. (2 marks)

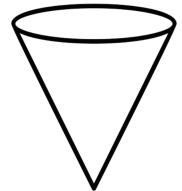
c) How many elements are not found in set G? (2 marks)

24. Name the following geometric shapes. (1 mark each)

i)



ii)



b) Draw the following shapes. (1 mark each)

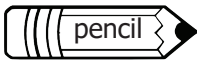
i) square

ii) circle

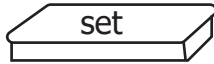
25. Below are the items to be bought by a P.4 boy from a supermarket.



sh 1000



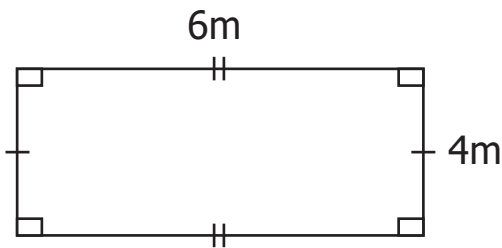
sh 500



sh 2000

- a) How much is paid for 2 pencils?
(2 marks)
- b) How much more is a set than a pencil?
(2 marks)
- c) If he bought each of the above items, how much did he pay altogether?
(2 marks)

26. The diagram below shows a playground.



- a) Work out the area of the playground.
(2 marks)

- b) Calculate the perimeter of the playground.
(2 marks)

27. Use $>$, $<$, or $=$ to complete the statements.
(2 marks each)

i) $7 + 7$ _____ $21 - 7$


ii) 3×0 _____ $3 + 0$

iii) $12 \div 3$ _____ $12 \div 6$

28. Change 2 hours to minutes.
(2 marks)

- b) A farmer planted beans in the ninth month of the year.
Name the month in which the beans were planted. (1 mark)

- c) Tell the time shown on the clock face.
(2 marks)



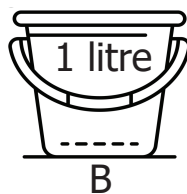
29. Find the missing number in each of the following. (2 marks each)

i) $\square - 6 = 17$

ii) $7 + \square = 9$

iii) $6 \times \square = 18$

30. Study the two containers below carefully.



a) Which container holds more water? (1 mark)

b) Which container holds less water? (1 mark)

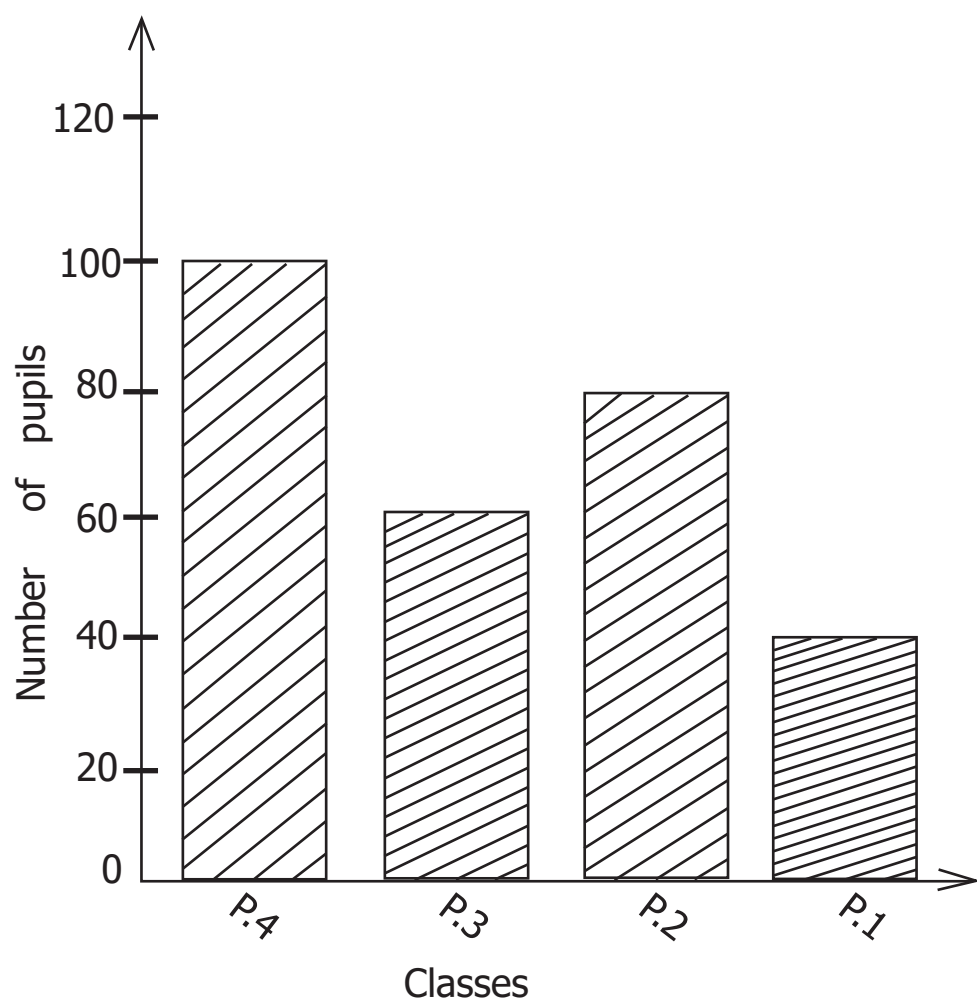
c) How many containers of size B can be used to fill container A? (2 marks)

31. a) List all the even numbers between 1 and 9. (2 marks)

b) List all the odd numbers less than 7. (2 marks)

c) Find the even number that comes just after 18. (1 mark)

32. The graph below shows the number of pupils in some classes at Kamuli Primary School.



- a) Which class has the least number of pupils? (1 mark)
- b) How many more pupils are in P.2 than P.1? (2 marks)
- c) Work out the total number of pupils in all the four classes. (2 marks)

END