



# THE SPECTRUM EXAMINATIONS HUB

Beginning of term two Assessment 2025

P.4 Social Studies with Religious Education

Time Allowed: 2hrs and 15 minutes

NAME: \_\_\_\_\_ STREAM \_\_\_\_\_

SCHOOL \_\_\_\_\_

Read the following instructions carefully:

1. This paper has two sections: A and B
2. Section A has 40 questions (40 marks)
3. Section B has 15 questions (60 marks)
4. Answer all questions. All the work for both sections A and B must be shown in the spaces provided.
5. All work must be done using a blue or blackball point pen or ink. Any work done in pencil will NOT be marked except drawings and diagram.
6. Unnecessary changes in your work and handwriting that cannot be easily read may lead to loss of marks.
7. Do not fill anything in the table indicated; "For examiners' use only" and the boxes inside the question paper.


## FOR EXAMINERS' USE ONLY

Qn No.	MARKS	EXR'S
1 - 10		
11 - 20		
21 - 30		
31 - 40		
41 - 43		
44 - 46		
47 - 49		
50 - 52		
53 - 55		
TOTAL		

**Turn over**

## SECTION A: 40 MARKS

- 1- Name any one cardinal point of a compass.  
\_\_\_\_\_
- 2- How are mobile phones useful the people in your district?  
\_\_\_\_\_
- 3- What do we call a place where money is kept safely?  
\_\_\_\_\_
- 4- Write down any one activity done by both girls and boys at home.  
\_\_\_\_\_
- 5- Mention any one symbol of a clan.  
\_\_\_\_\_
- 6- State any one reason why parents send their children to school.  
\_\_\_\_\_
- 7- How is a nurse useful to school children?  
\_\_\_\_\_
- 8- Name any one social service center where we get security services.  
\_\_\_\_\_
- 9- What is the main economic activity carried out on water bodies?  
\_\_\_\_\_
- 10- Apart from a right to food, mention any other right a child should enoy.  
\_\_\_\_\_
- 11- Under which ministry in Uganda is your school?  
\_\_\_\_\_
- 12- Name the feature found on the two-hundred shilling coin.  
\_\_\_\_\_
- 13- Which element of a good map explains map symbols and colours?  
\_\_\_\_\_
- 14- Give the main reason why a P.4 pupil should have the tool below.  
\_\_\_\_\_



- 15- In which way are nimbus clouds useful to people?  
\_\_\_\_\_
- 16- Why do people rear donkeys?  
\_\_\_\_\_

- 17- Name the main source of food for people in your community.  
\_\_\_\_\_
- 18- Give any one example of play materials in your school.  
\_\_\_\_\_
- 19- Write down any one example of child abuse.  
\_\_\_\_\_
- 20- Name one activity at school where teachers check the children's hygiene.  
\_\_\_\_\_
- 21- How is a library important to pupils at school?  
\_\_\_\_\_
- 22- What is the meaning of the term "Legends"?  
\_\_\_\_\_
- 23- Mention the largest fresh water lake in Uganda.  
\_\_\_\_\_
- 24- State one modern way of preserving fish.  
\_\_\_\_\_
- 25- What is the opposite direction of south west?  
\_\_\_\_\_
- 26- Why is a zebra crossing put on a busy road?  
\_\_\_\_\_
- 27- Write LDU in full.  
\_\_\_\_\_
- 28- Give the reason why every school should have cleaners.  
\_\_\_\_\_
- 29- What do we call man and his surrounding?  
\_\_\_\_\_
- 30- State one importance of planting trees in the school compound.  
\_\_\_\_\_
- 31- Name one function where people use flowers for decoration.  
\_\_\_\_\_
- 32- Give the name of the school symbol below.  
\_\_\_\_\_



- 33- Why is it good for school children to have holidays?  
\_\_\_\_\_

34- Give any one cause of accidents on roads in your community.

35- What is a plateau?

**For questions 36-40, answer either Christianity or Islam but not both on the same number.**

36- **Either:** Who was the mother of Jesus?

**Or:** Who was the mother of Prophet Muhammad?

37- **Either:** On which day do Christians celebrate Jesus' birth?

**Or:** On which day do Muslims observe Juma prayers?

38- **Either:** Mention any one symbol of Christianity.

**Or:** Mention any one symbol of Islam.

39- **Either:** Name any one book in the New Testament part of the Bible.

**Or:** Which book was received by Prophet Musa?

40- **Both:** who created the universe?

### **SECTION B: 60 MARKS**

41- (a) What I a family?

(b) Write down any two types of families.

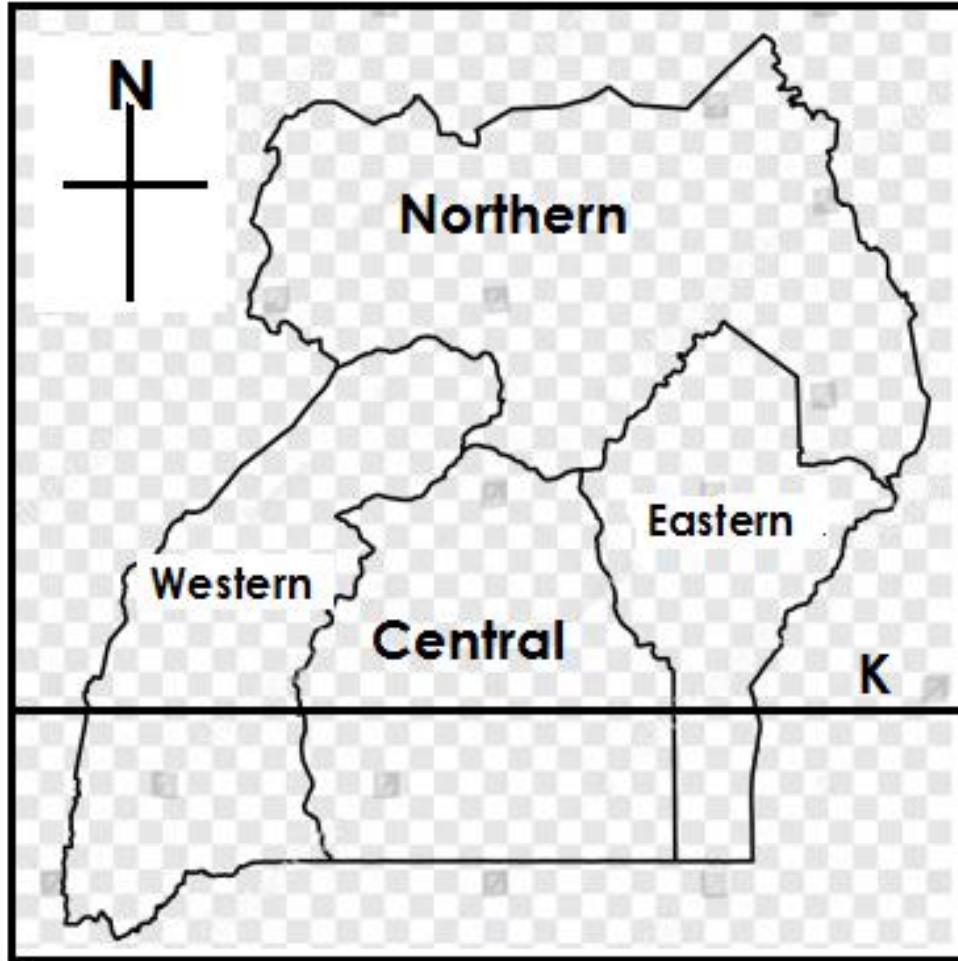
(i)\_\_\_\_\_ (ii)\_\_\_\_\_

(c) Mention any one duty of a family-head.

42- **Complete the table below.**

<b><u>Raw material</u></b>	<b><u>source</u></b>	<b><u>product</u></b>
(i).....	forests	mats , hats
(ii) sand	lakes	.....
(iii) clay	.....	pots , tiles
(iv) limestone	hills	.....

43- Study the map below and answer questions about it.



a) For which country is the above map?

b) Name the line of latitude marked **K**.

c) State the importance of the element labeled **N** on the map above.

d) Shade the region on the map where your district is found.

44- (a) What are recreation activities?

(b) Give any two importance of recreation activities.

(i) \_\_\_\_\_

(ii) \_\_\_\_\_

(c) Which recreation activity is done in a swimming pool?

45- Match list **A** and list **B** correctly.

**A**

- a) Mundu and Sera
- b) Gipiir and Labongo
- c) Bukuku
- d) Kintu

**B**

- first Muganda
- gate keeper of Isaaza
- sons of alum
- first Bagisu

- a) Mundu and Sera \_\_\_\_\_
- b) Gipiir and Labongo \_\_\_\_\_
- c) Bukuku \_\_\_\_\_
- d) Kintu \_\_\_\_\_

46- (a) State one social value of keeping domestic animals.

\_\_\_\_\_

(b) Mention any two products made from animal skins.

(i) \_\_\_\_\_

(ii) \_\_\_\_\_

(c) How can domestic animals be cared for?

\_\_\_\_\_

47- (a) What is the major duty of the Uganda police force?

\_\_\_\_\_

(b) Identify any two tools used by the police to keep law and order.

(i) \_\_\_\_\_

(ii) \_\_\_\_\_

(c) What animal is used by people to keep security in their homes?

\_\_\_\_\_

48- (a) What are ceramics?

\_\_\_\_\_

(b) Write any two examples of ceramics.

(i) \_\_\_\_\_

(ii) \_\_\_\_\_

(c) Name the material used to make ceramics.

\_\_\_\_\_

49- (a) What are swamps?

\_\_\_\_\_

(b) Name any one building material got from swamps.

\_\_\_\_\_

(c) Mention any two importance of swamps to people.

(i) \_\_\_\_\_

(ii) \_\_\_\_\_

50- (a) Why do we have leaders in our communities?

\_\_\_\_\_

(b) Mention any one type of leaders.

\_\_\_\_\_

(c) Give any two qualities of a good leader.

(i) \_\_\_\_\_

(ii) \_\_\_\_\_

**For questions 51 -55, answer either Christianity or Islam but not both on the same number.**

**51- Both:**

(a) Give any two things we can give to God/Allah.

(i) \_\_\_\_\_

(ii) \_\_\_\_\_

(b) State any two reasons why we give to God/ Allah.

(i) \_\_\_\_\_

(ii) \_\_\_\_\_

**52- Either:**

(a) In which town was Jesus Christ born?

\_\_\_\_\_

(b) Which king wanted to kill baby Jesus?

\_\_\_\_\_

(c) How were the wise men able to know the birth place of Jesus?

\_\_\_\_\_

(d) Who baptized Jesus Christ?

\_\_\_\_\_

**Or:**

(a) Name the books which were received by the prophets below.

(i) Isa \_\_\_\_\_

(ii) Musa \_\_\_\_\_

(b) Give two reasons why Holy books are important in Islam.

(i) \_\_\_\_\_ (ii) \_\_\_\_\_

**53- Either:**

(a) In which garden did Adam and Eve live?

\_\_\_\_\_

(b) Why did God chase Adam and Eve from the above garden?

\_\_\_\_\_

(c) Name the two sons of Adam and Eve.

(i) \_\_\_\_\_ (ii) \_\_\_\_\_

**Or:**

(a) In which garden did Adam and Hawa live?

(b) Mention the two sons of Adam and Hawah.

(i) \_\_\_\_\_

(ii) \_\_\_\_\_

(c) Why did Allah chase Adam and Hawah from that garden?

**54- Either:**

(a) Give any two body parts Christians use to worship God.

(i) \_\_\_\_\_

(ii) \_\_\_\_\_

(b) Mention two ways Christians worship God.

(i) \_\_\_\_\_

(ii) \_\_\_\_\_

**Or:**

(a) Give any two body parts Muslims use to worship God.

(i) \_\_\_\_\_


(ii) \_\_\_\_\_

(b) Mention two ways Muslims worship God.

(i) \_\_\_\_\_

(ii) \_\_\_\_\_

**55- Both:** How are the following used to serve God / Allah?



\_\_\_\_\_

\_\_\_\_\_

\_\_\_\_\_

\_\_\_\_\_

\_\_\_\_\_

\_\_\_\_\_

\_\_\_\_\_

\_\_\_\_\_

**END**