



VICTORY STEP EDUCATION SERVICES-KAMPALA

PRIMARY FIVE MID-TERM EXAMINATION

2025

SOCIAL STUDIES AND RELIOUS EDUCATION

Time Allowed: 2 hours 30 minutes

Index No.	EMIS No.					Personal No.		

Candidate's Name:

Candidate's Signature:

School Name:

District Name:

Read the following instructions carefully:

1. Do not write your **school** or **district name** anywhere on this paper.
2. This paper has **two** sections: **A** and **B**. Section **A** has **20** questions and section **B** has **12** questions. The paper has **15 printed pages**.
3. Answer **all** the questions. **All** the working for both sections **A** and **B** must be shown in the spaces provided.
4. **All** the working **must** be done using a **blue** or **black** ball point pen or ink. Any work done in pencil other than graphs and diagrams will **not** be marked.
5. **No calculators** are allowed in the examination room.
6. Unnecessary **changes** in your work and handwriting that cannot be read easily may lead to **loss of marks**.
7. Do not fill anything in the table indicated: **"FOR EXAMINERS' USE ONLY"** and boxes inside the question paper.

FOR EXAMINERS' USE ONLY		
QN. NO.	MARKS	EXR'S NO.
1 - 5		
6 - 10		
11 - 15		
16 - 20		
21 - 22		
23 - 24		
25 - 26		
27 - 28		
29 - 30		
31 - 32		
TOTAL		

SECTION A


1. Name any **one** member of an extended family.

2. Mention **one** social service center where people get education.

3. Why should pedestrians cross busy roads at a Zebra crossing point?

4. Write **one** group of people that promotes peace and security in the community.

5. Draw a map symbol for a dam in the space provided below.



6. State any **one** way people can manage sunny weather.

7. Give any **one** means of road transport in your community.

8. How can soil erosion be controlled in hilly areas of Uganda?

9. State **one** way in which a market helps to meet people's needs.

10. Give any **one** reason why we need a mother in a family.

11. Write the importance of vegetation to wild animals.

12. State **one** way children abuse their own rights.

13. How can parents promote culture among their children?

14. Mention **one** importance of a key on a map.

15. Give any **one** way of caring for social service centers in our community.

16. In which one way are mobile phones important to people?

17. How do rivers promote industrialization in Uganda?

18. Write **R.D.C** in full form.

19. Why the equator is marked 0° degrees on the globe?

20. Mention any **one** way early man obtained food.

21. Name any **one** group of people who use a compass at their work.

22. In which season do most farmers harvest their crops?

23. Why are legends taught in schools?

24. How was the formation of Mt. Elgon different from that of Mt. Rwenzori?

25. Give any **one** way a P.5 child can promote peace at home.

26. Name any **one** source of materials for making crafts.

27. Why is Uganda called a land locked country?

28. How are hills important to communication companies?

29. Name any **one** social activity that bring people together for joy.

30. Give any **one** reason why people migrate today.

31. Mention any one danger of child abuse.

32. Name the road sign below.



33. Give any one example of an economic activity carried out in your area.

34. Name the type of forest where we get hard wood.

35. How can you keep your classroom clean?

For numbers 36 – 40, Answer Either Christianity Or Islam BUT NOT both of the same number.

Either: 36. Name the creature God created on the 6th day.

Or: Name the creature Allah created on the 6th day.

Either: 37. Why did God send Jesus Christ on earth?

Or: How did Prophet Muhammad (**P.B.U.H**) promote the spread of Islam?

Either: 38. Why did Abraham accept to sacrifice his son?

Or: Why did Prophet Ibrahim accept to sacrifice his son?

Either: 39. Give any one way a Christian child prepares for church services.

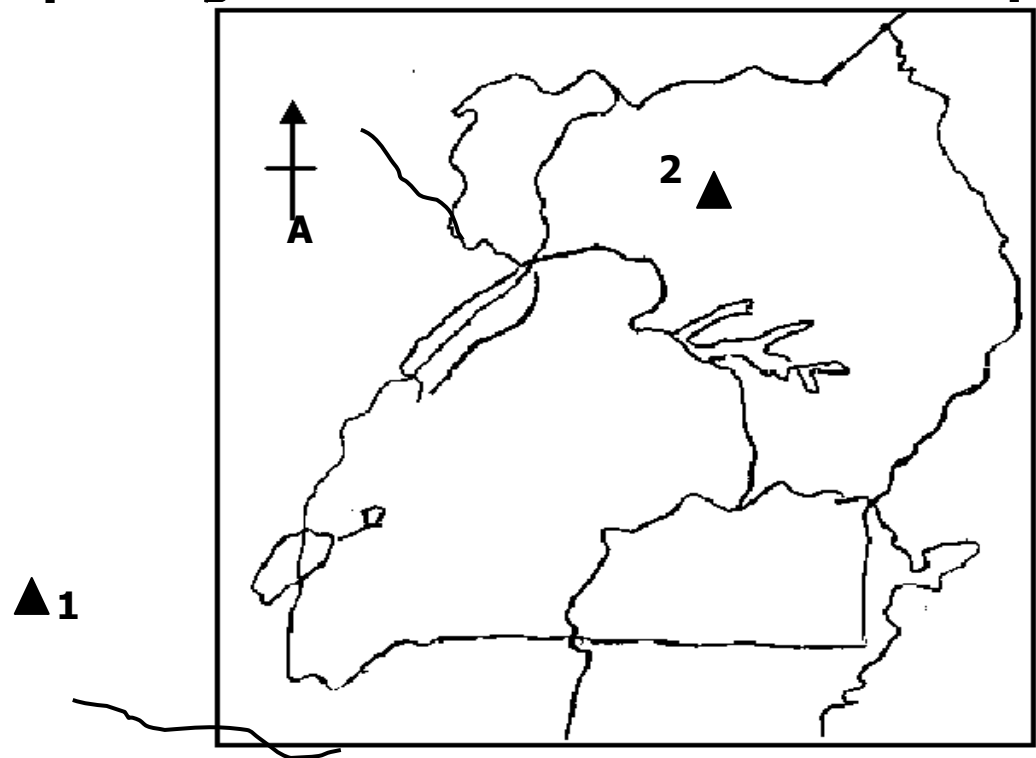
Or: Give any one way a Muslim child prepares for Juma prayers.

Either: 40.Name any one Christian symbol.

Or: Name any one symbol in Islamic faith.

SECTION B (60 marks)

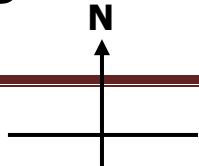
41.Study the map of Uganda below and answer the questions that follow.

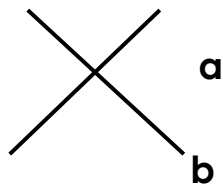


- a) Name Mountains marked **1** and **2**.
(i) 1 _____
(ii) 2 _____
(b) Name the part of R. Nile marked **A**.

(c) Use letter **Y** to show River Katonga on the map.
- 42.(a) Give two reasons why the government creates new district.
(i) _____
(ii) _____
(b) Write the title given to the political leader of;
(i) District _____
(ii) A country _____
43. (a) Mention any **two** rights children must enjoy.
(i) _____
(ii) _____
(b) Mention any **two** basic needs of a child.
(i) _____
(ii) _____

44. Use the diagram below to answer the questions that follow.





(a) Name the diagram shown above.

(b) Which directions are marked **a** and **b**?

a _____

b _____

(c) What problem will a map reader face for using a map without the diagram above?

45 (a) Write any **one** type of holiday.

(b) Give any **two** importances of holidays to school children.

(i) _____

(ii) _____

(c) Mention any **one** activity done by children during holidays.

46. (a) State any **two** common causes of road accidents.

(i) _____

(ii) _____

(b) Write any **two** ways the government can reduce the road accidents.

(i) _____

(ii) _____

47. **Match the raw materials with their products in List B correctly.**

LIST A

a) Ground nuts

b) Limestone

c) Cotton

d) Timber

LIST B

clothes

furniture

cooking oil

cement

CORRECT ORDER

a)Ground nuts _____

b) Limestone _____

c) Cotton _____

d)Timber _____

48. (a) what is transport?

b) Mention any **two** means of road transport.

(i) _____

(ii) _____

(c) How does transport promote trade in your community?

49.a) Give **two** roles of a good leader.

- (i) _____
(ii) _____
b) Write any **two** qualities of a good leader.
(i) _____
(ii) _____

50. (a) In which **two** ways does a community benefit from a school?

- (i) _____
(ii) _____
b) Write any **two** ways the school benefits from the community..
(i) _____
(ii) _____

For questions 51 – 55, Answer Either Christianity OR Islam but not both.

EITHER: 51 a) Write any **one** good practice that a P.5 child can do during lent.

b) In which **two** ways does God reward people who are good?

- (i) _____
(ii) _____

c) State any **one** thing that a God fearing person does.

OR: a) Write any **one** good practice that a P.5 child can do during Ramadhan.

b) In which **two** ways does Allah reward people who are good?

- (i) _____
(ii) _____

c) State any **one** thing that a good Muslim does.

EITHER: a52) Name the servant of God who led the Israelites out of Egypt.

b) Mention any two problems that the Israelites faced on their way to the Promised Land.

- (i) _____
(ii) _____

c) Why did Moses fail to reach the Promised Land?

OR: a) Name the servant of Allah who led the Ban Israel out of Egypt.

Mention any two problems that the Ban Israel faced on their way from Egypt.

Why did Allah choose Prophet Musa to rescue the Ban Israel?

EITHER: 53 a) Name the river where Jesus Christ was baptized from.

b) Why are people baptized?

c) Mention any **two** items used during baptism.

- (i) _____
- (ii) _____

OR: a) Name the place where Prophet Muhammad (PBUH) was born.

b) Write any **one** way Allah punishes people who do not fast.

c) Mention any two things that are impure (unclean) in Islamic faith.

- (i) _____
- (ii) _____

EITHER: 54 a) Name the punishment God gave to the following after sinning;

- (i) Adam _____
- (ii) Eve _____
- (iii) Serpent _____

b) What can people do to reduce sinning in your community?

OR: a) Name the punishment Allah gave to the following after sinning;

- (i) Adam _____
- (ii) Hawa _____
- (iii) Snake _____

(b) What do people do to reduce sinning in your community?

EITHER: 55a) what is prayer?

b) Why do people pray?

- (i) before eating food _____
- (ii) before writing an exam _____
- (iii) on arrival after a long journey _____

OR: a) What is salat?

b) Why do people pray?

- (i) Before eating food _____
- (ii) before writing an exam _____
- (iii) On arrival after a long journey _____

*******END*******