

P.5 END OF TERM 1



SST GUIDE



Scan to Download App



www.elearnuganda.com

COMING UP

PRE- MOCK 2025 (5 SETS)

NAME:.....

SCHOOL:.....



0780-438054

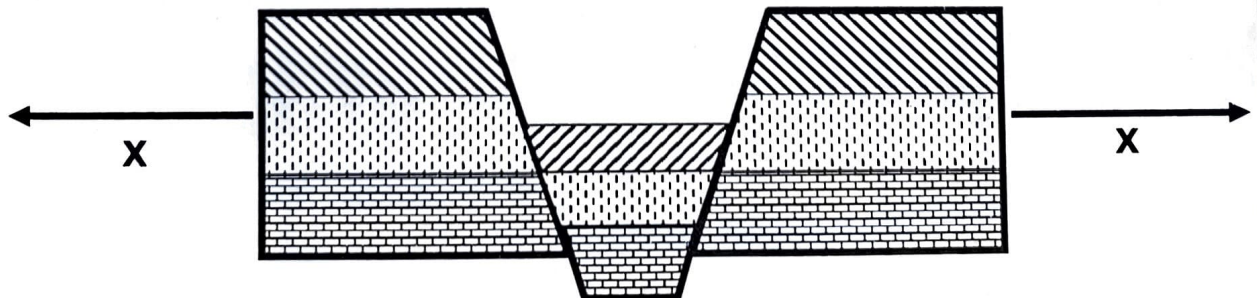


0708-438054

SECTION A: 50 MARKS

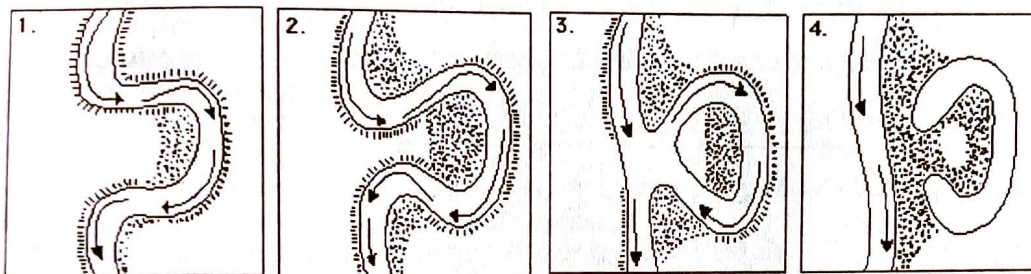
Questions 1 to 50 carry one mark each.

1. Name **one** secondary point of a compass direction.
✓ **Northeast // Northwest// Southeast // Southwest**
2. Write **one** advantage of a secret ballot system of conducting elections.
✓ **Voters are free from interference/ Promotes independent decision making/ choice**
✓ **It promotes privacy// Promotes fairness of the election results**
✓ **It is easy to monitor elections // It promotes friendship among people.**
3. Mention the means of road transport commonly used in hilly areas of Uganda.
✓ **Donkeys**
4. Name the deepest lake in Uganda.
✓ **Lake Bunyonyi**
5. Give a reason why the government of Uganda is re-locating the people of Bududa to safer areas.
✓ **To save them from landslides/mudslides.**
6. What is a mountain peak?
✓ **A peak is the highest point of a mountain.**
7. Why is Lake Victoria referred to as an inter-territorial lake?
✓ **It is shared by three East African countries.**
✓ **It is shared by many countries.**
8. Write **one** condition of weather.
✓ **Rainy //cloudy//sunny//windy/windy/Foggy/Misty .**
Reject Rainy weather/Cloudy weather etc because these are types of weather
9. Name the largest planted forest in Uganda.
✓ **Lendu Forest**
10. How does deforestation cause soil erosion?
✓ **It leaves the land bare, exposing it to agents of soil erosion.**
11. Mention the main source of water in the environment.
✓ **Rain**
12. Apart from the kings, mention any **one** other example of cultural leaders in your community.
✓ **Queens// Chiefs// Clan heads/clan leaders**
13. What is land as a resource?
✓ **It is a part of the earth which is not covered by water.**
14. Give a reason why climbing animals are common in tropical rainforests.
✓ **They have many fruit (s) which act as food for climbing animals.**
✓ **They are many trees which provide natural habitats to climbing animals.**
15. Which type of rainfall is received in mountainous areas of Uganda?
✓ **Relief/ Orographic rainfall**
16. What is a waterfall?
✓ **A waterfall is a steep flow of a river/ A point where a river flows from a higher altitude/point to a low altitude.**
17. The diagram below shows the formation of the rift valey. Use it to answer questions that follow. Below.



18. Apart from a rift valley, name any **one** feature that can be formed by the process illustrated above.
✓ **Block/Horst mountain // rift valley lake**
19. Name the forces marked with letter X.
✓ **Tensional forces/ Tension forces**
20. Name the longitude marked **0°** on the globe.
✓ **The Prime Meridian/ Greenwich Meridian**
21. What do you understand by the term **relief**?
✓ **Relief is the general appearance of a landscape.**

22. Mention **one** tribe that lives on the slopes of Mountain Muhavura.
 ✓ **Bakiga // Bafumbira**
23. Write B.O.U in full.
 ✓ **Bank of Uganda**
24. What name is given to a lowland between two hills?
 ✓ **A Valley**
25. Who is responsible for security on the L.C.1 executive committee?
 ✓ **Secretary for Defense**
26. Name the type of wood mainly obtained from Budongo forest.
 ✓ **Hardwood**
27. How does vegetation promote good health of people in an area?
 ✓ **It is a source of fruits to people // Helps to purify air in an area.**
 ✓ **Source of herbal medicine to people.**
28. Mention **one** group of people who provide transport service in our country.
 ✓ **Pilots // Drivers // Ship Sailors**
- The diagram below shows a lake formation. Use it to answer questions 29 and 30.



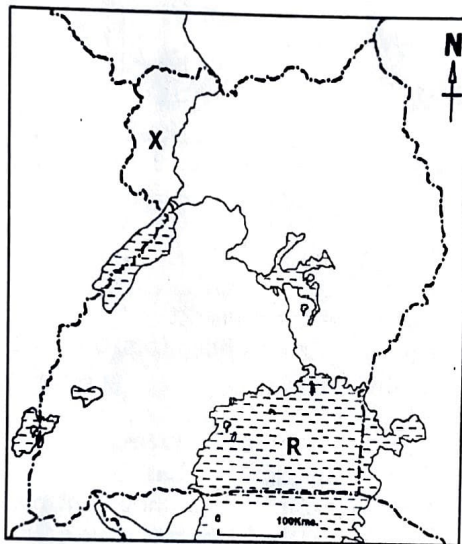
29. Name the type of lake illustrated above.
 ✓ **Ox-bow lake**
30. Which process forms the above type of lake?
 ✓ **River deposition** *Accept: River meandering*
31. Write **one** way of caring for important places in our district.
 ✓ **By keeping them clean // By painting schools, hospitals, banks etc.**
 ✓ **By reporting strangers found in such places.**
 ✓ **By planting trees around important places.**
 ✓ **By respecting people who care for the important places.**
 ✓ **By teaching people on proper use of important places.**
 ✓ **By showing love for important places // By fencing important places in our community.**
32. Give a reason why a smartphone is not regarded as a human basic need.
 ✓ **A man can live without a phone.**
33. Name the side of a mountain which receives rainfall.
 ✓ **The Windward side.**
34. Mention **one** political importance of lakes and rivers.
 ✓ **They form political boundaries between places or countries.**
35. Name the lake in Uganda which is locally known as **Mwitanzige**.
 ✓ **Lake Albert**
- For each of the questions 36-40, answer **EITHER** the Christian or Islamic but not both in a number.
36. **EITHER:** Name the place where Christians fellowship every Sunday.
 ✓ **Church**
OR:
 Name the place where Muslims pray from every Friday.
 ✓ **Mosque**
37. **EITHER:** According to the Bible, who is believed to be the first person to be created by God?
Adam
 ✓ **OR:**
 According to Islam, who was believed to be the first person to be created by Allah?
Adam

38. **EITHER:** Mention any **one** prophet in Christianity.
Prophet Joel // Amos // Elijah // Prophet Moses // Isaiah // John the Baptist // Prophet Jonah etc.
✓ OR Mention any **one** prophet in Islam.
Prophet Musa, Prophet Noah, Prophet Isiah, etc.
39. **EITHER:** Name the Holy book for Christians.
A Bible // Holy Bible
✓ OR
 Name the Holy book for Muslims.
Qur'an
40. **EITHER:**
 What is a prayer?
✓ A prayer is a special way of communicating/ talking to God
OR:
 What is a prayer?
As above

SECTION A: 40 MARKS

Questions **41** to **50** carry **one** mark each

41. Below is a map of Uganda. Use it to answer questions that follow.



- a) Name the fresh water lake marked **R** on the map above
✓ Lake Victoria
- b) Name the sub region of Uganda marked **X**?
✓ West Nile
- c) Mention any **two** neighboring countries of Uganda
✓ Kenya // Tanzania // Burundi // Rwanda // Democratic Republic of the Congo // South Sudan
42. Write any **two** features which were formed by volcanicity.
✓ Hot springs // Calderas // Inselbergs // Craters // Lava dammed lakes, etc.
- b) Name **two** examples of extinct volcanoes in Uganda
✓ // Mountain Morungole // Mountain Elgon // Mountain Zulia // Mountain Napak
43. a) Give **two** traditional cash crops grown in Uganda
✓ Sisal // Rubber // Cotton // Tea // Cocoa // Tobacco // Coffee // Oil palm
- b) Mention **two** ways farmers take care of crops in the garden
✓ By watering them // pruning them // weeding crops // thinning crops
44. Mr. Kanoonya spent five years studying the climate of a certain district. He gathered following information.
Much of the rainfall was accompanied by lightning and thunderstorm.
Rainfall was received from January to December.
The area experienced double maxima.
Temperatures were always high in March and September.

- a) Which type of climate is experienced in that district?
✓ **Equatorial climate.**
- b) Give any **two** economic activities carried out in areas that experience the above type of climate.
✓ **Tourism //lumbering//crop growing/ Fishing**
- c) Name **one** district that experience the above type of climate in Uganda
✓ **Kalangala//Mpigi //Mukono //Buikwe //Jinja//Wakiso.**
45. a) Mention **two** colors of traffic lights
✓ **Red//orange//Green**
- b) Write **two** causes accidents on roads.
✓ **Over loading// Speeding cars//Bad roads// Driving cars in bad mechanical conditions //Failure to observe road signs etc**
46. a) Name the longest river in Uganda
✓ **River Nile**
- b) Give **two** stages of River Nile.
✓ **Lower stage//Middle stage// upper stage.**
- c) How can children protect water sources from contamination?
✓ **Through proper waste disposal // avoid dumping wastes in water sources**
✓ **By recycling wastes like plastics**
✓ **Reporting those who pollute water sources**
✓ **Educating others about protecting water sources.**
✓ **Planting trees around water bodies to reduce soil erosion.**
47. a) Mention **two** problems facing farmers today in Uganda .
✓ **Low prices of goods//Shortage of capital to buy inputs //prolonged drought //Limited market for goods/ fluctuations of prices.**
✓ **Outbreak of pests and diseases //Poor transport etc.**
- b) Give **two** products farmers obtain from a dairy farm.
✓ **Milk //Hides// Meat (beef)// Ghee //yoghurt //Butter //Hooves //Cheese.**
48. a) Mention any **one** National Park in Uganda
✓ **Bwindi Impenetrable national park**
✓ **Mountain Rwenzori N.P// Mountain Elgon N.P.//Kidepo Valley N.P//Mgahinga N.P//Murchision falls/Kabalega N.P**
- b) Name any **one** common animal found in savannah vegetation
✓ **Buffaloes//Kobs//Zebras//Leopards//Antelopes//lions.**
- c) Write **two** possible solutions to the problems facing game parks in Uganda.
✓ **By enforcing laws against poaching.**
✓ **By sensitising people about the importance of wild animals.**
✓ **By improving on security in areas near national parks.**
✓ **By extending veterinary services in game parks.**
✓ **By enforcing laws against human encroachment on national parks.**
49. a) What is a port?
✓ **Is a place/ city/town on a water body where water vessels load and offload goods.**
- b) Name the main Inland port on Lake Albert.
✓ **Port Butiaba.**
- c) Mention any **two** economic activities carried out on ports.
✓ **Fishing // Trade// Tourism**
50. a) Define the term a district.
✓ **A district is an administrative area under the local government.**
- b) Name district where we find Uganda's international Airport.
✓ **Wakiso district.**
- c) Mention any **two** regions found in Uganda
✓ **Central region/ Western region/Eastern region/Northern region**
- In question 51-55, answer **EITHER** the Christianity or Islamic but not BOTH in a number.
51. **EITHER:** a) Mention **two** importance of the Holy Spirit to Christians today.
✓ **Guides Christians to live a holy life**
✓ **Comforts christians in times of trouble**
✓ **The Holy Spirit enables Christians to preach the word of God.**
✓ **The Holy Spirit convicts christians of their sins/wrongs/ To repent**
✓ **The Holy Spirit inspires christians to sing gospel songs/ Christian hymns**

- ✓ **The Holy spirits teaches christians the word of God**
 - ✓ **The Holy Spirit teaches christians to pray etc**
 - b) Give any **two** gifts of the Holy Spirit
 - ✓ **Gift of Wisdom & Knowledge // Gift of healing// Gift of performing/ making miracles**
 - ✓ **Gift of faith // Gift of prophecy// Gift of being a pastor // Gift of speaking in tongues**
 - ✓ **Gift of distinguishing & interpreting tongues // Gift of being an Apostle**
 - ✓ **Gift of being a pastor // Gift of teaching God's word**
 - OR: a) Mention **two** importance of the Islamic pillars to a Muslims.
 - ✓ **Guides Muslims // Empowers Muslims// Comforts Muslims**
 - ✓ **Enables Muslims to pray effectively.**
 - b) Give any **two** Islamic Pillars.
 - ✓ **Shahada // zakat //// Hajj**
52. **EITHER:** a) Name the miracle performed by Jesus Christ at a wedding
- ✓ **He changed water into wine/ Changing of water into wine**
 - b) Outline the place where Jesus Christ performed His first miracle.
 - ✓ **Cana in Galilee.**
 - c) State **two** reasons why Jesus performed miracles.
 - ✓ **To demonstrate His Divine Power over nature // To Confirm His Messianship**
 - ✓ **To demonstrate His authority // To relieve the sick from pain**
 - ✓ **To Show Compassion for humanity/ To help the needy// To feed the hungry**
 - OR: a) Name the first miracle performed by Prophet Muhammad.
 - ✓ **Splitting of the moon.**
 - b) Outline the place where prophet Muhammed performed His first miracle.
 - ✓ **Hira/ At the cave of Hira**
 - d) State **two** reasons why Prophet Muhammad performed Miracles.
 - ✓ **To show Compassion for humanity // To show Allah's love// To help the needy etc**
53. **EITHER:** a) Which sacrament help Christians to enter Holy marriage?
- ✓ **The Holy matrimony**
 - b) Give **one** gift people receive from God in marriage
 - ✓ **Companionship // Passion// Children // God's grace.**
 - c) Give **two** reasons why Christians marry.
 - ✓ **To fulfill sexual desires// To have respect from others.**
 - ✓ **To have companionship/For company // To Co-create/ To produce/bear children**
 - OR: a) What is Islamic marriage?
 - ✓ **Marriage is a contract between a man and a woman to create a family?**
 - b) Give **one** gift people receive from Allah in Marriage.
 - ✓ **Children//passion // Companionship.**
 - c) Give **two** reasons why Muslims marry.
 - ✓ **Co-Create// To have Companionship// To have Children// To be respected by others**
54. **EITHER:** a) Write ATR in full.
- ✓ **African Traditional Religion.**
 - b) Which group of foreigners Introduced Christianity to Uganda
 - ✓ **Christian Missionaries.**
 - c) Mention any **two** religious leaders in our community.
 - ✓ **Pastors// Imams// priests// Monks// Reverends// Bishops/ Catechists/ Archbishops/ Mufti**
 - OR: Write ATR in full.
 - ✓ **African Traditional Religion.**
 - b) Which group of foreigners introduced Islamic into Uganda?
 - ✓ **Arabs**
 - c) Mention **two** religious leaders in our community.
 - ✓ **Imams// Sheikhs/ District Khadi etc**
55. **FOR BOTH:** a) Give any **two** bad decisions people do in our Communities.
- ✓ **Killing of others // Divorce// raping // Kidnapping// Child Sacrifice// Bewitching others**
 - ✓ **Stealing other people's property // Defiling children**
 - ✓ **Quarreling with others/ abusing others// Disrespecting others**
 - b) State any **two** good decisions people always accept in our Communities.
 - ✓ **Attending Communal work// Helping the needy in the community**
 - ✓ **Educating people in the Community// Forming Village Savings groups**
 - ✓ **Peaceful talks / reconciling with others**

END