



# VICTORY STEP EDUCATION SERVICES – KAMPALA

## PRIMARY SIX MID TERM EXAMINATION

2025

### SOCIAL STUDIES AND RELIOUS EDUCATION

***Time Allowed: 2 hours 30 minutes***

Index No.	EMIS No.						Personal No.		

**Candidate's Name:** .....

**Candidate's Signature:** .....

**School Name:** .....

**District Name:** .....

#### Read the following instructions carefully:

1. Do not write your **school** or **district name** anywhere on this paper.
2. This paper has **two** sections: **A** and **B**. Section **A** has **20** questions and section **B** has **12** questions. The paper has **15 printed pages**.
3. Answer **all** the questions. **All** the working for both sections **A** and **B** must be shown in the spaces provided.
4. **All** the working **must** be done using a **blue** or **black** ball point pen or ink. Any work done in pencil other than graphs and diagrams will **not** be marked.
5. **No calculators** are allowed in the examination room.
6. Unnecessary **changes** in your work and handwriting that cannot be read easily may lead to **loss of marks**.
7. Do not fill anything in the table indicated: **"FOR EXAMINERS' USE ONLY"** and boxes inside the question paper.

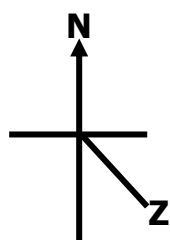
FOR EXAMINERS' USE ONLY		
QN. NO.	MARKS	EXR'S NO.
1 - 5		
6 - 10		
11 - 15		
16 - 20		
21 - 22		
23 - 24		
25 - 26		
27 - 28		
29 - 30		
31 - 32		
TOTAL		

## **SECTION A (40 MARKS)**

1. In which season do farmers weed their crops?  
\_\_\_\_\_
2. Give any **one** importance of the Equator.  
\_\_\_\_\_
3. Name the element of weather that causes dust on murrum roads.  
\_\_\_\_\_
4. How does the traffic road sign below help to reduce road accidents?  
\_\_\_\_\_



5. Write the raw materials used to make papers.  
\_\_\_\_\_
6. Why should Uganda cooperate with her neighbours?  
\_\_\_\_\_
7. State any **one** attribute of a nation.  
\_\_\_\_\_
8. How can culture be promoted in your community?  
\_\_\_\_\_
9. Mention the newest member state of the East African Community (EAC).  
\_\_\_\_\_
10. Give **one** way of caring for animals at home.  
\_\_\_\_\_
11. How can people in slums be helped to live a better life?  
\_\_\_\_\_
12. Why should every school be with rules and regulations?  
\_\_\_\_\_
13. State **one** way of controlling population growth in a country.  
\_\_\_\_\_
14. Mention any **one** effect of the 1900 Buganda agreement.  
\_\_\_\_\_
15. What lesson do we learn from the legend of the spear and a bead?  
\_\_\_\_\_
16. State any **one** problem that was caused by the collapse of the East African Community in 1977.  
\_\_\_\_\_
17. Name the compass direction marked **Z** on the diagram below.  
\_\_\_\_\_



18. Give **one** importance of the international dateline.  
\_\_\_\_\_
19. How can child abuse be reduced in our communities?  
\_\_\_\_\_

20. What advice can you give to farmers in order to increase their crop yields?
- 
21. How does Kenya benefit from her sea port?
- 
22. Give **one** way people use land to earn a living.
- 
23. How did the British make Uganda a nation?
- 
24. Give **one** reason why it is necessary to make a budget before spending.
- 
25. Why do people in highland areas control soil erosion?
- 
26. Mention the group of foreigners which introduced formal education in Uganda.
- 
27. Give one advantage of getting leaders through elections.
- 
28. Name the Indian trader who promoted trade in Kampala.
- 
29. Which material is used to make baskets?
- 
30. Apart from treating sick people, give any other importance of health centres to the community.
- 
31. If it is 11:00am at Accra, what time will it be at town Y  $30^{\circ}$  East?
- 
32. Name the physical feature which covers the largest part of Uganda.
- 
33. What is immigration?
- 
34. Mention the process which led to the formation of Mt. Elgon.
- 
35. Why are children encouraged to greet visitors?
- 

**For questions 36 – 40, answer Either Christianity OR Islamic questions BUT NOT both in a number.**

36. **Either:** Name **one** symbol of Christianity.
- 

**Or:** Name **one** symbol of Islam.

---

37. **Either:** How did God create Eve?
- 

**Or:** How did Allah create Hawa?

---

38. **Either:** State **one** reason why Christians pray to God.
-

**Or:** Give **one** reason why Muslims pray to Allah.

39. **Either:** How did God test Abraham's faith?

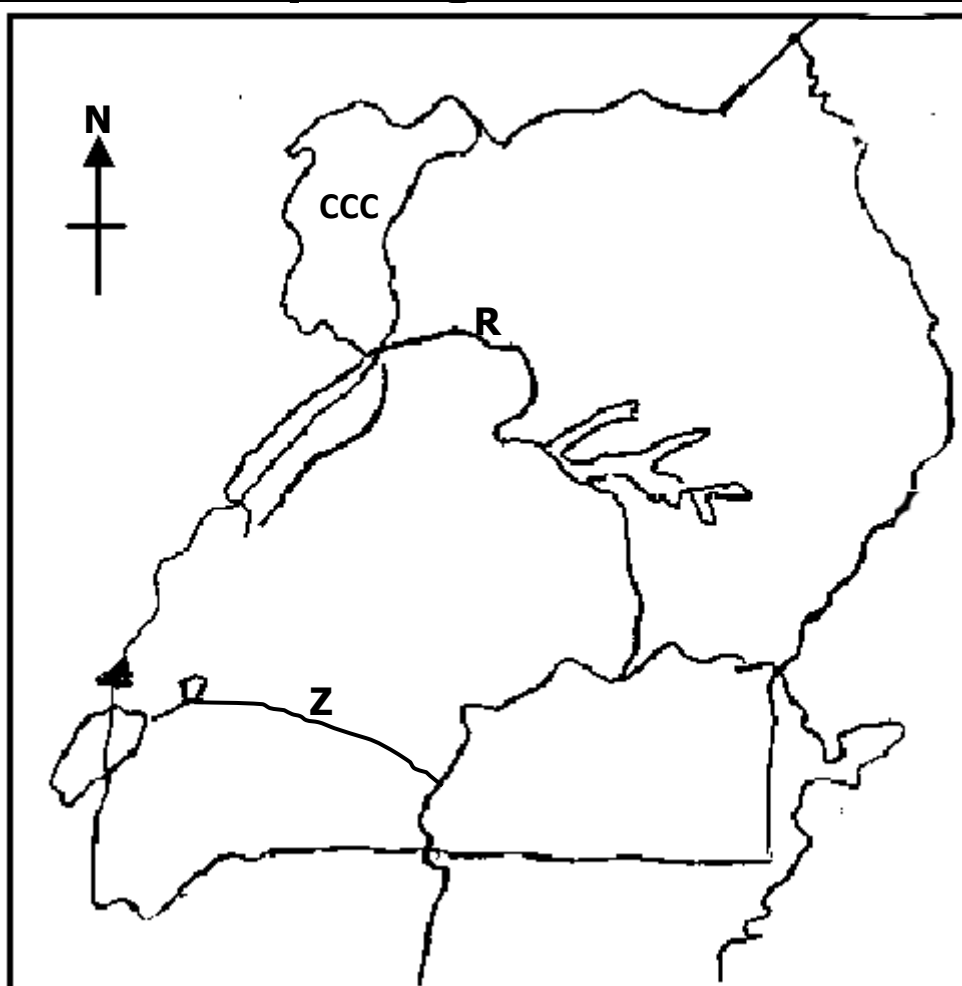
**Or:** How did Allah test prophet Ibrahim's faith?

40. **Either:** Why should every Christian's home be with a Bible?

**Or:** Why should every Muslim's home be with a Quran?

### **SECTION B (60 marks)**

41. **Use the map of Uganda below to answer questions 41.**



(a) Name the river marked **R** and **Z**.

(i) **R** \_\_\_\_\_

(ii) **Z** \_\_\_\_\_

(b) Which major cash crop is grown in the area marked **ccc** on the map above

(c) How is the cash crop named in (b) above preserved after harvesting?

42. (a) Which mineral was discovered around Lake Albert?

(b) Give **two** ways in which Ugandans benefit from mining the above mineral.

(i) \_\_\_\_\_

(ii) \_\_\_\_\_

(c) How does mining affect the environment?

43. (a) Mention any **two** political parties which demanded for Uganda's Independence.



- (i) \_\_\_\_\_
- (ii) \_\_\_\_\_
- (b) How did the above political parties struggle for Uganda's Independence?
- (i) \_\_\_\_\_
- (ii) \_\_\_\_\_
44. (a) Write down any **one** founder member of the East African Community in 1967.
- \_\_\_\_\_
- (b) How does the East African Community promote development in the region?
- (i) \_\_\_\_\_
- (ii) \_\_\_\_\_
- (c) Write **one** organ of the East African Community.
- \_\_\_\_\_
45. (a) How are leaders got in our district?
- (i) \_\_\_\_\_
- (ii) \_\_\_\_\_
- (b) Give **one** way political leaders are important to people in a district. \_\_\_\_\_
- B \_\_\_\_\_
- (c) Mention the political head of a parish.
- \_\_\_\_\_
46. (a) Write **R.G.S** in full.
- \_\_\_\_\_
- (b) State **one** way in which **R.G.S** was important to the explorers who came to Uganda.
- \_\_\_\_\_
- (c) Mention **two** problems which were faced by explorers.
- (i) \_\_\_\_\_
- (ii) \_\_\_\_\_
47. (a) What name is given to the movement of people from villages to towns for settlement?
- \_\_\_\_\_
- (b) Give **two** reasons why people move to towns for settlement.
- (i) \_\_\_\_\_
- (ii) \_\_\_\_\_
- (c) How does the migration of people from villages to towns affect villages?
- \_\_\_\_\_
48. (a) Mention the type of rainfall received in Karamoja region.
- \_\_\_\_\_
- (b) How can crop farming be improved in Karamoja region?
- \_\_\_\_\_
- (c) State **two** problems faced by cattle keepers.
- (i) \_\_\_\_\_
- (ii) \_\_\_\_\_

49 a) **Match correctly**

**A**

- C.A.O
- RDC
- Chairperson LC V
- District speaker

**B**

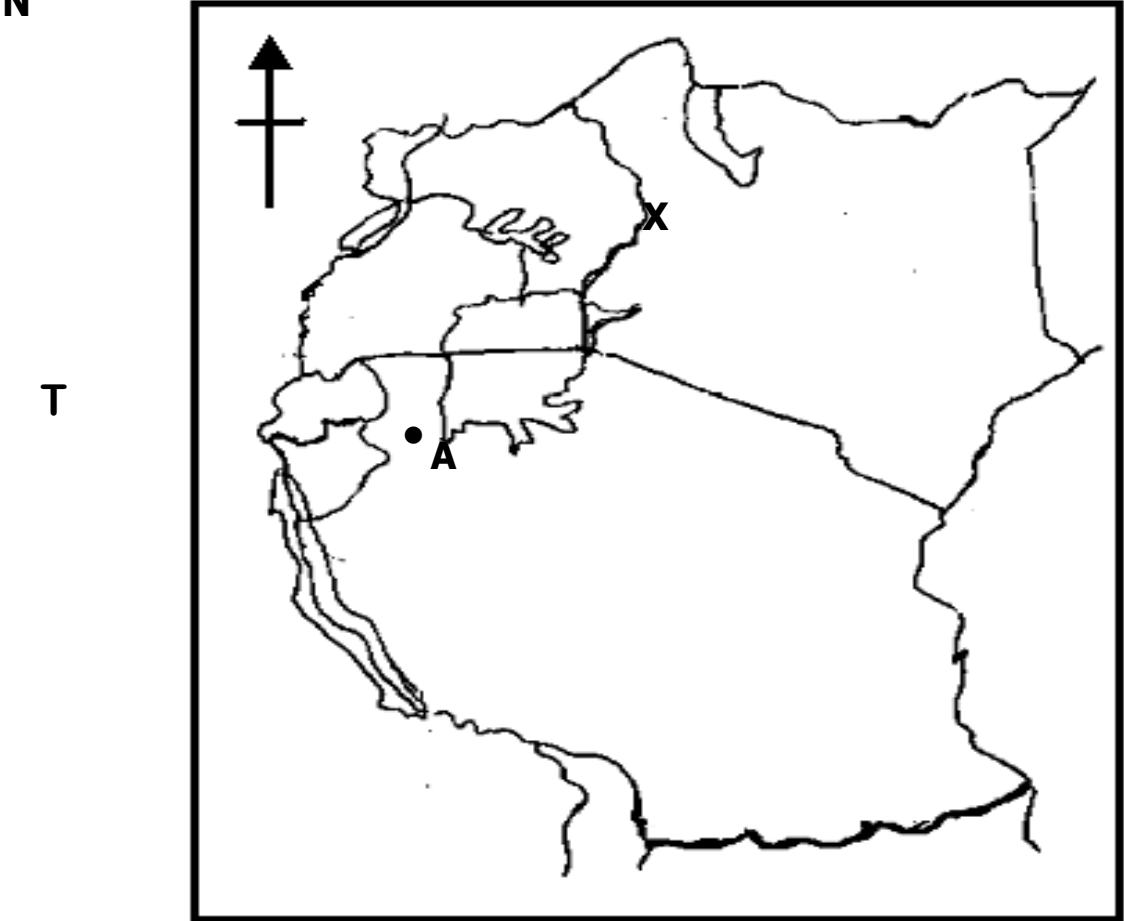
- Political head of a district.
- Chair district council meetings
- Heads civil servants in a district
- Heads security in a district

**A**

- C.A.O
- RDC
- Chairperson LC V
- District speaker

**B**

**Use the map below to answer questions 50.**



50. (a) Name the countries marked **X** and **T**.

- (i) **X** \_\_\_\_\_
- (ii) **T** \_\_\_\_\_

(b) How is town marked **A** important to East Africa?

\_\_\_\_\_  
(c) Use letter **K** to show Indian Ocean.  
\_\_\_\_\_

**For questions 51 – 55, answer Either Christianity OR Islamic questions BUT NOT both in a number.**

**EITHER:** 51 a) Which day marks the beginning and end of lent period?

- (i) Beginning of lent: \_\_\_\_\_
- (ii) End of lent: \_\_\_\_\_
- b) How do Christians benefit from lent?  
(i) \_\_\_\_\_  
(ii) \_\_\_\_\_

**OR:** a) What marks the beginning and end of Saum?.

(i)Beginning of Saum: \_\_\_\_\_

(ii) End of Saum:\_\_\_\_\_

b) How do Muslims benefit from fasting?

(i) \_\_\_\_\_

(ii) \_\_\_\_\_

**EITHER**:52 a) What is talent?

b) Give any **two** examples of talents Christians have.

(i) \_\_\_\_\_

(ii) \_\_\_\_\_

c) State **one** way Christians benefit from their talents.

**OR**: a) What is talent?

(b)Give any **two** examples of talents Muslims have.

(i) \_\_\_\_\_

(ii) \_\_\_\_\_

(c) State **one** way Muslims benefit from their talents.

**EITHER**: 53 a) State any **two** ways Christians disobey God today.

(i) \_\_\_\_\_

(ii) \_\_\_\_\_

(b) How did God punish Adam and Eve for disobeying Him?

(i) Adam\_\_\_\_\_

(ii) Eve\_\_\_\_\_

**OR**: a) State any **two** ways Muslims disobey Allah today.

(i) \_\_\_\_\_

(ii) \_\_\_\_\_

b) How did Allah punish Adam and Hawah for disobeyed Him?

(i) Adam\_\_\_\_\_

(ii) Hawah\_\_\_\_\_

**EITHER**:54 a) On which day did the disciples receive the Holy Spirit?

b) State any **two** gifts of the Holy Spirit.

(i) \_\_\_\_\_

(ii) \_\_\_\_\_

c) How is the Holy Spirit important Christians?

**OR**: a) What is Iman?

b) State any **three** ways in which Muslims benefit from Iman.

(i) \_\_\_\_\_

(ii) \_\_\_\_\_

(iii) \_\_\_\_\_

**FOR BOTH:** 55(a) Write any **two** similarities between Islam and Christianity.

(i) \_\_\_\_\_

(ii) \_\_\_\_\_

(b) State any **two** differences between Islam and Christianity.

(i) \_\_\_\_\_

\_\_\_\_\_

(ii) \_\_\_\_\_

\_\_\_\_\_

\*\*\*\*\***END**\*\*\*\*\*