



KAMTEC EXAMINATIONS BOARD

SET 1 EXAMINATION, 2025

CLASS : P.7

SUBJECT : social studies

DURATION : 2 HOURS 15 MINUTES



Name: _____ Stream: _____

FOR OFFICIAL USE ONLY		
SECTION	MARKS	TOTAL MARKS
A		
B		

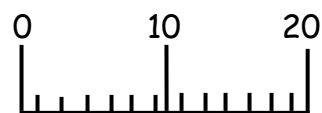
Follow the instructions below:

- ✓ This paper is made up of two sections A and B.
- ✓ Section A has 40 questions (40 marks).
- ✓ Section B has 15 questions (60 marks).
- ✓ Answer all questions.
- ✓ Read very carefully and understand.
- ✓ Punctuate your work properly.
- ✓ Avoid careless mistakes.
- ✓ Avoid any unnecessary crossing.
- ✓ Use the best handwriting.
- ✓ Wrong spellings will lead to loss of marks.

SECTION A: (40 marks)

1. Name any one service centre where people get health services.

2. What name is given to a home and its surrounding?



3. How important is the map symbol to a map reader?

4. Mention any one method of controlling soil erosion in hilly areas.

5. State any one way the discovery of fire was important to early man?

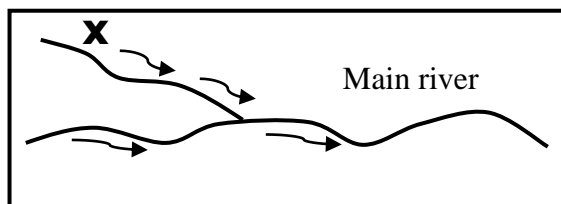
6. Why do farmers grow crops in a wet season?

7. How is a compass important to a pilot?

8. Why is shelter considered to be a basic need?

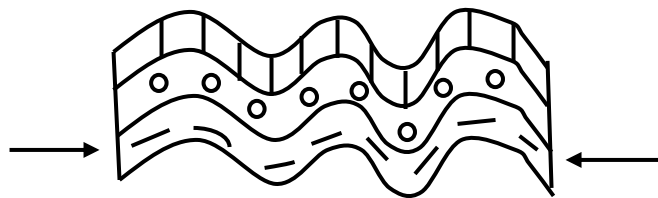
9. Which element on the Uganda coat of arms represents traditional means of communication?

10. Name the part of River marked **X**.



11. Name the largest country in Africa.

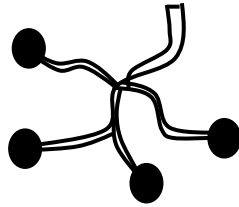
12. State any one effect of swamp drainage to the environment.
-
13. How is the formation of Drakensberg Mountain similar to that of Mt. Kilimanjaro?
-
14. In which direction is Africa from Europe?
-
15. Name any one lake crossed by the equator in Uganda.
-
16. State any one way culture can be promoted in a community.
-
17. Why is Allidinah Visram remembered in the economic development of Uganda?
-
18. Which organ of government approves the national budget?
-
19. How is order promoted at school?
-
20. Which national park in Uganda is famous for mountain gorillas?
-
21. Name the type of mountain formed as illustrated by the diagram below.



-
22. Why is Mombasa warmer than Nairobi?
-
23. Name the symbol of school which is similar to the national coat of arms.
-
24. It is 3:00pm at Accra. What time will it be at a place 30°E ?
-
25. How does banana fibre promote physical education at school?
-

26. Mention any one way the Police keeps law and order.

27. How was this tool important to early man?



28. How important is a dog at home?

29. What is a picture?

30. Name the water way which separates Madagascar from the African mainland.

31. How were the people in East Africa politically organized during the Pre-colonial period?

32. Why was the railway line from Mombasa to Uganda called the Uganda railway?

33. Why do people stand up when singing the National Anthem?

34. Which ethnic group in Uganda tells the legend of the bead and spear?

35. State any one cause of conflict between a school and the community around.

For questions 36 to 40, answer Either Christianity or Islamic but not both.

36. **Either:** For how long did God create the world?

Or: For how long did Allah create the world?

37. **Either:** How do we become members of God's family?

Or: Write any one importance of circumcision among Muslims.

38. **Either:** Write any one type of prayer said by Christians.

Or: Name any one prayer said by Muslims.

39. **Either:** Give a reason why Jesus performed miracles during his ministry.

Or: Mention any one miracle performed by Prophet Mohammed.

40. **Either:** Why did Simon Peter deny Jesus Christ?

Or: Who was the first caliph of Prophet Mohammed?

SECTION B(60 marks)

41.a) Name the European country that colonised Uganda.

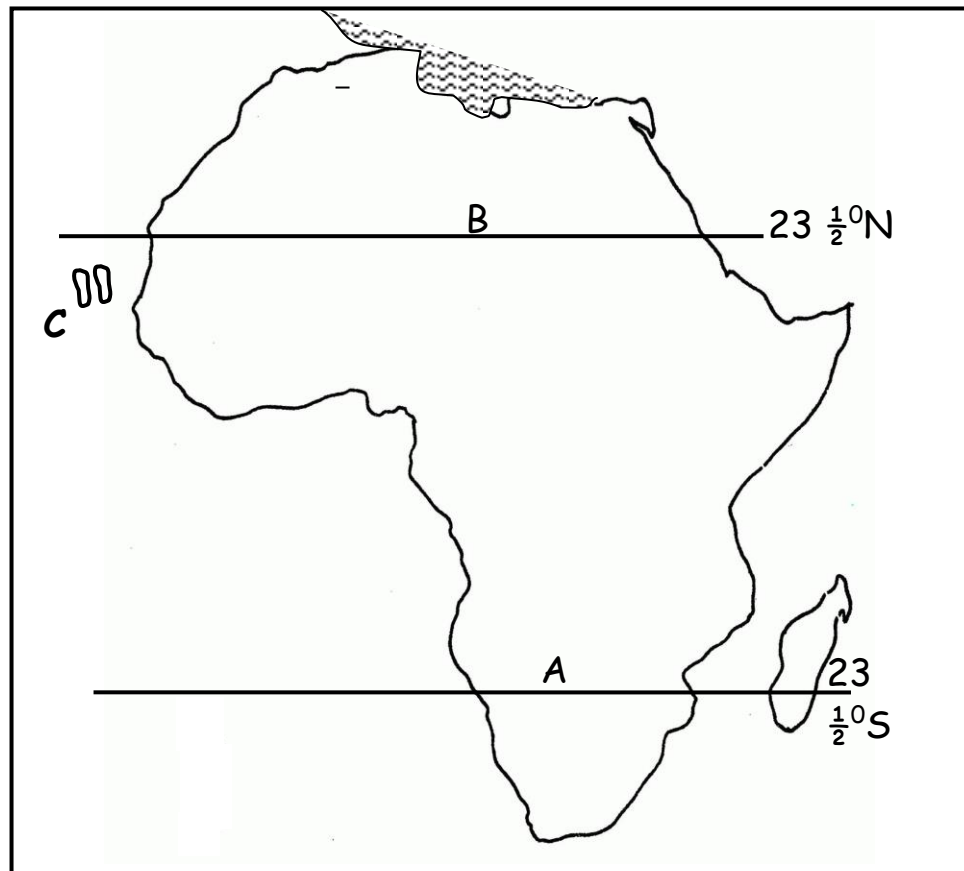
b) State any two methods that colonialists used to establish their rule in Uganda.

i) _____

ii) _____

c) Name any one form of tax the colonialists introduced in Uganda.

42.a) **Study the sketch map below and use it to answer the questions that follow.**



a) Name the lines of latitude marked **A** and **B**.

A _____

B _____

b) Name the country marked **C**.

c) Write any one challenge faced by country C because of her location.

43.a) Name the physical feature that covers the largest part of Africa.

b) State any two reasons why slopes of mountains are densely populated.

i) _____

ii) _____

c) Mention any one problem faced by people who live around mountain slopes.

44.a) Name the cradle land of the Bantu ethnic group.

b) State any two effects of the Bantu migration into East Africa.

i) _____

ii) _____

c) How did the migration of different ethnic groups affect the natives?

45.a) What are social activities?

b) Write any two examples of social activities.

i) _____

ii) _____

c) State any one importance of social activities.

46. Match the minerals in List A to their uses in List B correctly.

List A

Phosphate

Soda ash

Copper

Limestone

List B

used to make coins.

used to make cement.

used to make artificial fertilizers.

used to make glasses.

CORRECT ORDER

Phosphate _____

Soda ash _____

Copper _____

Limestone _____

47.a) Write the title given to the political head of a sub county.

b) State any two duties of the local council committee.

i) _____

ii) _____

c) Mention any one problem faced by local councils.

48.a) Write any two organs of government in Uganda .

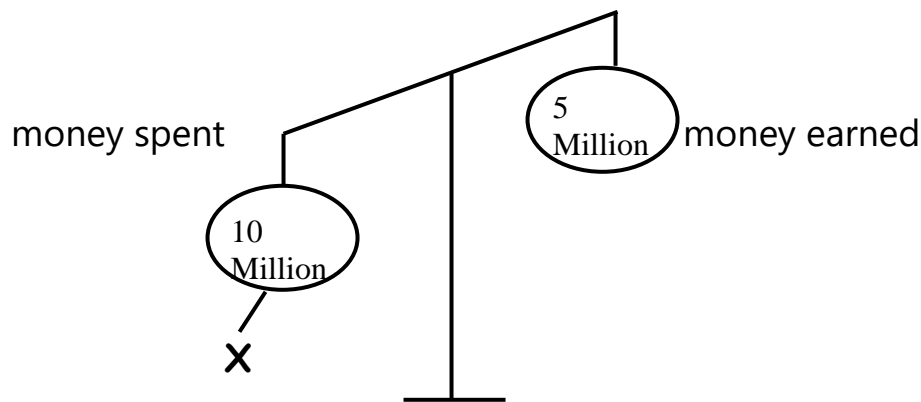
i) _____

ii) _____

b) How does one become a Member of Parliament in Uganda?

c) Give any one duty of the parliament in Uganda.

49. Study the diagram below and use it to answer the questions about it.



a) Name the part of the budget marked **X** on the diagram above.

b) Mention the type of budget shown in the diagram above.

c) State any one importance of the above budget.

d) Write the Ministry in charge of making a National budget.

50.a) Give any two pieces of information collected during national population census.

i) _____

ii) _____

b) In which two ways is population census important to the government?

i) _____

ii) _____

Answer Either Christianity OR Islam but not both parts of the same number.

51.a) EITHER: Where did Adam and Eve live before sinning against God?

b) How did Adam and Eve sin against God?

c) Why did God create Eve?

d) State any one punishment God passed to Adam.

OR: Where did Adam and Hawa live before they disobeyed Allah?

b) How did Adam and Hawa disobey Allah?

c) Why did Allah create Hawa?

d) State any one punishment Allah passed to Adam for disobeying Him.

52.a) EITHER: What is sin?

b) Give any two examples of sin committed by children while at school.

i) _____

ii) _____

c) How does God punish sinners?

OR: What is sin?

b) Give any two examples of sin committed by children while at school.

i) _____

ii) _____

c) How does Allah punish sinners?

53.a) **EITHER:** Name the prayer that Jesus taught his disciples.

b) State any two requests made in the prayer named in (a) above.

i) _____

ii) _____

c) Mention any one way Christians show respect to prayer.

OR: Name any one of the daily prayers in Islam.

b) Write any two requests Muslims make in prayer.

i) _____

ii) _____

c) Write one way Muslims show respect for prayers.

54.a) **EITHER:** What is lent?

b) How do Christians benefit from lent?

i) _____

ii) _____

c) On which day does lent period end?

OR What is Saum?

b) How do Muslims benefit from Saum?

i) _____

ii) _____

c) Name the celebration that marks the end of Saum?

55.a) EITHER Give any two talents that God gives to Christians.

- i) _____
- ii) _____

b) Write any two ways people benefit from their talents.

- i) _____
- ii) _____

OR: Give any two talents that Allah gives to Muslims.

- i) _____
- ii) _____

b) Write two ways people benefit from their talents.

- i) _____
- ii) _____

END