



ORION EXAMINATIONS BOARD

Email:orionexaminationsboard@gmail.com

PRIMARY SEVEN WEEKLY ASSESSEMENT SET-5-2025

SOCAL STUDIES WITH R.E
Time Allowed: 2 Hours : 15 Minutes

Random No.						Personal No.		

CANDIDATE'S NAME:

CANDIDATE'S SIGNATURE:.....

DISTRICT NAME:.....

Read the following instructions carefully:

- 1.This paper has **two** sections: **A** and **B**.
- 2.Section **A** has **40** questions (**50 Marks**)
- 3.Section **B** has **15** questions (**50 marks**)
- 4.Answer **all** questions. All answers to both sections **A** and **B** **must** be written in the spaces provided.
- 5.**All** answers must be written using a **blue** or **black ball** point **pen** or **ink**. Diagrams should be drawn in a pencil.
6. **Unnecessary** changes in your work may lead to **loss** of marks.
7. Any handwriting that **cannot** be easily read may lead to **loss** of marks.
8. **Do not** fill anything in the table indicated: "**FOR EXAMINERS' USE ONLY**" and boxes inside the question paper.

ONLY		
Qn. No	MARKS	EXR'S No.
1 – 10		
11 – 20		
21 – 30		
31 – 40		
41 – 43		
44 – 46		
47 – 49		
50 – 52		
53 – 55		
TOTAL		

TURN OVER

SECTION: A

Questions **1** to **40** carry **one** mark each.

1. In which **one** way do swamps prevent floods in an area ?
.....
2. How can a country attain a surplus budget ?
.....
3. Mention any **one** advantage of barter trade.
.....
4. How does the Ugandan government earn on its borders ?
.....
5. Name the government official who leads government business in the parliament.
.....
6. State any **one** importance of leaders in the community.
.....
7. Mention any **one** importance of conducting music lessons in schools.
.....
8. Why does Uganda celebrate the 9th October every year ?
.....
9. What do we call the planting of trees in an area where they have never existed ?
.....
10. Identify any **one** effect of smuggling to a country like Uganda.
.....
11. Why is Semei Kakungulu remembered in the history of Uganda ?
.....

12. How can the Ugandan government encourage its citizens to pay taxes ?

.....

13. Name the part of Uganda from where salt is mined.

.....

14. State any **one** climatic region in which Uganda is divide.



.....

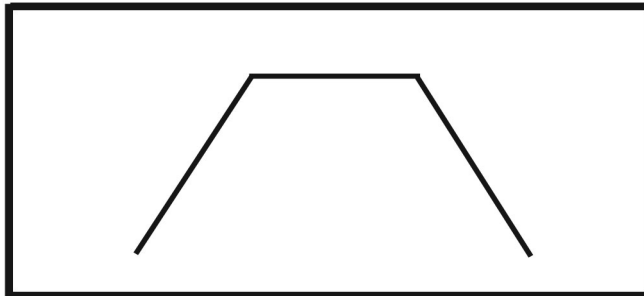
15. Which ministry is responsible for natural disasters and calamities in Uganda?

.....

16. State any **one** problem that was faced by the African Union.

.....

17. Name the feature drawn below.



.....

18. How do mountains influence the climate of Uganda ?

.....

19. State any **one** characteristic of Rift Valley Lakes.

.....

20. Give **one** reason why Kalangala receives convectional rainfall.

.....

21. What do you understand by the term tributary ?

.....

22. Mention any **one** danger of living near rivers.

.....
23. Name the type of vegetation that most animals feed on.

.....
24. Give any **one** factor which determines the settlement of people in an area.

.....
25. Name the governor who built Fort Patik.

.....
26. Give **one** reason why Common Wealth Games are organized.

.....
27. Name the organ of the government which interprets law to the people.

.....
28. Write down any **one** problem affecting Entebbe Airport.

.....
29. Which type of rainfall is experienced by the people around Mt. Elgon ?

.....
30. Mention the date when the sun is overhead the equator.

.....
31. Identify the major activity done by people around River Nile.

.....
32. Give **one** reason why Isimba Hydro Power Plant was constructed.

.....
33. State the use of a wind vane at a weather station.

.....
34. Name **one** crater lake found on Mountain Rwenzori in Uganda.

35. Give **one** reason why people read newspapers.

.....

For each of the questions **36** to **40**, answer **EITHER** Christianity **OR** Islamic questions but **not** both. **No marks** will be awarded to a candidate who attempts both alternatives in **a particular number**.

☐

36. Name the book Christians use while preaching in church.

.....

OR: Name the book Muslims use while preaching in the mosque.

.....

37. **EITHER:** Write UJCC in full.

.....

OR: Write UMSC in full.

.....

38. **EITHER:** How do Christians use their animals to benefit the church ?

.....

OR: How do Muslims use their animals to benefit the mosque ?

.....

39. **EITHER:** In how many days did God create the world ?

.....

OR: In how many days did Allah create the world ?

.....

40. **EITHER:** Name the first book in the Bible.

.....

OR: Name the first Surat in the Qur'an.

.....

SECTION B: 60 MARKS.

Questions **41** to **55** carry **four marks** each.



41.(a) Define the term vegetation.

.....

.....

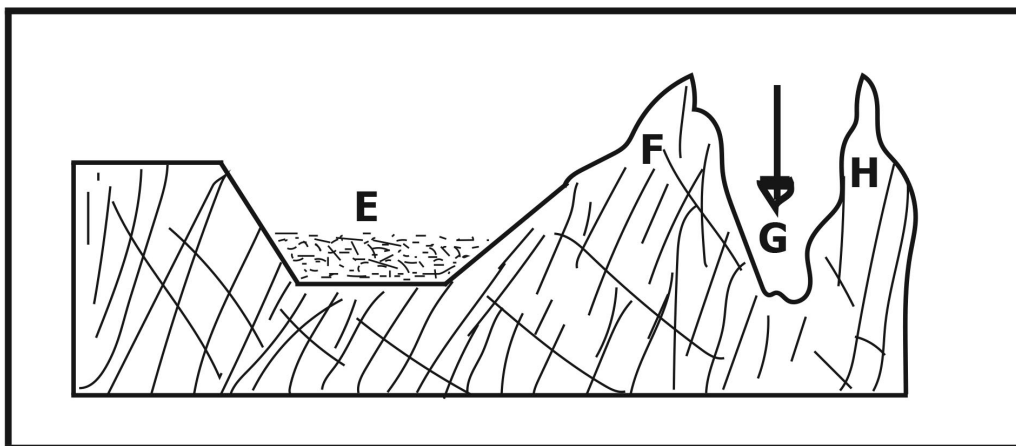
(a) Write down any **three** ways of conserving the vegetation of Uganda.

(i)

(ii)

(iii)

42. Study the diagram below and answer the questions that follow.



(a) Name the physical features marked **E** and **G**.

(i) **E**:.....

(ii) **G**:.....

(b) Write down any one danger of living in area **G**.

.....

(c) Mention any one human activity carried out area marked **F**.

.....

43.(a) Who is a child ?

.....

(b) Mention any **two** right of children.

(i)

(ii)

(c) Name the LCI executive committee member responsible for the welfare of children.

.....

44.(a) Write down any **two** elements of culture of the people in our community.

(i)

(ii)

(b) In which **two** ways is culture important in the social development of people in the community.

(i)

(ii)

45.(a) Give any **two** economic importance of rivers in Africa.

(i)

(ii)

(b) State any **two** problems faced by river in Africa.

(i)

(ii)

46.(a) What is a project ?

.....
.....

(b) Write down any **two** examples of project a person can start at home.

(i)

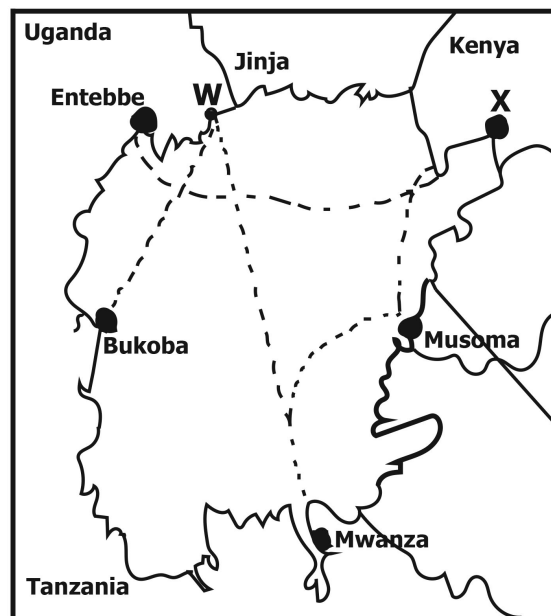
(ii)

(c) Suggest any **one** benefit of having projects at home.



.....

47. Study the sketch map of Lake Victoria below and use it to answer the questions



(a) Name any **one** port on the map drawn above.

.....

(b) Write any **one** modern means of transport used between port **W** and **X**.

.....

(c) Give one different between port **X** and port Mwanza.

.....

(d) State **one** economic benefit of route **W** to Uganda.

.....

48.(a) Which organization did the East African Community replace in 1967 ?

.....

(b) Mention any **two** challenges faced by the EAC today.

(i)

(ii)

(c) Write down any **one** achievement of the East African Community.

.....

.....

48.(a) Give any **two** advantages of foreign aid.

(i)

(ii)

(b) Write down any **two** disadvantages of foreign aid to developing countries.

(i)

(ii)

50.(a) Give any **two** reasons why more goods are transport by road than by train in East Africa.

(i)

(ii)

(b) State any **two** effects of bad weather on the roads in East Africa.

(i)

(ii)

For questions **51** to **54**, answer **EITHER** for Christianity **OR** for Islamic questions but **Not** both. **No mark** will be awarded to any candidate who attempts both alternatives in **a particular number**.

51. **EITHER: "I AM WHO I AM". (Exodus 3:14)**

(a) Give the meaning of a prayer ?

.....

(b) Give **two** reason why Christians pray to God.

(i)

(ii)

(c) Mention **one** type of prayer in Christianity.

.....

OR:



(a) Give the meaning of a prayer ?

.....

(b) Give **two** reason why Muslims pray to Allah.

(i)

(ii)

(c) Mention the type of prayer said by Muslims in the morning.

.....

52. **EITHER:**

(a) What is a gospel ?

.....

(b) Mention any **two** gospel books in the Bible.

(i)

(ii)

(c) Mention any **one** gospel writer in the Bible.

.....

OR:

(a) How many times do Muslims pray a day ?

.....

(b) Mention any **three** pillars of Islam

(i)

(ii)

(iii)

53. **EITHER:**

(a) What do Christians celebrate on each of the following days ?

(i) Easter Sunday:.....

(ii) Ash Wednesday:.....

(iii) Good Friday:.....

(iv) Christmas:.....

OR:

(a) What do you know about the following ?

(i) Hejira:.....

(ii) Saum:.....

(iii) Jihad:.....

(iv) Mt. Hira:.....

54. **EITHER:**



(a) By whom was the Lord's prayer composed ?

.....

(b) Mention any **two** requests made in the Lord's prayer.

(i)

(ii)

(c) What do you learn from from the Lord's prayer.

.....

OR:

(a) In which direction do Muslims face while conducting prayers ?

.....

(b) Name the following prayers in Islam:

(i) Prayer performed in the early morning.

.....

(ii) Congregational prayers on Friday.

.....

FOR BOTH:

55.(a) Define the term Divorce / Talaq.

.....

.....

(b) Write down any **one** cause of Divorce / Talaq.

.....

(c) Mention any **one** effect of Divorce / Talaq.

.....