



KAMPALA CITY EXAMINATIONS BOARD

QUALITY CHECK TWO

2025

SOCIAL STUDIES WITH EDUCATION RELIGIOUS

Time Allowed: 2 hours 15minutes

Random No.						Personal No.		

Candidates' name:

Candidates' signature:

District ID No.

--	--	--	--

Read the following instructions carefully:

1. Do not write your **school** or **district name** anywhere on this paper.
2. This paper has **two** sections: **A** and **B**. Section **A** has **40** questions and section **B** has **15** questions. The paper has **16 printed pages**.
3. Answer **all** the questions. **All** the answers for both sections **A** and **B** must be shown in the spaces provided.
4. **All** the answers **must** be written using a **blue** or **black** ball point pen or ink. Any work written in pencil other than drawings will **not** be marked.
5. Unnecessary **changes** in your work and handwriting that cannot be read easily may lead to **loss of marks**.
6. Do not fill anything in the table indicated: **"FOR EXAMINERS' USE ONLY"** and in the boxes inside the question paper.

FOR EXAMINERS USE ONLY		
QN NO.	MARKS	EXR'S NO.
1-10		
11-20		
21-30		
31-40		
41-43		
44-46		
47-49		
50-52		
53-55		
TOTAL		

Official line: 0753235124 @ city exams

SECTION A:40MARKS

Question **1** to **40** carry **one** mark each

1. Which school symbol helps a tourist to locate a school?

.....


2. Give a reason why places found within the rift valleys have high temperatures.

.....

3. Why is Uganda crossed by the equator?

.....

4. In the space provided, draw a map symbol of a hill.



5. How did the coming of the missionaries socially affect the people of East Africa?

.....

6. In which **one** way do prevailing winds influence the climate of Africa?

.....

7. To which ethnic group do the Rendille of Kenya belong?

.....

8. State any **one** way the people of kapchorwa can solve the problem of poor road network in the area.

.....

9. Give **one** way how the National Environment Management Authority (NEMA) has helped in the conservation of the natural environment.

.....

10. Why did the people of Acholi stage the Lamogi rebellion?

.....

.....



11. What time will it be in Nairobi if it is 11:00p.m in Burundi?

.....

12. Calculate the actual ground distance between town K and town y if there is a distance of 6cm between the towns on the map.
(Using the scale 1cm = 10km)

13. Name any **one** weather instrument kept in Stevenson screen.

.....

14. State **one** economic activity carried out by the people in lakes and rivers.

.....

15. Give any **one** way the wooden club was useful to early man.

.....

16. Why was Africa regarded as a dark continent by the Europeans?

.....

.....

17. How do people in Urban areas benefit from those living in Rural areas?
.....
18. Which type of trade was replaced by slave trade?
.....
19. State **one** economic contribution of the Bachwezi in Uganda.
.....
20. In which **one** way does the police maintain law and order in the country?
.....
21. Name **one** river in Africa which ends in Estuary way.
.....
22. State any **one** way the government can overcome a deficit budget in country.
.....
23. Give any **one** cause of a by-election.
.....
24. Why is the miombo woodland of central Tanzania sparsely populated?
.....
25. Which climatic zone of Africa is described as hot and dry?
.....
26. Give the meaning of "indirect rule" as used during colonial rule.
.....
.....



27. How have the member states benefited from the East African community?

.....

28. State any **one** way the government of Uganda is trying to eradicate poverty among people in Uganda.

.....

29. When does a bill become a law?

.....

30. How can married people safeguard themselves against AIDs?

.....

.....



31. Which land form covers the largest part of East Africa?

.....

32. How are the Drakensberg mountains different from the Atlas mountains in terms of their formation?

.....

33. Why are zebra crossings placed on busy roads?

.....

34. How did the second world war influence the rise of African nationalism?

.....

.....

35. State **one** reason why children are not allowed to move alone during day and night.

.....

For each of the questions **36** to **40**, answer **EITHER** the Christianity **OR** the Islamic but **not** both. **No marks** will be awarded to a candidate who attempts both alternatives in **a particular number**.

36. **EITHER:**

Give **one** reason why Joseph was sold to Midianite traders by his brothers.

.....

.....

OR:

Give **one** reason why Yusuf was sold to Midianite traders by his brothers.

.....

37. **EITHER:**

State **one** role of angels in Christianity.

.....

OR:

State any **one** role of angels in Islam.

.....

38. **EITHER:**

In which city was Jesus Christ born?

.....

OR:

In which city was prophet Muhammad (peace be upon him) born?

.....

39. **EITHER:**

Name the prophet of God who suffered serious illness but remained faithful.

.....

.....

OR:

Name the prophet of Allah who suffered serious illness but remained faithful.

.....

.....

40. **EITHER :**

What do we call the night when the angel of death passed over the houses of Israelites in Egypt?


.....

.....

OR:

What is the night called when the Quran was first revealed to prophet Muhammad (peace be upon him)?

.....



SECTION: 60 MARKS

Question **41** to **55** carry **four** marks each

41. (a) Give the meaning of the term climate.

.....

.....

.....

- (b) State **two** factors that can lead to desert climate.

(i)

(ii)

- (c) Why do people in desert areas wear turbans on their heads?

.....

.....

42. (a) Which social service is provided by medical workers in the hospital?

.....

.....

- (b) Give **two** services provided by medical workers in the hospital?

(i)

(ii)

- (c) How has the government of Uganda improved the standards living of medical workers in the country?

.....

.....



43. Study the Uganda coat of Arms and use it to answer the questions that follow.



- (a) Who designed the above Uganda symbol?

.....

- (b) What do the following features symbolizes on the Uganda coat of Arms?

(i) **X**

(ii) **Z**

- (c) Why is the bird marked **Y** standing on one leg?

.....

44. (a) What is the difference between perishable goods and fragile goods?

.....

- (b) Mention **two** examples of perishable goods?

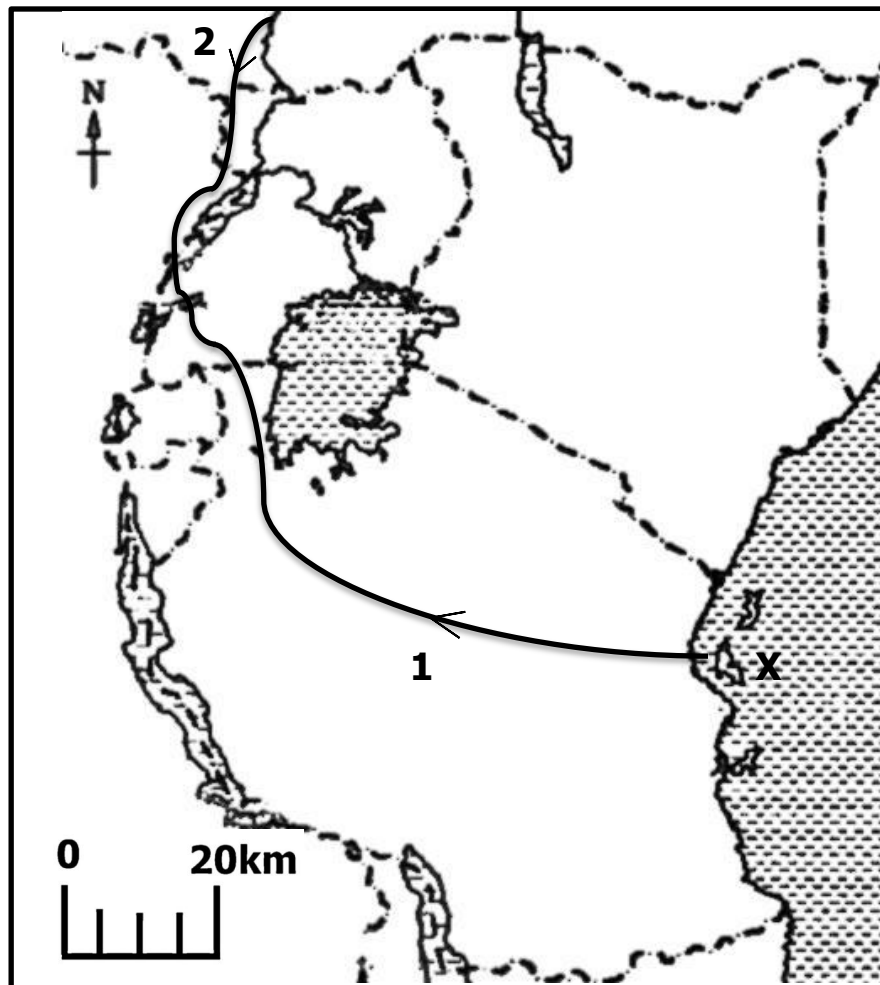
(i)

(ii)

- (c) Give the advantage of using Air transport to transport perishable goods than Road transport.

.....

45. Study the exploration route map below and use it to answer the questions that follow.



- (a) Give **one** reason why most European explorers who came to Uganda first went to island Marked **x**.

.....

- (b) Name those **two** European explorers who used the exploration route marked

(i) **1**

(ii) **2**

- (c) Why were the most European explorers who came to Uganda much interested in finding out the source of River Nile?

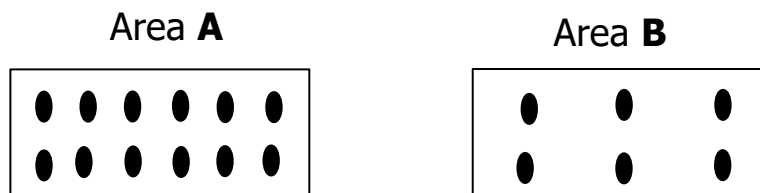
.....

46. (a) Give the meaning of the term population density.

.....

.....

Study the diagram below and use it to answer the questions that follow.



- (b) What is the population density of area;

(i) Area **A**

(ii) Area **B**

- (c) State **one** advantage of high population growth in an area.

.....

47. (a) What type of trade was carried out between the Berbers and the people of West Africa across the Sahara desert?

.....

- (b) Mention **two** major trade items which were involved during that trade.

(i)

(ii)

- (c) How did the people of West Africa benefit from the above trade?

.....

48. (a) How is a map different from a picture?



.....

- (b) Which map element helps to give detailed information of what the map is all about?

.....

- (c) How are the lines of longitude and latitudes important to a map readers?

.....

- (d) Name the only town in Uganda crossed by the equator.

.....

49. Use a pen to match list **A** to list **B**.

List A

List B

- | | |
|--|-----------------------------|
| (a) Hon Joseph Ntakirutimana. | Current chairperson of EAC |
| (b) Yoweri Kaguta Museveni.
(Tibuhaburwa) | Current speaker of EALA |
| (c) H.E William Ruto. | Secretary general EAC |
| (d) H.E Veronica mueni Nduva. | Current president of Uganda |

- (a) Hon Joseph Ntakirutimana
- (b) Yoweri Kaguta Museveni (Tibuhaburwa).....
- (c) H.E Veronica mueni Nduva
- (d) H.E William Ruto

50. (a) Which vegetation zone covers the largest part of East Africa?

.....

- (b) Alpha is a tourist and he would like to see ostriches in Uganda. Which national game park would you advise Alpha to visit?

.....



(c) State **two** importance of game parks in Uganda.

(i)

(ii)

For each of the questions **51** to **55**, answer **EITHER** the Christianity **OR** the Islamic but **not** both. **No marks** will be awarded to a candidate who attempts both alternatives in **a particular number**.

51. **EITHER:**

(a) Give any **one** reason why God created Adam.

.....

(b) In which way was the creation of Adam different from that of other creatures?

.....

(c) How did Adam sin against God?

.....

(d) Whom did Adam blame for his sins?

.....

OR:

(a) Give any **one** reason why Allah created Adam.

.....

(b) In which way was the creation of Adam different from that of other creatures?

.....

(c) Whom did Adam blame for his sins?

.....

52. **EITHER:**

(a) State any **two** reasons why Christians pray as soon as they wake up in the morning.

(i)

(ii)

(b) Give any **two** symbols of a Christian family.

(i)

(ii)

OR:

(a) What is Tayammum in Islam?

.....

.....

(b) Give any **one** condition under which Tayammum is done.

.....

(c) Give any **two** things that may be used for Tayammum.

(i)

(ii)

53. **EITHER:**

(a) Give any **one** way in which prophets are important in the Christian Faith.

.....

(b) Give any **one** reason why each of the following people are remembered in the Christian faith.



(i) Abraham

(ii) John the Baptist

(iii) Zacchaeus

OR:

(a) Give **one** way in which prophets are important in the Islamic Faith.

.....

(b) Give any **one** reason why each of the following people are remembered in the Islamic Faith.

(i) Ibrahim

(ii) Yahya ibn Zakariyya

(iii) Nuh

54. **EITHER:**

"I must go and look at this strange sight" (Exodus 3:3)

(a) Who said the above words?

.....

(b) What was the strange thing he had seen?

.....

(c) State **two** miracles Moses performed in order to convince pharaoh to release children of Israel.

(i)

(ii)

OR:



"Oh here, for I have spotted a fire perhaps from there I can bring you some directions or torch from the fire you so may warm yourselves" (SURA AL Qasas 28:29 - 30)

(a) Who said the above words?

.....

(b) On which mountain was the fire spotted on?

.....

(b) State **two** miracles prophet Musa did in Egypt in order to convince pharoah to release the Bani israel.

(i)

(ii)

55. **EITHER:**

(a) When do Christians celebrate the birth of Jesus Christ?

.....

(b) State **three** miraculous things that Jesus Christ did to show that He was the true son of God.

(i)

(ii)

(ii)

OR:

(a) When do Muslims celebrate the birth of prophet Muhammad(p.b.u.h)?

.....

(b) State **three** miraculous things that prophet Muhammad did to show that He was a true messenger of Allah.

(i)

(ii)

(iii)

THE END

