



GLORISO EXAMINATIONS BOARD (GEB) – KAMPALA
PRIMARY SCHOOLS JOINT PRE-MOCK EXAMINATIONS, 2025

P.7 SOCIAL STUDIES WITH RELIGIOUS EDUCATION

Time allowed: 2 hours 15 minutes

Random No.						Personal No.		

Candidate's Name:

Candidate's Signature:

District ID No:

--	--	--	--

Read the following instructions carefully:

1. Do not write your **school** or **district name** anywhere on this paper.
2. This paper has two sections **A** and **B**. Section **A** has **40 questions** and **section B** has **15 questions**. This paper has **12 pages** printed altogether.
3. Answer **all** questions. All the working for both sections **A** and **B** must be shown in the spaces provided.
4. **All** working must be done using a **blue** or **black** ball point pen or ink. Any work done in pencil will **NOT** be marked except drawings and diagram.
5. Unnecessary **changes** in your work and handwriting that cannot be easily read may lead to loss of marks.
6. Do not fill anything in the table indicated **“For examiners’ use only”** and the boxes inside the question paper

FOR EXAMINERS’ USE ONLY		
Qn. No.	MARKS	EXR’S No.
1 – 10		
11 – 20		
21 – 30		
31 – 40		
41 – 43		
44 – 46		
47 – 49		
50 – 52		
53 – 55		
TOTAL		

SECTION A: 40 MARKS

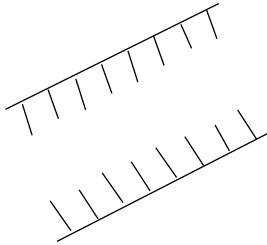
Questions **1** to **40** carry **one mark** each.

1- Name the type of scale represented below.

1cm on a map represents 10km on the ground.

2- Why did some leaders in East Africa support slave trade?

3- Name the map symbol below.



4- How can one become a citizen of Uganda?

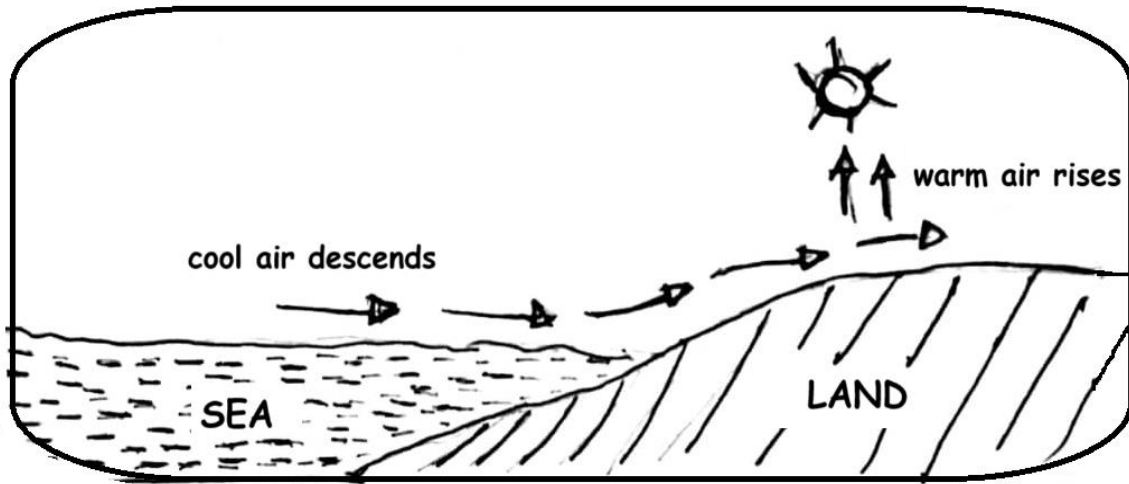
5- Give any one reason why the government of Uganda promotes swamp conservation.

6- State one factor that makes Arabic coffee growing successful on the slopes of Mt. Elgon.

7- Write NIRA in full.

8- Apart from taxes, give one other local source of government revenue.

Study the diagram below and answer question 9.



9- Name the type of breeze shown in the diagram above.

10- Give any one importance of oases to the people living in desert areas.

11- How did climate influence the settlement patterns of ethnic groups in East Africa?

12- Give any one reason why the East African community was revived.

13- Name the body in Uganda responsible for conducting the census exercise.

14- How was Johann Ludwig Krapf important in the spread of Christianity in East Africa?

15- Mention any one way the government of Uganda can control population growth.

16- Write down any one effect caused by the fixing of Uganda's boundaries to the communities.

17- Give the meaning of the term ranching.

18- Why was the railway line extended from Jinja to Namasagali?

19- Give any one reason for the formation of political parties in East African countries in the 1950s.

20- Write down any one way people use money wisely in our district.

21- How did the independence of Eritrea affect Ethiopia?




22- Name the country in East Africa with the highest population density.

23- Write down any one importance of the taxes collected by the government of Uganda.

24- Mention any one disadvantage of kingdoms.

25- In the space provided below, draw the road sign of speed limit.



26- How did the Alur tribe of west Nile in Uganda come into existence?

27- Why was the bird below chosen as Uganda's national emblem?



28- Give any one way human rights are violated in some East African countries.

29- How are maps important to travelers?

30- How is the formation of Atlas Mountain different from that of Drakensberg Mountain?

31- State any one factor that enables camels to survive in harsh desert conditions.

32- Mention any one way of caring for wild animals.

33- Write down any one way of promoting culture in our community.

34- Who was the first governor of the Equatorial Province?

35- Give any one cause of civil wars in different countries.

For questions 36 -40, answer either Christianity or Islam but not both on a number.

36- Either: What is a sin according to Christianity?

Or: What is a sin according to Islam?

37- Either: Who was the father of Joseph who was sold to Egypt by his brothers?

Or: Who was the father of Prophet Yusuf?

38- Either: Why is the Bible called a holy book?

Or: Why is the Quran called a holy book?

39- Either: Which message did John the Baptist preach?

Or: Which message did Angel Jibril give to Prophet Muhammad?

40- Either: Mention any one type of prayer in Christianity.

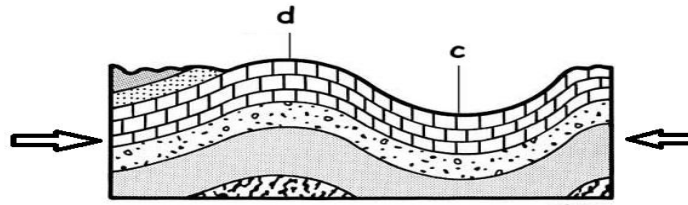
Or: Mention any one type of prayer performed by Muslims.



SECTION B: 60 MARKS

Questions **41** to **55** carry **four** marks each.

41- Use the diagram below to answer the questions that follow



(a) Name the process that led to the formation of mountains shown above.

(b) Name the parts of the diagram above labelled

c _____

d _____

(c) Mention any one mountain in Africa formed by the process above.

42- (a) Name the type of farming where a farmer both grows crops and rears animals.

(b) State any two advantages of the above mentioned type of farming.

(i) _____

(ii) _____

(c) How do the crops benefit from the animals in the farm?

43- What title is given to the highest civil servant in a ministry?

(b) State the way in which one can become the LCIII chairperson in any sub-county of Uganda.

(c) Mention two ways in which leaders can improve on the welfare of people in their communities.

(i) _____

(ii) _____



44- (a) Name the national game park in East Africa known for having flamingo birds.

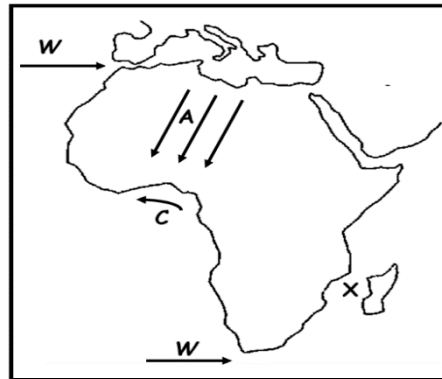
(b) How do national game parks create job opportunities to people in East Africa?

(c) Give any two solutions to the problems facing the tourism industry in East Africa.

(i) _____

(ii) _____

45- Use the sketch map of Africa below and answer the questions that follow.



(a) Name the water channel marked with letter X on the map.

(b) How does the ocean current marked with letter C affect the climate of West Africa?

(c) Name the winds marked with letter W on the map.

(d) How do the winds marked with letter A affect the climate of West Africa?

46- (a) Name the source of solar energy.

(b) Give any two uses of solar energy.

(i) _____

(ii) _____

(c) Give one advantage of solar energy over hydro electricity



9

47- (a) Mention two economic contributions of the Bachwezi in East Africa.

(i) _____

(ii) _____

(b) What led to the final collapse of the Chwezi Empire?

(c) How is Bigobyamugenyi related to the Bachwezi?

48- (a) Write down any two examples of bad recreation activities.

(i) _____

(ii) _____

(b) Mention any one effect of bad recreation activities.

(c) Give any one importance of recreation activities to people.

49- (a) Mention two special interest groups represented in the parliament

(i) _____

(ii) _____

(b) Write down any two duties of the National Assembly in Uganda.

(i) _____

(ii) _____

50- (a) How is Sir William Mackinnon related to the IBEACO?



(b) Give any two reasons why IBEACO was formed.

(i) _____

(ii) _____

(c) How was IBEACO helpful to the Christian missionaries?

10

For questions 51 -55, answer either Christianity or Islam but not both on a number

51- Either; (a) What is a sacrament?

(b) Mention any two sacraments in Christianity

(i) _____

(ii) _____

(c) Name the sacrament that encourages repentance

Or: (a) What is Islam?

(b) Mention any two pillars of Islam.

(i) _____

(ii) _____

(c) How do pillars of Islam help Muslims to live in peace?

52- Either: Match the events in list A to those in list B

List A

(i) Ash Wednesday

(ii) Holy Thursday

List B

Jesus was arrested

disciples received the holy spirit

- | | |
|---------------------|---------------------------|
| (iii) Ascension day | Christians begin fasting |
| (iv) Pentecost | Jesus ascended to heaven. |
| (i) Ash Wednesday | _____ |
| (ii) Holy Thursday | _____ |
| (iii) Ascension day | _____ |
| (iv) Pentecost | _____ |

Or: Match the events in list A to those in list B.

List A

List B

- | | |
|--------------------|---|
| (i) Idd-Adhuha | Holy journey of Muslims to Mecca. |
| (ii) Hijja | celebration that marks the end of Ramadhan |
| (iii) Idd-el-fitir | Prophet Muhammad's journey from Mecca to Medina |
| (iv) Hejira | celebration to remember the action of Prophet Ibrahim |

- (i) Idd-Adhuha _____
- (ii) Hijja _____
- (iii) Idd-el-fitir _____
- (iv) Hejira _____



53- Either: (a) Mention any two parables used by Jesus.

- (i) _____
- (ii) _____

(b) Give two reasons why Jesus used parables when teaching.

- (i) _____
- (ii) _____

Or: (a) Mention any two miracles performed by Prophet Muhammad.

- (i) _____
- (ii) _____

(b) Give two reasons why Prophet Muhammed performed miracles.

(i) _____

(ii) _____

54- Either: (a) What was the symbol of God's covenant with Abraham?

(b) Mention any two ways Abraham showed faith to God.

(i) _____

(ii) _____

(c) What lesson do you learn from the above person?

Or: (a) Mention any two ways Prophet Ibrahim showed faith to Allah.

(i) _____

(ii) _____

(b) Mention any one son of Prophet Ibrahim.

(c) What lesson do learn from the actions of Prophet Ibrahim?

55- For both: (a) What is reconciliation?

(b) How is reconciliation important to Christians / Moslems?

(c) Mention any two qualities of a God fearing person.

(i) _____

(ii) _____

****GOOD LUCK****

END

