

# THE PEARL EXAMINATIONS 2025

## TERM TWO ASSESSMENT 2025

### PRIMARY TWO MATHEMATICS


My Name: \_\_\_\_\_

I am in: \_\_\_\_\_

My School is : \_\_\_\_\_

1- Divide:  $4 \div 2$

2- Name the set below.



3- Write 28 in words.

4- shade the fraction

$\frac{3}{5}$



5- Draw a square in the space provided.

6- Form groups of threes

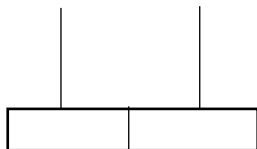


\_\_\_\_\_ groups of 3

7- Represent 17 on the abacus below

17 = T

O



8- Find the missing number.

- 4 = 2

9- What is the place value of 5 in the number 256?

10- Fill in the missing number.

123, 124, 125, \_\_\_\_\_, 127, \_\_\_\_\_, 129

11- Given that set  $Z = \{1, 2, 3, 4, 5\}$  How many members are in set Z?

12- Show the time.  
It is 4 o'clock.



13- Multiply:

$$\begin{array}{r} 7 \\ \times 3 \\ \hline \end{array}$$

14- Fill in hundreds, tens and ones

204 = \_\_\_\_\_ hundreds \_\_\_\_\_ tens \_\_\_\_\_ ones.

15- What number has been expanded to give;  
4 tens and 3 ones?

16- \_\_\_\_\_ is a collection of well defined objects.

17- Share 9 apples equally among 3 girls. How many apples will each girl get?

18- What number comes between 64 and 66?

19- Cross out to make 12

□□□□□□□□□□□□□□

### SECTION B: 60 MARKS

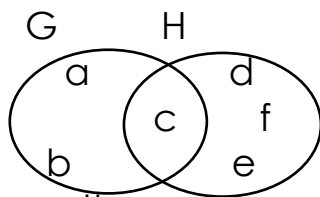
20- (a) Workout:  $\frac{2}{9} + \frac{4}{9}$

(b) Write a quarter in figure.

(c) Subtract:

$$\frac{6}{6} - \frac{2}{6} =$$

21- Use the sets below to answer the questions.

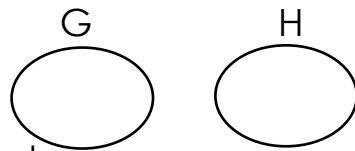


(a) List down the common members.

(b) How many members are in set H?

(c) Which set has less members?

(d) Write the numbers for each set.



22- Draw these shapes

oval	triangle

(b) How many sides has a circle?

23- Find the missing numbers

(a)  $8 - \square = 3$

(b)  $\square + 7 = 10$

(c)  $12 \div 3 = \square$

24- Show hundreds, tens and ones.

(a) 7 hundreds, 8 tens, 4 ones = \_\_\_\_\_

(b) 0 hundred, 1 ten , 3 ones = \_\_\_\_\_

(c) Which number has been expanded?

$60 + 2 =$

25- A tin holds 6 litres of water and a jerrycan holds 20 litres.

(a) Which container holds more water?

(b) How many litres are in both containers?

26- Fill in the days of the week.

Sunday , \_\_\_\_\_, \_\_\_\_\_, Wednesday,  
Thursday, \_\_\_\_\_, Saturday

27- write in words

100 \_\_\_\_\_

94 \_\_\_\_\_

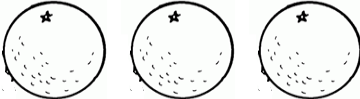
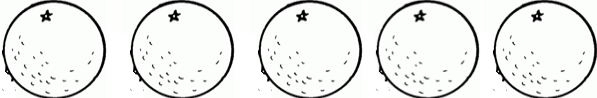
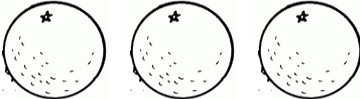
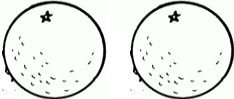
$\frac{1}{3}$  \_\_\_\_\_

28- Read and workout:

(a) Lule had 25 goats and Mato had 414 goats. How many goats do they have altogether?

(b) A teacher had 9 books, she shared them equally among 3 children. How many books did each child get?

29- Study the pico-graph below and answer the questions.

Names	Number of oranges
Katooko	
Kamese	
Kalema	
Kamya	

(a) Who got the least number of oranges?

(b) How many children were given oranges?

(c) How many oranges did they get altogether?