

1. The paper is made up of two sections: **A** and **B**
2. Section **A** has **40** questions (40 marks)
3. Section **B** has **15** questions (60 marks)
4. Answer all questions in both sections **A** and **B**
5. All answers **MUST** be written in the spaces provided in **blue** or **black** ball point pens or ink. Only diagrams should be drawn in pencils.
6. Un-necessary crossing of answers will lead to loss of marks.
7. Handwriting which cannot be easily read may lead to loss of marks.

FOR OFFICIAL USE ONLY		
SECTION	EXERCISE	MARKS
A	40	
B	60	
TOTAL	100	

TEACHER'S COMMENT

100-443887-100

© 2025 KAMPALA PRIMARY SCHOOLS HEADTEACHERS' EXAMINATIONS COMMITTEE.

Turn Over

SECTION A (40Marks)

1. Who heads a family?

2. Name **one** garden tool used for digging.

3. Which instrument is used to show direction?

4. Mention any **one** right of children.

5. Write **one** thing found in a clean home.

6. What is the main natural source of water in the environment?

7. How many urban councils that make up Kampala district?

8. Write **one** item used to clean our bodies.

9. Which soil can be used for making pots?

10. What are wild animals?

11. Name the part of the bird marked X.



X _____

12. Who was the first Muganda?

13. Why do we eat food?

14. Write down clouds which give us rain.

15. What is the work of the police?

16. _____ is the natural source of light.

17. Give **one** example of a flowering plant.

18. Why is a spider not a true insect?

19. What is the largest ethnic group in your urban council?

20. Mention any **one** basic need of people.

21. From which direction does the sun rise?

22. **Identify the map symbol below.**



23. Suggest **one** way of keeping our school compound clean.

24. Which element of weather helps Cathy a P.3 girl to play with a kite?

25. Name the domestic animal that guards our homes.

26. Give **one** reason for saving resources.

27. Why do pilots need a compass?

28. Write **L.C** in full.

29. What is the capital city of Uganda?

30. From which lake do we get salt?

31. State **one** use of electricity at school.

32. How do we call a person who grows crops and keeps animals?


3. What is a habitat of a fish?

4. Write down any **one** religious leader.

5. Why should school children put on uniforms?

6. Give any **one** type of transport.

7. **Identify the plant below.**



8. Give **one** component of soil.

9. How many main body parts has a true insect?

10. Mention **one** role of children at home.

SECTION B (60Marks)

1. a) What are domestic animals?

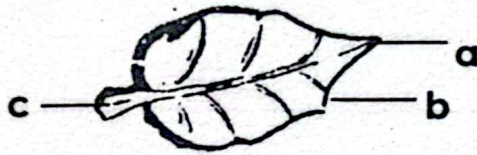
b) **Match correctly.**

mutton	cow
pork	sheep
beef	pig

mutton	_____
pork	_____
beef	_____

42. a) State one crop grown in swamps.

b) Name the parts of a leaf below.



- a) _____
b) _____
c) _____

43. a) Write any two sources of water.


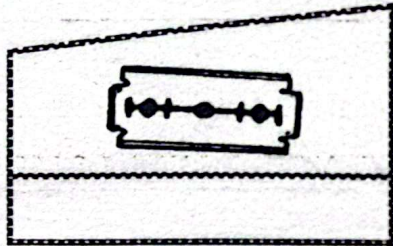
i) _____ ii) _____

b) State any two ways of using water.

i) _____

ii) _____

44. a) Name these items found in a first aid box.



b) Give one common accident at home.

c) State one quality of a good first aider.

45. a) Who is a child? _____

b) Write down any two children's rights.

i) _____

ii) _____

c) Identify any one child abuse.

46. a) What are living things? _____

b) Write down any **three** examples of non living things.

i) _____ ii) _____

iii) _____

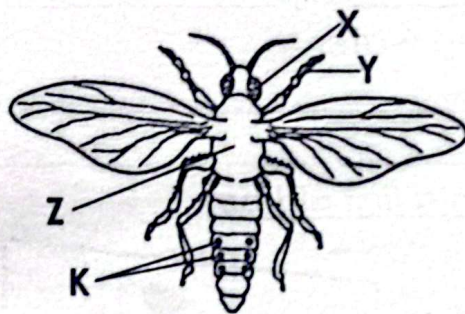
47. a) What are social services?

b) Give any **two** examples of social services.

i) _____ ii) _____

c) Which social service do we get from school?

48. Use the diagram below to answer questions that follows.



a) Name parts labelled.

i) X _____ ii) Y _____

iii) Z _____

b) What is the use of part marked K.

49. a) Match the following correctly.

clay soil for growing crops

loam soil for making glasses

sand soil for modeling

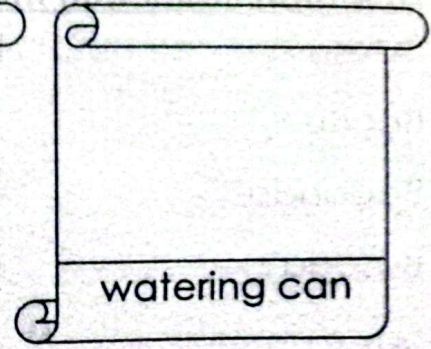


clay soil _____

loam soil _____

sand soil _____


b) Identify the type of soil best for growing crops.

50. a) Draw the following garden tools.



b) Which garden tool is used for transporting seedlings?

51. a) Name the parts of a fish below.



a) Name parts marked

M _____

N _____

X _____

b) What is the use of part X?

52. a) What are physical features?

b) Name part marked Y.



Y _____

c) Apart from valleys, mention any other two examples of physical features.

i) _____ ii) _____

53. a) Match tribes with their language correctly.

Ateso	Luganda
Bagisu	Lusoga
Baganda	Iteso
Basoga	Lumasaba

Ateso	_____
Bagisu	_____
Baganda	_____
Basoga	_____

54. a) Where do people keep their money safely?

b) Name any two things we spend on

i) _____

ii) _____

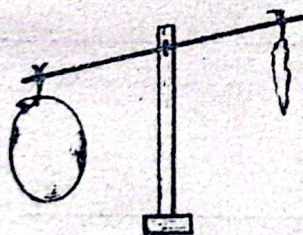
c) Give one reason why we save.

55. a) What is air? _____

b) Write down any two uses of air.

i) _____ ii) _____

c) Mention the property of air shown below.



*** GOOD LUCK ***