


# THE CRANES EXAMINATIONS BOARD



**KANSANGA - KAMPALA**  
*"We Lead the Leader"*  
**END OF TERM TWO ASSESSMENT - 2025**



## PRIMARY THREE EXAMINATION


### PRIMARY THREE LITERACY ONE:B

My name is: .....

### SECTION A : 20 MARKS

1. Write down any **one** example of people who work at a hospital.  
\_\_\_\_\_
2. Identify the language spoken by the Itesots.  
\_\_\_\_\_
3. Give the social service we get from a school.  
\_\_\_\_\_

**Below is a protective gear. Use it to answer questions 4 and 5.**




4. Name the protective gear drawn above.  
\_\_\_\_\_
5. State **one** importance of the above item to a Boda Boda rider.  
\_\_\_\_\_
6. Mention any **one** basic need of a family.  
\_\_\_\_\_
7. Name the biggest government hospital in Uganda.  
\_\_\_\_\_
8. Give the type of season in which farmers harvest their crops.  
\_\_\_\_\_
9. State any **one** craft made out of sisal.  
\_\_\_\_\_
10. Why is a hut called a temporary house?  
\_\_\_\_\_

11. State **one** role played by a dog at home.

12. Name any **one** play material made of dry banana fibre.

13. Name the school symbol drawn below.



14. Give any **one** importance of a cleaner at school.

15. Write down any **one** use of water to animals.

16. State the title given to the head of a family.

17. Mention the use of a bell at school.

18. Identify any **one** role played by boys at home.

19. Why is air transport not commonly used by people in your community.

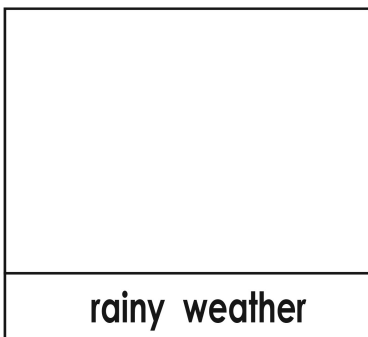
20. Give any **one** importance of a phone to a P.3 pupil.

## SECTION: B 40 MARKS

21.(a) Mention any **one** advantage of having a sick bay at school.

(b) State **one** reason why a school must have a school nurse.

22.(a) Draw this type of weather in the space provided below.



(b) Write down any **one** thing used in managing the weather you have drawn.

23.(a) Give the meaning of a family.

\_\_\_\_\_

(b) Write any **one** member of a family.

\_\_\_\_\_

24.(a) Write down any **one** reason why people build houses.

\_\_\_\_\_

(b) Mention any **one** thing a good home must have.

\_\_\_\_\_

25.(a) What is an accident?

\_\_\_\_\_

(b) Give any **one** cause of accidents at home.

\_\_\_\_\_

26.(a) Write **H/M** in full.

\_\_\_\_\_

(b) Write down any **one** role played by a Head teacher at school.

\_\_\_\_\_

27. State any **two** ways through which people misuse swamps in your community.

(i) \_\_\_\_\_

(ii) \_\_\_\_\_

28. As a Primary Three pupil, identify any **two** things you learnt during your previous tour.

(i) \_\_\_\_\_

(ii) \_\_\_\_\_

29.(a) Give the meaning of wild animals.

\_\_\_\_\_

(b) In which **one** way are wild animals dangerous to people?

\_\_\_\_\_

30. List down any **two** important places in your community.

(i) \_\_\_\_\_

(ii) \_\_\_\_\_

31. Give any **two** social services that you know.

(i) \_\_\_\_\_ (ii) \_\_\_\_\_

32. Write down any **two** examples of physical features.

(i) \_\_\_\_\_ (ii) \_\_\_\_\_


33.(a) Name the place where Uganda's International Airport is found.

(b) Identify the fastest type of transport used in Uganda.

34.(a) Give the meaning of the term "a compass"

(b) What name is given to the four main points of a compass?

35. Name these road signs drawn below.



36. Mention any **two** uses of lakes to people who live around them.

(i) \_\_\_\_\_

(ii) \_\_\_\_\_

37.(a) Give the meaning of ethnic groups.

(b) Write down any **one** ethnic group you know.

38.(a) State the meaning of swamps.

(b) Mention any **one** crop grown in a swamp.

39. Identify any **two** examples of leaders in your community.

(i) \_\_\_\_\_

(ii) \_\_\_\_\_

40. Name any **two** means of communication you.

(i) \_\_\_\_\_

(ii) \_\_\_\_\_