

MEVID EXAMINATIONS BOARD

MOCK PREPARATION SET TWO

2025

SOCIAL STUDIES AND RELIGIOUS EDUCATION

Time Allowed: 2 hours 15 minutes

Random No.						Personal No.		

Candidate's Name.....

Candidate's signature:.....

READ THE FOLLOWING INSTRUCTIONS CAREFULLY:

1. This paper has two sections: **A** and **B**.
Section **A** has **40** questions and section **B** has **15** questions.

2. Answer **all** questions. **All** answers to both sections **A** and **B** must be written in the spaces provided.

3. All answers **must** be written using a **blue** or black ball point pen or ink. Any work written in pencil will **not** be marked.

4. Unnecessary **changes** in your work and handwriting that cannot be easily read may lead to **loss** of marks.

5. Do not fill anything in the table indicated: **"for examiner's use only"** and boxes inside the question paper.

FOR EXAMINER'S USE ONLY

QN. NO.	MARK	EXR'S NO.
1 - 10		
11 - 20		
21 - 30		
31 - 40		
41 - 43		
44 - 46		
47 - 49		
50 - 52		
53 - 55		
TOTAL		




MEVID
EXAM CONSULTS LIMITED

Organizers of; Examinations Nursery – P7, Holiday packages, Workbooks, and Workshops
Tel: 0706602422 0779101164

SECTION A : 40 MARKS

Questions **1** to **40** carry one mark each

1. What did weapons represent in archaeology?
.....
2. Why are latitudes that cross Uganda marked degrees North and degrees South?
.....
3. Give a reason why gravity flow is suitable method of irrigation on Gezira.
.....
4. Which practice did the Bachwezi use to protect themselves against enemies?
.....
5. Mention the political importance of Mozambique channel.
.....
6. Name the map symbol below.



7. Which group of leaders inherits authority from their ancestors?
.....
8. Name one modern social activity carried out by people in your area.
.....
9. How did the British put Nandi and Masai under one governance for easy control?
.....
10. In which way is parental guidance important to school children?
.....
11. Which organ of a democratic government is responsible for making a national budget?
.....

12. How are the following road signs different?



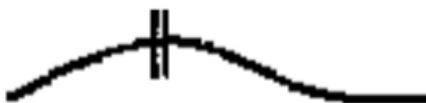
A



B

13. How did the coloureds come into existence?

14. Name the industrial importance of the feature represented below?



15. Why are imported goods more expensive than locally manufactured goods?

16. Why is railway transport used by few people in Uganda?

17. Mention the colour on the Uganda flag that represents African heritage?

18. What does **Return** mean in the 5R's in proper management of wastes in the environment ?

19. Why did European explorers need to first seek for permission from the sultan of Zanzibar before entering East Africa?

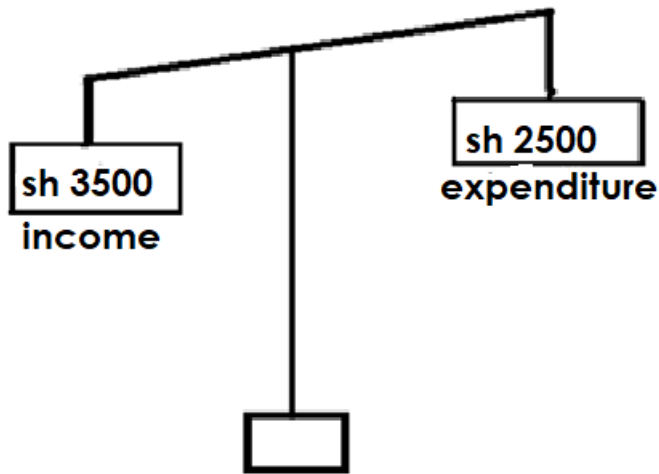
20. How can the government of Uganda ensure high tax collection in the country?

.....

21. Name the only Bantu kingdom that existed in Kenya.

.....

22. Name the type of budget shown below.



.....

23. Mention one factor that leads to a dispersed settlement pattern.

.....

24. How did political parties help Ugandans to demand for independence?

.....

25. Name one political reason for creating many districts in Uganda.

.....

26. Why is Uganda said to belong to neither the northern hemisphere nor the southern hemisphere?

.....

27. Give a reason why 2001 is a special year to the EAC.

.....

28. Why do people compare prices while spending?

.....

29. How did missionaries lead to the eradication of illiteracy in East Africa?

.....

30. Why do commercial banks give financial advice to people before giving them loans?

.....

31. How does the growing of pyrethrum help to improve on the health of people?

.....

32. Name the political seat in Uganda that promotes women emancipation.

.....

33. How was Carl Peters helpful in the establishment of German rule in Tanganyika?

.....

34. Mention one East African country where the white settlers settled.

.....

35. How did the rift valley make the construction of the Uganda railway difficult?

.....

FOR QUESTIONS 36 TO 40, ANSWER EITHER CHRISTIANITY OR ISLAM BUT NOT BOTH
ON A NUMBER

36. Either: Name one gift the magis gave to baby Jesus.

.....

Or: Name one item given as zakat.

.....

37. Either: How does a Christian P7 child care for the needy?

.....

Or: How does a moslem P7 child care for the needy?

.....

38. Both: What is reconciliation?

.....

39. Either: In which way did Moses express faithfulness to God?

.....

Or: In which way did Musa express faithfulness to Allah?

.....

40. Either: State one way Christians use their talents to serve God.


.....

Or: State one way moslems use their talents to serve Allah.

.....

SECTION B

41. Use the Uganda Coat of Arms below to answer the questions that follow.



a). What do the features marked represent?

B

C

b) Name one document in Uganda where the national symbol above can be found.

.....

c) Why is the above symbol used as a number plate on the president's car in Uganda?

.....

42.a) Name one content of the 1900 Buganda agreement.

.....

b) How did the 1900 Buganda agreement affect the Lukiiko?

.....

c) Mention two recommendations of the 1900 Buganda agreement.

i)

ii)

43. a) Name two causes of ocean currents.

i)

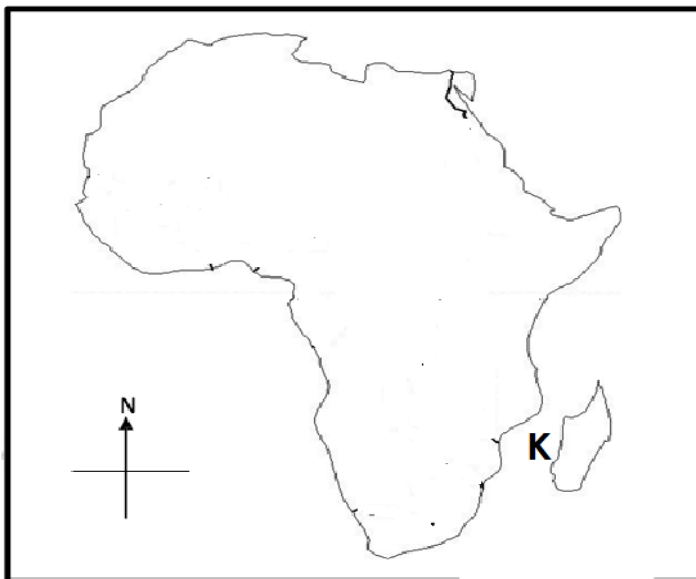
ii)

b) Mention two ocean currents that bring dry conditions to Africa.

i)

ii)

44. Study the sketch map of Africa and use it to answer the questions that follow.



a) Name the water way marked K.

.....

b) Use letter P to show the location of Sao Tome and Principe.

c) How is the continent above unique from other world continents?

i)

ii)

45.a) Apart from tourism, mention any other two invisible exports of uganda.

i)

ii)

b) Name two dangers caused by tourism.

i)

ii)

46.a) Name the body under EAC that set and marked examinations in East Africa before the collapse of EAC.

.....

b) Mention two services that remained functioning after the collapse of EAC.

i)

ii)

c) State one duty of EALA in East African community.

.....

47.a) Patrick is the citizen of Uganda but in the last general elections of 2021 in Uganda, he didn't vote, give two reasons that may have led to that.

i)

ii)



b) Mention two conditions that may lead to a by-election in a constituency.

i)

ii)

48. Study the type of farming Umar carries out and answer the questions that follow.

Goats	Sheep	Maize	Wheat
-------	-------	-------	-------

a) What type of farming is shown above?

.....

b) Give two advantages of the above type of farming.

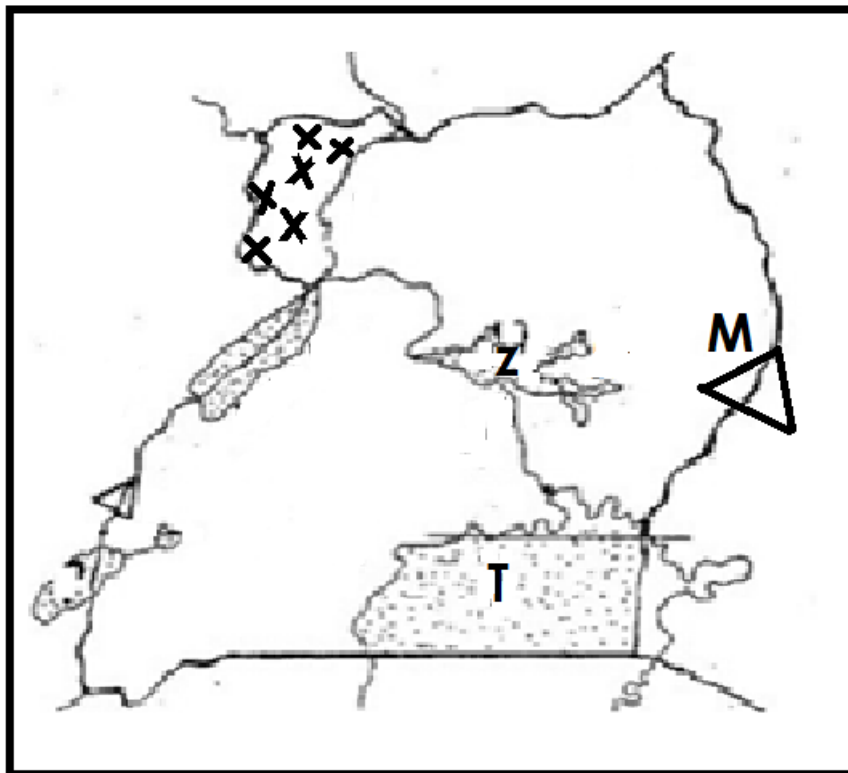
i)

ii)

c) How can Umar improve the soil fertility using his type of farming?

.....

49. Study the sketch map of Uganda below and answer the questions about it.



a) How are the people living on mountain marked M similar to the Chagga in terms of ethnicity?

.....

b) Name the product got from the crops grown in areas marked;

i) xxx

ii) T

c) Mention one inland port on the lake marked Z.

.....

50. a) Mention the economic importance of the following features represented by map symbols below.



.....



.....

b) State the problem a map reader will face while reading the map without the following elements

i) Scale

ii) Key

FOR QUESTIONS 51 TO 55, ANSWER EITHER CHRISTIANITY OR ISLAM BUT NOT BOTH ON A NUMBER

51. Either: a) Who is a reverend?

.....

b) Mention two roles of a reverend.

i)

ii)

c) Mention the title given to the head of catholic church in the world.

.....

Or: a) Who is an imam?

.....

b) Mention two roles of an imam.

i)

ii)

c) Mention the title given to the head of moslems in the country.

.....

52. Either: a) Why do Christians celebrate these festivals;

i) Ascension day

ii) Assumption day.....

b) In which month do Christians celebrate Christmas?

.....

c) In which african country is jesus said to have lived?

.....

Or: a) Why do moslems celebrate these festivals;

i) idd- el - Fitr

ii) idd – el - Aduha.....

b) In which month do moslems perform Hijja?

.....

c) At what age did prophet Mohammed become a prophet?

.....

53. FOR BOTH

a) What is hell?

.....

b) Mention three groups of people who will go to hell.

i)

ii)

iii)

54. Either: a) What is a prayer?

.....

b) Name the prayer Jesus taught his apostles.

.....

c) Mention two requests made in the prayer mentioned in 'b' above.

i)

ii)

Or: a) What are taraweh prayers?

.....

b) When are the taraweh prayers performed?

.....

c) Give two lessons learnt from the hadith regarding taraweh prayers.

i)

ii)

55. Either: a) What is intersession?

.....

b) Name three groups of people who are interceded for.

i)

ii)

iii)

Or: a) What does the word 'khutubah' mean?

.....

b) Name the mountain where prophet Mohammed stood and gave the last sermon.

.....

c) Mention any two importance of prophet Mohammed's khutubah to the moslems.

i)

ii)