

KABOJJA JUNIOR SCHOOL
P. 7 Mot I Examination, 2025
Social Studies and Religious Education
Time allowed: 2 hours and 15 minutes

INDEX NUMBER

--	--	--	--	--	--	--	--	--

NAME: _____

Signature: _____

District _____

Date _____

EXAMINER'S USE ONLY

A	
B	
TOTAL	

Read the following instructions carefully:

- 1. The paper is made up of section A and B.**
- 2. Section A has 40 short answer questions (40 marks).**
- 3. Section B has 15 questions (60 answers).**
- 4. Answer ALL questions. All answers to both section A and B must be written in the spaces provided.**
- 5. All answers must be written in blue ink.**
- 6. Any handwriting that cannot easily be read will lead to loss of marks.**
- 7. Unnecessary alteration of work may lead to loss of marks.**
- 8. Show all the necessary side work in pencil.**

<u>PARENT'S COMMENT</u>	<u>SIGNATURE</u>

Section A.

1. Name the water body that borders Africa in the North- east.

2. Name the climatic region that covers that largest part of Uganda.

3. Give one reason why Akasombo Dam is called a multi-purpose river project.

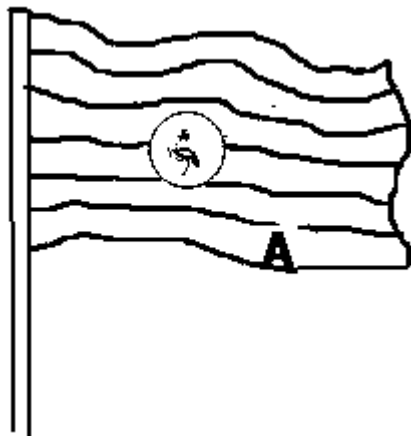
4. Mention one way in which the security guards are important in the school community.

5. Give any one advantage people enjoy from keeping money in banks.

6. Write down one way the Karimajong of Uganda are similar to the Turkana of Kenya in terms of occupation.

7. How are uniforms important to school going children?

Use the diagram below to answer questions 8 and 9.



8. What does the colour marked with letter A represent?

9. Give one event that can cause the flag drawn above to be raised at half-mast.

10. Why is Mombasa warmer than Nairobi?

11. Write down one way Muwalimu Julius Nyerere contributed to the development of Tanzania.

12. Mention any one way the government can take care of hospitals.

13. Name the source of materials used for making the item shown in the diagram below.



14. Give one country that is located in the horn of Africa.

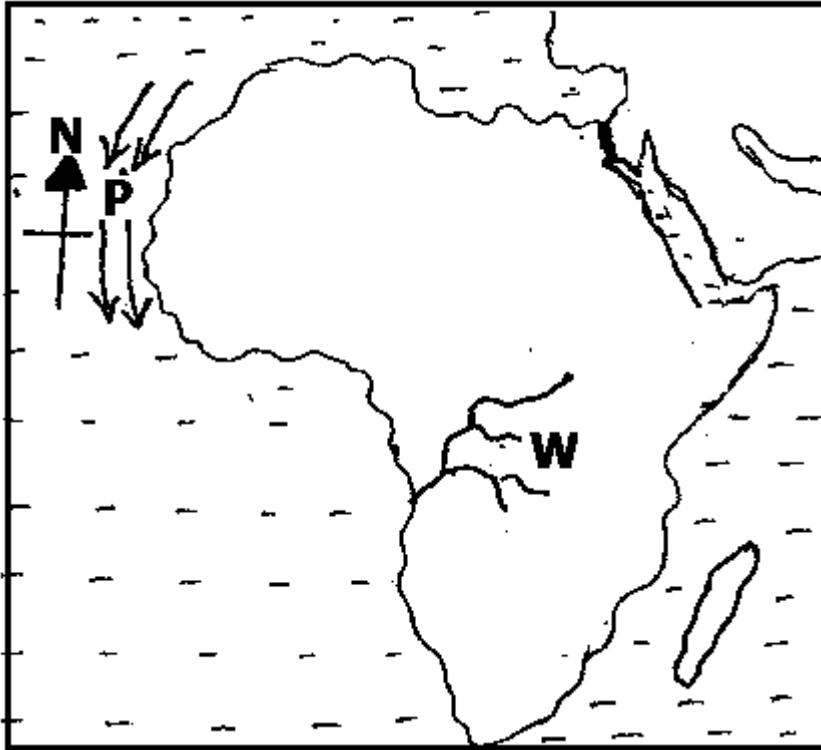
15. Write down one way in which culture is important in a community.

16. Why is Africa referred to as the cradle of man?

17. Give one role played by traditional leaders during establishment of colonial rule in East Africa.

18. How are mid-wives important to mothers in a community?
-
19. State one way Uganda benefits from her neighboring countries.
-
-

Use the map below to answer questions 20 & 21



20. Name the ocean currents shown with letter P on the map.
-
21. What name is given to the river marked with letter W?
-
22. State one way vegetation influences population distribution.
-
-
23. Write down any one challenge of using modern means of communication in East Africa
-
-

24. Give one factor that favours the growing of Arabica coffee on the slopes of mountain Elgon.
-
25. State one cause of child abuse in most African communities.
-
26. Name any one basic need of a family.
-
27. How can an increasing population be dangerous to the environment?
-
-
28. State any one factor that makes Africa different from other continents.
-
-
29. Mention one way in which the school can live at peace with its neighbourhood.
-
-
30. Give one importance a rain gauge at the weather Station.
-
31. Name one person who signed the 1900 Buganda Agreement on behalf of the Kabaka.
-
32. How were the Monsoon winds helpful to the early travellers to East Africa?
-
-
33. State one way countries benefit from being members of the East African Community.
-
-

34. Give one disadvantage of the introduction of foreign laws in Uganda by the British.

35. Why does R. Congo carry the largest volume of water to the Atlantic Ocean?

For questions 36 – 40, answer Christianity or Islam “BUT NOT” both.

36. **Either:** State any one way in which children can use their talents to serve God.

Or: State any one way in which Muslim can use their talents to serve Allah.

37. **Either:** State any one way in which Jesus met people’s needs during His life time.

Or: State any one way in which prophet Muhammad met people’s needs during his life time.

38. **Either:** What is Lent according to Christianity?

Or: What is Saum in Islam faith?

39. **Either:** How did God create man differently from other animals?

Or: How did Allah create man differently from other animals?

40. **Either:** What is meant by the term "reconciliation"?

Or: What is meant by the term "Hejira"?

SECTION B: (60 marks)

41(a) Mention any two groups of people who keep peace and security in a community.

(i) _____

(ii) _____

(b) How does peace and security bring development of an area?

(c) State one way in which peace and security can be promoted in a community.

42(a) Name the two fold mountains found in Africa.

(i) _____

(ii) _____

(b) State any two ways in which mountains can contribute to the economic development of Uganda.

(i) _____

(ii) _____

43(a) State any two causes of the MAU MAU uprising in Kenya.

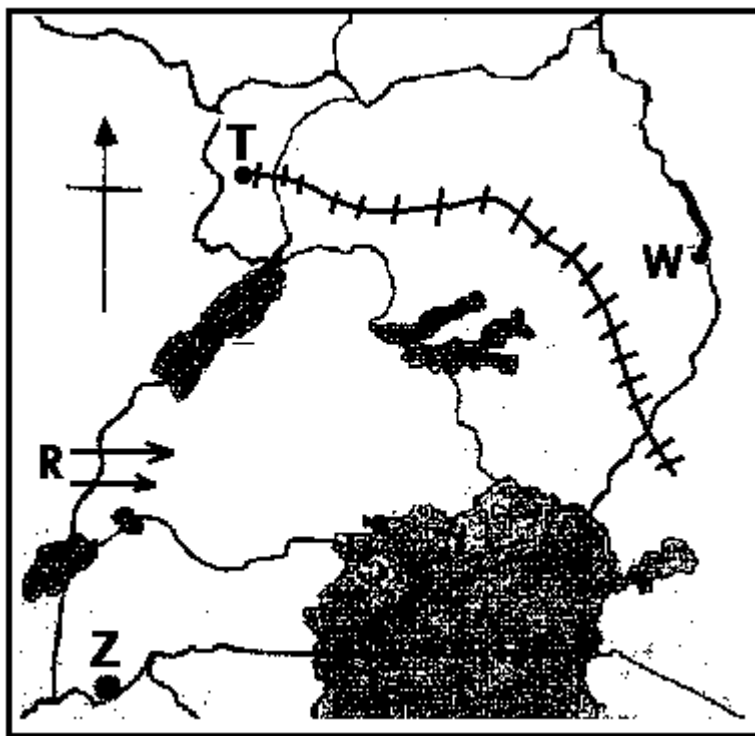
(i) _____

(ii) _____

(b) Why did it take long for the British colonialists to stop the MAU-MAU rebellion?

(c) Give any one advantage of the MAU MAU rebellion to the native of Kenya.

44. **Use the map below to answer questions in number 44.**



(a) Give one reason why the railway line shown above was extended to town marked with letter T

(b) Use letter M to show lake George on the map.

(c) What is the direction of point Z from point W?

(d) Name the ethnic group that used arrows shown by letter R.

45(a) Write down any two ways children benefit from living in an extended family.

(i) _____

(ii) _____

(b) Mention two challenges faced by people living in big families.

(i) _____

(ii) _____

46(a) Mention three factors that are responsible for different vegetation zones in Africa.

(i) _____

(ii) _____

(iii) _____

(b) State one way in which forests reduces the effect of global warming in an area.

47(a) Name the body that is responsible for conducting elections in Uganda.

(b) State any two problems faced by the body you have named in (a) above

(i) _____

(ii) _____

(c) Give one role of citizens in promoting democracy in a country.

48(a) Mention any two tribes that belong to the plain Nilotes in Uganda.

(i) _____

(ii) _____

(b) State ttwo factors that made the Iteso change to mixed farming.

(i) _____

(ii) _____

49(a) Give any two types of leaders in a district.

(i) _____

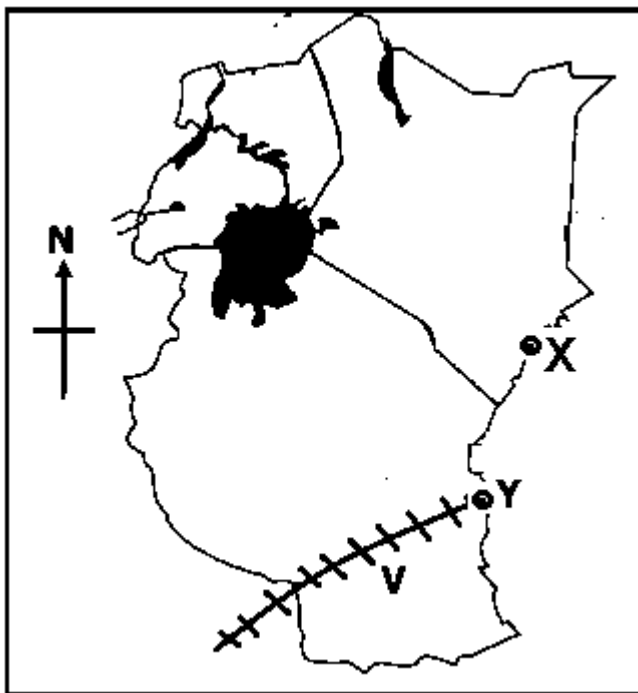
(ii) _____

(b) State any two roles of leaders in a district.

(i) _____

(ii) _____

Study the sketch map of East Africa below and use it to answer question 50.



50(a) Name the sea ports marked with letters:

(i) Y _____

(ii) X _____

(b) State one way East African countries benefit from the sea ports named above.

(c) A part from Tanzania, name any other country that benefits from railway line V.

For questions 51 – 55, answer either Christianity or Islamic but Not both on the given number.

51. **Either:** (a). Write down any two values Jesus Christ taught His followers.

(i) _____

(ii) _____

(b) State one reason why God sent His son Jesus on earth.

(c) Name the foster father of Jesus Christ.

Or: (a) Write down any two Islamic values Muslims learn from prophet Muhammad.

(i) _____

(ii) _____

(b) State any two reasons why Allah sent His messengers.

(i) _____

(ii) _____

52. **Either:** (a) Name the sacrament that makes one to be a member of God's family.

(b) State one importance of observing the sacraments.

(c) Mention any two activities Jesus engaged in during His childhood.

(i) _____

(ii) _____

Or (a) Name the greatest pillar of Islam.

(b) State one importance of observing the pillars of Islam.

(c) Mention any two activities prophet Muhammad engaged in during his life time.

(i) _____

(ii) _____

53. **Either:** (a) Name the holy book for Christians.

(b) Give any two ways in which Christians benefit from the holy book mentioned in (a) above

(i) _____

(ii) _____

(c) How is the Holy book above related to the national constitution?

Or: (a) Name the holy book that was revealed to prophet Muhammad.

(b) Give any two benefits of the divine book you have mentioned in (a) above

(i) _____

(ii) _____

(c) How is the divine book named above related to the national constitution?

54. **Either:** (a) Mention any one Christian voluntary organization.

(b) Give any three ways in which Christians benefit from voluntary organizations.

(i) _____

(ii) _____

(iii) _____

Or: (a) Mention any one Islamic voluntary organization in Uganda.

(b) Give any three ways in which Muslims benefit from voluntary organizations.

(i) _____

(ii) _____

(iii) _____

55. **Either: Match list A to B correctly.**

A

B

Judas Iscariot

Carried the cross for Jesus

Simon Peter

betrayed Jesus Christ.

Joseph of Arimathea

became the leader of the church.

Simon of Cyrene

buried the body of Jesus

(i) Judas Iscariot_____

(ii) Simon Peter_____

(iii) Joseph of Arimathea_____

(iv) Simon of Cyrene_____

Or: Match list A to B correctly.

A

B

Lady Aisha

Mother of prophet Muhammad

Abdullah

The first successor of prophet

Muhammad

Abubakar

Father of prophet Muhammad

Amina

youngest wife of prophet Muhammad

(i) Lady Aisha_____

(ii) Abdullah_____

(iii) Abubakar_____

(iv) Amina_____