

# NEXUS EDUCATION SERVICES

## PRE-MOCK EXAMINATION SET II 2025

### PRIMARY SEVEN

### SOCIAL STUDIES AND RELIGIOUS EDUCATION

*Time Allowed: 2 hour: 15 Minutes*

Index No.

EMIS No						Personal No		

Candidate's Name: \_\_\_\_\_

Candidate's Signature: \_\_\_\_\_

Read the following instructions carefully:

1. The paper has **two** sections: **A** and **B**
2. Section **A** has 40 questions (40 marks)
3. Section **B** has 15 questions (60 marks)
4. Answer **ALL** questions. All answers to both sections **A** and **B** must be written in the spaces provided.
5. All answers must be written using a blue or black ball point pen or ink. Diagrams should be drawn in pencil.
6. Unnecessary crossing of work may lead to loss of marks.
7. Any handwriting that cannot be easily read may lead to loss of marks.
8. Do **not** fill anything in the boxes indicated;

**For Examiner's use only.**

#### FOR EXAMINER'S USE ONLY

Qn. No	MARK	SIGN
1 – 10		
11 – 20		
21 – 30		
31 – 40		
41 – 43		
44 – 46		
47 – 49		
50 – 52		
53 – 55		
TOTAL		

*Please Turn Over*

**SECTION A: 40 MARKS**

1. Give the meaning of the term community.

---

2. Name the place where people are kept under custody for reformation.

---

3. How can farming be made possible in kotido district?

---

4. In which one way did the Triangular trade affect the people of West Africa?

---

5. Why are radios widely used than televisions in Uganda?

---

6. Mention the traditional cash crop that grows well in Kalangala and Buvuma Islands.

---

7. Under what type of weather will a traveller sit under a tree for protection?

---

8. What type of nation is Uganda?

---

9. Mention any one factor that makes Kenya highlands suitable for dairy farming.

---



10. State the main reason why people in rural areas prefer using the item above to a refrigerator.

---

11. Name the type of transport used by the Arab traders to East Africa.

---

12. Which organ of the African Union (AU) is responsible for resolving conflicts among member states?

---


13. How are the Basoga of Uganda similar to the Ngoni of Tanzania in terms of ethnicity?

---

14. Mention any one animal found on Uganda's currency that promotes tourism in the country.

---

15. In the space below, draw the contours.



16. Why do areas near the Equator have higher temperatures in March and September?

---

17. State the importance of a roundabout to the drivers.

---

18. What role do citizens play in maintaining peace and security in their area?

---

19. Identify the factor that makes Lake Kyoga swampy?

---

20. In which way does a class timetable promote order in the class?

---

21. Apart from mediating peace, how else do religious leaders promote peace in a country?

---

22. Mention any one factor that made MAU MAU rebellion to last for long in Kenya.

---

23. Why is Hydro-electricity regarded as an invisible export in Uganda?

---

24. State any one negative result of insecurity in an area.

---

25. Write URA in full.

---

26. Name any one reason why the sun rises earlier in the East than in the West.

---

27. Give a reason why Liberia survived colonial rule.

---

28. State any one social value of playing football in schools.

---

29. Write down any one factor affecting lumbering in the Tropics.

---

30. Name the last Bantu group to enter East Africa.

---

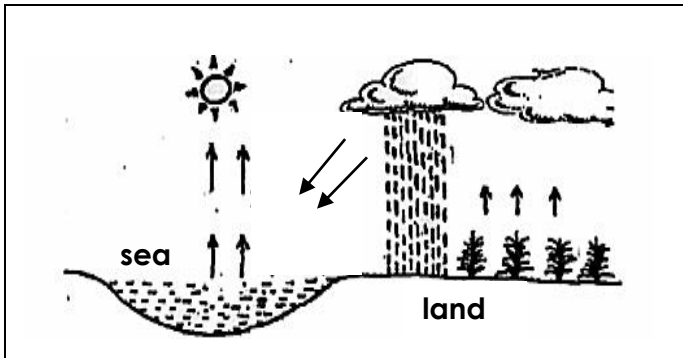
31. Why are mangrove forests called the mangrove swamps?

---

32. What term is used to describe the growth of towns and cities in a place?

---

33. What type of breeze is shown below?



34. Name the irrigation scheme located in Kasese district.

35. State any one challenge that made IBEACO to collapse.

**For questions 36 - 40, answer Either Christianity Or Islamic questions but not both.**  
**No mark will be awarded to a candidate who attempts both alternatives in a number.**

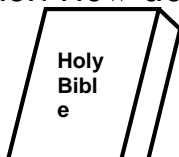
36. **Either:** Name the faithful servant of God who built an Ark?

**Or:** Name the prophet who was instructed to build the Ark by Allah?

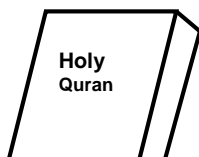
37. **Either:** Give any one example of physical uniqueness among humans.

**Or:** Write down any one example of physical uniqueness among humans.

38. **Either:** How does the symbol below strengthen believers' faith in Christianity?



**Or:** How does the symbol below strengthen believers' faith in Islam?



39. Either: State any one reason why Christian believers should have respect for animals.

\_\_\_\_\_

Or: State any one reason why Muslims should have respect for animals.

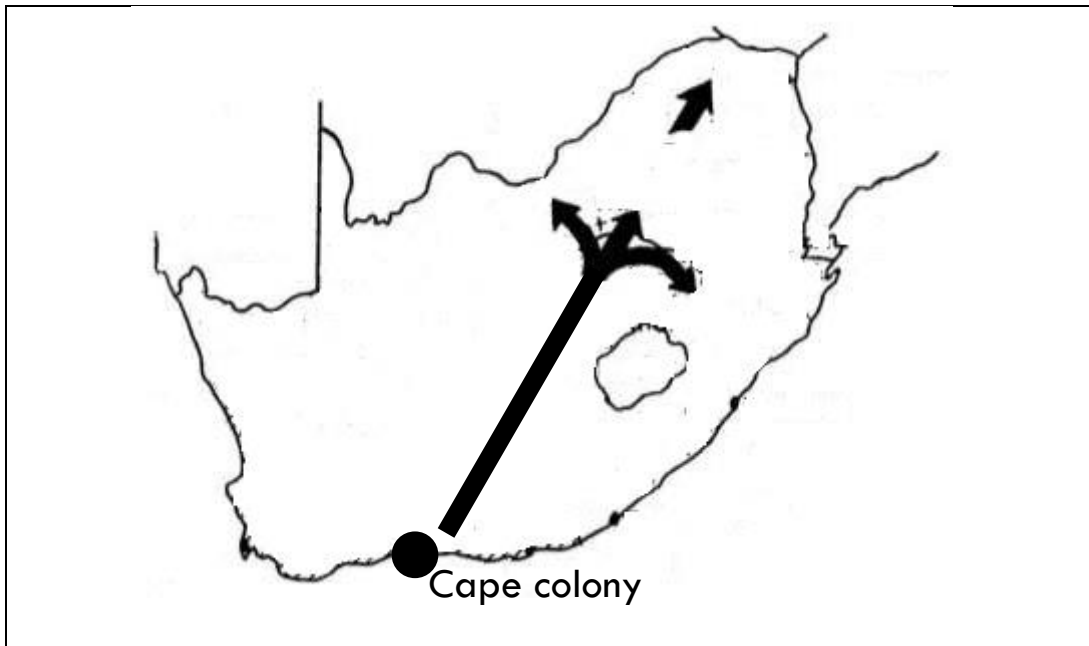
\_\_\_\_\_

40. **For Both:** Write down any one punishment for sinners on the Day of Judgment.

\_\_\_\_\_

**SECTION B: 60 MARKS**

41. **Study the sketch map of South Africa below and answer the questions that follow.**



a) Name the group of European settlers who made the journey shown by arrow

\_\_\_\_\_

b) Mention any two states that were formed as a result of the above journey.

i) \_\_\_\_\_

ii) \_\_\_\_\_

c) How did the above movement of the settlers affect the natives of South Africa?

\_\_\_\_\_

42. a) Give one reason why Nyanza province was transferred from Uganda to Kenya during the evolution of Uganda's boundaries.

\_\_\_\_\_

b) State any two ways the evolution of Uganda's boundaries affected the people of East Africa.

i) \_\_\_\_\_

ii) \_\_\_\_\_

c) Name any one physical feature that was used during the fixing of Uganda's boundaries.

\_\_\_\_\_

43. a) Why is farming regarded as a primary industry?

\_\_\_\_\_

b) How does rural urban migration affect agricultural sector in Uganda?

\_\_\_\_\_

c) Apart from Transport industry, name any one other service industry in East Africa.

\_\_\_\_\_

d) In which one way do people benefit from industries around them?

\_\_\_\_\_

44. a) Mention any two ways leaders are got in our community.

i) \_\_\_\_\_

ii) \_\_\_\_\_

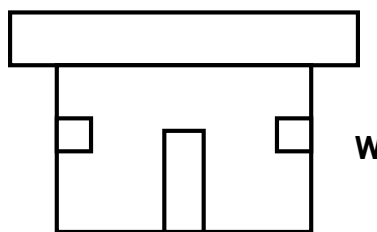
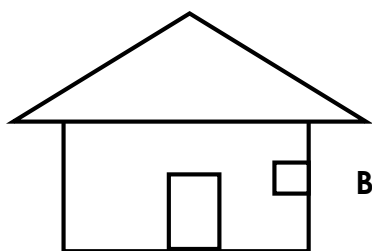
b) How do leaders promote social values among the people they lead?

\_\_\_\_\_

c) Give any one example of leaders who acquire leadership through ordination.

\_\_\_\_\_

45. **Study the diagram and answer questions about them.**



a) Name the climatic region where the following types of houses are built;

i) B \_\_\_\_\_ ii) W \_\_\_\_\_

b) State any one reason why people who live in climatic zone marked W build houses with flat roofs.

c) Why do areas in the climatic zone W have cold nights?

46. Match the national game parks to their major tourist attraction.

**List A**

- a. Serengete national park
- b. Murchison fall national park
- c. Isavo national park
- d. Kidepo valley national park

**List B**

- lions
- ostriches
- wild beasts
- crocodiles

- a. Serengete national park \_\_\_\_\_
- b. Murchison fall national park \_\_\_\_\_
- c. Isavo national park \_\_\_\_\_
- d. Kidepo valley national park \_\_\_\_\_

47. a) Write down any two roles of NIRA in Uganda.

- i) \_\_\_\_\_
- ii) \_\_\_\_\_

b) How is the information collected by NIRA about citizens important to the government?

\_\_\_\_\_



c) Mention any one way Matiya who was born in Kasarani, Malawi can become a citizen of Uganda.

\_\_\_\_\_

48. a) Give any two reasons why there is high population growth in Uganda today?

i) \_\_\_\_\_

ii) \_\_\_\_\_

b) Write down any two reasons why population census is carried out ten years in Uganda.

i) \_\_\_\_\_

ii) \_\_\_\_\_

49. a) What is an economic block?

\_\_\_\_\_

\_\_\_\_\_

b) State any two ways EAC has promoted trade among its member states.

i) \_\_\_\_\_

ii) \_\_\_\_\_

c) How has lack of a common currency affected the activities of EAC among member states?

\_\_\_\_\_

50. a) Which water body borders Africa to the West?

\_\_\_\_\_

b) How is the Suez canal important to the government of Egypt?

\_\_\_\_\_

c) Mention any two African island countries that are found in the Atlantic Ocean.

i) \_\_\_\_\_

ii) \_\_\_\_\_

**For questions 51 - 55, answer Either Christianity Or Islamic questions but not both.**

**No mark will be awarded to a candidate who attempts both alternatives in a number.**

**51. EITHER:**

a) What is work?

\_\_\_\_\_

b) In which two ways does work bring joy among believers?

i) \_\_\_\_\_

ii) \_\_\_\_\_

c) Identify any one challenge faced by people at their places of work.

\_\_\_\_\_

**OR:** a) What is work?

\_\_\_\_\_

b) In which two ways does work bring joy among believers?

i) \_\_\_\_\_

ii) \_\_\_\_\_

c) Identify any one challenge faced by people at their places of work.

\_\_\_\_\_

**52. EITHER:**

a) Give any two reasons why Christians marry?

i) \_\_\_\_\_

ii) \_\_\_\_\_

b) Mention any one teaching in the Bible about marriage.

\_\_\_\_\_

c) Give a reason why believers fear marriage today.

\_\_\_\_\_

**OR:** a) Give any two reasons why Muslims marry?

i) \_\_\_\_\_

ii) \_\_\_\_\_

b) Mention any one way marriage can bring happiness in Islam.

c) How was Khadijah helpful to Prophet Muhammad during his ministry?

53. **EITHER:** Match the following prophets to the messages they preached.

**Prophets**

**Messages preached**

a. Jeremiah

Forgiveness and hope

b. Joel

Repentance to the people of Nineveh

c. Jonah

Repentance to the people of Judea

d. Hosea

Hope for the future and new covenant

a. Jeremiah

\_\_\_\_\_

b. Joel

\_\_\_\_\_

c. Jonah

\_\_\_\_\_

d. Hosea

\_\_\_\_\_

**OR:** Match the following prophets to the books they received from Allah.

**Prophets**

**Books received**

a. Prophet Dauda

Quran

b. Prophet Isa

Taureh

c. Prophet Muhammad

Injil

d. Prophet Musa

Zabur

a. Prophet Dauda

\_\_\_\_\_

b. Prophet Isa

\_\_\_\_\_

c. Prophet Muhammad

\_\_\_\_\_

d. Prophet Musa

\_\_\_\_\_

54. **EITHER:**

a) Give any two forms of suffering children go through in schools.

i) \_\_\_\_\_

ii) \_\_\_\_\_

b) Mention any two reasons why the government of Uganda discourages corporal punishments in school.

i) \_\_\_\_\_

ii) \_\_\_\_\_

**OR:**

a) Give any two forms of suffering children go through in schools.

i) \_\_\_\_\_

ii) \_\_\_\_\_

b) Mention any two reasons why the government of Uganda discourages corporal punishments in school.

i) \_\_\_\_\_

ii) \_\_\_\_\_

55. **FOR BOTH:**

a) What is a service?

\_\_\_\_\_  
\_\_\_\_\_

b) Mention any one service offered by Religious leaders in our community;

\_\_\_\_\_

c) Apart from religious leaders, mention any other two groups of people who give services in our community.

i) \_\_\_\_\_

ii) \_\_\_\_\_