

# ARALL EXAMINATION BOARD[AEB]

## P.7 SPECIAL SET 5 OF 10 2025 SOCIAL STUDIES AND RELIGIOUS EDUCATION

***Time allowed: 2 hours 15 minutes***

***NAME:.....***

***.....***

**Read the following instructions carefully:**

1. The paper has **two** sections: **A** and **B**
2. Section **A** has 40 questions (40 marks)
3. Section **B** has 15 questions (60 marks)
4. Answer **ALL** questions. All answers to both Sections A and B must be written in the spaces provided.
5. All answers must be written using a blue or black ball point pen or ink. Diagrams should be drawn in pencil.
6. Unnecessary crossing of work may lead to loss of marks.
7. Any handwriting that cannot be easily read may lead to loss of marks.
8. Do **not** fill anything in the boxes indicated;  
For Examiner's use only.

**FOR EXAMINER'S USE ONLY**

|  |
|--|
|  |
|  |

**FOR EXAMINER'S USE ONLY**

| Qn. No  | MARK | SIGN |
|---------|------|------|
| 1 – 10  |      |      |
| 11 – 20 |      |      |
| 21 – 30 |      |      |
| 31 – 40 |      |      |
| 41 – 43 |      |      |
| 44 – 46 |      |      |
| 47 – 49 |      |      |
| 50 – 52 |      |      |
| 53 – 55 |      |      |
| TOTAL   |      |      |

## SECTION A

1. What is the compass direction of Rwanda from Uganda?  
\_\_\_\_\_
2. Who is the current Secretary General of the East African Community?  
\_\_\_\_\_
3. When is the Uganda National Flag flown at half-mast?  
\_\_\_\_\_
4. Give one importance of rivers in Uganda.  
\_\_\_\_\_
5. What is a confluence?  
\_\_\_\_\_
6. Why is the Late Grace Ibingira still remembered in Uganda?  
\_\_\_\_\_
7. How were the people of long ago able to tell time before the discovery of watches?  
\_\_\_\_\_
8. Mention one form of citizenship in Uganda.  
\_\_\_\_\_
9. What is population density?  
\_\_\_\_\_
10. Mention one form of child abuse.  
\_\_\_\_\_
11. How important is an anemometer in a weather station?  
\_\_\_\_\_
12. Name the society that sent most European Explorers to Uganda.  
\_\_\_\_\_
13. What is the economic importance of Queen Elizabeth National Park?  
\_\_\_\_\_
14. How were the Abarusura important to Omukama Kabalega?  
\_\_\_\_\_
15. Apart from running water, name one other source of electricity.  
\_\_\_\_\_
16. What is the use of a Post Office in a country?  
\_\_\_\_\_
17. State one reason why some farmers don't get good yields of their crops.  
\_\_\_\_\_
18. How important was the Legislative Council to the colonial government?  
\_\_\_\_\_
19. State one way democracy is practiced in Uganda.  
\_\_\_\_\_

20. What is the difference between a national budget and a budget?

---

---

21. How many countries are members of the East African Community?

---

22. What do olive branches represent on the East African Community flag?

---

23. Mention the organization which collects taxes for the government of Uganda.

---

24. In which city are the headquarters of the East African Community found?

---

25. Why did the Bantu migrate to Uganda?

---

26. What is rural-urban migration?

---

27. Which is the smallest country in East Africa?

---

28. Why is the Equator marked  $0^{\circ}$ ?

---

29. Why is Dr. Louis Leakey remembered in East Africa?

---

30. How useful was fire to early man?

---

31. How is a bank important in a community?

---

32. What is a community?

---

33. Why should school children learn about road safety rules?

---

34. Name the crop used in the making of insecticides.

---

35. How has TASO assisted the HIV/AIDS patients in Uganda?

---

36. In which way were dhows useful to early Arab traders who came to East Africa?

---

**In each of the questions 37 to 40, answer EITHER a Christian OR an Islamic question but not both. No marks will be awarded to anyone who attempts both alternatives in a number.**

37. **Either:** In which way is lent useful to Christians?

**Or:** How is Saum different from Ramadhan?

38. **Either:** Which prophet fed on locusts and honey?

**Or:** Why is prophet Ayub remembered in Islam?

39. **Either:** Give one parable in the Bible that teaches about repentance.

**Or:** What do you understand by the term hadith?

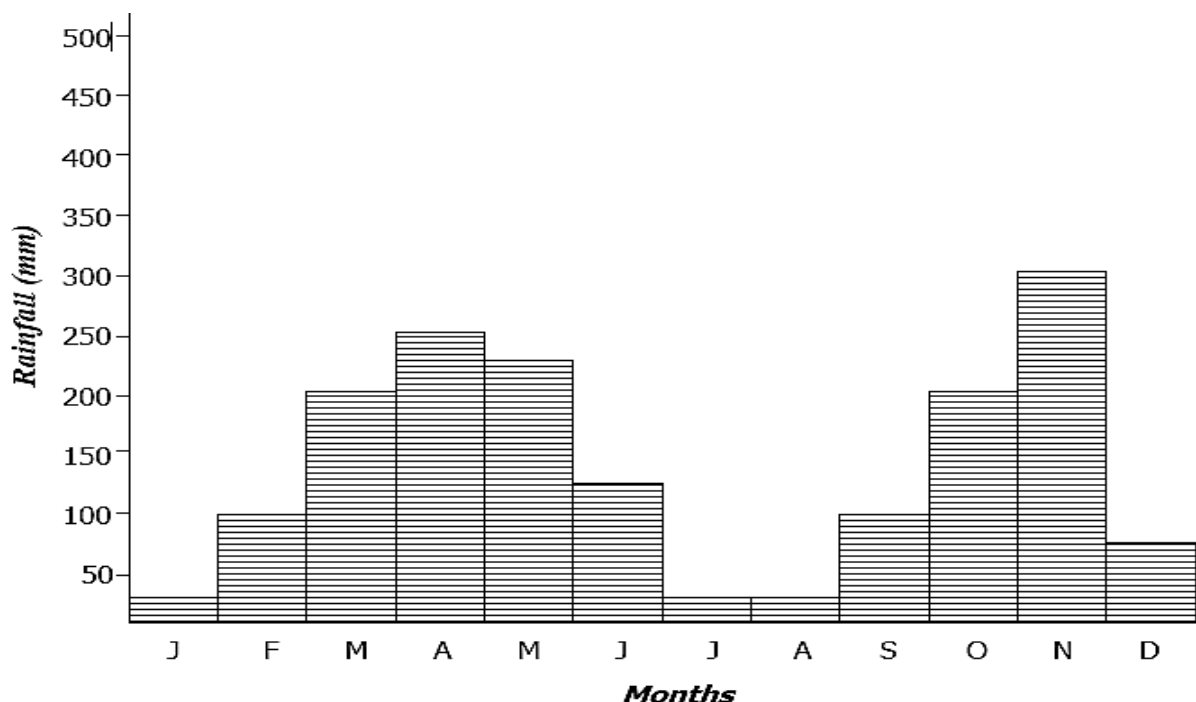
40. **Either:** Why is Angel Gabriel important in Christianity?

**Or:** Name the Angel who revealed the holy Qur'an to Prophet Muhammed.

### SECTION B

*(Questions in this section carry 4 marks each)*

41. Study the climatic graph below and answer the questions that follow.



a) Which was the wettest month?

b) Write the total amount of rainfall received in July and August.

c) How many wet seasons are experienced in the year?

d) What was the amount of rainfall received in January?

42. a) Write down any two reasons why the East African Community was formed.

(i) \_\_\_\_\_

(ii) \_\_\_\_\_

b) Mention any two agencies of the East African Community.

(i) \_\_\_\_\_

(ii) \_\_\_\_\_

43. a) Why did the Arabs come to East Africa?

b) Give two reasons why Arabs took long to come to the interior of East Africa.

(i) \_\_\_\_\_

(ii) \_\_\_\_\_

c) How did the Swahili culture come into existence?

44. a) Why was early man known as the Stone Age man?

b) How did the Stone Age man get food?

c) Draw and name any two tools that were used by early man.

|  |  |
|--|--|
|  |  |
|  |  |

45. a) What is a natural resource?

b) In which two ways can natural resources be conserved?

(i) \_\_\_\_\_

(ii) \_\_\_\_\_

c) How is over population dangerous to natural resources?

46. a) Give two disadvantages of a large family size.

(i) \_\_\_\_\_

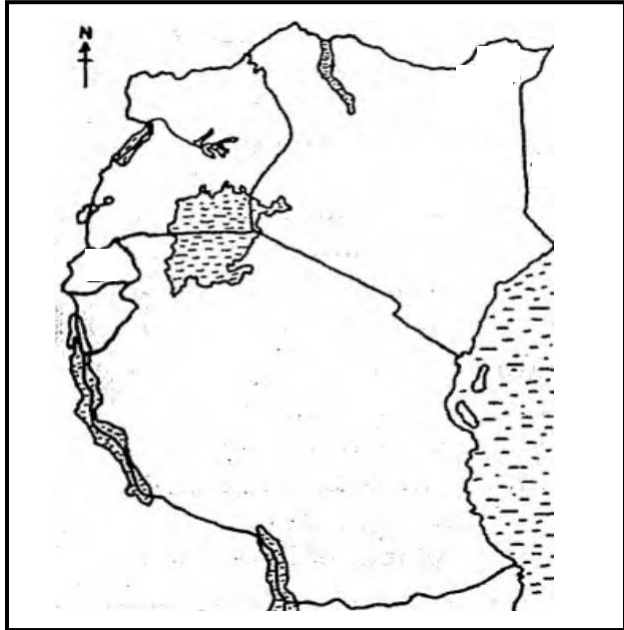
(ii) \_\_\_\_\_

b) In which two ways can the government control population growth in Uganda?

(i) \_\_\_\_\_

(ii) \_\_\_\_\_


**47. Study the map of East Africa and use it to answer questions that follow.**



a) Draw the latitude marked  $0^{\circ}$ .

b) How is Uganda similar to country **P** in terms of location?

\_\_\_\_\_  
\_\_\_\_\_

c) Why is area shaded  densely populated?

\_\_\_\_\_  
\_\_\_\_\_

d) Use letter **X** to show the position of Mt. Kilimanjaro on the map.

**48. (a) Give two **disadvantages** of air transport over road transport.**

(i) \_\_\_\_\_

(ii) \_\_\_\_\_

b) Give two **advantages** of road transport over air transport.

(i) \_\_\_\_\_

(ii) \_\_\_\_\_

**49. a) What is an ethnic group?**

\_\_\_\_\_

b) Mention any two causes of early migration.

(i) \_\_\_\_\_

(ii) \_\_\_\_\_

c) Give one result of early ethnic migrations in East Africa.

\_\_\_\_\_

**50. Match list A to list B correctly.**

| List A                        | List B                 |
|-------------------------------|------------------------|
| Chairman Electoral Commission | Hon. Rebbeca Kadaga    |
| Speaker EALA                  | Hon. Amama Mbabazi     |
| Prime Minister                | Gen. Aronda Nyakairima |
| Internal Affairs minister     | Eng. Badru Kiggundu    |
|                               | Hon. Ruhakana Rugunda  |

- a) Chairman Electoral Commission \_\_\_\_\_
- b) Speaker EALA \_\_\_\_\_
- c) Prime Minister \_\_\_\_\_
- d) Internal Affairs minister \_\_\_\_\_

**For each of the questions 51 – 55, answer EITHER Christian OR Islamic questions but not both. No marks will be awarded to any one who attempts both alternatives.**

**51. Either:**

- a) Give two symbols of a Christian family.
  - (i) \_\_\_\_\_
  - (ii) \_\_\_\_\_
- b) State two ways Jesus showed love to the needy.
  - (i) \_\_\_\_\_
  - (ii) \_\_\_\_\_

**Or:**

- a) Give two reasons why zakat is given.
  - (i) \_\_\_\_\_
  - (ii) \_\_\_\_\_
- b) Write down two groups of people that should receive zakat.
  - (i) \_\_\_\_\_
  - ii) \_\_\_\_\_

**52. Either:**

- a) Give any two reasons why Christians pray.
  - (i) \_\_\_\_\_
  - (ii) \_\_\_\_\_
- b) Who taught the disciples how to pray?  
\_\_\_\_\_
- c) What is the meaning of '**Amen**'  
\_\_\_\_\_

**Or:**

- a) Give any two reasons why Moslems pray.
  - (i) \_\_\_\_\_
  - (ii) \_\_\_\_\_
- b) Mention any two conditions a Muslim should fulfill before performing salat.
  - (i) \_\_\_\_\_
  - (ii) \_\_\_\_\_

**53. Either:**

- a) What do the following represent during Holy Communion?
  - (i) Bread \_\_\_\_\_
  - (ii) Wine \_\_\_\_\_

b) Give any two strange things that happened immediately after the crucifixion of Jesus.

(i) \_\_\_\_\_

(ii) \_\_\_\_\_

**Or:**

a) Give any two items used in ablution.

(i) \_\_\_\_\_ ii) \_\_\_\_\_

**b) Which title is given to the following people after visiting Mecca?**

(i) a man \_\_\_\_\_

(ii) a woman \_\_\_\_\_

**54. Either:**

a) What will be the reward to the faithful Christians?

\_\_\_\_\_

b) Name the three persons that form the Holy Trinity.

(i) \_\_\_\_\_ (iii) \_\_\_\_\_

(ii) \_\_\_\_\_

**Or:**

a) Write U.M.S.C in full.

\_\_\_\_\_

b) What title is given to the head of Muslims in Uganda?

\_\_\_\_\_

c) What role do the following people play in Islam?

(i) Muazzin \_\_\_\_\_

(ii) Imam \_\_\_\_\_

**55. Either: Why are the following people known in the Bible?**

(i) Simon of Cyrene \_\_\_\_\_

(ii) Judas Iscariot \_\_\_\_\_

b) What does the name "**Peter**" mean according to the Bible?

\_\_\_\_\_

c) How many times did Simon Peter deny Jesus Christ?

\_\_\_\_\_

**Or: Why are the following people still remembered in Islam?**

(i) Abubaker \_\_\_\_\_

(ii) Khadijah \_\_\_\_\_

b) State any two challenges that Prophet Muhammad faced as he spread Islam.

(i) \_\_\_\_\_

(ii) \_\_\_\_\_

**Good luck**