

SEMBABULE DISTRICT EXAMINATIONS BOARD
P.7 MOCK EXAMINATION 2025
SOCIAL STUDIES WITH RELIGIOUS EDUCATION

Time Allowed: 2 hours: 15 minutes

Candidate's Index No.

--	--	--	--	--	--	--	--	--	--

Candidate's Name:

Candidate's Signature:

School:

DO NOT OPEN THIS BOOKLET UNTIL YOU ARE TOLD TO DO SO

1. The paper has two sections: A and B
Section A has 40 questions and Section B has 15 questions
2. Answer All questions. All answers to both sections A and B must be written in the spaces provided
3. All answers must be written using a blue or black ballpoint pen or ink.
Diagrams should be drawn in pencil
4. Unnecessary alteration of work may lead to loss of marks.
5. Any handwriting that cannot easily be read may lead to loss of marks
6. Do not fill anything in the boxes indicated

For Examiner's Use Only.

FOR EXAMINER'S USE ONLY		
Qn. No	MARK	SIGN
1 - 10		
11 - 20		
21 - 30		
31 - 40		
41 - 45		
46 - 50		
51-55		
TOTAL		

Turn Ove

SECTION A (40Marks)

(Each number carries one mark)

1. Name one material commonly used to build temporary houses in Uganda.

2. State any one factor that promotes peace and security at school.

3. Why are motor road accidents common in Uganda today?

4. Give one way hills are important to telecommunication companies.

5. How was fire useful to people of Uganda long ago?

6. Give one way the government of Uganda can improve on her human resource.

7. Name the Island country in Africa that is crossed by the Equator.

8. Why did Tanganyika get her independence earlier than Kenya?


9. State one reason why East African coast has no lagoon lakes.

10. Why was the Nyanza province of Uganda transferred to Kenya by the British in 1902?

11. Write any one way language is preserved in a community.

12. Mention one way civic education is important to voters before national elections.

13. How is the item below used by people in many homes of Uganda?



14. State any one way human rights are abused in Uganda.

15. Give one factor that forces people to move from one village of Uganda to resettle in another.

16. Write any one way the challenges faced by landlocked countries can be solved in East Africa.

17. Name the first group of European foreigners to come to East Africa.

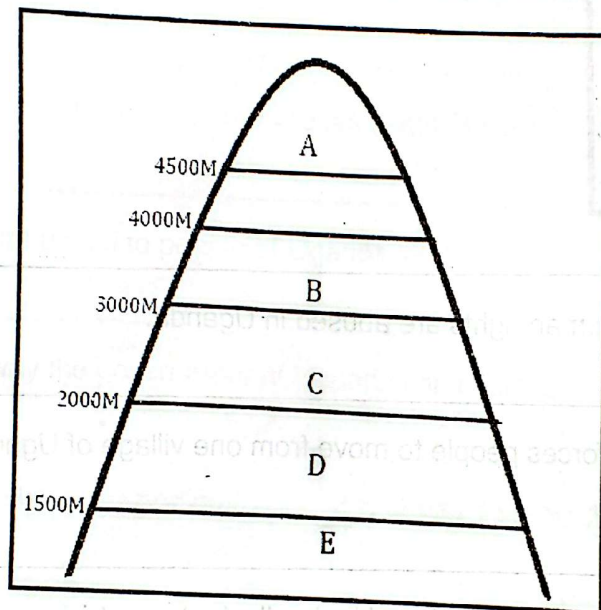
18. How are lakes important in the formation of rain?

19. It is 2:00pm in Uganda which is 45°E. What time is it in Accra?

20. Name the type of tax charged on goods that are brought in a country from other countries.

21. How is a rift valley similar to block mountains in terms of their formation?

The diagram below represents vegetation zones in the mountains of East Africa. Use it to answer questions 22-23



22. Why is zone E suitable for cattle rearing?

23. Name the factor which causes vegetation variation on mountain slopes.

24. Mention one example of communal work commonly done in Sembabule District.

25. Write one way tourism promotes development of trade in Africa?

26. Give one-way World War II sped up the process of attaining independence in Uganda.
-
27. How is democracy practiced in Uganda today?
-
28. Why did the British want to form the East African federation?
-
-
29. State any one way in which an oasis is important to the people who live in Sahara Desert.
-
30. How are Bagisu of Uganda similar to the Chagga of Tanzania in terms of ethnicity?
-
-
31. Name one common market in which Uganda is a member.
-
32. Give one economic benefit of a large population to a developing country.
-
-
33. State one way law breakers are punished by the judiciary.
-
34. How is URA (Uganda Revenue Authority) collection important to the government of Uganda?
-
-
-

For numbers 36-40, answer either Christianity or Islam question but not both. No mark will be awarded to a candidate who attempts BOTH alternatives.

35. Either: What lesson do Christians learn from the life of Abraham?

Or: What lesson do Muslims learn from the life of Ibrahim?

36. Either: Give any one reason why Jesus loved sinners most?

Or: How did Prophet Muhammad show love to his followers?

37. Either: Name the last creature God made before resting.

Or: Who is believed to be the first prophet on earth?

38. Either: State one way a Christian can reconcile with others.

Or: State one way a Muslim can reconcile with others.

39. Either: Mention one way the Apostle's Creed is important to Christians.

Or: Mention one way the Pillars of Islam are important to Muslims.

40. Either: Why God's laws are needed in our society.

Or: Why Allah's laws are needed in our society.

SECTION B (60 marks)

(Each number carries four marks)

41. Study the table below showing the climate of area Z and answer questions.

Months	J	F	M	A	M	J	J	A	S	O	N	D
Temp ⁰ c	30	31	31	31	31	29	28	28	29	29	29	30
Rainfall mm	250	250	325	300	213	25	25	25	100	275	380	200

a) Which month has the highest recording of rain in area Z?

b) Calculate the temperature range of area Z.

c) Name one economic activity suitably done in area Z

d) Give a reason to support your answer in (c) above

42. Mention one method of farming you would recommend being used to grow crops in the following areas?

a) Very dry land

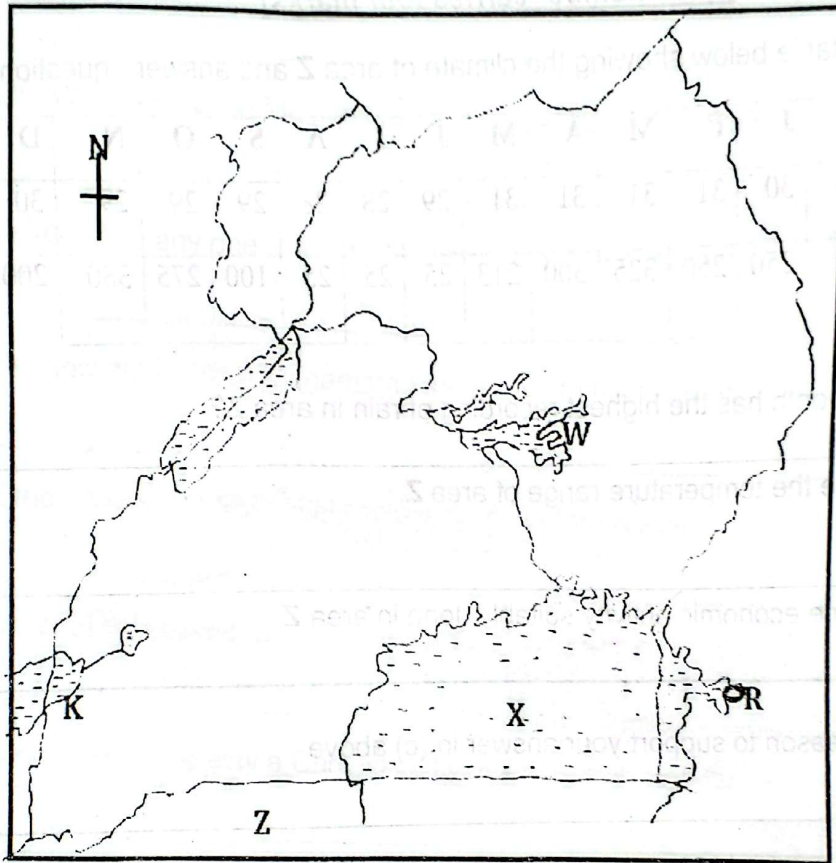
b) Steep highlands

c) State two ways a crop farmer can increase his/her yields (harvest).

i)

ii)

43. Study the map of Uganda given below and use it to answer the questions that follow:



a) Name the inland port marked with letter R.

b) Mention one main traditional cash crop grown on the islands of lake marked X in Uganda.

c) State one advantage enjoyed by country Z due to its geographical location.

d) How does lake marked with letter K differ from that marked with letter W in terms of formation?

44a) Apart from food, mention any one other basic need of people.

b) Why is food regarded as a basic need?

c) Give any two reasons why some people in Uganda fail to get basic needs.

i)

ii)

44. a) Mention the method of irrigation used in Gezira Irrigation Scheme.

b) State two advantages of irrigation farming.

i)

ii)

c) Give one challenge faced by farmers while using irrigation farming methods.

45. a) Give two reasons a well-developed road network promotes development.

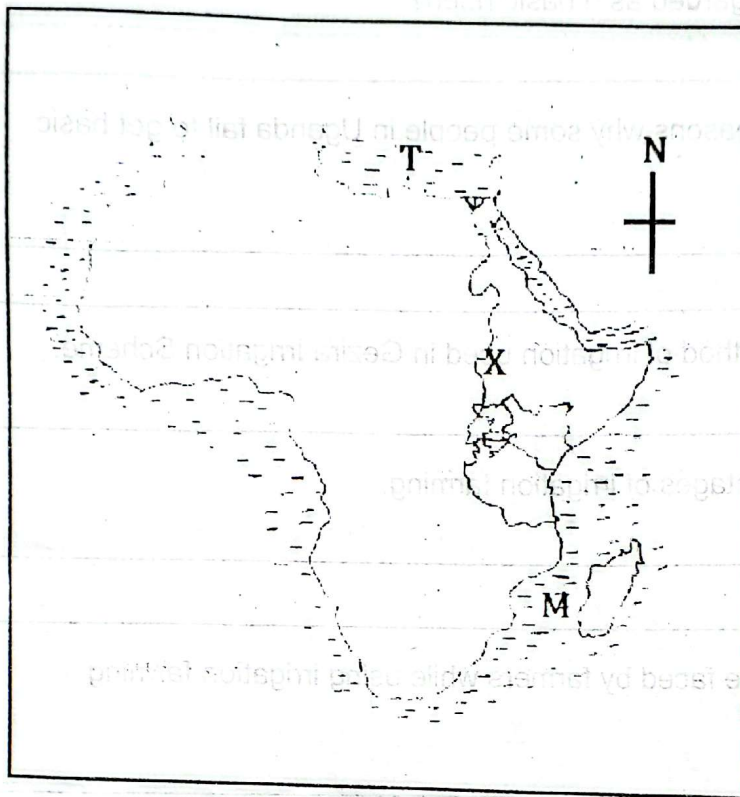
i)

ii)

b) Name the ministry responsible for constructing and maintaining major roads in Uganda.

c) State any one advantage of using tarmac roads over using murram roads.

46. Study the sketch map of Africa below and use it to answer questions that follow.



- a) Name one hydroelectric dam on the river marked X in Sudan.

- b) State one way water body T promotes trade in Africa.

- c) Name the water channel marked with the letter M.

- d) Mention one way river X is important to people in countries through which it flows.

- 47a). State any two roles of the Electoral Commission in Uganda.
- i) _____
- ii) _____

c) Give two challenges faced by of the Electoral Commission in Uganda

- i) _____
- ii) _____

48). State two reasons why the British colonial administrators used indirect rule in some parts of Uganda.

- i) _____
- ii) _____

b) Give two results of Omukama Kabalega resistance against British colonial rule.

- i) _____
- ii) _____

49 a) Write UNHCR its full form.

b) Give two ways the United Nations is similar to African Union?

- i). _____
- ii). _____

c). How has the United Nations benefitted Uganda?

50a). Mention two causes of poverty among the youths in Uganda.

- i). _____
- ii). _____

b). Write two ways the government of Uganda has tried to fight poverty among the youths.

- i). _____
- ii). _____

For each of the questions 51-55, answer Either Christian or Islamic question but **NOT BOTH** on a number. No marks will be awarded to a candidate who attempts both alternatives.

51. Either: a) Mention two items Christians use to pay tithe to Church.

i) _____

ii) _____

b) Give two ways a Christian benefits from paying tithe.

i) _____

ii) _____

Or: a) Mention two items on which Zakat is paid.

i) _____

ii) _____

b) State two ways how a Muslim benefits from paying Zakat.

i) _____

ii) _____

52 Either: a) How does Jesus Christ continue to live among Christians today?

b) Mention one sacrament which helps to strengthen the faith of Christians.

c) Give two lessons Christians learn from the parable of the prodigal son.

i) _____

ii) _____

Or: a) How does the hadiths continue to inspire Muslims today?

b) Give two rights of the road/way as taught by the hadith on sitting on roads.

i) _____

ii) _____

c). Write one moral lesson Muslims learn from the hadith stopping them from sitting on road/way.

53. Either: a) State any one factor one considers when choosing a marriage partner.

b) Give two reasons why people marry?

i) _____

ii) _____

c) How are marriage vows important in marriage?

Or: a) State any one factor one considers when choosing a marriage partner.

b) Give two reasons why people marry?

i) _____

ii) _____

c) How are marriage vows important in marriage?

54. Either: a) How do Christians pray to God?

b) Give two ways in which the African traditional ways of worship differ from Christian ways of worship.

i) _____

ii) _____

d) Mention two ways Christianity has promoted development in Uganda.

i) _____

ii) _____

Or: a) Why do Muslims pray to Allah?

b) State two ways in which African traditional ways of worship differ from Muslim ways of worship.

i) _____

ii) _____

c) Mention two ways Islam has promoted development in Uganda.

i) _____

ii) _____

55 a) Either: Give any two Christian values you know.

i) _____

ii) _____

b) Mention any two ways Christian values are important to Christians.

i) _____

ii) _____

Or: a) Give any two Islamic values you know.

i) _____

ii) _____

b) Mention any two ways Islamic values are important to Muslims.

i) _____

ii) _____

END