



THE MODERN TIMES EXAMINATIONS

PRIMARY SEVEN PRE-MOCK SET ONE

2025

SOCIAL STUDIES WITH RELIGIOUS EDUCATION

Time allowed: 2 hours 15 minutes

Random No.						Personal No.		

Candidate's Name:

Candidate's Signature:

District ID No.

--	--	--	--

Read the following instructions carefully:

1. Do not write your **School** or **district name** anywhere on this paper.
2. This paper has **two** sections: **A** and **B** Section **A** has **40 questions** (40 marks) and Section **B** has **15 questions** (60 marks) printed altogether.
3. Answer **ALL** questions. **All** the working for **both** Sections **A** and **B** must be shown in the Spaces provided.
4. All working must be done using a **blue** or **black** ball point pen or ink. Any work done in pencil except drawings and diagrams will **NOT** be marked.
5. Unnecessary **changes** in your work and handwriting that cannot be easily read may lead to **loss of marks**.
6. Do not fill anything in the table indicated for **Examiner's use only** and the boxes inside the question paper.

FOR EXAMINERS' USE ONLY		
QN. NO.	MARKS	EXR'S INITIALS
1 – 10		
11 - 20		
21 - 30		
31 - 40		
41 - 43		
44 – 46		
47 - 49		
50 - 52		
53 - 55		
TOTAL		

Turn Over

SECTION A (40MARKS)

1. Name the type of climate described as hot and wet throughout the year.

2. Mention any one place where people get spiritual guidance.

3. State any one factor that attracted the Bantu cultivators to settle within the lake regions.

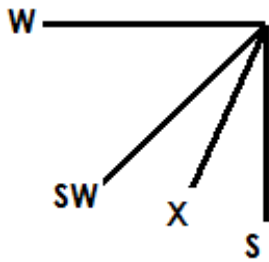
4. Give any one-way sand mining can negatively affect farming in an area.

5. Mention the national symbol which is similar to a school badge.

6. How did Dr. Albert Cook socially contribute to the life of people of Uganda?

7. Name the river which separates Tanzania from Uganda.

8. Name the compass direction marked with letter X



9. Give any one reason why people make plans of what to buy before shopping.

10. How did Johann Ludwig Kraft make it easy for the coastal people to understand the bible?

11. What was the main reason for the signing of Moresby treaty?

12. How has prolonged drought contributed to loss of lives in Uganda?

13. What happens to a law breaker when the court has proved him/ her guilty?

14. How did the Namirembe agreement bring back happiness in the Buganda kingdom?

15. State any one role played by civil servants in Uganda.

16. Name the body responsible for promoting the tourism in Uganda.

17. Give the importance of having voluntary workers in the district.

18. How is a scale useful to a map?

19. Below is the number plate of Dr. Bens's vehicle. What does letter U stand for on the number plate?

UA 001AA

20. Why is tourism called an invisible trade?

21. Write NEMA in full.

22. Give any one way the early man protected himself from danger.

23. Which type of timber is used in the ship building industry?

24. Why is there no hydro-electricity in Kalangala district?

25. What does the red colour on the Uganda National flag represent?

26. Mention any one effect of lighting on buildings.

27. How do people in rural areas benefit from the establishment of small scale industries?

28. What do we call the sudden increase in the number of people living in an area?

29. How does a school provide market to the community?

30. Name the leader of the Democratic party who took part in the independence elections of Uganda.

31. State any one way children abuse their rights.

32. How was the Royal Geographical Society important to early explorers who came to Uganda?

33. Give any one way the government benefits from people when they pay taxes promptly.

34. Name the only highland Nilotes tribe found in Uganda.

35. State any one common cause of accidents on water.

In questions 36 – 40, answer Either Christianity or Islam but not alternatives in a number

36. **Either:** Name the sacrament that makes people to become priests.

Or: What title is given to a person who leads prayers in the Mosque?

37. **Either:** Name the first prophet in Christianity.

Or: Name the last prophet in Islam.

38. **Either:** Give any one reason why Christians visit Namugongo.

Or: Give any one reason why Muslims visit Mecca.

39. **Either:** How do people use their mouth to serve God?

Or: How do people use their mouth to serve Allah?

40. **Either:** Give the importance of the Holy Bible to Christians.

Or: Give the importance of the Holy Quran to Muslims.

SECTION B (60 MARKS)

41. Study the sketch map of Africa below and use it to answer the questions that follow.



a) Name the regional economic bloc that promotes trade among countries marked **B** and **C**.

b) How is sea port marked **M** important in the economic development of country **C**?

c) Apart from country **B** and **C**, mention any **one** other country that is a member of the economic bloc named in (a) above.

d) Name the prevailing winds that bring rain to region marked **E**.

42.a) What title is given to the head of the Judiciary in Uganda?

b) Give one example of people who make up the Judiciary.

c) State any two roles of the Judiciary.

i) _____

ii) _____

43. Match the following dams to the rivers where they are found.

i) River Niger - Akosombo dam

ii) River Orange - Kariba dam

iii) River Zambezi - Verwoerd dam

iv) River Zambezi - Kainji dam

a) River Niger _____

b) River Orange _____

c) River Zambezi _____

d) River Zambezi _____

44.a) Name the major tourist attraction found in Mgahinga National park.

b) Give any two reasons why the tourism industry in Uganda has developed.

i) _____

ii) _____

c) What can the government of Uganda do to attract more tourists into the country?

45.a) State any two factors that unite members of a nuclear family.

i) _____

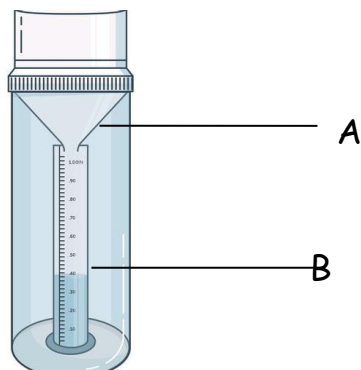
ii) _____

b) Give any two ways how order can be created in a home.

i) _____

ii) _____

46. **Study the diagram below and answer the questions that follow.**



(a) State where the above instrument should be placed in order to collect an accurate amount of rainfall received.

(b) What is the function of the part marked **A** on the diagram above?

(c) Name the part marked **B** on the diagram.

(d) Why is rainfall measured in millimeters and not in liters?

47.a) What is urbanization?

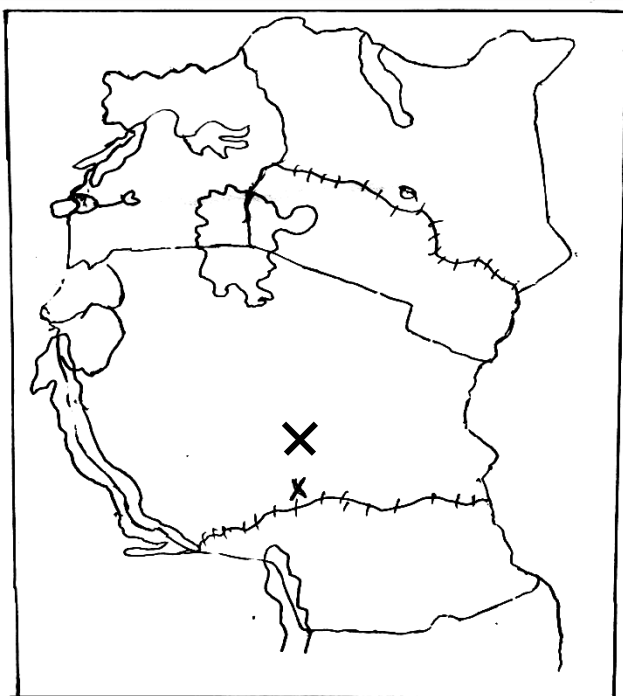
b) Give any two ways urban centers benefit rural areas.

i) _____

ii) _____

c) Give one way rural areas benefit those in urban areas.

48. Use the map below to answer questions that follow



a) Name the railway lines marked with letters Q and X.

i) Q _____

ii) X _____

b) Give the reason why the colonialists encouraged railway construction in East Africa.

c. Why is railway transport not commonly used by people in Uganda today?

49.a) What is relief?

b) Mention any one feature that was formed through faulting.

c. Which relief feature is found in Kenya and Tanzania but not in Uganda?

d. Why do most rivers in Tanzania flow towards Indian ocean?

50.(a) Under which ministry do Local councils belong?

(b) Which official represents the central government at the district?

(c) State any two advantages of decentralization

(i)

(ii)

For questions 51 – 54, answer Christianity or Islam not both on each

51 Either: a) Who was the first human being to be created by God?

b) Name two of the sons God gave to the above person

i)

ii)

c) Which son did God give to the above person to replace Abel after his death?

Or: a) Who was the first human being to be created by Allah?

b) Name two of the sons Allah gave to the above person in “a”

i)

ii)

c) Which son was killed by the brother?

52. Either: a) What is suffering?

b) How did the Uganda martyrs suffer because of their faith?

c) How did the persecution of the Uganda martyrs affect the Christianity religion?

e. Who was the youngest among the Christian martyrs?

Or: a) What is suffering?

b) Which prophet is known for suffering and perseverance in Islam?

c) State two causes of suffering among Muslims today?

53. Either: a) Name any two people in the Bible who survived the floods.

i) _____

ii) _____

b) Give one reason why the above-mentioned people survived the floods.

c) How did they know that the floods had ended?

Or: a) Name the prophet in the Quran who survived floods.

b) Give one reason why the above-mentioned prophet survived floods.

c) Why did God send the floods?

d) On which mountain did the Ark rest?

54. Either: a) State any one way a Christian can help a neighbor who is sick.

b) Give any two ways Jesus showed concern to the sick

i) _____

ii) _____

c) What lesson do we learn from Jesus' concern?

Or: a) Give any one way a Muslim can help a neighbor who is sick.

b) State any two ways Prophet Muhammad showed concern to the sick.

i) _____

ii) _____

c) What lesson do we learn from prophet Muhammad's concern?

55. For Both: a) What is a misunderstanding?

b) State any two causes of misunderstandings.

i) _____

ii) _____

c) State any one effect of misunderstandings.

END