



PRE-PLE EXAMINATIONS SET TWO 2025

CLASS : P.7

SUBJECT : SOCIAL STUDIES AND RELIGIOUS EDUCATION

TIME ALLOWED : 2 HOURS 15 MINUTES

Name _____ Stream _____

DO NOT OPEN THIS BOOKLET UNTIL YOU ARE TOLD TO DO SO.

Read the following instructions carefully.

1. This paper is made up of two Sections: A and B.
2. Answers to both sections must be written in the spaces provided in full sentences.
3. Section A has 40 questions (40 marks)
4. Section B has 15 questions (60 marks)
5. Attempt all questions. All answers to both sections A and B must be written in the spaces provided.
6. All answers must be written in blue or black ballpoint pen or ink but not in pencil. All work done in pencil, except diagrams, will **NOT** be marked.
7. Crossing out of answers will lead to loss of marks.
8. Any handwriting that cannot be easily read may lead to loss of marks.
9. Wrong spelling will lead to loss of marks.

FOR EXAMINERS USE ONLY		
QN. NO.	MARK	<u>SIGN</u>
1 – 10		
11 – 20		
21 – 30		
31 – 40		
41 – 43		
44 – 46		
47 – 49		
50– 52		
53 – 55		
TOTAL		

SECTION A.

1. Name the social service provided by drivers.
.....
2. What problem is likely to be caused by oil mining in the Albertine region?
.....
3. Give **one** reason why the government of Uganda is encouraging BodaBoda riders to put helmets on their heads?
.....
4. Write **one** result of floods in our community.
.....
5. How can people in rural areas of Uganda improve on their income?
.....
6. Name the local council one executive member in charge of children's affair.
.....
7. State any **one** way UNRA is important to the government of Uganda.
.....
8. Why should children be grateful to missionary work in Africa?
.....
9. Mention any **one** way that makes the growing of crops possible in Libya.
.....
10. How have hills led to the promotion of communication?
.....
11. Give **one** way early man used to get food.
.....

12. Under what condition is a bye-election carried out?

.....

13. Name **one** district in Uganda that grows cocoa on a large scale.

.....

14. Why didn't the Nilotes form kingdoms compared to the Bantu?

.....

.....

15. Give **one** condition for a country to qualify to be a member of the African Union(A.U)

.....

16. Mention **one** way in which commercial banks promote development in a country.

.....

17. Mention **one** problem Zambia faces for being a land locked country.

.....

18. Name the group of people the Maji Maji rebellion was staged against?

.....

19. Give **one** problem faced by people in slum areas.

.....

20. State the ministry responsible for primary schools in Uganda.

.....

21. Identify any **one** duty of the electoral Commission.

.....

22. Name the water body that has the largest number of hippopotamuses in Uganda.

.....

23. How helpful are trees to the fishing industry?

.....

24. Give **one** way business men benefit from the nearby community.

.....

25. Name the type of energy resource generated from hot springs.

.....

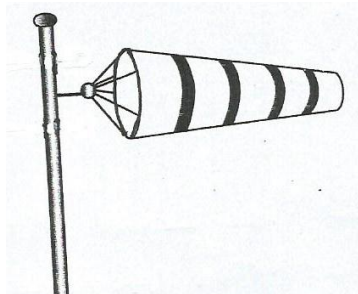
26. Identify any **one** animal commonly used for transport in desert land.

.....

27. Why did Captain Fredrick Lugard sign an agreement with Kabaka Mwanga II?

.....

28. How is the weather instrument below useful to a pilot?



.....

29. How is vegetation important to the tourism industry?

.....

30. Mention any **one** reason why civil wars are common in African countries.

.....

31. Which African Nationalist started Pan Africanism in Africa?

.....

32. Identify any **one** advantage of a surplus budget to a country.

.....

33. State the major role of a sick bay in a school.

.....

34. Give **one** reason why the white settlers decided to settle in Kenya.

.....

35. What **one** factor led to development of Kiswahili culture in East Africa?

.....

For each of the questions 36 – 40, answer Either the Christian or Islamic questions but not both. No mark will be awarded to a candidate who attempts both alternatives in a number.

36. **Either:-** What important message did God tell Moses on Mountain Sinai?

.....

Or:- What important message did angel Jibril bring to Muhammed on Mountain Hira?

.....

37. **Either:-** Why did Joseph and Mary take baby Jesus to Egypt?

.....

Or:- Why was prophet Muhammad forced to leave Mecca for Medina in 622AD?

.....

38. **Either:-** Which prophet was swallowed by a fish because of his disobedience?

.....

Or:- According to the Quran, name the prophet who was swallowed by a fish due to his disobedience.

.....

39. **Either:-** State any **one** way in which Abraham showed his obedience to God.

.....

Or:- State any **one** way in which Abraham showed his obedience to Allah.

.....

40. **For both:-** What symbol of faith in Islam is compared to the cross in Christianity?

.....

SECTION B.

41. (a) Give **two** reasons why population in Uganda is increasing at a high rate.

(i).....

(ii).....

(b) Give **two** reasons why there is a low contraceptive use in Uganda today.

(i).....

(ii).....

42. (a) Give **one** way the police station promotes peace and security in the community.

.....

(b) Give any **two** ways of caring for social service centres.

(i).....

(ii).....

(c) Identify any **one** thing that can destroy social service centres.

.....

43. (a) Name **two** vegetation zones of Africa that are not in Uganda.

(i).....

(ii).....

(b) What do we call the vegetation that grows in drier areas of Africa?

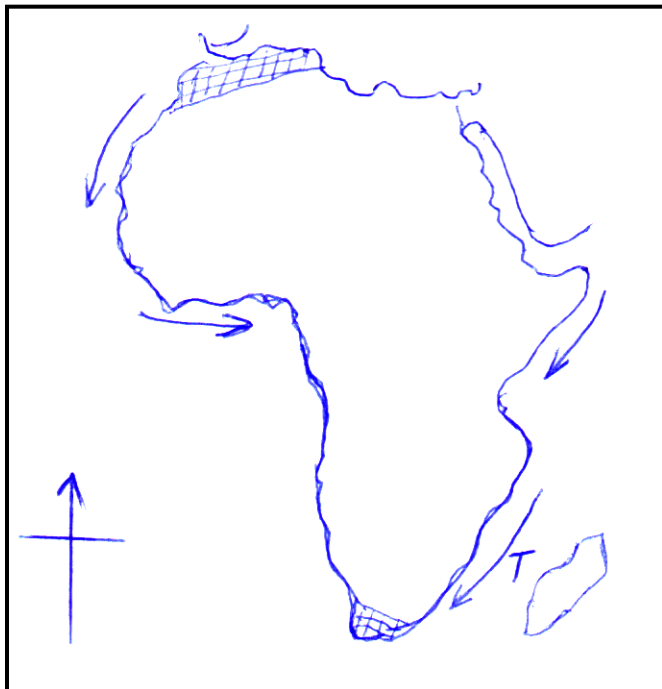
.....


(c) State the difference between planted and natural vegetation.

.....

.....

44. Study the map of Africa below and answer questions that follow.



(a) Name the type of climate located in the shaded part .

.....

(b) State any **two** economic activities carried out in the type of climate named in (44 a) above.

(i)

(ii)

(c) Name the type of ocean current marked T.

.....

45. (a) List any **two** challenges that hinder development in African countries.

(i)

(ii)

(b) Suggest **two** ways the government of Uganda has tried to eradicate illiteracy.

(i)

(ii)

46. (a) Why is 8th October 1995 remembered in the history of Uganda?

.....

(b) State **two** ways in which the constitution is related to elections.

(i)

(ii)

(c) Give **one** way the constitution promotes peace.

.....

47. (a) Give **two** reasons why Africans fought for their independence.

(i)

(ii)

(b) State any **two** problems that Africans faced during their struggle for independence.

(i)

(ii)

48. (a) Point out **two** differences between Uganda and Nigeria in terms of geographical location.

(i)

(ii)

(b) Give **one** way the oil drilling industry in Nigeria benefit its high population.

.....

(c) How is the Semliki river valley similar to the Niger Delta in terms of economic activities?

.....

49. (a) What is plantation farming?

.....

.....

(b) Identify any **three** problems faced by the farmers in the East African states.

(i)

(ii)

(iii)

50. (a) Give a reason why developing countries are encouraging the growth of small scale industries.

.....

(b) Identify **three** factors that influences industrial growth in an area.

(i)

(ii)

(iii)

For each of the questions 51 to 55, Answer Either the Christian or Islamic questions but not both. No marks will be awarded to a candidate who attempts both alternatives in a number.

51. **Either:-** (a) What is a miracle according to Christianity?

.....

(b) Give **two** major reasons why Jesus performed miracles during his life time.

(i).....

(ii).....

(c) State the miracle Jesus performed at Cana.

.....

Or:-a) What is a miracle according to Islam?

.....

(b) Give **two** major reasons why prophet Isa performed miracles during his life time.

(i)

(ii).....

(c) State **one** belief among the Moslem community about Isa.

.....

52. **Either:-**

(a) Mention **one** example of a good decision made by a Christian.

.....

(b) State **two** results of making a good decision.

(i).....

(ii).....

(c) Suggest **one** reason why making bad decisions is not liked by God.

.....

Or:-

(a) Mention **one** example of a good decision made by a Moslem.

.....

(b) State **two** results of making a good decision.

(i).....

(ii).....

(c) Suggest **one** reason why making bad decisions is not liked by Allah.

.....

53. **Either:-** (a) Write **three** things Christians observe during lent season.

(i)

(ii)

(iii)

(b) Identify the significance of Palm Sunday to Christians.

.....

Or:- (a) Which **three** groups of people can be excused from fasting during the month of Ramadhan?

(i)

(ii)

(iii)

(b) Identify the festival that marks the end of Ramadhan.

.....

54. **Either:** (a) State the importance of these sacraments as practiced by Christians.

(i) Confirmation

.....

(ii) Anointing of the sick.

.....

(iii) Holy matrimony.

.....

(b) What does Jesus say about divorce?

.....

Or:- (a) Name **two** pillars of Islamic practice. (Ibadat)

(i)

(ii)

(b) List down any **two** beliefs(Iman) of Moslems.

(i)

(ii)

55. For both:-

(a) Identify any **two** qualities of a good wife.

(i)

(ii)

(b) Give **two** reasons why people marry.

(i)

(ii)

END.