



# PEAK EDUCATION SERVICES – NAKABUGO

## BEGINNING OF TERM II EXAMINATIONS 2025

P.7 SOCIAL STUDIES AND RELIGIOUS EDUCATION

*Time Allowed: 2 hours 15 minutes*

Random No.						Personal No.		

**Candidate's name:** .....

**Candidate's Signature:** .....

**School Name:** .....

**District Name:** .....

**Read the following instructions carefully:**

1. This paper has two sections: **A** and **B**.  
Section **A** has **40** questions and section **B** has **15** questions.
2. Answer **all** questions. **All** the working for both Sections **A** and **B** must be shown in the spaces provided.
3. **All** the working **must** be done using a **blue** or **Black** ball point pen or ink.
4. Unnecessary **changes** in your work and Handwriting that cannot be read easily may Lead to **loss of marks**.
5. Do not fill anything in the table indicated **'FOR EXAMINERS' USE ONLY'**

FOR EXAMINERS' USE ONLY		
PG.NO.	MARKS	INIT.
Page 1		
Page 2		
Page 3		
Page 4		
Page 5		
Page 6		
Page 7		
Page 8		
Page 9		
Page 10		
Page 11		
Page 12		
Page 13		
<b>TOTAL</b>		

## SECTION A: 40 MARKS

Questions **1** to **40** carry one mark each

1. Name the map symbol drawn below.



2. How can tourists be able to locate places of their interest at Entebbe airport?

3. By what process were basin lakes formed?

4. Give **one** importance of the central bank of Uganda.

5. What does the term nationalism mean?

6. Why do very few people use newspapers as a medium of communication in rural areas?

7. What is the direction of Uganda from South Sudan?

8. Name the national park famous for mountain gorillas in Uganda.

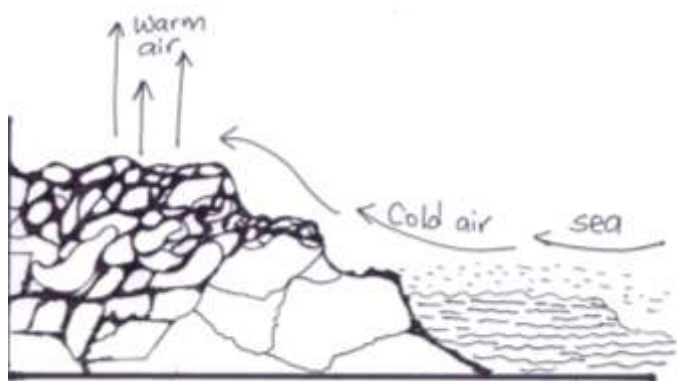
9. Give the reason why the Nile valley is densely populated.

10. Name the country in East Africa which has the highest population density.

11. State the main effect of the earth's rotation on its axis.

12. Name **one** mountain in East Africa crossed by the equator.  
.....
13. Which stanza of the Uganda National Anthem shows that Uganda is an agricultural country?  
.....
14. How does literacy among people promote development?  
.....
15. How did fertile soils contribute to the growth of Buganda kingdom?  
.....
16. State one factor which can promote the tourism industry.  
.....
17. On which river was Akasombo river project constructed?  
.....
18. Why is the government of Uganda encouraging modernization of agriculture?  
.....
19. State the main economic activity carried out in the temperate regions of South Africa.  
.....
20. Why do most farmers in Uganda prefer subsistence farming to any other type of farming?  
.....
21. How do forests influence farming activities?  
.....
22. Mention any **one** way the government can control rural-urban migration.  
.....
23. Why did the British invite Indian Coolies to East Africa?  
.....
24. Why does Kenya find it easier to carry out overseas trade than Uganda?  
.....

25. How can the construction of dams on African rivers be dangerous to the tourism industry?
- .....
26. Which climatic region of Africa is suitable for growing crops such as lemons and oranges?
- .....
27. State the factor which is likely to slow down the development of Kasese.
- .....
28. How were porters useful to traders before the construction of railways in East Africa?
- .....
29. State any **one** negative effect of smuggling to local manufacturers.
- .....
30. How are the Chagga similar to the Bakonjo in their settlement patterns?
- .....
31. State the reason why you would prefer a donkey to a lorry as a means of transport in Bundibugyo.
- .....
32. Uganda has always had a deficit budget. What problem does this bring to Uganda?
- .....
33. Give **one** reason why the British decided to settle in the Kenya highlands.
- .....
34. How did the coming of Asians promote economic developments in East Africa?
- .....
35. What breeze is shown in the diagram below?



**FOR NUMBERS 36 TO 40, ANSWER EITHER CHRISTIANITY OR ISLAM BUT NOT BOTH.**

36. **Either:** Which son of Adam committed the first murder against his brother?

.....  
**Or:** Which son of Adam committed the first murder against his brother?

.....  
37. **Either:** State **one** thing you can do as a Christian in order to come back to God after sinning.

.....  
**Or:** State **one** thing you can do as a Moslem in order to come back to Allah after sinning.

.....  
38. **Either:** In which book in the bible do we find the story of Israelites leaving Egypt to Canaan?

.....  
**Or:** Which Surah in the Quran tells us the life of Isa?

.....  
39. **Either:** Give **one** reason why Moses ran away from Egypt to Midian.

.....  
**Or:** Give **one** reason why Mohammad ran away from Mecca to Medina.

.....  
40. **Either:** Name **one** cause of suffering in Christianity.

.....  
**Or:** Name **one** cause of suffering in Islam.

## SECTION B: 60 MARKS

Questions **41** to **55** carry four marks each

41. (a) Name the type of budget where the expenditure is less than the income.

.....

(b) State the **two** parts of a budget.

(i) .....

(ii) .....

(c) Give **one** importance of making a plan of what you want to buy before spending.

.....

42. (a) State any **two** ways in which a school passes on information to parents.

(i) .....

(ii) .....

(b) In which **two** ways can a head teacher pass on information to school children?

(i) .....

(ii) .....

43. (a) What title is given to the head of Legislature?

.....

(b) Give **one** example of people who make up the Legislature.

.....

(c) State any **two** roles of the Legislature.

(i) .....

(ii) .....

44. **Study the climatic table below of Liberia and answer the questions that follow.**

Temp <sup>0</sup> C	22	24	28	30	32	28	26	26	27	26	25	24
Rainfall mm	0	0	25	50	75	115	205	250	145	20	0	0
Months	J	F	M	A	M	J	J	A	S	O	N	D

(a) What type of climate is shown above on the table?

.....

(b) Calculate the temperature range of this area.

(c) State **one** characteristic of the above type of climate.

.....

(d) Give **one** economic activity done in the type of climate shown above.

.....

45. (a) State **two** factors which can promote trade in an area.

(i) .....

(ii) .....

(b) Give **two** advantages of industrialization in an area.

(i) .....

(ii).....

46. (a) Which countries are known as the Nile valley countries?

.....

(b) Name **two** Nile valley countries.

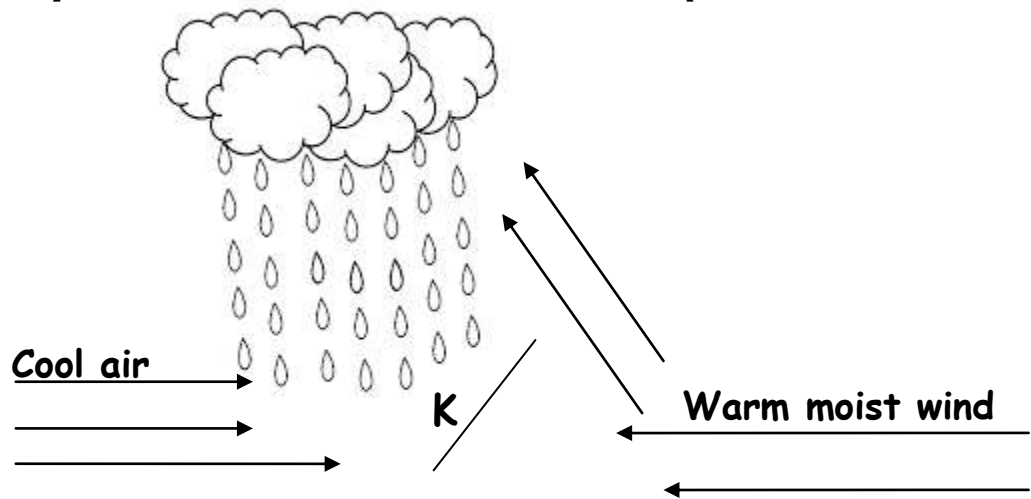
(i) .....

(ii).....

(c) Mention the major cash crop grown in the Nile valley.

.....

47. Study the diagram below and answer questions about it.



- (a) What type of rainfall is shown above in the diagram?  
.....
- (b) Name the part marked with letter "K".  
.....
- (c) Mention **two** districts in Uganda where the above type of rainfall is received.
- (i) .....
- (ii) .....

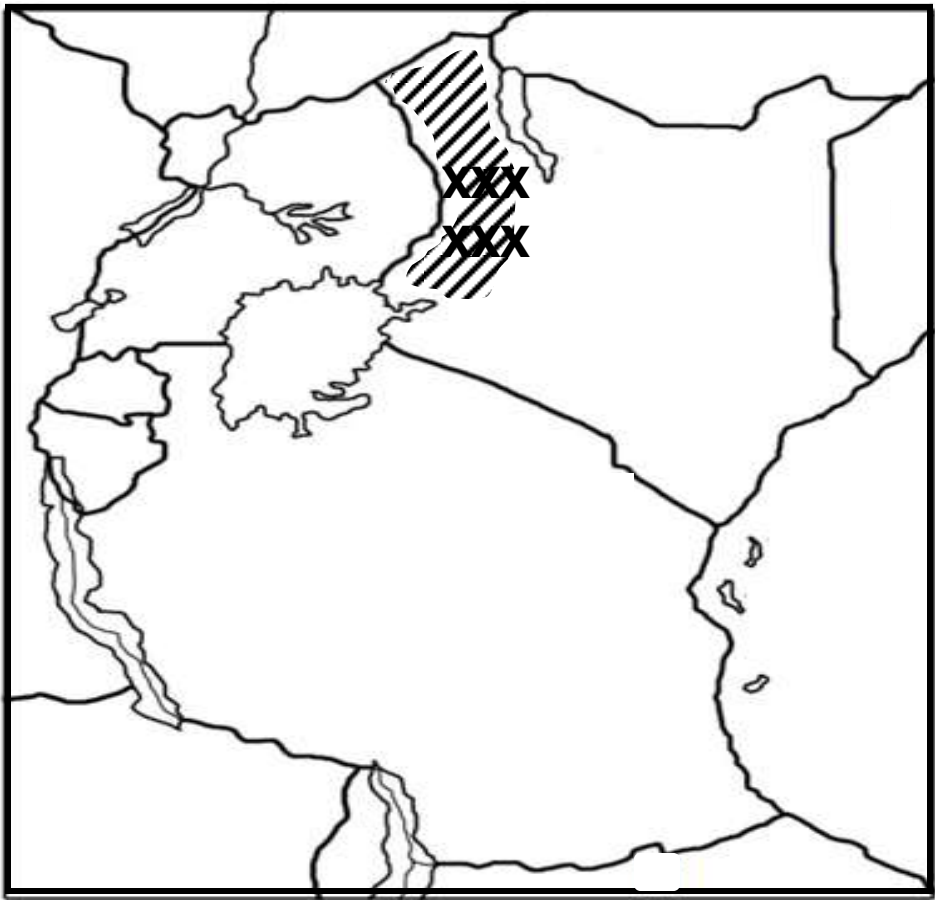
48. Match A with B correctly.

A	B
<u>Legend</u>	<u>Tribe which tells us about it.</u>
(i) Kintu and Nambi	Batoro
(ii) Mundu and Seera	Bagisu /Bamasaba
(iii) The Spear and the Bead	Baganda
(iv)Isaza and the king of hell	The Luo
(i) Kintu and Nambi	.....
(ii)Mundu and Seera	.....
(iii) The Spear and the Bead	.....
(iv)Isaza and the king of hell	.....



49. (a) Give **one** reason why kingdoms were restored in Uganda in 1993.  
.....
- (b) Name the Ugandan President who restored kingdoms after twenty six years.  
.....
- (c) State **two** disadvantages of kingdoms.
- (i) .....
- (ii).....

50. **Study the map below and answer the questions about it. Evolution of Uganda Boundaries.**



- (a) How did the evolution of Uganda’s boundaries affect some tribes?  
.....
- (b) Mention **two** tribes which were divided from their relatives during the fixing of Uganda’s boundaries.
- (i) ..... (ii) .....

(c) Why was the part shaded with letters **XXXXXX** transferred from Uganda to Kenya in 1926?

.....

**FOR NUMBERS 51 TO 55, ANSWER EITHER CHRISTIANITY OR ISLAM BUT NOT BOTH.**

51. **Either:-**

(a) Name the town in Galilee where Jesus Christ lived with his parents.

.....

(b) Mention **one** Christian value Jesus showed to his parents during his childhood.

.....

(d) Give the name of Zechariah's wife who was a relative to Mary the mother of Jesus.

.....

(e) How did God punish Zechariah when he refused to believe in the Angel's message of his wife bearing a son at an old age?

.....

OR:

(a) Name the town where Prophet Mohammad was born.

.....

(b) State **two** reasons why Prophet Mohammad was loved by his foster parents.

(i) .....

(ii) .....

(b) Who was the foster mother of Prophet Mohammad?

.....

52. **Either:**

(a) What was God's purpose of creating Adam?

.....

(b) Where did Adam live?

.....

(c) In which way was Adam different from other creatures?

.....

(d) How did Adam fail to live happily with God?

.....

**OR:**

(a) What was Allah's purpose of creating Adam?

.....

(b) Where did Allah put Adam to live?

.....

(c) In which way was Adam different from other creatures?

.....

(d) How did Adam break his good relationship with Allah?

.....

53. **Either:-**

(a) Give **two** ways in which a Christian can give selfless service to people in a community.

(i) .....

(ii) .....

(c) Mention **two** selfish behaviours among Christians today to people in community.

(i) .....

(ii) .....

**Or:-**

(a) Give **two** ways in which a Moslem can give selfless service to people in a community.

(i) .....

(ii) .....

(b) Write down any **two** selfish behaviours among Moslems today.

(i) .....

(ii) .....

**54. Either:-**

(a) State any **two** Gospel books in the Bible.

(i) .....

(ii) .....

(b) What do you understand by the term "Gospel"?

.....

(c) Which book in the Bible talks about the creation of the earth?

.....

**Or:-**

(a) State any **two** Holy books in Islam.

(i) .....

(ii) .....

(b) Which Holy book was given to the following people:-

(i) Prophet Mohammad (PBUH)?

.....

(iii) Prophet Musa ?

.....

(iii) Prophet Dauda?

.....

55. **Either:-**

**“Whoever refuses to work is not allowed to eat”(2 Thessalonians 3:10)**

(a) Give **two** reasons why people should work.

(i) .....

(ii) .....

(b) State **two** challenges people meet at their places of work.

(i) .....

(ii) .....

**Or:-**

**“Grasp five things before five others; your leisure before you work”**

**Sunan Tirmidhi 11:51: 74)**

(a) Give **two** reasons why Islam encourages people to work.

(i) .....

(ii) .....

(b) State **two** challenges people meet at their places of work.

(i) .....

(ii) .....

