



SUREKEY EXAMINATIONS BOARD  
PRIMARY SIX PROMOTIONAL EXAMINATION  
2025

MATHEMATICS

*Time Allowed: 2 hours 30 minutes*

Admission No.						Personal No.		

Learner's Name: .....

Learner's Signature: .....

School Name: .....

District Name:.....

Read the following instructions carefully:

1. Do not forget to write your **school** and **district name** on this paper.
2. This paper has two sections: **A** and **B**.  
Section **A** has **20** questions and Section **B** has **12** questions. The paper has **12 printed pages** altogether
3. Answer **all** questions. **All** the working for both sections **A** and **B** must be shown in the spaces provided.
4. **All** working must be done using a **blue** or **black** ball point pen or ink. Any work done in pencil other than graphs and diagrams will **not** be marked.
5. **No calculators** are allowed in the examination room.
6. Unnecessary **changes** in your work and handwriting that cannot easily be read may lead to loss of marks.
7. Do not fill anything in the table indicated:  
**"For Examiners' Use only"** and boxes

FOR EXAMINERS' USE ONLY		
Qn.No.	MARKS	EXR'S NO.
1 - 5		
6 - 10		
11 - 15		
16 - 20		
21 - 22		
23 - 24		
25 - 26		
27 - 28		
29 - 30		
31 - 32		
<b>TOTAL</b>		

## SECTION A: 40 MARKS

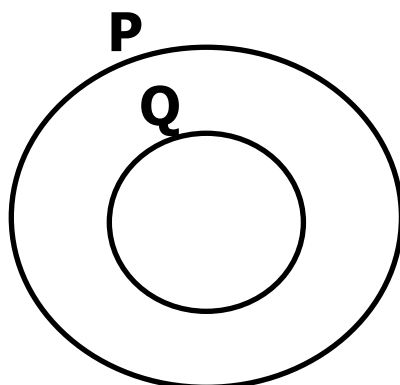
Answer **all** questions in this Section  
Questions **1** to **20** carry two marks each

1. Write **CXXV** in Hindu Arabic Numerals.
2. Convert 0.54 kilograms into grams.
3. Given that  $a = 8$  and  $b = 10$ . Find the value of  $a - \frac{1}{2}b$ .
4. Write 6436 in words.  
.....  
.....
5. In the Olympics games held in London, 9000 players from 150 countries participated in the games. If all countries brought equal number of players, Find the number of players each country brought.



6. Workout:  $110_{\text{two}} + 11_{\text{two}}$ .


7. Write the mathematical relationship between sets P and Q shown in the diagram below.



8. Using a pair of compasses and a ruler only, construct an angle of  $30^\circ$  in the space below.

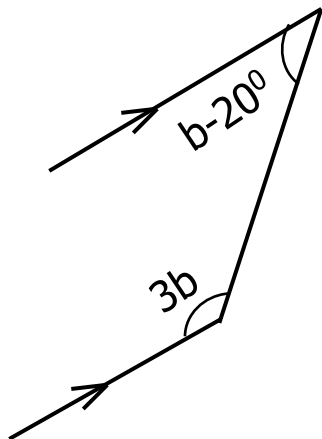
9. A school has a total number of 450 pupils. On a heavy rainy day, only 78% managed to attend school and others failed due to bad weather. How many pupils failed to attend school that day?

10. Find the area of a circle whose radius is 14cm. (Use  $\pi = \frac{22}{7}$ )



11. The heights in centimetres (cm) of five men are as follows;  
130cm, 149cm, 182cm, 160cm and 155cm.  
Find the range in the heights.

12. In the diagram below, find the value of  $b$ .



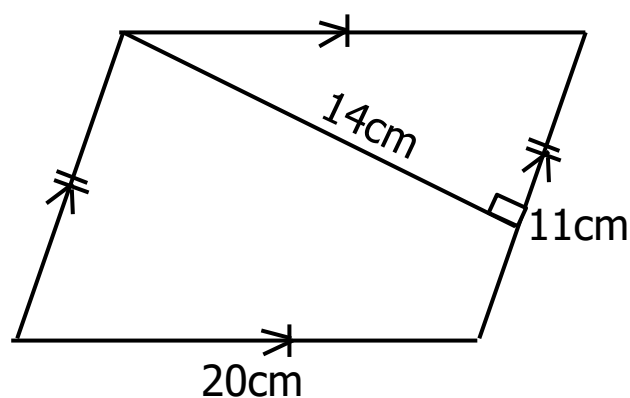
13. Elisha rolled a die once on a Luddo board. State the probability that the top face of the die showed an even number.
14. The rate of converting British Pound Sterling to Uganda Shilling in Centenary Bank is  $\text{£}1 = \text{Ugsh.}4,000$ . Find in Ugsh, the equivalent cost of a mobile phone which costs  $\text{£}150$ .

15. Calculate the speed of a motorist who covered a distance of 240km in  $1\frac{1}{2}$  hours.



16. In a certain shopping mall, the cost of buying 3kg of sugar is Sh.9,000. Mr.Musaazi sells sugar in packets of 5kg. how much money does he earn if he sells 2 packets?


17. Workout the area of the parallelogram below.



18. Write the number which has been expanded below.  
 $(8 \times 10^3) + (5 \times 10^1) + (6 \times 10^0)$

19. Round off 6482 to the nearest hundreds.

20. A juice factory hired 6 workers to pack juice into big boxes. The workers used 8 hours to do the work. How long would it have taken to pack juice if the factory had hired only 4 workers?



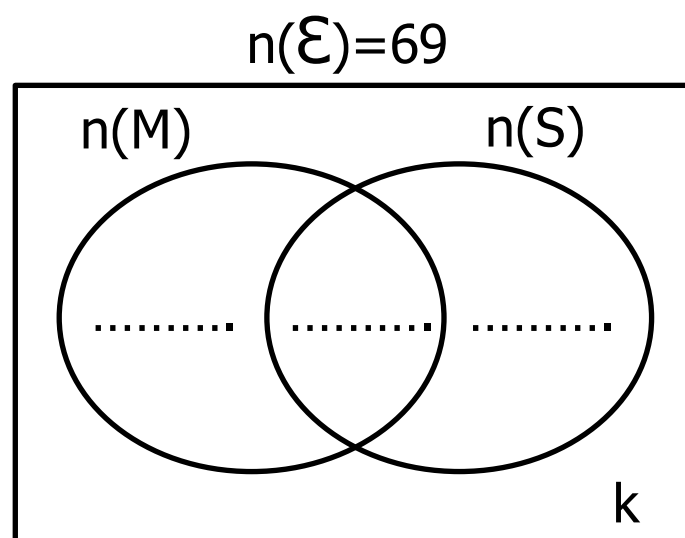
### SECTION B: 60 MARKS

Answer **all** questions in this section

Marks for each question are indicated in brackets.

21. In a class of 69 pupils, 37 like mathematics (M), 40 like science (S), 12 like both subjects and  $k$  pupils do not like any of the two subjects.

(a) Use the information provided to complete the Venn diagram below. (03 Marks)



(b) How many pupils do not like the two subjects? (02 Marks)

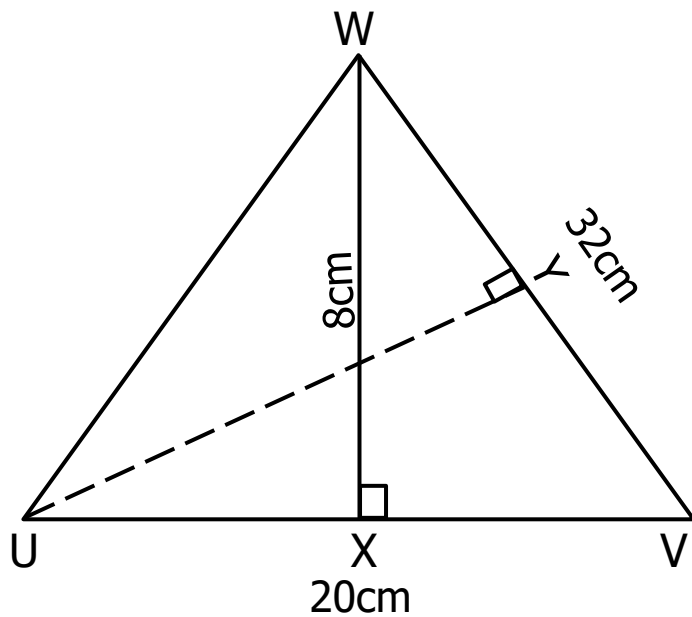
22. A church organized a fundraising service in order to collect money to build the Pastor's house. During the fundraising, each adult contributed Sh.50,000 and each child contributed Sh.25,000. The service was attended by 40 adult males and 25 adult females while the number of children was half the number of adult males. Calculate the total amount of money collected during the fundraising. (06 Marks)



23. (a) Simplify:  $0.64 \times 0.15$  (02 Marks)

- (b) A family bought a loaf of bread to be eaten in three intervals of time. In the morning,  $\frac{2}{5}$  of the bread was eaten,  $\frac{1}{3}$  was eaten in the afternoon and the remaining part in the evening. The family has 4 members. Find the part of the bread eaten by each member in the evening if the bread was shared equally. (04 Marks)

24. In the triangle UVW below, line UY and WX are perpendicular to VW and UV respectively. UV = 20cm, VW = 32cm and WX = 8cm.



(a)     Workout the area of the triangle UVW. (02 Marks)

(b)     Find the length UY. (03 Marks)

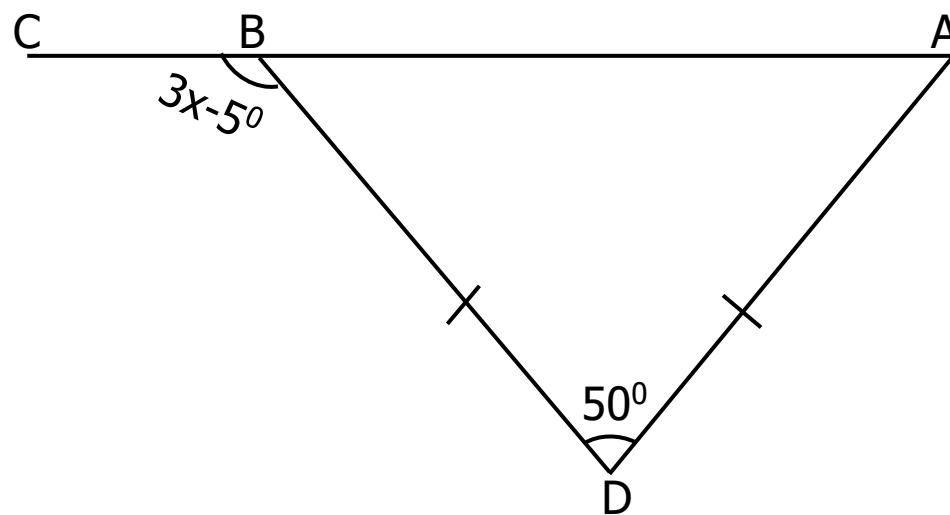


25. (a)     Solve the equation:  $\frac{2}{3}a - 6 = 4$ . (02 Marks)



- (b) Antonio is twice the age of Alicia. The sum of their age is 21 years.  
How old is Antonio? (02 Marks)

26. In the diagram below, ABC is a straight line. ABD is an isosceles triangle, Angle BDA =  $50^\circ$  while angle CBD =  $3x - 5^\circ$ . Study the diagram and use it to answer the questions that follow.



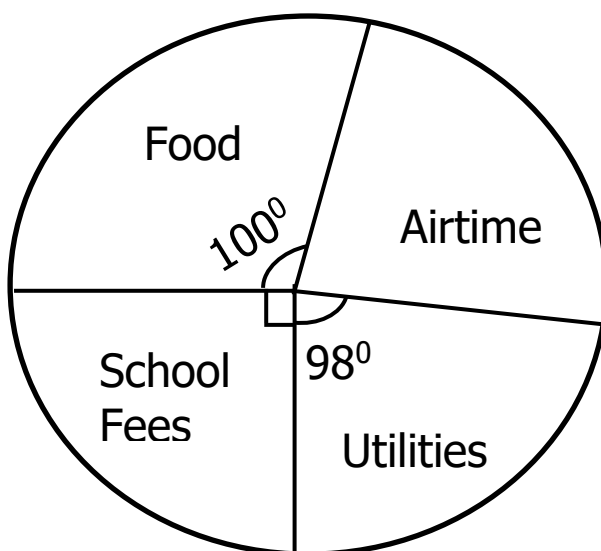
- (a) What is the size of angle BAD? (02 Marks)
- (b) Find the value of x. (03 Marks)



27. (a) Using a ruler, a pencil and a pair of compasses only, construct a triangle RST in which  $RS = 7\text{cm}$ , angle  $RST = 45^\circ$  and  $ST = 6\text{cm}$ .  
(04 Marks)

- (b) Drop a perpendicular line from S to meet line RS at Q. (01 Mark)

28. The Pie-Chart below shows how Mr.Ssempafu spends his Sh.48,000 daily earning on different home necessities. Study it carefully and answer the questions that follow.



- (a) Find the percentage of his daily earning which Mr.Ssempafu spends on airtime.  
(04 Marks)

- (b) Calculate the amount of money which Mr.Ssempafu sets aside for school fees. (02 Marks)

29. Ms.Claire went shopping with Sh.50,000. She bought the items shown in the table below and she was given a change of Sh.19,500. Complete the table correctly. (05 Marks)

Quantity of the item	Unit Cost	Total Cost
3 litres of milk	Sh.1,500	Sh. ....
..... Tablets of bathing soap	Sh.3,500	Sh.14,000
$2\frac{1}{2}$ kg of rice	Sh. ....	Sh. ....
TOTAL EXPENDITURE		Sh. ....


30. In mid-term three examinations at Apex primary school, 10 pupils of Primary Six registered the performance below in the English paper; Six pupils scored 50 marks, Three pupils scored **k** marks and One pupil scored 40 marks. The average score of all the pupils was 52. Find the value of **k**. (04 Marks)

31. A motorist travelled from Town L to Town M at a speed of 75km/h for 2 hours. The motorist stopped for one hour at Town M to withdraw money from the bank. He then resumed his journey to Town N a distance of 90km for 3 hours.

(a) Calculate the total distance covered by the motorist from Town L to Town N. (03 Marks)

(b) At what speed was the motorist travelling from the bank to Town N? (02 Marks)

32. In a certain month, Uganda received tourists from three countries; USA, United Kingdom and UAE in the ratio 6:4:2 respectively. If there were 60 tourists received from United Kingdom, find the total number of tourists who visited Uganda from the three countries. (04 Marks)





SURREKEY EXAMINATIONS BOARD  
PRIMARY SIX PROMOTIONAL EXAMINATIONS  
2025

INTEGRATED SCIENCE

*Time Allowed: 2 hours 15 minutes*

Admission No.						Personal No.		

**Pupil's Name:** .....

**Pupil's Signature:** .....

**School Name:** .....

**District Name:** .....

**Read the following instructions carefully:**

1. Do not forget to write your **school** or **district name** on the paper.
2. This paper has two sections: **A** and **B**. Section **A** has **40** questions and section **B** has **15** questions. The paper has **12** printed pages.
3. Answer **all** questions. **All** working for both sections **A** and **B** must be shown in the spaces provided.
4. **All** answers **must** be written using a **blue** or **black** ball point pen or ink. Any work written in pencil will **not** be marked.
5. Unnecessary **changes** in your work and handwriting that cannot be read easily may lead to **loss of marks**.
6. Do not fill anything in the table indicated: **"For Examiners' use only"** and boxes inside the question paper.

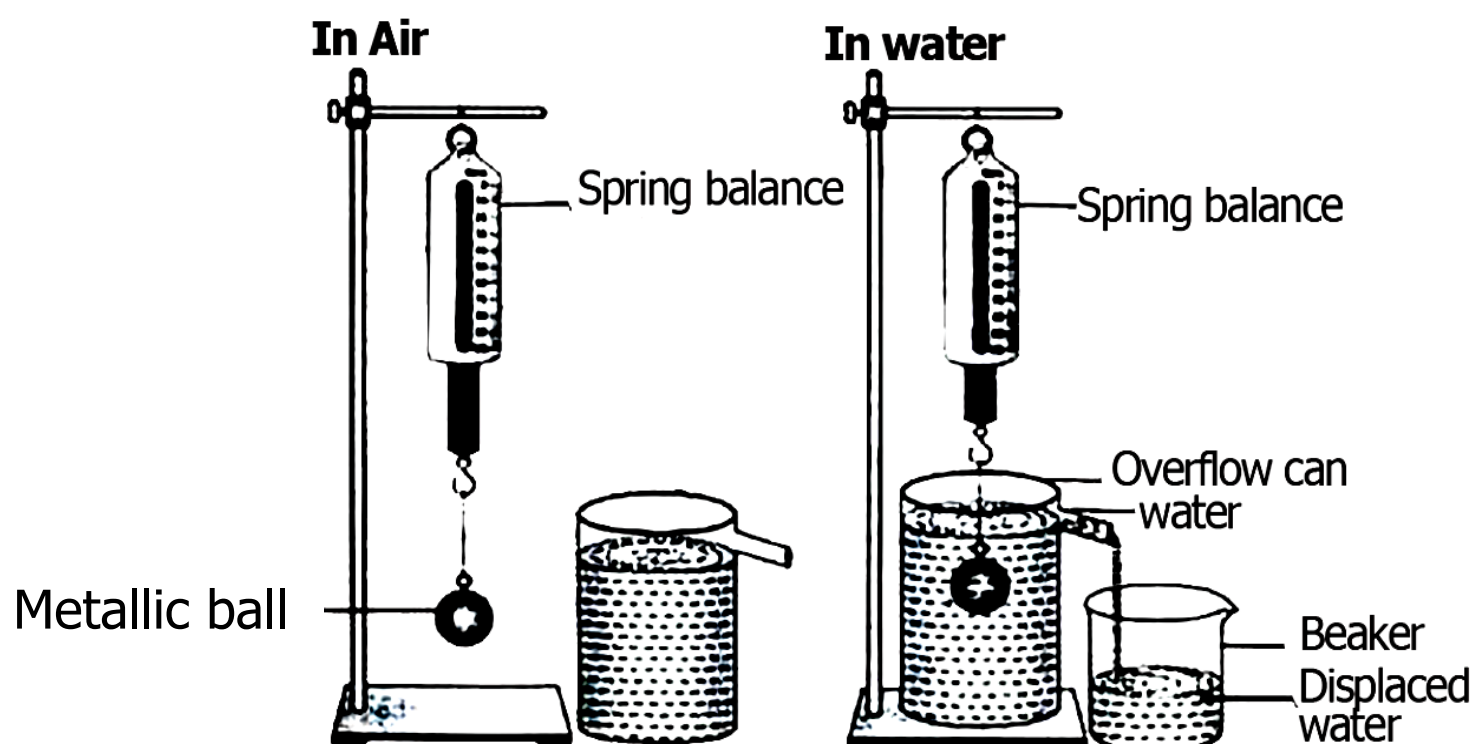
FOR EXAMINERS' USE ONLY		
Qn. No.	MARKS	EXR'S NO.
1 – 10		
11 – 20		
21 – 30		
31 – 40		
41 – 43		
44 – 46		
47 – 49		
50 – 52		
53 – 55		
TOTAL		

## SECTION A: 40 MARKS

Questions **1** to **40** carry **one mark** each

1. Name the part of the bean seed that stores food.  
.....
2. State any **one** characteristic of worker bees.  
.....
3. Give any **one** advantage of breastfeeding to a mother.  
.....
4. Give any **one** way in which melting is important to people.  
.....
5. Mention any **one** way in which you can care for your reproductive system.  
.....


In the diagram below, a solid was measured in air and in water. Study and use it to answer questions **6** and **7**.



6. Identify the medium in which the solid weighs less.  
.....
7. Give the reason to support your answer in number **6** above.  
.....
8. State any **one** in which ringworm infection can be controlled among school children.  
.....

9. Name the part of the thermos flask that prevents heat loss by radiation.  
.....
10. State any **one** role of the School Health Club can play in the control of malaria in the community.  
.....
11. State the reason why a rat is called a warm-blooded vertebrate. □  
.....
12. Give any **one** effect of smoking to the human lungs.  
.....
13. State any **one** importance of dental health to an individual.  
.....
14. Give any **one** characteristic of cereal crops.  
.....
15. State any **one** way of conserving water as a resource.  
.....

The diagram below shows external parts of a goat. Study it and answer questions **16** and **17**.



16. Name the part marked **Z**.  
.....
17. Give the function of the part marked **Y** to a goat.  
.....
18. State any **one** effect of sunshine in the environment.  
.....

19. Name the eye disease spread by simlium flies to humans.  
.....
20. Write down any **one** safety rule on the road.  
.....
21. State **one** way in which altitude affects the speed of sound.  
.....
22. Give any **one** way of controlling tapeworm infestation in children.  
.....
23. Write down any **one** example of an emotional change in adolescents.  
.....
24. State any **one** way in which sorting clothes is important in cleaning clothes.  
.....



The diagram below shows a bird. Use it to answer the questions **25** and **26**



25. Name the bird shown above.  
.....
26. State any **one** reason why you would classify the bird above under birds of prey.  
.....
27. State any **one** way in which the spread of cholera can be controlled.  
.....
28. Mention any **one** way in which you can identify food that has gone bad.  
.....



29. Give any **one** reason why liquids flow and evaporate.
- .....
30. Apart from debeaking, mention any **one** other way of preventing egg eating in poultry management.
- .....
31. State any **one** use of physical exercises to a pregnant woman.
- .....
32. State the difference between mushrooms and yeast in terms of reproduction.
- .....
- .....
33. Give any **one** way in which ash is important to people.
- .....
34. Name the part of the VIP latrine that holds wastes.
- .....
35. State any **one** reason why the burnt part of the skin is dipped in cold water.
- .....
36. State any **one** way in which heat energy can be conserved at home.
- .....
37. State any **one** natural cause of environmental degradation.
- .....
38. Name any **one** organism that causes rotting.
- .....
39. Give any **one** method used to remove impurities from water.
- .....
40. Name the agent of seed dispersal that scatters poppy seed.
- .....



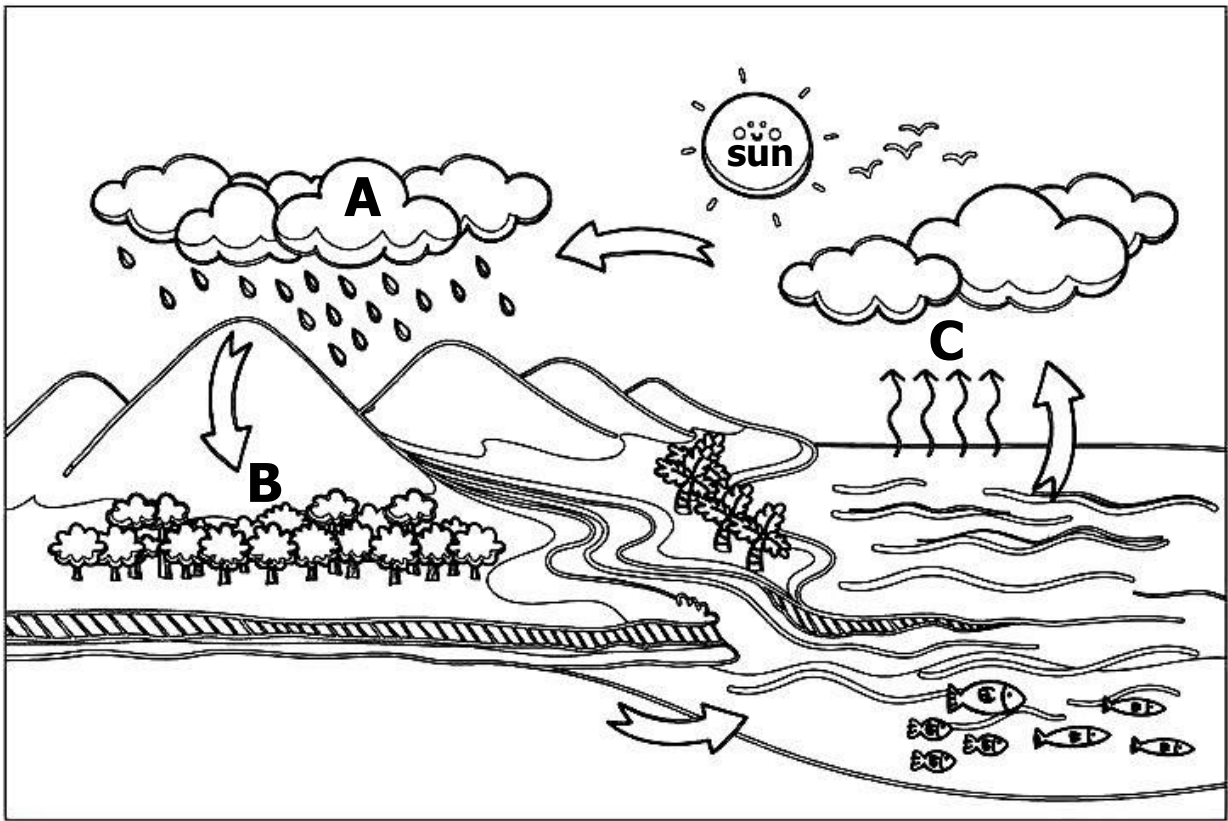
## SECTION B: 60 MARKS

Questions **41** to **55** carry four marks each.

41. (a) Name the group of arthropods to which these animals belong;
- (i) Crab: .....
- (ii) tick : .....
- (b) State any **two** characteristics of arthropods.
- (i) .....
- (ii) .....
42. (a) Give any **one** cause of dehydration in a baby.
- .....
- (b) Explain how dehydration affects the functioning of the baby's body.  
**(02 marks)**
- .....
- .....
- .....
- (c) State any **one** way of treating a dehydrated baby.
- .....
43. (a) Name the **two** exotic breeds of sheep kept for wool production.
- (i) .....
- (ii) .....
- (b) State any **one** way of caring for sheep at home.
- .....
- (c) Give the difference between shearing and docking in sheep management.
- .....
- .....



44. The diagram below shows the way in which rainfall is formed in the environment. Study and use it to answer the questions that follow.



- (a) Name the type of clouds represented by letter **A**.  
.....
- (b) State the processes taking place at **B** and **C**.
  - (i) **B** : .....
  - (ii) **C** : .....
- (c) Give the importance of the **sun** in the above diagram.  
.....

45. (a) Give any **two** advantages of using a modern beehive.
- (i) .....
  - (ii) .....
- (b) Mention any **two** factors to consider when siting a place for a honey bee.
- (i) .....
  - (ii) .....

46. (a) Write down any **two** factors that can make planted seeds fail to germinate.
- (i) .....
  - (ii) .....

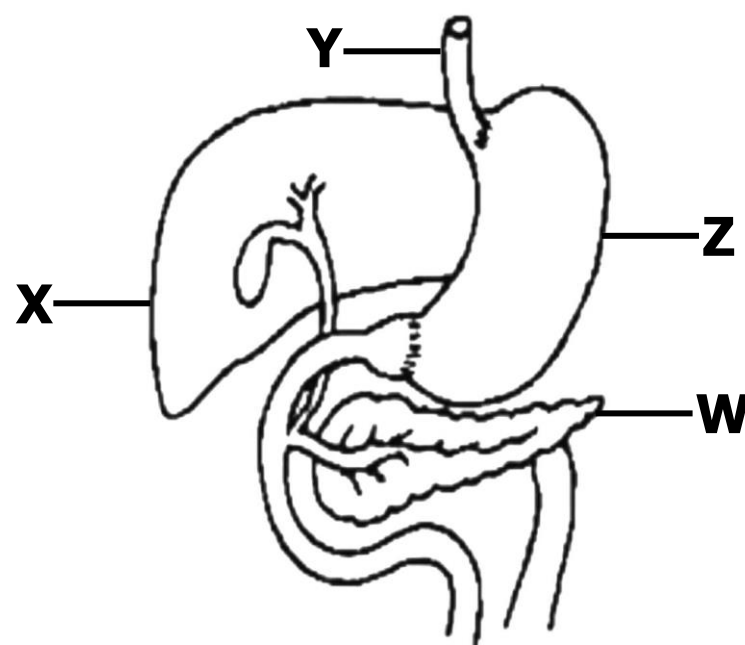
(b) State any **two** ways through which crop pests can be controlled in the garden.

(i) .....

(ii) .....



47. The diagram below shows part of the digestive system. Study and use it to answer the questions that follow.



(a) Name the parts marked **W** and **Y**.

(i) **W** : .....

(ii) **Y** : .....

(b) State the function of the part marked **Z**.

.....

(c) Identify the digestive juice produced by the part marked **X**.

.....

48. (a) Give any **two** ways in drug dependence can affect an individual.

(i) .....

(ii) .....

(b) State any **two** ways in which drug dependence can be avoided in an individual.

(i) .....

(ii) .....

49. (a) Name any **one** organism that makes fresh meat to got bad.  
.....
- (b) Mention any **two** native methods of preserving meat.  
(i) .....  
(ii) .....
- (c) State any **one** reason why people preserve meat.  
.....

50. The table below shows animals in vertebrate group. Study and use it to answer the questions that follow.

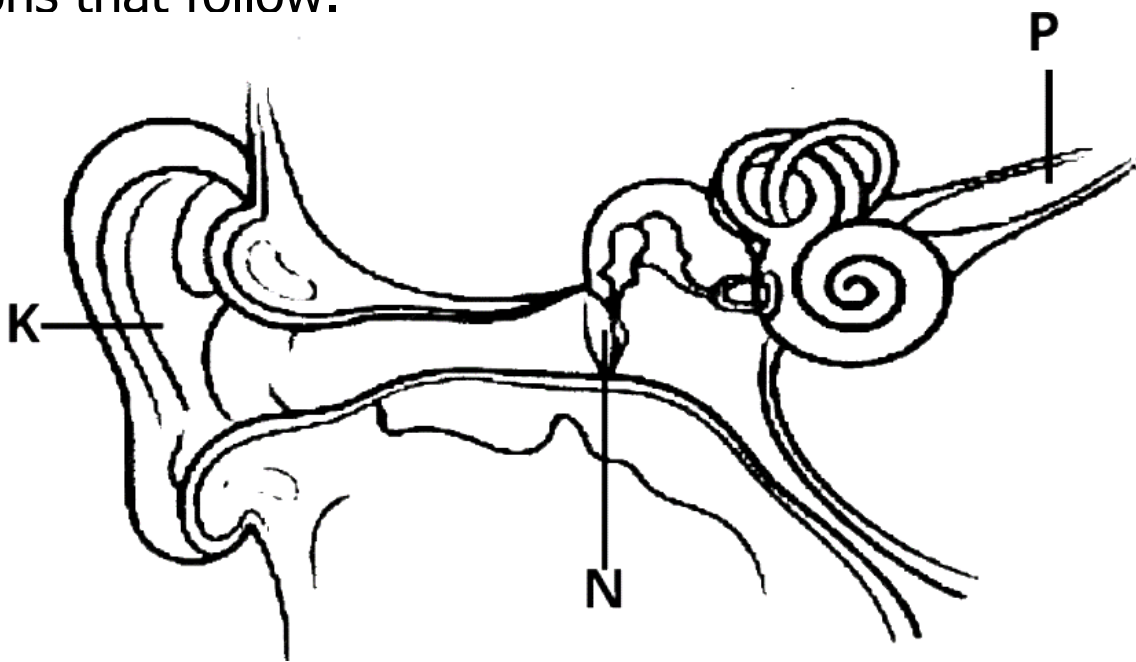
<b>P</b>	<b>Q</b>	<b>R</b>
Toad	Chameleon	Cow
Newt	Snake	Monkey
Frog	Lizard	Rat

- (a) Identify any **one** characteristic common to all animals in the table above.  
.....
- (b) State **one** way in which reproduction of animals in column **P** similar to those in column **Q**.  
.....
- (c) Name the column that has animals with constant body temperature.  
.....
- (d) Give any **one** reason why you would put a tortoise in the column **Q**.  
.....
51. (a) Name the human body organ where;  
(i) Blood filtration occurs .....  
(ii) Blood oxygenation occurs .....
- (b) Give the function of the following components of blood in the body;  
(i) White blood cells .....  
(ii) Blood platelets .....

52. (a) Name any **two** examples of water borne diseases.
- (i) .....
- (ii) .....
- (b) Give any **two** ways in which water borne diseases can be controlled at school.
- (i) .....
- (ii) .....



53. The diagram below shows the human ear. Study and use it to answer the questions that follow.



- (a) Name the parts marked **K** and **N**.
- (i) **K** : .....
- (ii) **N** : .....
- (b) Give the function of the part marked **P**.
- .....
- (c) On the diagram above, label the part used for body balance.
54. (a) Write down any **two** activities that an individual can do to promote personal hygiene.
- (i) .....
- (ii) .....
- (b) State any **two** practices that can be done to promote sanitation at school.
- (i) .....
- (ii) .....

55. At a poultry farm, butterflies move around the bean plant. The farmer grows beans near the chicken houses.

(a) Name the food material butterflies get from the bean plant.

.....

(b) State the benefit of;

(i) a poultry farm to the bean plants.

.....

(ii) Butterflies to bean plants.

.....

(c) Mention any **one** problem that a farmer can face when he releases chickens out of their houses.

.....









SUREKEY EDUCATION SERVICES  
PRIMARY SIX PROMOTIONAL EXAMINATION  
2025

SOCIAL STUDIES WITH RELIGIOUS EDUCATION

*Time Allowed: 2 hours 15 minutes*

School Admission No.						Personal No.		

**Learner's Name:** .....

**Learner's Signature:** .....

**School Name:** .....

**District Name:** .....

**Read the following instructions carefully:**

1. Do not forget to write your **school** or **district name** on the paper.
2. This paper has two sections: **A** and **B**. Section **A** has **40** questions and section **B** has **15** questions. The paper has **12** printed pages.
3. Answer **all** questions. **All** working for both sections **A** and **B** must be shown in the spaces provided.
4. **All** answers **must** be written using a **blue** or **black** ball point pen or ink. Any work written in pencil will **not** be marked.
5. Unnecessary **changes** in your work and handwriting that cannot be read easily may lead to **loss of marks**.
6. Do not fill anything in the table indicated: **"For Examiners' use only"** and boxes inside the question paper.


FOR EXAMINERS' USE ONLY		
Qn. No.	MARKS	EXR'S NO.
1 – 10		
11 – 20		
21 – 30		
31 – 40		
41 – 43		
44 – 46		
47 – 49		
50 – 52		
53 – 55		
TOTAL		

## SECTION A: 40 MARKS


Questions **1** to **40** carry **one mark** each

1. Name the election material where voters store their ballot papers after ticking a candidate of their choice.  
.....
2. State **one** reason why the government provides social services for its citizens.  
.....
3. How does locking of doors and windows at night promote security at home?  
.....
4. Write any **one** reason why a Traditional African naming ceremony is called a social function.  
.....
5. State **one** way in which the work of a Veterinary doctor is different from that of a Mid-wife in the community.  
.....  
.....
6. How are shadows important in our daily lives?  
.....
7. Give **one** reason why trespassing in the school environment should always be discouraged.  
.....
8. State any **one** advantage of educating people about changes in the weather patterns of an area.  
.....
9. In which **one** way did the sketch maps drawn by early explorers ease the work of colonialists in East Africa?  
.....
10. Write any **one** reason why the people of pre-colonial Uganda organized themselves politically.  
.....
11. State any **one** reason why schools enforce rules and regulations.  
.....



12. Name any **one** example of a cultural custom that should be observed in society.  
.....
13. State any **one** way in which the Local Council One (LC1) Vice-Chairperson can help to promote the welfare of children in the locality.  
.....
14. Write any **one** reason why the Windward side of a mountain has thick vegetation cover.  
.....
15. Mention any **one** way in which used straws in the environment can be put into proper use.  
.....
16. Give any **one** reason why it was difficult to bring Karamoja sub-region under British rule.  
.....
17. Give any **one** cause of increasing rate of land conflicts in Uganda.  
.....
18. How is the formation of mount Rwenzori in Uganda similar to that of Mount Usambara in Tanzania?  
.....
19. In which **one** way does insecurity negatively affect development of a country?  
.....
20. State any **one** way HIV/AIDS leads to increase in government expenditure.  
.....
21. Why should the people of Uganda pay their taxes promptly?   
.....
22. Give **one** reason why some areas in East Africa are cooler than others.  
.....
23. Give any **one** bad fishing method discouraged on water bodies of Uganda.  
.....
24. Mention any **one** reason why people in slum areas live under poor conditions.  
.....

25. Write any **one** type of weather that supports winnowing of grains.  
.....
26. State any **one** way in which economic co-operation has promoted trade among member states of the East African Community (EAC).  
.....
27. What is the meaning of the road sign below?  



  
.....
28. Name the East African country where the Akidas and Jumbes were used to collect taxes on behalf of colonialists.  
.....
29. Give any **one** reason why schools install lightning conductors on their tall buildings.  
.....
30. State any **one** challenge faced by traders as a result of lack of a common language.  
.....
31. Why are there more murram roads than tarmac roads in Uganda?  
.....
32. Draw and name any **one** product from clay in the space provided below.  
  
  
  
  
  
  
  
  
  
.....
33. Name any **one** activity done by some children in the community that has led to abuse of their rights.  
.....

34. State any **one** reason why the Uganda Prisons Service keeps law breakers in a safe custody.
- .....
35. Write any **one** reason why it is not good for employees to bribe their employers in order to get an employment opportunity.
- .....

For each of the questions **36** to **40**, answer **Either** the Christian **OR** Islamic questions but **not** both. No **marks** will be awarded to a learner who attempts both alternatives in **a particular number**.

36. **EITHER:**  
Name the term that refers the day when Apostles Jesus Christ received the Holy Spirit.
- .....
- OR:**  
Name the term that refers to the day when Prophet Muhammad (PBUH) went to heaven from Jerusalem.
- .....
37. **EITHER:**  
In which **one** way do Christians show that they love and follow the teachings of Jesus Christ today?
- .....
- OR:**  
In which **one** way do Muslims show that they love and follow the teaching of Prophet Muhammad (PBUH) today?
- .....
38. **EITHER:**  
State any **one** practice that helps a Christian believer to overcome temptation.
- .....
- OR:**  
State any **one** practice that helps a Muslim believer to overcome temptation.
- .....
39. **EITHER:**  
Give any **one** way Christians remember their dead.
- .....
- OR:**  
Give any **one** way Muslims remember their dead.
- .....

40. **EITHER:**  
Why did King Herod want to kill baby Jesus?  
.....
- OR:**  
Why did the Pagans of Mecca want to kill Prophet Muhammad (PBUH)?  
.....



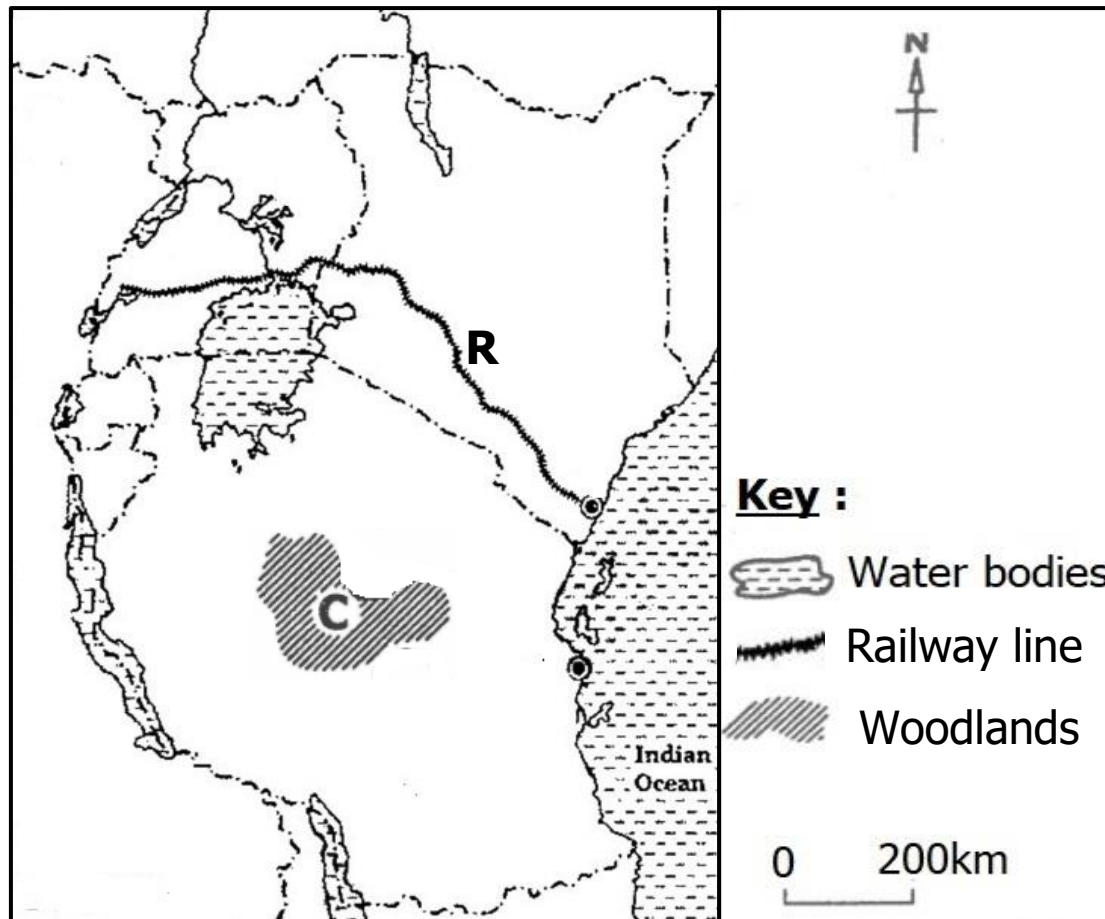
**SECTION B: 60 MARKS**

Questions **41** to **55** carry **four** marks each.

41. (a) In which **one** way does irrigation farming help to promote food security in an area?  
.....
- (b) State any **two** ways in which the use of machines has led to development of modern agriculture in East Africa.  
(i) .....  
(ii) .....
- (c) Which type of industries depend on agricultural produce as their raw materials?  
.....
42. Mr. Okitoi rears a large number of cattle on a small piece of land.  
(a) Name the negative human activity practiced by Mr. Okitoi.  
.....
- (b) Mention any **two** ways Mr. Okitoi benefits from rearing a large number of cattle.  
(i) .....  
(ii) .....
- (c) How does the negative human activity you have named in (a) above affect the environment.  
.....
43. (a) State any **two** ways in which colonialists reacted against nationalists who demanded for the independence in the countries of East Africa.  
(i) .....  
(ii) .....

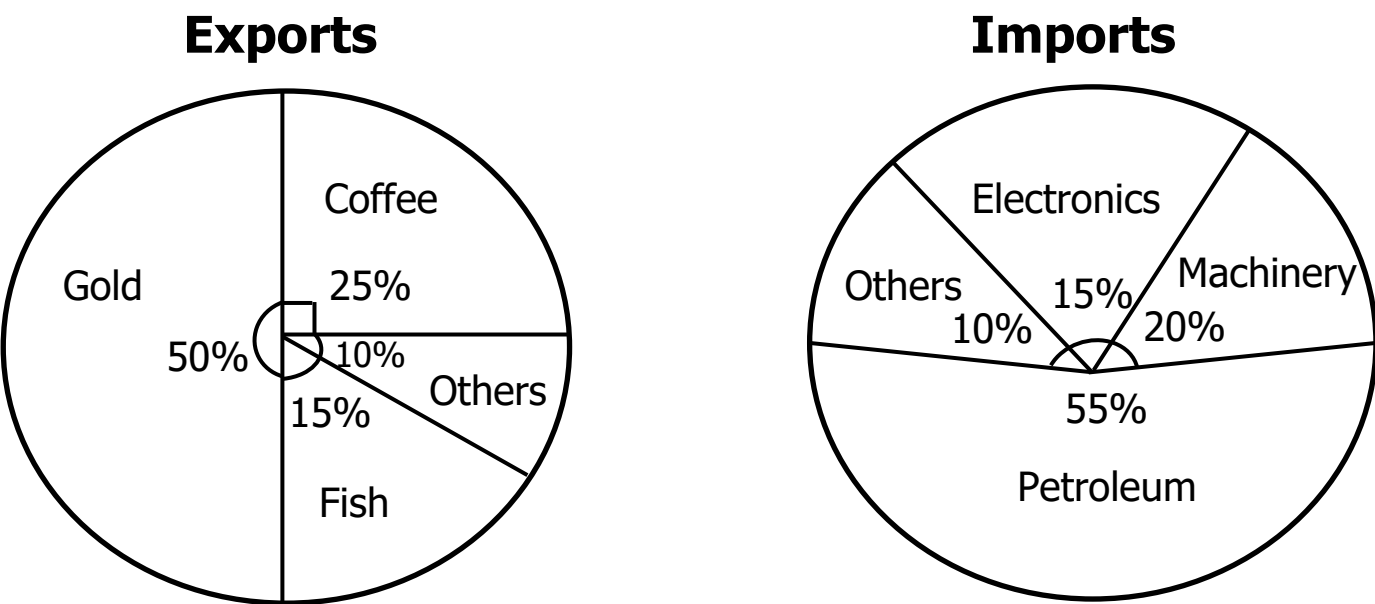
- (b) Write any **two** problems faced by political parties during the demand for the independence of their countries.
- (i) .....
- (ii) .....

44. Study the sketch map of East Africa below and use it to answer the questions that follow.



- (a) Name the woodlands marked **C**.
- .....
- (b) State any **one** reason why area marked **C** are not suitable for the establishment of a ranch farm.
- .....
- (c) Which group of foreigners constructed the railway line marked **R**.
- .....
- (d) Why were colonialists interested in the construction of railway line **R**?
- .....
45. (a) State any **two** ways in which the availability of Hydro-electricity promotes industrial development in an area.
- (i) .....
- (ii) .....
- (c) Write any **two** ways people who work in an industry can be motivated to work and perform well in their duties.
- (i) .....
- (ii) .....

46. The Pie charts below show Uganda’s major exports and imports to overseas countries. Use it to answer Questions that follow.



- (a) State the major difference between Uganda’s **exports** and **imports**.
- (b) Name Uganda’s major;

(i) Export earner :

(ii) Import expenditure :
- (c) How do exports enable the government to provide social services to her citizens?



47. (a) Mention any **one** important lesson Ugandans can learn from the first stanza of the Uganda National Anthem.
- (b) All three stanzas of the Uganda National Anthem are sung on some official functions followed by other official recognized anthems.

(i) Give **one** reason for following the above regulation.

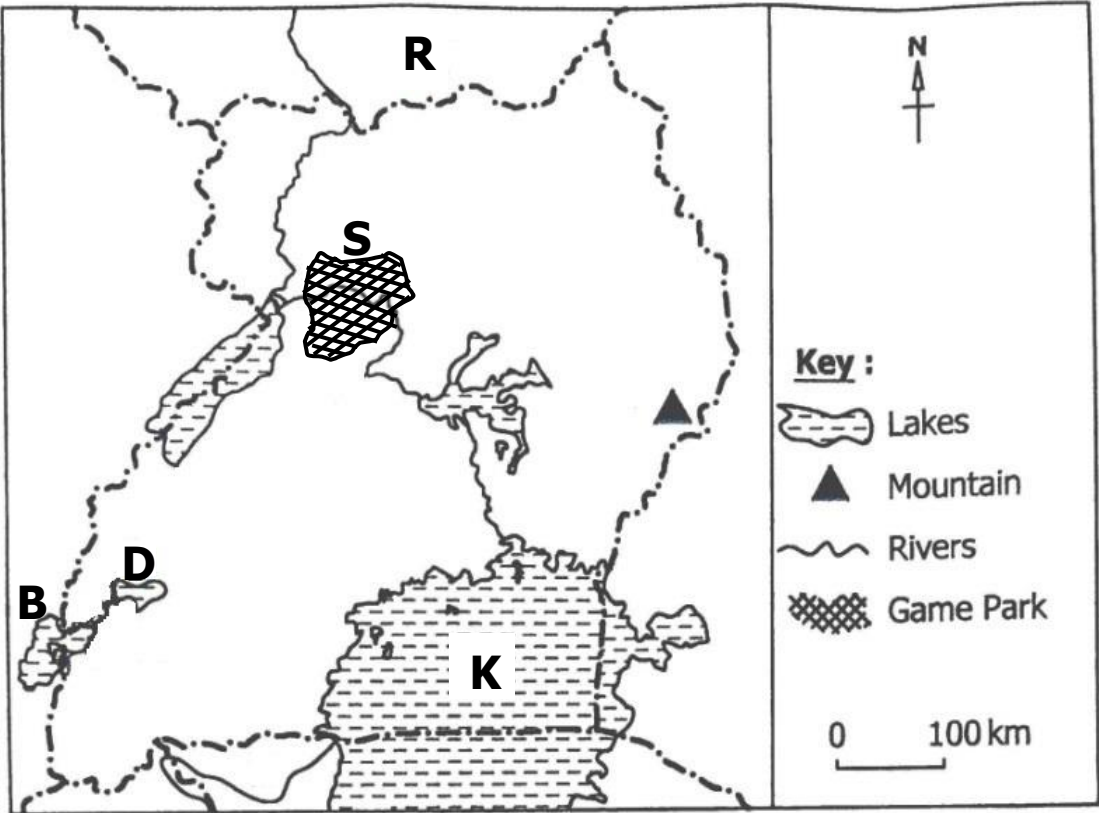
(ii) Name the spirit promoted among children by singing the Uganda national anthem.

(iii) Mention any **one** other official recognized anthem sung on official functions apart from the Uganda National Anthem.
- 8



48. (a) Give any **two** animals reared to provide transport service in the community.
- (i) .....
- (ii) .....
- (b) State any **two** reasons why railway transport is not well developed in most parts of East Africa.
- (i) .....
- (ii) .....

49. Study the sketch map of Uganda below and use it to answer the questions that follow.



- (a) Name the national game park marked **S**.
- .....
- (b) How is physical feature **B** connected to **D**?
- .....
- (c) In which **one** way does lake marked **K** promote inter-territorial trade in East Africa?
- .....
- (d) How did country marked **R** become landlocked?
- .....
50. (a) State any **two** taxes that were introduced by colonial governments in East Africa.
- (i) .....
- (ii) .....

- (b) Write any **two** ways in which the people of East Africa showed that they were not happy with colonial policy of taxation.
- (i) .....
- (ii) .....

For each of the questions **51** to **55**, answer **EITHER** the Christian **OR** Islamic questions but **not** both. **No mark** will be awarded to a learner who attempts both alternatives in **a particular number**.

51. **EITHER:**

- (a) Write any **two** commandments that help to strengthen Christian relationship with God.
- (i) .....
- (ii) .....
- (b) Mention any **two** ways in which the Ten Commandments of God help to shape morals among Christians.
- (i) .....
- (ii) .....

**OR:**

- (a) Write any **two** of the five pillars of Islam that help to strengthen Muslim relationship with Allah.
- (i) .....
- (ii) .....
- (b) Mention any **two** ways in which the five pillars of Islam help to shape morals among Muslims.
- (i) .....
- (ii) .....

52. **EITHER:**

- (a) Give any **two** contributions a Christian child can make to help the Church develop.
- (i) .....
- (ii) .....
- (b) Write the meaning of each of the following terms as used in Christianity.
- (i) Fornication .....
- .....
- (ii) Adultery. ....
- .....

**OR:**

(a) Give any **two** contributions a Muslim child can make towards the development of Islam.

(i) .....

(ii) .....

(b) Write the meaning of each of the following terms as used in Islam.

(i) Fornication .....

.....

(ii) Adultery. ....

.....

53.

**EITHER:**



(a) Give any **two** reasons why some Christian's prayers are not answered by God.

(i) .....

(ii) .....

(b) Write any **two** ways prayer can help to change the life of a Christian.

(i) .....

(ii) .....

**OR:**

(a) Give any **two** reasons why some Muslim's prayers are not answered by Allah.

(i) .....

(ii) .....

(b) Write any **two** ways prayer can help to change the life of a Muslim.

(i) .....

(ii) .....

54.

**EITHER:**

(a) State any **two** ways in which Jesus promoted the welfare of the needy on earth.

(i) .....

(ii) .....

(b) Write any **two** groups of needy people Jesus showed care and compassion while on earth.

(i) .....

(ii) .....

**OR:**

- (a) State any **two** ways in which Prophet Muhammad (PBUH) promoted the welfare of the needy during his time.
- (i) .....
- (ii) .....
- (b) Write any **two** groups of needy people Prophet Muhammad (P.BU.H) showed care and compassion while on earth.
- (i) .....
- (ii) .....

55. **EITHER:**

"At least, here is one of my own kind, bone from my bone and flesh from my flesh. Woman is her name because she was taken out of man" (**Genesis 2:23**)

- (a) Who is talking in the above Quotation?
- .....
- (b) Who is being referred to as "**Woman**" according to the Quotation?
- .....
- (c) What does the Bible teach about marriage?
- .....
- (d) Why did God command man and woman not to eat the forbidden fruit in the Garden of Eden?
- .....

**OR:**

"O mankind, fear your Lord, who created you from one soul and created its mate and dispersed from both of them many men and women".

**(Surat An-Nisa 4:1)**

- (a) Name the man from which many men and women were dispersed from according to the Quotation.
- .....
- (b) Who is the mate being talked about in the Quotation?
- .....
- (c) What does the Qur'an teach about marriage?
- .....
- (d) Why did Allah command man and his mate not to eat the fruit from the forbidden tree in Paradise?
- .....





SUREKEY EDUCATION SERVICES  
**PRIMARY SIX PROMOTIONAL EXAMINATION**  
**2025**  
ENGLISH

*Time Allowed: 2 hours 15 minutes*

Admission No.						Personal No.		

**Learner's Name:** .....

**Learner's Signature:** .....

**School name:** .....

**District :** .....

**Read the following instructions carefully:**

1. Do not forget to write your **school name** or **district name** on this paper.
2. This paper has two sections: **A** and **B**. Section **A** has **50** questions and section **B** has **5** questions. The paper has **12 printed pages** altogether.
3. Answer **all** the questions. **All** answers to both sections **A** and **B** must be written in the spaces provided.
4. All answers **must** be written using a **blue** or **black** ball point pen or ink. Any work written in pencil will **not** be marked.
5. Unnecessary **changes** in your work and handwriting that cannot be read easily may lead to **loss of marks**.
6. Do not fill anything in the table indicated: **"FOR EXAMINERS' USE ONLY"** and boxes inside the question paper.

FOR EXAMINERS' USE ONLY		
QN.NO.	MARKS	EXR'S NO.
1 - 10		
11 - 20		
21 - 30		
31 - 40		
41 - 50		
51		
52		
53		
54		
55		
TOTAL		

## SECTION A: 50 MARKS

Questions **1** to **50** carry one mark each

### Subsection I

For each of the questions **1** to **5**, fill in the blank space with a **suitable word** to complete the sentences.

1. Michael and his brother Andrew resemble each .....
2. Whenever it is cold weather, I .....my sweater.
3. We shall not excel in this exam ..... we read the questions carefully.
4. Is that the shade .....which you sought shelter?
5. Ivan enjoys eating ..... so does Markarios.

For each of the questions **6** to **15**, use the **correct form** of the word given in brackets to complete the sentences.

6. She felt ..... while in church. (sleep)
  7. The school choir had hardly .....when the rain started. (sing)
  8. Our brother took the front ..... in the plane while going abroad. (sit)
  9. Clare has .....sneaked into the police cell. (stealthy)
  10. That metallic wire mesh will .....our farm fence. (strong)
- 
11. The .....of floods in the city nowadays is due to poor drainage. (occur)
  12. It is more .....to knit sweaters than to rear animals. (enjoy)
  13. Are those ..... new or old ? (handkerchief)
  14. Having .....my uniform, the tailor gave it to me. (sew)
  15. We ..... will tidy our bedrooms after waking. (our)

For each of the questions **16** and **17**, use each of the given words in a sentence to **show** that you know the **difference in their meaning**.

16. warm .....

17. worm .....

For questions **18** to **20**, rewrite the sentences giving a **single word for the underlined words**.

18. This soup is having a lot of water.

19. Your cow shelter is smelly.

20. My mother's transport money is missing from the bag.

For questions **21** and **22**, write the short forms in their **full forms**.



21. aka .....

22. govt .....

For questions **23** and **24**, rearrange the words to form **meaningful sentences**.

23. crossing vigilant the road Be while.

24. have I or Either my mother smart been.

For questions **25** and **26**, rearrange the words **in alphabetical order**.

25. mosquito, basin, sting, disease

26. burn, brain, bandage, brooms

For questions **27** and **28**, write the sentences giving the **plural form** of the

27. louse .....

28. thief .....

For each of the questions **29** and **30**, rewrite the sentence giving the **opposite** of the **underlined words**.

29. Our football team captain is a very fit player.  
.....

30. Loosening the nuts, the mechanics hurt himself.  
.....

**Subsection II**



For each of the questions **31** to **50**, rewrite the sentences as **instructed** in brackets.

31. Yes, I have bought some bread for breakfast.  
(Rewrite the sentence beginning: Have.....?)  
.....  
.....

32. Maya was more interested in singing than in dancing.  
(Rewrite the sentence using: .....more than.....)  
.....  
.....

33. "Our teacher has been present today," said the pupils.  
(Rewrite the sentence using: .....said that.....)  
.....  
.....

34. Both the goatherd and the shepherd are intelligent boys.  
(Rewrite the sentence beginning: Either.....or.....)  
.....  
.....

35. Mark will score aggregate four if he revises hard.  
(Rewrite the sentence using: .....unless.....)  
.....  
.....

36. That electrician is skilled, but he does not reconnect our electricity.  
(Rewrite the sentence using: .....although.....)  
.....  
.....



37. Drawing cartoons is not an easy task.  
(Rewrite the sentence beginning: It.....)
- .....
38. Drogba does not sweep the house . Drogba does not sweep the compound.  
(Rewrite as **one** sentence using: .....neither.....nor.....)
- .....
39. Have you participated in the debate today?  
(Rewrite the sentence using.....taken part.....)
- .....
40. Marvin, is Marian your aunt?  
(Rewrite the sentence ending: .....nephew?)
- .....
41. Immediately the hunter saw the antelope, he ran after it.  
(Rewrite the sentence beginning: Having.....)
- .....
- .....
42. They have collected their examination results all by themselves.  
(Rewrite the sentence ending: .....himself.)
- .....
- .....
43. Mr. Dumba rears cows. He has just graduated at the university.  
(Rewrite the sentence using: .....who.....)
- .....
- .....
44. I am in primary seven, am I?  
(Rewrite the sentence ending: ..... aren't I?)
- .....
45. The guest bought me a shirt. It was pink and made in China.  
(Join as **one** sentence without using: 'and', 'which', 'that'.)
- .....
46. I wonder why Andey has escaped from school.  
(Rewrite the sentence using: .....needn't.....)
- .....



47. We may travel overseas during holiday.  
(Rewrite the sentence using: .....likely.....)  
.....
48. The chairperson will declare the results for elections today.  
(Rewrite the sentence using: .....going to.....)  
.....
49. When Precious ate sweet food. Her teeth became ill.  
(Rewrite the sentence beginning: The ....., the .....)  
.....
50. The driver drove very fast. He wanted to reach the party on time.  
(Rewrite the sentence using: .....so as .....)  
.....

## SECTION B: 50 MARKS



Questions **51** to **55** carry ten marks each.

51. Read the passage below and answer the questions about it carefully and **in full sentences**.

In the middle of every second term at our mighty school, St. Peter and Ann Academy , we hold an art and crafts exhibition. During the exhibition, every class has got an item to present and exhibit their talents in art and crafts right from P1 to P7.

The teachers of different classes take the responsibility of guiding their pupils on how to make different beautiful articles form local materials. The local materials are brought by the pupils themselves to practice and protect the skills before the final articles for the exhibition are made. The pupils make items like painting pictures, human models using local materials, toy cars, toy-bicycles, etc. that are beautifully designed.

Before the day of the exhibition, the pupils' parents are invited to come an discover how talented and skillful their children are.

On this day, different other guests are invited besides the parents of the pupils. These guests pick interest in the pupils' articles, and some decide to buy and take them to their homes for their beauty.

Usually, the best articles are singled out and later taken to the school gallery for remembrance. The pupils who make such outstanding articles get prizes from the head teacher.

- (a) When does the writer's school hold an art and craft exhibition?  
.....  
.....
- (b) How many classes participate in the art and craft exhibition?  
.....  
.....
- (c) What is the role of the teachers before the exhibition?  
.....  
.....
- (d) How do the pupils support the making of the articles for the exhibition?  
.....  
.....
- (e) Write **one** item the pupils present during the exhibition.  
.....
- (f) According to the passage, why are the pupils' parents invited for the exhibition?  
.....  
.....
- (g) What shows that some guests like the pupils' articles?  
.....  
.....
- (h) Where are the best articles kept in the school?  
.....
- (i) How does the head teacher thank the pupils who make the outstanding articles?  
.....  
.....
- (j) Suggest a suitable title for the passage.  
.....

52. During the check on progress day on 8/10/202 at El Shafik Junior School, a certain parent made a report about his son’s academic progress. Study the table below carefully and answer the questions that follow.

Report on Academic Progress	
Name of pupil: Aiman Amon	Class: P5 Apple
Date: 8-10-2025	
Subject	remarks
ENGLISH	Great improvement realized. The challenge of spellings has stopped. More practice for the best.
MATHS	No improvement. The scores are still very low. Visit the Mathematics teacher regularly for help.
SCIENCE	The scores are good. Aim at a Distinction One. Improve your diagram work.
SOCIALSTUDIES	The best done of all. Keep up the revision to maintain this great performance.
Parent’s name: Kamuntu Dickson (Father)	

- a) What is the table above about?  
.....  
.....
- b) When was this report made?  
.....
- c) Why did Aiman Amon have a poor performance in English?  
.....  
.....
- d) What advise did Aiman Amon’s father give him to improve his scores in mathematics?  
.....  
.....
- e) Why should Aiman Amon improve his diagram work?  
.....  
.....
- f) What is Aiman’s best subject?  
.....

g) How will revision in social studies help Aiman Amon?

.....  
.....

h) To which school does Aiman Amon go?

.....

i) Who made this report above?

.....

j) How should Aiman Amon get the best marks in English?

.....  
.....



53. Read the poem below and answer the questions about it **in full sentences**.

Look no further, dear learner  
Whenever, you want to look up words  
Just a few steps away to the library  
Within no time, I am in your hands

Word usage, I have with me  
Pronunciation, your master in that is me  
Spellings only right ones I contain  
Unless you are lazy, at your disposal I am

To teachers, I am the saviour  
Relieving them of stress for word bank  
That make their lessons successful  
That bring about excellence of their learners

### **Will Fish**


(a) What is the poem about?

.....  
.....

(b) To whom is the speaker talking in the first stanza?

.....  
.....

- (c) When do learners use the speaker?  
.....  
.....
- (d) According to the poem, where is the speaker kept?  
.....  
.....
- (e) Which students don't use the speaker?  
.....  
.....
- (f) How does the speaker help teachers?  
.....  
.....
- (g) What happens when lessons are successful, according to the poem?  
.....  
.....
- (h) Why do learners need the speaker, according to stanza two?  
.....  
.....
- (i) How stanzas are in the poem?  
.....
- (j) Who has written the poem?  
.....





55. When Dad felt hungry last Saturday, he went to Delicious Food Hub our home to eat lunch. He had a conversation with the waitress he found there. What the waitress said is given. Complete the conversation with Dad's words.

Waitress : Welcome to Delicious Food Hub,sir.

Dad : .....

Waitress : How may we help you, sir?

Dad : .....

Waitress : Yes, lunch is still available.

Dad: .....

Waitress : The menu is right there in front of you.

Dad : .....

Waitress : Matooke with goat meat and a glassful of juice cost shs. 15,000/=

Dad : .....

Waitress : No, we can't reduce. The prices are already fixed.

Dad : .....

Waitress : The most delicious is fresh with sweet potatoes according to me.

Dad : .....

Waitress : Not really ! It is not expensive at all.

Dad : .....

Waitress : Yes, the customers order food according to their pockets.

Dad : .....

Waitress : Hahaha..! That is true. Our food is always very delicious.

Dad : .....

Waitress : The way we prepare it makes it delicious.

Dad : Don't worry, let eat and then I will confirm.

