

UPTA-UGANDA PRIVATE TEACHERS ASSOCIATION
PRIMARY TEACHERS INTERVIEW, 2025
Tel. 0751 94 8000 / 0785 83 38 38

SOCIAL STUDIES WITH RELIGIOUS EDUCATION

Time Allowed: 2 hours 15 minutes

Tel								

Teacher's Name:

Teacher's Signature:

FOR EXAMINER'S USE ONLY

Read the following instructions carefully:

1. The paper has **two** sections: **A** and **B**
2. Section **A** has 40 questions (40 marks)
3. Section **B** has 15 questions (60 marks)
4. Answer **ALL** questions. All answers to both Sections A and B must be written in the spaces provided.
5. All answers must be written using **ONLY blue** point pen in diagrams drawn in pencil.
6. Unnecessary crossing of work may lead to loss of marks.
7. Any handwriting that cannot be easily read may lead to loss of marks.
8. Do **not** fill anything in the boxes indicated;

Qn. No	MARK
1 – 10	
11 – 20	
21 – 30	
31 – 40	
41 – 43	
44 – 46	
47 – 49	
50 – 52	
53 – 55	
TOTAL	

SECTION A: 40 MARKS

Questions from 1 to 40 carry **one mark** each.

1. How can a citizen by registration lose his / her citizenship?

2. What title is given to the head of prisons in Uganda?

3. Which section of the Uganda Police force is responsible for controlling traffic flow?

4. Which tribal group settles on the slopes of Mount. Masaba?

5. How was a plateau formed?


6. Why was early man referred to as a nut cracker?

7. Write UNHCR in full.

8. Where was the first Christian mission station built in Uganda?

9. Name the imaginary line on the globe marked $66\frac{1}{2}^{\circ}$ South.

10. How does a community benefit a nearby school?


11. Name the map symbol below.


12. Why do crop farmers in hilly areas control soil erosion?

13. It is 11:00p.m at Prime Meridian. What will be the time in Mukono district in Uganda?

14. How did I.K Musaazi promote agriculture in Uganda?

15. Name the smallest inland country in Africa.



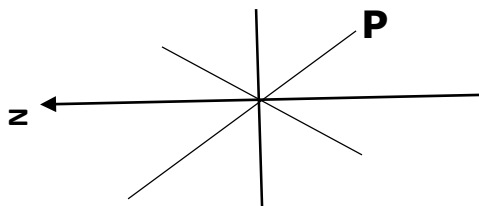
16. How did the natives in Uganda help missionaries to ease the spread of Christianity?

17. Give any one how the British reacted towards the Mau Mau rebellion in Kenya.

18. How is Fort Jesus socially important to the Kenyan?

19. Which organ of AU is responsible for resolving conflicts among member states?

20. Name the compass direction marked **P**



21. Who was the first executive president of Uganda?

22. Name the prevailing winds which helped the Arab traders to sail their dhows to and from the coast of East Africa.

23. How did exploration work lead to colonization of Africa?

24. Name the regional economic community where Uganda and South Africa are members.


25. Apart from Lake Katwe, name any one crater lake in Uganda.

26. Give any one method used by the colonialist to weaken the African nationalists.

27. Name any one non-landlocked in the Horn of Africa.

28. Write down one way smuggling can affect the health sector of Uganda.

29. Why is tourism called an invisible export.



30. The arrow of a wind vane at Preparatory Junior school was pointing to North. From which direction was wind blowing?
-
31. Apart from helping in rain formation, how else does vegetation influence the climate of an area?
-
32. Give one social contribution of the Bachwezi to this modern Uganda.
-
33. Why did John Speke make the second journey to Uganda with James Grant?
-
34. Who is the current chairman of NAM?
-
35. What name is given to the peace keeping force of the African Union?
-

For each of the questions **36 to 40**, answer **EITHER** the Christian **OR** Islamic question but **NOT** both. **No marks** will be awarded to a candidate who will attempt both alternatives in **a particular number**.

36. **EITHER**

How did God punish Cain for killing his brother Abel?

OR

How did Allah punish Cain for killing his brother Abel?

37. **EITHER**


Why did God give Moses a spokesman when He sent him to rescue the Israelites from slavery?

OR

Why did Allah give Musa a spokesman when He sent him to rescue the Banu Israel from slavery?

38. **EITHER**

What does the word Akeldama mean?



OR

What does the word Kaafir mean?

39. **EITHER**

How did Abraham demonstrate his faith to God?

OR

How did Ibrahim demonstrate his faith to Allah?

40. **EITHER**

What name is given to a group of words used to talk to God?

OR

What name is given to a group of words used to talk to Allah?

SECTION B: 60 MARKS

Questions **41** to **55** carry four marks each.

41. (a) What is referred to the scientific study of human population?

(b) An area of a population density of 4,500 people per square kilometer on a land area of 200Km². Find the total number of the area.

(c) Name the country in the East African Community member states with the highest population density.

(d) Give any one cause of population density in the country named in 41 (c) above.

42. (a) Write EAVRI in full.

(b) Name the town where the headquarters of EAVRI are located.

(c) Write down the major roles of the following organs in the East African Community.

- (i) The Summit _____
- (ii) The Council of Ministers _____

43. (a) Who exiled Omukama Kasagama of Tooro?

(b) Where was Omukama Kasagama exiled?

(c) Give any two reasons why Tooro broke away from Bunyoro Kingdom.

44. (a) Define the following terms.

(i) wastes _____

(ii) sewage _____

(b) Write NWSC in full.

(c) Give any one duty of NWSC in Uganda.

45. What is the difference between revolution and rotation of the earth?

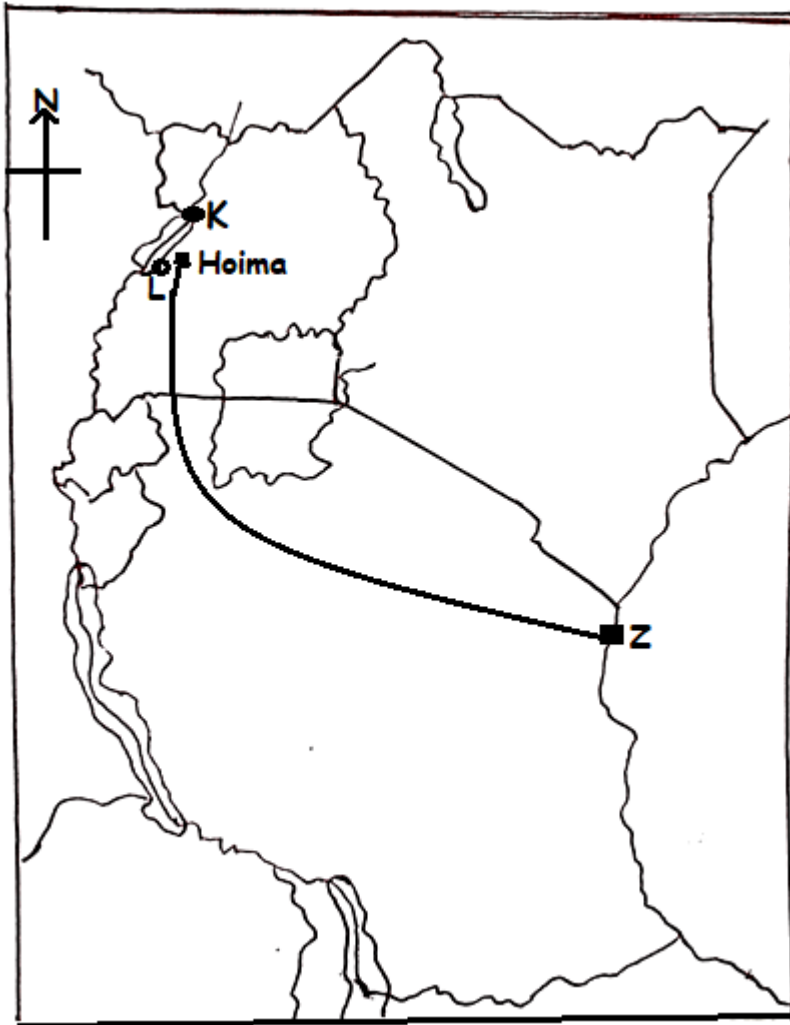
(b) How long does the earth take for a complete;

(i) revolution _____

(ii) rotation _____

(c) Give one effect of the revolution of the earth.

46. Study the sketch map of East Africa below carefully and use it answer the questions about it.



(a) Name the oilfields mark K and L

K _____

L _____

(b) What name is given to the route marked y to Z.

(c) Name the town mark Z

47. (a) How is a desk useful in a classroom?

(b) Apart from a desk, name any other two things found in a classroom.

(c) Give any one way a school benefits a teacher.

48. (a) What type of farming is widely practiced in Uganda.

(b) Give the major reason why rice is mainly grown in swamps.

(c) Non-traditional cash crops are crops originally grown for food but today can be sold. Give any two examples of such crops.

49. (a) Name the rebellion against the German rule in Tanganyika.

(b) Name the prominent leader of the above rebellion in 49 (a) above.

(c) Write down two causes of the above rebellion in 1888.

(i) _____

(ii) _____

50. (a) Give one way a president .

(b) In which year Uganda celebrate her Silver Jubilee?

(c) Write down any two social contributions of President Yoweri Kaguta Museveni to Ugandans.

For each of the questions **51** to **55**, answer **EITHER** the Christian **OR** Islamic question but **NOT** both. **No marks** will be awarded to a candidate who will attempt both alternatives in **a particular number**.

51. **EITHER**

(a) **"Eli, Eli, Lema Sabachthani."** Matthew: 27:46.
What was the meaning of those words?

(b) Who said those words?

(c) With a lot of sorrow, why did that person say those words?

- (d) Kindly, give any one miracle that happened after His death on that very day.

OR

- (a) What does the word "**BISMILLAH**" mean?

- (b) Name any two important Muslim personalities who contributed to development of Islam in Uganda.

- (c) Give any one cause of wars among Muslims in Uganda today.

52. EITHER

- (a) What is freedom?

- (b) Mention any two types of authority?

- (c) State any one way people misuse freedom today.

OR

- (a) What is Hadith?

- (b) Give two reasons Muslims perform Hajj and Umra.

- (c) Which pillar of Islam is fulfilled by performing Hajj?

53. EITHER

- (a) Why did the Jesus Christ accept to be baptized?

(b) Name the earthly messenger of God who preached about repentance in preparation for the coming of Jesus Christ.

(c) Give two reasons why Jesus Christ was rejected in Nazareth.

OR

(a) Mention any two things that can be used by Muslims to pay Zakat.

(b) Write the two types of Zakat.

54. EITHER

(a) Who is believed to be the source of happiness for Christians?

(b) Give any two sources happiness to a P.7 candidate.

(c) State any one cause of suffering among Christians.

OR

(a) Who is believed to be the source of happiness for Muslims?

(b) Give any two sources happiness to a P.7 candidate.

(c) State any one cause of suffering among Muslims.

55. EITHER

(a) What is marriage?

(b) Give any two reason why adults should marry.

(c) How is a husband related to his wife in their family?

OR

(a) What is marriage?

(b) Give any two reason why adults should marry.

(c) How is Mr. Digida related to his wife in their family?

END